





WBCS 2022



REASONING

MISCELLANEOUS

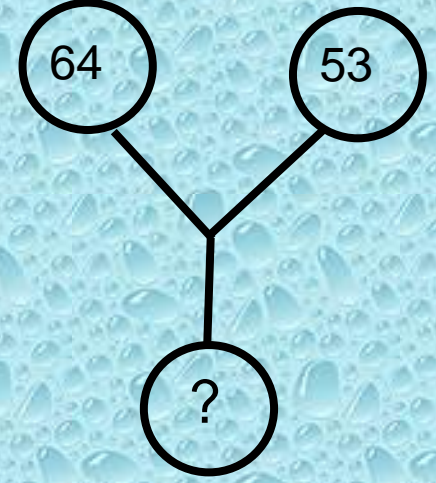
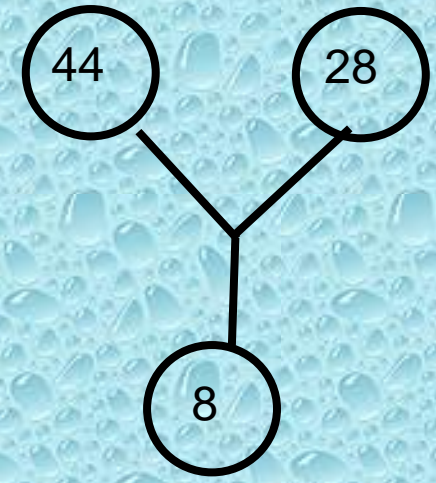
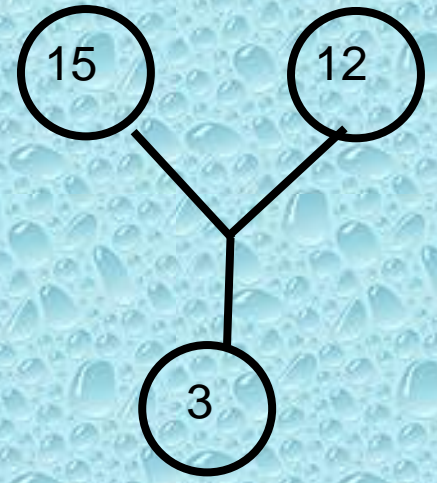




**Ammi jhukbo na ama
ke chakri petei hi hobe
..... Ebar khelaa hobe**



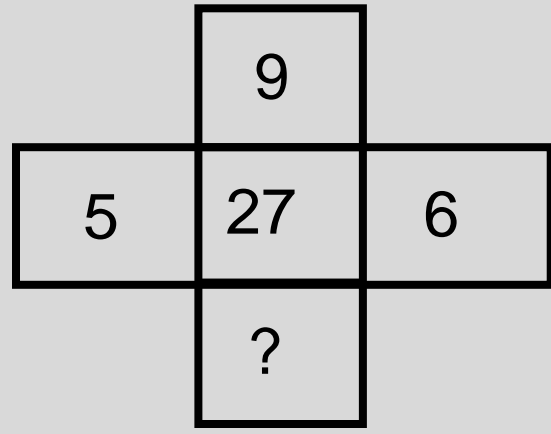
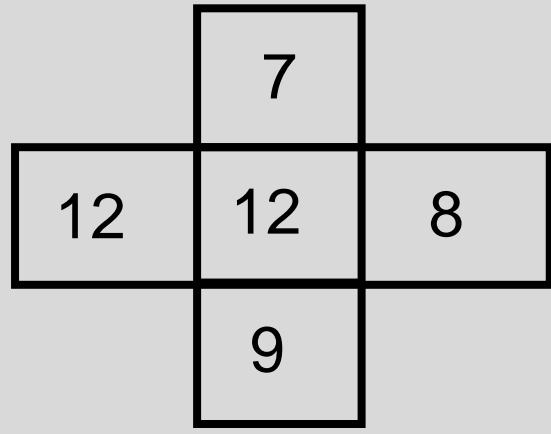
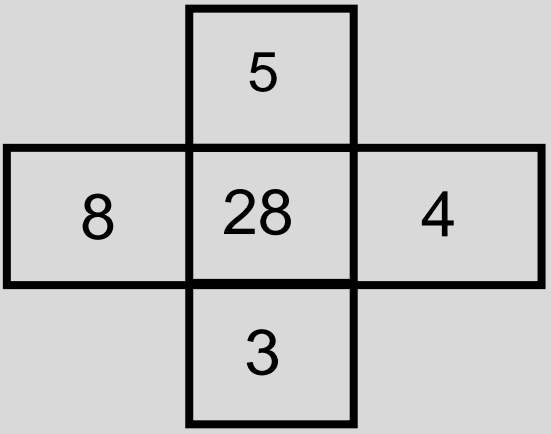
Q(8) Which number will replace the question mark ?



- (A) 30
- (C) 70


- (B) 13
- (D) 118

Q(9) Which number will replace the question mark ?



- (A) 9
- (C) 7

- (B) 4
- (D) 3



Q.8. A school has 2100 students. For every 20 students there is one class monitor. The number of monitors in the school is

(A) 100

(B) 75

(C) 80

(D) 85




Q.9. Five children take part in a tournament. Each one has to play every other once. How many matches must they play?


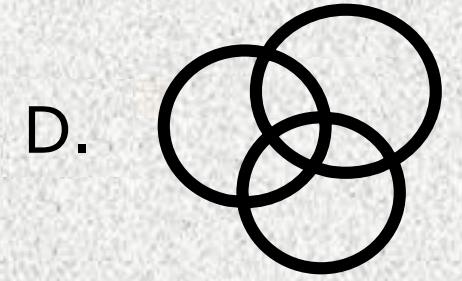



- (A) 8**
- (B) 10**
- (C) 24**
- (D) 30**



Q(8) Which of the following diagrams indicate the best relation between Teacher, Parents and Guardians ?



Q(11) Which of the following diagrams indicates the best relation between Dogs, Pet animals and Animals ?




Q.(36): Find the odd one out from the given alternatives.

(A) Kabaddi = 7

(B) Volleyball = 5

(C) Baseball = 9

(D) Basketball = 5





Q(24) In each of the following question, four numbers are given, out of which three are alike in some manner while the fourth one is different. Choose the odd one.

(A) 9

(B) 13


(C) 17

(D) 19



Q(14) DFHJ : LNPR :: TVXZ : ?

- (A) DBFH
- (B) DBHF
- (C) BDFH
- (D) FDBH



Q(19) MO : 13 11 :: HJ : ?

- (A) 19 17
- (B) 18 16
- (C) 8 10
- (D) 16 18



Q(26) DOG : Z :: CAT : ?

(A) V

(B) Y

(C) X


(D) W



Q.(33). Which one set of letters when sequentially placed at the gaps in the given letter series shall complete it.

l m _ o _ n m _ l _ n _ _ n m l

- (1) molnon**
- (2) nolmoo**
- (3) nomloo**
- (4) noolmm**





W.B.C.S - YouTube schedule for 5-days

TIMING	DAYS				
	MONDAY	TUESDAY	WEDNESDAY	THURSDAY	FRIDAY
11:30	ECO	CA	ECO	POL	BEN
12:00	REAS	SCI	POL	SCI	REAS
12:30	ENG	MATHS	ENG	MATHS	ENG
13:00	GEO	HIS	GEO	HIS	HIS

UPCOMING BATCH

West Bengal Audit and Accounts Services

- SPECIAL EMPHASIS ON ACCONTANCY
- MATHS BASED ON STATICS
- MANY MORE.....

WBCS BATCH 2022



WBCS OFFLINE BATCH STARTS FORM

26TH FEBRUARY

TIMING - 1:30-5:30PM

BOOK YOUR SEAT NOW

9230141497/8017652045/6386903177/6291322109

