



Q.(5). U, O, I, ?, A

- A. E
- C. S

- B. C
- D. G


Handwritten notes for Q.5:
A sequence of letters: U, O, I, ?, A.
A circle around 'U' with '21' written above it.
A circle around 'O' with '6' written above it.
A circle around 'I' with '6' written above it.
A circle around '?' with '3' written above it.
A circle around 'A' with '6' written above it.
A circle around 'E' with '6' written above it.
A circle around 'C' with '6' written above it.
A circle around 'G' with '6' written above it.
A circle around 'Good' with '6' written above it.

Q.(6). A, Z, X, B, V, T, C, R, ?, ?

- A. P, D
- C. Q, E

- B. E, O
- D. O, Q


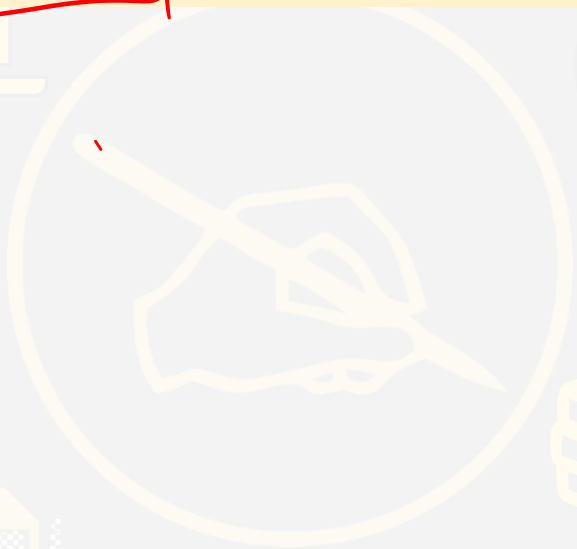
Handwritten notes for Q.6:
A sequence of letters: A, Z, X, B, V, T, C, R, ?, ?.
A circle around 'A' with '1' written above it.
A circle around 'Z' with '2' written above it.
A circle around 'X' with '3' written above it.
A circle around 'B' with '4' written above it.
A circle around 'V' with '5' written above it.
A circle around 'T' with '6' written above it.
A circle around 'C' with '7' written above it.
A circle around 'R' with '8' written above it.
A circle around 'D' with '9' written above it.
A circle around 'Q' with '10' written above it.
A circle around 'Good' with '11' written above it.



Q(2) Calf : Shed :: Fawn : ?

- (A) Prison
- (C) Forest

- (B) Nest
- (D) Den



Q(3) 'Reading' is related to 'knowledge' in the same way as 'Work' is related to:

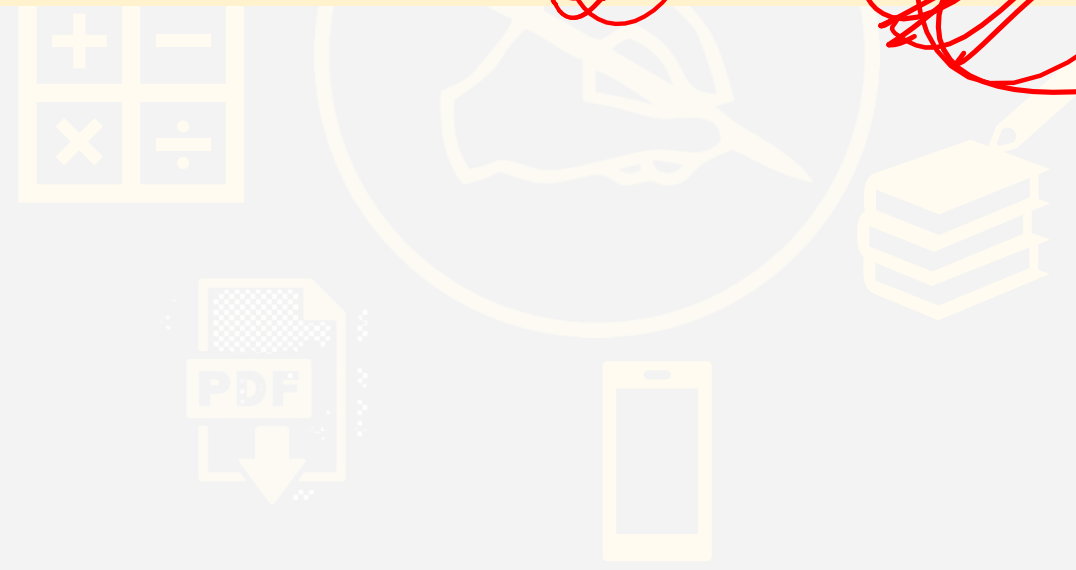
- (A) Money ✓
- (C) Experience

- (B) Employment
- (D) Engagement



Q(4) In each of the following question, four words have been given out of which three are alike in some manner while the fourth one is different. Choose the odd one.

- (A) Tomato
- (B) Brinjal
- (C) Cucumber
- (D) Potato



Q(7) In each of the following question, four pairs of words are given out of which three pairs bear a certain common relationship. Choose the pair, in which the words are differently related.

(A) Petrol : Car

(B) Garbage : Dustbin

(C) Ink : Pen

(D) Lead : Pencil

1. Choose from the alternatives the figure that best completes the pattern given below.

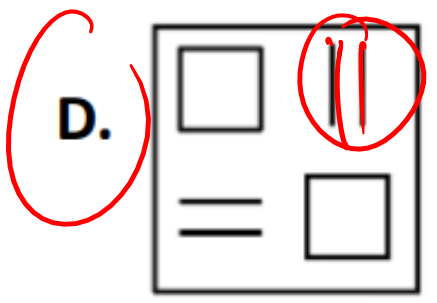
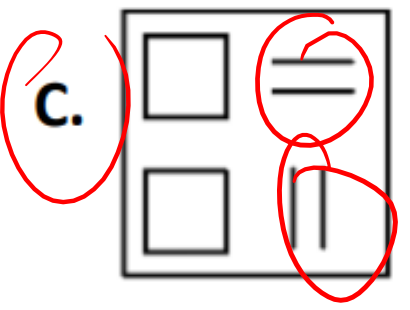
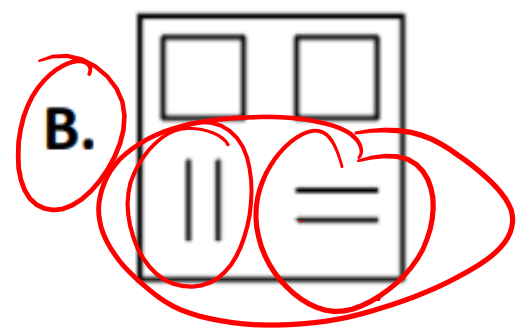

A.

B.

C.

D.

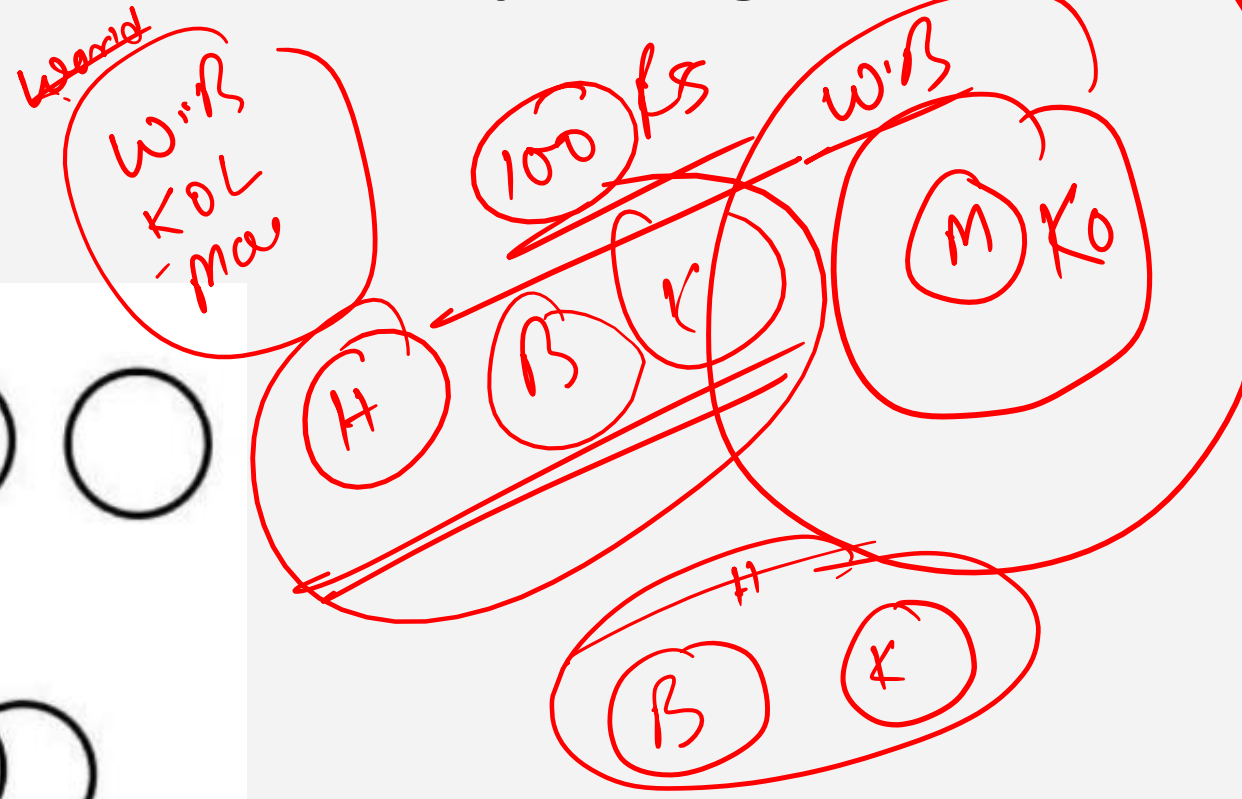

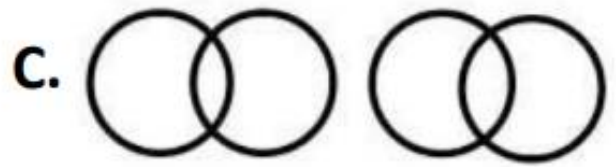
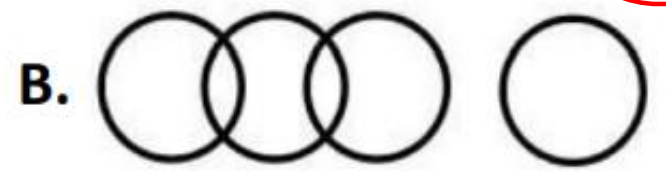

2. Find the ODD one out from the given options.



Ans
C or D

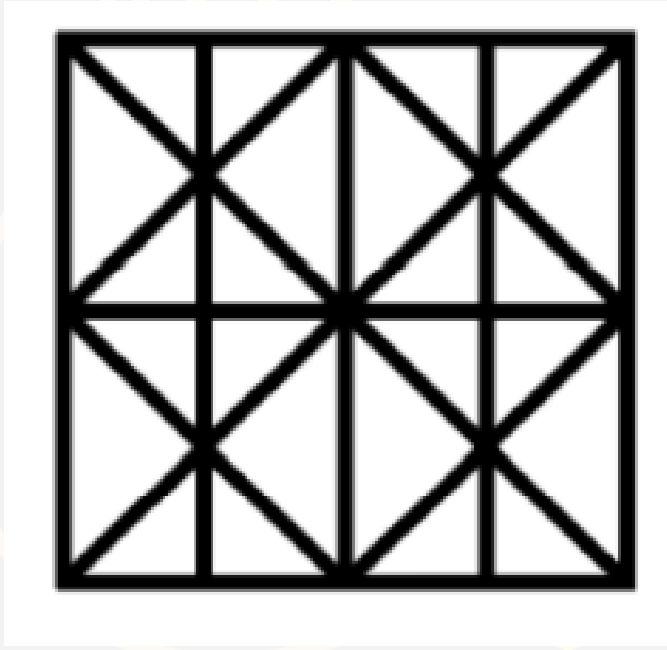
3. Choose the figure that best represents the relationship among the classes given below.

~~Word~~, ~~Sentence~~, Alphabet, ~~Paragraph~~



5. How many straight lines are there in the given figure?

- A. 16
- B. 14
- C. 19
- D. 23



6. Mani is facing east. He looks time in his watch, it shows as 3 O'clock. Which direction do hour and minute hands point respectively?


- A. West and north**
- B. South and east**
- C. East and north**
- D. South and west**

7. Balaji walks 8 m straight and took left turn to cover a distance of 5 m. Again he took left and he is facing north. Which direction is he now from the starting point?

- A. South west**
- B. South east**
- C. North west**
- D. North east**

8. In a certain code, 'NATION' is coded as 'OCWMTT'. How would 'COUNTRY' be written in that code?

- A. DCXRYCF
- B. DPXRYXF
- C. DQXRYXF
- D. DCXRYXF



9. If 'MISTAKE' is coded as 9765412 and 'RANKED' is coded as 348120, how is 'DISTANT' coded?

- A. 0756485
- B. 0765485
- C. 0765458
- D. 0765845

10. A clock started at noon. By 10 minutes past 7, the hour-hand will move through

- A. 200°
- B. 215°
- C. 60°
- D. 210°



7:10

30°

$$7 \times 30$$

$$210 + 5$$

215



WBCS BATCH 2022



SUMANA MAHENDRAS
(GS)



ANURAG MAHENDRAS
(GA/GS)



BORNON MAHENDRAS
(GA/GS)



SHIRSITA MAHENDRAS
(GA/GS)



VISHAL MAHENDRAS
(MATHS)



AYAN MAHENDRAS
(GS)



SRAYA MAHENDRAS
(ENGLISH)



NITESH MAHENDRAS
(REASONING)



MONDAY TO FRIDAY - 11:30 AM TO 1:30 PM

W.B.C.S - YouTube schedule for 5-days

TIMING	DAYS				
	MONDAY	TUESDAY	WEDNESDAY	THURSDAY	FRIDAY
11:30	ECO	CA	ECO	POL	BEN
12:00	REAS	SCI	POL	SCI	REAS
12:30	ENG	MATHS	ENG	MATHS	ENG
13:00	GEO	HIS	GEO	HIS	HIS

UPCOMING BATCH

West Bengal Audit and Accounts Services

- SPECIAL EMPHASIS ON ACCONTANCY
- MATHS BASED ON STATICS
- MANY MORE.....



WBCS BATCH 2022



WBCS OFFLINE BATCH STARTS FORM

26TH FEBRUARY

TIMING - 1:30-5:30PM

BOOK YOUR SEAT NOW

9230141497/8017652045/6386903177/6291322109

