



SSC CHSL 2022-23



REASONING

FIGURE COUNTING

SQUARES & RECTANGLES COUNTING

BY MANDEEP MAHENDRAS

📡 **LIVE** | 05:30 PM



SSC CHSL (10+2) 2022



@Ravi.1 21 hours ago 4 subscribers

32 🌱🌱

👍 1 🗨️ Reply

▼ 🚫 • 1 reply



@surbhisinha7315 20 hours ago 4 subscribers

32 👉👉

👍 🗨️ Reply

▼ 🚫 • 1 reply



@indukumari8754 21 hours ago

D options

👍 🗨️ Reply



@rajibsaha1428 20 hours ago 13 subscribers

HW

32 😊

👍 🗨️ Reply

▼ 🚫 • 1 reply



@farhaankhan4680 16 hours ago

28



@farhaankhan4680 16 hours ago

28

👍 🗨️ Reply



@girrajsinghjadon3602 21 hours ago

32

👍 🗨️ Reply

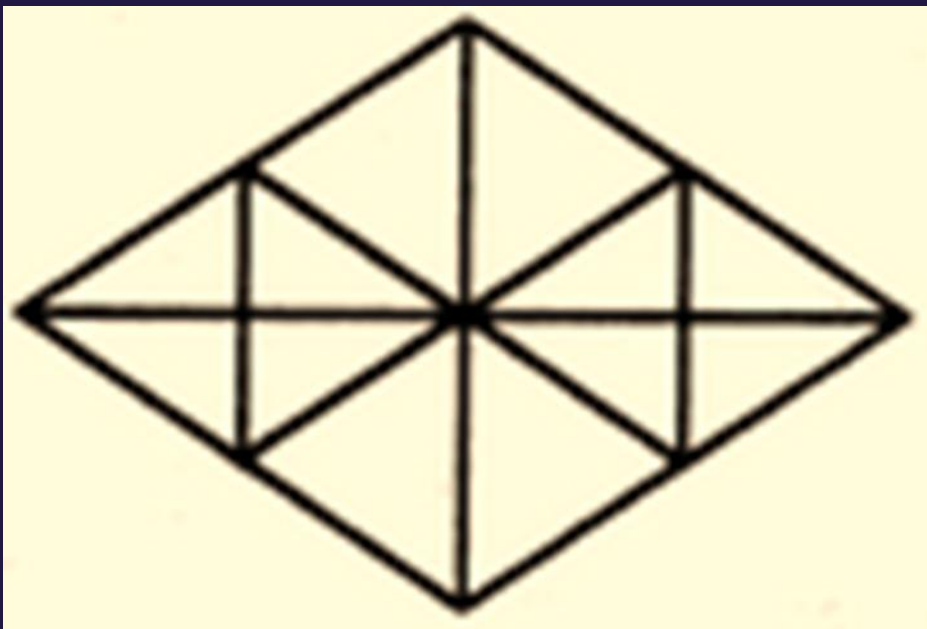
▼ 🚫 • 1 reply



SSC CHSL (10+2) 2022



- Find the triangle
- त्रिभुज ज्ञात कीजिए



A. 22

B. 16

 C. 28

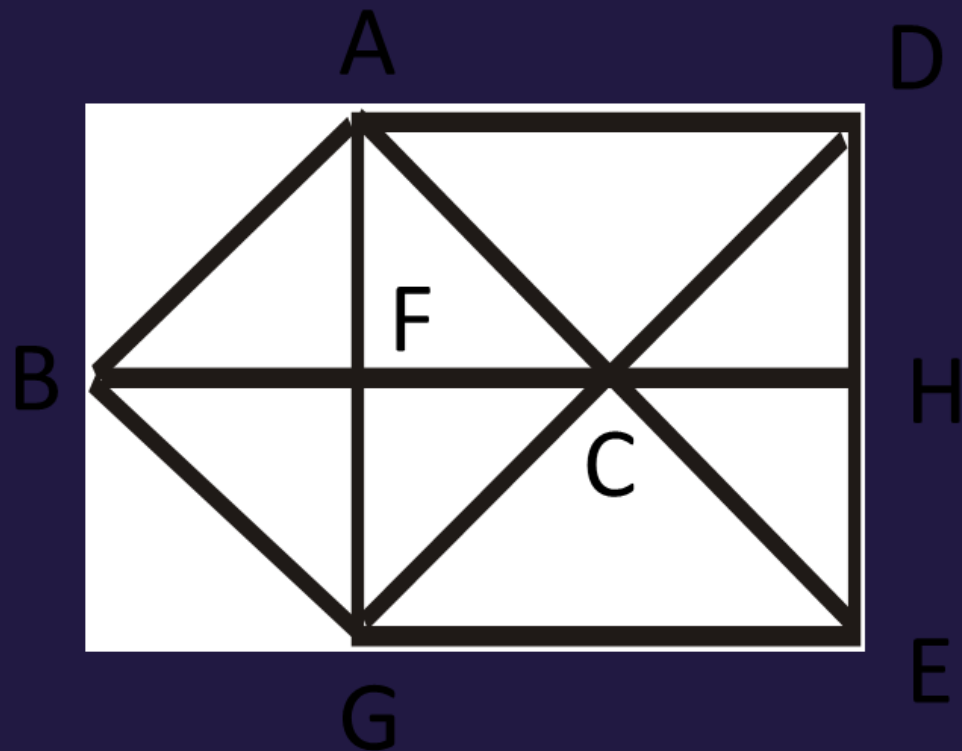
D. 32



SSC CHSL (10+2) 2022



- Find the triangle
- त्रिभुज ज्ञात कीजिए



A. 20

B. 15

 C. 17

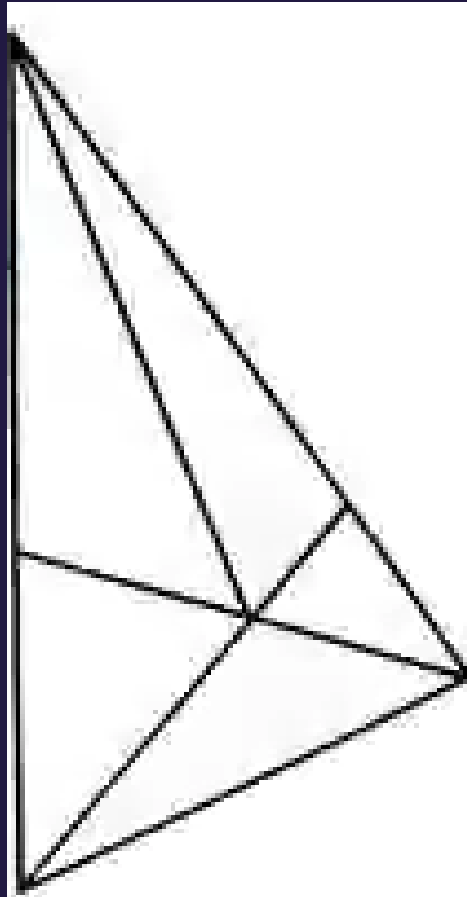
D. 22



SSC CHSL (10+2) 2022



- Find the triangle
- त्रिभुज ज्ञात कीजिए



A. 6

B. 10

C. 11


 D. 12



SSC CHSL (10+2) 2022



- Find the square.
- वर्ग का पता लगाएं।



A. 28

B. 29

C. 30

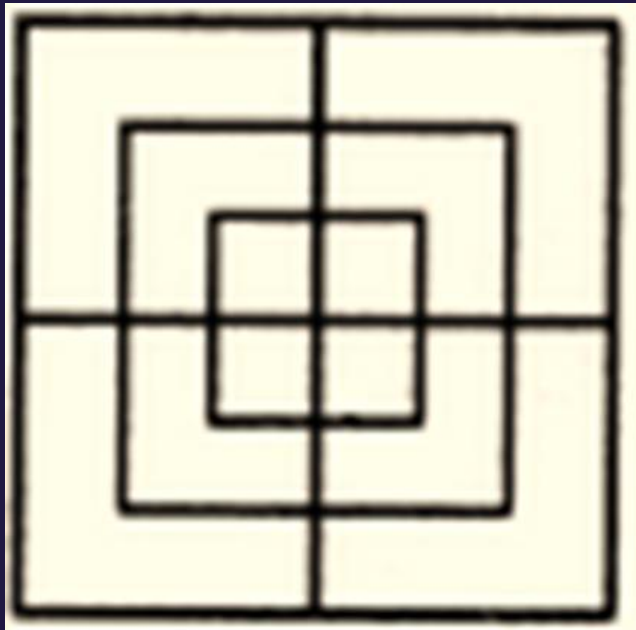
D. 32



SSC CHSL (10+2) 2022



- Find the square.
- वर्ग का पता लगाएं।



A. 8

B. 12

A thick red arrow pointing from the left towards the text 'C. 15'.

C. 15


D. 18



SSC CHSL (10+2) 2022



- Find the square.
- वर्ग का पता लगाएं।



A. 11

B. 21

C. 24


D. 26



SSC CHSL (10+2) 2022



- Find the square.
- वर्ग का पता लगाएं।



A. 18

B. 25

C. 19


 D. 27



SSC CHSL (10+2) 2022



- Find the square.
- वर्ग का पता लगाएं।



A. 102

B. 104

C. 106

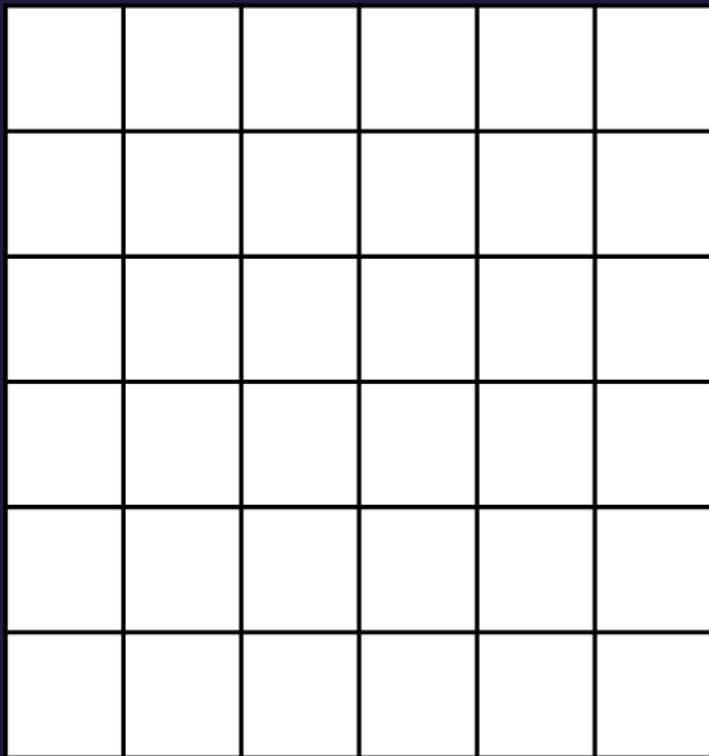
 D. 112




SSC CHSL (10+2) 2022



- Find the square.
- वर्ग का पता लगाएं।



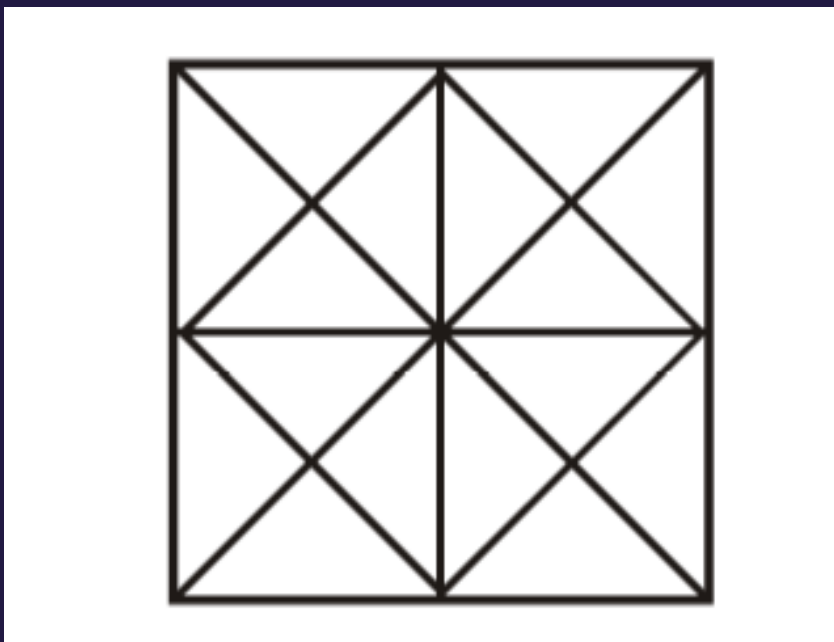
-  A. 91
- B. 92
- C. 89
- D. 98




SSC CHSL (10+2) 2022



- Find the square.
- वर्ग का पता लगाएं।



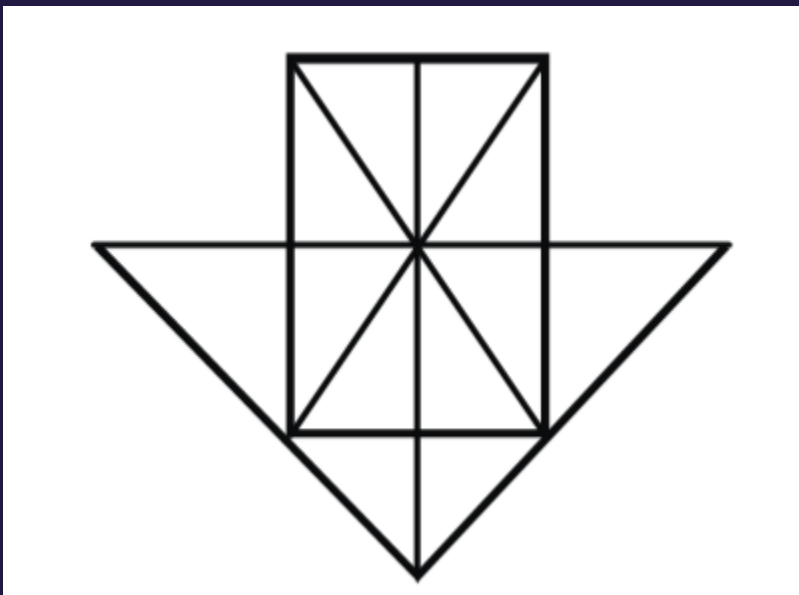
- A. 8
- B. 9
-  C. 10
- D. 11




SSC CHSL (10+2) 2022



- Find the rectangle
- आयत का पता लगाएं



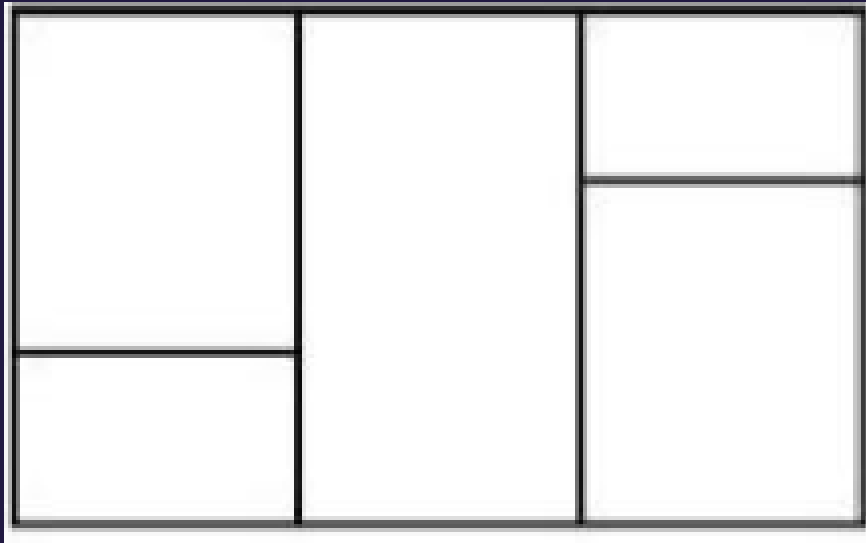
- A. 8
-  B. 9
- C. 10
- D. 11



SSC CHSL (10+2) 2022



- Find the rectangle
- आयत का पता लगाएं



A. 8

B. 9

C. 10

D. 11

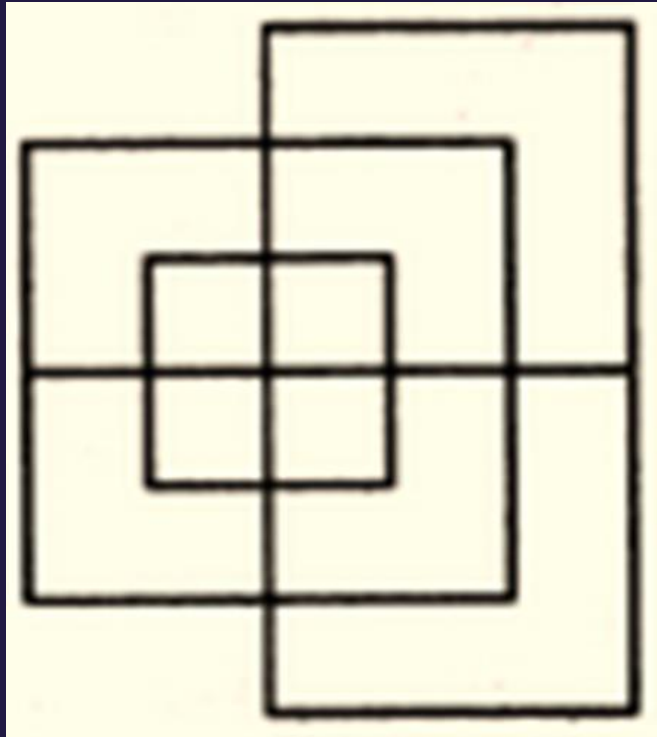





SSC CHSL (10+2) 2022



- Find minimum number of straight lines in figure?
- आकृति में सीधी रेखाओं की न्यूनतम संख्या ज्ञात कीजिए?



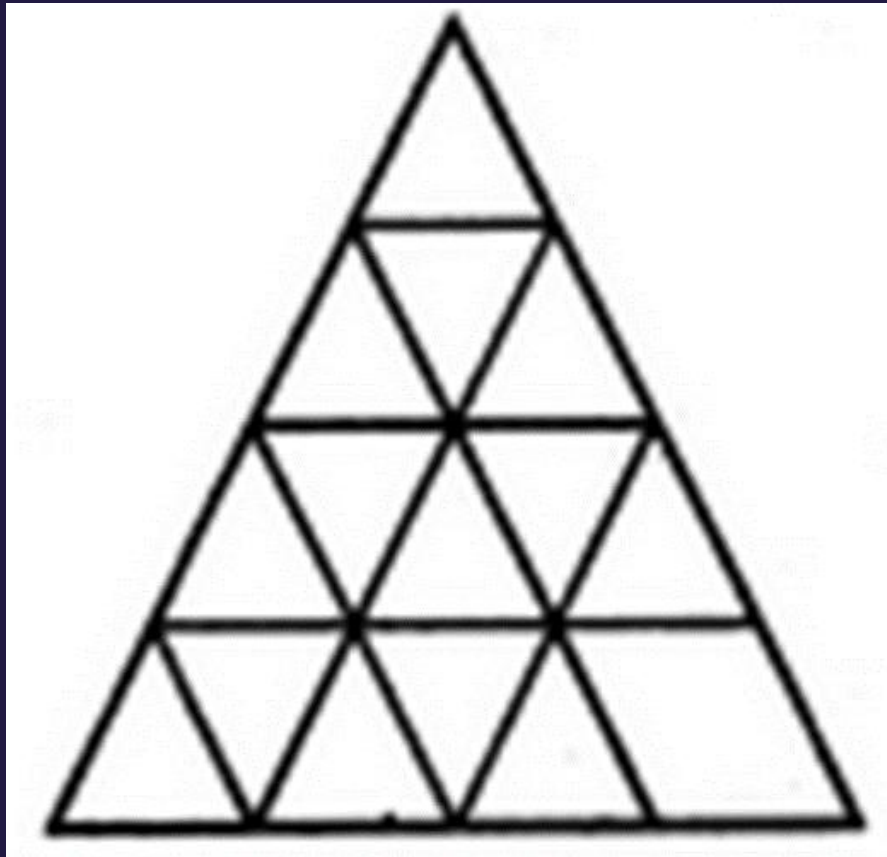
-  A. 13
- B. 17
- C. 15
- D. 19



SSC CHSL (10+2) 2022



- Find minimum number of straight lines in figure?
- आकृति में सीधी रेखाओं की न्यूनतम संख्या ज्ञात कीजिए?



A. 9

B. 15

 C. 11

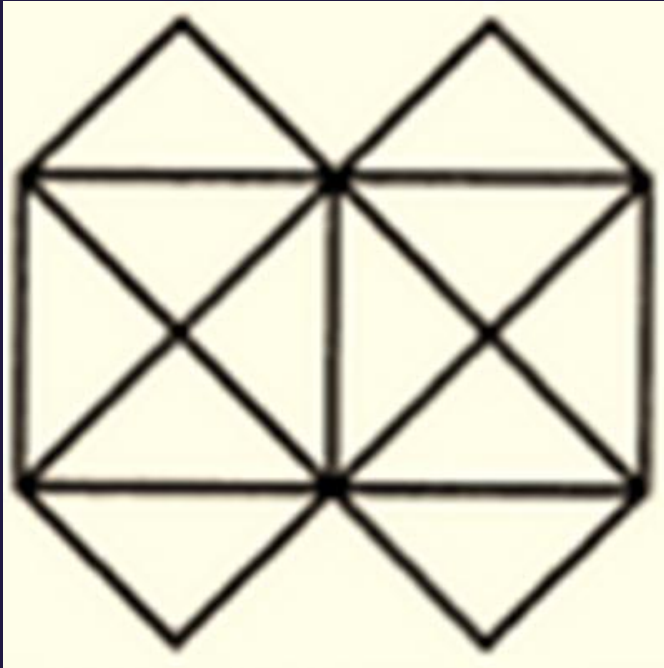
D. 16



SSC CHSL (10+2) 2022



- Find minimum number of straight lines in figure?
- आकृति में सीधी रेखाओं की न्यूनतम संख्या ज्ञात कीजिए?



A. 11

B. 15

 C. 13

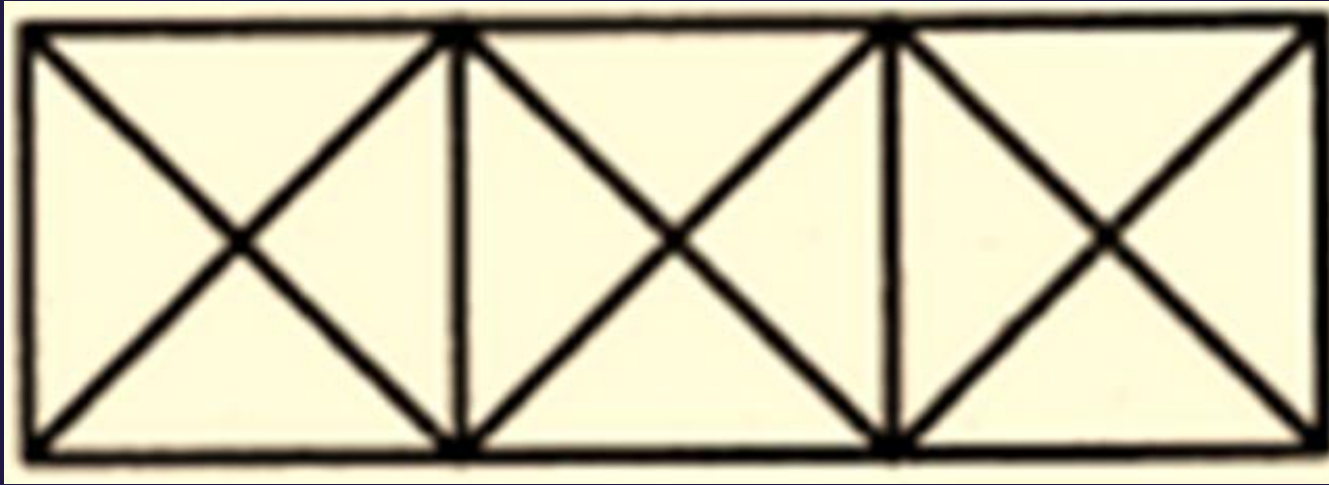
D. 21



SSC CHSL (10+2) 2022



- Count the number of triangles and squares in the given figure.
- दी गई आकृति में त्रिभुजों और वर्गों की संख्या गिनें।



- A. 28 triangles, 3 squares
- B. 24 triangles, 5 squares
- C. 28 triangles, 5 squares
- D. 24 triangles, 3 squares

