



SSC CHSL 2022-23



REASONING

FIGURE COUNTING

TRI Δ NGLE को गिनने का

रामबाण तरीका



BY MANDEEP MAHENDRAS



(((•))) **LIVE** | 05:30 PM



SSC CHSL (10+2) 2022



@Ravi.1 17 hours ago 4 subscribers

D 700 700

1 Like Reply

1 reply



@krishnakantmallick397 17 hours ago

H.w-D

Like Reply

1 reply



@surbhisinha7315 15 hours ago 4 subscribers

Option ddddddd BUN 👍👍👍👍

Like Reply

1 reply



@rajibsaha1428 16 hours ago 13 subscribers

HW) OPTION DDD (BUN)

Like Reply

1 reply



@preet3908 17 hours ago



@indukumari8754 17 hours ago

D options sir

Like Reply

1 reply



@zikrayasmeen4058 13 hours ago

Option D

Like Reply

1 reply



@suruchijha393 17 hours ago

Hw option B

Like Reply



@amarsahani5058 17 hours ago 1 subscribers

D

Like Reply

1 reply



@subhamoyghosh8498 4 hours ago

Hw ans BUN

Like Reply



@pragyansamal9241 17 hours ago

D

Like Reply

1 reply



SSC CHSL (10+2) 2022



- A series is given with one term missing. Select the correct alternative from the given ones that will complete the series.
- एक अनुक्रम दिया गया है जिसमें एक पद लुप्त है। दिए गए विकल्पों में से वह सही विकल्प चुनिए जो श्रृंखला को पूरा करे।
- HAT, MFY, RKD, WPI, ?



A. YRK

B. AWO

C. AVM


→ D. BUN



SSC CHSL (10+2) 2022



- Find the triangle
- त्रिभुज ज्ञात कीजिए



A. 23

B. 28

C. 24


D. None of these



SSC CHSL (10+2) 2022



- Find the triangle
- त्रिभुज ज्ञात कीजिए



A. 37

B. 38

C. 39


D. None of these



SSC CHSL (10+2) 2022



- Find the triangle
- त्रिभुज ज्ञात कीजिए



A. 39

B. 40

C. 42

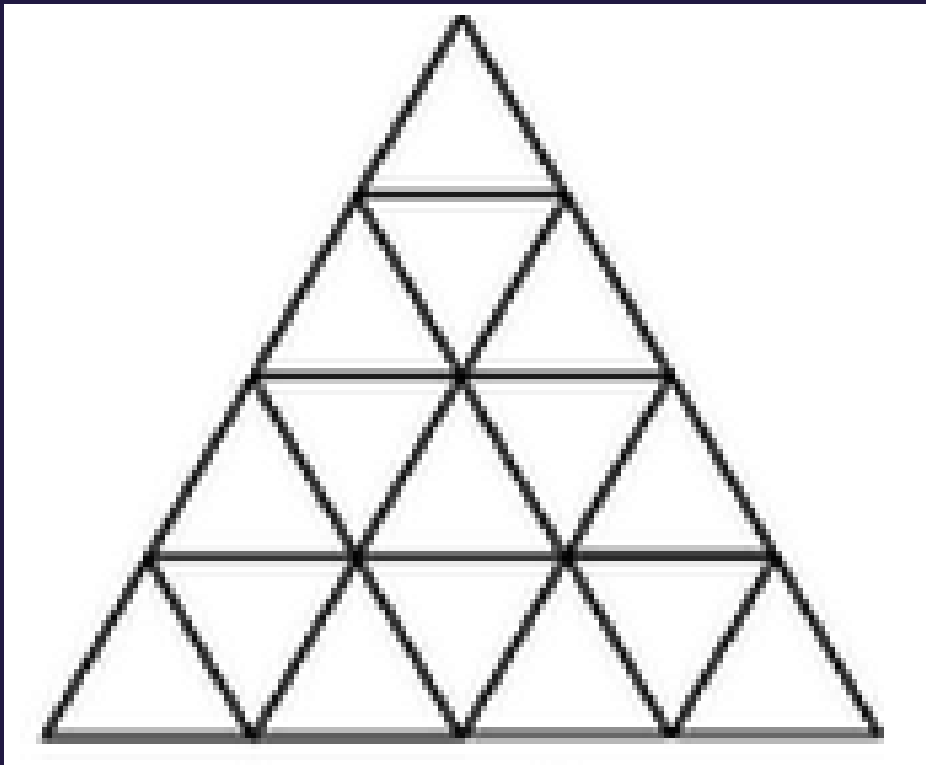
 D. None of these



SSC CHSL (10+2) 2022



- Find the triangle
- त्रिभुज ज्ञात कीजिए



A. 26

B. 28

→ C. 27

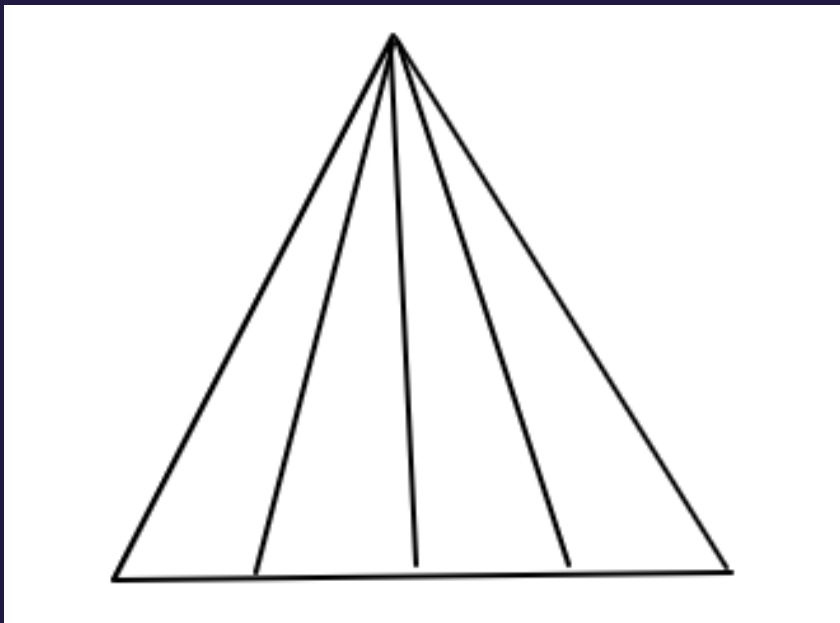
D. 25




SSC CHSL (10+2) 2022



- Find the triangle
- त्रिभुज ज्ञात कीजिए



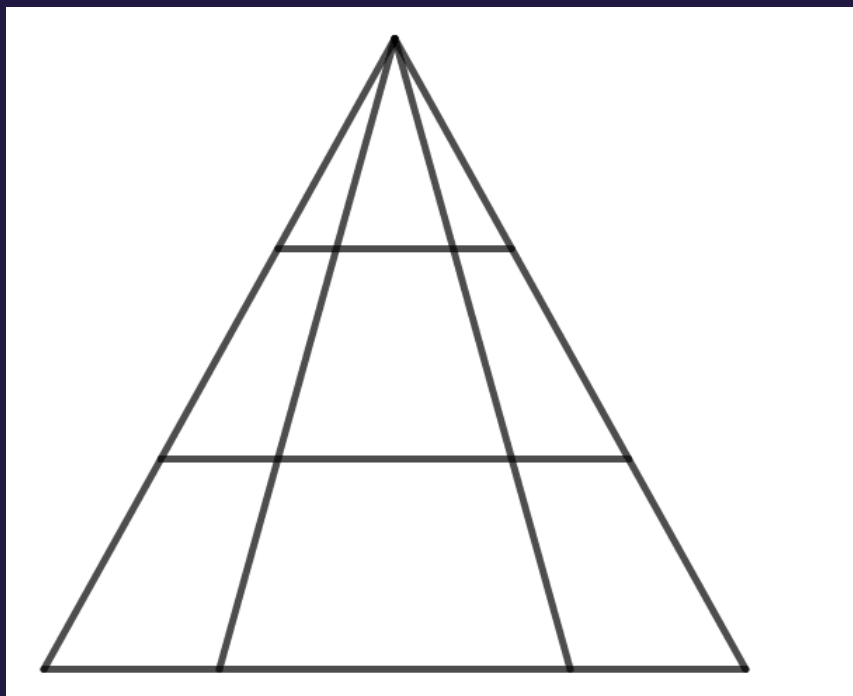
-  A. 10
- B. 12
- C. 14
- D. 16



SSC CHSL (10+2) 2022



- Find the triangle
- त्रिभुज ज्ञात कीजिए



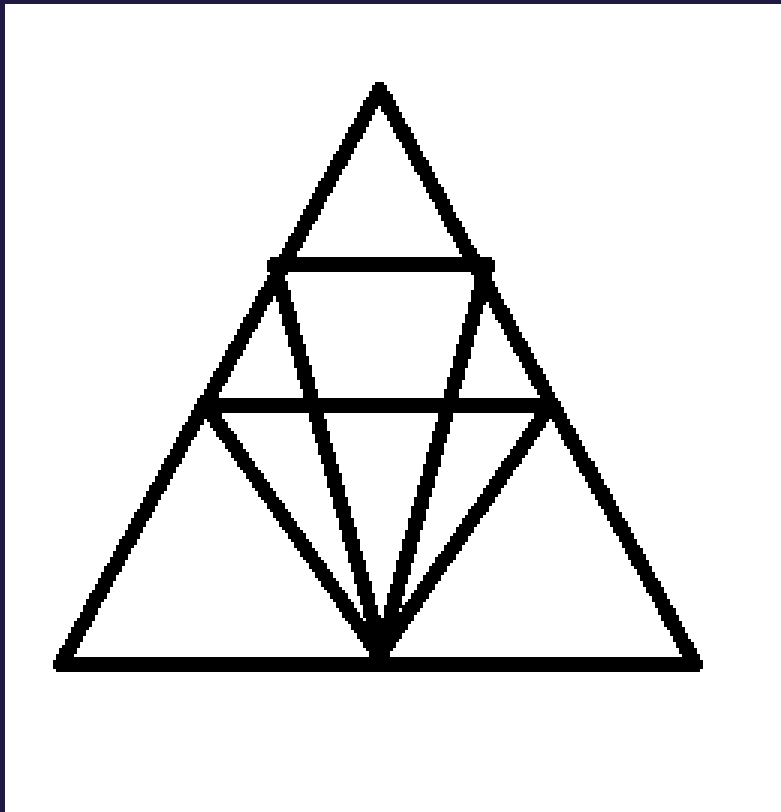
- A. 18
- B. 20
- C. 19
- D. 17



SSC CHSL (10+2) 2022



- Find the triangle
- त्रिभुज ज्ञात कीजिए



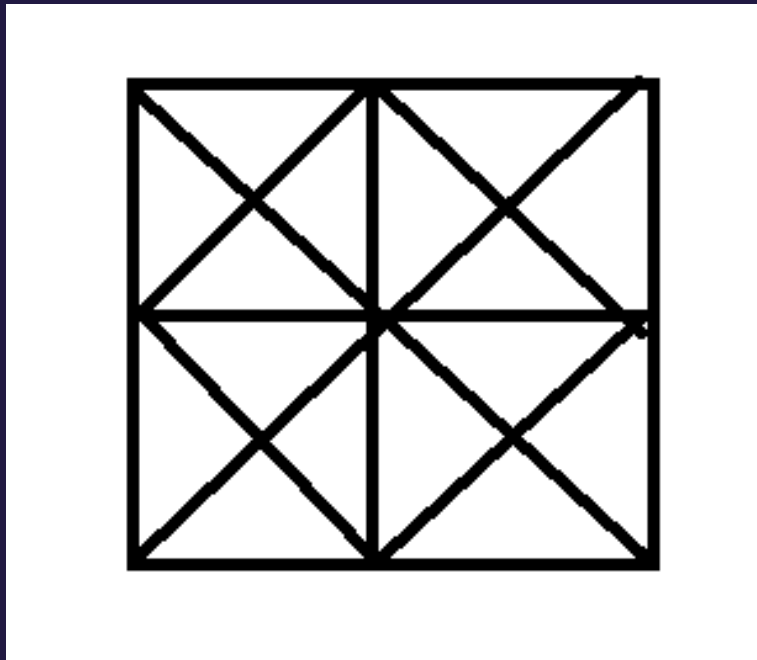
- A. 12
- B. 18
- C. 22
- D. 26




SSC CHSL (10+2) 2022



- Find the triangle
- त्रिभुज ज्ञात कीजिए



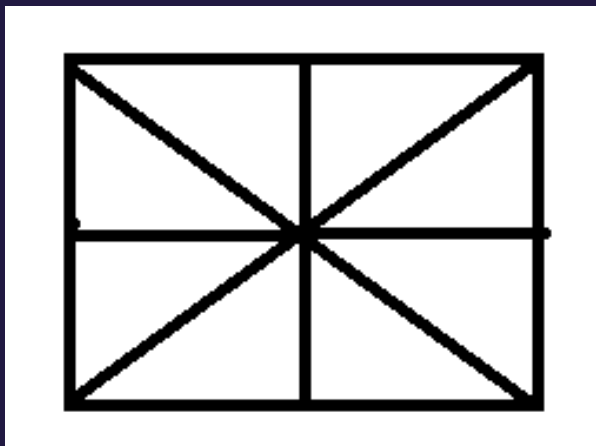
-  A. 44
B. 46
C. 43
D. 42



SSC CHSL (10+2) 2022



- Find the triangle
- त्रिभुज ज्ञात कीजिए



A. 17

→ B. 16

C. 18


D. 20




SSC CHSL (10+2) 2022



- Find the triangle
- त्रिभुज ज्ञात कीजिए




-  A. 11
B. 14
C. 13
D. 12



SSC CHSL (10+2) 2022



- Find the triangle
- त्रिभुज ज्ञात कीजिए



A. 11

B. 14

C. 16

A thick red arrow pointing from the left towards the text 'D. 15'.


D. 15



SSC CHSL (10+2) 2022



- Find the triangle
- त्रिभुज ज्ञात कीजिए




- A. 8
- B. 9
- C. 10
- D. 12



SSC CHSL (10+2) 2022



- Find the triangle
- त्रिभुज ज्ञात कीजिए



A. 25

B. 27

C. 28

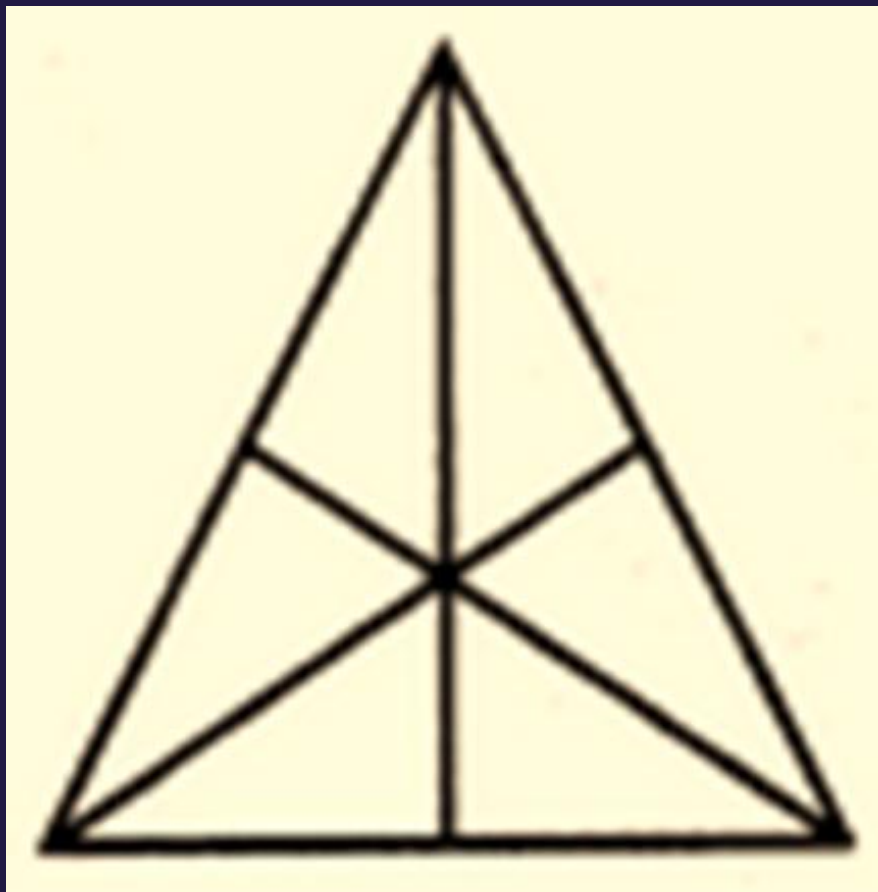
D. 26



SSC CHSL (10+2) 2022



- Find the triangle
- त्रिभुज ज्ञात कीजिए



A. 15

B. 11

C. 9

A red arrow pointing to the right, highlighting the correct answer.

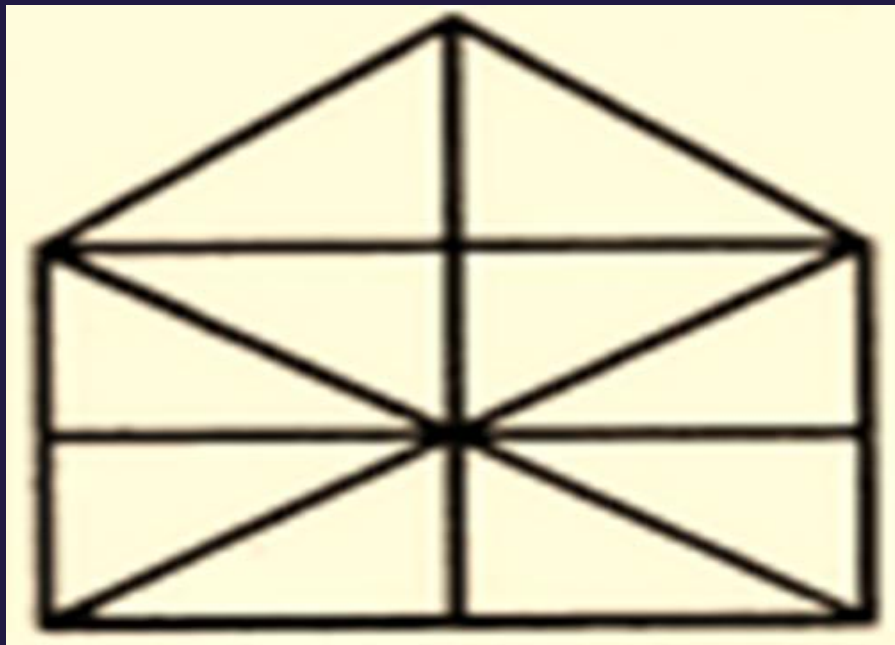
D. 16




SSC CHSL (10+2) 2022



- Find the triangle
- त्रिभुज ज्ञात कीजिए



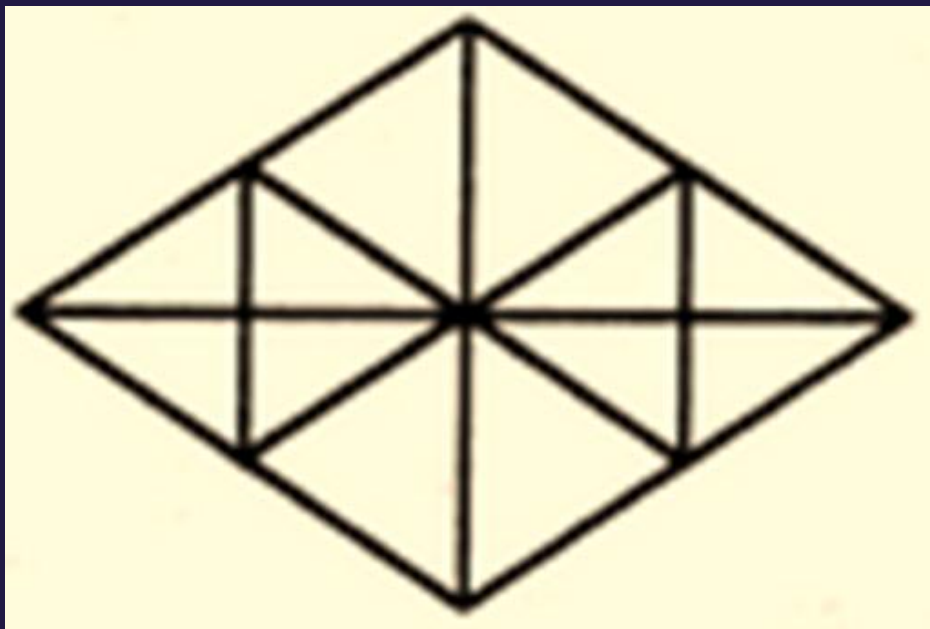
- A. 10
-  B. 21
- C. 19
- D. 23



SSC CHSL (10+2) 2022



- Find the triangle
- त्रिभुज ज्ञात कीजिए



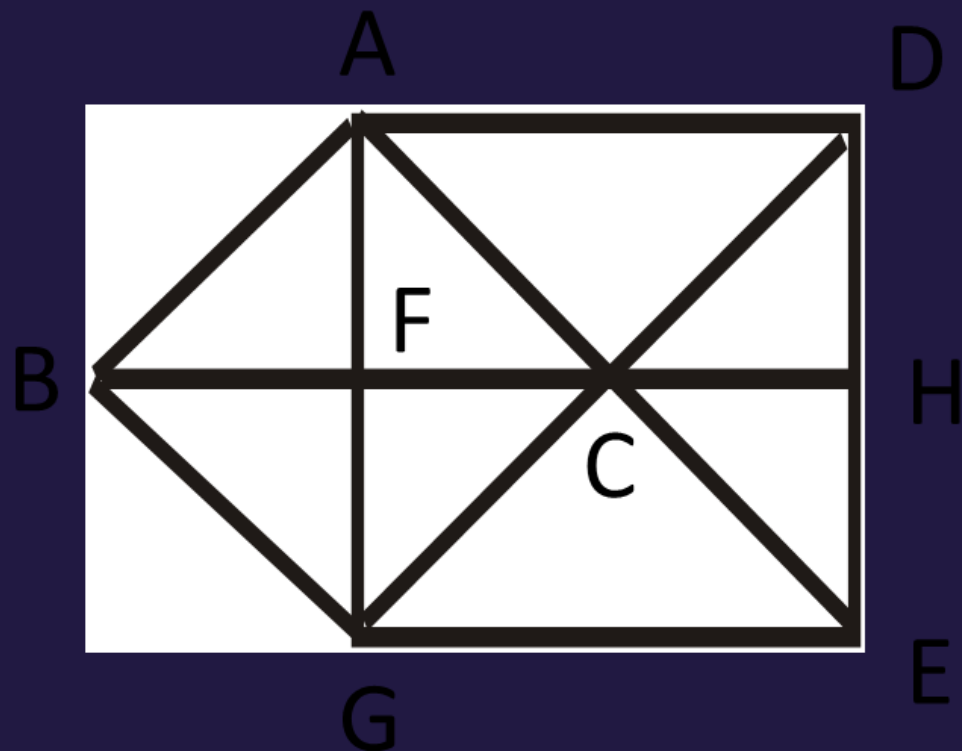
- A. 22
- B. 16
- C. 28
- D. 32



SSC CHSL (10+2) 2022



- Find the triangle
- त्रिभुज ज्ञात कीजिए



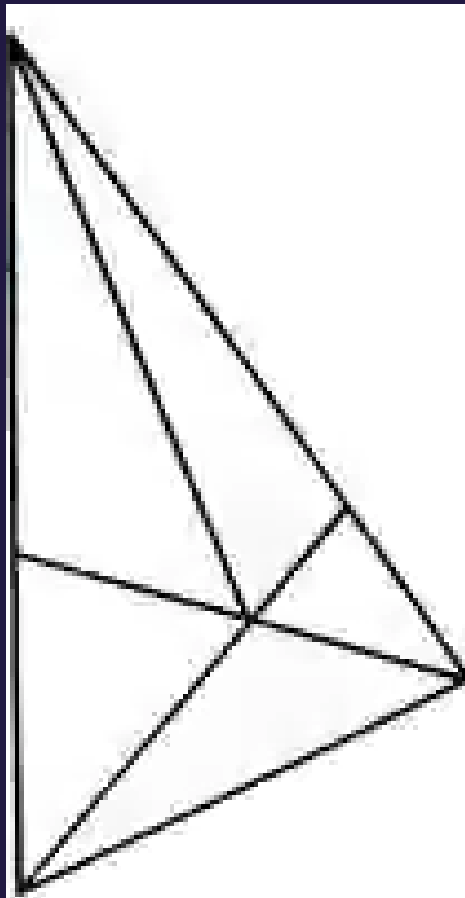
- A. 20
- B. 15
- C. 17**
- D. 22



SSC CHSL (10+2) 2022



- Find the triangle
- त्रिभुज ज्ञात कीजिए



- A. 6
- B. 10
- C. 11
- D. 12

