



MISSION SSC GD CONSTABLE 2023



Reasoning Day-2

FOUNDATION BATCH

Missing Number

इस बार वहीं हमारी है

LIVE 03:00 PM 



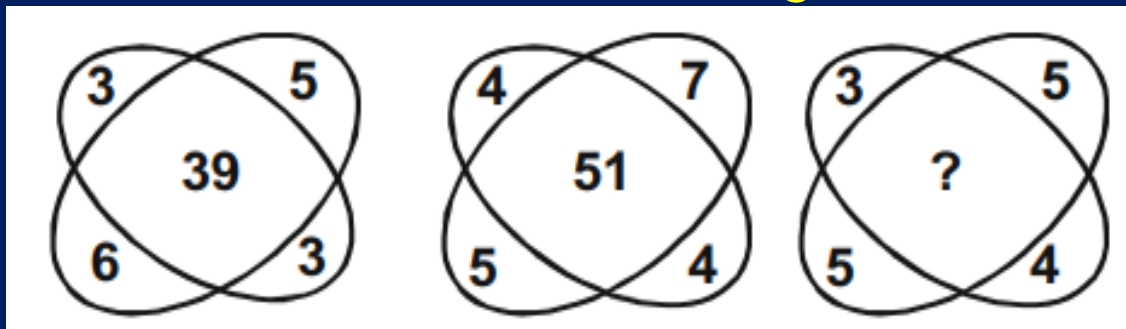


MISSION SSC GD

Q.1 Find the missing number in the following question

CONSTABLE 2023

निम्नलिखित प्रश्न में लुप्त संख्या ज्ञात कीजिए



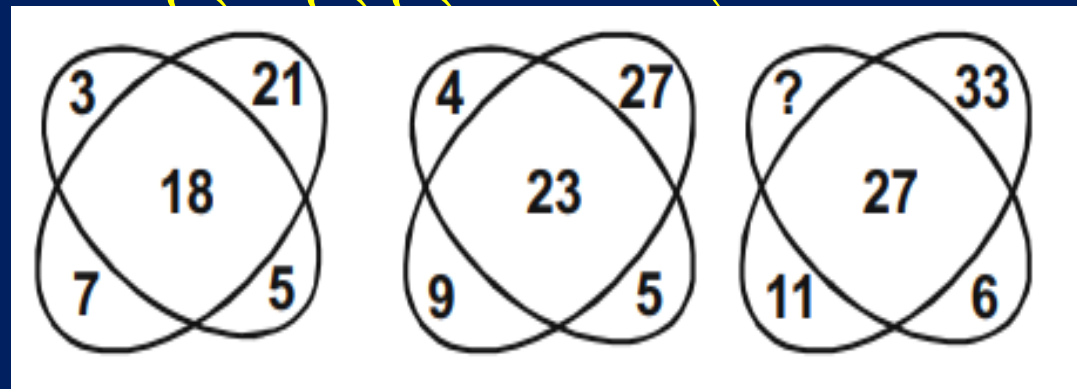
- (A)35
- (B)37
- (C)45
- (D)47



MISSION SSC GD

Q.2 Find the missing number in the following question

CONSTABLE 2023



ज्ञात कीजिए



- (A) 7
- (B) 8
- (C) 5
- (D) 4

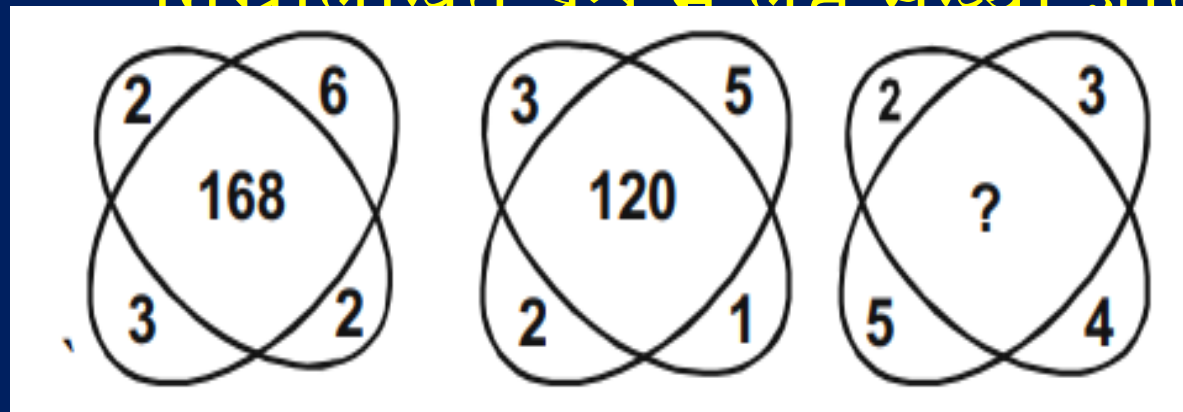


MISSION SSC GD

CONSTABLE 2023

Q.3 Find the missing number in the following question

निम्नलिखित पथ में लपट संख्या ज्ञात कीजिए



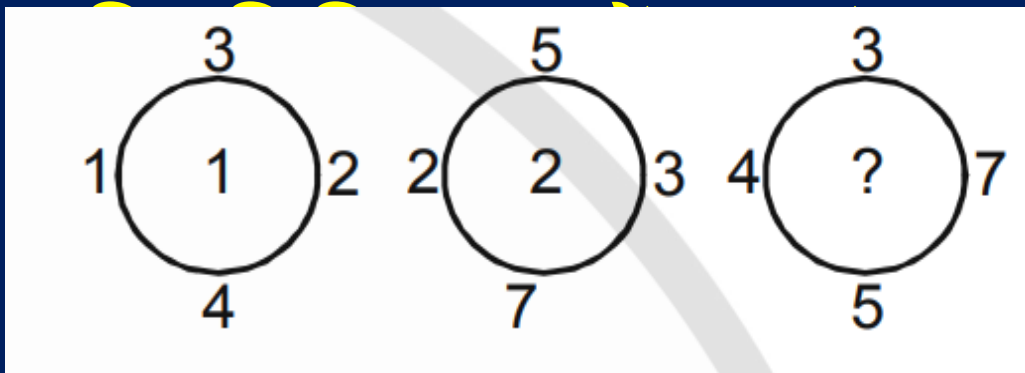
- (A) 84
- (B) 195
- (C) 240
- (D) 200



MISSION SSC GD

CONSTABLE 2023

Q.4 Find the missing number in the following question



ज्ञात कीजिए



- (A) 4
- (B) 5
- (C) 6
- (D) 8



MISSION SSC GD

Q.5 Find the missing number in the following question

CONSTABLE 2023

निम्नलिखित में से सही ज्ञात कीजिए

?	13	49
9	17	69
13	11	59



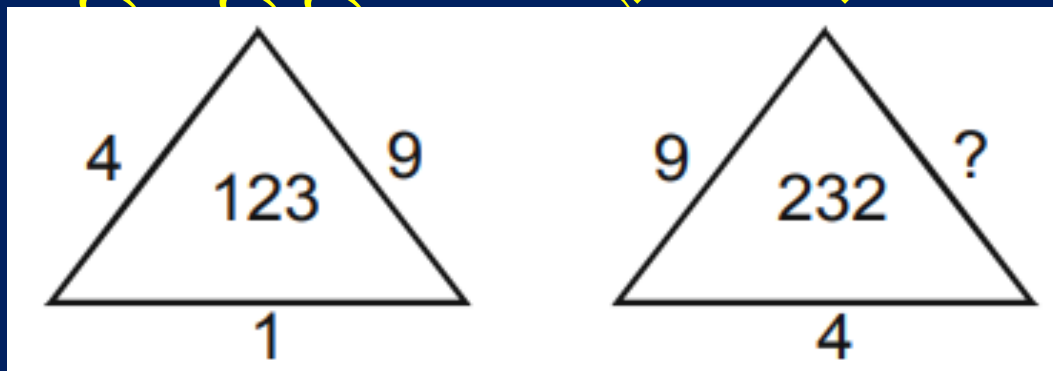
- (A) 9
- (B) 5
- (C) 10
- (D) 21



MISSION SSC GD

CONSTABLE 2023

Q.6 Find the missing number in the following question



त कीजिए



- (A) 2
- (B) 6
- (C) 4
- (D) 1

6



MISSION SSC GD

CONSTABLE 2023

Q.7 Find the missing number in the following question

निम्नलिखित तालिका में एक संख्या ज्ञात कीजिए

3		48
	51	
?		9



- (A)25
- (B)20
- (C)32
- (D)42



MISSION SSC GD

CONSTABLE 2023

Q.8 Find the missing number in the following question

C_{18}	B_{21}
D_{15}	A_{24}
?	H_3
F_9	G_6

व्या ज्ञात कीजिए



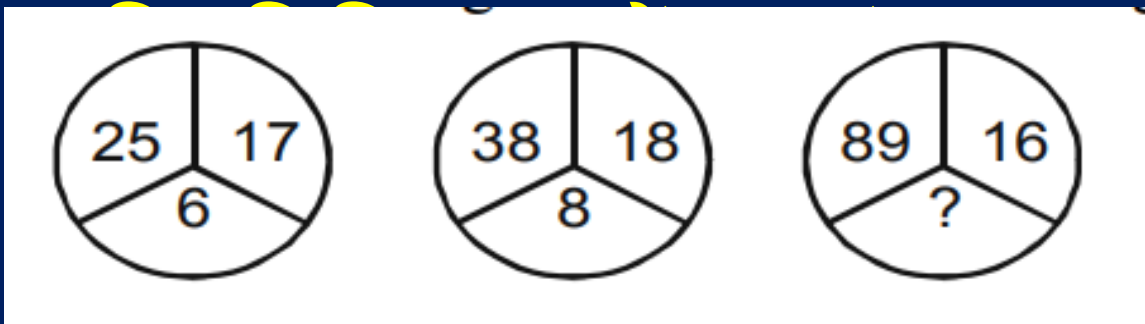
- (A) E31
- (B) E12
- (C) F12
- (D) H8



MISSION SSC GD

CONSTABLE 2023

Q.9 Find the missing number in the following question



कीजिए



- (A) 13
- (B) 15
- (C) 17
- (D) 19



MISSION SSC GD

CONSTABLE 2023

Q.10 Find the missing number in the following question

$$3^{(?) + \sqrt{?} - (2)^2 = 10$$

त कीजिए



- (A) 2, 4
- (B) 5, 81
- (C) 4, 16
- (D) 2, 25



MISSION SSC GD

Q.11 Find the missing number in the following question

5	9	15
16	29	?
49	89	147

प्राज्ञात कीजिए



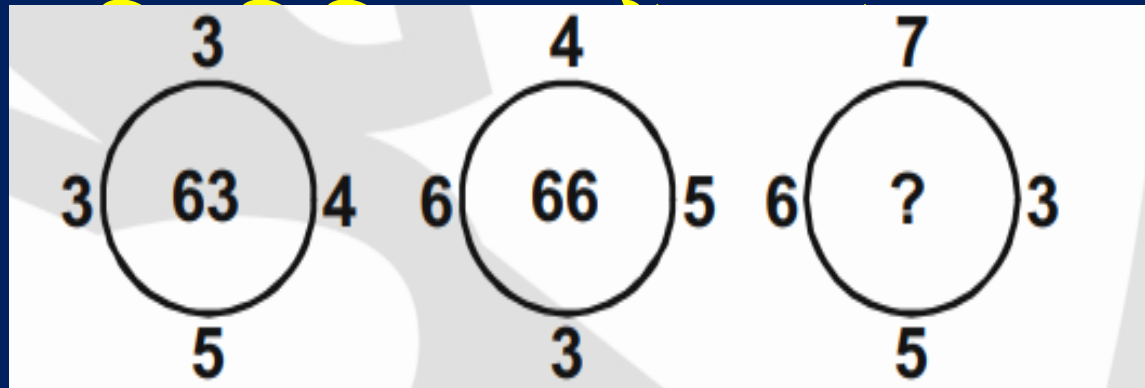
- (A)45
- (B)48
- (C)51
- (D)54



MISSION SSC GD

CONSTABLE 2023

Q.12 Find the missing number in the following question



कीजिए



- (A) 57
- (B) 53
- (C) 105
- (D) 111

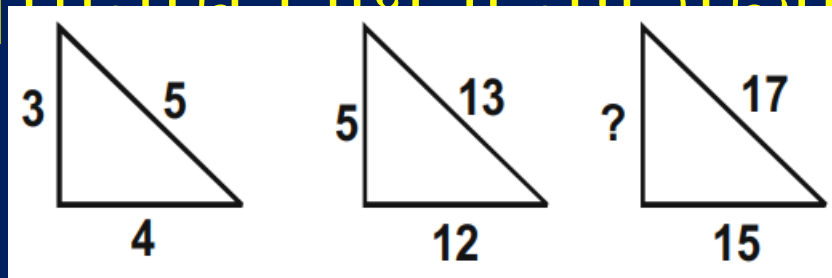


MISSION SSC GD

Q.13 Find the missing number in the following question

CONSTABLE 2023

निम्नलिखित तालिका में तालिका संख्या ज्ञात कीजिए



- (A) 2
- (B) 8
- (C) 64
- (D) 6



MISSION SSC GD

Q.14 Find the missing number in the following question

CONSTABLE 2023

0.5	0.8
8.9	1.4
?	2.3
5.0	3.5

ज्ञात कीजिए



- (A) 8.6
- (B) 6.0
- (C) 5.8
- (D) 6.8



MISSION SSC GD

CONSTABLE 2023

Q.15 Find the missing number in the following question

निम्नलिखित तालिका में तालिका संख्या का तालिका कीजिए

	17			24			61	
52	89	12	61	167	33	121	?	33
	8			49			15	



(A)24

0

(B)23

0

(C)23



MISSION SSC GD

Q.16 Find the missing number in the following question

CONSTABLE 2023

निम्नलिखित तालिका में ज्ञात कीजिए

4	9	20
10	8	21
6	4	?



- (A) 9
- (B) 10
- (C) 11
- (D) 12



MISSION SSC GD

Q.17 Find the missing number in the following question

CONSTABLE 2023

सही ज्ञात कीजिए

48	60	28
10	12	6
7	?	3



- (A) 9
- (B) 10
- (C) 11
- (D) 12



MISSION SSC GD

CONSTABLE 2023

Q.18 Find the missing number in the following question

18		6
	130	
8		7

7		4
	60	
2		8

14		4
	?	
6		7

कीजिए



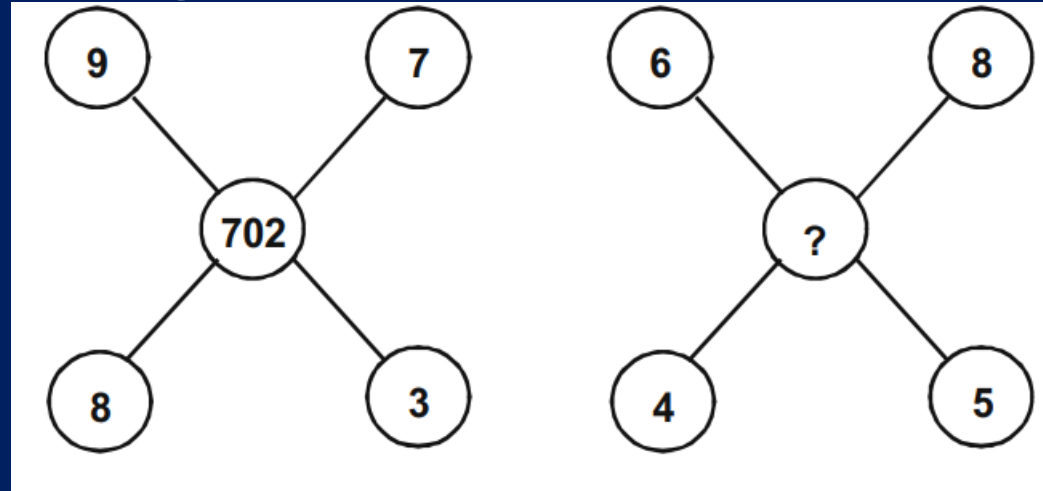
- (A) 77
- (B) 88
- (C) 99
- (D) 80



MISSION SSC GD

CONSTABLE 2023

Q.19 Find the missing number in the following question



त कीजिए



(A) 52

5

(B) 52

3

(C) 52

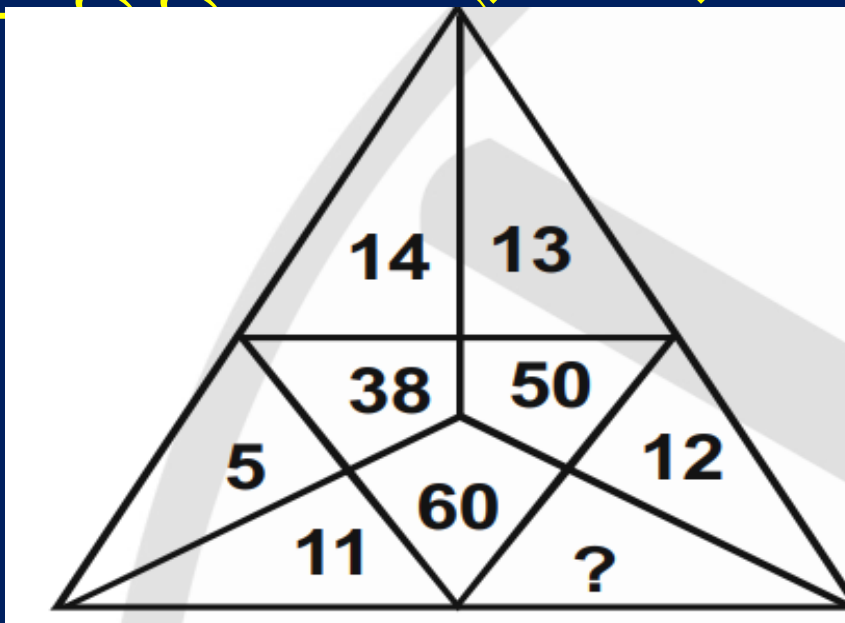


MISSION SSC GD

Q.20 Find the missing number in the following question

CONSTABLE 2023

निम्नलिखित में से सही उत्तर का चयन करके ज्ञात कीजिए



- (A) 16
- (B) 18
- (C) 19
- (D) 17



**MISSION SSC GD
CONSTABLE 2023**

THANK YOU