



# MISSION SSC



## REASONING

*Diwali*

**SPECIAL CLASS**



# Missing Character

LIVE

03:00 PM



Join my

# TELEGRAM GROUP

 @reasoningbymohitsir

 Daily PDF of all YT sessions

 Discussion / Doubt Solving

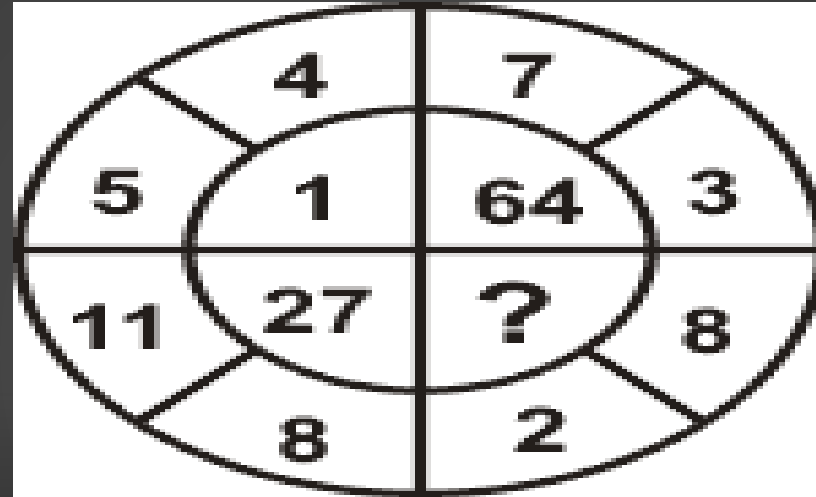
 Direct Interaction with me

 Quiz

 Polls



**Q.1 FIND THE MISSING  
NUMBER ?**  
लुप्त संख्या ढूँढें?



- A. 1**
- B. 25**
- C. 125**
- D. 216**

# Q.2 FIND THE MISSING NUMBER ?

लुप्त

7	9	21	27
4	2	36	18
9	4	54	?



- A .18
- B .24
- C .36
- D .58

# Q.3 FIND THE MISSING NUMBER ?

लुप्त

13	54	?
7	45	32
27	144	68



- A .4
- B .6
- C .36
- D .42

**Q.4 FIND THE MISSING  
NUMBER ?**

**लुप्त संख्या ढूँढें?**

<b>51</b>	<b>11</b>	<b>61</b>
<b>64</b>	<b>30</b>	<b>32</b>
<b>35</b>	<b>?</b>	<b>43</b>



- A .25**
- B .27**
- C .32**
- D .37**

# Q.5 FIND THE MISSING NUMBER ?

लुप्त संख्या पत्तिका

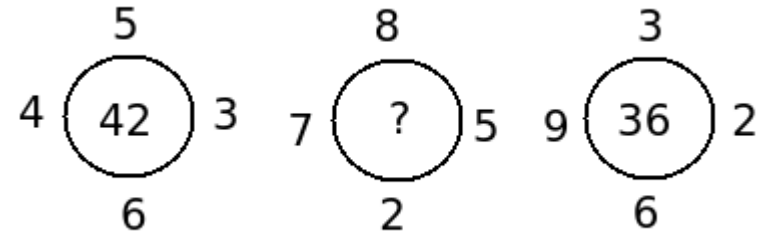
42	44	38
23	55	28
37	?	39



- A .11
- B .22
- C .33
- D .44

# Q.6 FIND THE MISSING NUMBER ?

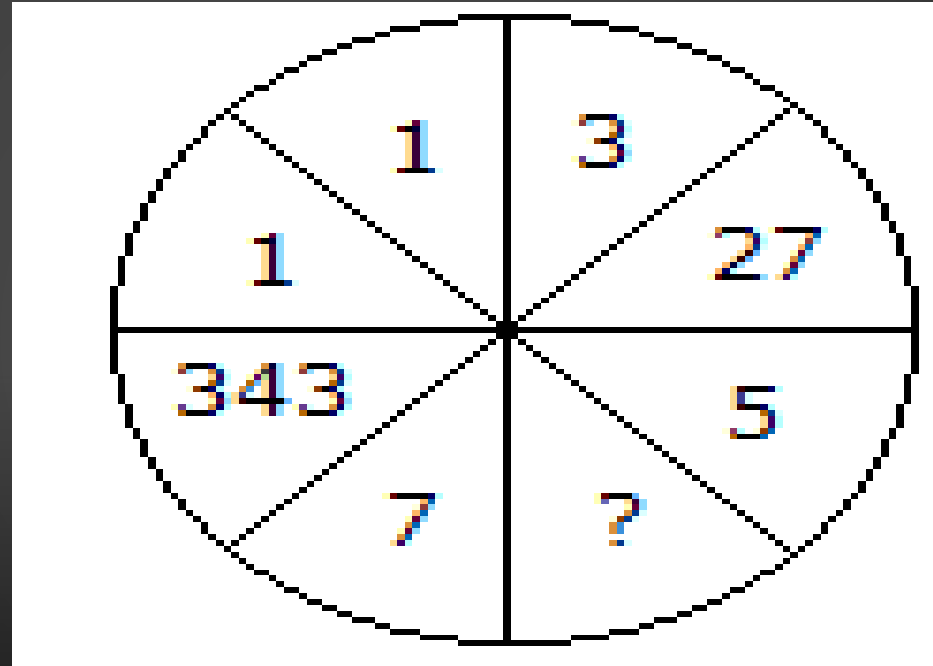
लुप्त संख्या ढूँढें?



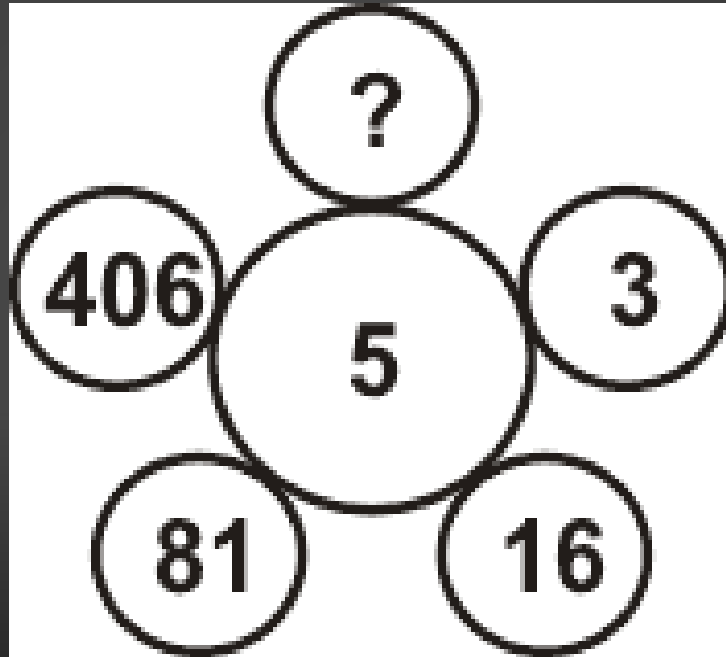
- A .50
- B .51
- C .48
- D .53



Q.7 FIND THE MISSING  
NUMBER ?  
लुप्त संख्या ढूँढें?



Q.8 FIND THE MISSING  
NUMBER ?  
लुप्त संख्या ढूँढें?



- A .201
- B .731
- C  
.1625
- D  
.2031

Q.9 FIND THE MISSING  
NUMBER ?

खाली स्थान भरें?

963	2	844
464	?	903



- A .1
- B .2
- C .3
- D .4

# Q.10 FIND THE MISSING NUMBER ?

क्या संख्या है?

2	4	0
1	2	4
3	1	3
36	?	91



A .25

B

.48

C

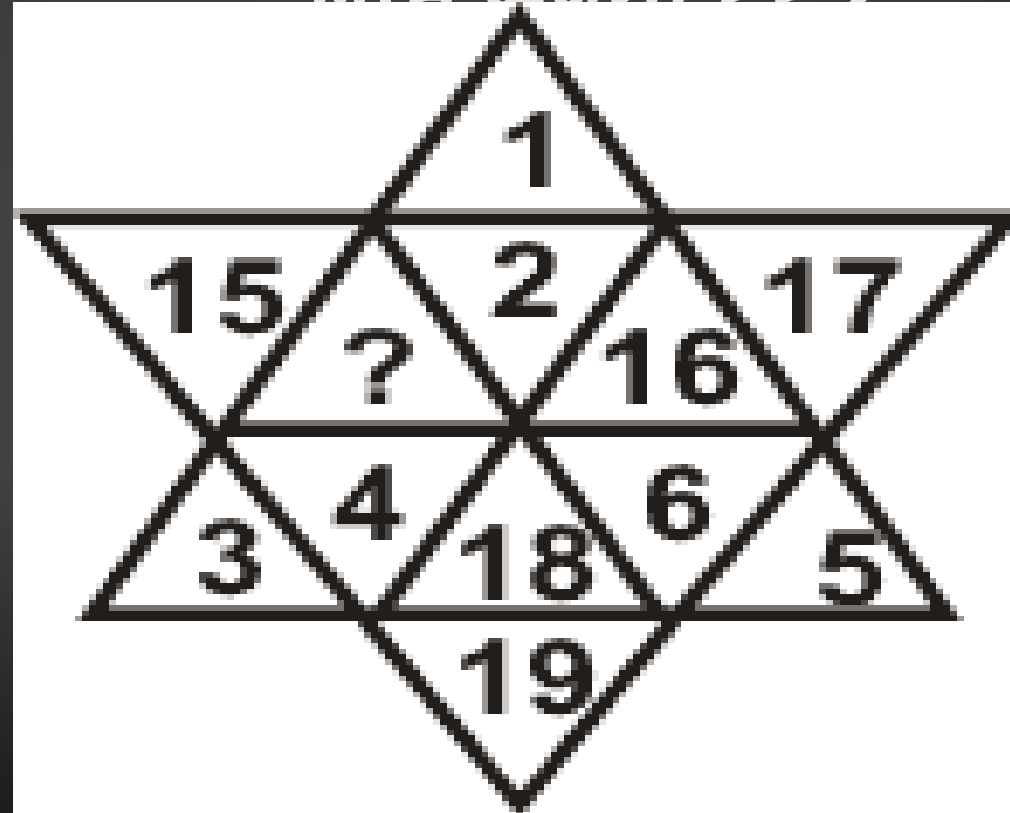
.59

D

,73

# Q.11 FIND THE MISSING NUMBER ?

क्या न संख्या है?



- A
- .14
- B
- .21
- C
- .28
- D

# Q.12 FIND THE MISSING NUMBER ?

13	12	5
17	15	8
25	24	?
29	21	20



- A .5
- B .7
- C .9
- D .11

# Q.13 FIND THE MISSING NUMBER ?

लात संख्या ढँढें?

12	2	20
24	4	88
11	1	?



- A .14
- B .18
- C .23
- D .12

Q.14 FIND THE MISSING  
NUMBER ?  
लुप्त संख्या ढूँढें?

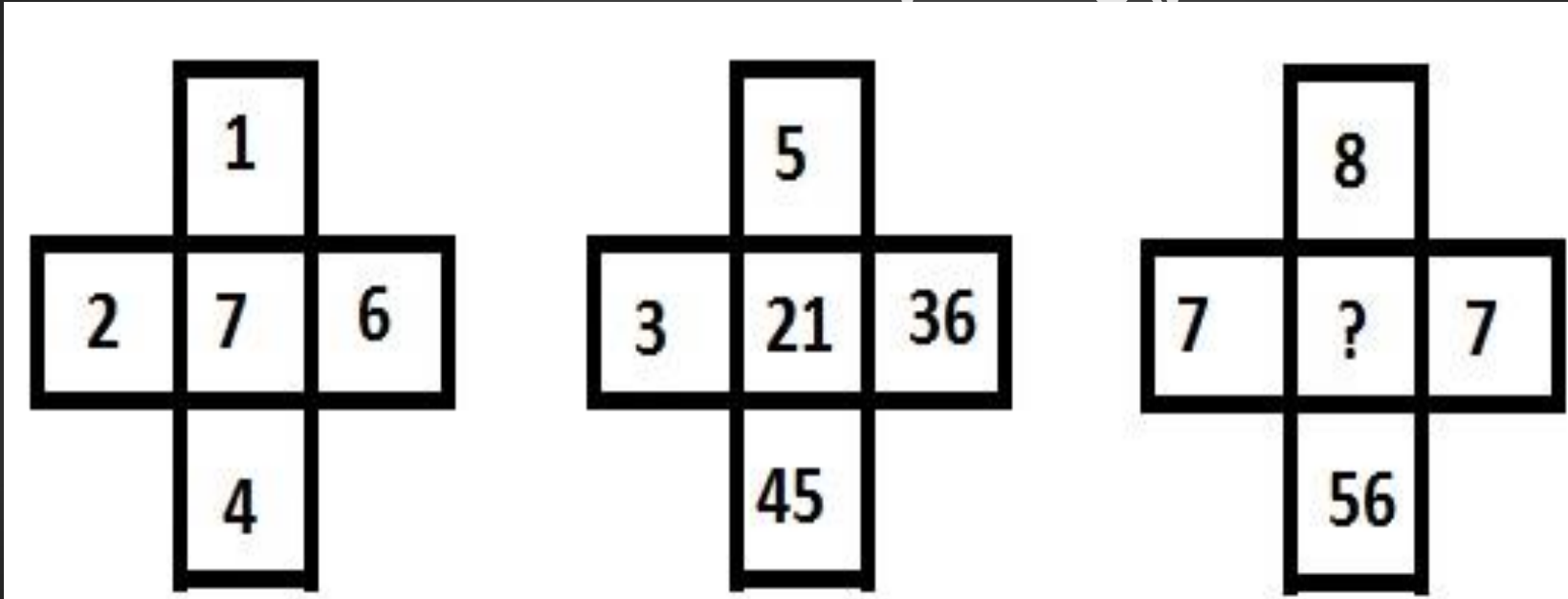
11		19		58
12	1	16	5	48
				?



- A .18
- B .19
- C .21
- D .12



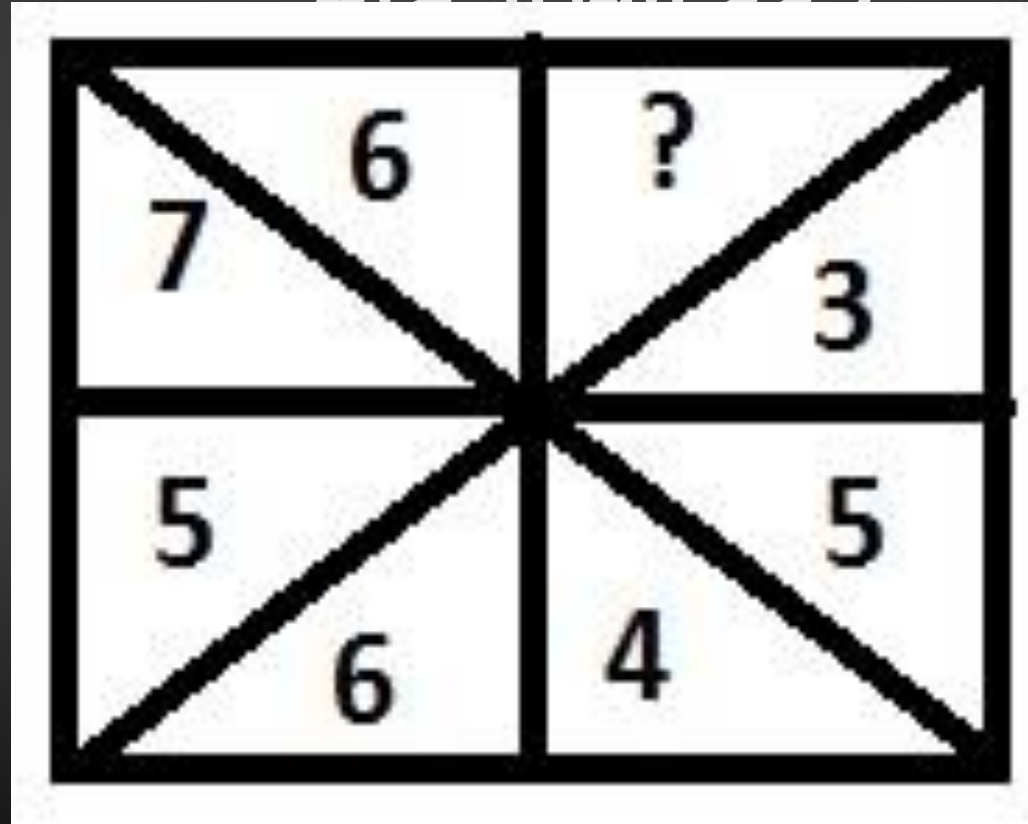
# Q.15 FIND THE MISSING NUMBER ?



- A .5
- B .7
- C .8
- D .12

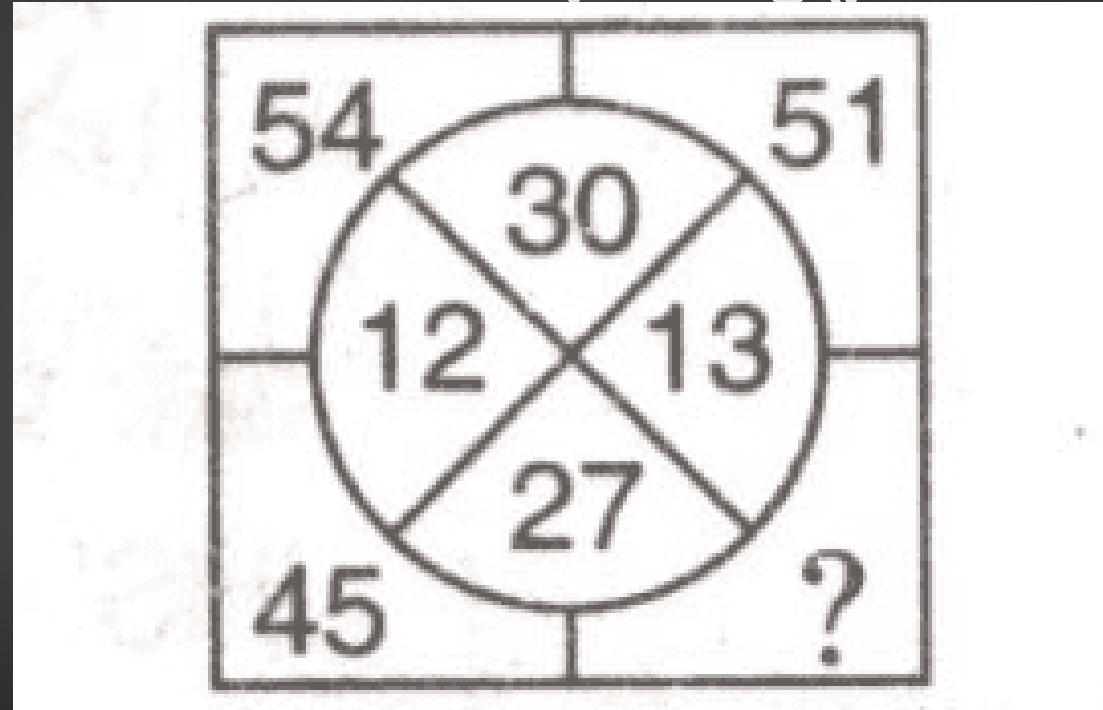
# Q.16 FIND THE MISSING NUMBER ?

क्या संख्या है?



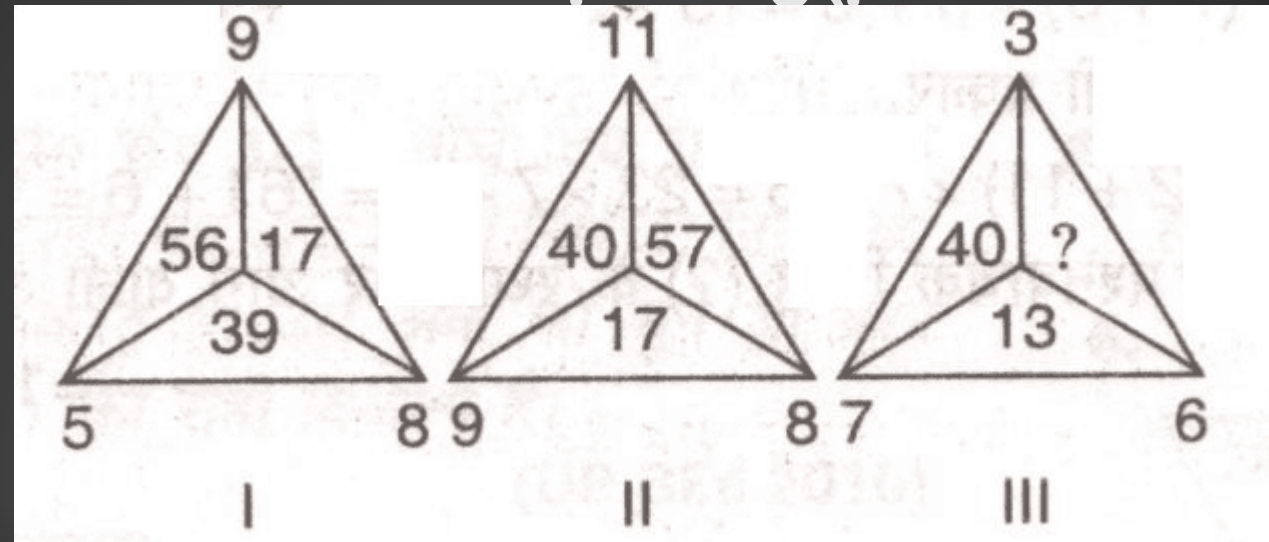
- A .2
- B .9
- C .5
- D .8

# Q.17 FIND THE MISSING NUMBER ?



- A .39
- B .42
- C .48
- D .56

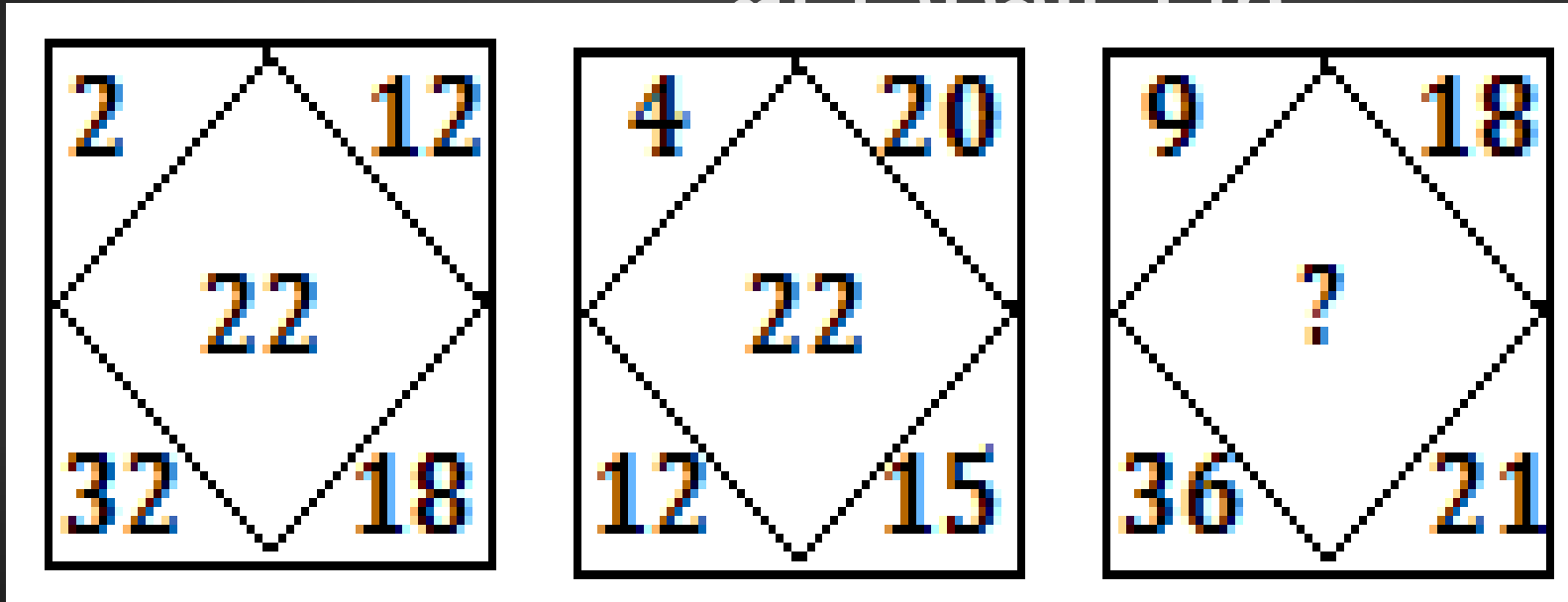
# Q.18 FIND THE MISSING NUMBER ?



- A
- .21
- B
- .27
- C
- .31

# Q.19 FIND THE MISSING NUMBER ?

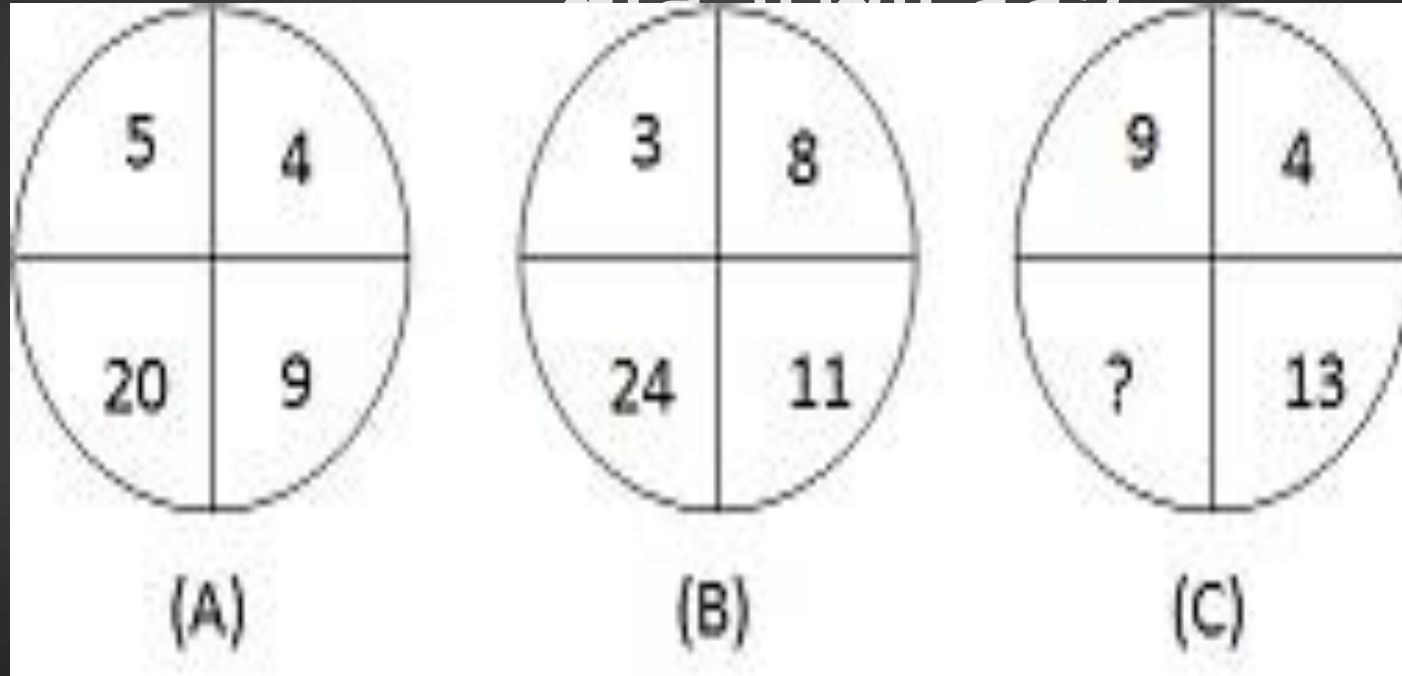
संख्या संख्या है



- A .22
- B .34
- C .36
- D .42

# Q.20 FIND THE MISSING NUMBER ?

समस्या हल करें



**A .117**

**B .36**

**C .32**

**D .26**

# THAN K YOU

## Join my **TELEGRAM GROUP**



@reasoningbymohitsir



Daily PDF of all YT sessions



Discussion / Doubt Solving



Direct Interaction with me



Quiz



Polls

