



# MISSION SSC



## REASONING

*Diwali*

**SPECIAL CLASS**



# Figure Counting

LIVE 03:00 PM 



Join my

# TELEGRAM GROUP

 @reasoningbymohitsir

 Daily PDF of all YT sessions

 Discussion / Doubt Solving

 Direct Interaction with me

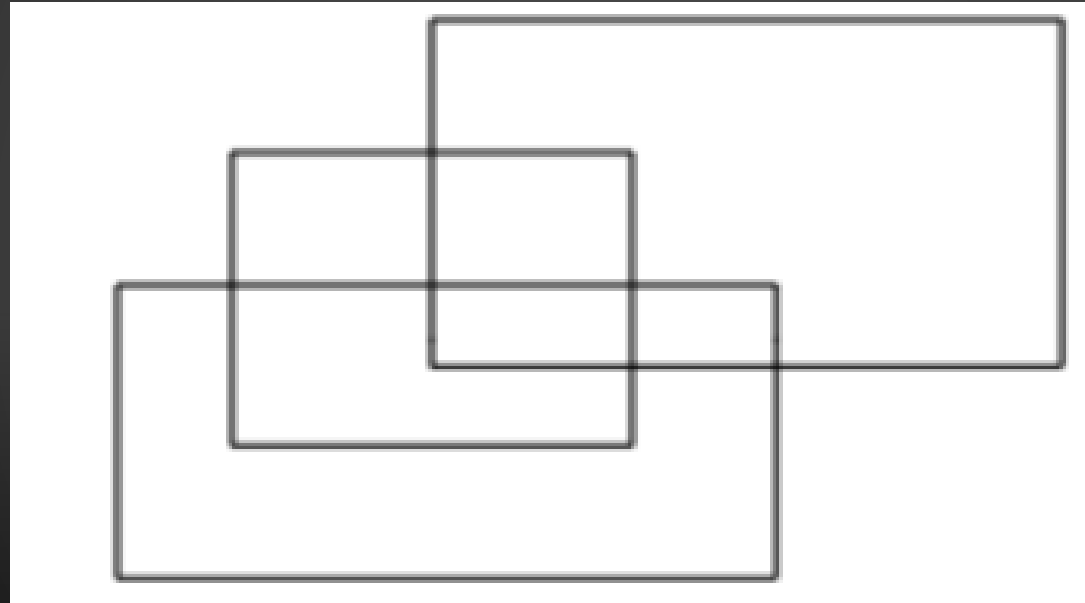
 Quiz

 Polls



Q.1 How many rectangles are there in the given figure?

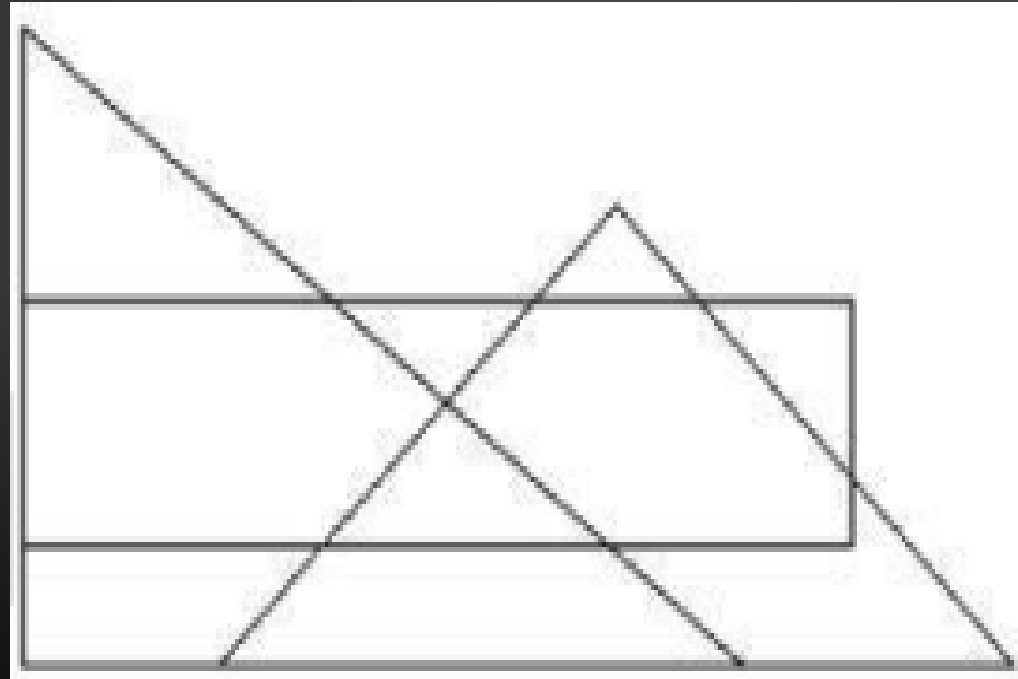
दी गई आकृति में कितने आयत हैं?



- (A) 12
- (B) 9
- (C) 10
- (D) 11

Q.2 How many triangles are there in the given figure?

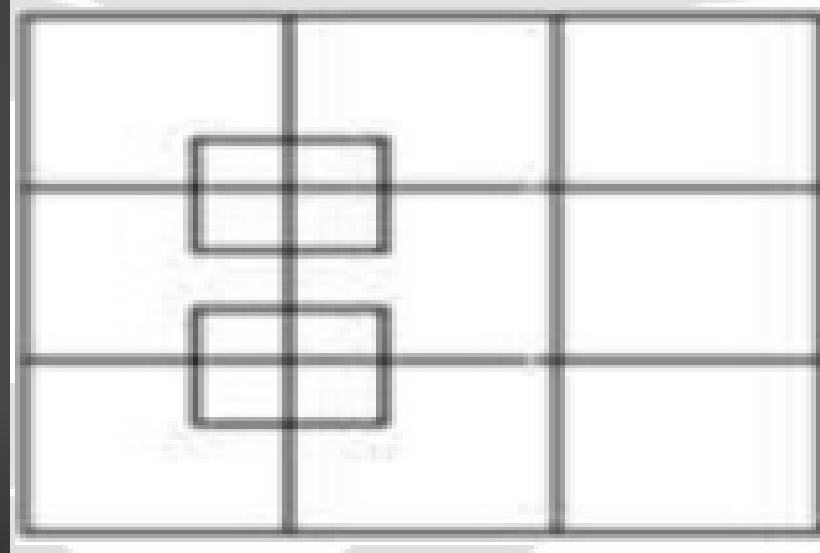
दी गई आकृति में कितने त्रिभुज हैं?



- (A) 5
- (B) 7
- (C) 8
- (D) 9

Q.3 How many squares are there in the given figure?

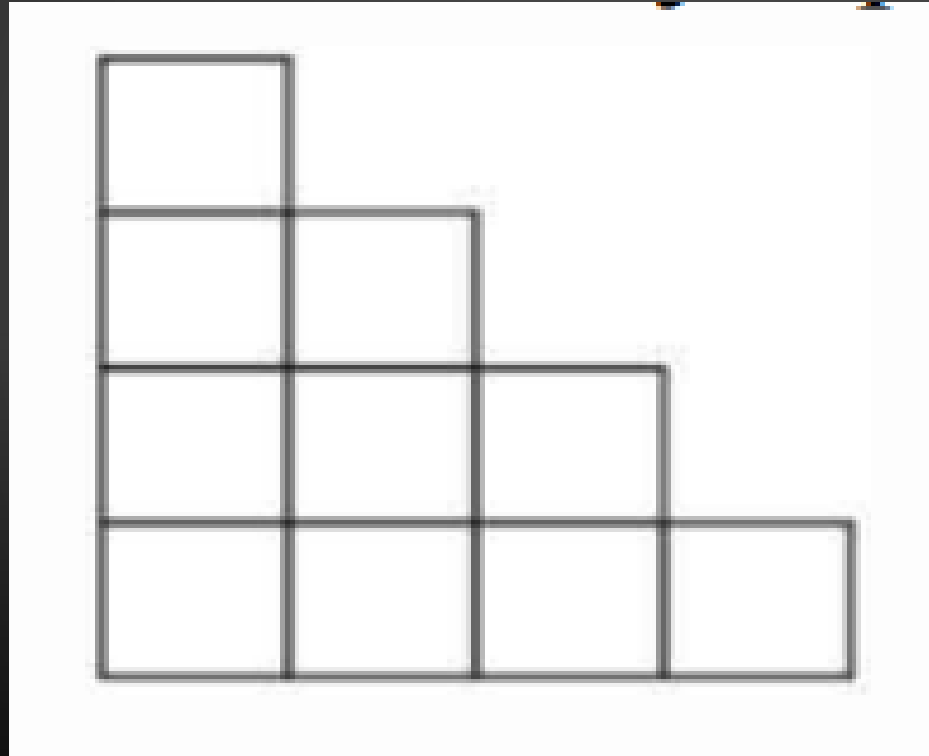
दी गई आकृति में कितने वर्ग हैं?



- (A) 27
- (B) 25
- (C) 24
- (D) 26

Q.4 How many squares are there in the given figure?

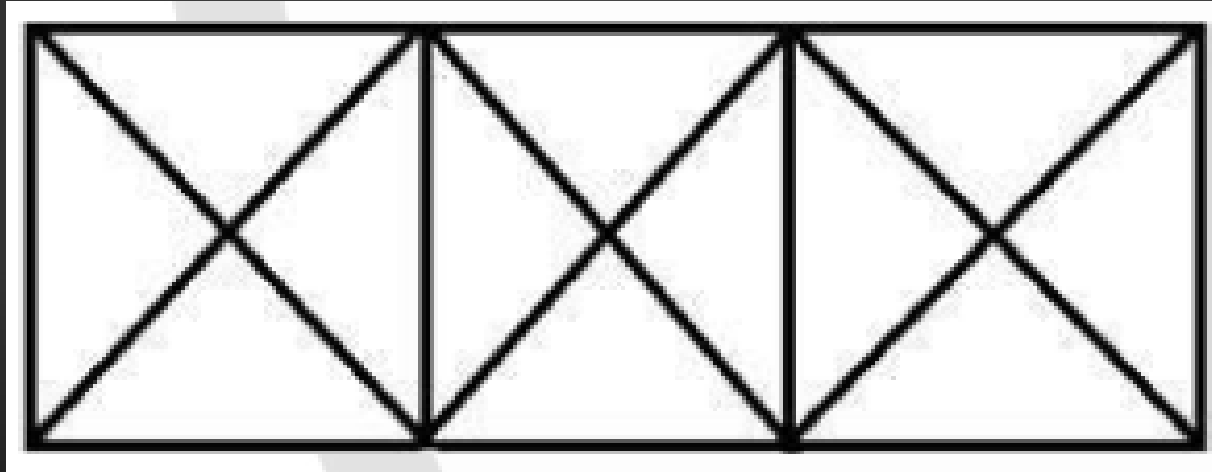
दी गई आकृति में कितने वर्ग हैं?



- (A) 15
- (B) 13
- (C) 11
- (D) 18

Q.5 How many squares are there in the given figure?

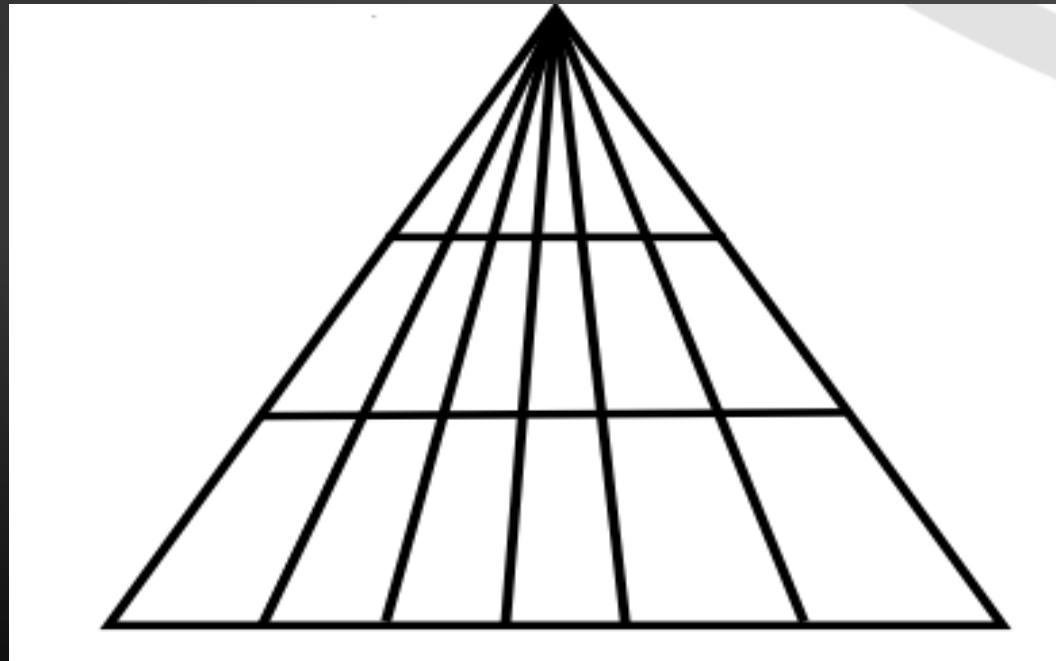
दी गई आकृति में कितने वर्ग हैं?



- (A) 6
- (B) 4
- (C) 3
- (D) 5

Q.6 . How many triangles are there in the given figure ?

दी गई आकृति में कितने त्रिभुज हैं?

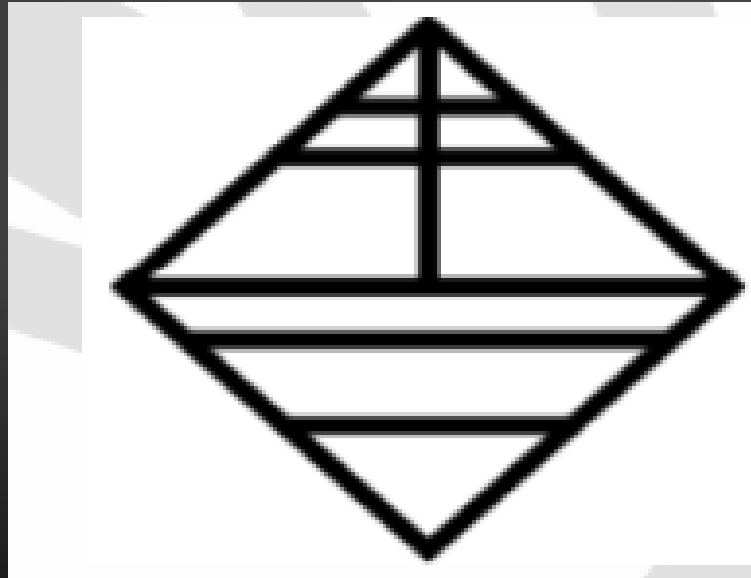


- (A) 60
- (B) 64
- (C) 61
- (D) 63



Q.7. How many triangles are there in the given figure ?

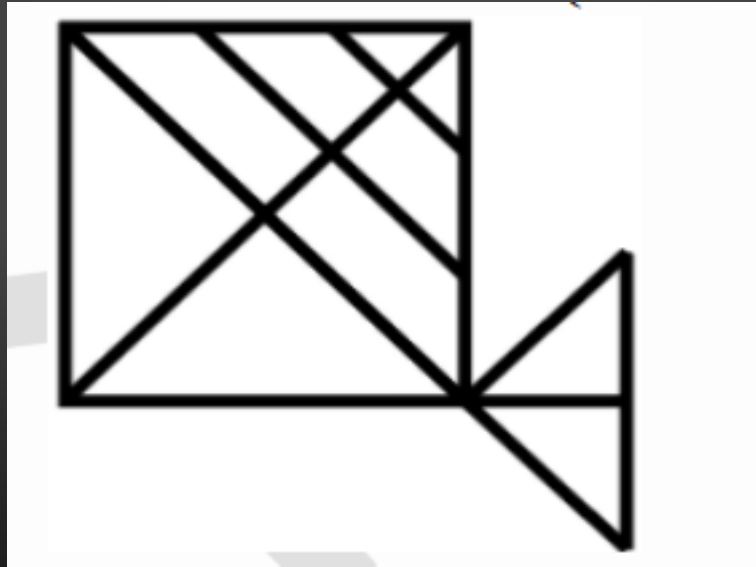
दी गई आकृति में कितने त्रिभुज हैं?



- (A) 11
- (B) 14
- (C) 12
- (D) 13

Q.8. How many triangles are there in the given figure ?

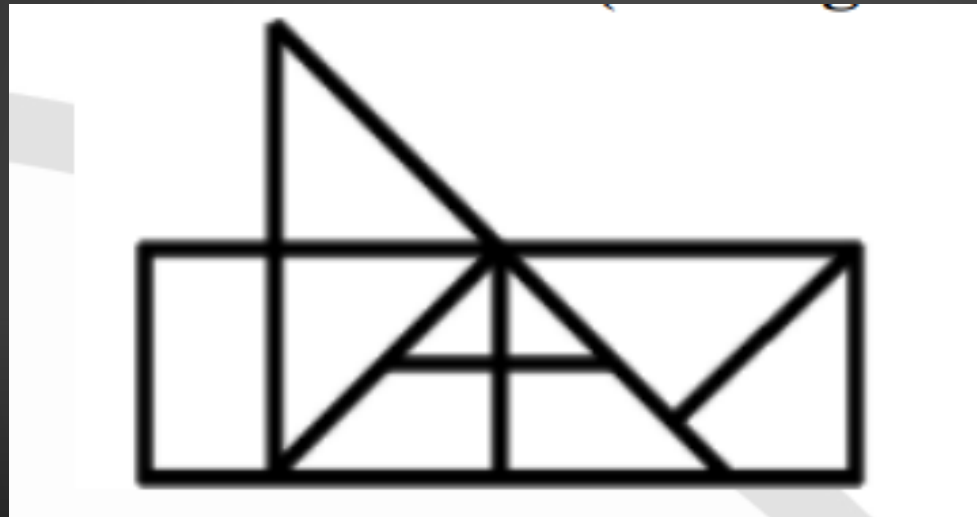
दी गई आकृति में कितने त्रिभुज हैं?



- (A) 17
- (B) 18
- (C) 15
- (D) 16

Q.9. How many triangles are there in the given figure ?

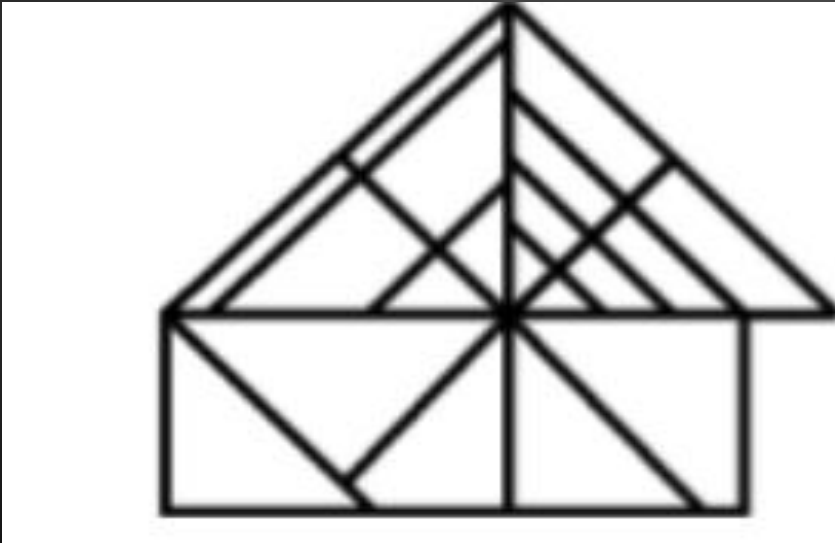
दी गई आकृति में कितने त्रिभुज हैं?



- (A) 10
- (B) 12
- (C) 11
- (D) 13

Q.10 How many triangles are there in the given figure ?


दी गई आकृति में कितने त्रिभुज हैं?



- (A) 27
- (B) 26
- (C) 24
- (D) 25

Q.11. How many triangles are there in the given figure ?

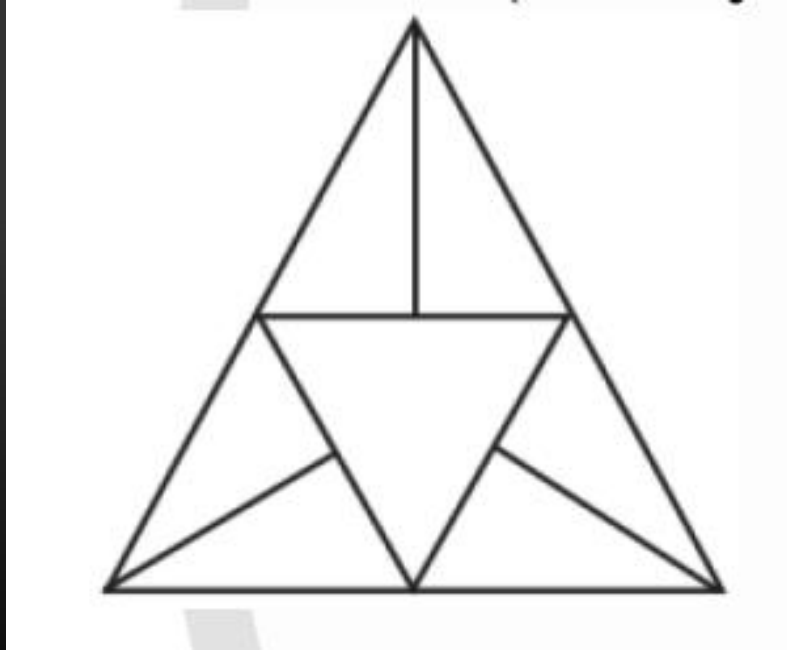
दी गई आकृति में कितने त्रिभुज हैं?



- (A) 27
- (B) 26
- (C) 20
- (D) 24

Q.12. How many triangles are there in the given figure ?

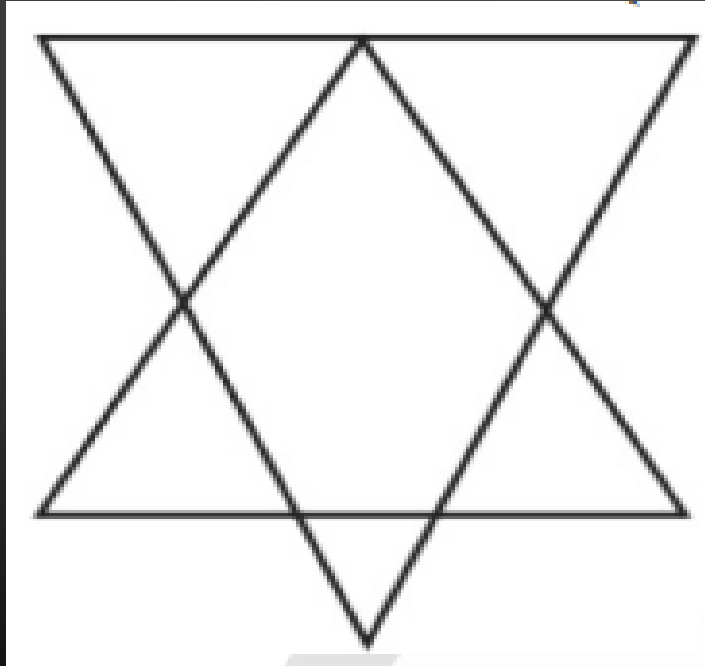
दी गई आकृति में कितने त्रिभुज हैं?



- (A) 10
- (B) 11
- (C) 12
- (D) 14

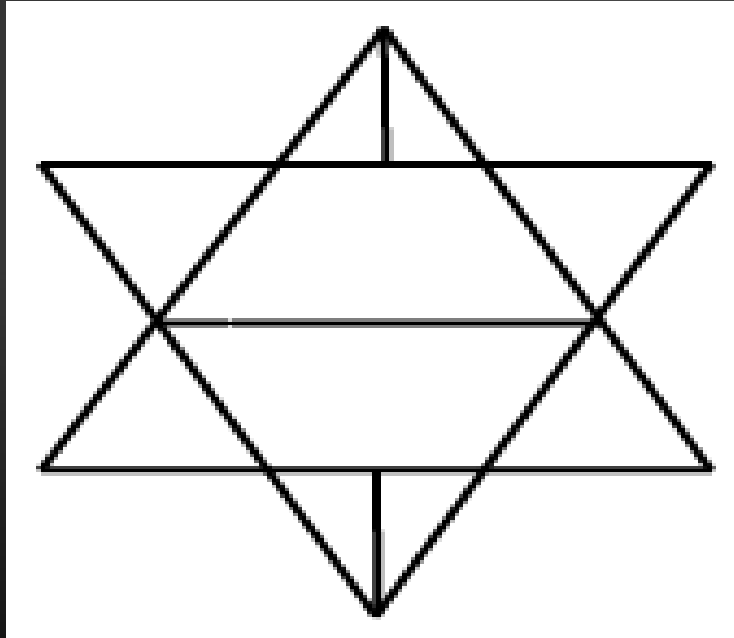
Q.13 How many triangles are there in the given figure ?

दी गई आकृति में कितने त्रिभुज हैं?



- (A) 6
- (B) 7
- (C) 8
- (D) 10

Q.14 How many triangles are there in the given figure ?  
दी गई आकृति में कितने त्रिभुज हैं?

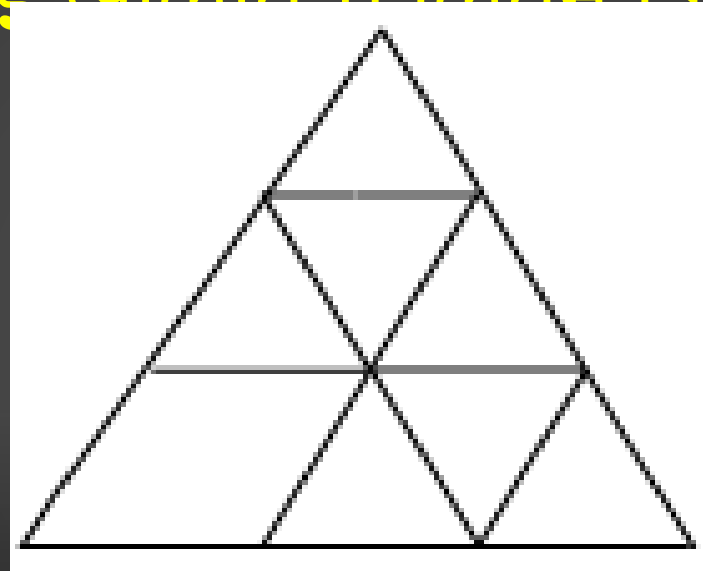


- (A) 10
- (B) 12
- (C) 14
- (D) 16



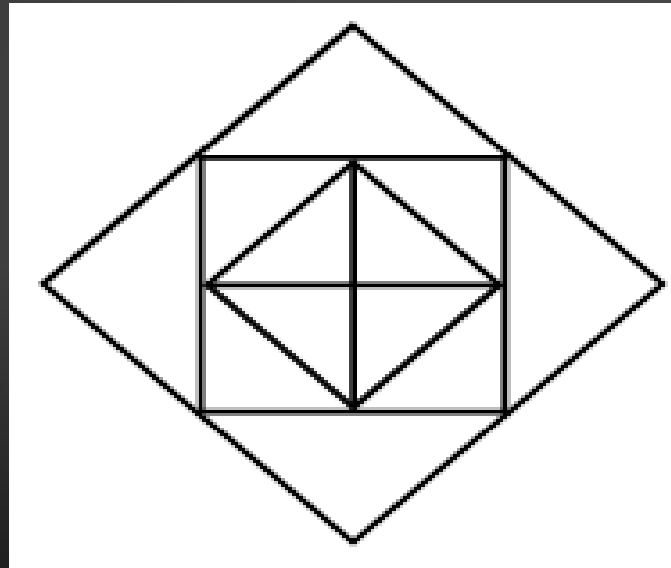
Q.15 How many triangles are there in the given figure ?

दी गई आकृति में कितने त्रिभुज हैं?



- a) 1
- 2
- b) 11
- c) 10
- d) 1
- 5

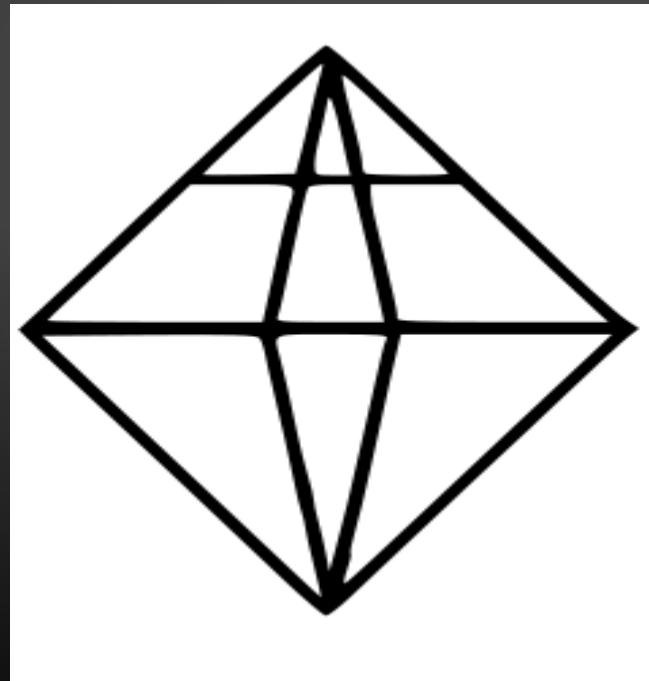
Q.16 How many triangles are there in the given figure ?  
दी गई आकृति में कितने त्रिभुज हैं?



- a) 12
- b) 16
- c) 9
- d) 8

Q.17 How many triangles are there in the given figure ?

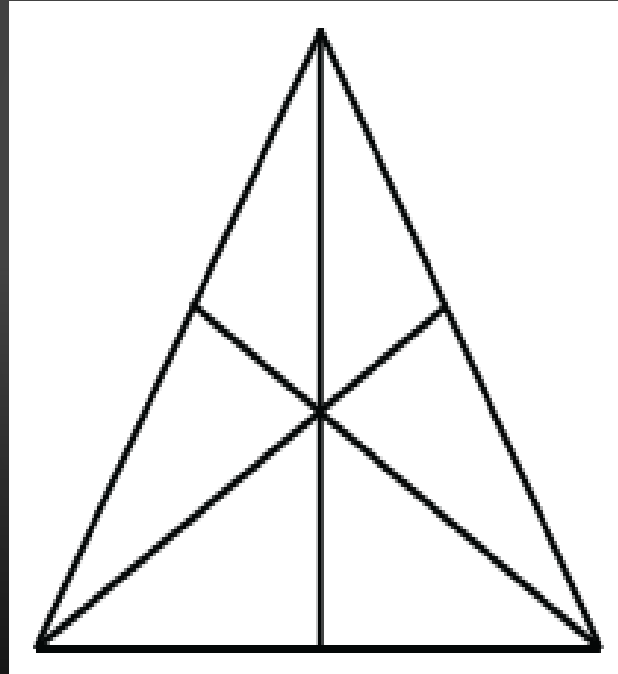
दी गई आकृति में कितने त्रिभुज हैं?



- a) 12
- b) 16
- c) 18
- d) 20

Q.18 How many triangles are there in the given figure ?

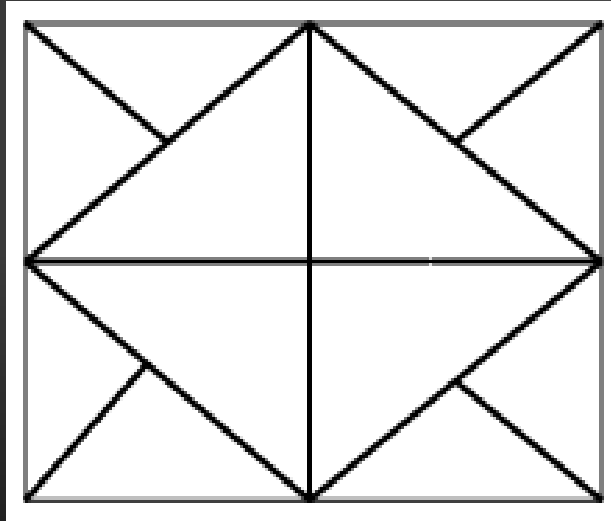
दी गई आकृति में कितने त्रिभुज हैं?



- a) 6
- b) 10
- c) 12
- d) 16

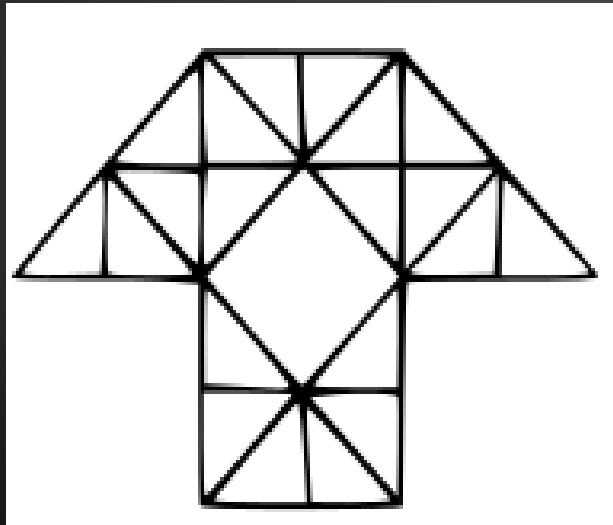
Q.19 How many triangles are there in the given figure ?

दी गई आकृति में कितने त्रिभुज हैं?



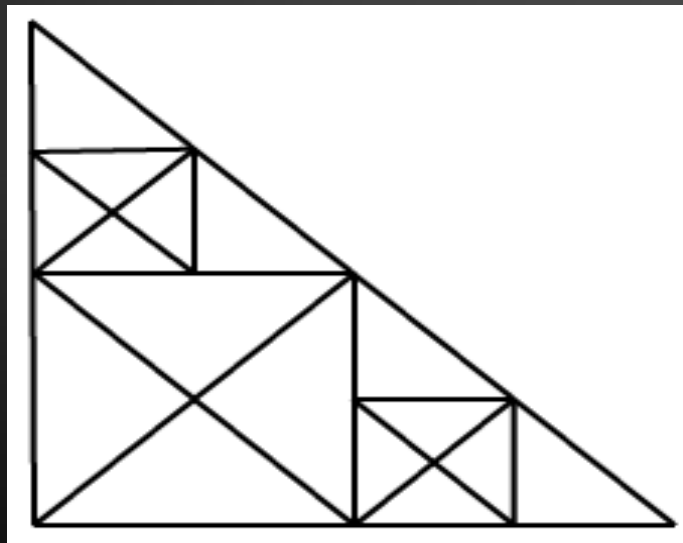
- a) 12
- b) 16
- c) 10
- d) 20

Q.20 How many triangles are there in the given figure ?  
दी गई आकृति में कितने त्रिभुज हैं?



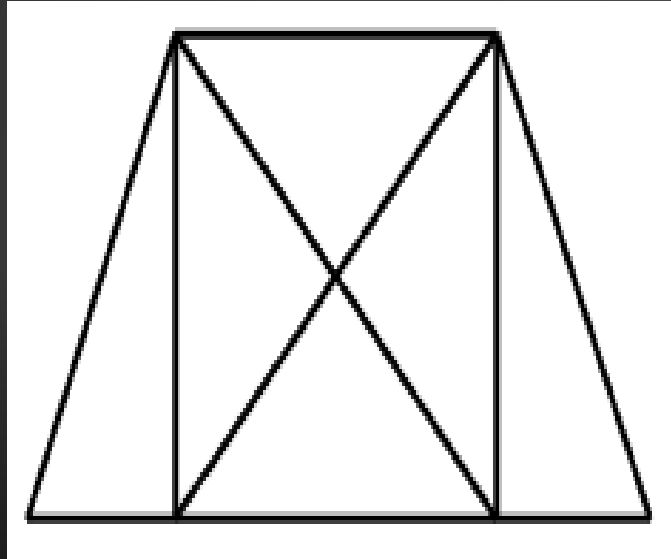
- a) 29
- b) 38
- c) 40
- d) 35

Q.21 How many triangles are there in the given figure ?  
दी गई आकृति में कितने त्रिभुज हैं?



- a) 32
- b) 34
- c) 37
- d) 40

Q.22 How many triangles are there in the given figure ?  
दी गई आकृति में कितने त्रिभुज हैं?




- a) 8
- b) 10
- c) 12
- d) 14



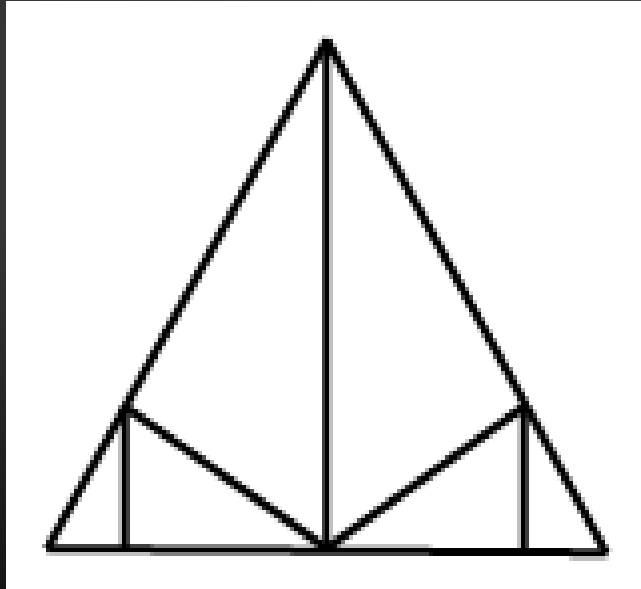
Q. 23 How many triangles are there in the given figure ?

दी गई आकृति में कितने त्रिभुज हैं?



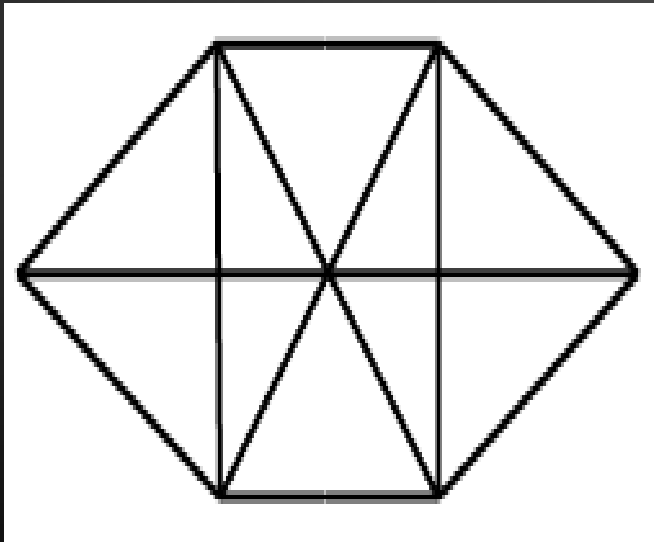
- a) 4
- b) 5
- c) 6
- d) 7

Q.24 How many triangles are there in the given figure ?  
दी गई आकृति में कितने त्रिभुज हैं?



- a) 10
- b) 11
- c) 12
- d) 13

Q.25 How many triangles are there in the given figure ?  
दी गई आकृति में कितने त्रिभुज हैं?



- a) 16
- b) 20
- c) 22
- d) 24

THAN  
K  
YOU

Join my  
**TELEGRAM GROUP**



@reasoningbymohitsir



Daily PDF of all YT sessions



Discussion / Doubt Solving



Direct Interaction with me



Quiz



Polls

