



SSC GD CONSTABLE 2023



सफलता का महामंत्र **DAY-12**

Counting Figures

आकृतियों की गणना

REASONING

LIVE

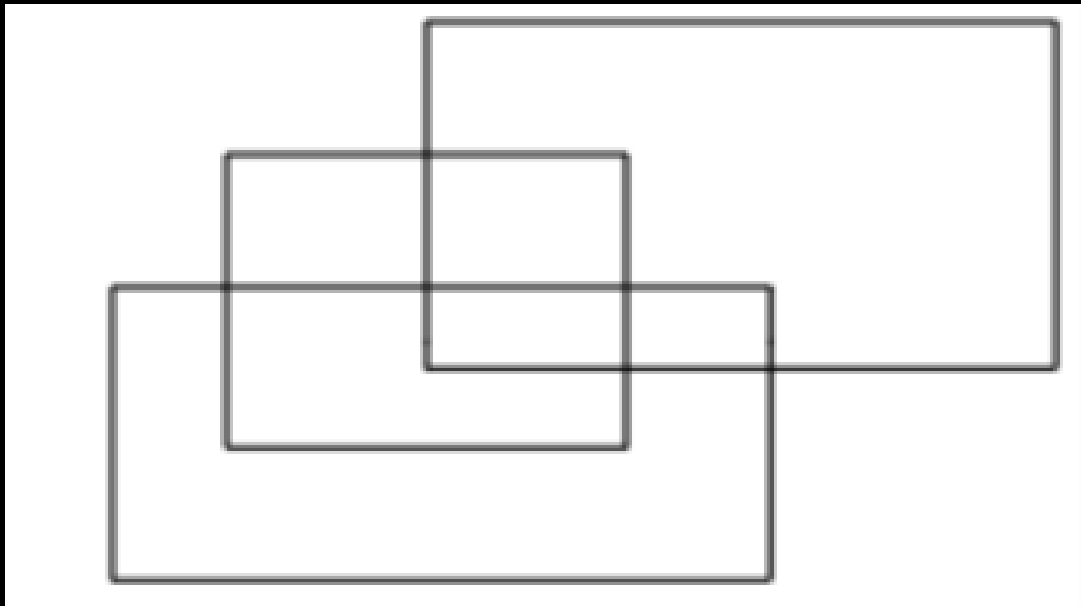
07:00 PM





Q.1 How many rectangles are there in the given figure?

दी गई आकृति में कितने आयत हैं?



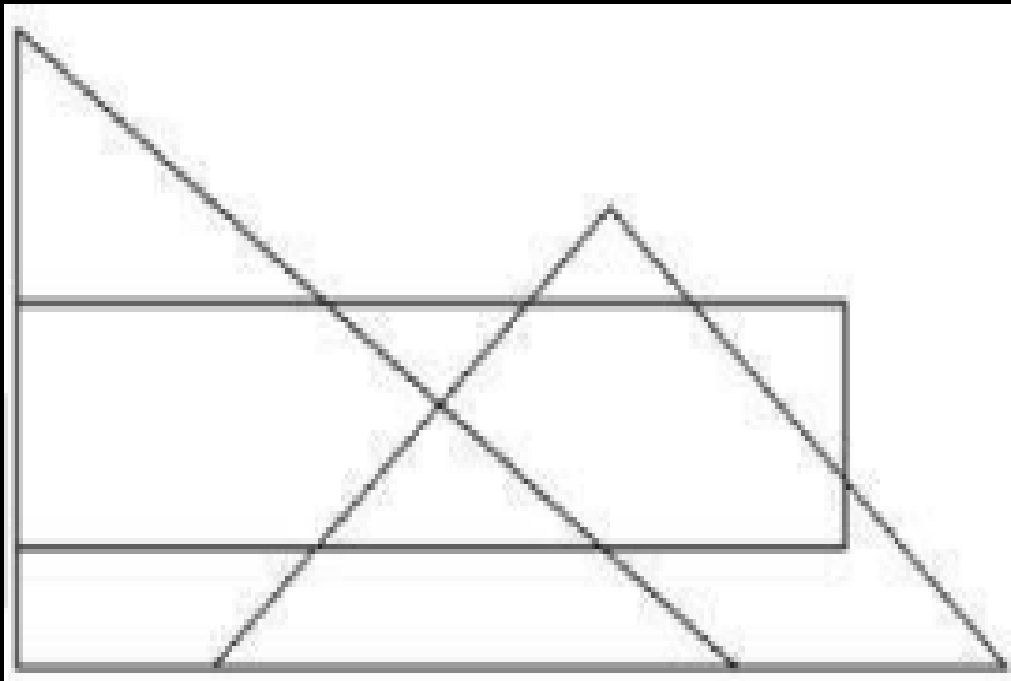
- (A) 12
- (B) 9
- (C) 10
- (D) 11





Q.2 How many triangles are there in the given figure?

दी गई आकृति में कितने त्रिभुज हैं?



(A) 5

(B) 7

(C) 8

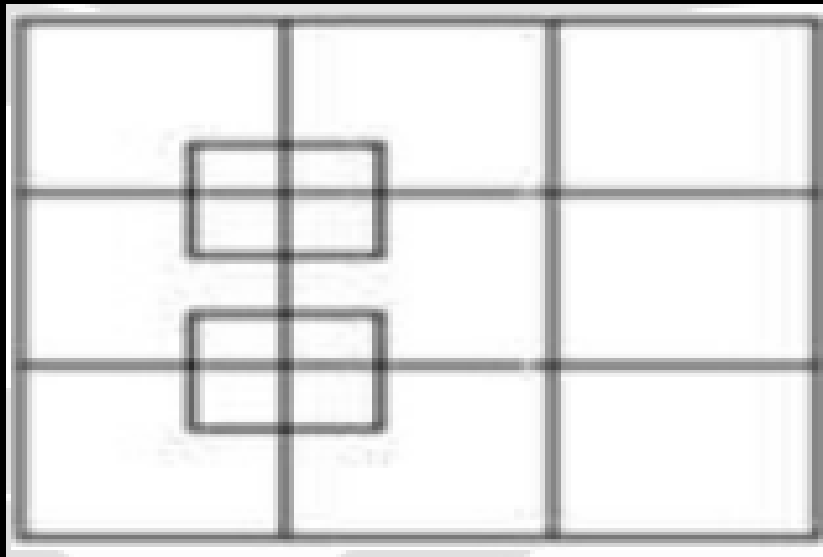
(D) 9





Q.3 How many squares are there in the given figure?

दी गई आकृति में कितने वर्ग हैं?



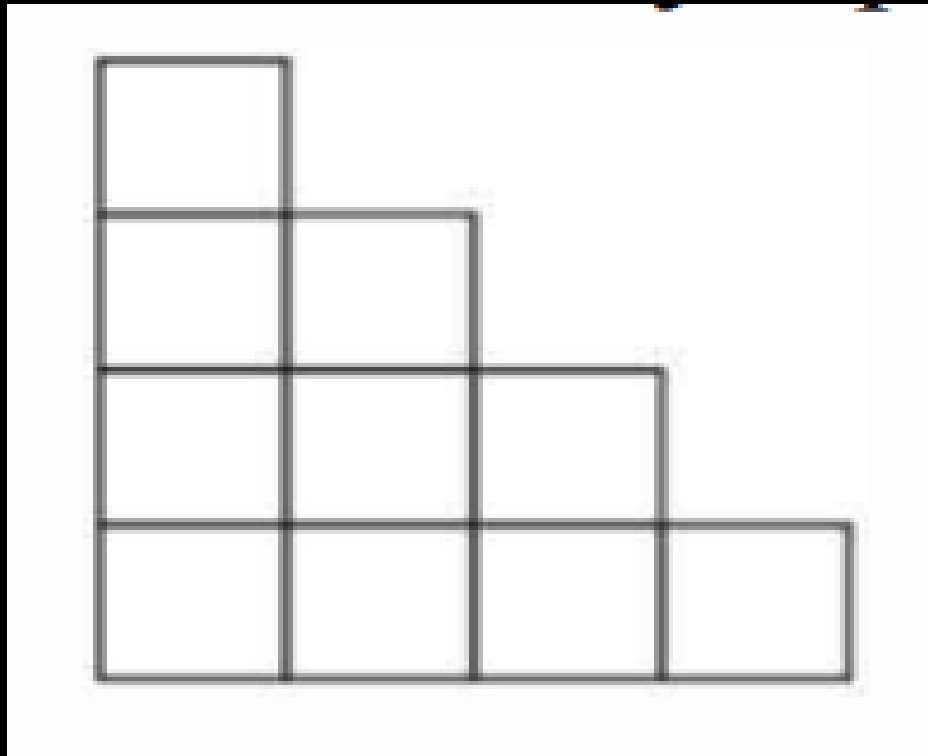
- (A) 27
- (B) 25
- (C) 24
- (D) 26





Q.4 How many squares are there in the given figure?

दी गई आकृति में कितने वर्ग हैं?



(A) 15

(B) 13

(C) 11

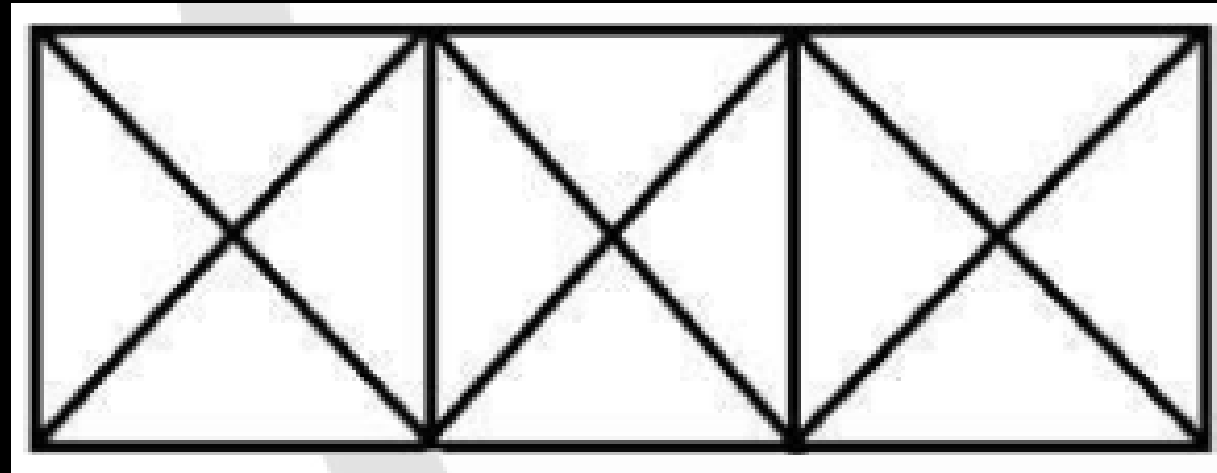
(D) 18





Q.5 How many squares are there in the given figure?

दी गई आकृति में कितने वर्ग हैं?



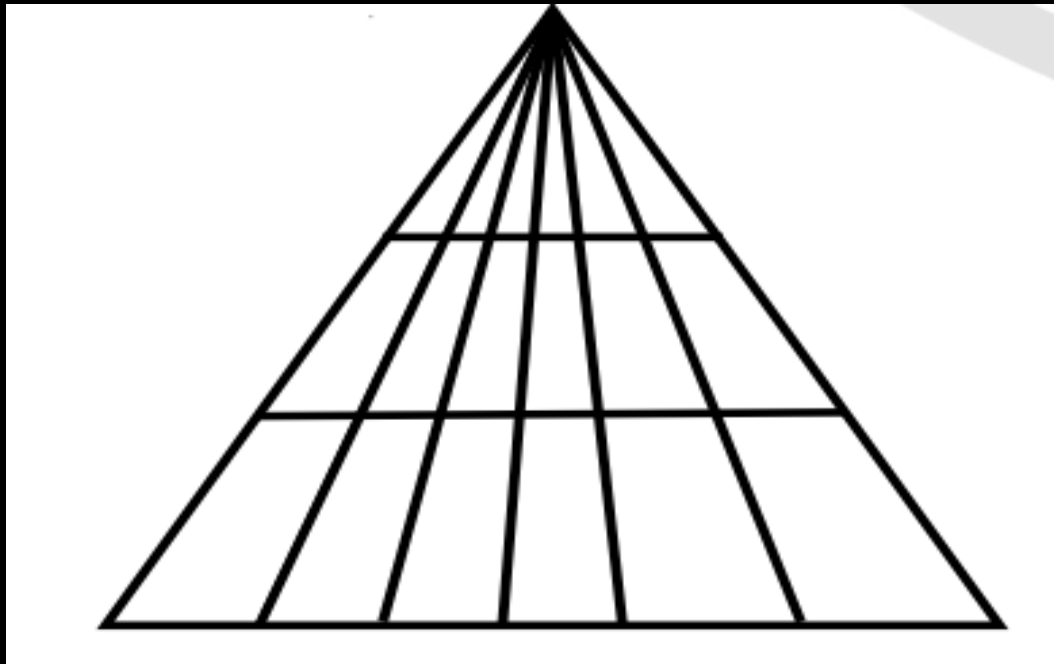
- (A) 6
- (B) 4
- (C) 3
- (D) 5





Q.6 . How many triangles are there in the given figure ?

दी गई आकृति में कितने त्रिभुज हैं?



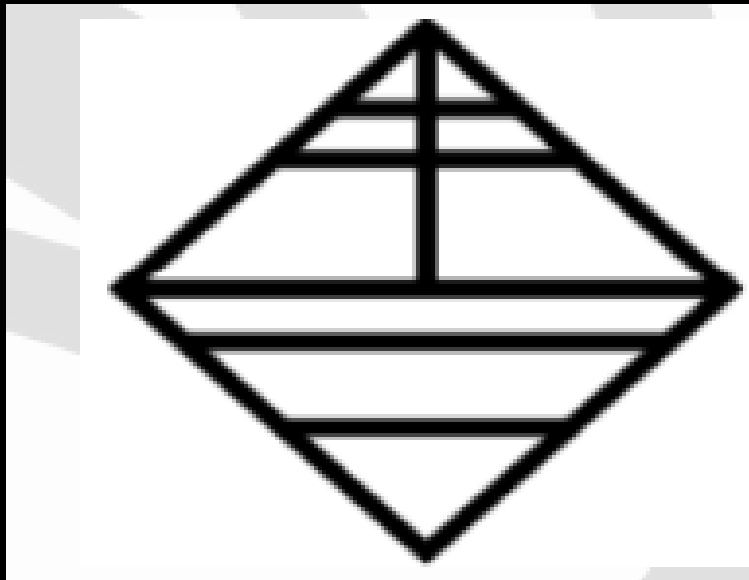
- (A) 60
- (B) 64
- (C) 61
- (D) 63





Q.7. How many triangles are there in the given figure ?

दी गई आकृति में कितने त्रिभुज हैं?



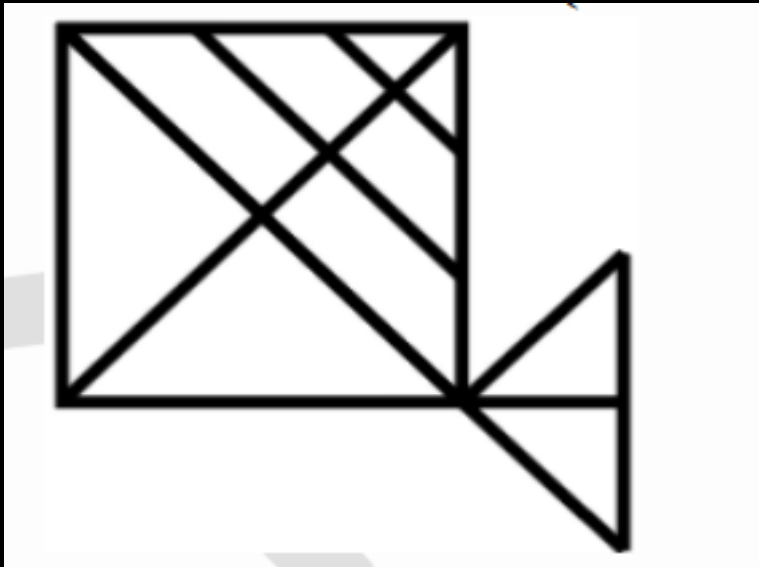
- (A) 11
- (B) 14
- (C) 12
- (D) 13





Q.8. How many triangles are there in the given figure ?

दी गई आकृति में कितने त्रिभुज हैं?



(A) 17

(B) 18

(C) 15

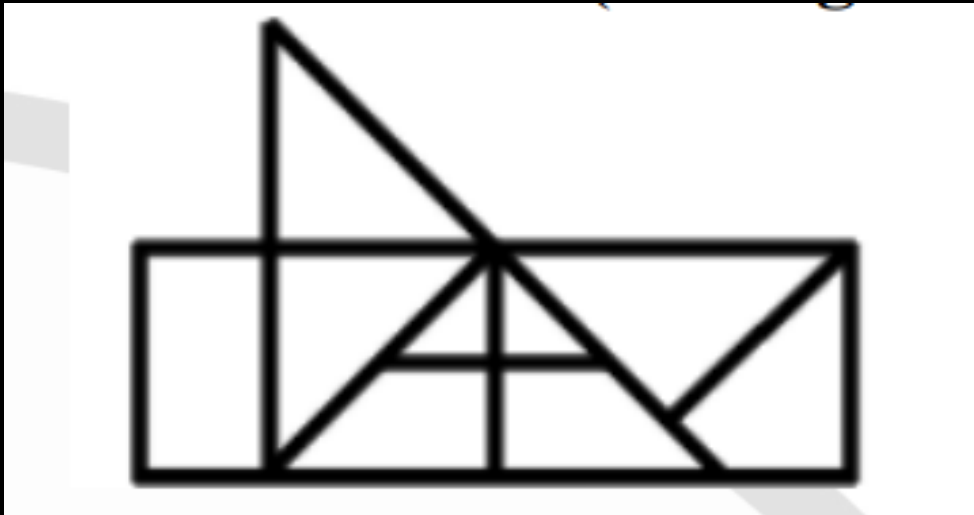
(D) 16





Q.9. How many triangles are there in the given figure ?

दी गई आकृति में कितने त्रिभुज हैं?



(A)10

(B)12

(C)11

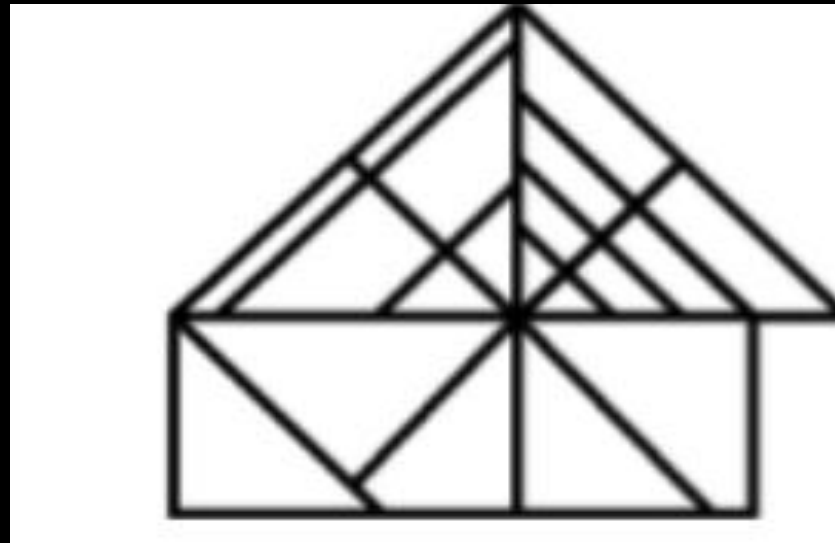
(D)13





Q.10 How many triangles are there in the given figure ?

दी गई आकृति में कितने त्रिभुज हैं?




- (A) 27
- (B) 26
- (C) 24
- (D) 25





Q.11. How many triangles are there in the given figure ?

दी गई आकृति में कितने त्रिभुज हैं?



(A)27

(B)26

(C)20

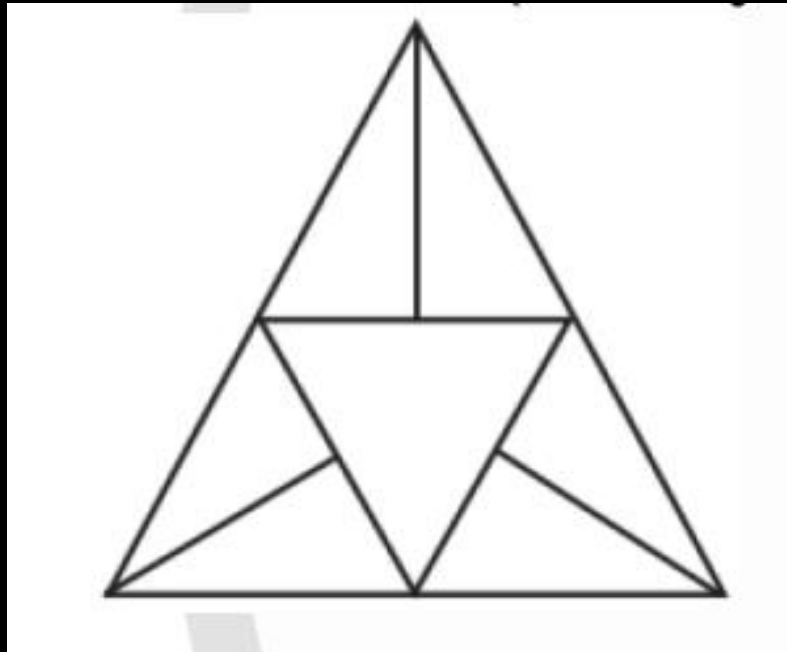
(D)24





Q.12. How many triangles are there in the given figure ?

दी गई आकृति में कितने त्रिभुज हैं?



(A)10

(B)11

(C)12

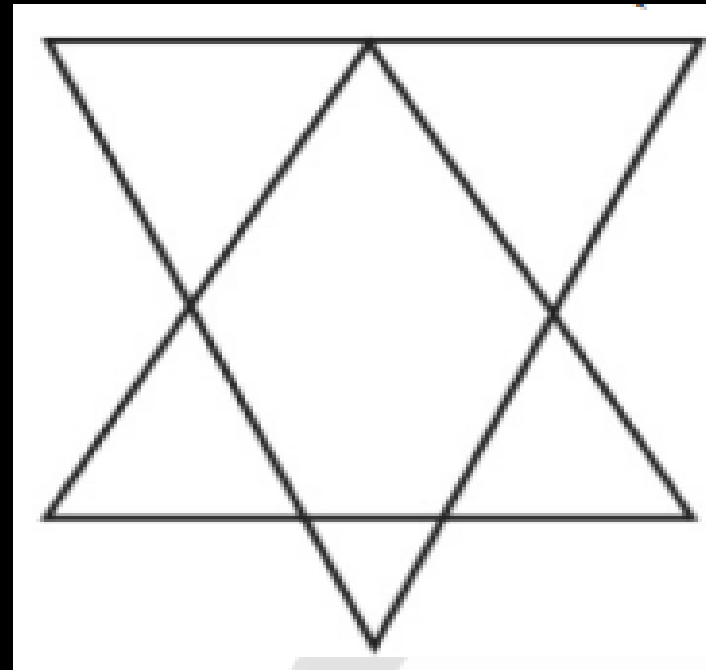
(D)14





Q.13 How many triangles are there in the given figure ?

दी गई आकृति में कितने त्रिभुज हैं?



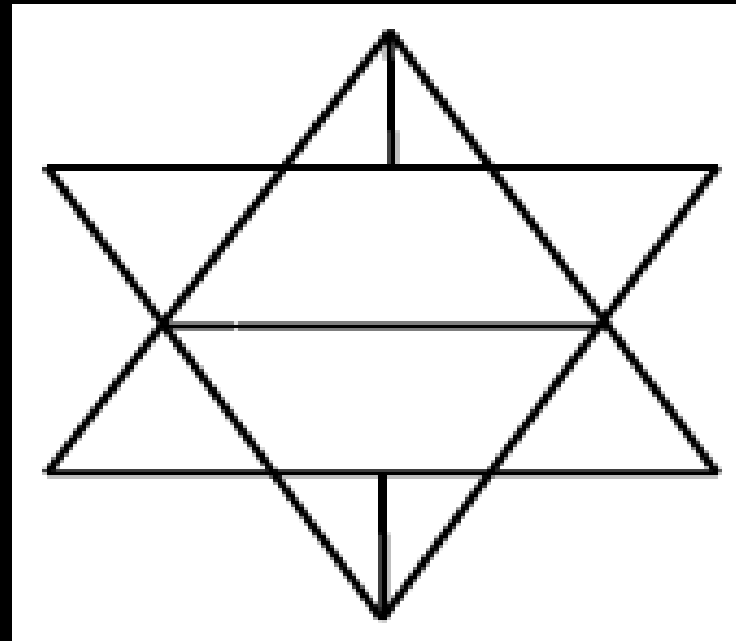
- (A)6
- (B)7
- (C)8
- (D)10





Q.14 How many triangles are there in the given figure ?

दी गई आकृति में कितने त्रिभुज हैं?



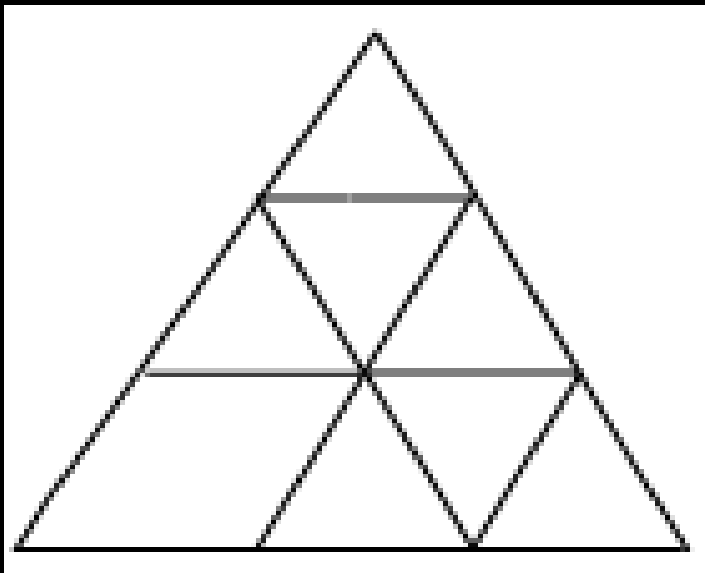
- (A) 10
- (B) 12
- (C) 14
- (D) 16





Q.15 How many triangles are there in the given figure ?

दी गई आकृति में कितने त्रिभुज हैं?



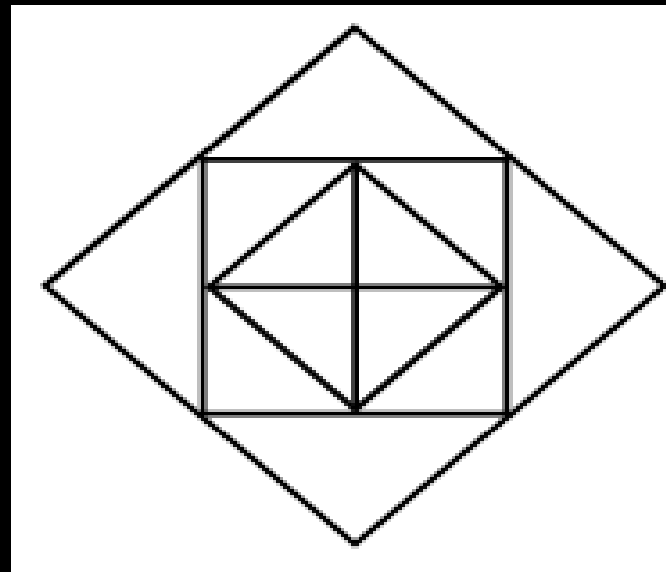
- a) 12
- b) 11
- c) 10
- d) 15





Q.16 How many triangles are there in the given figure ?

दी गई आकृति में कितने त्रिभुज हैं?




- a) 12
- b) 16
- c) 9
- d) 8





Q.17 How many triangles are there in the given figure ?

दी गई आकृति में कितने त्रिभुज हैं?



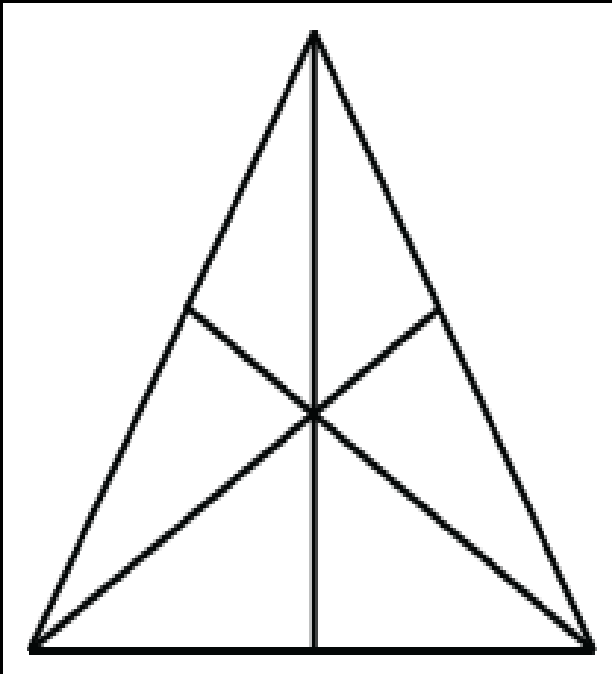
- a) 12
- b) 16
- c) 18
- d) 20





Q.18 How many triangles are there in the given figure ?

दी गई आकृति में कितने त्रिभुज हैं?



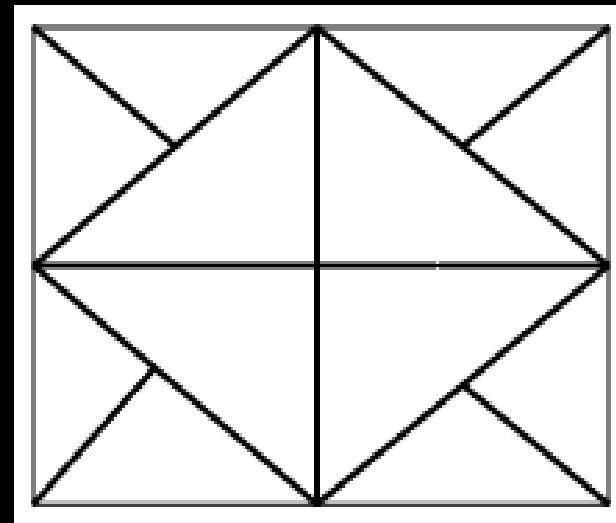
- a) 6
- b) 10
- c) 12
- d) 16





Q.19 How many triangles are there in the given figure ?

दी गई आकृति में कितने त्रिभुज हैं?



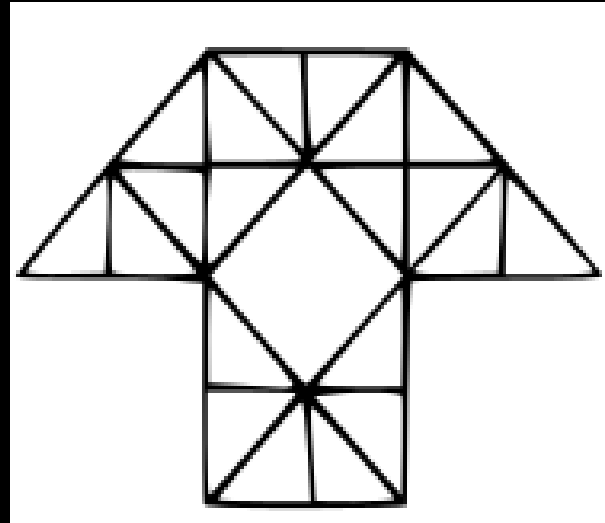
- a) 12
- b) 16
- c) 10
- d) 20





Q.20 How many triangles are there in the given figure ?

दी गई आकृति में कितने त्रिभुज हैं?



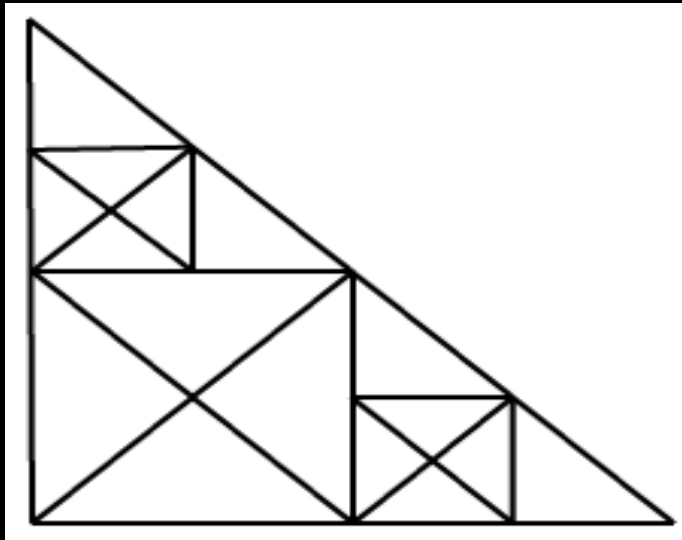
- a) 29
- b) 38
- c) 40
- d) 35





Q.21 How many triangles are there in the given figure ?

दी गई आकृति में कितने त्रिभुज हैं?



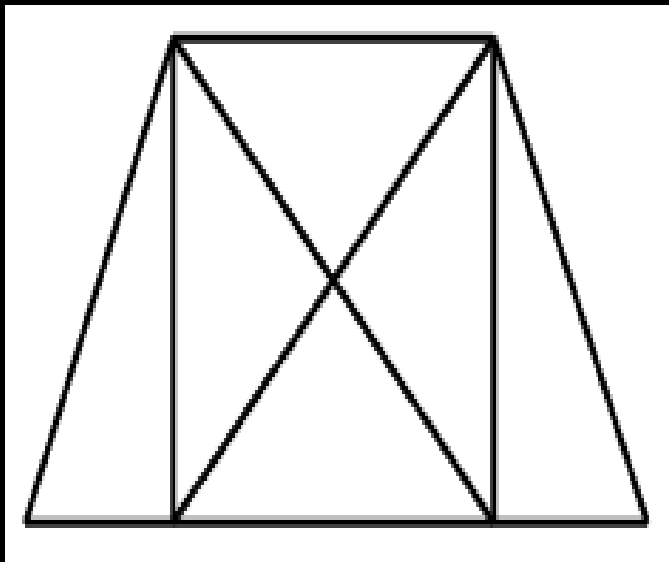
- a) 32
- b) 34
- c) 37
- d) 40





Q.22 How many triangles are there in the given figure ?

दी गई आकृति में कितने त्रिभुज हैं?



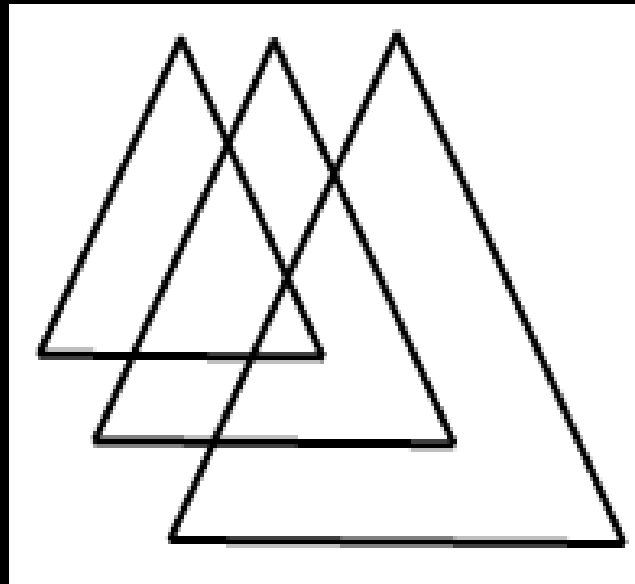
- a) 8
- b) 10
- c) 12
- d) 14





Q. 23 How many triangles are there in the given figure ?

दी गई आकृति में कितने त्रिभुज हैं?



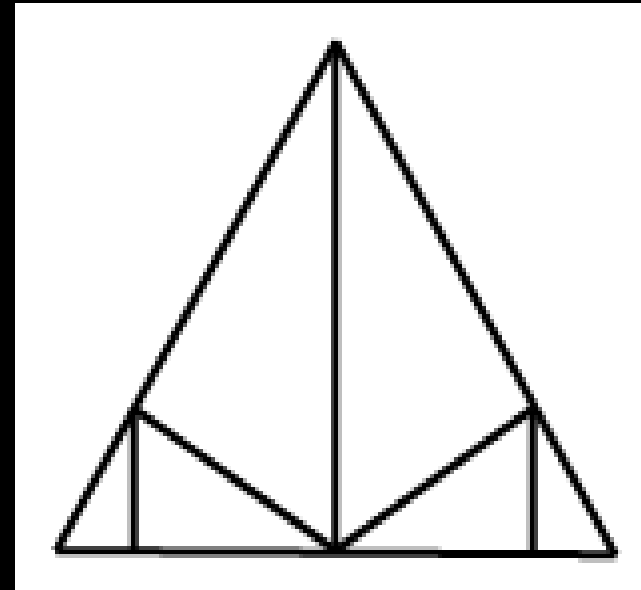
- a) 4
- b) 5
- c) 6
- d) 7





Q.24 How many triangles are there in the given figure ?

दी गई आकृति में कितने त्रिभुज हैं?



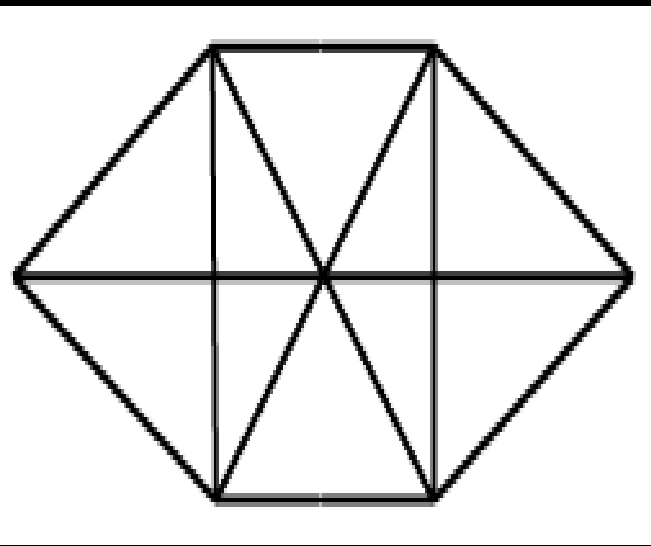
- a) 10
- b) 11
- c) 12
- d) 13





Q.25 How many triangles are there in the given figure ?

दी गई आकृति में कितने त्रिभुज हैं?



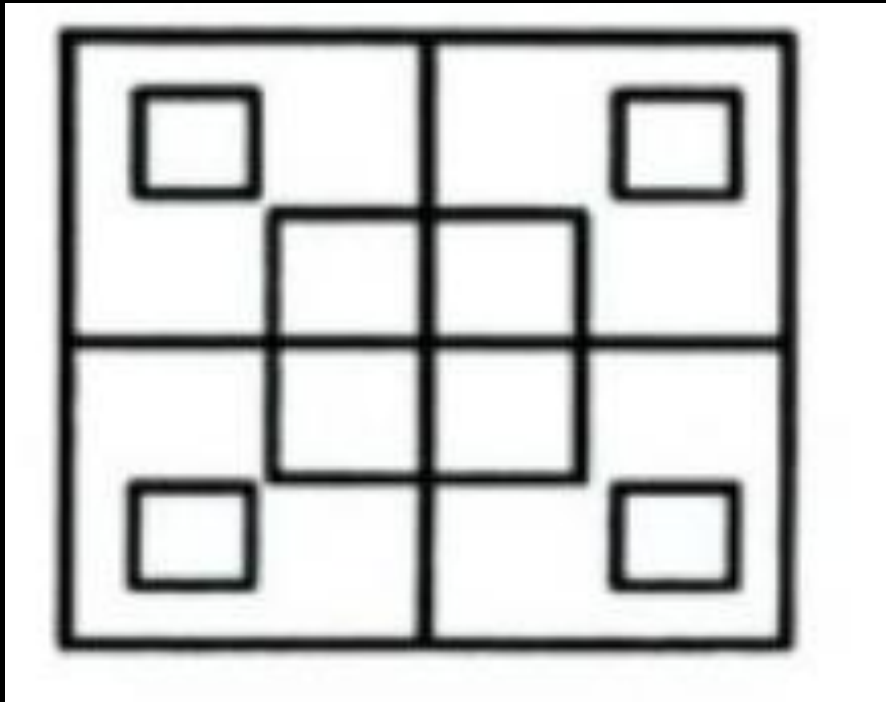
- a) 16
- b) 20
- c) 22
- d) 24





Q.26 How many squares are there in this figure?

इस आकृति में कितने वर्ग हैं?



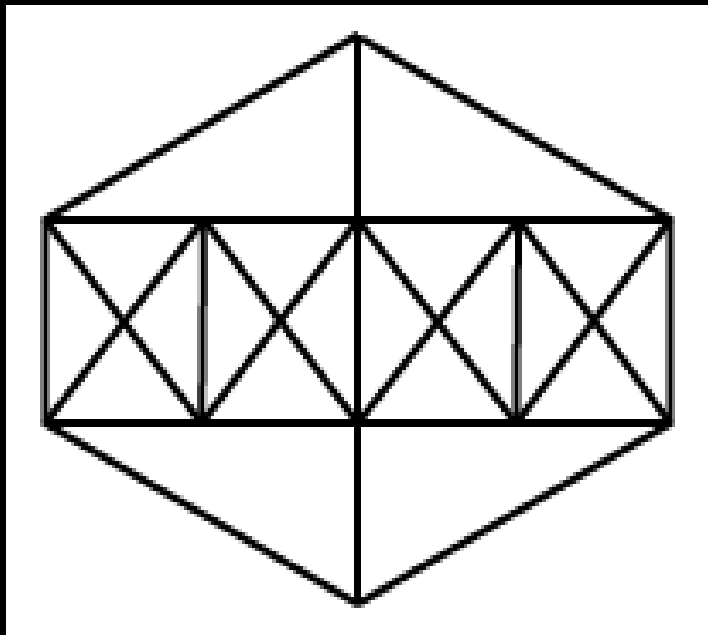
- (A) 12
- (B) 14
- (C) 16
- (D) 18





Q. 27 How many triangles are there in this figure?

इस आकृति में कितने त्रिभुज हैं?



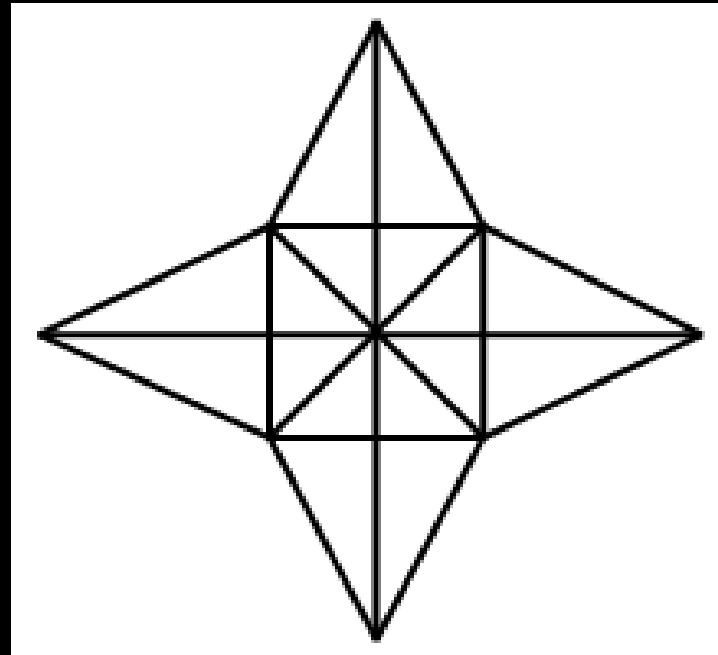
- (A)38
- (B)44
- (C)46
- (D)54





Q.27 How many triangles are there in this figure?

इस आकृति में कितने त्रिभुज हैं?



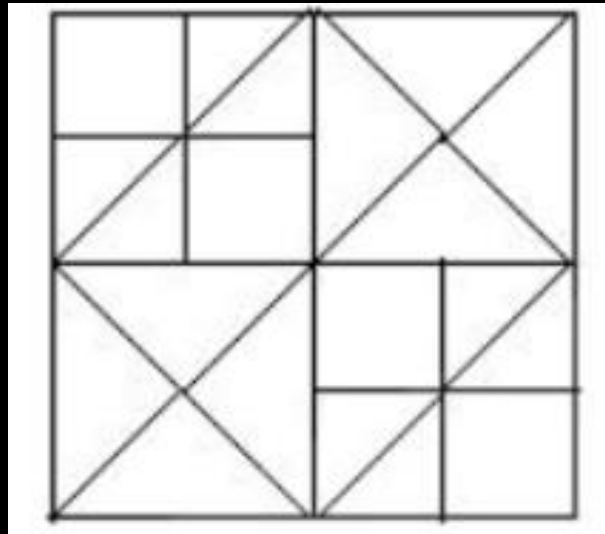
- (A) 28
- (B) 36
- (C) 40
- (D) 48





Q. 28 How many squares are there in this figure?

इस आकृति में कितने वर्ग हैं?



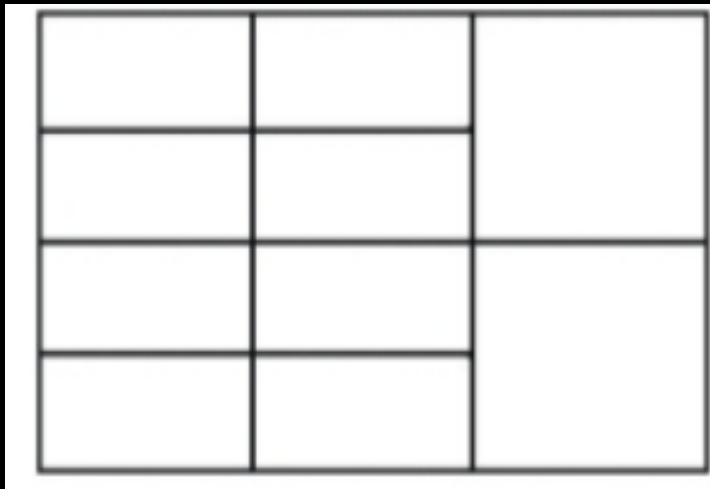
- (A) 12
- (B) 16
- (C) 13
- (D) 14





Q. 29 How many rectangles are there in this figure?

इस आकृति में कितने आयत हैं?



(A)20

(B)22

(C)27

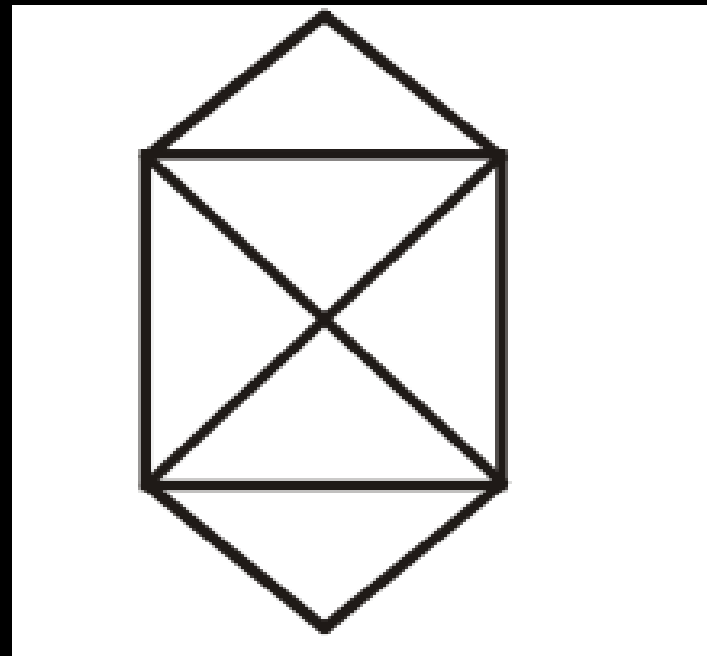
(D)29





Q.30 How many triangles are there in the given figure?

दी गई आकृति में कितने त्रिभुज हैं?



- (A) 6
- (B) 8
- (C) 10
- (D) 12



Join my

TELEGRAM GROUP



@reasoningbymohitsir



Daily PDF of all YT sessions



Discussion / Doubt Solving



Direct Interaction with me



Quiz



Polls





SSC GD 2023 (सफलता का महामंत्र)



THANK YOU