



 Mahendra's

FOR MORE DISCOUNT VISIT www.mahendras.org & USE PROMO CODE : E04613



Mahendra's



RBI ASSISTANT 2021-22

MATHS

35 / 35

**TOP 30 MOST
EXPECTED PAPERS**

LIVE

PAPER-12 09:00 AM



Class Time :- 9:00 AM



UPCOMING ONLINE BATCHES

March 2022

02 March 2022

05:30 PM to 07:30 PM

BANK ONLINE LIVE CLASS

01:00 PM to 03:00 PM

SSC ONLINE LIVE CLASS

BILINGUAL

09 March 2022

10:30 AM to 12:30 PM

BANK ONLINE LIVE CLASS

03:00 PM to 05:00 PM

BANK ONLINE LIVE CLASS

05:30 PM to 07:30 PM

SSC ONLINE LIVE CLASS

BILINGUAL

16 March 2022

01:00 PM to 03:00 PM

BANK ONLINE LIVE CLASS

08:00 AM to 10:00 AM

BANK ONLINE LIVE CLASS

07:30 PM to 09:30 PM

SSC ONLINE LIVE CLASS

03:00 PM to 05:00 PM

SSC ONLINE LIVE CLASS

BILINGUAL

23 March 2022

10:30 AM to 12:30 PM

BANK ONLINE LIVE CLASS

08:00 AM to 10:00 AM

SSC ONLINE LIVE CLASS

01:00 PM to 03:00 PM

SSC ONLINE LIVE CLASS

BILINGUAL

30 March 2022

08:00 AM to 10:00 AM

BANK ONLINE LIVE CLASS

05:30 PM to 07:30 PM

BANK ONLINE LIVE CLASS

10:30 AM to 12:30 PM

SSC ONLINE LIVE CLASS

BILINGUAL

07:30 PM to 09:30 PM

BANK ONLINE LIVE CLASS

(BANK PO & CLERK)

ENGLISH MEDIUM



Mohit.. 22 hours ago (edited)

Thank-you Sir Ji for today's Nice Session..👏😊

And

My answers for today's homework are like-

34. Option D- 2015...

Read more

👍 🗨️ REPLY

▼ [View reply from Mahendras : Online Videos For C](#)



Sonam Pundir 14 hours ago

Hw 34 (B) 2011

35 (c) 3583

Thank you for today's session sir 😊

👍 🗨️ REPLY

▼ [View reply from Mahendras : Online Videos For C](#)



Sakshi Gaur 11 hours ago

Homework answer is

34)2015 option D

35)3583 option C

Thank you so much sir today amazing session 👏👏😊😊

👍 🗨️ REPLY



jagruti herambha 22 hours ago

Homework ans

(B) 2011

(C) 3583

Thank you so much sir 👏😊

👍 🗨️ REPLY

▼ [View reply from Mahendras : Onlin](#)



Palak Shukla 19 hours ago

Homework answer---

34) 2015 , Option D

35) 3583, Option C

Thankyou sir 👏😊😊

👍 1 🗨️ REPLY

▼ [View reply from Mahendras : Onlin](#)



AAYUSH SRIVASTAVA 19 hours ago

HOMEWORK QUESTIONS- Q1- (E): 2015

Q2- (C): 3583

👍 🗨️ REPLY

▼ [View reply from Mahendras : Online](#)



Khushboo Mandal 22 hours ago

homework ans., 34. decrease - 2011 , increase - 2015

35. $21500/6 = 3583.33 \sim 3583$

thank you sir

👍 🗨️ REPLY

▼ [View reply from Mahendras : Online Videos For](#)



Dron patodia 11 hours ago

Homework question ans.

1.Decrease 2011

2.3583

👍 🗨️ REPLY

▼ [View reply from Mahendras : Online Videos For](#)



shubhangi mishra 14 hours ago

H w ans. 1 2015

Ans 2 3583

Thank you sir.

👍 🗨️ REPLY

▼ [View reply from Mahendras : Online Videos For](#)



Rahul Kumar Upadhyay 18 hours ago

Today class is booster class

Today my solution is

34. Option no Eeeeeee

35 option no ccccccc ...

Read more

👍 🗨️ REPLY

▼ [View reply from Mahendras :](#)



Joy dip 22 hours ago

34. D 2014

35. C 3583

👍 🗨️ REPLY

▼ [View reply from Mahendras :](#)



Prakash Dwivedi 15 hours ago

Ans- 2015 &

3583

👍 🗨️ REPLY

▼ [View reply from Mahendras :](#)



ROHIT GOND 22 hours ago

2011

3583.3

👍 🗨️ REPLY

▼ [View reply from Mahendras :](#)

What value should come in the place of question mark(?)in the following questions?

$$(55)^2 + (65)^2 + (75)^2 = ?$$

(A)12675

(B)12775

(C)12551

(D)12578

(E)None of these



What value should come in the place of question mark(?)in the following questions?

$$101 \times 21 \div 2121 \times 5 = ?$$

- (A)2 (B)9 (C)5 (D)8 (E)None of these**



What value should come in the place of question mark(?)in the following questions?

$$(37 \times 33) \div 3 \text{ of } 11 + 193 =$$

(A)177

(B)198

(C)120

(D)230

(E)None of these



What value should come in the place of question mark(?)in the following questions?

$$54 \times 54 \times 54 \div 9 \div 9 \div 9 = ?^3$$

(A)9×9

(B)6

(C)54

(D)9

(E)None of these



What value should come in the place of question mark(?)in the following questions?

$$0.0004 \div 0.0001 \times 36.0009 = ?$$

- (A)0.1 (B)1.45 (C)1.44 (D)14.5 (E) 1450**



What value should come in the place of question mark(?)in the following questions?

$$12\% \text{ of } 15\% \text{ of } 40\% \text{ of } 37500 = ?$$

- (A)296 (B)270 (C)264 (D)282 (E)None of these**



What value should come in the place of question mark(?) in the following questions?

$$3015 + 164 - 1361 = ? + 1041$$

(A)686

(B)707

(C)737

(D)777

(E)789



0:30

What value should come in the place of question mark(?)in the following questions?

$$14 \times 632 \div 16 - 15 = ?$$

(A)512

(B)526

(C)531

(D)538

(E)544



0:30

What value should come in the place of question mark(?) in the following questions?

$$1541 + 7067 - 1204 = ? \times 400$$

(A) 15.23

(B) 17.08

(C) 18.51

(D) 20.04

(E) 22.21



0:30

The respective ratio of seats for Maths , physics and biology is 5 :7 : 8 . It is proposed to increase 40% , 50 % and 75% respectively. What is the respective ratio of increased seats?
गणित, भौतिकी और जीव विज्ञान के लिए सीटों का संबंधित अनुपात 5:7:8 है। इसमें क्रमशः 40%, 50% और 75% की वृद्धि करने का प्रस्ताव है। बड़ी हुई सीटों का संबंधित अनुपात क्या है?

(A)2:3:4

(B)6:7:8

(C)6:8:9

(D)cannot be determine

(E)None of these

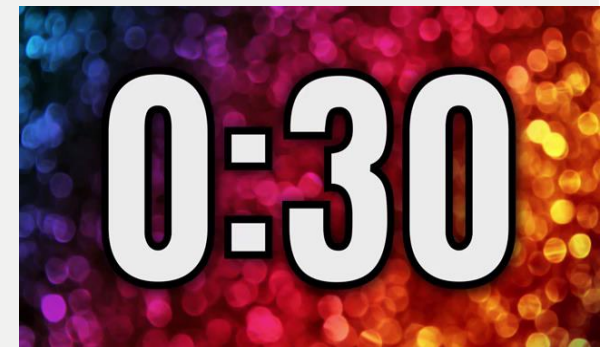


0:30

Savita got average 68 marks in 5 subjects. Her average marks in four subject except science was 72. How much marks did set get in science ?

सविता ने 5 विषयों में औसतन 68 अंक प्राप्त किए। विज्ञान को छोड़कर चार विषयों में उसके औसत अंक 72 थे। विज्ञान में सेट ने कितने अंक प्राप्त किए?

- (A)52 (B)60 (C)72 (D)cannot determined (E) None of these**



If a amount of Rs 436563 is distributed equally amongst 69 persons then how much amount would each person get ?

यदि 436563 रुपये की राशि को 69 व्यक्तियों के बीच समान रूप से वितरित किया जाता है, तो प्रत्येक व्यक्ति को कितनी राशि प्राप्त होगी?

(A)Rs. 6437

(B)Rs. 6327

(C)Rs.6817

(D)Rs.6697

(E)Rs. 6723



0:30

In a school the number of total students is 2025. The number of girls in the school is 1175 .
Then what is the ratio of number of boys and girls in the school ?

एक स्कूल में कुल छात्रों की संख्या 2025 है। स्कूल में लड़कियों की संख्या 1175 है। तो स्कूल में लड़कों और लड़कियों की संख्या का अनुपात क्या है?

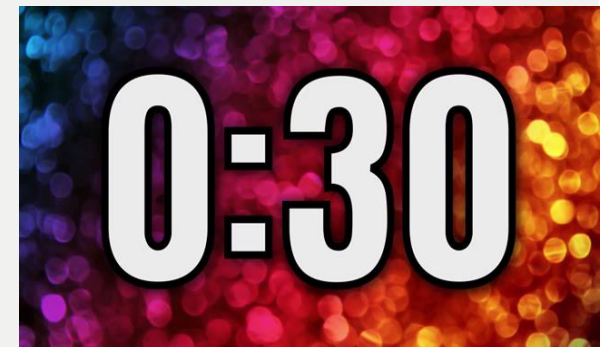
(A)47:34

(B)17:23

(C)23:17

(D)34:47

(E)47:33



A 400 m. long train crosses a pole in 12 seconds. What is the speed of that train (in km/hr) ?

A 400 मी. लंबी रेलगाड़ी एक खम्भे को 12 सेकंड में पार करती है। उस ट्रेन की गति (किमी/घंटा में) क्या है?

(A)180

(B)160

(C)120

(D)110

(E)130



0:30

The simple interest on a certain sum at the rate of interest of 9% per annum after 5 years is Rs. 4016.25. what is the sum ?

एक निश्चित राशि पर 9% प्रतिवर्ष की दर से 5 वर्ष बाद साधारण ब्याज रु. 4016.25. राशि क्या है?

(A)Rs.8925


(B)Rs. 8032.50

(C) Rs. 4462.50

(D)Rs. 8900

(E) None of these

0:30



Maniklal gave 40% of his amount to his wife and distributed the remaining amount equally to his three sons. If each son got Rs. 6500, how much amount did maniklal have ?

माणिकलाल ने अपनी राशि का 40% अपनी पत्नी को दिया और शेष राशि को अपने तीन बेटों को समान रूप से वितरित कर दिया। यदि प्रत्येक पुत्र को रु. 6500, मानिकलाल के पास कितनी राशि थी?

- (A)Rs.32500 (B)Rs. 19500 (C) Rs. 22500 (D)cannot be determine (E) None of these

0:30

In a class of 84 students, each student got toffee that are 25% of the total number of students.
How many toffees were there ?

**84 छात्रों की एक कक्षा में, प्रत्येक छात्र को टॉफी मिली जो कुल छात्रों की संख्या का 25% है।
कितनी टॉफियां थीं?**

(A)1764


(B)1784

(C)1936

(D)1696

(E)1794

0:30



Directions (Q. 26-30): Read the following information carefully to answer the questions asked – Given the chart shows the production of computer produced by 5 different companies (A, B, C, D, E) and also shows the export percentage of computer by these companies. पूछे गए प्रश्नों के उत्तर देने के लिए निम्नलिखित जानकारी को ध्यानपूर्वक पढ़ें - दिया गया चार्ट 5 विभिन्न कंपनियों (ए, बी, सी, डी, ई) द्वारा उत्पादित कंप्यूटर के उत्पादन को दर्शाता है और इन कंपनियों द्वारा कंप्यूटर के निर्यात प्रतिशत को भी दर्शाता है।

COMPANY	Production of computers	Percentage Export
A	24500	25%
B	35600	30%
C	26700	45%
D	34900	28%
E	37600	39%

Q.26 :- Find the number of remaining computers in warehouse of company – B if sell the 20% of remaining after export .

कंपनी-बी के गोदाम में शेष कंप्यूटरों की संख्या ज्ञात कीजिए, यदि निर्यात के बाद शेष का 20% बेचा जाता है।

(A)15852

(B)19936

(C)21290

(D)17820

(E)None of these

0:30

COMPANY	Production of computers	Percentage Export
A	24500	25%
B	35600	30%
C	26700	45%
D	34900	28%
E	37600	39%

Q.27 :- What is the difference of the number of computer exported by company –E and the number of computer not exported by company –C ?

कंपनी-ई द्वारा निर्यात किए गए कंप्यूटर की संख्या और कंपनी-सी द्वारा निर्यात नहीं किए गए कंप्यूटरों की संख्या का अंतर कितना है?

(A)12890

(B)14685

(C)15220

(D)16880

(E)None of these

0:30

COMPANY	Production of computers	Percentage Export
A	24500	25%
B	35600	30%
C	26700	45%
D	34900	28%
E	37600	39%

Q.28 :- What is the average export of all companies ?

सभी कंपनियों का औसत निर्यात क्या है?

(A) 10651.2

(B) 8432.5

(C) 13920

(D) 11212.8

(E) None of these

0:30

COMPANY	Production of computers	Percentage Export
A	24500	25%
B	35600	30%
C	26700	45%
D	34900	28%
E	37600	39%

Q.29 :- The export of computer of company – B and company- C is approximately what percent less/ more than the number of computers not exported by company- D? (approx)
कंपनी-B और कंपनी-C के कंप्यूटर का निर्यात कंपनी-D द्वारा निर्यात न किए गए कंप्यूटरों की संख्या से लगभग कितने प्रतिशत कम/अधिक है? (लगभग)

- (A) 4 (B) 7 (C) 12 (D) 9 (E) None of these

0:30

COMPANY	Production of computers	Percentage Export
A	24500	25%
B	35600	30%
C	26700	45%
D	34900	28%
E	37600	39%

Q.30 :- Find the average income of all companies together if the income of company – D is 90 crore ?(in crore)

यदि कंपनी - D की आय 90 करोड़ है, तो सभी कंपनियों की एक साथ औसत आय ज्ञात कीजिए? (करोड़ में)

(A) 8420

(B) 9220

(C) 6225

(D) cannot determined

(E) None of these

0:30

COMPANY	Production of computers	Percentage Export
A	24500	25%
B	35600	30%
C	26700	45%
D	34900	28%
E	37600	39%