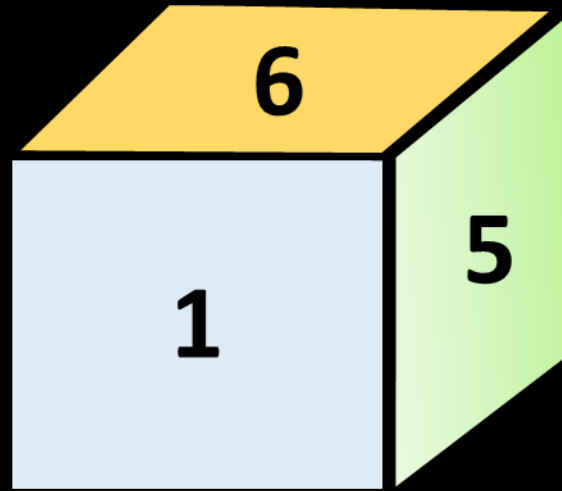
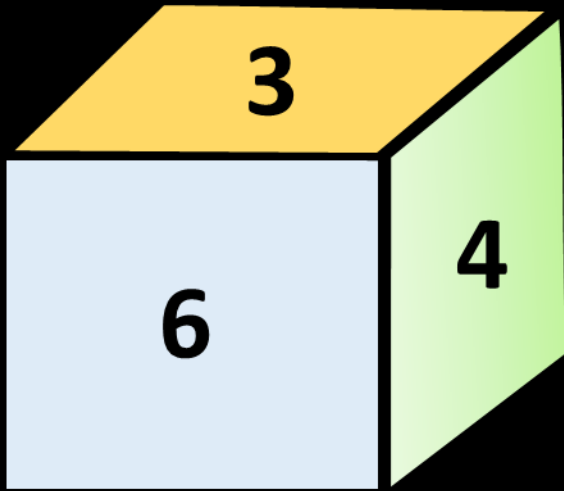


- Two positions of dice are shown. What will appear on the opposite to the face containing 5?

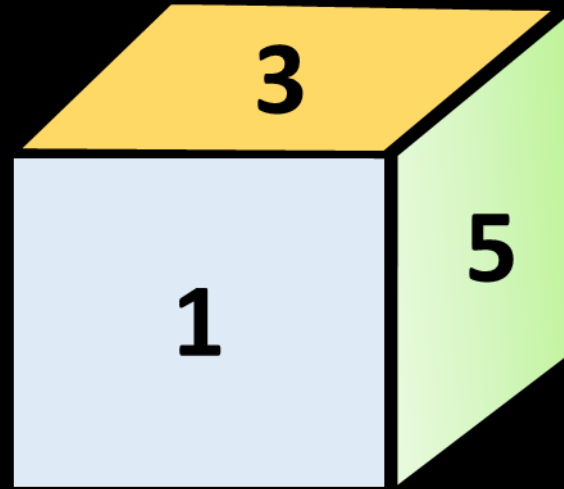
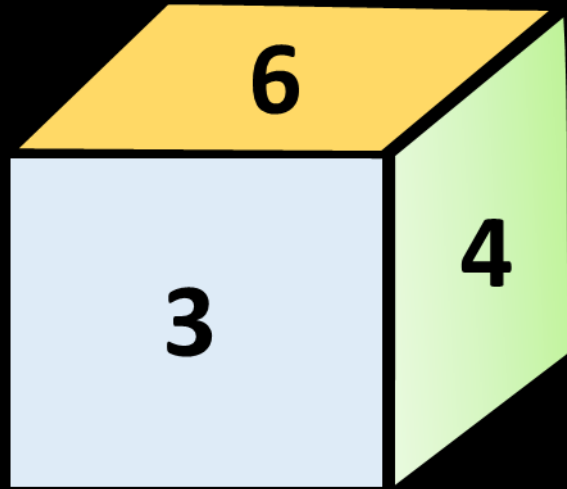
पासे की दो स्थितियाँ दर्शाई गई हैं। 5 वाले फलक के विपरीत क्या दिखाई देगा?



- A. 3
- B. 1
- C. 2
- D. 4

- Two positions of dice are shown. What will appear on the opposite to the face containing 3?

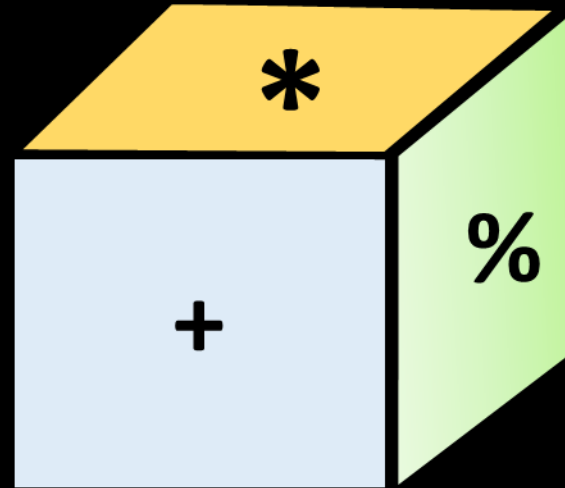
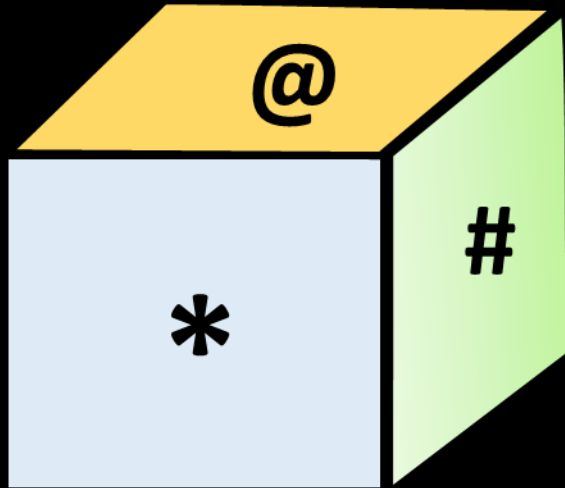
पासे की दो स्थितियाँ दर्शाई गई हैं। 3 वाले फलक के विपरीत क्या दिखाई देगा?



- A. 3
- B. 1
- C. 2
- D. 4

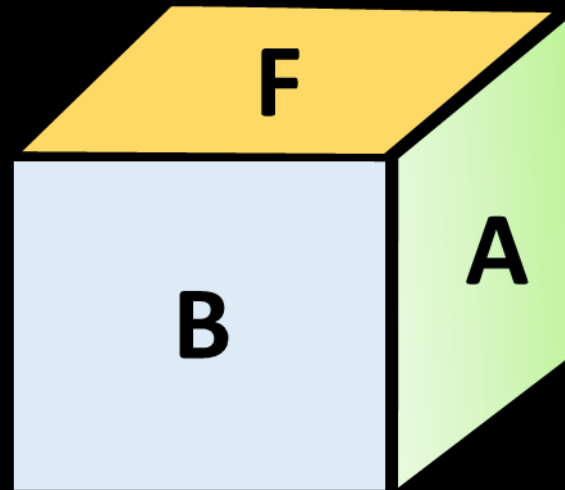
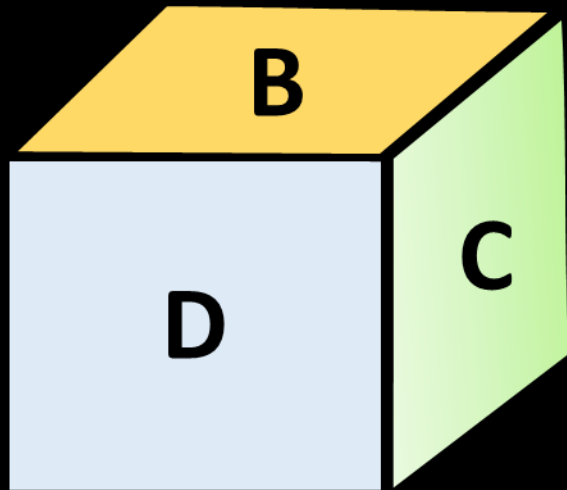
- Two positions of dice are shown. What will appear on the opposite to the face containing * ?

पासे की दो स्थितियाँ दर्शाई गई हैं। वाले चेहरे के विपरीत क्या दिखाई देगा?



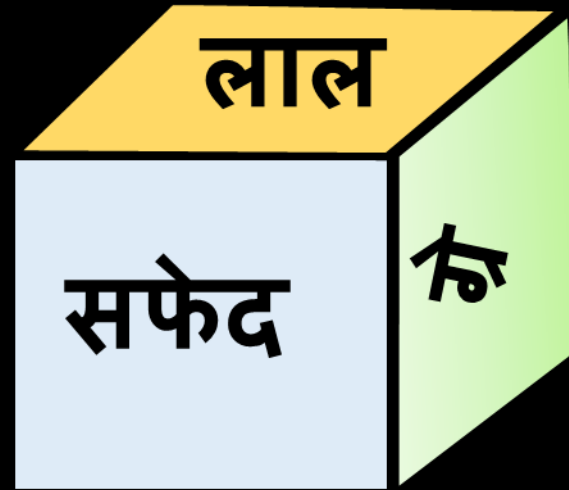
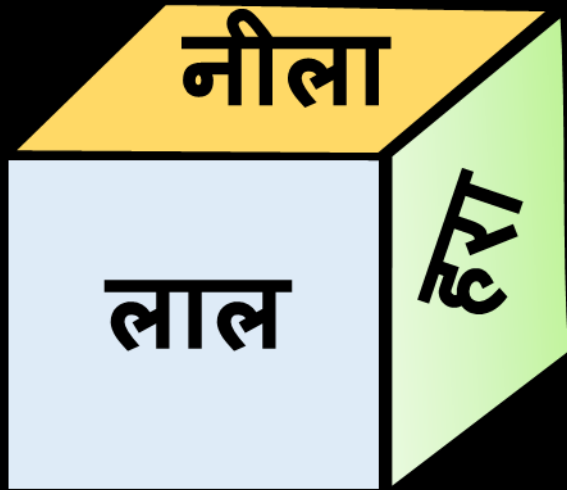
- A. @
- B. %
- C. \$
- D. CND

- Two positions of dice are shown from A to F then find what will be on the opposite side of B?
- पासा की दो स्थितियां A से F तक दिखाई गई है तो ज्ञात कीजिए की B के विपरीत सतह पर क्या होगा?



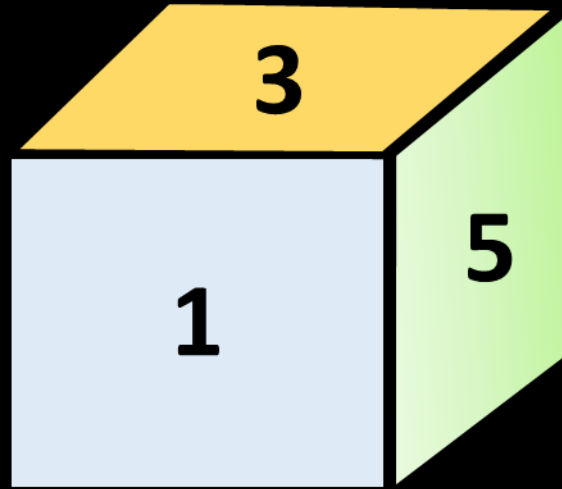
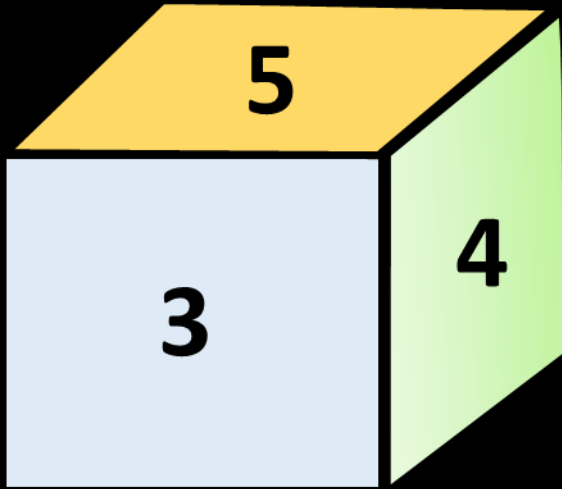
- A. F
- B. C
- C. E
- D. तय नहीं कर सकते

- Two positions of the dice are shown then find out what will happen on the surface opposite to 'brown'?
- पासा की दो स्थितियां दिखाई गई हैं तो ज्ञात कीजिए कि 'भूरा' के विपरीत सतह पर क्या होगा?



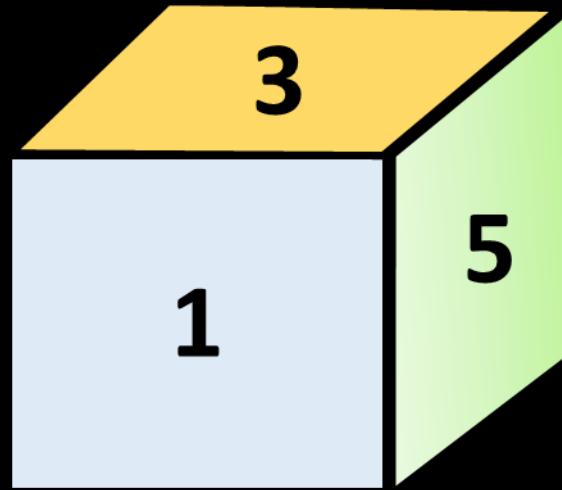
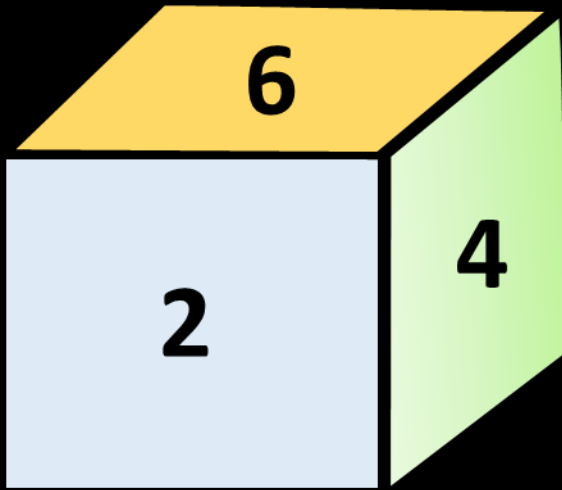
- A. नीला
- B. सफेद
- C. लाल
- D. हरा

- Two positions of dice are shown then find out what will be on the opposite side of 4?
- पासा की दो स्थितियां दिखाई गई हैं तो ज्ञात कीजिए की 4 के विपरीत सतह पर क्या होगा?



- A. 3
- B. 2
- C. 1
- D. 5



- Two positions of dice are shown then find out what will be on the opposite side of 6?
- पासा की दो स्थितियां दिखाई गई हैं तो ज्ञात कीजिए कि 6 के विपरीत सतह पर क्या होगा?




- A. 3
- B. 2
- C. 1
- D. 5

- In each of the following questions, a cube is formed when the figure given on the left hand side is closed. Choose the option made up of options (1), (2), (3) and (4) from the picture?


- निम्नलिखित प्रत्येक प्रश्न में, एक घन बनता है जब बाईं ओर दी गई आकृति को बंद किया जाता है। चित्र में से विकल्प (1), (2), (3) और (4) से बने विकल्प को चुनें?




1



2



3



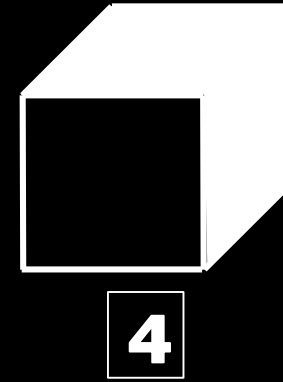
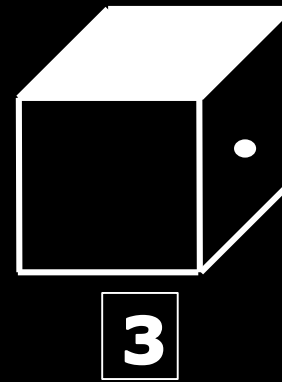
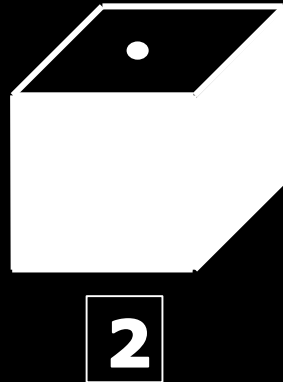
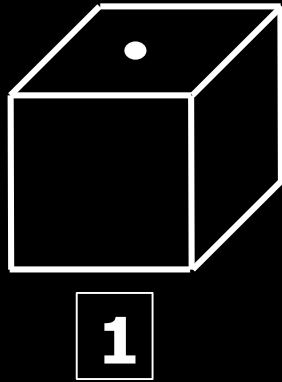

4



- A. 1, 2 and 3 only
- B. 2 and 4 only
- C. 2 and 1 only
- D. 4 only

- In each of the following questions, a cube is formed when the figure given on the left hand side is closed. Choose the option made up of options (1), (2), (3) and (4) from the picture?


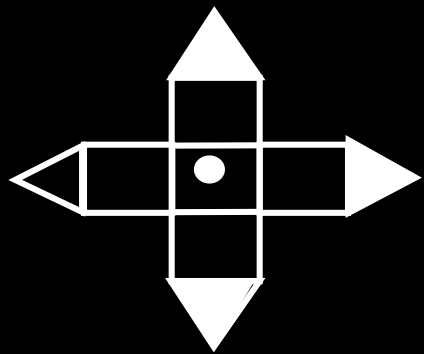
- निम्नलिखित प्रत्येक प्रश्न में, एक घन बनता है जब बाईं ओर दी गई आकृति को बंद किया जाता है। चित्र में से विकल्प (1), (2), (3) और (4) से बने विकल्प को चुनें?




- A. 1, 2 and 3 only
- B. 2 and 4 only
- C. 2 and 1 only
- D. 4 only

• In each of the following questions, a cube is formed when the figure given on the left hand side is closed. Choose the option made up of options (1), (2), (3) and (4) from the picture?

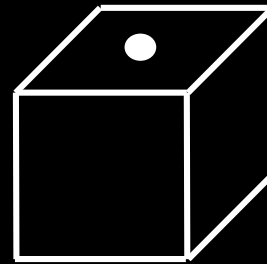
• निम्नलिखित प्रत्येक प्रश्न में, एक घन बनता है जब बाईं ओर दी गई आकृति को बंद किया जाता है। चित्र में से विकल्प (1), (2), (3) और (4) से बने विकल्प को चुनें?




1



2



3



4

A. 1, 2 and 3 only

B. 2 and 4 only

C. 2 and 1 only

D. 4 only

