



Mahendra's



SSC CGL/CPO/CHSL

REASONING

होली स्पेशल



LIVE


07:30 PM



IMAGES

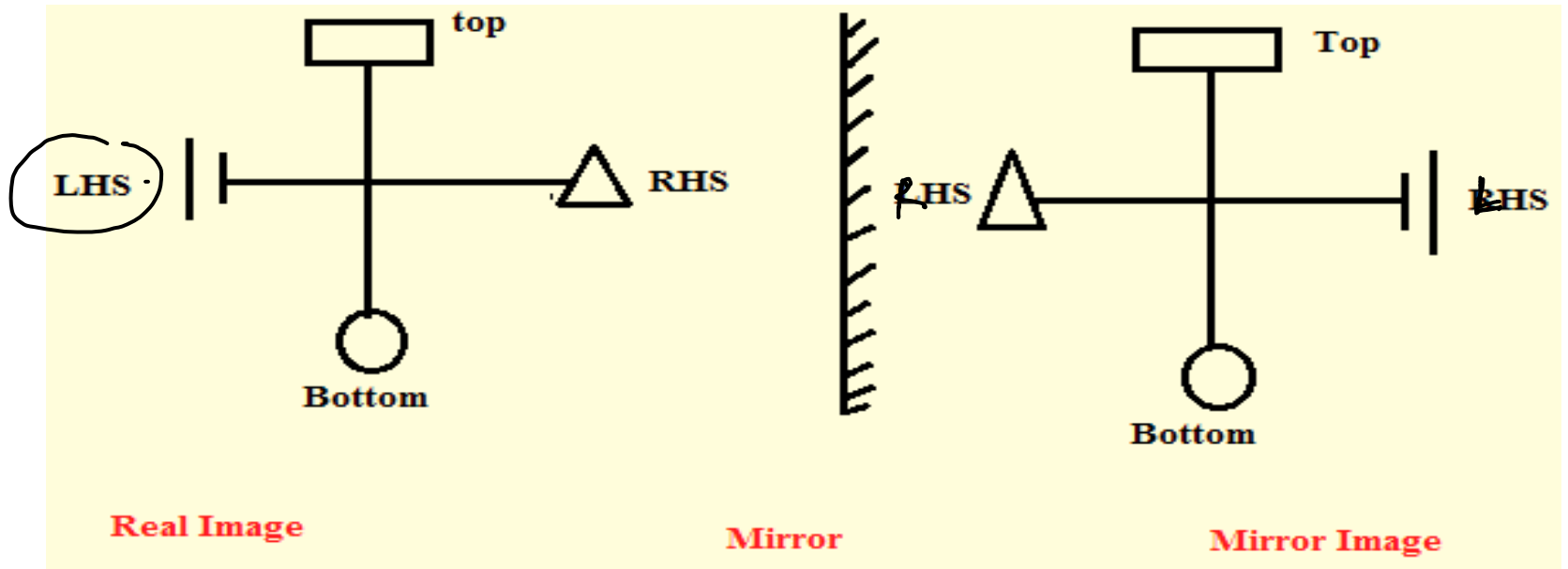


MIRROR
IMAGE



WATER
IMAGE

MIRROR IMAGE



TYPES OF QUESTION

TYPE-1

✓
MIRROR IMAGE IN CLOCK

✓
TYPE-2

✓
**MIRROR IMAGE IN
ALPHABET AND NUMBER**

TYPE-3

✓
**MIRROR IMAGE IN
DIAGRAMS**

MIRROR IMAGE IN CLOCK

KEY POINT TO REMEMBER

**SUBTRACT
FORM**

1:00

13:00

✓
FOR 12 HRS FORMAT

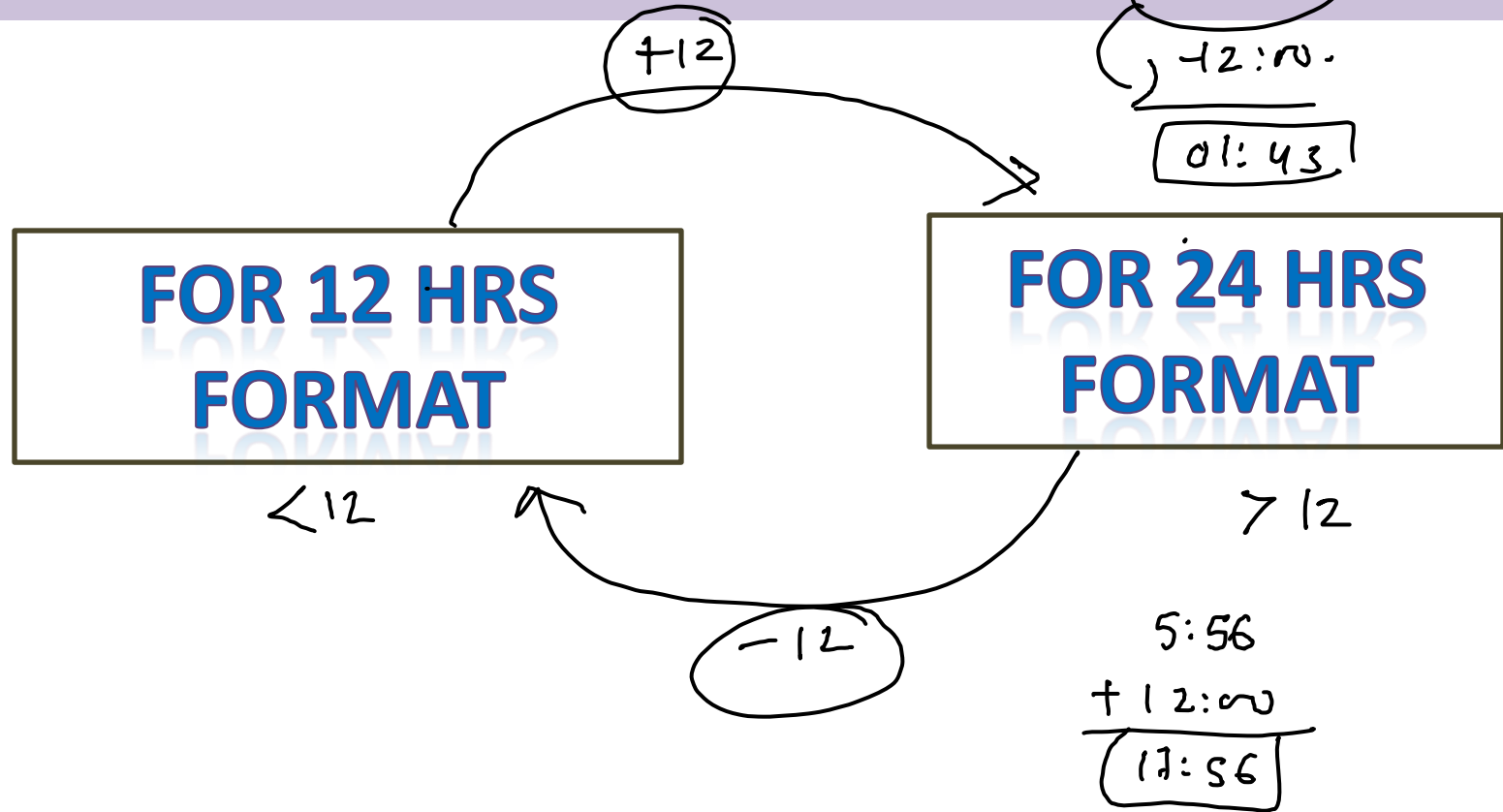
12:00

1300


✓
FOR 24 HRS FORMAT

24:00

MIRROR IMAGE IN CLOCK



MIRROR IMAGE IN CLOCK



$$\begin{array}{r} 12:00 \\ - 10:00 \\ \hline 2:00 \end{array}$$

A vertical line with 11 horizontal tick marks of varying lengths, resembling a ruler or a scale. The tick marks are evenly spaced along the line.



Q1. Looking into a mirror, the clock shows 9 : 30 as the time. The actual time is _____ शीशे में देखने पर घड़ी 9:30 को समय बताती है। वास्तविक समय _____ है

9:30 →

$$\begin{array}{r}
 \boxed{12:00} \rightarrow 11:60 \\
 - 9:30 \\
 \hline
 \end{array}
 \qquad
 \begin{array}{r}
 11:60 \\
 - 9:30 \\
 \hline
 2:30
 \end{array}$$

1 hrs = 60

12:00

11:60

$$\boxed{12:00 = 11:60 = 10:120} \\
 = 9:180$$

- A. 2 : 30
- B. 3 : 30
- C. 4 : 30
- D. 6 : 30

Q2. When seen through a mirror, a clock shows 8 : 47. The correct time is _____

जब एक दर्पण के माध्यम से देखा जाता है, तो एक घड़ी 8:47 दिखाती है। सही समय _____ है

$$\begin{array}{r} 11:60 \\ - 8:47 \\ \hline 3:13 \end{array}$$

A. 2 : 23

B. 3 : 13

C. 3 : 23

D. 3 : 41

Q3. When seen through a mirror, a clock shows 18 :49 . The correct time is _____

7/2

जब एक दर्पण के माध्यम से देखा जाता है, तो एक घड़ी 18:49 दिखाती है। सही समय _____ है

18:49

11:60
18:49

24:00
23:60
- 18:49

5:11

m1

18:49
- 12:00

6:49

11:60
6:49

5:11

m2

- A. 5 : 13
- B. 3 : 11
- C. 5 : 23
- D. 5 : 11

Q4. When seen through a mirror, a clock shows 21 : 45. The correct time is _____

जब एक दर्पण के माध्यम से देखा जाता है, तो एक घड़ी 21:45 दिखाती है। सही समय _____ है

$$\begin{array}{r} 23:60 \\ - 21:45 \\ \hline 2:15 \\ + 12:00 \\ \hline 14:15 \\ \hline \end{array}$$

- A. 2 : 23
- B. 2 : 14
- C. 14 : 15
- D. 15 : 41

Q5. When seen through a mirror, a clock shows 21 : 45. The correct time is _____

जब एक दर्पण के माध्यम से देखा जाता है, तो एक घड़ी 21:45 दिखाती है। सही समय _____ है

A. 2 : 23

B. 2 : 14

C. 14 : 15

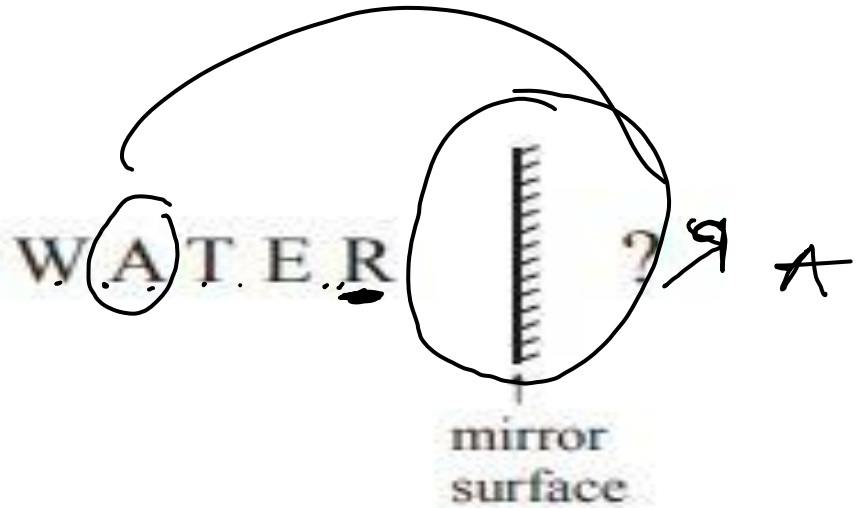
D. 15 : 41

MIRROR IMAGE IN ALPHABET

AI

		MIRROR IMAGE		MIRROR IMAGE	
Digits		Alphabet (Big)		Alphabet (Small)	
0	0	A	A ✓	a	a
1	1	B	B	b	d
2	2	C	C	c	c
3	3	D	D	d	b
4	4	E	E	e	e
5	2	F	F	f	f
6	9	G	G	g	h
8	8	H	H	h	h
9	6	I	I	i	i
		J	L	j	k
		K	K	k	k
		L	J	l	l
		M	M	m	m
		N	N	n	n
		O	O ✓	o	o
		P	P	p	q
		Q	Q	q	p
		R	R	r	r
		S	Z	s	z
		T	T ✓	t	t
		U	U	u	u
		V	V	v	v
		W	W	w	w
		X	X	x	x
		Y	Y	y	y
		Z	Z	z	z

MIRROR IMAGE IN ALPHABET



- (1) WATER
- (2) RETAW
- (3) WATER
- (4) RETAW

Q6. FIND THE MIRROR IMAGE

DREAM | ? M D

- (1) MAERD
- (2) DREAM
- (3) DREAM
- (4) MAERD

Q7.FIND THE MIRROR IMAGE

jealous | ?

- (1) jeulous
- (2) jeulous
- (3) seulous
- (4) jeulous

Q8. FIND THE MIRROR IMAGE

8 6 9 5 2 | ? 5

~~(1) 8 6 9 2 5~~

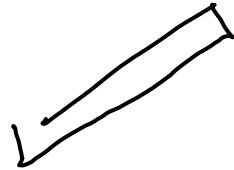
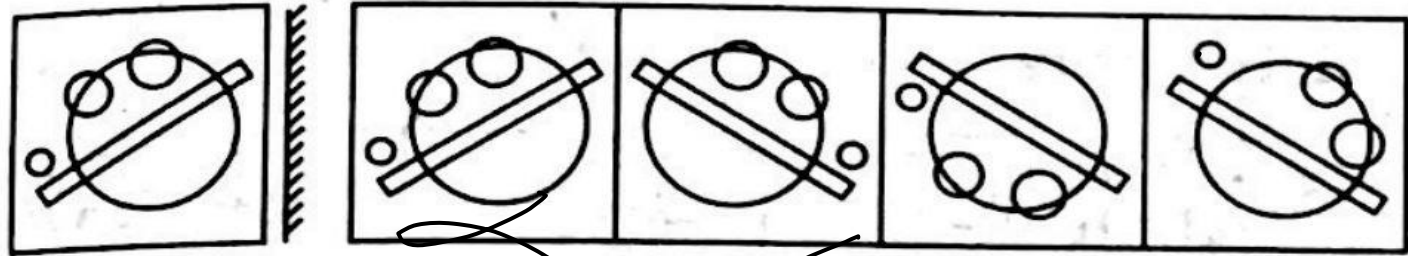
~~(2) 8 6 2 5 9~~

~~(3) 8 9 6 5 2~~

~~(4) 2 2 9 6 8~~

Q9. FIND THE MIRROR IMAGE

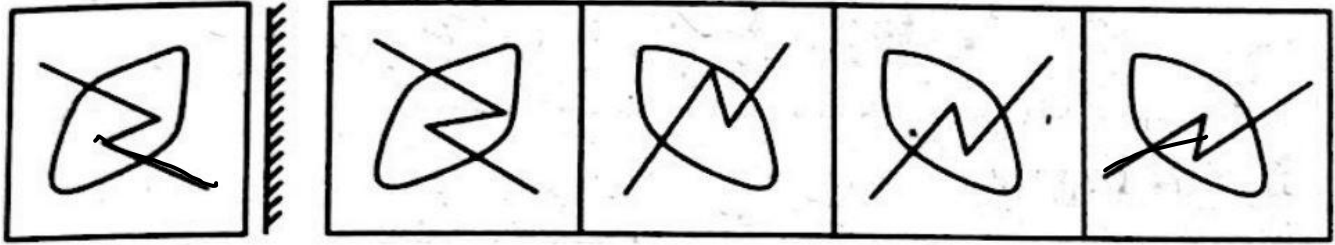
clock / AM / Diagram



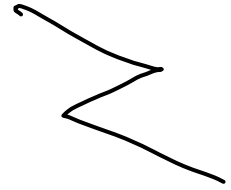
A
(mirror)

(water)

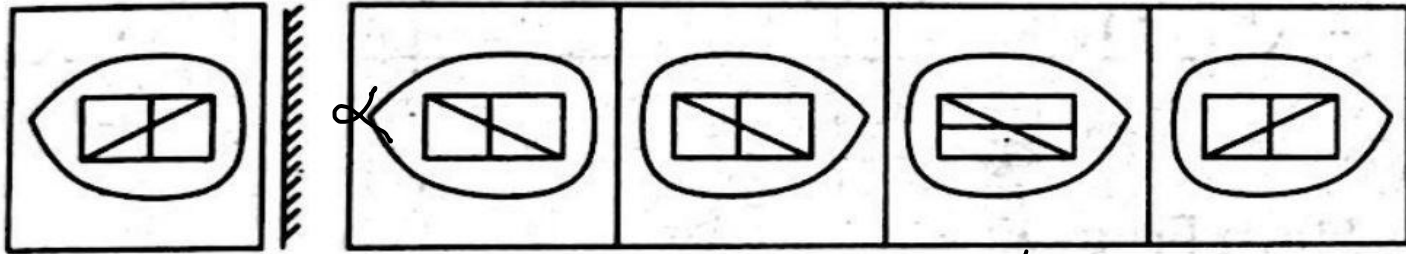
Q10.FIND THE MIRROR IMAGE



A B C D



Q11.FIND THE MIRROR IMAGE



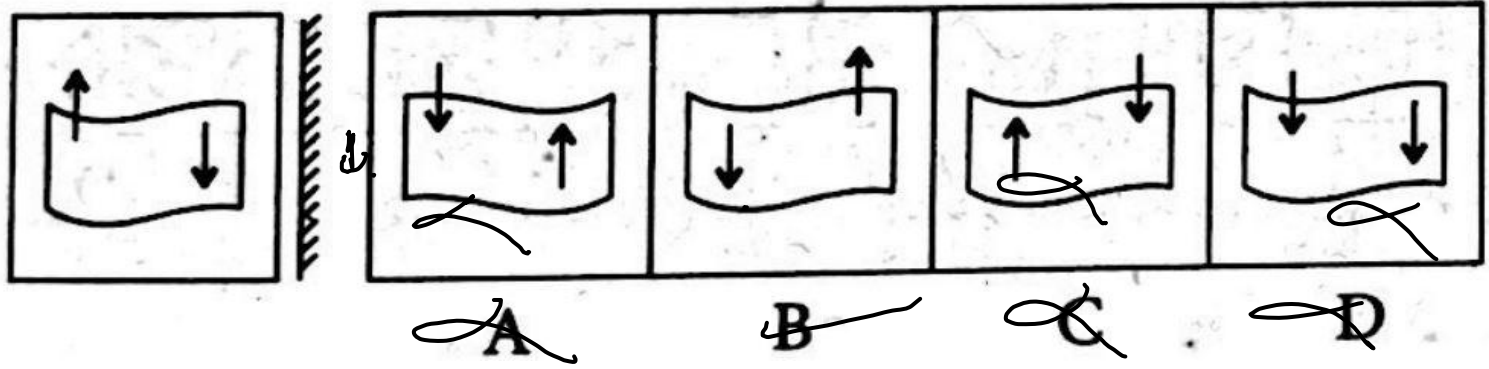
~~A~~

B

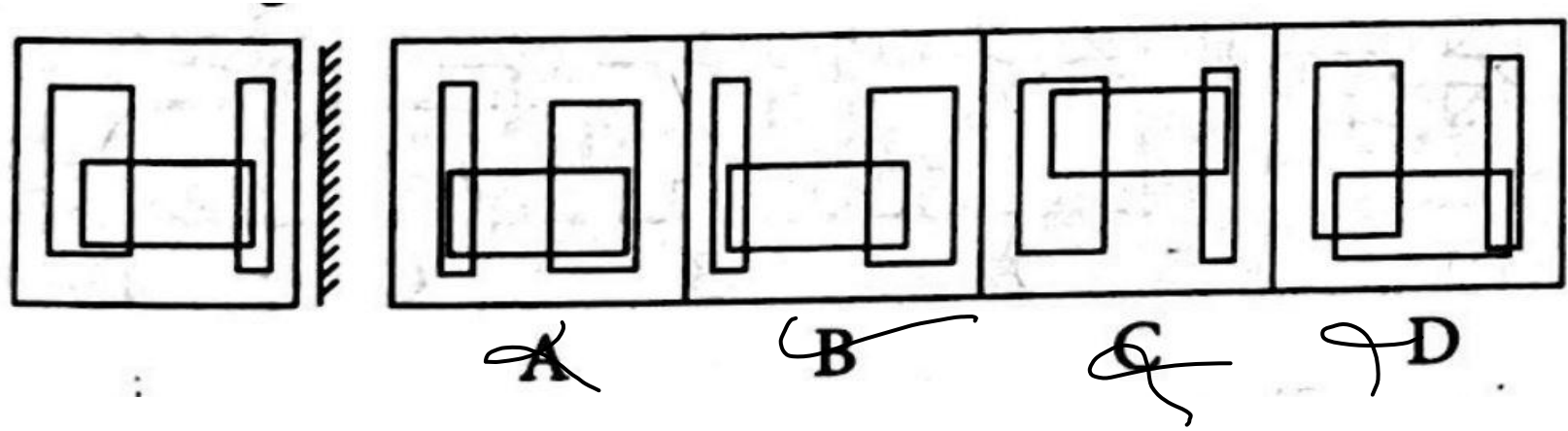
~~C~~

~~D~~

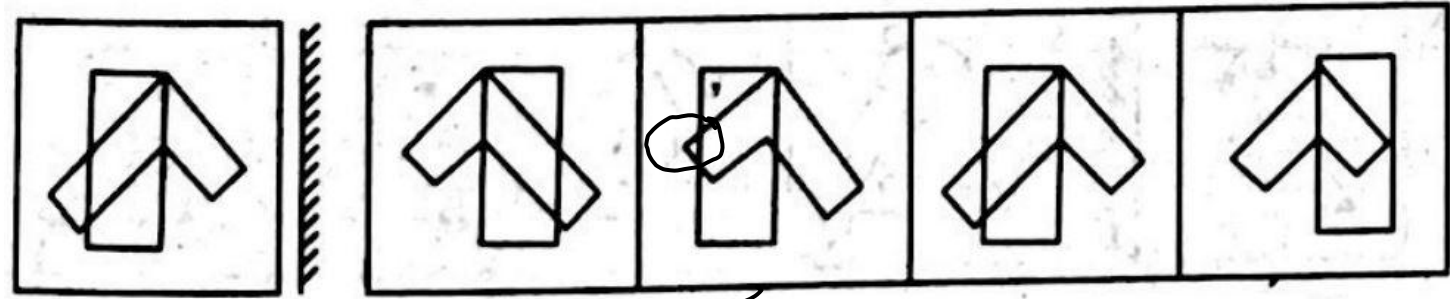
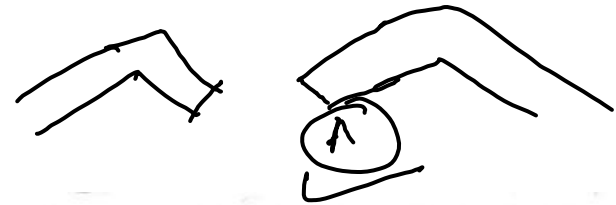
Q12.FIND THE MIRROR IMAGE



Q13.FIND THE MIRROR IMAGE



Q14.FIND THE MIRROR IMAGE



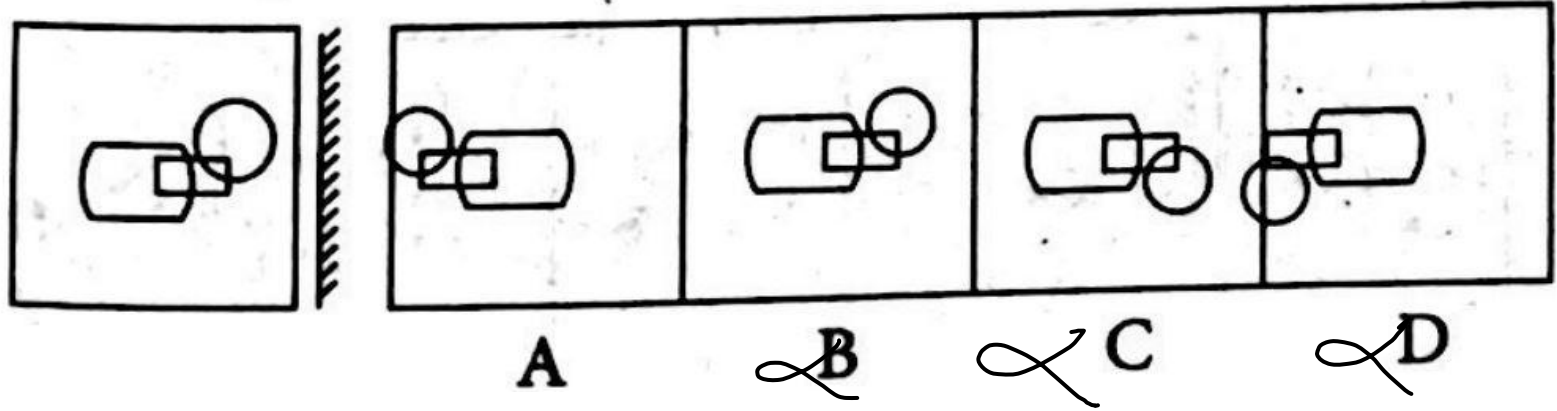
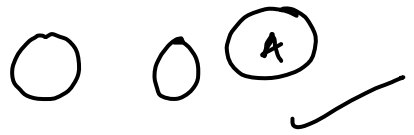
~~A~~

B

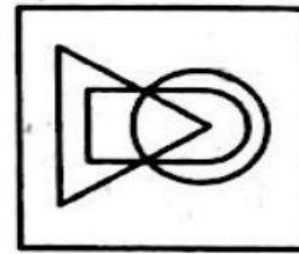
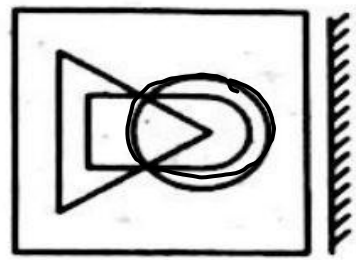
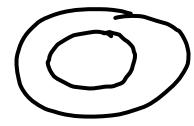
C

D

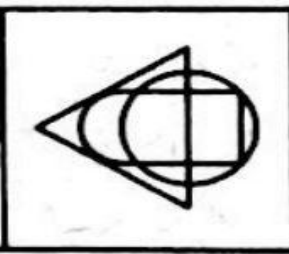
Q15.FIND THE MIRROR IMAGE



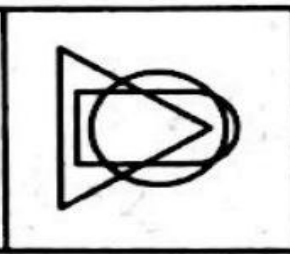
Q16.FIND THE MIRROR IMAGE



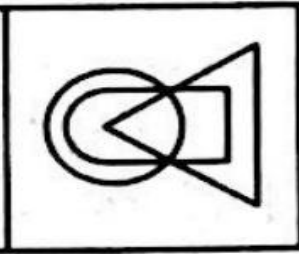
~~A~~



~~B~~

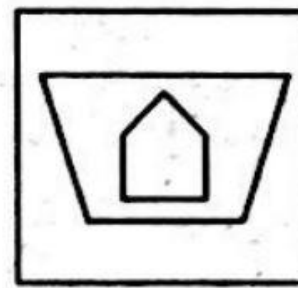
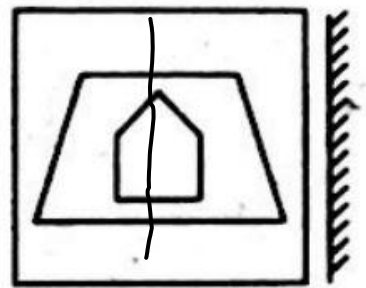




~~C~~

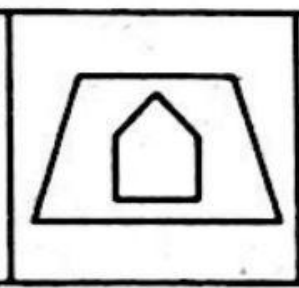


✓ D

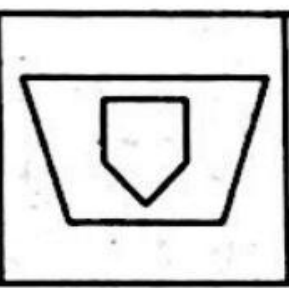
Q17.FIND THE MIRROR IMAGE



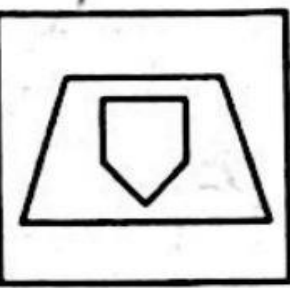
A



B

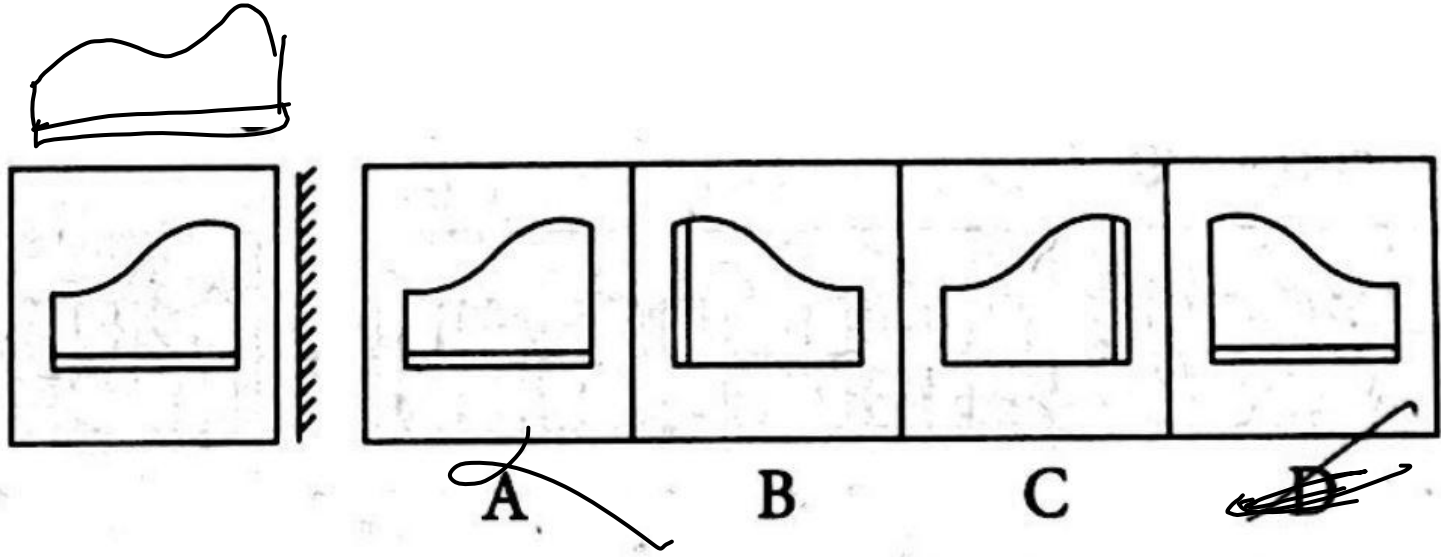


C

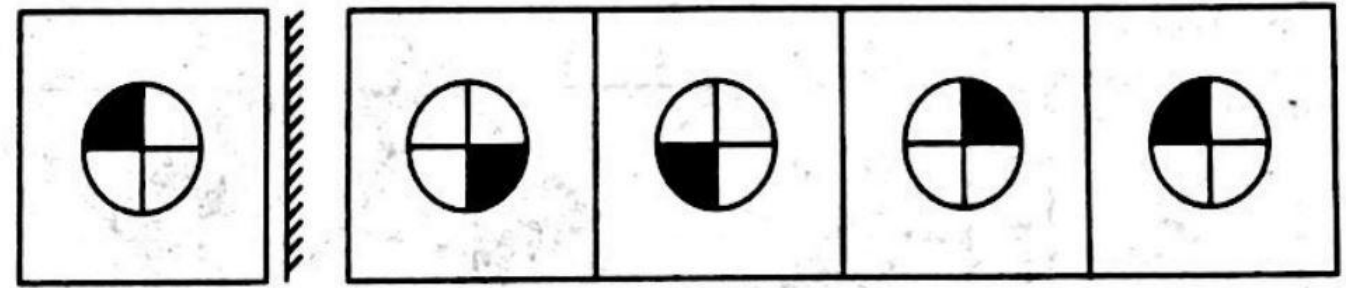



D

Q18.FIND THE MIRROR IMAGE



Q19.FIND THE MIRROR IMAGE



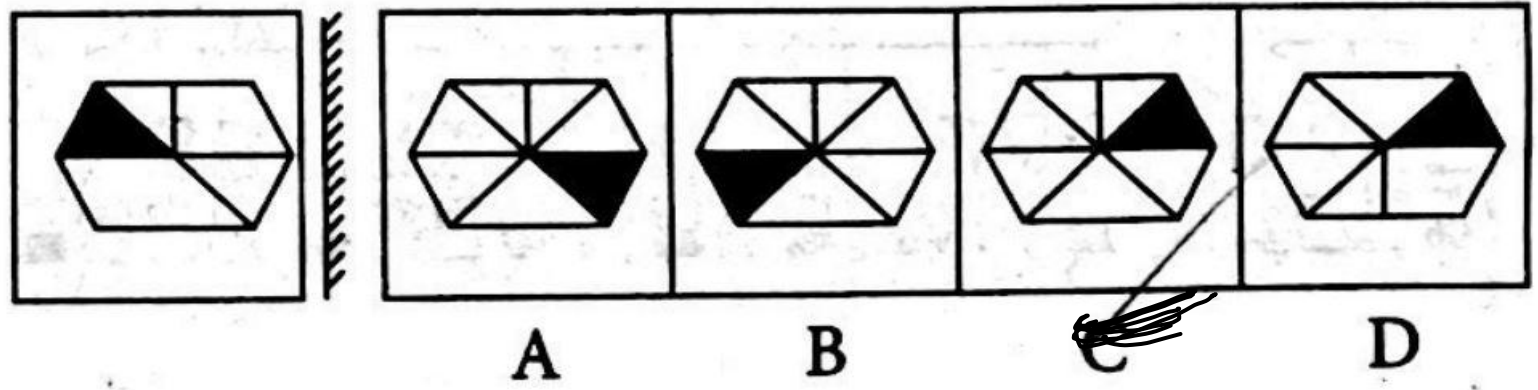
A

B

~~C~~

D

Q20.FIND THE MIRROR IMAGE




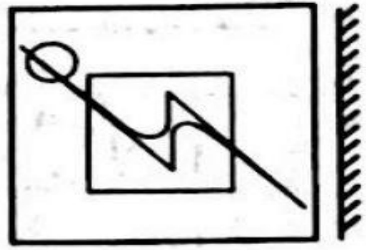
Q21.FIND THE MIRROR IMAGE




~~A~~ B ~~C~~ D

Q22.FIND THE MIRROR IMAGE

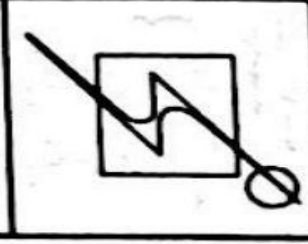
fichkoni



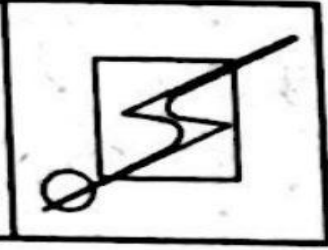
A



~~B~~



C



D