





Mahendra's

FOR MORE DISCOUNT VISIT www.mahendras.org & USE PROMO CODE : E04613



SPECIAL FESTIVAL OFFER

12th - 15th Oct 2021



Mahendra's

Upto

80%
Off

ON ALL DIGITAL PRODUCTS

Use code:

PUJA80

*except branch admission

Class Time :- 9:00 AM



Mahendra's

FOR MORE DISCOUNT VISIT www.mahendras.org & USE PROMO CODE : E04613

IBPS CLERK/PO 2021

LIVE



MATHS

9:00 AM



**LIVE
MOCK
DISCUSSION**

UPCOMING ONLINE BATCHES

October 2021

06 Oct 2021

08:00 AM to 10:00 AM

LIVE PREMIUM GREEN CARD
(BANK-PO & CLERK)

01:00 PM to 03:00 PM

LIVE PREMIUM GREEN CARD
(BANK-PO & CLERK)

03:00 PM to 05:00 PM

LIVE PREMIUM SILVER CARD
(SSC CGL & CHSL)

10:30 AM to 12:30 PM

LIVE CLASS NIELIT CARD
(CCC)

BILINGUAL

13 Oct 2021

10:30 AM to 12:30 PM

LIVE PREMIUM GREEN CARD
(BANK-PO & CLERK)

05:30 PM to 07:30 PM

LIVE PREMIUM GREEN CARD
(BANK-PO & CLERK)

07:30 PM to 09:30 PM

LIVE PREMIUM SILVER CARD
(SSC CGL & CHSL)

BILINGUAL

20 Oct 2021

03:00 PM to 05:00 PM

LIVE PREMIUM GREEN CARD
(BANK-PO & CLERK)

08:00 AM to 10:00 AM

LIVE PREMIUM SILVER CARD
(SSC CGL & CHSL)

01:00 PM to 03:00 PM

LIVE CLASS CTET CARD
(CTET)

BILINGUAL

27 Oct 2021

08:00 AM to 10:00 AM

LIVE PREMIUM GREEN CARD
(BANK-PO & CLERK)

07:30 PM to 09:30 PM

LIVE PREMIUM GREEN CARD
(BANK-PO & CLERK)

10:30 AM to 12:30 PM

LIVE PREMIUM SILVER CARD
(SSC CGL & CHSL)

BILINGUAL

R



Rajnandini Pal 18 hours ago

Homework Answer

Q1)5020(option C)

Q2) 267(option A).

Thank you so much sir 🙏

  REPLY

S

Simpal Kumari 16 hours ago

Homework ans

Q. 1)5020(Option C)

Q. 2) 267(OptionA)

Sr awesome session today's 🙌🔥👏

Read more

  REPLY

S

Biswajit Pradhan 19 hours ago

HOMW WORK ANSWER

1) 5020 OPTION C

2) 267 OPTION A

THANK YOU SIR FOR THIS SESSION

  REPLY

Sarita 21 hours ago



Homework answer

1) 5020

2) 267

Today very nice session sir ...

Read more

  REPLY

Aheli Chatterjee 21 hours ago

Homework ans-

5020

267

Thank you Sir

  REPLY

S

Saurav rajpal 21 hours ago

9x999

  REPLY

What value should come in the place of question mark(?) in the following questions.

$$120 \% \text{ of } 320 + \sqrt{576} + 232 = ?$$

(A)620

(B)630

(C) 640

(D)540

(E)None of these



What value should come in the place of question mark(?) in the following questions.

$$32^2 + 46^2 - 39^2 = +\sqrt{324} + ?$$

(A)1620

(B)1612

(C)1601

(D)1610

(E)None of these



What value should come in the place of question mark(?)in the following questions.

$$385 + 633 + 712 + 224 + 325 = ?$$

- (A) 2279 (B) 2289 (C) 2269 (D) 2179 (E) None of these



What value should come in the place of question mark(?) in the following questions.

$$54 \times 56 - \sqrt{1156} \times 36 = ?$$

(A)1500

(B)1600

(C)1800

(D)1700

(E)None of these



What value should come in the place of question mark(?)in the following questions.

$$63.01 + 34.21 + 64.34 - 46.33 = ?$$

(A) 105.23

(B) 115.23

(C) 114.23

(D) 125.23

(E) None of these



What value should come in the place of question mark(?)in the following questions.

$$75\% \text{ of } 160 + 20\% \text{ of } 240 = ?$$

- (A) 168 (B) 148 (C) 158 (D) 138 (E) None of these



What value should come in the place of question mark(?) in the following questions.

$$24^2 \div 12 \times 42 + 138 - 142 = ?$$

- (A) 2026 (B) 2012 (C) 2112 (D) 1912 (E) None of these



What value should come in the place of question mark(?) in the following questions.

$$(320 \div 16)^2 + 124 - 224 = ?$$

(A)310

(B)200

(C)400

(D)300

(E)None of these



What value should come in the place of question mark(?) in the following questions.

$$\sqrt{(300 + 376)} + 160 \div 4 + 120 = ?$$

(A)136

(B)186

(C)176

(D)166

(E)None of these



What value should come in the place of question mark(?)in the following questions.

$$341 \div \sqrt{(64 + 57)} \times 39 = ?$$

(A)1259

(B)1009

(C)1109

(D)1209

(E)None of these

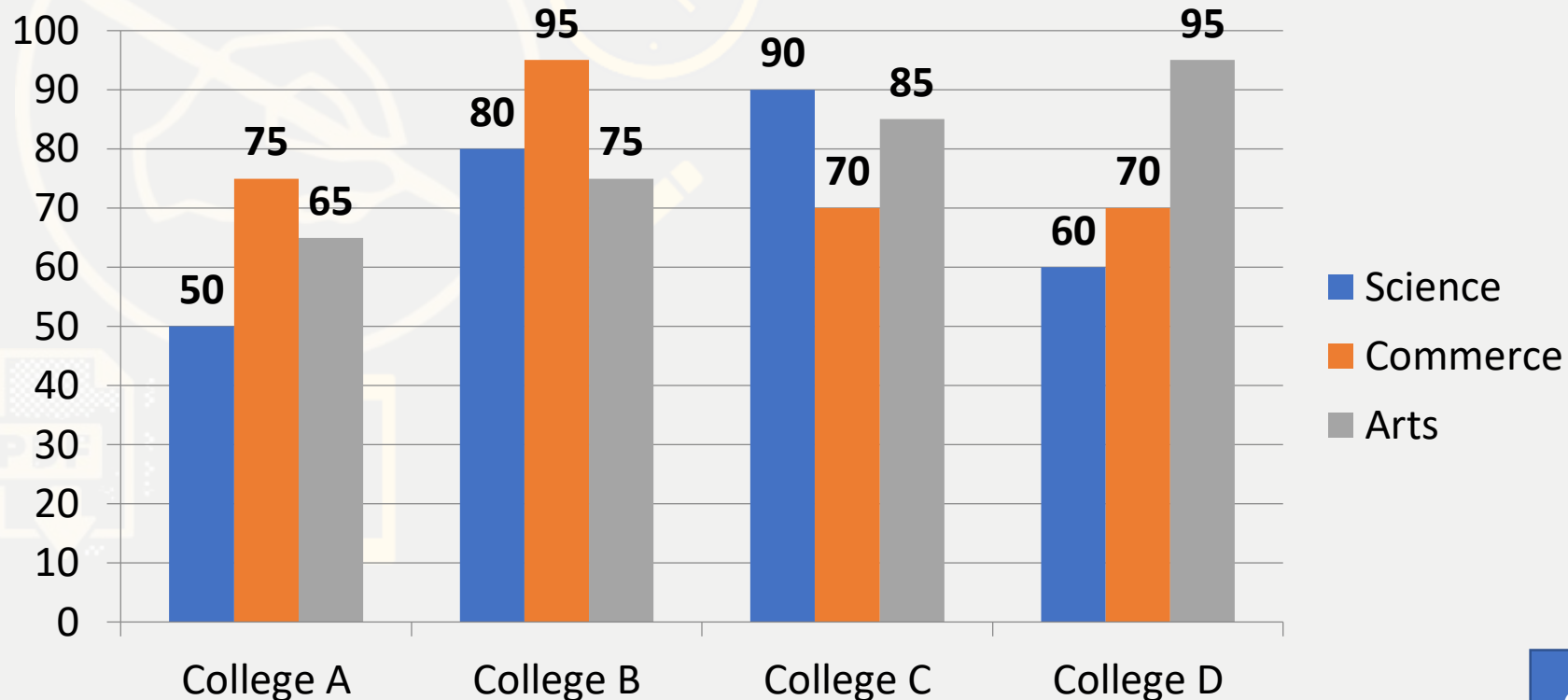


Directions (Q. 26-30): Direction for Question

Study the given bar graph and answer the following questions accordingly. The bar graph shows the number of students from all three departments.

दिए गए दंड आलेख का अध्ययन कीजिए और उसके अनुसार निम्नलिखित प्रश्नों के उत्तर दीजिए। बार ग्राफ तीनों विभागों के छात्रों की संख्या को दर्शाता है।

Number of students in four colleges



Q.21 :- Find the total number of students from the commerce department from all four colleges.

सभी चार कॉलेजों से वाणिज्य विभाग के छात्रों की कुल संख्या ज्ञात कीजिए।

(A)210

(B)410

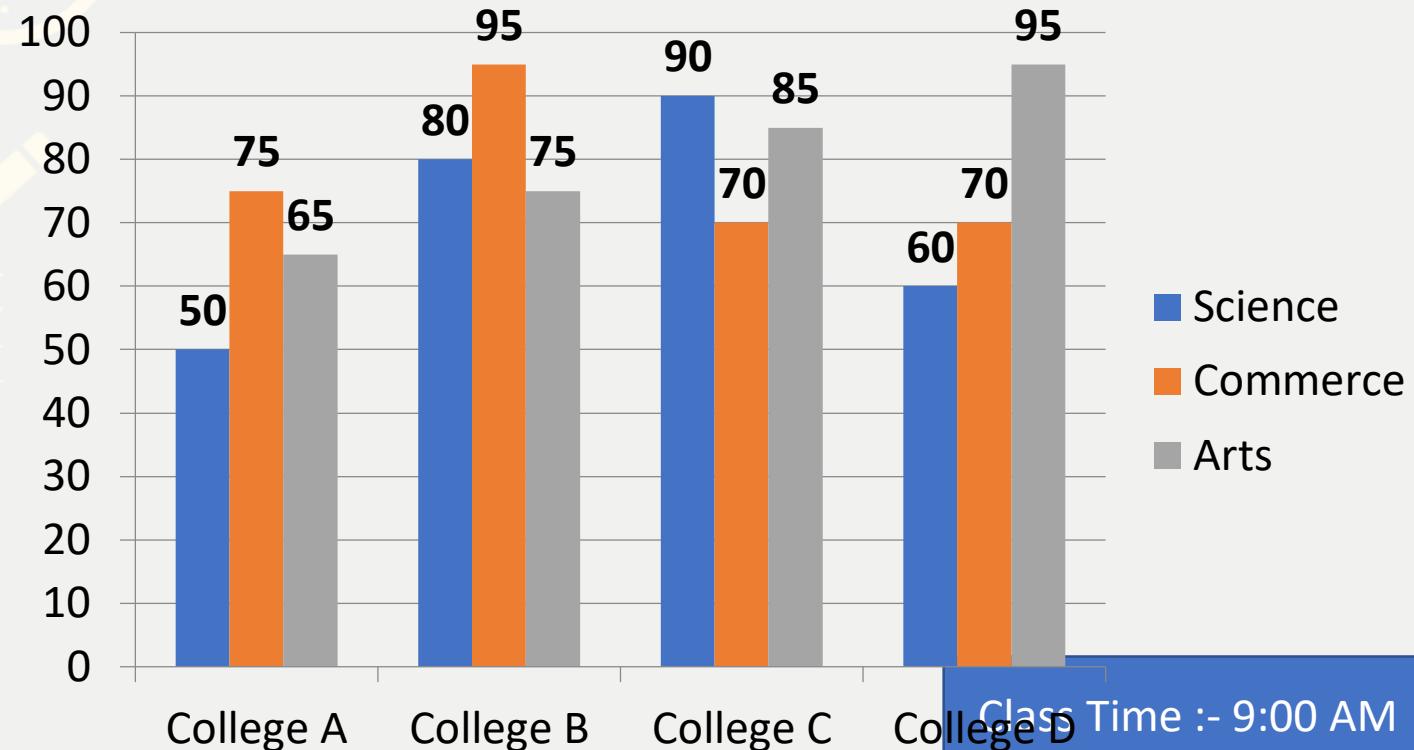
(C)320

(D)310

(E)None of these

0:30

Number of students in four colleges



Q.22 :- The total number of students from college C is approximate what percentage more or less than that of college D?

कॉलेज C से छात्रों की कुल संख्या कॉलेज D से लगभग कितने प्रतिशत अधिक या कम है?

(A)10%

(B)8%

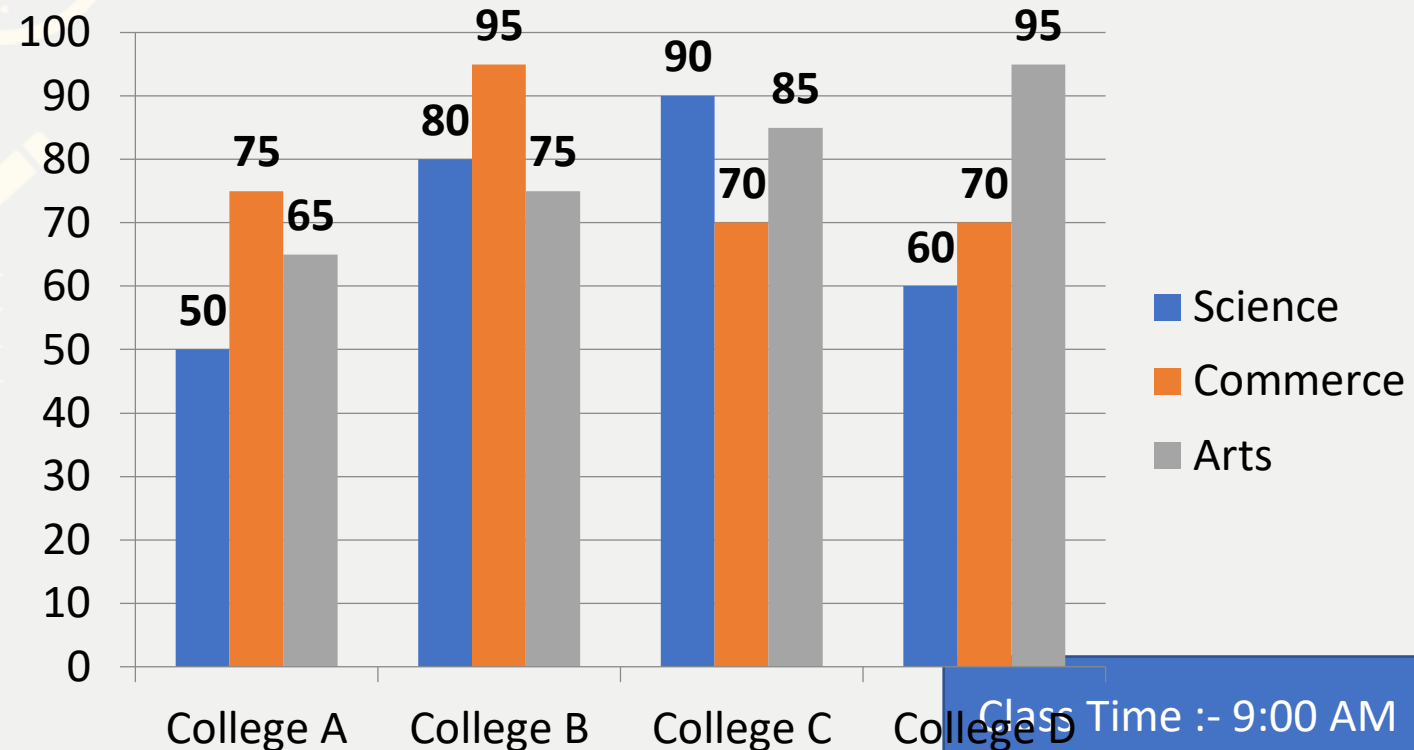
(C)9%

(D)11%

(E)None of these

0:30

Number of students in four colleges

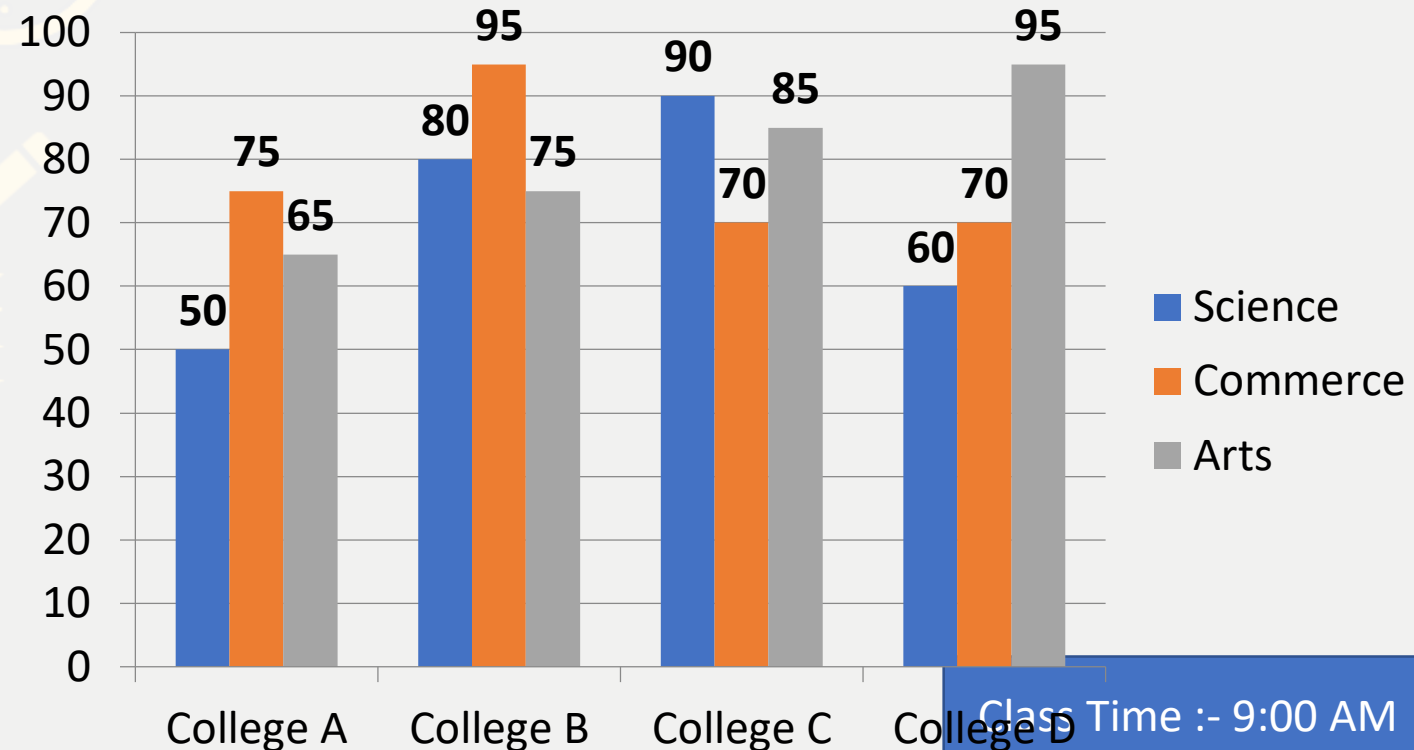


Q.23 :- Find the difference between the total number of students from the commerce department from college B and college C and the total number of students from the science department from college A and college D.

कॉलेज B और कॉलेज C से वाणिज्य विभाग के छात्रों की कुल संख्या और कॉलेज A और कॉलेज D से विज्ञान विभाग के छात्रों की कुल संख्या के बीच का अंतर ज्ञात कीजिए।

- (A)45 (B)55 (C)65 (D)75 (E)35

Number of students in four colleges



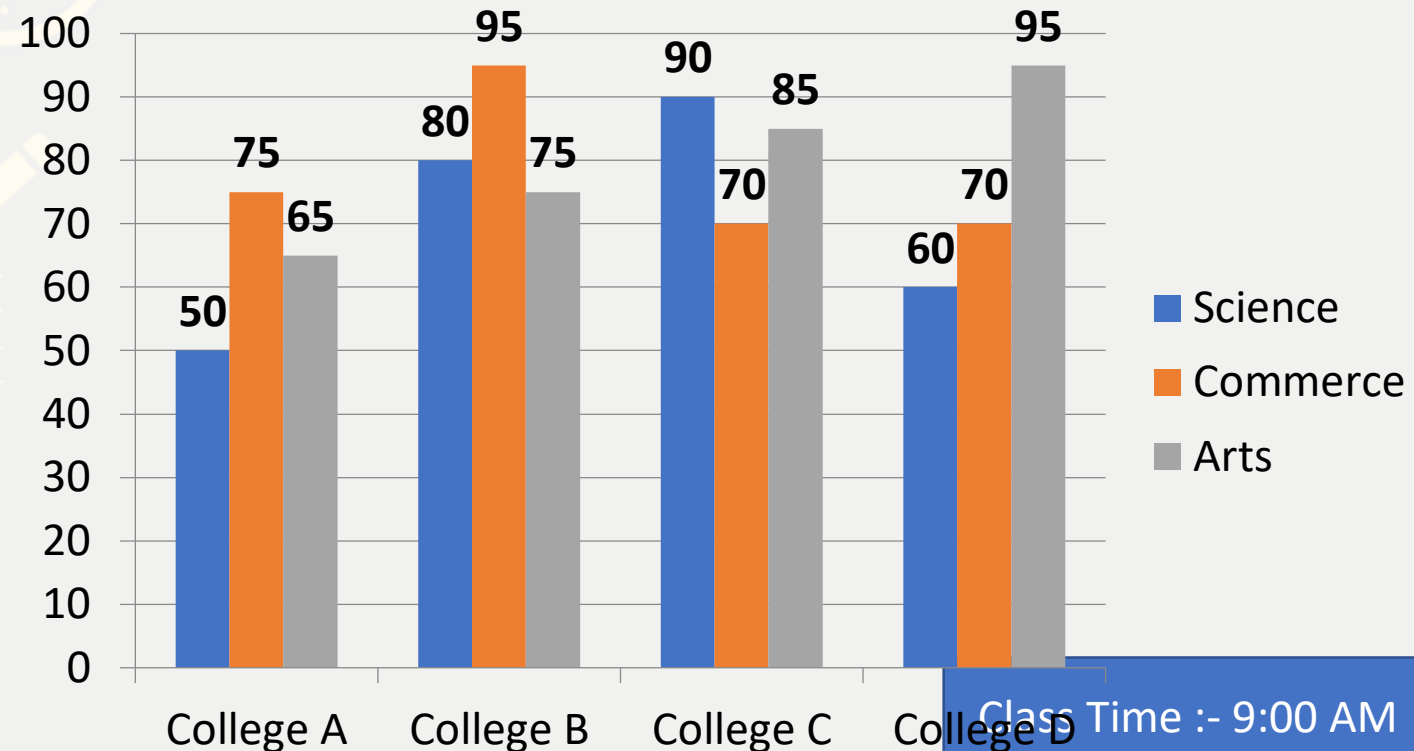
Q.24 :- Find the average of all students from the science department of all four colleges.

सभी चार कॉलेजों के विज्ञान विभाग के सभी छात्रों का औसत ज्ञात कीजिए।

- (A)70 (B)60 (C)50 (D)80 (E)None of these

0:30

Number of students in four colleges



Q.25 :- Find the ratio between the students from science and Arts from college A and the students from commerce and Arts from college C.

कॉलेज A से विज्ञान और कला के छात्रों और कॉलेज C से वाणिज्य और कला के छात्रों के बीच का अनुपात ज्ञात कीजिए।

(A) 31:23

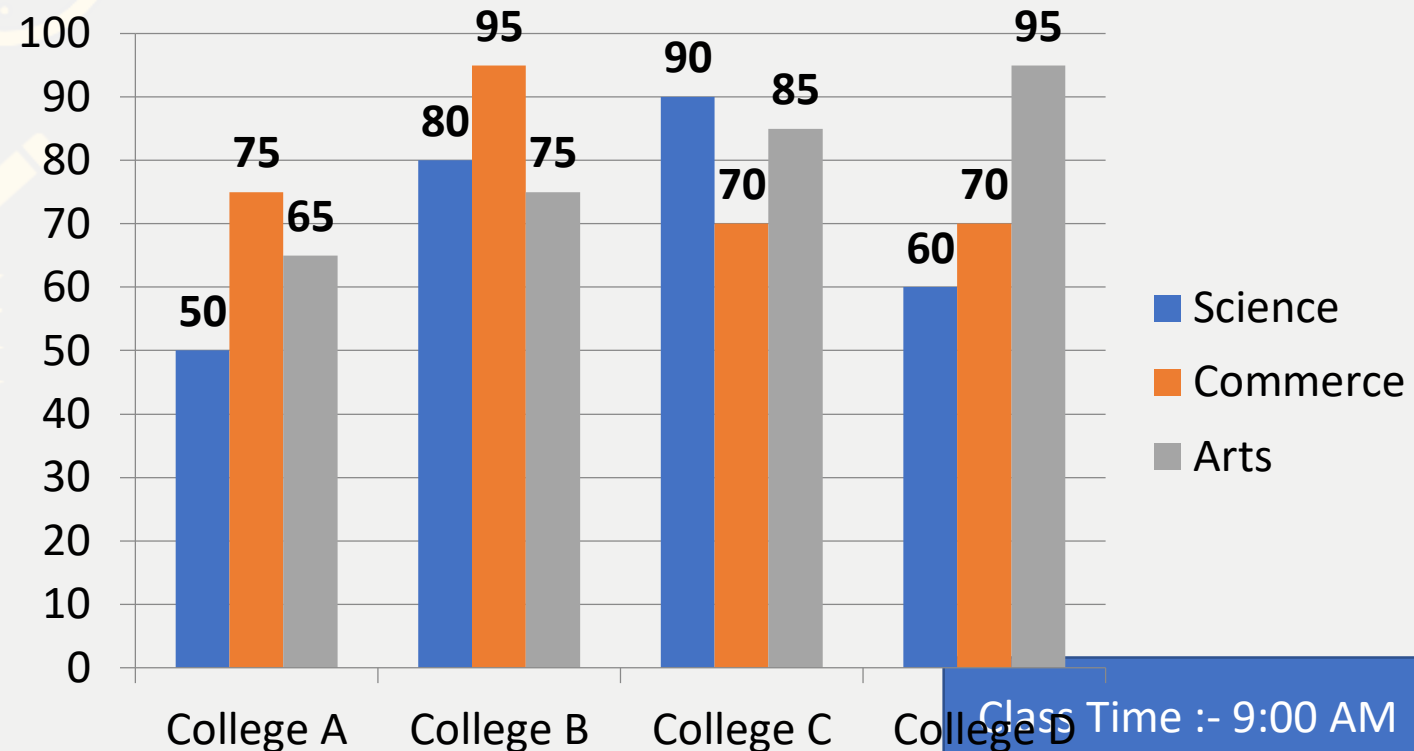
(B) 23:31

(C) 13:21

(D) 15:25

(E) None of these

Number of students in four colleges



Directions (Q. 26-30): Direction for Question

Read the table chart given below carefully and answer the following questions.

नीचे दिए गए तालिका चार्ट को ध्यानपूर्वक पढ़ें और निम्नलिखित प्रश्नों के उत्तर दें।

Player Names	Run scored in ODI	Run scored in Test Match
Rohit sharma	880	1000
Suresh Raina	1040	1280
Yuvraj Singh	1920	2200
M.S.Dhoni	2200	2400
Gautam Gambhir	1800	2000
Virat Kohli	2040	2360

Q.26 :- The difference of scores made by Yuvraj Singh in ODI and Test matches is what percentage more or less than the difference of scores made by MS Dhoni in ODI and Test matches is

एकदिवसीय और टेस्ट मैचों में युवराज सिंह द्वारा बनाए गए स्कोर का अंतर एकदिवसीय और टेस्ट मैचों में एमएस धोनी द्वारा बनाए गए स्कोर के अंतर से कितना प्रतिशत अधिक या कम है?

- (A)40%less (B)40%more (C)28.5% more (D)28.5% (E)None of these

0:30

Player Names	Run scored in ODI	Run scored in Test Match
Rohit sharma	880	1000
Suresh Raina	1040	1280
Yuvraj Singh	1920	2200
M.S.Dhoni	2200	2400
Gautam Gambhir	1800	2000
Virat Kohli	2040	2360

Q.27:- Total scores made by all given players in ODI matches is what percentage of total scores made by them in test matches?

एकदिवसीय मैचों में सभी दिए गए खिलाड़ियों द्वारा बनाए गए कुल स्कोर उनके द्वारा टेस्ट मैचों में बनाए गए कुल स्कोर का कितना प्रतिशत है?

(A)84.5%

(B)485.9%

(C)87.9%

(D)89.7%

(E)None of these

0:30

Player Names	Run scored in ODI	Run scored in Test Match
Rohit sharma	880	1000
Suresh Raina	1040	1280
Yuvraj Singh	1920	2200
M.S.Dhoni	2200	2400
Gautam Gambhir	1800	2000
Virat Kohli	2040	2360

Q.28 :- If Yuvraj Singh and MS Dhoni both played 25 ODI matches in this year, then average score of which player is better?

यदि युवराज सिंह और एमएस धोनी दोनों ने इस वर्ष 25 एकदिवसीय मैच खेले हैं, तो किस खिलाड़ी का औसत स्कोर बेहतर है?

(A) Yuvraj singh (B) M.S. Dhoni (C) Both have equal level (D) CND (E) None of these

0:30

Player Names	Run scored in ODI	Run scored in Test Match
Rohit sharma	880	1000
Suresh Raina	1040	1280
Yuvraj Singh	1920	2200
M.S.Dhoni	2200	2400
Gautam Gambhir	1800	2000
Virat Kohli	2040	2360

Q.29:- Total score made by Rohit Sharma, Yuvraj Singh and Gautam Gambhir in test matches is what percentage more/less by score made by Suresh Raina, MS Dhoni and Virat Kohli in ODI matches?

टेस्ट मैचों में रोहित शर्मा, युवराज सिंह और गौतम गंभीर द्वारा बनाए गए कुल स्कोर, एकदिवसीय मैचों में सुरेश रैना, एमएस धोनी और विराट कोहली द्वारा बनाए गए स्कोर से कितने प्रतिशत अधिक/कम हैं?

- (A)1.51% more (B)1.51%less (C)1.53% more (D)1.53%les (E)None of these

0:30

Player Names	Run scored in ODI	Run scored in Test Match
Rohit sharma	880	1000
Suresh Raina	1040	1280
Yuvraj Singh	1920	2200
M.S.Dhoni	2200	2400
Gautam Gambhir	1800	2000
Virat Kohli	2040	2360

What should come at place of the question mark (?) in the following number series ?

11. 36925 , ? , 98035 , 98590 , 98645 , 98650

(A)98420

(B)92480

(C)96400

(D)95450 (E) None of these

0:30

What should come at place of the question mark (?) in the following number series ?

12. **25 , 75 , 339 , ? , 13891 , 110567**

(A) 1985

(B) 1958

(C) 1891

(D) 1567

(E) None of these



0:30

What should come at place of the question mark (?) in the following number series ?

13. 5, 28, 57, 88, 125, ?

(A) 156

(B) 147

(C) 166

(D) 186

(E) None of these



0:30

What should come at place of the question mark (?) in the following number series ?

14. 45 , 57 , 81 , 117 , 165 , ?

(A) 235

(B) 215

(C) 205

(D) 245

(E) None of these



0:30

What should come at place of the question mark (?) in the following number series ?

15. **668 , ? , 4743 , 9656 , 17656 , 29823**

(A)1999

(B)1888

(C)1777

(D)1555

(E)None of these



0:30

THANKS

