



 *Mahendra's*



# IBPS CLERK 2021

**LIVE** **MOCK**  
**DISCUSSION**



**9:00 AM**



**Maths**

# UPCOMING ONLINE BATCHES

## September 2021

01 Sep 2021	08 Sep 2021	15 Sep 2021	22 Sep 2021	29 Sep 2021
<p>01:00 PM to 03:00 PM <b>LIVE PREMIUM GREEN CARD</b> (BANK-PO &amp; CLERK)</p> <p>08:00 AM to 10:00 AM <b>LIVE PREMIUM SILVER CARD</b> (SSC CGL &amp; CHSL)</p> <p><b>BILINGUAL</b></p>	<p>10:30 AM to 12:30 PM <b>LIVE PREMIUM GREEN CARD</b> (BANK-PO &amp; CLERK)</p> <p><b>BILINGUAL</b></p>	<p>03:00 PM to 05:00 PM <b>LIVE PREMIUM GREEN CARD</b> (BANK-PO &amp; CLERK)</p> <p>03:00 PM to 05:00 PM <b>LIVE MATHS INDIVIDUAL</b> (ONLINE LIVE CLASS)</p> <p><b>BILINGUAL</b></p> <p>03:00 PM to 05:00 PM <b>LIVE PREMIUM SILVER CARD</b> (SSC CGL &amp; CHSL)</p> <p><b>ENGLISH MEDIUM</b></p>	<p>05:30 PM to 07:30 PM <b>LIVE PREMIUM GREEN CARD</b> (BANK-PO &amp; CLERK)</p> <p><b>BILINGUAL</b></p>	<p>10:30 AM to 12:30 PM <b>LIVE PREMIUM SILVER CARD</b> (SSC CGL &amp; CHSL)</p> <p><b>BILINGUAL</b></p> <p>07:30 PM to 09:30 PM <b>LIVE PREMIUM GREEN CARD</b> (BANK-PO &amp; CLERK)</p> <p><b>ENGLISH MEDIUM</b></p>



Rahul Kumar Upadhyay 20 hours ago

Nice session sir ji 🙏🙏🙏🙏🙏

👍 1 🗨️ REPLY

▼ [View reply from Mahendras : Online Videos Fo](#)



subhankar mondal 10 hours ago

HW ANS -3396

thank you sir

👍 🗨️ REPLY



Juthika Das 22 hours ago

Ans is --3396

Thank you sir

👍 1 🗨️ REPLY

▼ [View reply from Mahendras : Online Videos Fo](#)



AAYUSH SRIVASTAVA 22 hours ago

HOMEWORK ANSWER- (A): 3396

👍 1 🗨️ REPLY

▼ [View reply from Mahendras : Online Videos Fo](#)



Suman Paul 22 hours ago

$565 \times 6 + 6 = 3396$

👍 1 🗨️ REPLY

▼ [View reply from Mahendras : Online Videos For Govt. Exams](#)



sarita rawat 22 hours ago

Homework

Option (A)3396

$\times 6 + 6 = 3396$

Today very awesome session

Read more

👍 1 🗨️ REPLY

▼ [View reply from Mahendras :](#)



pratiksha bhagwat 1 hour ago

Home work answer

3396 option A

Thank you so much sir

Nice session sir

👍 🗨️ REPLY



Gautam Kumar 9 hours ago

Home work answer

Option (A) - 3396

Thankyou sir

👍 🗨️ REPLY



Soma Das 21 hours ago

Home work ans

3396

Thank you sir

👍 1 🗨️ REPLY



ART ATTACK WITH KRISHNA 22 hours ago

$\times 6 + 6 = 3396$

👍 1 🗨️ REPLY

▼ [View reply from Mahendras : Online Videos For Govt. Exams](#)



Indranil Sasmal 20 hours ago

3396

👍 1 🗨️ REPLY

▼ [View reply from Mahendras : Online Videos For Govt. Exams](#)



Rohit Gond 22 hours ago

3396

👍 1 🗨️ REPLY

▼ [View reply from Mahendras : Online Videos For Govt. Exams](#)



Uzma Siddiqui 22 hours ago

Gud morning sir

👍 2 🗨️ REPLY

▼ [View reply from Mahendras : Online Videos For Govt. Exams](#)



ANIKET Kushwaha 22 hours ago

$*6 + 6 = 3396$

👍 1 🗨️ REPLY



Manshi Vasita 10 hours ago

Ans 3396

  REPLY



Phul Kumar 1 hour ago

A 3390 answer

  REPLY



ART ATTACK WITH KRISHNA 22 hours ago

Last ans 3396

 1  REPLY

[View reply from Mahendras : Online Videos For Govt. Exams](#)



Rim 22 hours ago

option A 3396

 1  REPLY

[View reply from Mahendras : Online Videos For Govt. Exams](#)



Mansi Dahake 21 hours ago

A 3396 ans

 1  REPLY

[View reply from Mahendras : Online Videos For Govt. Exams](#)

What should come at place of the question mark (?) in the following number series ?

**Q.HW:-** 3, 8, 27 , 112 , 565 , ?

(A)3396

(B)3390

(C)3142

(D)3024

(E)None of these



What should come at place of the question mark (?) in the following number series ?

1. 2 3 7 22 89 ?

(A) 446

(B) 444

(C) 445

(D) 442

(E) None of these



What should come at place of the question mark (?) in the following number series ?

2 . 4 8 24 48 144 ?

(A)286

(B)288

(C)248

(D)282

(E)None of these





What should come at place of the question mark (?) in the following number series ?

3. 6, 12, 24, 42, 66, 96, ?

(A) 182

(B) 192

(C) 132

(D) 142

(E) None of these



What should come at place of the question mark (?) in the following number series ?

4. 8 , 129 , 273 , 442 , 638 , ?

(A) 836

(B) 863

(C) 864

(D) 833

(E) None of these



What should come at place of the question mark (?) in the following number series ?

5. 1200 , 200 , 1000 , 250 , 750 , ?

(A) 355

(B) 375

(C) 380

(D) 365

(E) 340



What value should come in the place of question mark(?) in the following questions?

**11.**  $264 \div \sqrt{576} + (11)^2 + 12 = (?)^2$

(A) 44

(B) 24

(C) 15

(D) 14

(E) 12



0:30

What value should come in the place of question mark(?)in the following questions?

**12.**  $(?)^2 \% \text{ of } 650 = (20)^2 + (4)^2$

(A)8

(B)64

(C)  $\sqrt{8}$

(D)  $(64)^2$

(E)32



0:30

What value should come in the place of question mark(?)in the following questions?

**13.**  $(\sqrt{529} \times 6) \div 2 \times ? = 14076$

(A)202

(B)254

(C) 204

(D)146

(E)214



0:30

What value should come in the place of question mark(?)in the following questions?

14.  $135\% \text{ of } 342 - 342\% \text{ of } 13.5 = ?$

(A) 411.13

(B) 412.23

(C) 413.33

(D) 414.43

(E) 415.53



What value should come in the place of question mark(?)in the following questions?

**15.**  $32.4\% \text{ of } 3120 - 281.88 = ?^3$

(A) 7.5

(B) 8.5

(C) 9

(D) 8

(E) None of these

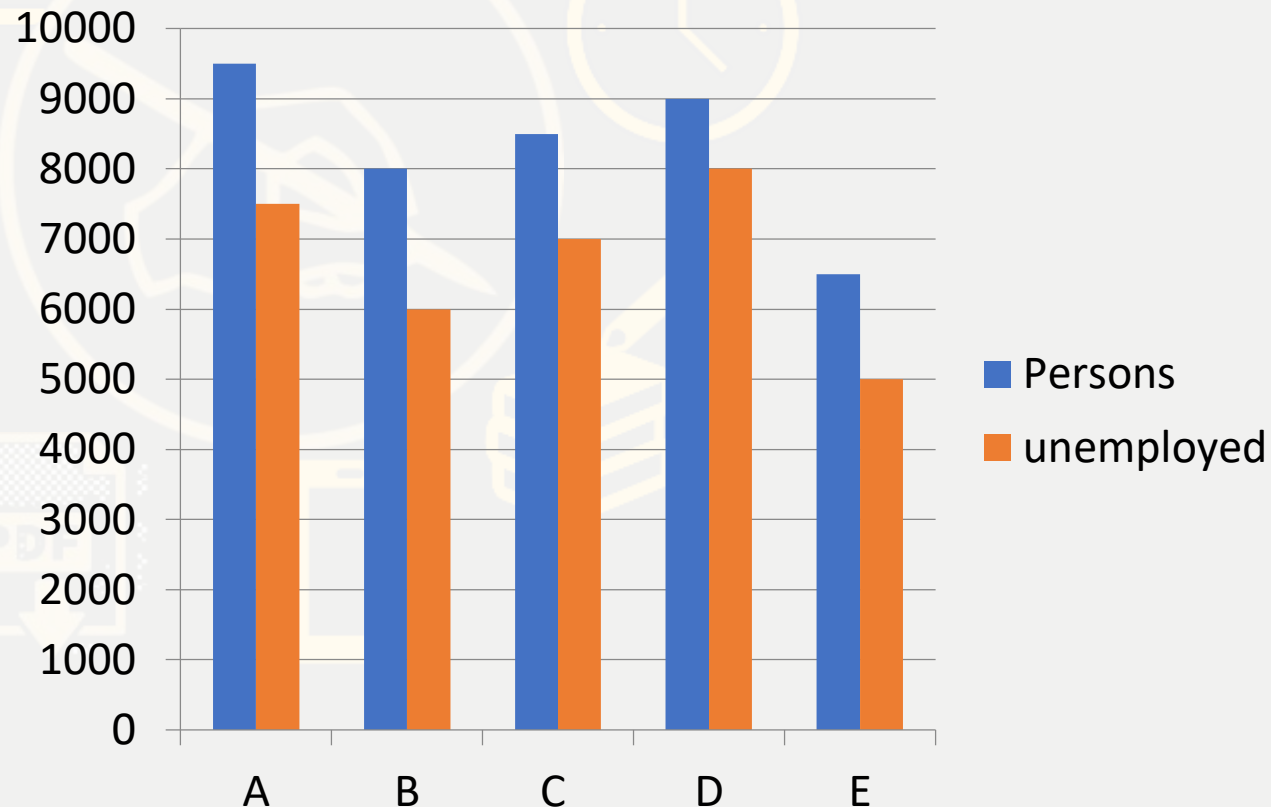


0:30



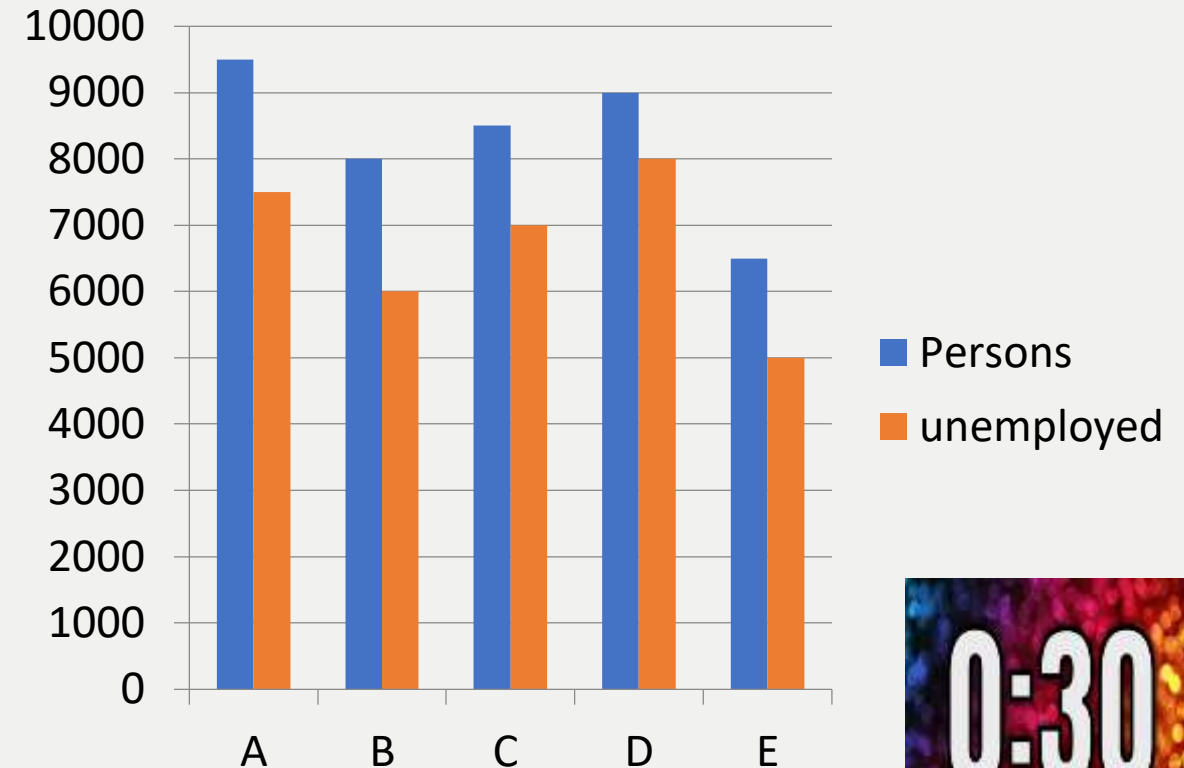
**Directions (Q. 1-5):** Study the following bar graph and answer the questions that follow:

This graph shows the total number of person in the different cities and the persons who not get employed in those cities.



**Q.1 :-** What is the total percentage of unemployed persons in all cities together ?  
सभी शहरों में मिलाकर बेरोजगार व्यक्तियों का कुल प्रतिशत कितना है?

- (A) 70.8 %      (B) 82.5%      (C) 80.72%      (D) 68.52%      (E) None of these



0:30

**Q2 :-** What is the ratio of persons in city B to the unemployed persons of city B ?  
शहर B में व्यक्तियों का शहर B के बेरोजगार व्यक्तियों से अनुपात कितना है?

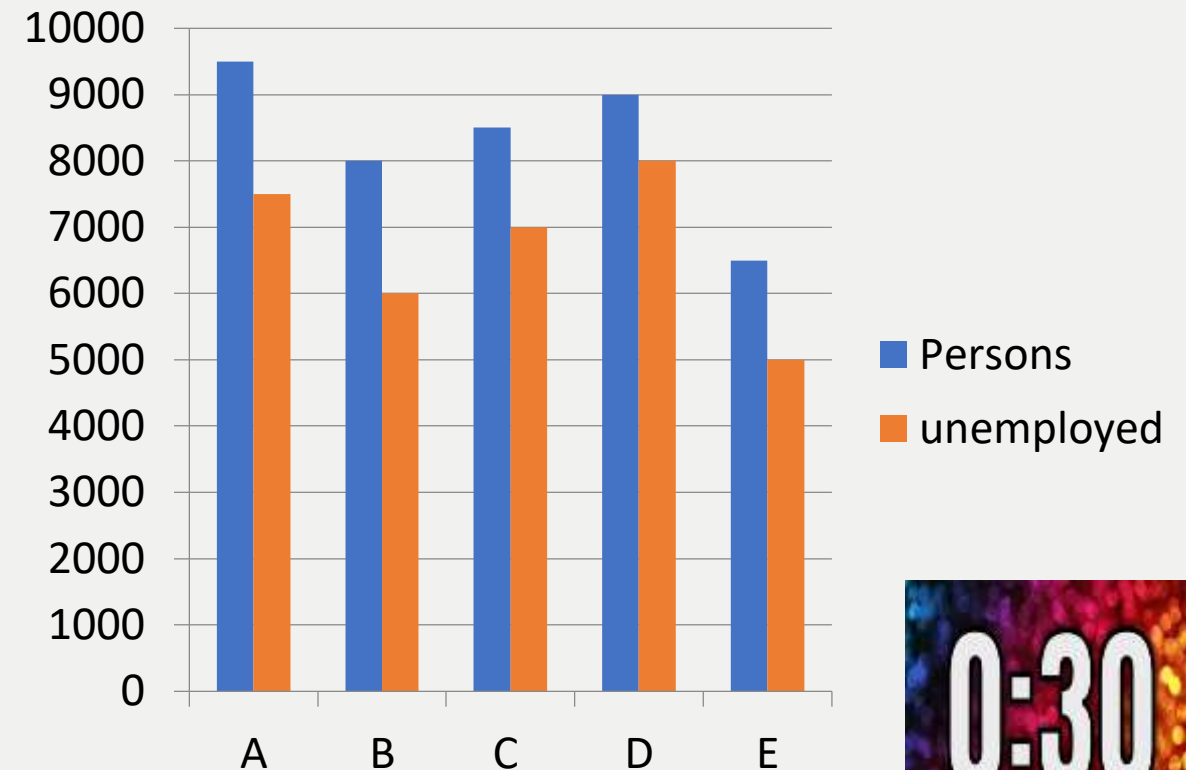
(A)4:3

(B)3:4

(C)2:3

(D)1:2

(E)4:5



0:30

**Q.3 :-** What is the percentage difference between of unemployed persons in city B to the percentage of unemployed person in city D ?

शहर B में बेरोजगार व्यक्तियों का शहर D में बेरोजगार व्यक्तियों के प्रतिशत के बीच कितने प्रतिशत का अंतर है?

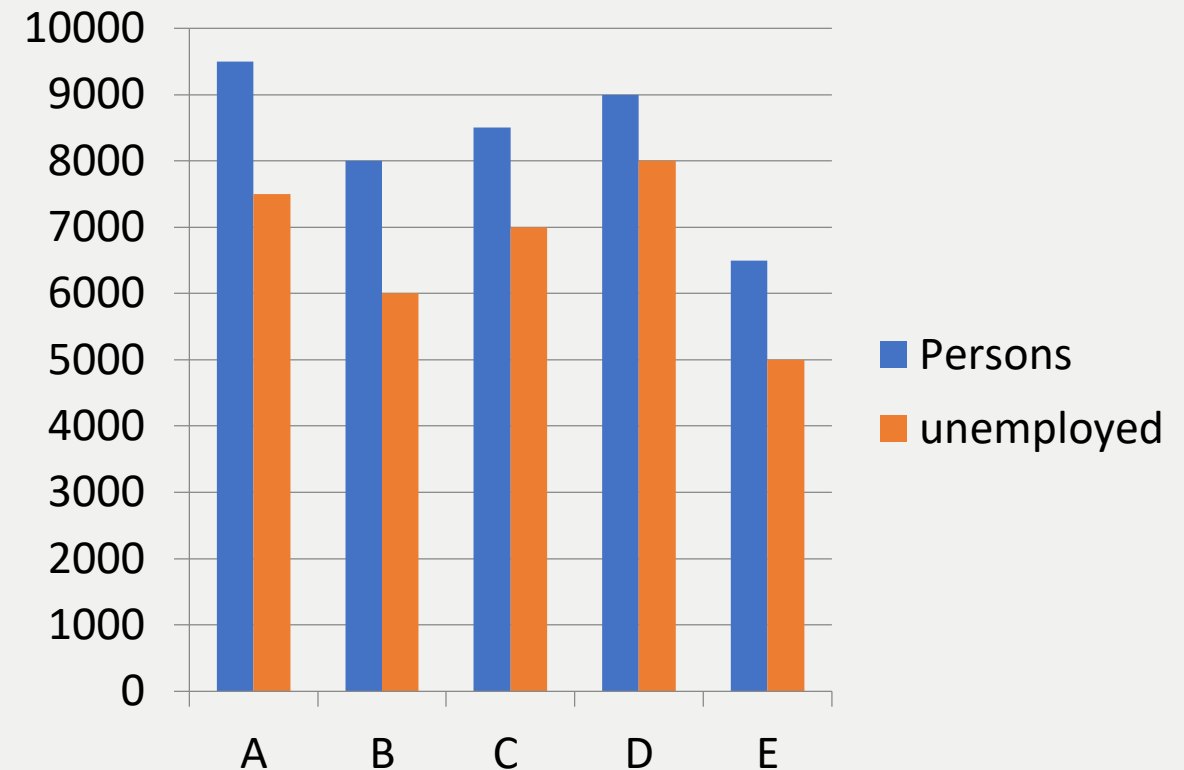
(A) 12.5%

(B) 11.11%

(C) 16.67%

(D) 13.88%

(E) 14.27%



**Q.4 :-** What is the ratio between the percentage of unemployed persons in city A to the percentage of employed person in city B ?

शहर A में बेरोजगार व्यक्तियों के प्रतिशत का शहर B में नियोजित व्यक्ति के प्रतिशत के बीच का अनुपात क्या है?

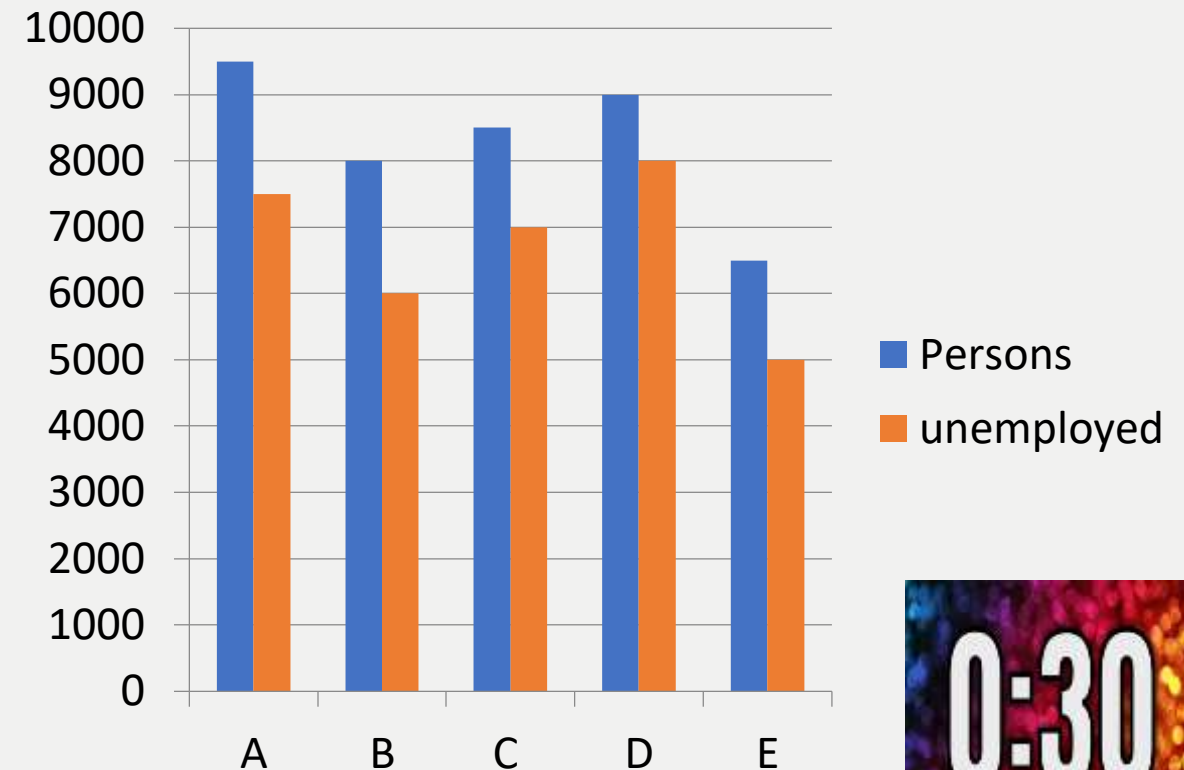
(A)3:4

(B) 15:19

(C)22:23

(D)60:19

(E)20:19



0:30

**Q.5 :-** What is the ratio between number of unemployed persons to the number of employed persons ?

**बेरोजगार व्यक्तियों की संख्या का नियोजित व्यक्तियों की संख्या से अनुपात क्या है?**

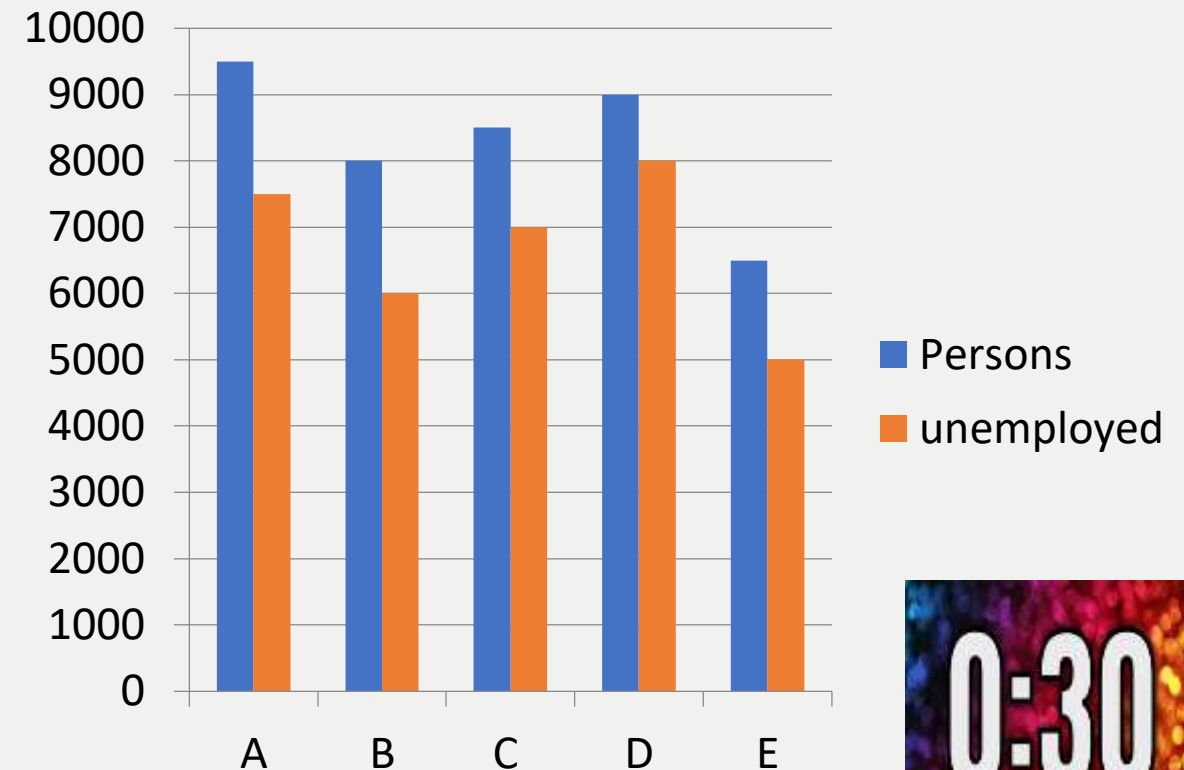
(A)15:19

(B)22:23

(C)18:17

(D)19:23

(E)67:16



0:30

**6 . A 10 kg mixture of sand and salt 40% is sand. How much salt should be added so that ratio of salt and sand became 4:1 in new mixture?**

**बालू और नमक के 10 किलो मिश्रण में 40% बालू है, इसमें कितना नमक और मिला दे कि मिश्रण में नमक व बालू का अनुपात 4 : 1 हो जाये?**

**(A) 4kg**

**(B) 10 kg**

**(C) 5 kg**

**(D) CND**

**(E) None of these**



**0:30**

**7. A dice is thrown twice what is the probability of getting a sum more than 9 from the both throws?**

**एक पासे को दो बार फेंका जाता है। दोनों बार में आने वाले अंको का योग 9 से अधिक होने की क्या सम्भावना होगी?**

**(A)  $5/36$**

**(B)  $1/9$**

**(C)  $1/6$**

**(D)  $1/3$**

**(E) None of these**



**0:30**



8. Ravi decided to donate 15% of his monthly salary to an NGO. On the day of donation he changed her mind and donated Rs. 6864 which is 80% of what he had decided earlier. How much is Ravi's monthly salary?

रवि अपनी मासिक आय का 15% एक NGO में दान करने का निर्णय लेता है दान के दिन उसका दिमाग बदल जाता है, और वह रू. 6864 दान करता है, जो कि उसके द्वारा पूर्व में तय की गई राशि का 80% है। रवि की मासिक आय ज्ञात कीजिए?

(A)57200

(B) 5720

(C)48900

(D)CND

(E)None of these

0:30

**THANKS**

