



 *Mahendra's*

UP Police कांस्टेबल

REASONING

LIVE EXAM



 **4:00 PM**

LIVE 



सरस्वती नमस्तुभ्यं, वरदे कामरूपिणी ।
विद्यारम्भं करिष्यामि सिद्धिर्भवतु मे सदा ॥

बसंत पंचमी की हार्दिक शुभकामनाएँ



Don't Let Your Studies Get Impacted By COVID-19 Pandemic

Stay Home & Study Online With Mahendras Hybrid Model

Features

- Offline Classes ↔ Live Interactive Online Classes
- Same Faculty
- Same Batch
- Same Batch Timing
- Online Library Facility
- Recorded Video
- PDFs
- Classes In Both Model

CONTACT US:

1800-103-5225

www.mahendras.org





UPCOMING ONLINE BATCHES

February 2022

02 Feb 2022

08:00 AM to 10:00 AM
BANK ONLINE LIVE CLASS

05:30 PM to 07:30 PM
BANK ONLINE LIVE CLASS

01:00 PM to 03:00 PM
SSC ONLINE LIVE CLASS

10:30 AM to 12:30 PM
SSC ONLINE LIVE CLASS

BILINGUAL

09 Feb 2022

10:30 AM to 12:30 PM
BANK ONLINE LIVE CLASS

03:00 PM to 05:00 PM
BANK ONLINE LIVE CLASS

05:30 PM to 07:30 PM
SSC ONLINE LIVE CLASS

BILINGUAL

16 Feb 2022

01:00 PM to 03:00 PM
BANK ONLINE LIVE CLASS

08:00 AM to 10:00 AM
BANK ONLINE LIVE CLASS

07:30 PM to 09:30 PM
SSC ONLINE LIVE CLASS

03:00 PM to 05:00 PM
SSC ONLINE LIVE CLASS

BILINGUAL

23 Feb 2022

10:30 AM to 12:30 PM
BANK ONLINE LIVE CLASS

08:00 AM to 10:00 AM
SSC ONLINE LIVE CLASS

01:00 PM to 03:00 PM
SSC ONLINE LIVE CLASS

BILINGUAL

08:00 AM to 10:00 AM
SSC ONLINE LIVE CLASS
(SSC CGL & CHSL)

ENGLISH MEDIUM

07:30 PM to 09:30 PM
BANK ONLINE LIVE CLASS
(BANK PO & CLERK)

ENGLISH MEDIUM



🌸 PUJA KUNDU 🌸 17 hours ago

The ans is 37 🚩🚩🚩🚩🚩.....AMAZING SESSION SIR AND THANK YOU SOO MUCH SIR FOR THE SESSION 🙏🙏🙏🙏🙏

👍 1 🗨️ 📌 ▼ 📄 REPLY

▶ [View reply from Mahendras : Online Videos For Govt. Exams](#)



Viśhñù Güptá 12 hours ago

37 is the right ans

Very super Dhashu session sir thank you 🙏 sir love ❤️ you sir

👍 1 🗨️ 📌 ▼ 📄 REPLY

▶ [View reply from Mahendras : Online Videos For Govt. Exams](#)



Shruti Jain 2 hours ago

37 nice session sir.👏

👍 1 🗨️ 📌 ▼ 📄 REPLY

▶ [View reply from Mahendras : Online Videos For Govt. Exams](#)



Ankit Vish 17 hours ago

Answer. 37

Nice session sir 🙏🙏

👍 2 🗨️ 📌 ▼ 📄 REPLY

▶ [View reply from Mahendras : Online Videos For Govt. Exams](#)



SANIA _____ 4 hours ago

shaandaar session sir 🙏

37 🔥🔥🔥🔥

👍 🗨️ 📄 ▼ 📄 REPLY

▶ [View reply from Mahendras : Online Videos For Govt.](#)



puspranjan singh 17 hours ago

Sir 🙏🙏🙏🙏🙏

👍 1 🗨️ 📄 ▼ 📄 REPLY



PRNOTI BISWAS 14 hours ago

The home work answer is 37.

👍 1 🗨️ 📄 ▼ 📄 REPLY

▶ [View reply from Mahendras : Online Videos For Govt. Exams](#)



puspranjan singh 17 hours ago

37

👍 2 🗨️ 📄 ▼ 📄 REPLY

▶ [View reply from Mahendras : Online Videos For Govt. Exams](#)



ANNU LATA 15 hours ago

37 is right ans

👍 1 🗨️ 📄 ▼ 📄 REPLY

▶ [View reply from Mahendras : Online Videos For Govt. Exams](#)



kuldeep singh 16 hours ago

37 is right ans

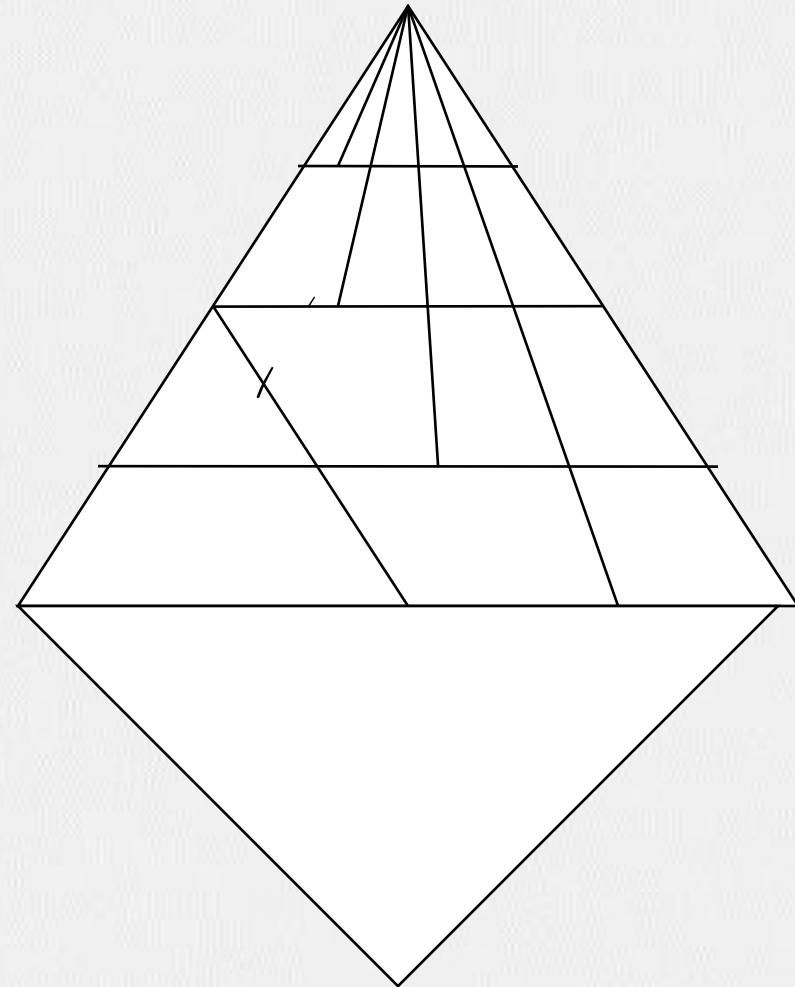
👍 1 🗨️ 📄 ▼ 📄 REPLY

▶ [View reply from Mahendras : Online Videos For Govt. Exams](#)

Find number of triangle in the given figure ?

दी गई आकृति में त्रिभुज की संख्या ज्ञात कीजिए?

- (A) 37**
- (B) 35**
- (C) 36**
- (D) 38**



Find the missing (?)

EDUCATION = 192021451420

GOVERNMENT =

(A) 1651516125

(B) 10152

(C) 3118

(D) 4516118201351420



There are two married couples in a family . % has two children . A is the wife of @ who is brother of # . F is daughter of % . U is sister of S who is son of @ . T is son of # who is male .

एक परिवार में दो विवाहित जोड़े हैं। % के दो बच्चे हैं। A, @ की पत्नी है जो # का भाई है। F, % की बेटी है। U, S का पुत्र है जो @ का पुत्र है। T, # का पुत्र है जो पुरुष है।

How is A related to % ?

A, % से कैसे संबंधित है?

1. SON
2. Sister in Law
3. Brother
4. Brother in Law



Find the missing (?)

YOGHURT = 7678392

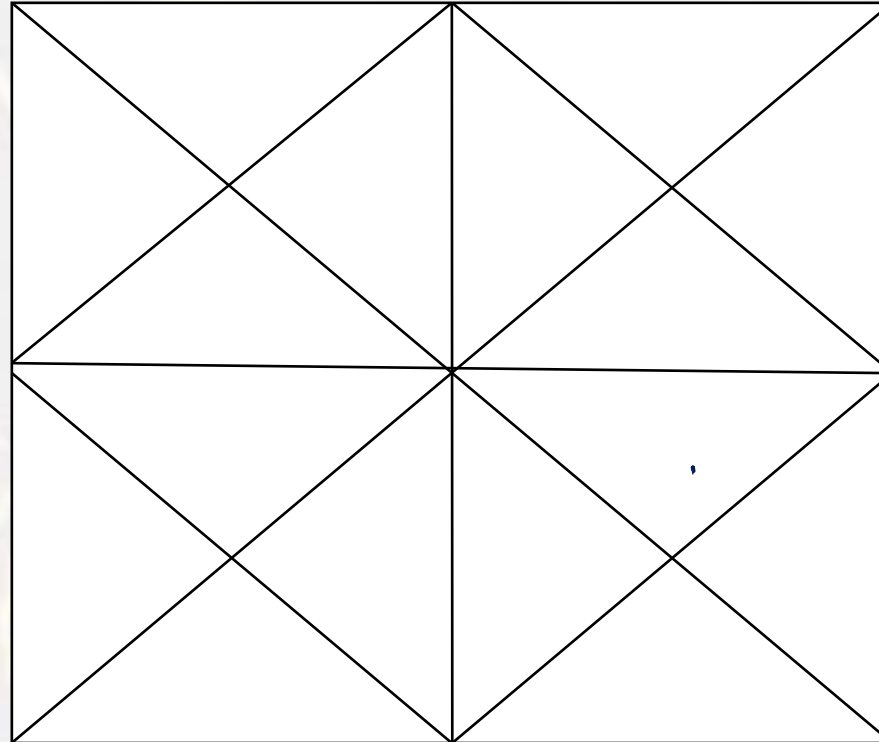
QUICKLY = ?

1. **8393117**
2. **8393237**
3. **7383237**
4. **8393227**



Find number of triangle in figure?

- (A) 48
- (B) 46
- (C) 44
- (D) 42



Find the missing term(?)

$$16 : 56 :: 32 : ?$$

- (A) 96
- (B) 112
- (C) 118
- (D) 128



Find the option which should replace (?)

$$9 \# 3 = 6$$

$$15 \# 3 = 9$$

$$27 \# 3 = ?$$

A. 10

B. 15

C. 20

D. 25



Find the option which should replace (?)

$$42 : 23 :: 123 : ?$$

- A. 41
- B. 42
- C. 44
- D. 45



Find the option which should replace (?)

45 : 7 :: 53 : ?

- A. 5
- B. 4
- C. 3
- D. 2



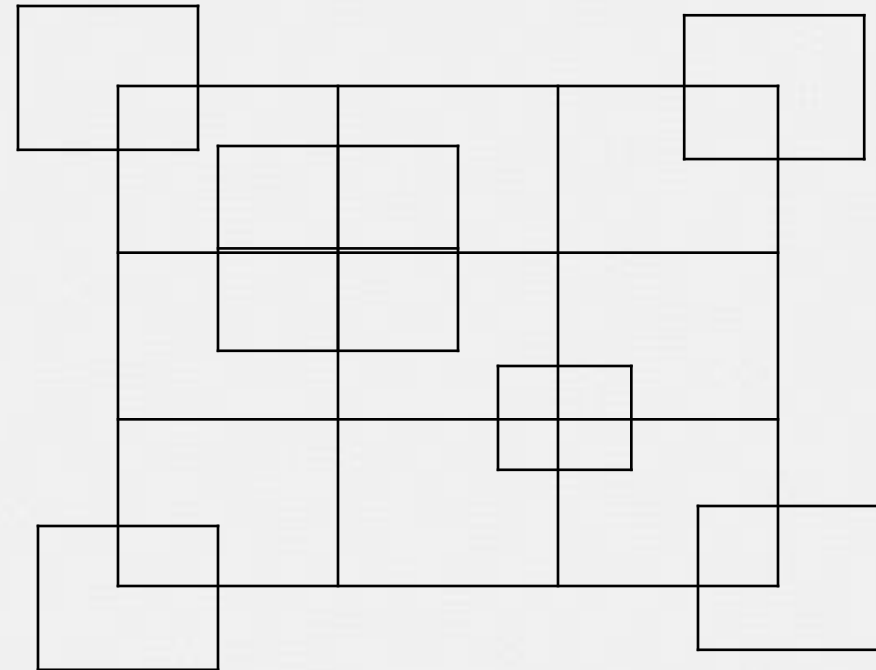
Find number of squares in figure?

(A) 25

(B) 35

(C) 32

(D) 30



Find the missing term(?)

$$5 : 421 :: 7 : ?$$

- (A) 125
- (B) 248
- (C) 243
- (D) 343



Arrange in dictionary order :

1. **Creates**
2. **Critically**
3. **Crores**
4. **Crucially**

- A. **4,2,1,3**
- B. **2,4,1,3**
- C. **1,2,3,4**
- D. **3,1,4,2**



Find the option which should replace (?)

If $67 = 4$; $69 = 6$, then $79 = ?$

- (A) 6
- (B) 7
- (C) 8
- (D) 9



Find the missing one (?)

$$8 : 12 :: 6 : ?$$

- (A) 8
- (B) 5
- (C) 11
- (D) 7

