

# SSC GD 2021



REASONING

25 कदम  
Exam की ओर.....

Complete  
MOCK TEST

25/25

LIVE

8:30 PM





# Don't Let Your Studies Get Impacted By COVID-19 Pandemic

Stay Home & Study Online With Mahendras Hybrid Model

## Features



Offline Classes



Live Interactive Online Classes



Same Faculty



Same Batch



Same Batch Timing



Online Library Facility



Recorded Video



PDFs



Classes In Both Model

CONTACT US:

1800-103-5225

[www.mahendras.org](http://www.mahendras.org)





# UPCOMING ONLINE BATCHES

## November 2021

03 Nov 2021

10:30 AM to 12:30 PM

**LIVE PREMIUM GREEN CARD**  
(BANK-PO & CLERK)

01:00 PM to 03:00 PM

**LIVE PREMIUM GREEN CARD**  
(BANK-PO & CLERK)

05:30 PM to 07:30 PM

**LIVE PREMIUM SILVER CARD**  
(SSC CGL & CHSL)

**BILINGUAL**

10 Nov 2021

03:00 PM to 05:00 PM

**LIVE PREMIUM GREEN CARD**  
(BANK-PO & CLERK)

08:00 AM to 10:00 AM

**LIVE PREMIUM SILVER CARD**  
(SSC CGL & CHSL)

**BILINGUAL**

17 Nov 2021

08:00 AM to 10:00 AM

**LIVE PREMIUM GREEN CARD**  
(BANK-PO & CLERK)

05:30 PM to 07:30 PM

**LIVE PREMIUM GREEN CARD**  
(BANK-PO & CLERK)

10:30 AM to 12:30 PM

**LIVE PREMIUM SILVER CARD**  
(SSC CGL & CHSL)

**BILINGUAL**

24 Nov 2021

10:30 AM to 12:30 PM

**LIVE PREMIUM GREEN CARD**  
(BANK-PO & CLERK)

07:30 PM to 09:30 PM

**LIVE PREMIUM GREEN CARD**  
(BANK-PO & CLERK)

03:00 PM to 05:00 PM

**LIVE PREMIUM SILVER CARD**  
(SSC CGL & CHSL)

**BILINGUAL**





🌸 PUJA KUNDU 🌸 12 hours ago

30 is the correct answer.....SUPERB SESSION SIR 🔥🔥 THANK YOU SOO MUCH SIR FOR THE AMAZING SESSION 🙏🙏🙏🙏

👍 1 🗨️ REPLY

▼ [View reply from Mahendras : Online Videos For Govt. Exams](#)



Viśhñù Güptâ 12 hours ago

30 is the right ans

Very nice session sir thank you 🙏 sir ❤️

👍 1 🗨️ REPLY

▼ [View reply from Mahendras : Online Videos For Govt. Exams](#)



Radha Garima 3 hours ago

Answer: 30

Nice session sir 🙏

👍 🗨️ REPLY



SANIA \_\_\_\_\_ 4 hours ago

Awesome session sir 🙏🙏🙏

30 🔥🔥🔥

👍 🗨️ REPLY



Itu Soren 2 hours ago

Ans:- 30

Very nice session 🙏🙏

👍 🗨️ REPLY



Ankit Vish 12 hours ago

Answer. 30

Nice session sir 🙏🙏

👍 2 🗨️ REPLY

▶ [View reply from Mahendras : Online Videos For Govt. Exams](#)



himani gupta 12 hours ago

Sir please SSC MTS ka 2nd exam k baare m btado kase preparation krni h 🙏 ???????????

👍 🗨️ REPLY



puspranjan singh 2 hours ago

Good session sir

👍 🗨️ REPLY



future YT's 12 hours ago

30 thank you sir

👍 1 🗨️ REPLY

▶ [View reply from Mahendras : Online Videos For Govt. Exams](#)



puspranjan singh 2 hours ago

Sir grup d ka kya hoga

👍 🗨️ REPLY



RANJU KUMARI 12 hours ago

Ans\_\_\_\_\_30 👍

👍 1 🗨️ REPLY



**Shruti Jain** 2 hours ago

30, 👍 👍 👍

👍 🗨️ REPLY



**Abhishek Pandey** 11 hours ago

answer is 30

👍 1 🗨️ REPLY

▼ [View reply from Mahendras : Online Videos](#)



**Preeti** 12 hours ago

30

👍 1 🗨️ REPLY

▼ [View reply from Mahendras : Online Videos](#)



**Hrithik\_\_\_\_\_** 12 hours ago

30

👍 1 🗨️ REPLY

▼ [View reply from Mahendras : Online Videos](#)



**Kapil Bhagat** 12 hours ago

30

👍 🗨️ REPLY

**Pinki ranks 16th from the top and 15th from the bottom in a class. How many students are there in the class?**

**पिंकी एक कक्षा में 16 वीं और नीचे से 15 वीं रैंक पर है। वहाँ कक्षा में कितने छात्र हैं?**

- 1. 30**
- 2. 31**
- 3. 32**
- 4. Cannot be determined /निर्धारित नहीं किया जा सकता है**



Find the missing :-

Aman = 42

Shivam = 62

Bhim = ?

1. 32
2. 41
3. 55
4. 64





Find the option which should replace (?)

$$8 : 10 :: 5 : ?$$

- A. 25
- B. 10
- C. 20
- D. 15





**What will be right order of**

- I. Treatment / इलाज
- II. Diagnosis / निदान
- III. Doctor / चिकित्सक
- IV. Discharge / मुक्ति
- V. Bill / बिल

- (A) 1 ,2, 3, 4 , 5
- (B) 5 , 4 ,3, 2, 1
- (C) 3 , 2 ,1 , 5, 4
- (D) 1 , 3, 2 , 4 ,5

**Find the odd one out(?)**

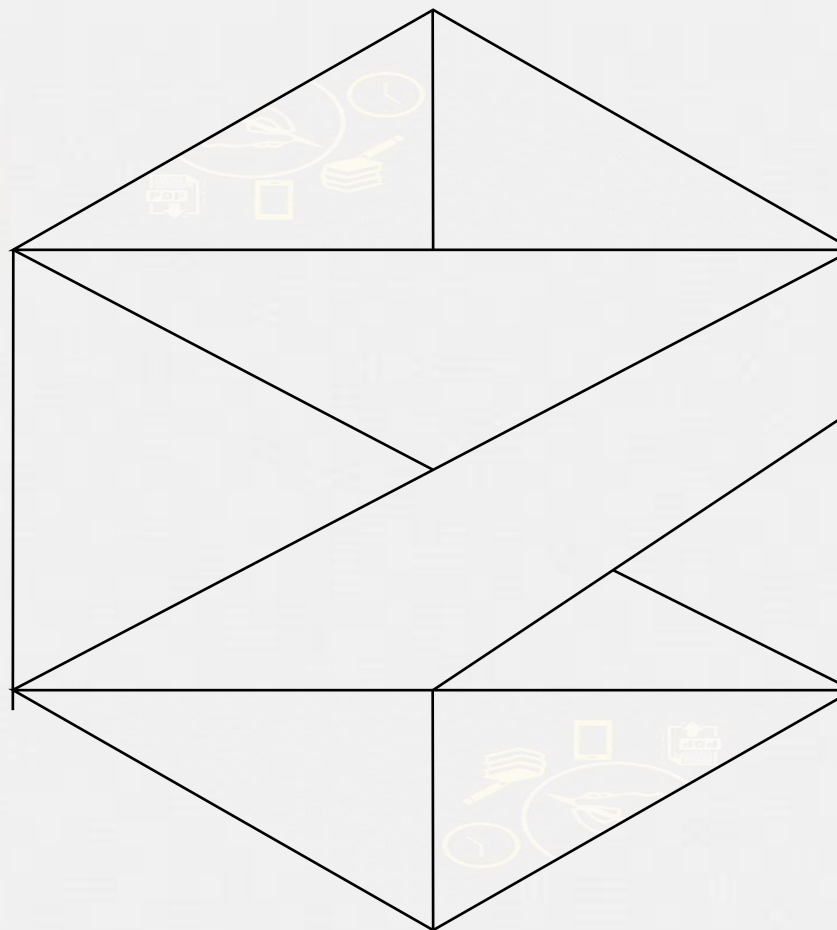


- A. O – 16 - Q**
- B. R – 19 - T**
- C. E – 6 - G**
- D. S – 19 - T**

**Find the number of triangle (?)**



- (A) 12**
- (B) 13**
- (C) 17**
- (D) NOT**



Find the option which should replace (?)

**5 : 10 :: 9 : ?**

- A. 81
- B. 8
- C. 27
- D. 9



Find the option which should replace (?)



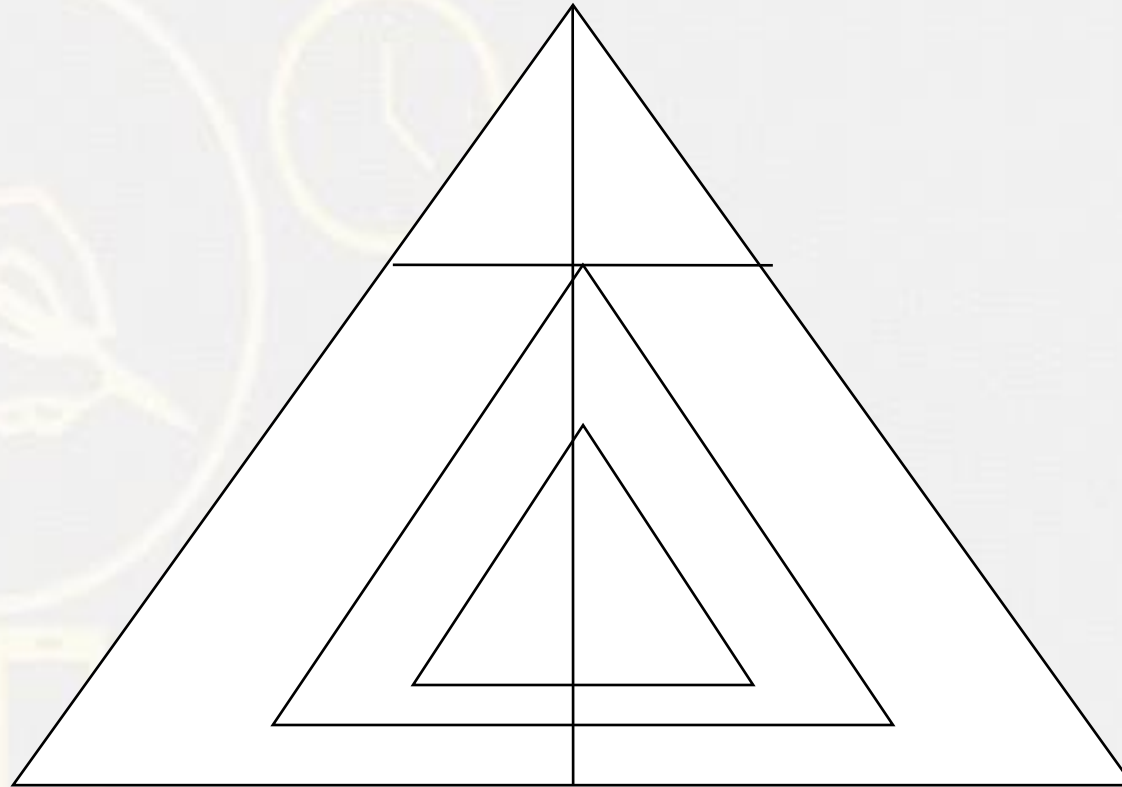
**OY : 28 :: LY : ?**

- A. 12
- B. 25
- C. 29
- D. 30

**Find number of triangle in the given figure ?**

**दी गई आकृति में त्रिभुज की संख्या ज्ञात कीजिए?**

- (A) 12**
- (B) 14**
- (C) 18**
- (D) 20**



Find the missing one (?)

Pen : Poet :: Needle : ?

कलम : कवि :: सुई : ?

- (A) Thread / धागा
- (B) Button / बटन
- (C) Sewing / सिलाई
- (D) Tailor / दर्जी





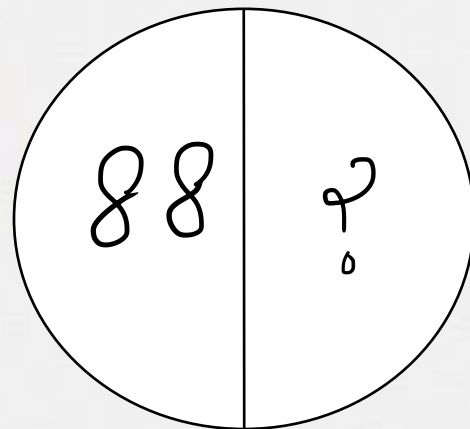
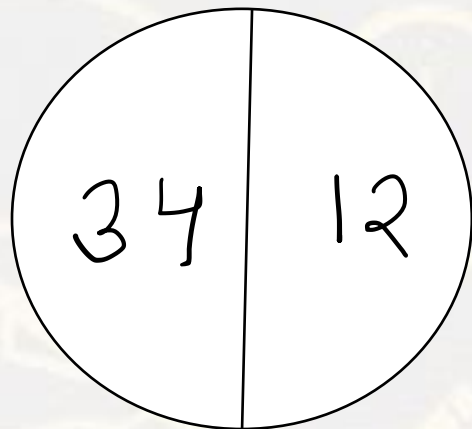
Find the option which should replace (?)



**AF : 33 :: HE : ?**

- (A) 34**
- (B) 49**
- (C) 56**
- (D) 43**

Find the missing one (?)




- (A) 36
- (B) 64
- (C) 49
- (D) 34

Find the odd one (?)




- (A) Analysis / विश्लेषण
- (B) Search / खोज
- (C) Conclusion / निष्कर्ष
- (D) Exploration / अन्वेषण


Choose a figure which would most closely resemble the unfolded form of Figure (Z).



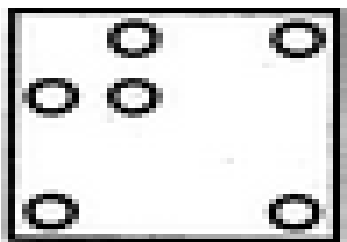
X




Y




Z



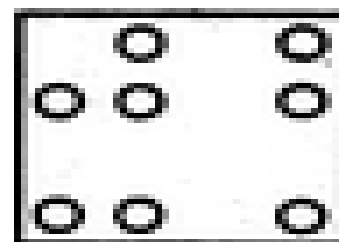
(1)



(2)



(3)



(4)

- A. 1
- B. 2
- C. 3
- D. 4

Find the option which should replace (?)



**17 : 144.5 :: 13 : ?**

- A. 87.5
- B. 86.25
- C. 84.5
- D. 81.25

Time of **2 : 12 : 20** is being seen in the mirror , what time will it show ?

**2:12:20** का समय दर्पण में देखा जा रहा है, यह किस समय दिखाई देगा?

- (A) 9 : 47 : 40
- (B) 9 : 45 : 41
- (C) 9 : 42 : 43
- (D) 9 : 41 : 45

