

SSC MTS/HAWALDAR/CHSL



REASONING

LIVE EXAM

तैयारी जीत की...

LIVE

08:30 PM





UPCOMING ONLINE BATCHES

May 2022

04 May 2022

05:30 PM to 07:30 PM

BANK ONLINE LIVE CLASS

10:30 AM to 12:30 PM

SSC ONLINE LIVE CLASS

BILINGUAL

11 May 2022

10:30 AM to 12:30 PM

BANK ONLINE LIVE CLASS

01:00 PM to 03:00 PM

SSC ONLINE LIVE CLASS

BILINGUAL

18 May 2022

07:30 PM to 09:30 PM

BANK ONLINE LIVE CLASS

05:30 PM to 07:30 PM

SSC ONLINE LIVE CLASS

BILINGUAL

25 May 2022

03:00 PM to 05:00 PM

BANK ONLINE LIVE CLASS

08:00 AM to 10:00 AM

SSC ONLINE LIVE CLASS

BILINGUAL

04:00 PM to 06:00 PM

BANK ONLINE LIVE CLASS

ENGLISH & BENGALI



🌸 PUJA KUNDU 🌸 12 hours ago 8 subscribers

The answer is ----201//(67×3=201).....thank you sir for the amazing session 🔥🔥🔥🔥🙏🙏🙏

👍 🗨️ 📌 ▼ 📄 REPLY ➡



Vishnu Gupta 12 hours ago 3 subscribers

67x3=201 is the right ans

Very nice session sir thank you 🙏 sir ❤️ 😊

👍 🗨️ 📌 ▼ 📄 REPLY ➡



RIYA 😊😊 12 hours ago

201

Nice session sir 🙏

👍 🗨️ 📌 ▼ 📄 REPLY ➡



Shruti Jain 2 hours ago 11 subscribers

Nice session sir.

👍 🗨️ 📌 ▼ 📄 REPLY ➡



kuldeep singh 3 hours ago

201 is right ans

👍 🗨️ 📌 ▼ 📄 REPLY ➡



Bhavya thakur 12 hours ago 1 subscribers

201 👍

👍 🗨️ 📌 ▼ 📄 REPLY ➡



Puspranjan Singh 12 hours ago 2 subscribers

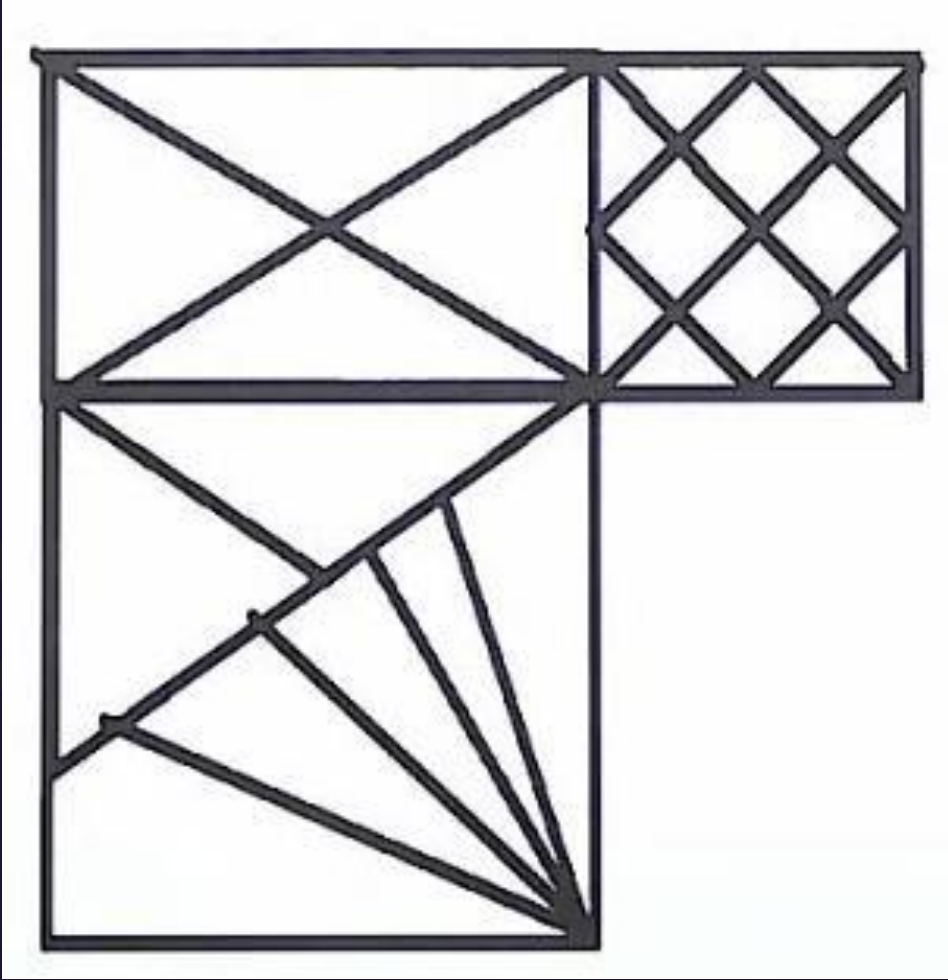
201

👍 🗨️ 📌 ▼ 📄 REPLY ➡



Find the TRIANGLE (?)

- (A) 42
- (B) 46
- (C) 49
- (D) NOT





SSC MTS/HAWALDAR/CHSL

Live at 08:30 PM



Find the Odd (?)

- (A) 84 , 861**
- (B) 63 , 621**
- (C) 74 , 841**
- (D) 93 , 971**





Find the option which should replace (?)



CFJO : EINT :: ? : UYDJ


- A. WAHO
- B. WBHO
- C. SUZE
- D. SVZE



Find the option which should replace (?)

C, J, R, A, K, ?

- A. W**
- B. U**
- C. V**
- D. X**





Find the option which should replace (?)



METHAN = 10

METHANOL = 14

METHYLENE = ?

A. 18

B. 16

C. 14

D. 12

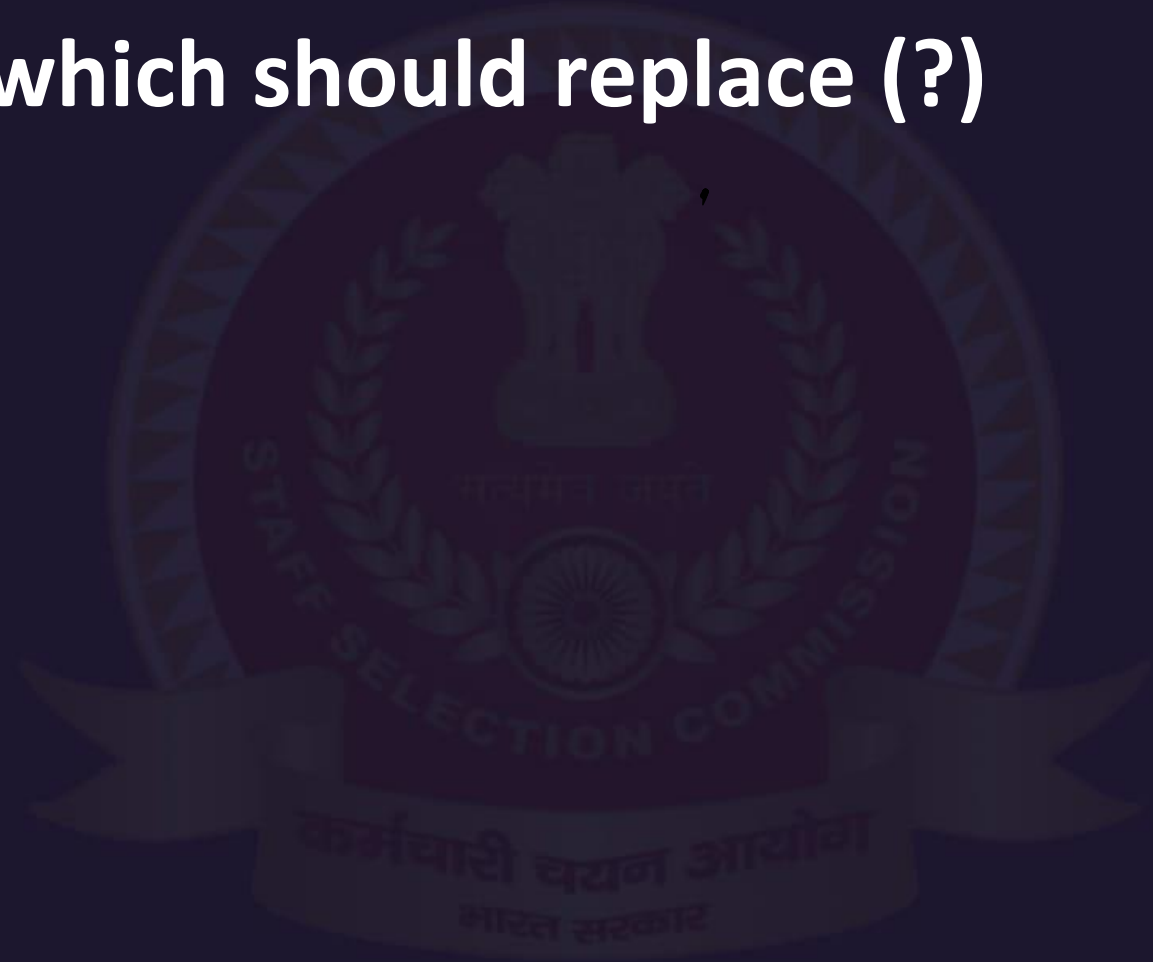




Find the option which should replace (?)

D : 47 :: G : ?

- A. 67**
- B. 59**
- C. 41**
- D. 75**





Find the option which should replace (?)



$$76 < 26 = 25$$

$$29 > 13 = 21$$

$$64 > 14 = ?$$

- A. 35
- B. 23
- C. 39
- D. 26

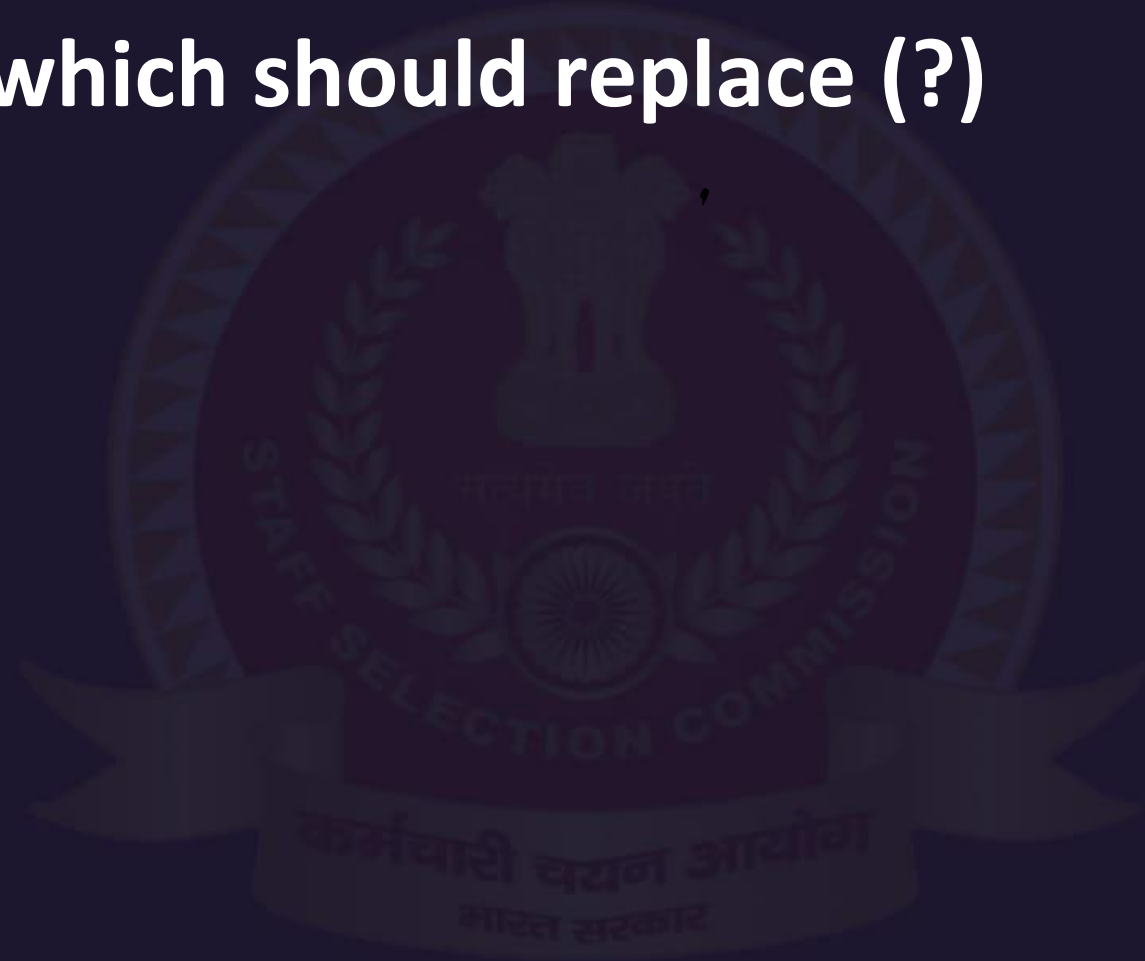




Find the option which should replace (?)

84 : 96 :: 36 : ?

- A. 124**
- B. 125**
- C. 126**
- D. 128**





Find the option which should replace (?)



PLANE = 43

PSRIC = 62

PENCIL = ?

A. 54

B. 47

C. 56

D. 48





Find the missing (?)



ZIYAD = 12181024

FURKY = 6428110

LAVUE = ?

(A) 2424120

(B) 2244210

(C) 2424210

(D) 2244120



Find the option which should replace (?)

96 : 500 :: 128 : ?

- (A) 680
- (B) 620
- (C) 660
- (D) 600





Find the option which should replace (?)

- (A) 18
- (B) 24
- (C) 12
- (D) 25

4	3	32
8	4	128
6	12	?





Find the missing ONE (?)

HACT : FWYR :: ROLE : ?

- (A) PKIC
- (B) VNKH
- (C) UNKH
- (D) UKIH





Find the missing ONE (?)

8 , 3 , 10 , 22 : ?

(A) 7 , 4 , 22 , 6

(B) 9 , 4 , 10 , 26

(C) 6 , 4 , 4 , 18


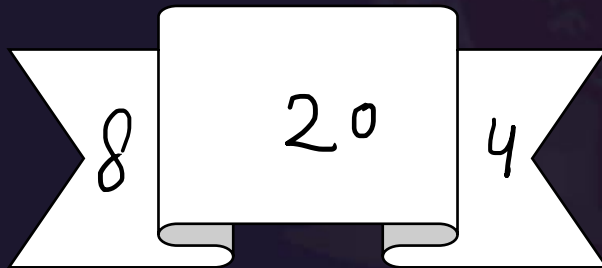
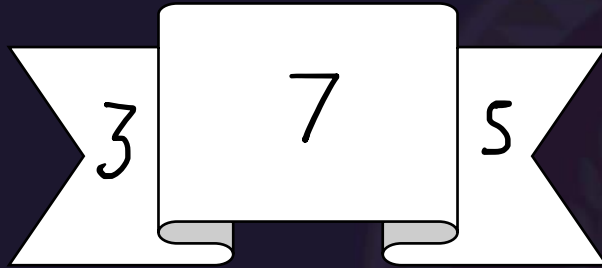
(D) 5 , 2 , 14 , 6





Find the missing ONE (?)

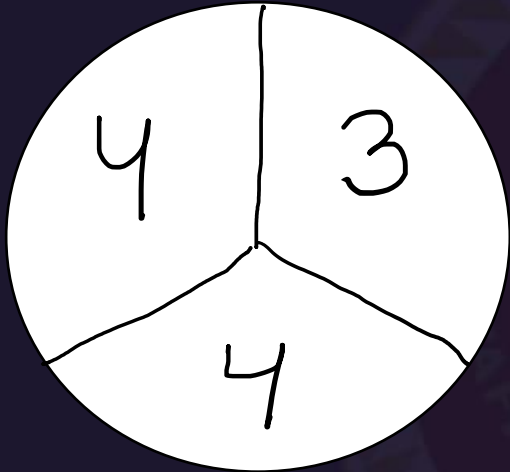
- (A) 9
- (B) 7
- (C) 5
- (D) 3





Find the missing ONE (?)

- (A) 12
- (B) 8
- (C) 10
- (D) 6





Find the missing ONE (?)

578519 : 59 :: 981947 : ?

- (A) 46
- (B) 34
- (C) 64
- (D) 43

