



SSC MTS 2022-23



REASONING

SESSION-I

LIVE TEST

WITH TIMER



BASED ON PREVIOUS YEAR QUESTIONS

📶 LIVE | 03:00 PM

BY KULDEEP MAHENDRAS





UPCOMING ONLINE BATCHES

February 2023

08 FEB 2023

03:00 PM to 05:00 PM

SSC ONLINE LIVE CLASS

BILINGUAL

15 FEB 2023

10:30 AM to 12:30 PM

BANK ONLINE LIVE CLASS

BILINGUAL

15 FEB 2023

06:30 PM to 08:30 PM

BANK ONLINE LIVE CLASS

English & Bengali



www.mahendras.org •  7052477777/7052577777



14.6 Computer Based Examination:

Part	Subject	Number of Questions/ Maximum Marks	Time Duration (For all four Parts)
Session-I			45 Minutes (60 Minutes for candidates eligible for scribes as per para 8)
I	Numerical and Mathematical Ability	20/60	
II	Reasoning Ability and Problem Solving	20/60	
Session-II			45 Minutes (60 Minutes for candidates eligible for scribes as per para 8)
I	General Awareness	25/75	
II	English Language and Comprehension	25/75	



SSC MTS 2022-23

LIVE at 3:00 PM

	UR	OBC	SC	ST	EWS	TOTAL	ESM	OH	HH	VH	OTHERS
MTS AGE GROUP 18-25	4115	2505	1051	679	979	9329	979	104	131	119	58
MTS AGE GROUP 18-27	1085	723	358	216	283	2665	222	36	36	32	18
Havaldar in CBIC	201	143	106	29	50	529	53	8	7	0	6
Grand Total	5401	3371	1515	924	1312	12523	1254	148	174	151	82



GAJENDRA KAPOOR 4 days ago

Good afternoon sir



Abhishek Chauhan 4 days ago 1 subscribers

15 is right sir 👍



📄 • 1 reply



Suruchi Jha 4 days ago

Hw answer option B Thankyou sir 🙏



📄 • 1 reply



Surbhi Sinha 4 days ago 4 subscribers

Homework question answer 🙏 15



📄 • 1 reply




See Singh 4 days ago

A




GAJENDRA KAPOOR 4 days ago

13



See Singh 4 days ago

B



Ravi Patel 4 days ago 5 subscribers

15



📄 • 1 reply



See Singh 4 days ago (edited)

D




📄 2 replies



Kumar Bablu 3 days ago

15 is right



📄 • 1 reply

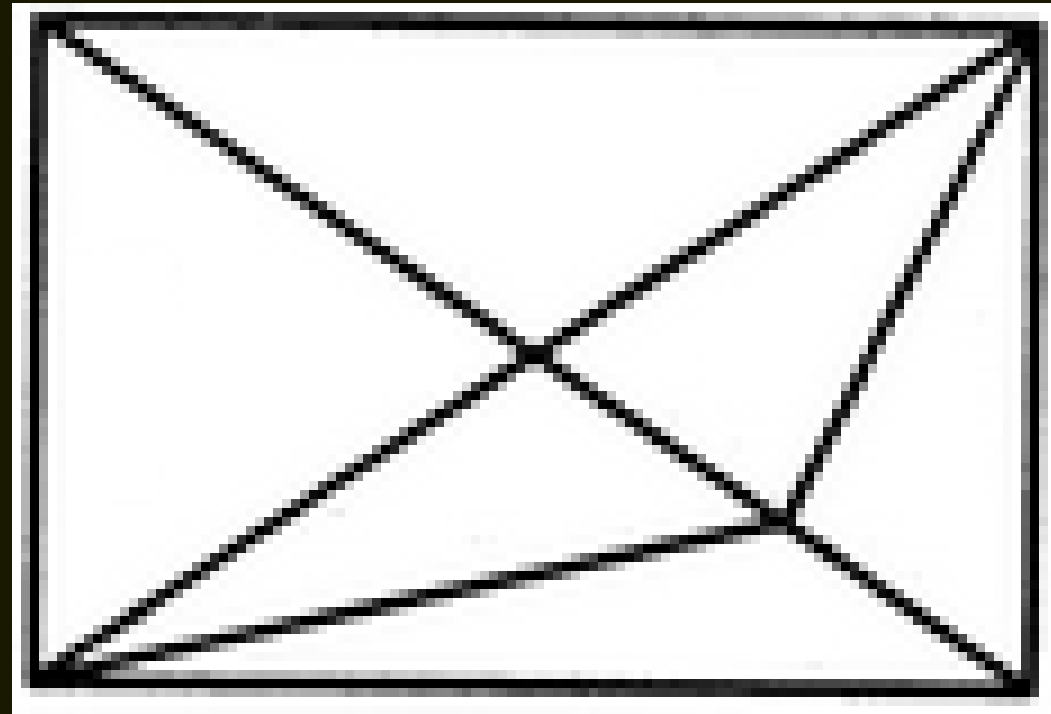


SSC MTS 2022-23

LIVE at 3:00 PM

Find the number of triangles in the given figure.

दिए गए आंकड़े में त्रिकोणों की संख्या ज्ञात कीजिए।



- A.11
- B.13
- C.15
- D.17



Find the missing ONE (?)



- (A) 34
- (B) 12
- (C) 99
- (D) 104

5	4	41
7	3	58
10	2	?



SSC MTS 2022-23

LIVE at 3:00 PM

Find the missing ONE (?)

14 : 495 :: 21 : ?




- (A) 420**
- (B) 440**
- (C) 460**
- (D) 480**



Find the triangle (?)

- 1. 15**
- 2. 17**
- 3. 18**
- 4. 16**





SSC MTS 2022-23

LIVE at 3:00 PM

Find the missing :-

Soldier : Rifle :: Writer : ?
सैनिक : राइफल :: लेखक : ?



- (A) Book / किताब**
- (B) Paper / कागज़**
- (C) Pen / कलम**
- (D) Ink / स्याही**



Find the missing ONE (?)

- (A) 54
- (B) 30
- (C) 20
- (D) 50

4	3	2
6	9	10
9	27	?





Yesterday was Tuesday , Which day will lies after 171 days ?

कल मंगलवार था, 171 दिनों के बाद कौन सा दिन होगा?

- 1. Friday**
- 2. Saturday**
- 3. Sunday**
- 4. Monday**





SSC MTS 2022-23

LIVE at 3:00 PM

8	27	17
4	6	6
14	51	31
11	?	19



Find the option which should replace (?)

- (A) 21
- (B) 24
- (C) 35
- (D) 37



SSC MTS 2022-23

LIVE at 3:00 PM

Find the option which should replace (?)

Race : Fatigue :: Fast : ?

दौड़: थकान :: उपवास : ?

A. Food / भोज्यपदार्थ

B. Laziness / आलस्य

C. Hunger / भूख

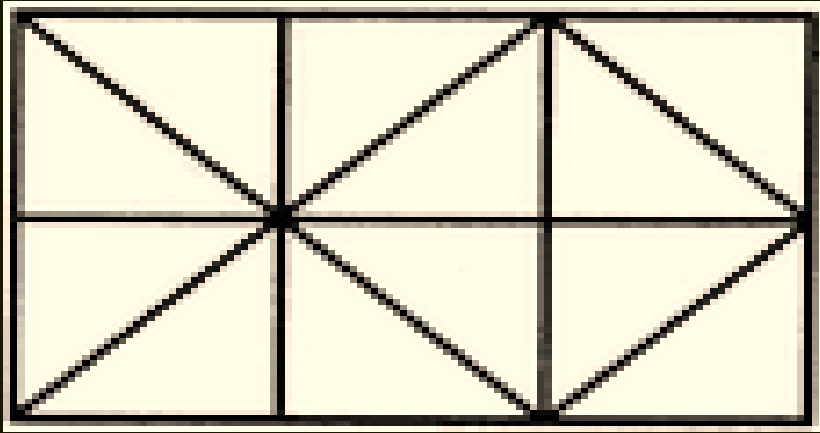
D. Race / रेस





Find number of squares in figure?

- (A) 6
- (B) 7
- (C) 9
- (D) 10





Find the option which should replace (?)

- A. 58
- B. 14
- C. 49
- D. 4

3	4	2	14
6	5	4	44
5	2	7	?



SSC MTS 2022-23

LIVE at 3:00 PM

Find the option which should replace (?)

8 : 10 :: 5 : ?

- A. 25**
- B. 10**
- C. 20**
- D. 15**





Find the option which should replace (?)

$$4 : 12 :: 6 : ?$$



- (A) 19**
- (B) 20**
- (C) 25**
- (D) 30**



Find the option which should replace (?)

08 : 28 :: 15 : ?




- (A) 42**
- (B) 48**
- (C) 56**
- (D) 34**



SSC MTS 2022-23

LIVE at 3:00 PM

How many dots lie opposite to the face having three dots, when the given figure is folded to form a cube?



- A. 2
- B. 4
- C. 5
- D. 6



SSC MTS 2022-23

LIVE at 3:00 PM

Find the option which should replace (?)

Constable , Head constable ,? , Insprctor

- (A) Deputy Superintendent of Police**
- (B) Superintendent of Police**
- (C) Sub Inspector**
- (D) Assitant Commission of Police**





Arrange in dictionary order :

- 1. Creates**
- 2. Critically**
- 3. Crores**
- 4. Crucially**

- A. 4,2,1,3**
- B. 2,4,1,3**
- C. 1,2,3,4**
- D. 3,1,4,2**





SSC MTS 2022-23

LIVE at 3:00 PM

Choose the alternative which is closely resembles the water image of the given combination



E8 t 4 e 9 C

(1) Ǝ8 t 4 9 0 C (2) E8 t 4 9 0 C

(3) Ǝ8 t 4 9 0 C (4) E8 t 4 9 0 C