



# Don't Let Your Studies Get Impacted By COVID-19 Pandemic

Stay Home & Study Online With Mahendras Hybrid Model

## Features



Offline Classes



Live Interactive Online Classes



Same Faculty



Same Batch



Same Batch Timing



Online Library Facility



Recorded Video



PDFs



Classes In Both Model

CONTACT US:

1800-103-5225

[www.mahendras.org](http://www.mahendras.org)





# UPCOMING ONLINE BATCHES

## August 2021

**04 AUG 2021**

10:30 AM to 12:30 PM

**LIVE PREMIUM GREEN CARD**  
(BANK PO & CLERK)

07:30 PM to 09:30 PM

**LIVE PREMIUM SILVER CARD**  
(SSC CGL & CHSL)

07:30 PM to 09:30 PM

**LIVE CLASS COURSE**  
(MATHS)

03:00 PM to 05:00 PM

**LIVE CLASS COURSE**  
(UP SI)

**BILINGUAL**

**11 AUG 2021**

01:00 PM to 03:00 PM

**LIVE CLASS COURSE**  
(TET & CTET)

05:30 PM to 07:30 PM

**LIVE PREMIUM GREEN CARD**  
(BANK PO & CLERK)

08:00 AM to 10:00 AM

**LIVE CLASS COMPLETE COURSE**  
(SSC GD)

**BILINGUAL**

**18 AUG 2021**

08:00 AM to 10:00 AM

**LIVE PREMIUM GREEN CARD**  
(BANK PO & CLERK)

01:00 PM to 03:00 PM

**LIVE PREMIUM SILVER CARD**  
(SSC CGL & CHSL)

**BILINGUAL**

**25 AUG 2021**

07:30 PM to 09:30 PM

**LIVE PREMIUM GREEN CARD**  
(BANK PO & CLERK)

**BILINGUAL**



Mahendra's  
**FREEDOM  
FESTIVAL**

*Best deal*

13th - 15th Aug 2021

Upto

**75%**

Discount

**ON ALL DIGITAL PRODUCTS\***

Use code:

**FREEDOM75**

\*Except branch admission & membership

The Staff Selection Commission has decided to re-schedule its following examinations as per the details given below:

S. No.	Name of Examination	Revised Schedule
1.	Sub-Inspector in Delhi Police, CAPFs and ASI in CISF Examination (Paper-II), 2019	26.07.2021
2.	Combined Higher Secondary (10+2) Level Examination (Tier-I), 2020 - For left-over candidates	04.08.2021-12.08.2021
3.	Combined Graduate Level Examination (Tier-I), 2020	13.08.2021-24.08.2021

<b>S No</b>	<b>Name of Examination</b>	<b>Paper/ Stage</b>	<b>Schedule of Examination</b>
1	Combined Graduate Level Examination-2019	Skill Test	15.09.2021 to 16.09.2021
2	Junior Engineer (Civil, Mechanical, Electrical and Quantity Surveying & Contracts) Examination, 2020	Paper-II	26.09.2021
3	Multi Tasking (Non-Technical) Staff Examination, 2020	Paper-I	05.10.2021 to 20.10.2021
4	Stenographer Grade 'C' and 'D' Examination, 2019	Skill Test	21.10.2021 To 22.10.2021





PUJA KUNDU 12 hours ago

THE ANS IS "D"...NICE SESSION SIR 🙏🙏 THANK YOU SOO MUCH 🙏🙏

👍 1 🗨️ REPLY

▼ [View reply from Mahendras : Online Videos For Govt. Exams](#)



sarita rawat 13 hours ago

Homework answer

Option (D) .....

Awesome session sir 🙏👍👍👍

Thanku so much sir 🙏

👍 🗨️ REPLY

▼ [View reply from Mahendras : Online Videos For Govt. Exams](#)



Viśhñù Güptâ 16 hours ago

Option (D) right ans

Very nice session sir ♥️🙏

👍 🗨️ REPLY

▼ [View reply from Mahendras : Online Videos For Govt. Exams](#)



Manidipa Mandal 16 hours ago

Option (D) .

Thank you sir.....Nice session sir 🙏🙏🙏🙏🙏

👍 🗨️ REPLY



DEEKSHA SHARMA 16 hours ago

Home work answer is DD

very nice session sir 🙏🙏

👍 🗨️ REPLY

▼ [View reply from Mahendras : Online Videos For](#)



Chhavi Saxena 16 hours ago

Home work answer is option D

Very Nice Session sir 🙏🙏🙏🙏🙏

👍 🗨️ REPLY

▼ [View reply from Mahendras : Online Videos For](#)



Ravindra Singh 16 hours ago

Home work answer optin DDDD

Owesome class session

👍 🗨️ REPLY

▼ [View reply from Mahendras : Online Videos For](#)



Masum Idki 😊 16 hours ago

Option d is the correct ans 👍👍

Very dhashu session 🙏🙏

👍 🗨️ REPLY

▼ [View reply from Mahendras : Online Videos For](#)



barbie dancer 16 hours ago

D hoga sir 👍👍👍👍👍 ❤️ ossm session sir

👍 🗨️ REPLY



MISTY MISTY 📖🔥 16 hours ago

Nice session sir right answer is option number d

👍 🗨️ REPLY

▼ [View reply from Mahendras : Online Videos For Govt.](#)



Sukhchand Paradkar 43 minutes ago

DD 🙏🙏

👍 🗨️ REPLY



nikita Chauhan 14 hours ago

Homework ANS option DDD

👍 1 🗨️ REPLY

▼ [View reply from Mahendras : Online Videos For Govt.](#)



Abhishek Pandey 12 hours ago

Answer is (d)

👍 🗨️ REPLY

▼ [View reply from Mahendras : Online Videos For Govt.](#)



sahil Israni 11 hours ago

Hw ans : D)

👍 🗨️ REPLY



Preeti 16 hours ago

Hw question and is ddd

👍 🗨️ REPLY

▼ [View reply from Mahendras : Online Videos For Govt.](#)



Naved Khan 14 hours ago

Ddd

👍 🗨️ REPLY

▼ [View reply from Mahendras : Online Videos For Govt.](#)



Preeti rajput 16 hours ago

dd

👍 🗨️ REPLY

▼ [View reply from Mahendras : Online Videos For Govt.](#)



Itu Soren 23 hours ago

Ans:- Option D .

VERY NICE SESSION 😊🙏

👍 1 🗨️ REPLY



vaibhav sahu 11 hours ago

aans d is right sir thanq so much 🙏🙏🙏🙏🙏🙏🙏🙏🙏🙏

👍 🗨️ REPLY



Satyam Pandey 13 hours ago

D correct ans 🙏🙏

Super session sir g 🙏🙏

👍 🗨️ REPLY

Q.. Choose the alternative which is closely resembles the water image of the given combination

E8 t 4 e 9 C

A. E8 t 4 e 9 C

B. E8 t 4 e 9 C

C. E8 t 4 e 9 C

D. E8 t 4 e 9 C





**MO : 13 11 :: HJ : ?**

(A) 19 17

(B) 18 16

(C) 8 10

(D) 16 18



Find the missing :-

- (A) 4
- (B) 5
- (C) 6
- (D) 7

3	6	9	4
2	5	1	8
1	6	4	?





Find the missing :-

1. 84
2. 120
3. 27
4. 60

4	3	2	8	32
5	3	1	9	24
7	3	3	7	70
2	9	4	12	?

Find the missing ONE (?)

$$42 : 24 :: 56 : ?$$

- (A) 130
- (B) 150
- (C) 180
- (D) 210



Find the missing term(?)

$$16 : 169 :: 11 : ?$$

- (A) 16
- (B) 25
- (C) 36
- (D) 81



Find the missing :-

$$6 * 5 = 91$$

$$8 * 7 = 169$$

$$10 * 7 = 211$$

$$22 * 5 = ?$$

(A) 993

(C) 845

(B) 331

(D) 678





Find the option which should replace (?)

$$58 * 12 = 4$$

$$37 * 96 = 5$$

$$11 * 20 = 2$$

$$42 * 12 = ?$$

A. 2

B. 3

C. 4

D. 5



Find the option which should replace (?)

$$P = - \quad Q = *$$

$$R = \div \quad S = +$$

$$15 \ Q \ 3 \ P \ 25 \ R \ 5 \ S \ 8 = ?$$

A. 40

B. 48

C. 52

D. 46



Find the missing :-

1. 9
2. 1
3. 3
4. 7

<b>9</b>	<b>4</b>	<b>2</b>
<b>6</b>	<b>4</b>	<b>8</b>
<b>1</b>	<b>1</b>	<b>?</b>



Find the missing :-

1. 110
2. 120
3. 130
4. 140

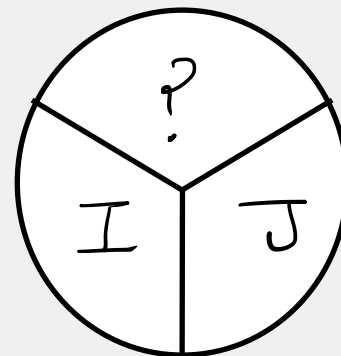
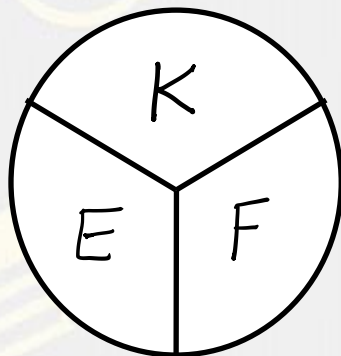

<b>21</b>	<b>56</b>	<b>70</b>
<b>45</b>	<b>87</b>	<b>84</b>
<b>115</b>	<b>180</b>	<b>?</b>



Find the missing :-



- 1. S
- 2. T
- 3. W
- 4. Z



Find the missing :-

- (A) 3
- (B) 4
- (C) 5
- (D) 6

<b>3</b>	<b>4</b>	<b>2</b>	<b>6</b>
<b>?</b>	<b>2</b>	<b>5</b>	<b>3</b>
<b>4</b>	<b>2</b>	<b>2</b>	<b>7</b>

