

RRB NTPC CBT 2/GROUP D



REASONING

अबकी बार **RAILWAY** पार

Complete Revision



LIVE 7:30 PM





Don't Let Your Studies Get Impacted By COVID-19 Pandemic

Stay Home & Study Online With Mahendras Hybrid Model

Features



Offline Classes



Live Interactive Online Classes



Same Faculty



Same Batch



Same Batch Timing



Online Library Facility



Recorded Video



PDFs



Classes In Both Model

CONTACT US:

1800-103-5225

www.mahendras.org





UPCOMING ONLINE BATCHES

December 2021

01 Dec 2021

08:00 AM to 10:00 AM

LIVE PREMIUM GREEN CARD
(BANK-PO & CLERK)

05:30 PM to 07:30 PM

LIVE PREMIUM GREEN CARD
(BANK-PO & CLERK)

01:00 PM to 03:00 PM

LIVE PREMIUM SILVER CARD
(SSC CGL & CHSL)

BILINGUAL

08 Dec 2021

10:30 AM to 12:30 PM

LIVE PREMIUM GREEN CARD
(BANK-PO & CLERK)

03:00 PM to 05:00 PM

LIVE PREMIUM GREEN CARD
(BANK-PO & CLERK)

08:00 AM to 10:00 AM

LIVE PREMIUM SILVER CARD
(SSC CGL & CHSL)

BILINGUAL

15 Dec 2021

01:00 PM to 03:00 PM

LIVE PREMIUM GREEN CARD
(BANK-PO & CLERK)

10:30 AM to 12:30 PM

LIVE PREMIUM SILVER CARD
(SSC CGL & CHSL)

BILINGUAL

22 Dec 2021

08:00 AM to 10:00 AM

LIVE PREMIUM GREEN CARD
(BANK-PO & CLERK)

07:30 PM to 09:30 PM

LIVE PREMIUM SILVER CARD
(SSC CGL & CHSL)

BILINGUAL

29 Dec 2021

10:30 AM to 12:30 PM

LIVE PREMIUM GREEN CARD
(BANK-PO & CLERK)

07:30 PM to 09:30 PM

LIVE PREMIUM GREEN CARD
(BANK-PO & CLERK)

03:00 PM to 05:00 PM

LIVE PREMIUM SILVER CARD
(SSC CGL & CHSL)

BILINGUAL



RRB NTPC Stage-2 Exam Pattern

Sections	No. of Questions	Total Marks	Duration
Mathematics	35	35	90 minutes
General Intelligence and Reasoning	35	35	
General Awareness	50	50	
Total	120	120	



Radha Garima 19 hours ago

Answer: 22.5

Nice session sir 🙏🙏

👍 1 🗨️ REPLY

▶ [View reply from Mahendras : Online Videos For Govt. Exams](#)



Viśhñù Güptâ 19 hours ago

22.5 is the right ans

Very nice dhashu session sir thank you sir love you 😊 sir 🙏

👍 1 🗨️ REPLY

▶ [View reply from Mahendras : Online Videos For Govt. Exams](#)



Mannveer Singh 18 hours ago

$$47=65 (4^2+7^2)$$

$$59=106(5^2+9^2)$$

👍 1 🗨️ REPLY

▶ [View reply from Mahendras : Online Videos For Govt. Exams](#)



SANIA _____ 9 hours ago

mast session sir 🙏🙏🙏🙏

22.5 🔥🔥🔥

👍 1 🗨️ REPLY

▶ [View reply from Mahendras : Online Videos For Govt. Exams](#)



Maths by me ❤️ 18 hours ago

22.5 is the correct answer 😊



1



REPLY

▼ [View reply from Mahendras : Online Videos For Govt. Exams](#)



Chhavi Saxena 19 hours ago

Home work answer is $15 * 1.5 = 22.5$



1



REPLY

▼ [View reply from Mahendras : Online Videos For Govt. Exams](#)



🌸 PUJA KUNDU 🌸 19 hours ago

The answer is ----- $(16-1) \times 1.5 = 22.5$superb session sir and thanks for the session 🙏🙏🙏



1



REPLY

▼ [View reply from Mahendras : Online Videos For Govt. Exams](#)




Sonu Pal 8 hours ago

22.5



REPLY



barbie dancer 19 hours ago

22.5



2



REPLY

▼ [View reply from Mahendras : Online Videos For Govt. Exams](#)



Kapil Bhagat 20 hours ago

20.5



REPLY



puspranjan singh 19 hours ago

20.5



1



REPLY

▼ [View reply from Mahendras : Online Videos For Govt. Exams](#)



Shahzada Jalal 17 hours ago

25.5



1



REPLY

▼ [View reply from Mahendras : Online Videos For Govt. Exams](#)



Mirza Sahil jatt 19 hours ago

22.5



1



REPLY

▼ [View reply from Mahendras : Online Videos For Govt. Exams](#)



Keerat Prasad 19 hours ago

22.5



1



REPLY

▼ [View reply from Mahendras : Online Videos For Govt. Exams](#)



Hrithik_____ 19 hours ago

22.5

1 [REPLY](#)

[View reply from Mahendras : Online Videos For Govt. Exams](#)



barbie dancer 19 hours ago

Sir time kyo change krdiya 😞😞😞😞

1 [REPLY](#)

[View reply from Mahendras : Online Videos For Govt. Exams](#)



NINJA_____ 19 hours ago

8.30 prr wait kiya mene 😞😞😞😞😞😞😞😞😞.....

[REPLY](#)

[View reply from Mahendras : Online Videos For Govt. Exams](#)



Shruti Jain 9 hours ago

Skip 🌸🌸🌸🌸🌸

[REPLY](#)

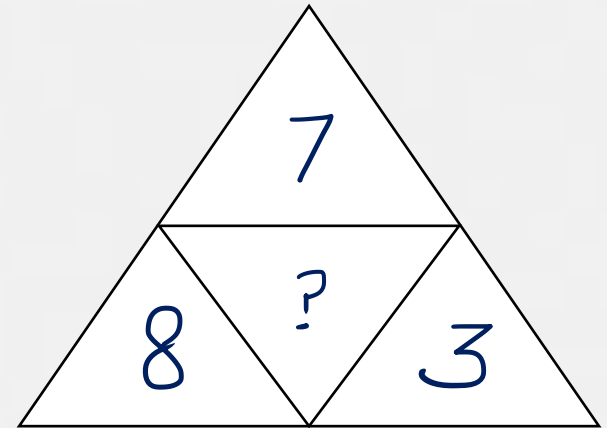
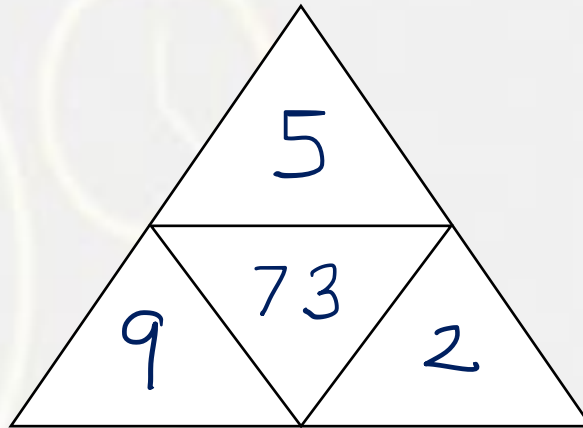
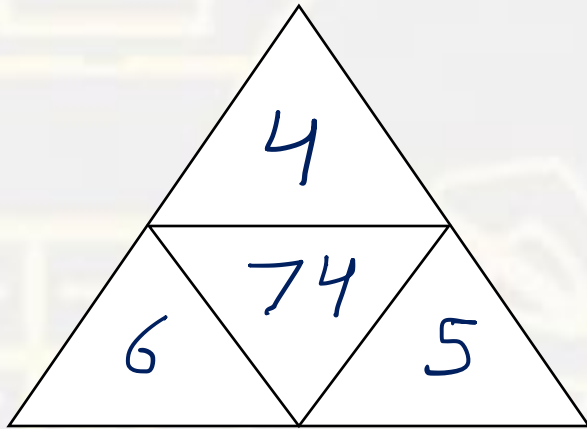
We have 16 columns and 18 rows of students in a playground and distance between the two students 1.5 metres . The length of the row of the students are ?

हमारे पास खेल के मैदान में 16 कॉलम और छात्रों की 18 पंक्तियाँ हैं और दोनों छात्रों के बीच 1.5 मीटर की दूरी है। छात्रों की पंक्ति की लंबाई है?

- (A) 20.5
- (B) 22.5
- (C) 22
- (D) 25.5



Which number will replace the question mark ?



- (A) 93
- (C) 101

- (B) 93
- (D) 84



Which of the following diagrams indicates the best relation between (Mammals, Human , Dog) / (स्तनधारी, मानव, कुत्ता)



A.

B

.C

.D.

Which number will replace the question mark ?

19	23	13	11
72	18	64	14
16	32	49	?



- (A) 11 (B) 9
(C) 12 (D) 10

Find the missing one (?)

0 , 1 , 28 , 153 , ? , 1225 , 2556

- (A) 497**
- (B) 441**
- (C) 484**
- (D) 496**



Study the following arrangement carefully and answer the questions given below:

R D A K 5 B I 2 M J E N 9 7 U Z V 1 W 3 H 4 F Y 8 P 6 T G

Which of the following is the sixth to the right of the nineteenth from the right end ?

कौन सा तत्व दाये से 19वे के दाये छठा हो सकता है?



- (1) 5
- (2) Z
- (3) V
- (4) 1
- (5) None of these

Arrange the words given below in a meaningful sequence.

1. Wall / दीवार
2. Clay / चिकनी मिट्टी
3. House / मकान
4. Room / कक्ष
5. Bricks / ईंटें

- A.5, 2, 1, 4, 3
- B.2, 5, 4, 1, 3
- C.2, 5, 1, 4, 3
- D.1, 2, 3, 4, 5



Find the option which should replace (?)

$$\text{If } 62 * 73 * 63 = 51$$
$$54 * 49 * 27 =$$

- (A) 60
- (B) 62
- (C) 66
- (D) 70



8	27	17
4	6	6
14	51	31
11	?	19



Find the option which should replace (?)

- (A) 21**
- (B) 24**
- (C) 35**
- (D) 37**

Find the option which should replace (?)

$$5 * 9 * 4 = 7$$

$$5 * 3 * 1 = 4$$

$$7 * 9 * 1 = ?$$

(A) 5

(B) 6

(C) 7

(D) 8



Find the option which should replace (?)

$$12 @ 11 = 12$$

$$13 @ 16 = 18$$

$$32 @ 14 =$$

(A) 36

(B) 40

(C) 45

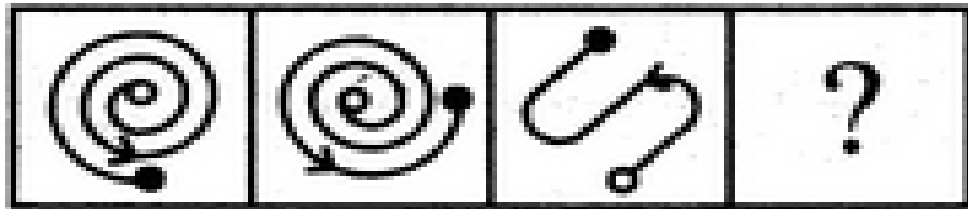
(D) 60



Select a suitable figure from the Answer Figures that would replace the question mark (?).

Problem Figures:

Answer Figures:



(A)

(B)

(C)

(D)

(1)

(2)

(3)

(4)

(5)

A.1

B.2

C.3

D.4

E.5



Statement: For supervising the advertisements by different companies, should a censor board be created?

- I. Yes, It is seen many times that a particular ad comes under a topic of debate about showing of some scenes.**
- II. No, There is no need of censor boards for all purposes.**

विभिन्न कंपनियों द्वारा विज्ञापनों की निगरानी के लिए, क्या एक सेंसर बोर्ड बनाया जाना चाहिए ?

- I. हां, यह कई बार देखा जाता है कि एक विशेष विज्ञापन किसी विषय के अंतर्गत आता है जो कुछ दृश्यों के बारे में बहस करता है।**
- II. नहीं, सभी उद्देश्यों के लिए सेंसर बोर्ड की कोई आवश्यकता नहीं है।**



Arrange the following words in meaningful order.

1. Satisfied / संतुष्ट
2. Inquiry / पूछताछ
3. Problem / समस्या
4. Solution / समाधान
5. Office / कार्यालय



- (1) 32415
- (2) 35124
- (3) 35241
- (4) 43521

Find the odd one out(?)



- A. Uttar Pradesh / उत्तर प्रदेश
- B. Mararashtra / महाराष्ट्र
- C. Kerala / केरल
- D. Gujarat / गुजरात

Q.. Statement :

Some actors are singers.

All the singers are dancers.

Conclusions :

(I) Some actors are dancers.

(II) No singer is actor.

प्र.. कथन :

कुछ अभिनेता गायक हैं।

सभी गायक नर्तक हैं।

निष्कर्ष:

(I) कुछ अभिनेता नर्तक हैं।

(II) कोई गायक अभिनेता नहीं है।

Q.. Statement :

Some actors are singers.

All the singers are dancers.

Conclusions :

(I) Some actors are dancers.

(II) No singer is actor.

Q.. Statement :

Some Cats are Rats.

All bats are tables.

All Rats are Bats.

Conclusions :

(I) Some Cats are bats

(II) All tables are rats

प्र.. कथन :

कुछ बिल्लिया चूहे हैं।

सभी चमगादड़ टेबल हैं।

सभी चूहे बल्ले हैं।

निष्कर्ष:

(I) कुछ बिल्लियों चमगादड़ हैं

(II) सभी टेबल चूहे हैं

Q.. Statement :

Some Cats are Rats.

All bats are tables.

All Rats are Bats.

Conclusions :

(I) Some Cats are bats

(II) All tables are rats

Q.. Statement :

Some ships are boats.

All boats are submarines.

Some submarines are yatches.

Conclusions :

(I) Some ships are yatches.

(II) Some submarines are ships.

प्र.. कथन :

कुछ जहाज नौकाएं हैं।

सभी नाव पनडुब्बी हैं।

कुछ पनडुब्बी नौकाएं हैं।

निष्कर्ष:

(I) कुछ जहाज नौका हैं।

(II) कुछ पनडुब्बियां जहाज हैं।

Q.. Statement :

Some ships are boats.

All boats are submarines.

Some submarines are yatches.

Conclusions :

(I) Some ships are yatches.

(II) Some submarines are ships.

5	9	15
16	29	?
49	89	147

- (A) 45
- (B) 48
- (C) 51
- (D) 54

