

RAILWAY GROUP D

 Mahendra's

REASONING



≡ अंतिम प्रहार ≡

EXPECTED
QUESTIONS

LIVE | 08:30 PM





UPCOMING ONLINE BATCHES

August 2022

03 AUG 2022

03:00 PM to 05:00 PM

BANK ONLINE LIVE CLASS

01:00 PM to 03:00 PM

SSC ONLINE LIVE CLASS

BILINGUAL

10 AUG 2022

05:30 PM to 07:30 PM

BANK ONLINE LIVE CLASS

08:00 AM to 10:00 AM

SSC ONLINE LIVE CLASS

BILINGUAL

17 AUG 2022

08:00 AM to 10:00 AM

BANK ONLINE LIVE CLASS

05:30 PM to 07:30 PM

SSC ONLINE LIVE CLASS

BILINGUAL

24 AUG 2022

07:30 PM to 09:30 PM

BANK ONLINE LIVE CLASS

10:30 AM to 12:30 PM

SSC ONLINE LIVE CLASS

BILINGUAL

31 AUG 2022

10:30 AM to 12:30 PM

BANK ONLINE LIVE CLASS

07:30 PM to 09:30 PM

SSC ONLINE LIVE CLASS

BILINGUAL

10 AUG 2022

02:00 PM to 04:00 PM

BANK ONLINE LIVE CLASS

BENGALI+ENGLISH

31 AUG 2022

06:30 PM to 08:30 PM

BANK ONLINE LIVE CLASS

BENGALI+ENGLISH



www.mahendras.org



7052477777/7052577777



🍁 PUJA KUNDU 🍁 ----- 20 hours ago 7 subscribers

The answer is 14 sq....thank you sir for the superb session 🙌 🙌

👍 🗨️ REPLY 📺

▼ 🚫 • 1 REPLY



Chhavi Saxena 22 hours ago

Home work answer is option B (14)

Very Nice Session Sir Thanku So much dear Sir 🙌 🙌 🙌 🙌 🙌 🙌

👍 🗨️ REPLY 📺

▼ 🚫 • 1 REPLY



Ankit Vish 22 hours ago 252 subscribers

Answer. BBB

Nice session sir 🙌 🙌

👍 1 🗨️ REPLY 📺

▼ 🚫 • 1 REPLY



Surbhi Sinha 22 hours ago

Option bbbbbbbb 14 square 😊 😊 🔥 🔥 🔥

👍 🗨️ REPLY 📺

▼ 🚫 • 1 REPLY



vedant yaduwanshi 13 hours ago

Homework ans option b 14 🙏🙏

👍 1 💬 REPLY ▶️

▼ 🚫 • 1 REPLY



Hrithik _____ 8 hours ago 29 subscribers

14

👍 💬 REPLY ▶️



Puspranjan singh 22 hours ago 1 subscribers

14

👍 💬 REPLY ▶️

▼ 🚫 • 1 REPLY



Bhavya thakur ✍️ _____ 22 hours ago 27 subscribers

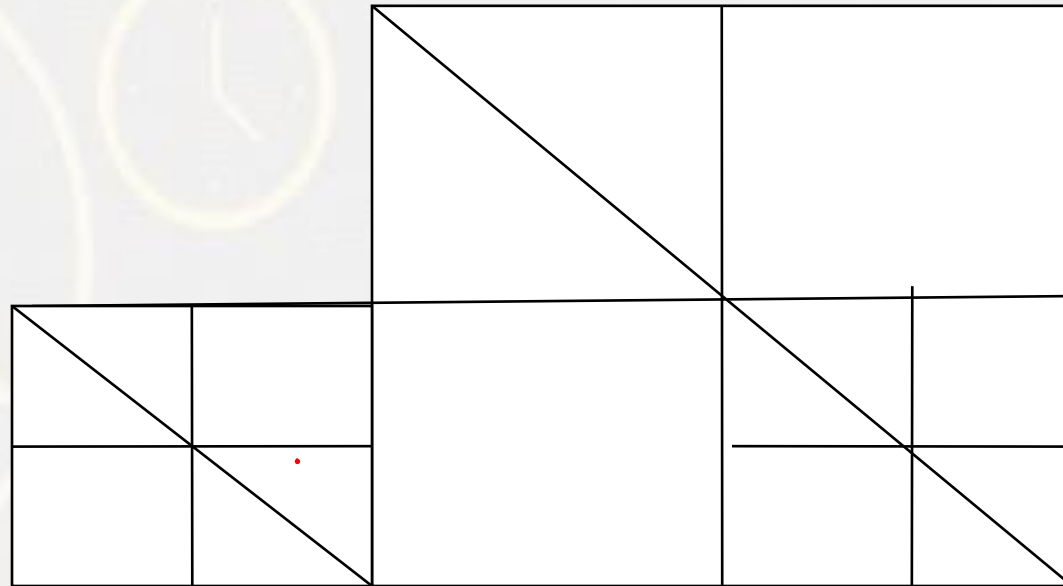
14

👍 💬 REPLY ▶️

▼ 🚫 • 1 REPLY

Find the number of square (?)

- (A) 16**
- (B) 14**
- (C) 18**
- (D) 20**



Statement :

All Samosas are Jalebi. सभी समोसा जलेबी हैं।

All Jalebis are Tikki. सभी जलेबीस टिक्की हैं।

All Tikkis are Barfi. सभी टिक्की बर्फी हैं।

Conclusions :

(I) All Toffee are not Barfi. सभी जलेबी बर्फी नहीं हैं।

(II) All Tikkis are Samosas. सभी टिक्की समोसे हैं।

(A) If only conclusion I follows.

(B) If only conclusion II follows.

(C) If neither conclusion I nor II follows.

(D) If both conclusion I and II are follows.



Find the option which should replace (?)

2	3
4	17

9	7
3	83

6	?
5	50

- (A) 11
- (B) 12
- (C) 10
- (D) 13



In 2018, which of the following two months have 1st day will be same days ?

2018 में, निम्नलिखित में से किस दो महीने में 1 दिन समान दिन होगा?

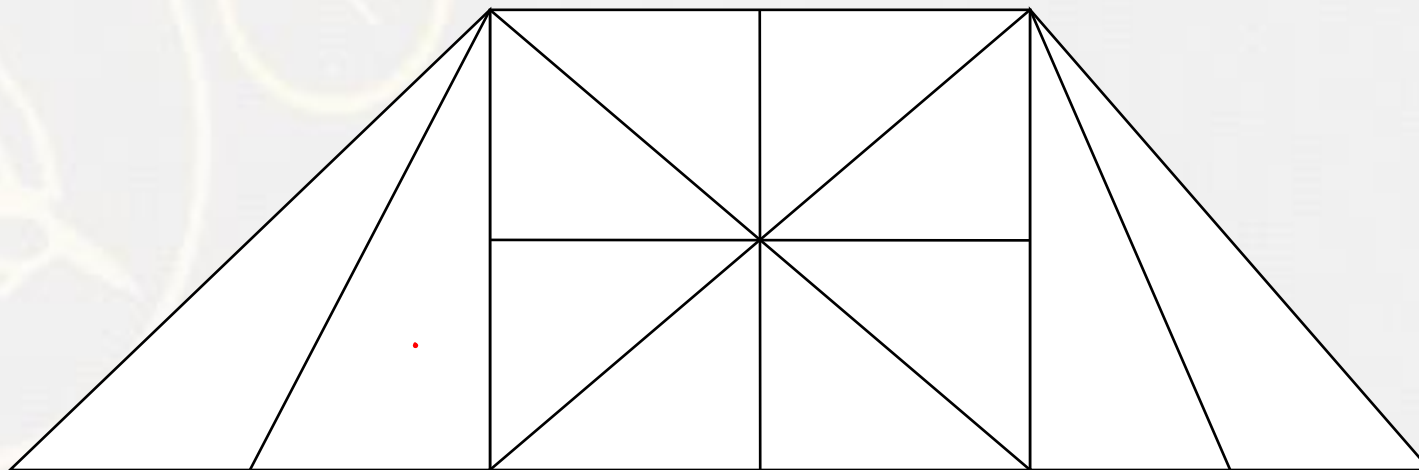
- 1) February , April
- 2) May , July
- 3) June , September
- 4) January , October



Find the number of triangle (?)

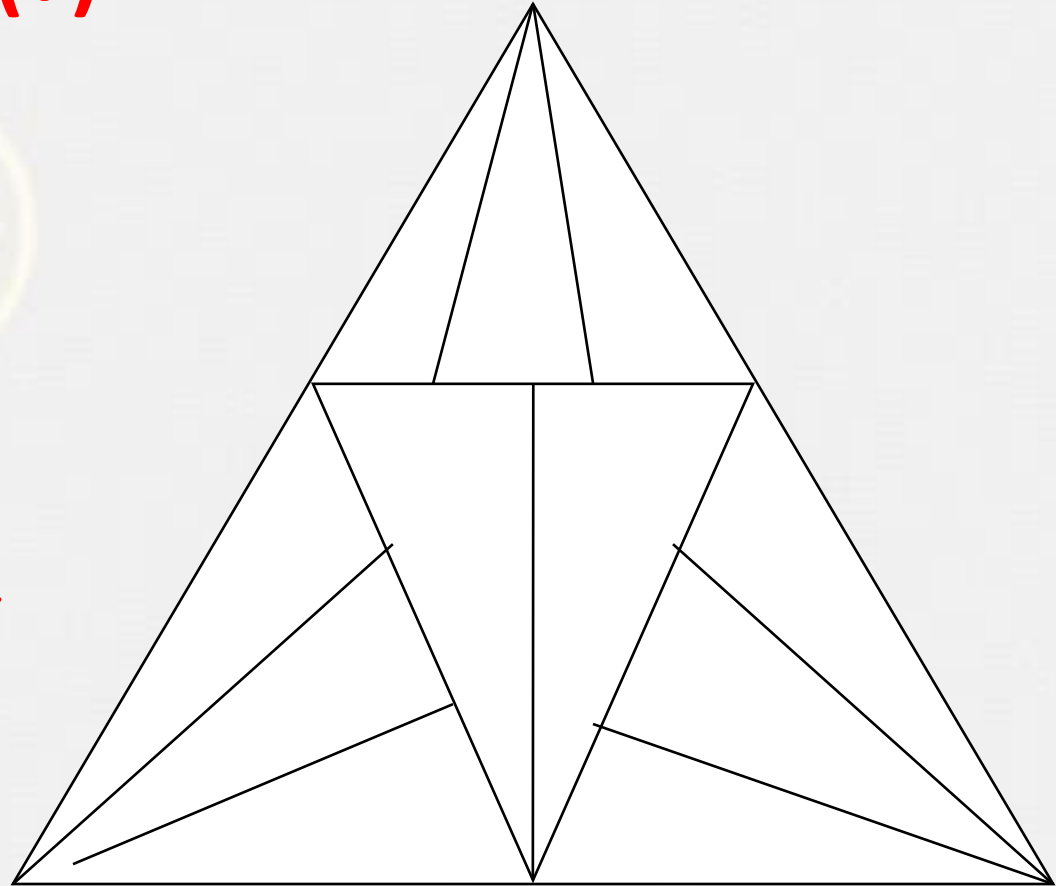


- (A) 14**
- (B) 16**
- (C) 18**
- (D) 20 or more**

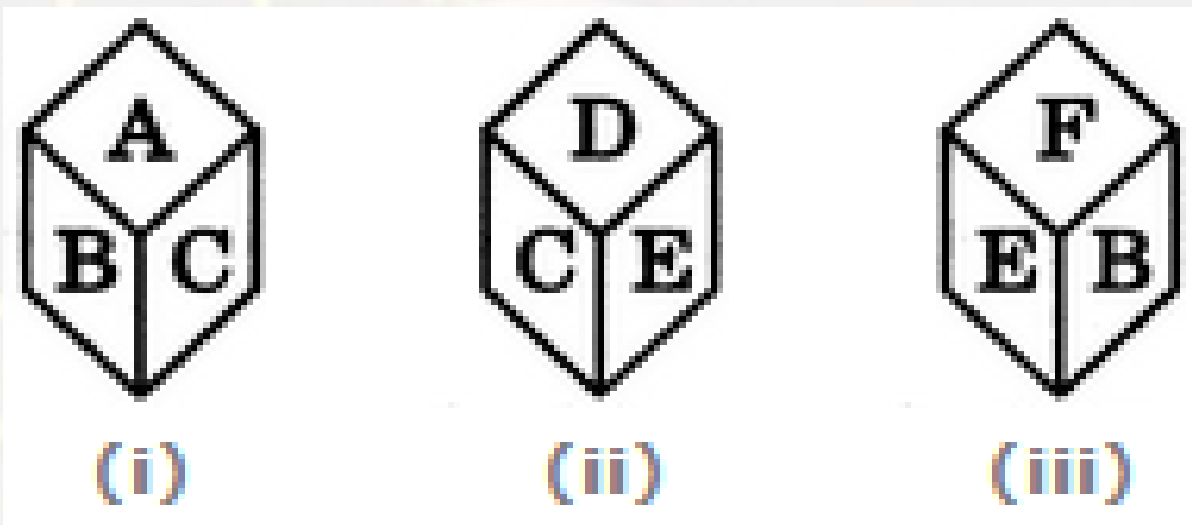


Find the number of triangle (?)

- (A) 20**
- (B) 19**
- (C) 18**
- (D) 22**



The six faces of a dice have been marked with alphabets A, B, C, D, E and F respectively. This dice is rolled down three times. The three positions are shown as:



Find the alphabet opposite A.

- A.C
- B.D
- C.E
- D.F

Find the missing one (?)

$$37 * 25 = 7$$

$$95 * 37 = 5$$

$$87 * 85 = 15$$

$$27 * 41 = ?$$

- (A) 9
- (B) 7
- (C) 12
- (D) 13



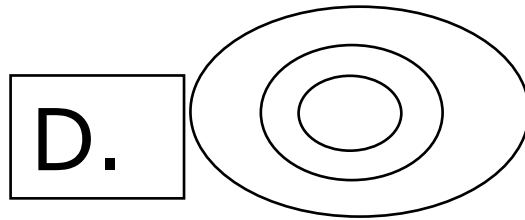
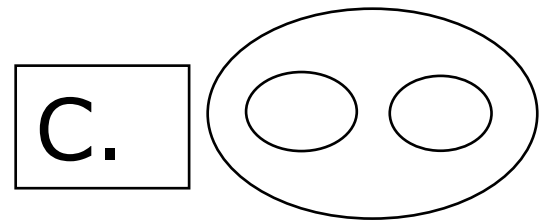
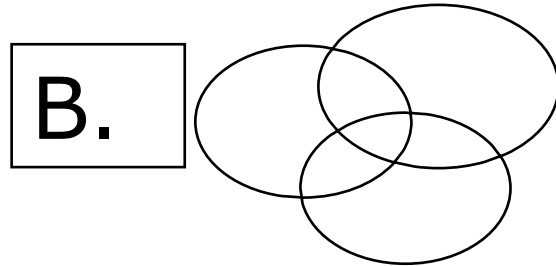
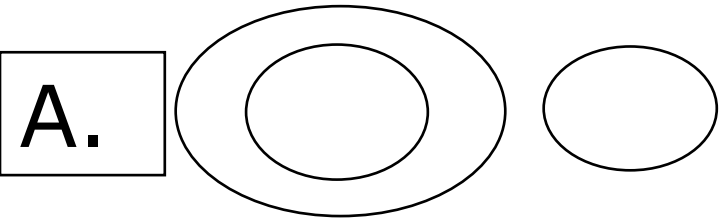


E	F	H	S
B	Q	C	V
D	F	G	?

- (A) R**
- (B) S**
- (C) Q**
- (D) P**

Which of the following diagrams indicate best relation between Author, Lawyer and Singer?

निम्नलिखित में से कौन सा चित्र लेखक, वकील और गायक के बीच संबंध को दर्शाता है?




Find number of square in the given figure ?

(A) 42

(B) 30

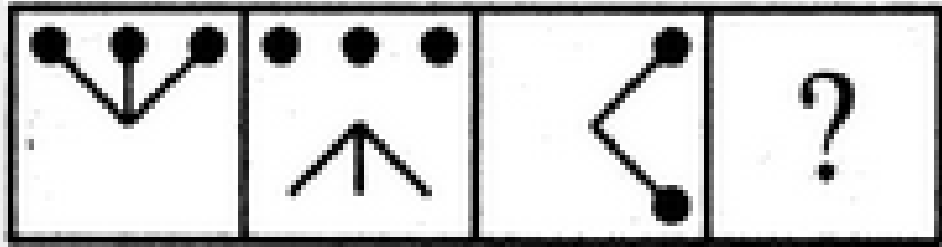
(C) 49

(D) 28




Select a suitable figure from the Answer Figures that would replace the question mark (?).

Problem Figures:



Answer Figures:



(A)

(B)

(C)

(D)

(1)

(2)

(3)

(4)

(5)

A.1

B.2

C.3

D.4

E.5



Choose the word which is different from the rest.

A.Coat / कोट

B.Shirt / शर्ट

C.Blouse / ब्लाउज

D.Trousers / पायजामा

E.Sweater / स्वेटर



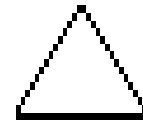
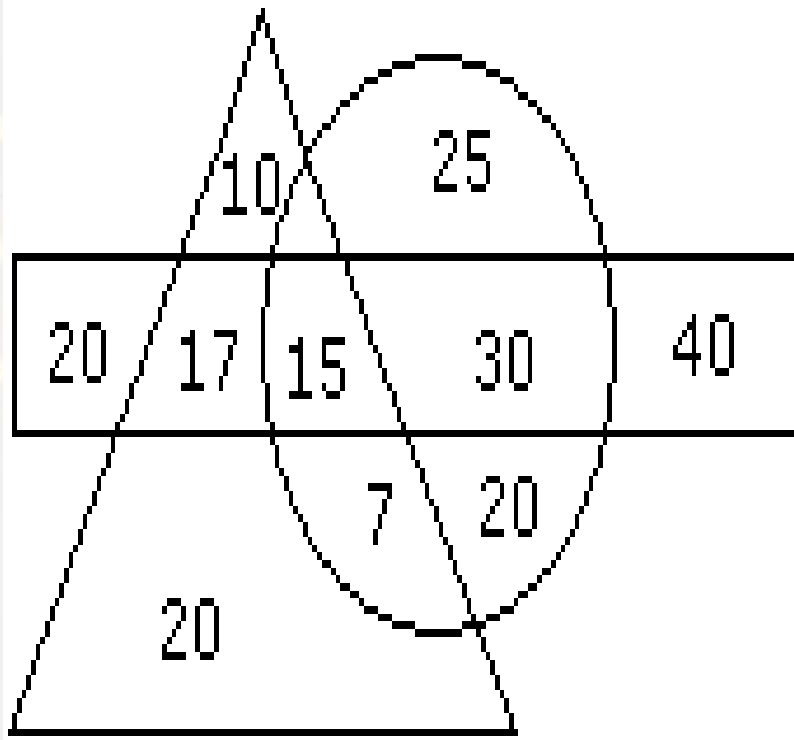
Study the diagram given below and answer each of the following questions.

How many persons who take tea and wine but not coffee ?


कितने लोग हैं जो चाय और वाइन लेते हैं लेकिन कॉफ़ी नहीं?



- A.20
- B.17
- C.25
- D.15



→ Persons who takes tea



→ Persons who takes coffee



→ Persons who takes wine

Find the option which should replace (?)

jkl : 6 :: vsi : ?

- (A) 15**
- (B) 120**
- (C) 40**
- (D) NOT**



In which year 2011 calender will be repeated :-

किस वर्ष में 2011 कैलेंडर दोहराया जाएगा: -

- (A) 2020**
- (B) 2021**
- (C) 2022**
- (D) 2023**



From the given alternative words, select the word which can be formed using the letters of the give word :

दिए गए वैकल्पिक शब्दों से, उस शब्द का चयन करें जिसे शब्द के अक्षरों का उपयोग करके बनाया जा सकता है:

REPLENISHABLE

- (1) LIME
- (2) REACH
- (3) SHINE
- (4) PAPER

