

RRB NTPC CBT 2/GROUP D



REASONING

अबकी बार **RAILWAY** पार

Complete Revision



LIVE 7:30 PM





Don't Let Your Studies Get Impacted By COVID-19 Pandemic

Stay Home & Study Online With Mahendras Hybrid Model

Features



Offline Classes



Live Interactive Online Classes



Same Faculty



Same Batch



Same Batch Timing



Online Library Facility



Recorded Video



PDFs



Classes In Both Model

CONTACT US:

1800-103-5225

www.mahendras.org





UPCOMING ONLINE BATCHES

December 2021

01 Dec 2021

08:00 AM to 10:00 AM

LIVE PREMIUM GREEN CARD
(BANK-PO & CLERK)

05:30 PM to 07:30 PM

LIVE PREMIUM GREEN CARD
(BANK-PO & CLERK)

01:00 PM to 03:00 PM

LIVE PREMIUM SILVER CARD
(SSC CGL & CHSL)

BILINGUAL

08 Dec 2021

10:30 AM to 12:30 PM

LIVE PREMIUM GREEN CARD
(BANK-PO & CLERK)

03:00 PM to 05:00 PM

LIVE PREMIUM GREEN CARD
(BANK-PO & CLERK)

08:00 AM to 10:00 AM

LIVE PREMIUM SILVER CARD
(SSC CGL & CHSL)

BILINGUAL

15 Dec 2021

01:00 PM to 03:00 PM

LIVE PREMIUM GREEN CARD
(BANK-PO & CLERK)

10:30 AM to 12:30 PM

LIVE PREMIUM SILVER CARD
(SSC CGL & CHSL)

BILINGUAL

22 Dec 2021

08:00 AM to 10:00 AM

LIVE PREMIUM GREEN CARD
(BANK-PO & CLERK)

07:30 PM to 09:30 PM

LIVE PREMIUM SILVER CARD
(SSC CGL & CHSL)

BILINGUAL

29 Dec 2021

10:30 AM to 12:30 PM

LIVE PREMIUM GREEN CARD
(BANK-PO & CLERK)

07:30 PM to 09:30 PM

LIVE PREMIUM GREEN CARD
(BANK-PO & CLERK)

03:00 PM to 05:00 PM

LIVE PREMIUM SILVER CARD
(SSC CGL & CHSL)

BILINGUAL



RRB NTPC Stage-2 Exam Pattern

Sections	No. of Questions	Total Marks	Duration
Mathematics	35	35	90 minutes
General Intelligence and Reasoning	35	35	
General Awareness	50	50	
Total	120	120	



🌸 PUJA KUNDU 🌸 11 hours ago

$21+7=28/2=14$amazing session tha sir...logic sandar mile...thank you sir 🙏🙏

👍 1 🗨️ REPLY

▶️ [View reply from Mahendras : Online Videos For Govt. Exams](#)



SANIA _____ 3 hours ago

awesome session sir 🙏🙏🙏🙏
14🔥🔥🔥

👍 1 🗨️ REPLY

▶️ [View reply from Mahendras : Online Videos For Govt. Exams](#)



Radha Garima 11 hours ago

Answer : 14

Nice session sir 🙏🙏

👍 1 🗨️ REPLY

▶️ [View reply from Mahendras : Online Videos For Govt. Exams](#)



Dev_shukla 7 hours ago

14 is the correct answer 😊😊

👍 1 🗨️ REPLY

▶️ [View reply from Mahendras : Online Videos For Govt. Exams](#)



RANJU KUMARI 10 hours ago

Ans _____ 14

1 [REPLY](#)

[View reply from Mahendras : Online Videos For Govt. Exams](#)



Kapil Bhagat 11 hours ago

14

[REPLY](#)



Hrithik _____ 3 hours ago

14

1 [REPLY](#)

[View reply from Mahendras : Online Videos For Govt. Exams](#)



SOUVIK DUTTA 11 hours ago

14

1 [REPLY](#)

[View reply from Mahendras : Online Videos For Govt. Exams](#)



Chhavi Saxena 11 hours ago

14

1 [REPLY](#)

[View reply from Mahendras : Online Videos For Govt. Exams](#)



Mirza Sahil jatt 11 hours ago

14



1



REPLY

▼ [View reply from Mahendras : Online Videos For Govt. Exams](#)



puspranjan singh 11 hours ago

14



1



REPLY

▼ [View reply from Mahendras : Online Videos For Govt. Exams](#)



Preeti 11 hours ago

Hw ans 14



1



REPLY

▼ [View reply from Mahendras : Online Videos For Govt. Exams](#)

Find the missing :-

- (A) 4
- (B) 8
- (C) 20
- (D) 14

7	5
6	

5	21
13	

21	7
?	



Find the missing :-

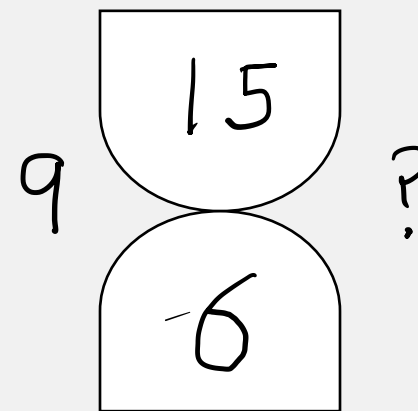
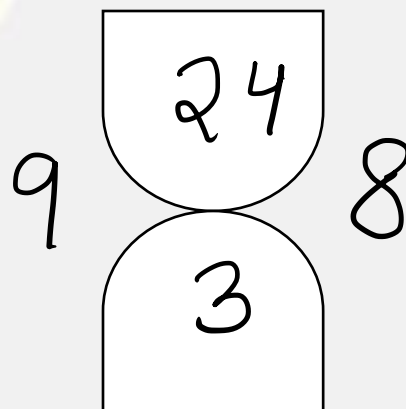
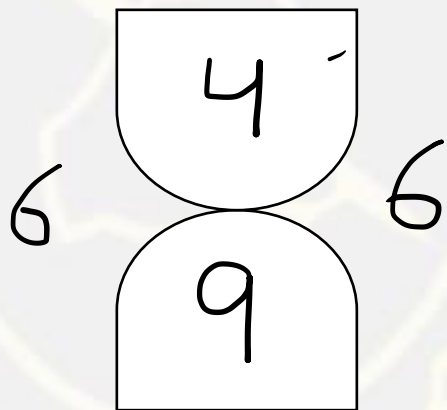
- (A) 2
- (B) 8
- (C) 10
- (D) 14

14	9	12	20
4	9	8	10
12	13	7	20
3	3	11	?
20	42	19	40



Find the missing :-

1. 8
2. 7
3. 10
4. 12



Find the missing :-

1. 1
2. 2
3. 3
4. 4

14	20	16
2	2	?
3	6	5
4	4	3



Find the missing one (?)

$$600 : 2000 :: ? : 9000$$

- (A) 2700
- (B) 3600
- (C) 5400
- (D) 5600



Find the missing one (?)

$$55 : 32 :: 76 : ?$$

- (A) 14
- (B) 16
- (C) 18
- (D) 20



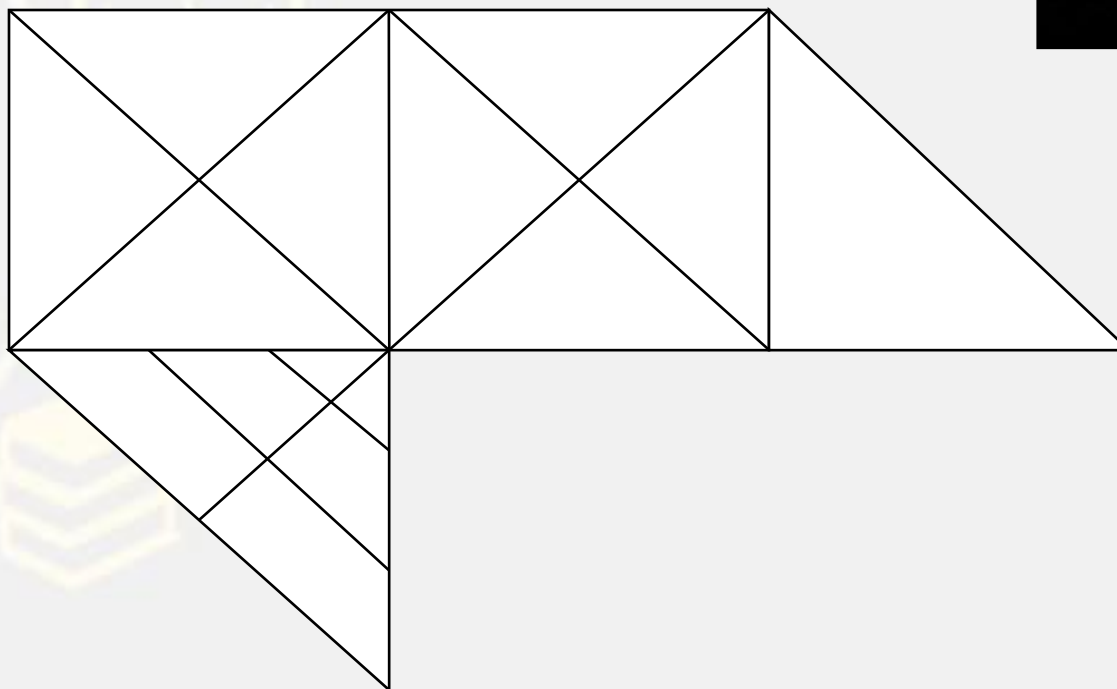
Find the missing one (?)

$$14 : 90 :: 26 : ?$$

- (A) 21
- (B) 31
- (C) 51
- (D) 31



Find the number of triangle (?)



- (A) 28**
- (B) 29**
- (C) 31**
- (D) 30**

Statements :

Some symbols are figure.

All symbols are graphics.

No graphic is a picture.

Conclusions :

I. Some graphics are figures.

II. No symbol is a picture.

कथन:

कुछ प्रतीक आंकड़े हैं।

सभी प्रतीक ग्राफिक्स हैं।

कोई ग्राफिक तस्वीर नहीं है।

निष्कर्ष :

I. कुछ ग्राफिक्स आंकड़े हैं।

II. कोई प्रतीक तस्वीर नहीं है।



Statements :

All vacancies are jobs.

Some jobs are occupations.

Conclusions :

I. All vacancies are occupations.

II. All occupations being vacancies is possibility.

कथन:

**सभी रिक्तियां नौकरियां हैं।
कुछ नौकरियां व्यवसाय हैं।**

निष्कर्ष :

**I. सभी रिक्तिया व्यवसाय हैं।
II. सभी व्यवसाय के रिक्तिया होने की संभावना है।**



Statements :

Some exams are tests.

No exam is a question.

Conclusions :

I. No question is a test.

II. Some tests are definitely not exams.

कथन:


**कुछ परीक्षाएं परीक्षण हैं।
कोई परीक्षा प्रश्न नहीं है।**

निष्कर्ष :


**I. कोई प्रश्न परीक्षण नहीं है।
II. कुछ परीक्षण निश्चित रूप से परीक्षा नहीं हैं।**



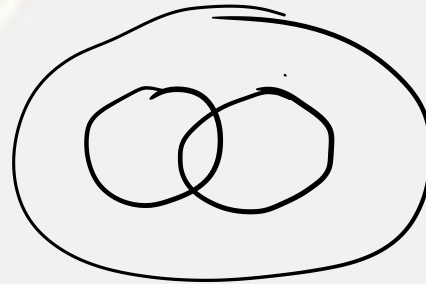
Air , Winter , Summer / हवा, सर्दी, गर्मी



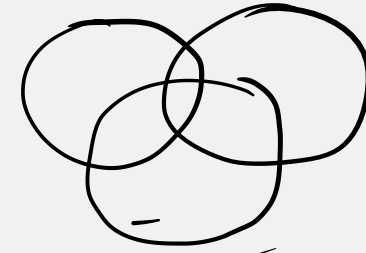
(A)



(B)



(C)



(D)

Find the option which should replace (?)



Hive : Bee :: Eyrice : ?

छत्ता: मधुमक्खी :: घोंसला,

(A) Pigeon / कबूतर

(B) Parrot / तोता

(C) Sparrow / गौरैया

(D) Eagle / ईगल

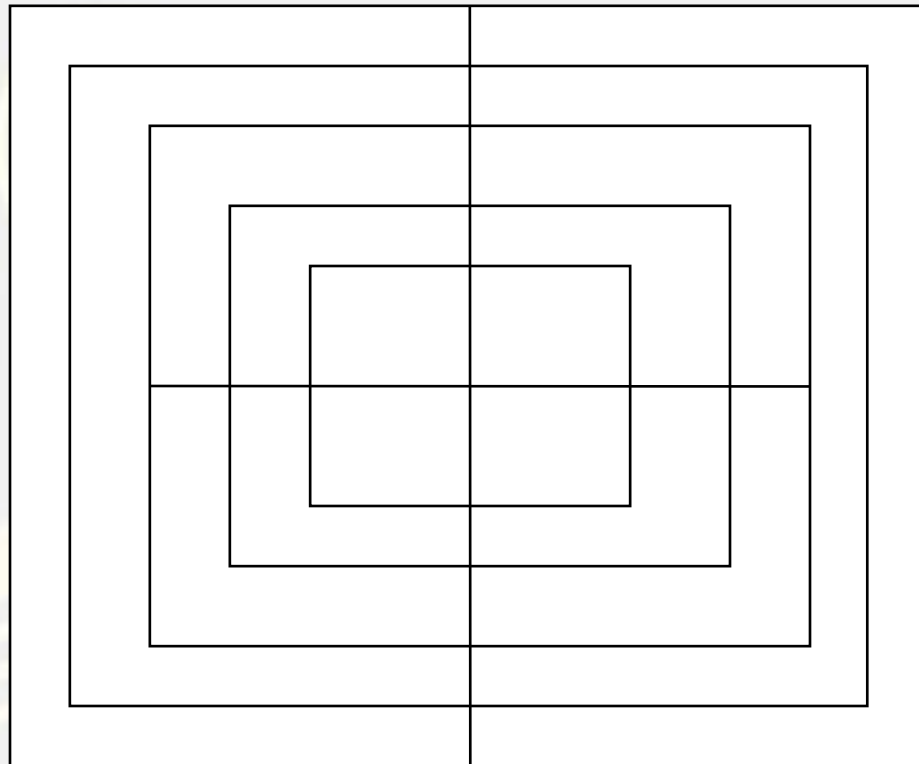
Find the ODD ONE (?)

- (A) Troop / सेना
- (B) Group / समूह
- (C) Mob / मोब
- (D) Class / कक्षा



Find the SQUARE (?)

- (A) 14
- (B) 17
- (C) 25
- (D) NOT



Find the option which should replace (?)

NATURE : MASUQE

FAMINE : ?

- A. EALIME**
- B. EELIME**
- C. LLAMAE**
- D. LALALA**



Find the option which should replace (?)

$$6 : 2 :: 8 : ?$$

- (A) 1
- (B) 3
- (C) 5
- (D) 7

