

TOPIC WISE REASONING



Analogy, Clock, Calendar & Machine Input



ALL COMPETITIVE EXAMS

 2:00 PM

Trailer

LIVE 



Don't Let Your Studies Get Impacted By COVID-19 Pandemic

Stay Home & Study Online With Mahendras Hybrid Model

Features



Offline Classes



Live Interactive Online Classes



Same Faculty



Same Batch



Same Batch Timing



Online Library Facility



Recorded Video



PDFs



Classes In Both Model

CONTACT US:

1800-103-5225

www.mahendras.org





UPCOMING ONLINE BATCHES

October 2021

06 Oct 2021

08:00 AM to 10:00 AM

LIVE PREMIUM GREEN CARD
(BANK-PO & CLERK)

01:00 PM to 03:00 PM

LIVE PREMIUM GREEN CARD
(BANK-PO & CLERK)

03:00 PM to 05:00 PM

LIVE PREMIUM SILVER CARD
(SSC CGL & CHSL)

10:30 AM to 12:30 PM

LIVE CLASS NIELIT CARD
(CCC)

BILINGUAL

13 Oct 2021

10:30 AM to 12:30 PM

LIVE PREMIUM GREEN CARD
(BANK-PO & CLERK)

05:30 PM to 07:30 PM

LIVE PREMIUM GREEN CARD
(BANK-PO & CLERK)

07:30 PM to 09:30 PM

LIVE PREMIUM SILVER CARD
(SSC CGL & CHSL)

BILINGUAL

20 Oct 2021

03:00 PM to 05:00 PM

LIVE PREMIUM GREEN CARD
(BANK-PO & CLERK)

08:00 AM to 10:00 AM

LIVE PREMIUM SILVER CARD
(SSC CGL & CHSL)

01:00 PM to 03:00 PM

LIVE CLASS CTET CARD
(CTET)

BILINGUAL

27 Oct 2021

08:00 AM to 10:00 AM

LIVE PREMIUM GREEN CARD
(BANK-PO & CLERK)

07:30 PM to 09:30 PM

LIVE PREMIUM GREEN CARD
(BANK-PO & CLERK)

10:30 AM to 12:30 PM

LIVE PREMIUM SILVER CARD
(SSC CGL & CHSL)

BILINGUAL



S No	Name of Examination	Paper/ Stage	Schedule of Examination
1	Combined Graduate Level Examination-2019	Skill Test	15.09.2021 to 16.09.2021
2	Junior Engineer (Civil, Mechanical, Electrical and Quantity Surveying & Contracts) Examination, 2020	Paper-II	26.09.2021
3	Multi Tasking (Non-Technical) Staff Examination, 2020	Paper-I	05.10.2021 to 20.10.2021
4	Stenographer Grade 'C' and 'D' Examination, 2019	Skill Test	21.10.2021 To 22.10.2021



Priya yadav 5 hours ago

Answer is D

Thank you so much sir for this superb session 🙏🙏

👍 1 🗨️ REPLY



Arju praween 8 hours ago

Ans - 4

Thank you so much sir ... very nice session

👍 1 🗨️ REPLY



arun ch mandal 9 hours ago

OPT 4 is the correct answer

session is nice

thank you sir

👍 1 🗨️ REPLY



Viśhñù Güptá 17 hours ago

4- C*A*D-E right now

Very dhashu session sir thank you 🙏 sir love ❤️ you

👍 🗨️ REPLY



Chhavi Saxena 18 hours ago

Home work answer is option D

Very Nice Session Sir Thank You So Much 🙏🙏🙏😊

👍 🗨️ REPLY



🌸 PUJA KUNDU 🌸 17 hours ago

OPTION 4 IS THE CORRECT ANSWER.....SUPERB SESSION SIR WITH SUPERB TRICKS🔥.....THANK YOU SOO MUCH SIR 🙏

👍 🗨️ REPLY



Radha Garima 16 hours ago

Answer : 4

Nice session sir 🙏🙏

👍 🗨️ REPLY



SANIA ____ 17 hours ago

jhakkaass session sir 🙏🙏🙏

option 4🔥🔥🔥

👍 🗨️ REPLY



Roshni Khandelwal 14 hours ago

Answer is Option 4

Very nice session sir thank you

👍 🗨️ REPLY



QUARANTINED NOOB 17 hours ago

Option 4 is the right answer guruji 🔥🔥

👍 🗨️ REPLY



DEEKSHA SHARMA 17 hours ago

Home work answer is 4
nice session sir

REPLY



Nadeem 17 hours ago

HomeWork Answer
 Option 4
 Superb Session Sir

REPLY



Abhishek Pandey 17 hours ago

Answer is option-(4)
session sir

REPLY



Anushka Mishra 14 hours ago

Option 4 is correct answer

REPLY



Kaushal116 18 hours ago

Ans 4

REPLY



Shruti Jain 1 hour ago

4

1 **REPLY**



ankita g 18 hours ago

Ddddddd

REPLY



Ankit Vish 18 hours ago

DD

1 **REPLY**



puspranjan singh 18 hours ago

Dd

REPLY



Anurag Vishwakarma 18 hours ago

D

REPLY



Hrithik_____ 18 hours ago

D

REPLY

Find the missing ONE (?)

? : 63 :: 08 : 26

- (A) 12
- (B) 91
- (C) 18
- (D) 15



In a Certain code **HERO** is written as **9685**, than find the code for **GIRL** ?

एक निश्चित कोड में **HERO** का कोड **9685** लिखा गया है तो **GIRL** का कोड क्या होगा ?

- (1) 3997
- (2) 9397
- (3) 9379
- (4) 3979



Q Which number will replace the question mark ?

(A) 22

(C) 66

(B) 33

(D) 77



42	44	38
23	55	28
37	?	39

Q Which number will replace the question mark ?

?	25	16
529	169	81
676	144	49

(A) 1084

(C) 49

(B) 484

(D) 36



Q Which number will replace the question mark ?



 ?	 13	 15
 9	 28	 4
 13	 12	 16

- (A) 13
(C) 17

- (B) 6
(D) 22

55	22	28
33	44	28
66	33	?



- (A) 48
(C) 28

- (B) 7
(D) 36

2	1	4
7	14	11
41	195	?



(A) 104

(C) 51

(B) 105

(D) 57

47	40	50	43
23	20	22	19
20	21	1	?



(A) 4

(B) 3

(C) 1

(D) 2

Q Which number will replace the question mark ?


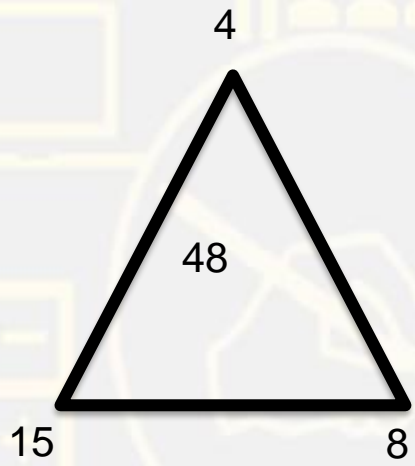
4	2	5
3	3	10
6	9	4
8	6	?



- (A) 3
(C) 2

- (B) 7
(D) 1

Q Which number will replace the question mark ?



- (A) 42
- (C) 52

- (B) 32
- (D) 22

Q- What is the angle between the minute hand and the hour hand of a clock when the time is 10:30?

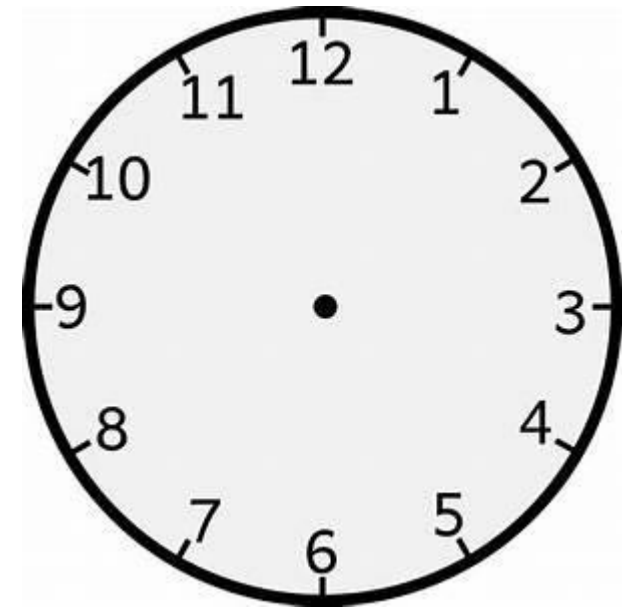
Q- समय 10:30 पर मिनट और घड़ी के घंटे के बीच का कोण क्या होगा ?

(1) 150°

(2) 135°

(3) 120°

(4) None of these



Q- What is the angle between the minute hand and the hour hand of a clock when the time is 7:25?

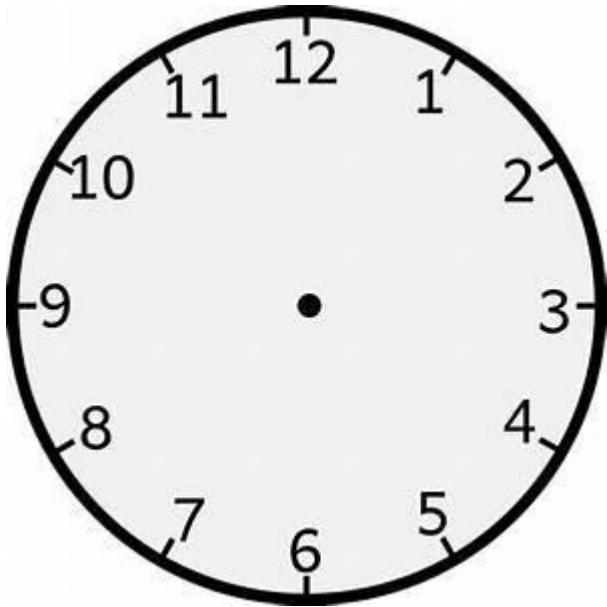
Q- समय 7:25 पर मिनट और घड़ी के घंटे के बीच का कोण क्या होगा ?

(1) 72.5°

(2) 65°

(3) 75°

(4) None of these



Q- What is the angle between the minute hand and the hour hand of a clock when the time is 2:20?

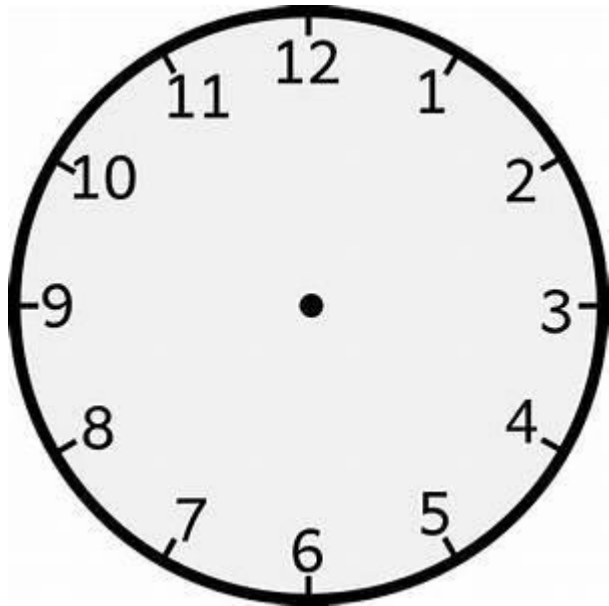
Q-समय 2:20 पर मिनट और घड़ी के घंटे के बीच का कोण क्या होगा ?

(1) 80°

(2) 50°

(3) 60°

(4) None of these



Minute Hand = 1 Minute = 6°

Hour Hand = 1 Minute = $1/2^\circ$

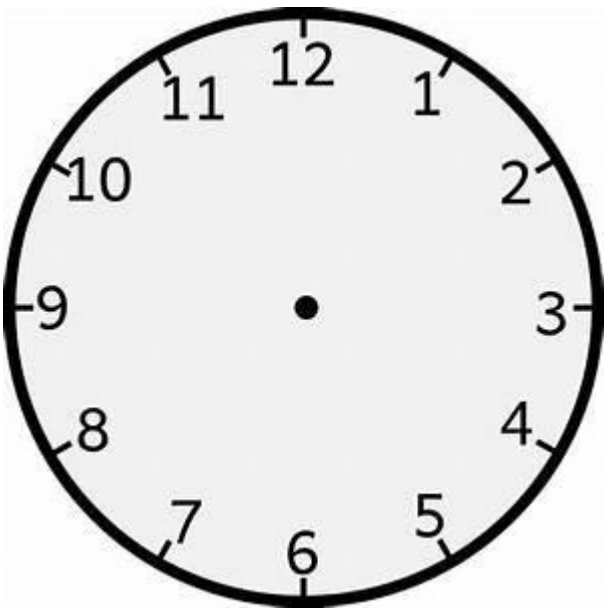
If First hand is Minute hand than add.

If First hand is Hour hand than subtract (less).

Q- What is the angle between the minute hand and the hour hand of a clock when the time is 3:30?

Q- समय 3:30 पर मिनट और घड़ी के घंटे के बीच का कोण क्या होगा ?

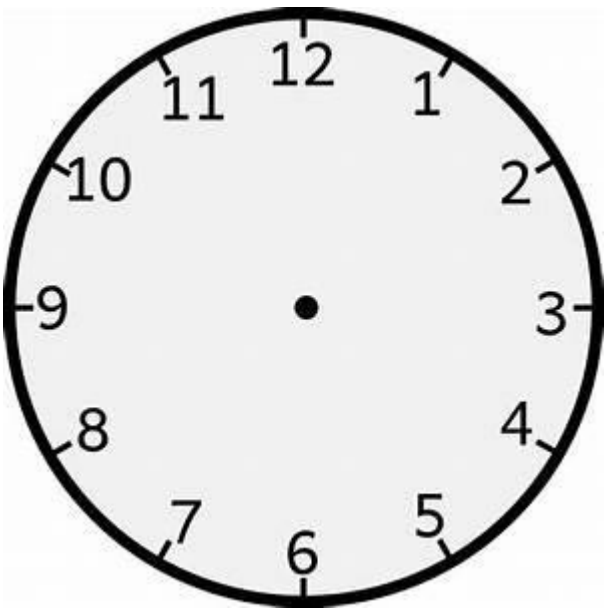
- (1) 55° (2) 75° (3) 105° (4) None of these**



Q- What is the angle between the minute hand and the hour hand of a clock when the time is 3:15?

Q-समय 3:15 पर मिनट और घड़ी के घंटे के बीच का कोण क्या होगा ?

- (1) 0°** **(2) 7.5°** **(3) 15°** **(4) None of these**



Q- What is the angle between the minute hand and the hour hand of a clock when the time is 6:30?

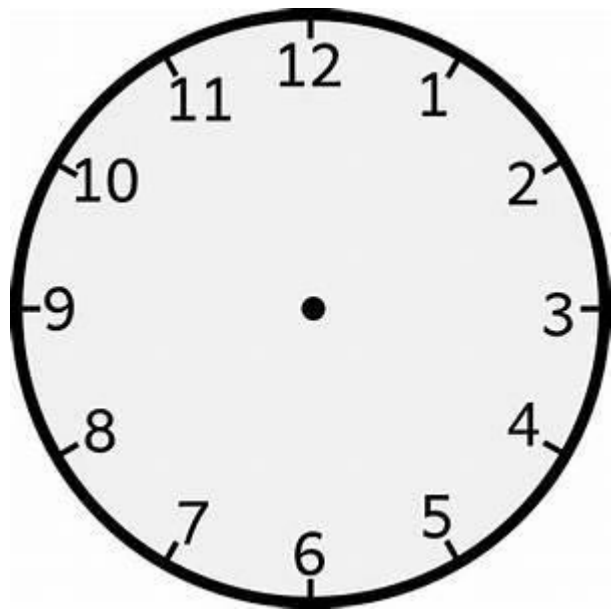
Q- समय 6:30 पर मिनट और घड़ी के घंटे के बीच का कोण क्या होगा ?

(1) 15°

(2) 30°

(3) 0°

(4) None of these



What will be the day of the week on 11th NOV 1980?

11th November 1980को सप्ताह का दिन क्या होगा?

- 1) Friday
- 2) Saturday
- 3) Sunday
- 4) Tuesday
- 5) None of these



Q. EAST

- (A) 12,41,30,57
- (B) 12,14,44,79
- (C) 12,14,22,98
- (D) 00,41,03,75

Matrix I					
	0	1	2	3	4
0	E	A	C	S	E
1	J	D	E	G	I
2	G	F	S	A	B
3	S	C	H	J	D
4	B	A	G	I	S

Matrix II					
	5	6	7	8	9
5	P	V	T	M	R
6	K	R	Q	Z	X
7	W	P	Y	R	T
8	N	Z	M	W	V
9	L	X	P	T	Q



Q. BEAR

- (A) 40,21,01,59
- (B) 04,21,01,59
- (C) 24,12,01,59
- (D) 24,12,10,59

Matrix I					
	0	1	2	3	4
0	E	A	C	S	E
1	J	D	E	G	I
2	G	F	S	A	B
3	S	C	H	J	D
4	B	A	G	I	S

Matrix II					
	5	6	7	8	9
5	P	V	T	M	R
6	K	R	Q	Z	X
7	W	P	Y	R	T
8	N	Z	M	W	V
9	L	X	P	T	Q



Input :-

17 18 16 15 19 21

Ist 15 16 14 13 17 19

IInd 19 20 18 17 21 23

IIIrd 8 9 7 6 10 12

IVth 34 30 32 30 38 42

Vth 324 361 289 256 400 484