



Don't Let Your Studies Get Impacted By COVID-19 Pandemic

Stay Home & Study Online With Mahendras Hybrid Model

Features



Offline Classes



Live Interactive Online Classes



Same Faculty



Same Batch



Same Batch Timing



Online Library Facility



Recorded Video



PDFs



Classes In Both Model

CONTACT US:

1800-103-5225

www.mahendras.org





UPCOMING ONLINE BATCHES

JULY 2021

07 July 2021

08:00 AM to 10:00 AM

**LIVE PREMIUM
GREEN CARD**
(BANK-PO & CLERK)

BILINGUAL

14 July 2021

10:30 AM to 12:30 PM

**LIVE PREMIUM
SILVER CARD**
(CGL & CHSI)

03:00 PM to 05:00 PM

**LIVE PREMIUM
STATE CARD**
(UPSSSC PET)

BILINGUAL

21 July 2021

01:00 PM to 03:00 PM

**LIVE PREMIUM
GREEN CARD**
(IBPS RRB PO/CLERK)
PRE + MAINS

BILINGUAL

28 July 2021

01:00 PM to 03:00 PM

LIVE PREMIUM BRONZE CARD
(TET)

10:30 AM to 12:30 PM

LIVE PREMIUM GREEN CARD
(IBPS PO & CLERK)

08:00 AM to 10:00 AM

LIVE PREMIUM SILVER CARD
(SSC CGL & CHSL)

BILINGUAL



The Staff Selection Commission has decided to re-schedule its following examinations as per the details given below:

| S. No. | Name of Examination | Revised Schedule |
|--------|--|-----------------------|
| 1. | Sub-Inspector in Delhi Police, CAPFs and ASI in CISF Examination (Paper-II), 2019 | 26.07.2021 |
| 2. | Combined Higher Secondary (10+2) Level Examination (Tier-I), 2020 - For left-over candidates | 04.08.2021-12.08.2021 |
| 3. | Combined Graduate Level Examination (Tier-I), 2020 | 13.08.2021-24.08.2021 |



Shivam Kumar 11 hours ago

Answer is TISWODI ✓✓✓✓✓✓✓✓ aaj ka session bhut achha tha sir

👍 1 🗨️ REPLY



Radha Garima 18 hours ago

Answer : TISWODI

Bht jayada acha and awasome session sir 🙏

👍 🗨️ REPLY

▶ [View reply from Mahendras : Online Videos For Govt. Exams](#)



Satyam Pandey 19 hours ago

C correct ans 🙌🙌❤️

Ekdm superb session sir 🙏🙏

👍 🗨️ REPLY

▶ [View reply from Mahendras : Online Videos For Govt. Exams](#)



QUARANTINED NOOB 2 hours ago

C is the correct answer sir....

Ekdm superb session...🙌🙌

👍 🗨️ REPLY



MISTY MISTY 📁👉 19 hours ago

Thank you sir bhut he acha level ka question tha apna acha kiya sir ki humara liya topic wise reasonir
Right answer is c

SERVICE=TISWODI 🙌🙌

👍 🗨️ REPLY

▶ [View reply from Mahendras : Online Videos For Govt. Exams](#)



Bijit Dutta 11 hours ago

🗨️



sarita rawat 16 hours ago

Homework answer

Option (3) TISWODI

AWESOME SESSION SIR 🙌🙌🙌🙌

THANKU SO MUCH SIR 🙏🙏🙏🙏🙏🙏🙏🙏

👍 🗨️ REPLY

▶ [View reply from Mahendras : Online Videos For Govt. Exams](#)



Viśhñù Güptá 18 hours ago

Service = Tiswodi right ans

Very sandaar Session Thank you 🙏 so much sir ❤️

👍 🗨️ REPLY

▶ [View reply from Mahendras : Online Videos For Govt. Exams](#)



Manidipa Mandal 19 hours ago

Option(3) TISWODI.

Thank you sir.....Nice session sir..... 🙏🙏🙏🙏🙏

👍 🗨️ REPLY

▶ [View reply from Mahendras : Online Videos For Govt. Exams](#)



kavita kumari 14 hours ago

Fabulous session sir 🙌

Thank you so much 🙏🙏

Opt C is right answer

👍 🗨️ REPLY

▶ [View reply from Mahendras : Online Videos For Govt. Exams](#)



Abhi Vaghela 19 hours ago

Option c TISWODI -30wodi

Nice session sir ❤️❤️❤️❤️❤️

👍 🗨️ REPLY

▼ [View reply from Mahendras : Online Videos Fo](#)



SAPANA WAKODE 17 hours ago

Ans ... TISWODI

Nice session sir 🙏🙏🙏👍

👍 🗨️ REPLY

▼ [View reply from Mahendras : Online Videos Fo](#)



Masum Idki 😊 11 hours ago

TISWODI 👍👍 very nice session 🙏🙏🙏

👍 🗨️ REPLY



Gudiya Kumari 18 hours ago

Answer..... Tiswodi👍👍👍👍👍👍 Nice sessior

👍 🗨️ REPLY

▼ [View reply from Mahendras : Online Videos Fo](#)



Sania S 19 hours ago

TISWODI 👍👍👍

consonant+1. and vowel ka next vowel
shandaar lajawab session sir 🙏🙏🙏

thank you so much sir 🙏🙏

👍 🗨️ REPLY



Roshni Khandelwal 19 hours ago

Answer is Option C

Today also very nice session

Bahat new concept the aaj bhi thank you sir

👍 🗨️ REPLY

▼ [View reply from Mahendras : Online Videos For Govt. Exams](#)



Chhavi Saxena 19 hours ago

Answer is option C .TISWODI

Logic Consonant +1,Vowel next AEIOU

👍 🗨️ REPLY

▼ [View reply from Mahendras : Online Videos For Govt. Exams](#)



PUJA KUNDU 19 hours ago

THE CORRECT ANSWER IS ""TISWODI""...SANDAR SESSION SIR 👍👍..THANK YOU SOO MUCH SIR 🙏🙏🙏

👍 🗨️ REPLY

▼ [View reply from Mahendras : Online Videos For Govt. Exams](#)



Indu prajapati 19 hours ago

TISWODI


👍 1 🗨️ REPLY


▼ [View reply from Mahendras : Online Videos For Govt. Exams](#)





Sunny Gupta 19 hours ago


TISWODI


 **Juthika Das** 19 hours ago
Ans is--TISWODI
Thank you sir 😊
👍 🗨️ REPLY
[View reply from Mahendras : Online Videos For Govt. Exams](#)


 **Preeti rajput** 19 hours ago
TISWODI
opp- c
👍 🗨️ REPLY
[View reply from Mahendras : Online Videos For Govt. Exams](#)


 **Kapil Bhagat** 19 hours ago
CCC
👍 🗨️ REPLY
[View reply](#)


 **ravi kumar** 16 hours ago
OptionCCCCC.===TISWODI 🙌🙌🙌 SIR HINDI KI CLASS AB NAHIN HOGI KYA 🤔🤔🤔🤔🤔
👍 🗨️ REPLY
[View reply from Mahendras : Online Videos For Govt. Exams](#)

 **nikita Chauhan** 17 hours ago
Homework ans option CCC
👍 🗨️ REPLY
[View reply from Mahendras : Online Videos For Govt. Exams](#)

 **Abhishek Pandey** 19 hours ago
Answer is option (C)
👍 🗨️ REPLY
[View reply from Mahendras : Online Videos For Govt. Exams](#)

 **vaibhav sahu** 11 hours ago
ans -tiswodi correct
👍 🗨️ REPLY

 **Reelaxmi Bhardwaj** 19 hours ago
Option 3 is right
👍 🗨️ REPLY
[View reply from Mahendras : Online Videos For](#)

 **Sunny Gupta** 19 hours ago
option C
👍 🗨️ REPLY
[View reply from Mahendras : Online Videos For](#)

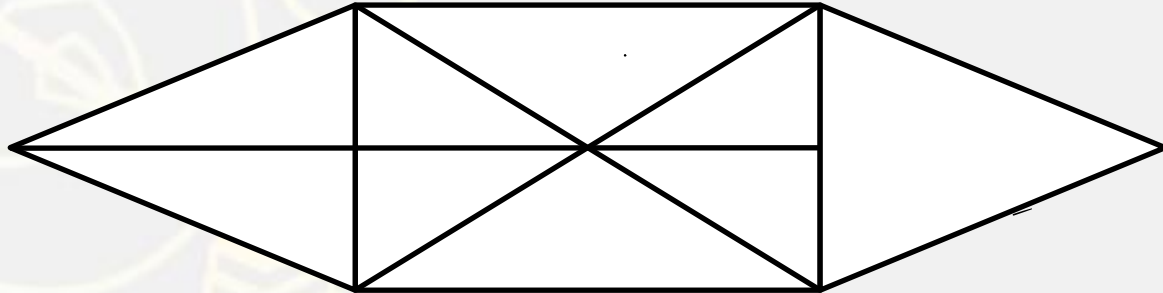


For Your Any Type of Reasoning Related Queries Join
Telegram Channel : **Reasoning Mahendras Live**
Kuldeep Mahendras Reasoning

Get Additional **10%** Discount On All Products & Services
of Mahendras
Use Code : **E09419**

Find the triangle (?) :

- 1. 14
- 2. 18
- 3. 16
- 4. 20



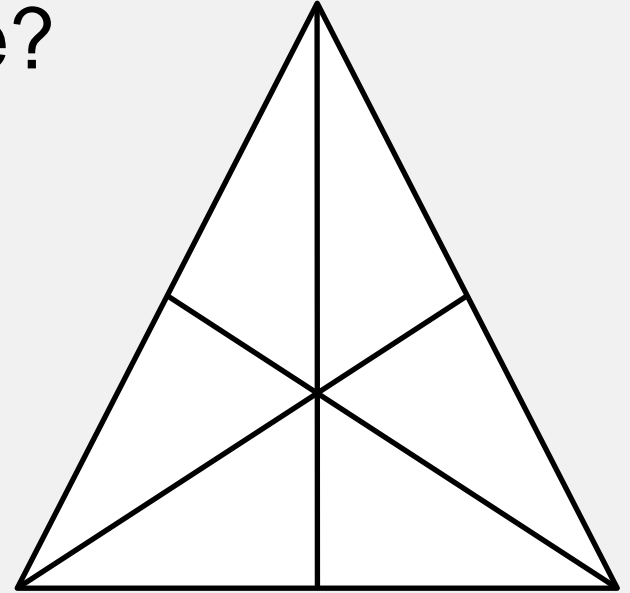
Find number of triangle in figure?

(A) 20

(B) 24

(C) 16

(D) 25




Find number of square in the given figure ?

(A) 32

(B) 30

(C) 29

(D) 28




Find number of rectangle in the given figure ?

(A) 90

(B) 100

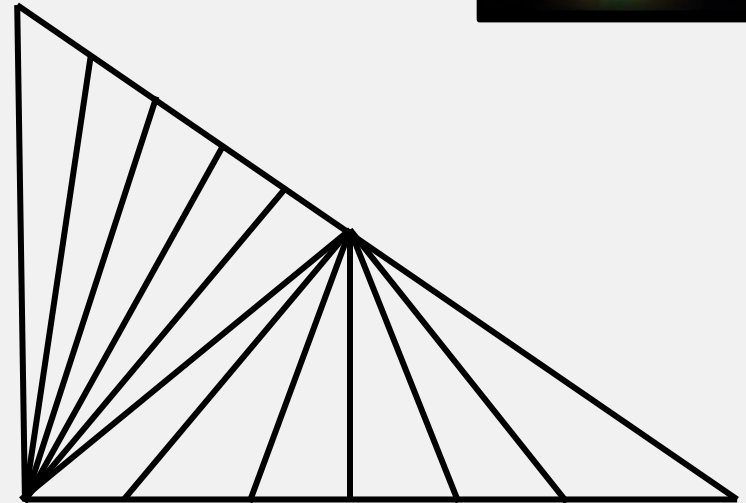
(C) 80

(D) 70



Find number of triangle in given figure ?

दी गई आकृति में त्रिभुज की संख्या ज्ञात कीजिए?



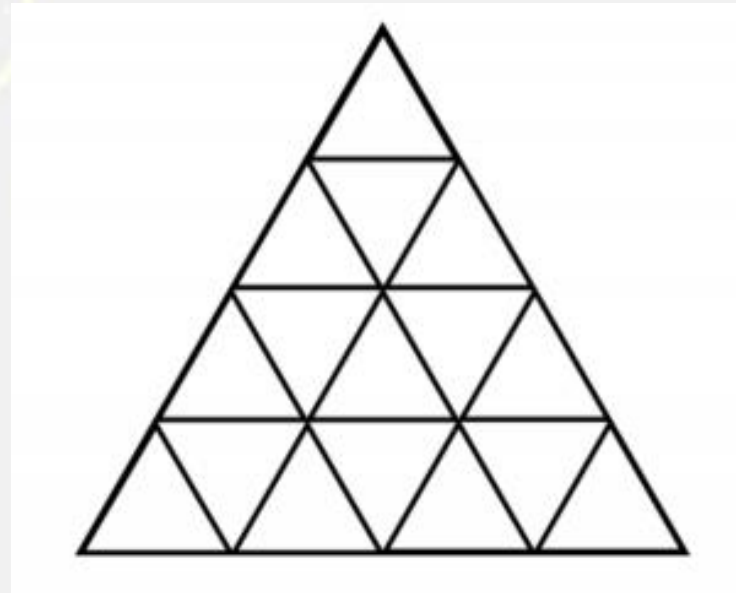
- (A) 32
- (B) 27
- (C) 41
- (D) 37

Find number of triangle in figure?

दी गई आकृति में त्रिभुज की संख्या ज्ञात कीजिए?



- (A) 27
- (B) 26
- (C) 16
- (D) 23



Find number of triangle in the given figure ?

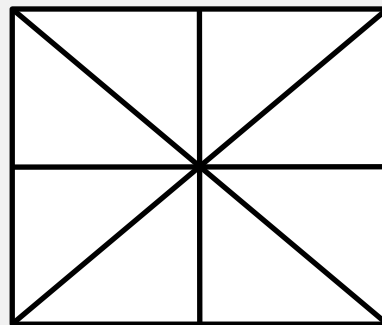
दी गई आकृति में त्रिभुज की संख्या ज्ञात कीजिए?

(A) 20

(B) 18

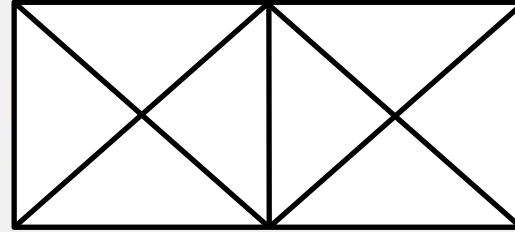
(C) 28

(D) 16



Find number of triangle in the given figure ?

दी गई आकृति में त्रिभुज की संख्या ज्ञात कीजिए?




- (A) 20**
- (B) 18**
- (C) 28**
- (D) 16**



Count the number of triangles and squares in the given figure.

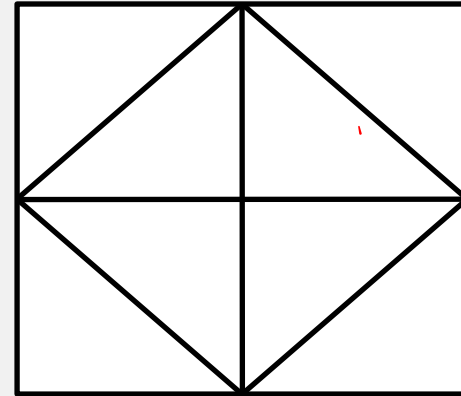
| | |
|-----|-------------------------|
| (A) | 28 triangles, 3 squares |
| (B) | 24 triangles, 5 squares |
| (C) | 28 triangles, 5 squares |
| (D) | 24 triangles, 3 squares |



Find number of triangle in the given figure ?

दी गई आकृति में त्रिभुज की संख्या ज्ञात कीजिए?

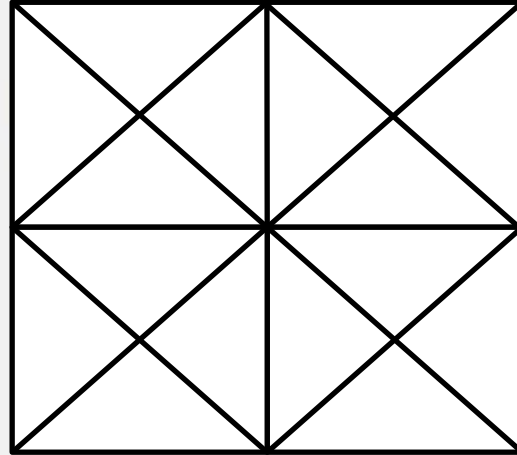
- (A) 12**
- (B) 18**
- (C) 28**
- (D) 16**



Find number of Triangle in the given figure ?

दी गई आकृति में त्रिभुज की संख्या ज्ञात कीजिए?

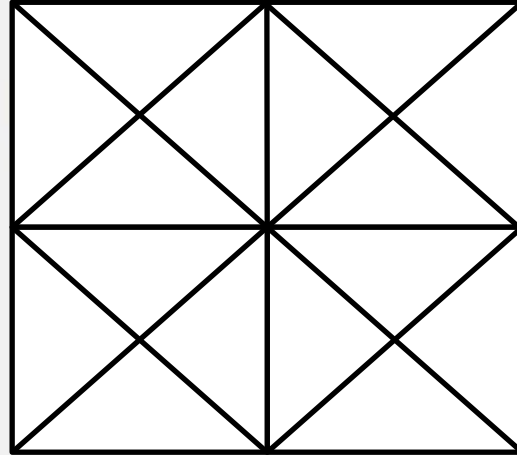
- (A) 40
- (B) 41
- (C) 44
- (D) 38



Find number of minimum number of lines in the given figure ?

दी गई आकृति में रेखा की न्यूनतम संख्या ज्ञात कीजिए?

- (A) 12
- (B) 13
- (C) 14
- (D) NOT



Find minimum number of straight lines in figure?

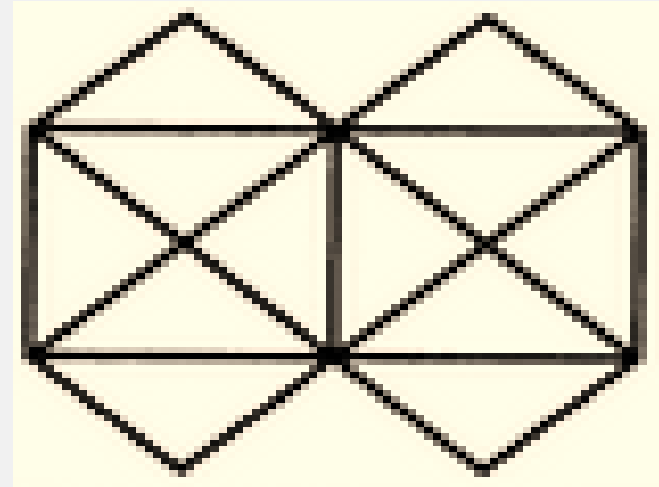
दी गई आकृति में रेखा की न्यूनतम संख्या ज्ञात कीजिए?

(A) 11

(B) 13

(C) 15

(D) 21



Find minimum number of straight lines in figure?

दी गई आकृति में रेखा की न्यूनतम संख्या ज्ञात कीजिए?

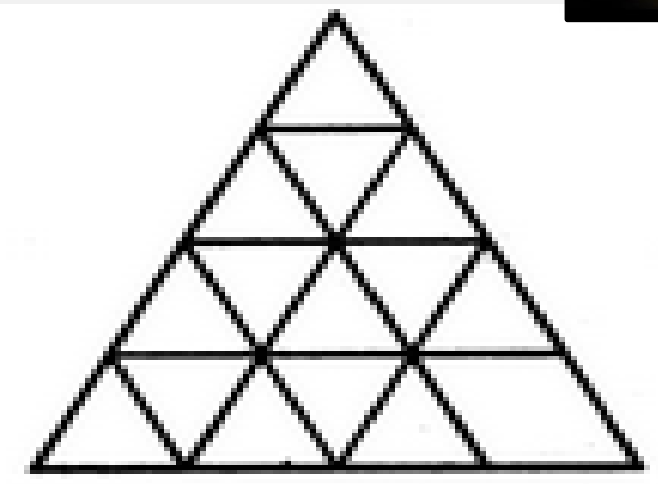


(A) 9

(B) 11

(C) 15

(D) 16



Find minimum number of straight lines in figure?

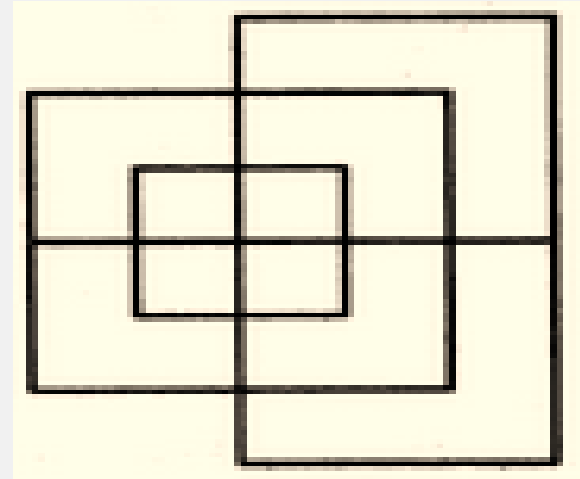
दी गई आकृति में रेखा की न्यूनतम संख्या ज्ञात कीजिए?

(A) 13

(B) 15

(C) 17

(D) 19



Find number of triangle in figure?

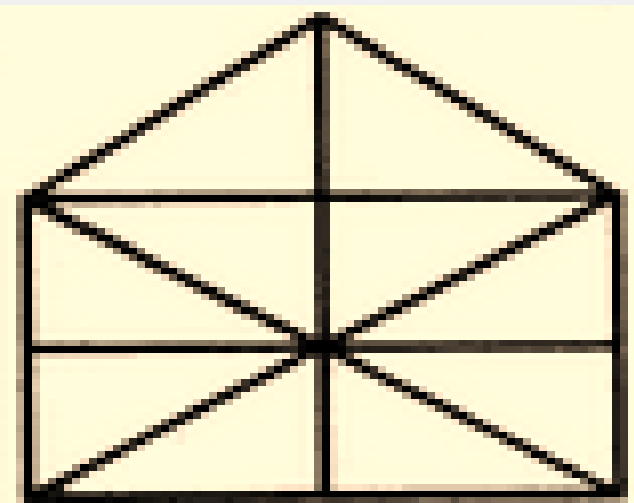
दी गई आकृति में रेखा की न्यूनतम संख्या ज्ञात कीजिए?

(A) 10

(B) 19

(C) 21

(D) 23



Find number of triangle in the given figure ?

दी गई आकृति में त्रिभुज की संख्या ज्ञात कीजिए?

(A) 10

(B) 8

(C) 12

(D) 9

