

# RAILWAY GROUP D

 *Mahendra's*

REASONING



≡ अंतिम प्रहार ≡

# EXPECTED QUESTIONS

LIVE | 08:30 PM







# UPCOMING ONLINE BATCHES

## August 2022

**03 AUG 2022**

**03:00 PM to 05:00 PM**

**BANK ONLINE LIVE CLASS**

**01:00 PM to 03:00 PM**

**SSC ONLINE LIVE CLASS**

**BILINGUAL**

**10 AUG 2022**

**05:30 PM to 07:30 PM**

**BANK ONLINE LIVE CLASS**

**08:00 AM to 10:00 AM**

**SSC ONLINE LIVE CLASS**

**BILINGUAL**

**17 AUG 2022**

**08:00 AM to 10:00 AM**

**BANK ONLINE LIVE CLASS**

**05:30 PM to 07:30 PM**

**SSC ONLINE LIVE CLASS**

**BILINGUAL**

**24 AUG 2022**

**07:30 PM to 09:30 PM**

**BANK ONLINE LIVE CLASS**

**10:30 AM to 12:30 PM**

**SSC ONLINE LIVE CLASS**

**BILINGUAL**

**31 AUG 2022**

**10:30 AM to 12:30 PM**

**BANK ONLINE LIVE CLASS**

**07:30 PM to 09:30 PM**

**SSC ONLINE LIVE CLASS**

**BILINGUAL**

**10 AUG 2022**

**02:00 PM to 04:00 PM**

**BANK ONLINE LIVE CLASS**

**BENGALI+ENGLISH**

**31 AUG 2022**

**06:30 PM to 08:30 PM**

**BANK ONLINE LIVE CLASS**

**BENGALI+ENGLISH**



[www.mahendras.org](http://www.mahendras.org)



7052477777/7052577777



PUJA KUNDU 1 day ago 7 subscribers

The answer....option D....thank you sir for the amazing session 🔥 👤

👍 🗨️ REPLY 📺

View reply from Mahendras : Online Videos For Govt. Exams



Chhavi Saxena 1 day ago

Home work answer is option D

Birth :death

Very Nice Session Sir Thanku So much dear Sir 👤 👤 👤 👤 👤 👤 👤

👍 🗨️ REPLY 📺

View reply from Mahendras : Online Videos For Govt. Exams



Ankit Vish 1 day ago 251 subscribers

Answer DDD

Lajwab session sir 👤 👤

👍 1 🗨️ REPLY 📺

View reply from Mahendras : Online Videos For Govt. Exams



Sudhir Kumar 1 day ago

Stimulus and response

👍 🗨️ REPLY 📺



Sudhir Kumar 1 day ago

Birth and death are natural so ans stimulus and response

👍 🗨️ REPLY 📺



Bhavya thakur  \_\_\_\_\_ 1 day ago **27** subscribers

Birth : Death 

 1  [REPLY](#) 

[View reply from Mahendras : Online Videos For Govt. Exams](#)



khushbu 1 day ago

DDD is the right answer

  [REPLY](#) 

[View reply from Mahendras : Online Videos For Govt. Exams](#)



fabulous ragini 1 day ago **116** subscribers

Right answer is ddd

  [REPLY](#) 

[View reply from Mahendras : Online Videos For Govt. Exams](#)



Shruti Jain 1 day ago **11** subscribers

D

  [REPLY](#) 

[View reply from Mahendras : Online Videos For Govt. Exams](#)

Find the option which should replace (?)



Action : Reaction :: ? : ?

क्रिया : प्रतिक्रिया :: : ?

- A. Stimulus : Response / उत्तेजना : प्रतिक्रिया
- B. Book : Cover / पुस्तक आवरण
- C. Firing : Running / फायरिंग : रनिंग
- D. Birth : Death / जन्म : मृत्यु

Find the missing one (?)

**( 11 , 13 , 288 ) : ?**

- (A) ( 7 , 11 , 162 )**
- (B) ( 19 , 23 , 828 )**
- (C) ( 3 , 5 , 31 )**
- (D) ( 13 , 17 , 415 )**



Find the missing one (?)



**Bhutan : Archery :: Mauritius : ?**

भूटान: तीरंदाजी :: मॉरीशस:?

- (A) Bandy / बंदी
- (B) Sumo / सूमो
- (C) Football / फुटबॉल
- (D) Dandi Biyo / दांडी बायो



Find the missing one (?)



**FASTER = 2118759**

**MONK = 14151316**

**GUARD = ?**

**(A) 19211922**

**(B) 2061923**

**(C) 7211922**

**(D) 20211923**



# Find the missing one (?)

$$49 = 18$$

$$916 = 20$$

$$155 = ?$$

(A) 10

(B) 15

(C) 20

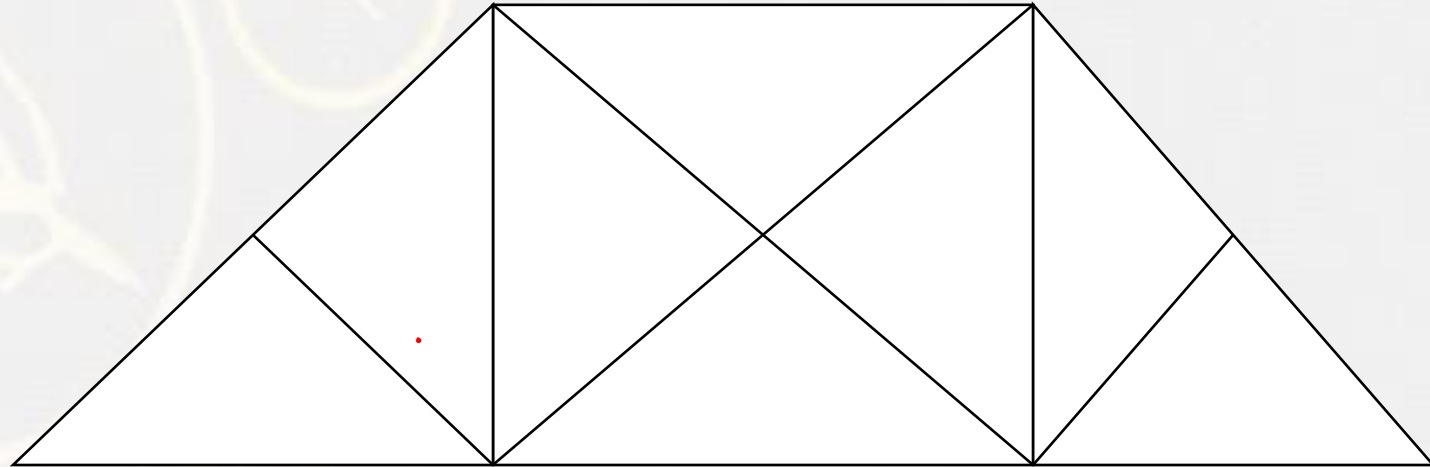
(D) 25



**Find the number of triangle (?)**



- (A) 14**
- (B) 16**
- (C) 18**
- (D) 20**



Find the missing one (?)

<b>17</b>	<b>41</b>	<b>?</b>
<b>15</b>	<b>24</b>	<b>29</b>
<b>49</b>	<b>106</b>	<b>85</b>

- (A) 28
- (B) 24
- (C) 37
- (D) 32



**Find the number of square and rectangle (?)**



- (A) 14 ,14**
- (B) 24 , 22**
- (C) 14 , 22**
- (D) NOT**


**a\_bbc\_aab\_cca\_bbcc**



- (A) bacb**
- (B) acba**
- (C) abba**
- (D) caba**



If 24 March 2018 is a Saturday . Which day of the week will be on 24 March 2035 ?

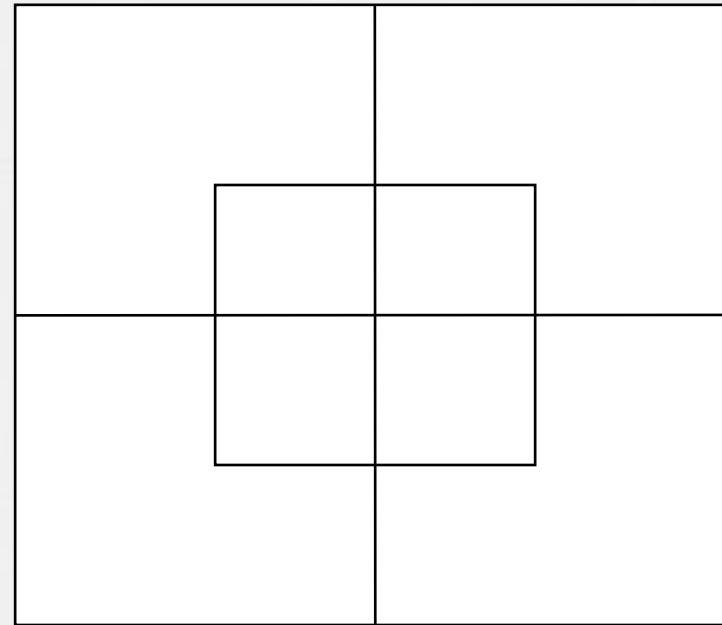
यदि 24 मार्च 2018 शनिवार है। सप्ताह का कौन सा दिन 24 मार्च 2035 को होगा?

- 1) Wednesday
- 2) Saturday
- 3) Sunday
- 4) Tuesday



**Find the number of square (?)**

- (A) 10**
- (B) 24**
- (C) 14**
- (D) NOT**



**Find the odd one :-**

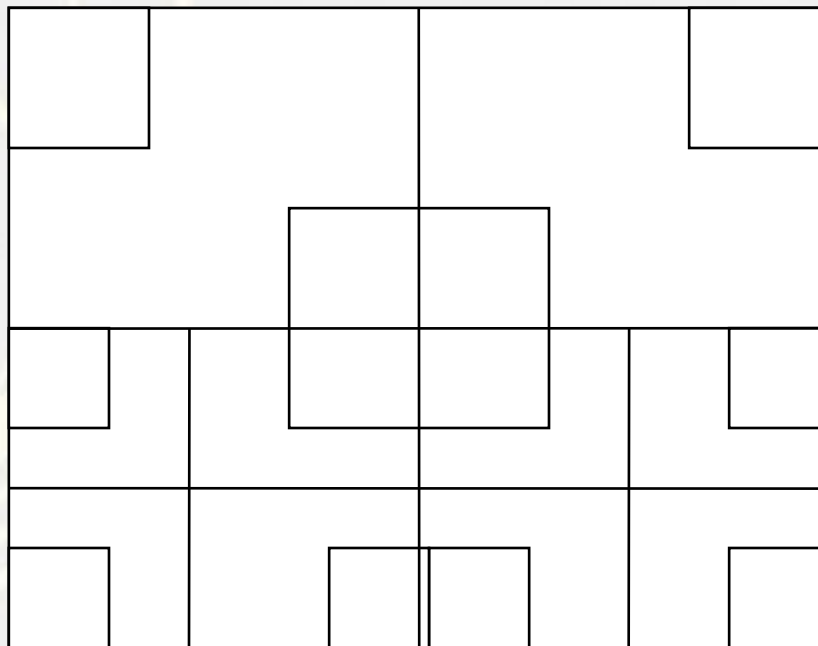
- (A) 19361**
- (B) 23529**
- (C) 29841**
- (D) 22484**



**Find number of SQUARE in the given figure ?**

**दी गई आकृति में वर्ग की संख्या ज्ञात कीजिए?**

- (A) 24**
- (B) 27**
- (C) 23**
- (D) NOT**



Find the option which should replace (?)

$$18 : 81 :: 16 : ?$$

- (A) 72
- (B) 76
- (C) 67
- (D) 77





Find the option which should replace (?)

$$832 : 48 :: 960 : ?$$

- (A) 00
- (B) 96
- (C) 120
- (D) 108



Find the option which should replace (?)

**11 : 38 :: 13 : ?**

- (A) 47**
- (B) 44**
- (C) 43**
- (D) 46**



Find the option which should replace (?)

$$3 : 36 :: 4 : ?$$

- (A) 47
- (B) 80
- (C) 43
- (D) 46



Find the option which should replace (?)

$$4 : 12 :: 6 : ?$$

- (A) 19
- (B) 20
- (C) 25
- (D) 30



Find the option which should replace (?)

$$I/L : 3/4 :: J/T : ?$$

- (A)  $1/4$
- (B)  $1/20$
- (C)  $4/3$
- (D)  $1/2$





Find the option which should replace (?)

**M : 8 :: S : 20 :: K : ?**

- (A) 4
- (B) 8
- (C) 12
- (D) 10

