



UP PET MOCK TEST



REASONING

30 DAYS

महाभ्यारस

DAY-14



LIVE | 06:30 PM

By Kuldeep Mahendras



UPCOMING ONLINE BATCHES

October 2022

05 OCT 2022

05:30 PM to 07:30 PM

BANK ONLINE LIVE CLASS

01:00 PM to 03:00 PM

SSC ONLINE LIVE CLASS

BILINGUAL

12 OCT 2022

10:30 AM to 12:30 PM

BANK ONLINE LIVE CLASS

07:30 PM to 09:30 PM

SSC ONLINE LIVE CLASS

BILINGUAL

19 OCT 2022

03:00 PM to 05:00 PM

BANK ONLINE LIVE CLASS

10:30 AM to 12:30 PM

SSC ONLINE LIVE CLASS

BILINGUAL

26 OCT 2022

08:00 AM to 10:00 AM

BANK ONLINE LIVE CLASS

05:30 PM to 07:30 PM

SSC ONLINE LIVE CLASS

BILINGUAL

05 OCT 2022

04:15 PM to 06:15 PM

BANK ONLINE LIVE CLASS

BENGALI+ENGLISH

19 OCT 2022

06:30 PM to 08:30 PM

BANK ONLINE LIVE CLASS

BENGALI+ENGLISH



www.mahendras.org



7052477777 / 7052577777



PUJA KUNDU 1 day ago 8 subscribers

The answer is NIECE....THANK YOU SOO MUCH SIR FOR THE AMAZING SESSION 🔥 👍

👍 🗨️ REPLY ▶️

▼ 1 REPLY



The Shield 1 day ago 14 subscribers

Option d. Niece thank you sir and this session is very helpfully ❤️ 👍

👍 🗨️ REPLY ▶️

▼ 1 REPLY



Chhavi Saxena 1 day ago

Home work answer is option D (NIECE)

Very Nice Session Sir Thanku So much dear Sir 👍👍👍👍👍

Sir , ek request hai..... please daily class lijiye reasoning ki 👍👍👍👍

👍 🗨️ REPLY ▶️

▼ 1 REPLY



Wishnu Gupta 1 day ago 10 subscribers

The Right ans D- NIECE....Thank you so much sir love you 😊 sir 👍❤️ Very super hard session sir 🙌❤️👍😊

👍 🗨️ REPLY ▶️

▼ 1 REPLY



Mohit.. 1 day ago 1 subscribers

Thank-you Sir for this Amazing Class of today's.. 👍😊

And

My Answer For today's Homework is-

Option D == Niece...

Read more

👍 🗨️ REPLY ▶️

▼ 3 REPLIES



Komal Sharma 1 day ago

Niece option d



▼ 1 REPLY



Hrithik _____ 1 day ago 29 subscribers

NIECE



▼ 1 REPLY

Share
&

like!

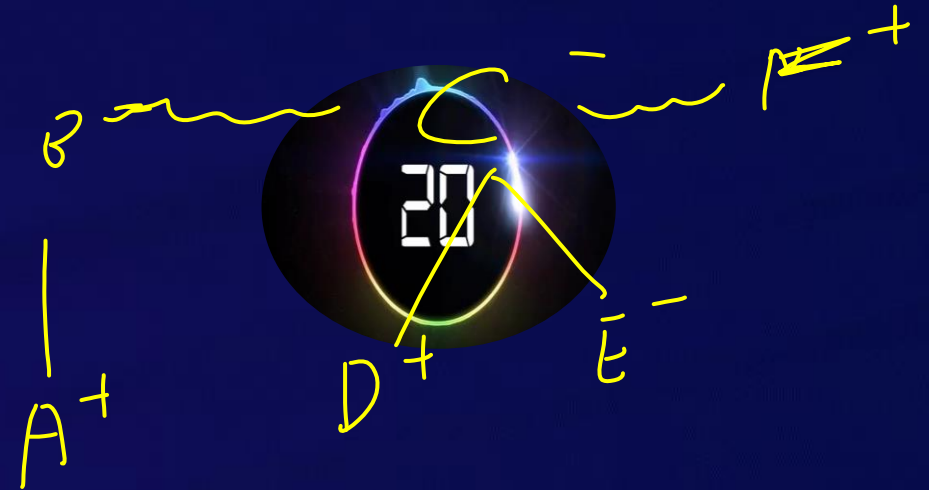




A is the son of B. C, B's sister has son D and a daughter E. F is the maternal uncle of D. How is E related to F?

A, B का बेटा है। C (B की बहन) का बेटा D है और एक बेटी E। F, D का मामा है। E, F से कैसे संबंधित है?

- (A) Sister
- (B) Mother
- (C) Cousin
- (D) Niece
- (E) None of these





If R's house is towards South from K's house and G's house is towards east from K's house then in which direction is R's house from G's house ?

यदि R का घर K के घर से दक्षिण की ओर है और G का घर K के घर से पूर्व की ओर है, तो R के घर से G का घर कौन सा है?

- (A) North east
- (B) North west
- (C) South east
- (D) South west





From the given alternative words, select the word which cannot be formed using the letters of the give word :

दिए गए वैकल्पिक शब्दों से, उस शब्द का चयन करें जिसे शब्द के अक्षरों का उपयोग करके नहीं बनाया जा सकता है:

ORGANISATION



(A) STRONG

(B) ORANGE

(C) NOTION

(D) GROAN






Your age is 10 years less than half of your mother's age . Mother is 5 years younger than your father , if your father is 45 years old , then what is your age ?

आपकी उम्र आपकी माँ की उम्र के आधे से 10 साल कम है। माँ आपके पिता से 5 साल छोटी है, अगर आपके पिता की उम्र 45 साल है, तो आपकी उम्र क्या है?

- (A) 20 years
- (B) 15 years
- (C) 10 years
- (D) 5 years



Handwritten solution showing the calculation:

F	M	You
45	<u>40</u>	$(\frac{40}{2}) - 10$

The result of the calculation is 10, which is circled in yellow. A digital clock graphic shows the number 20, with an arrow pointing from the circled 10 to it, suggesting a common mistake.



Which one is similar as Hockey , Cricket , Polo?

हाँकी, क्रिकेट, पोलो?

(A) Pen / कलम

(B) Duleep Trophy / दलीप ट्रॉफी ✗

(C) Game / गेम ✗

(D) Football / फुटबॉल 





Find the odd one out(?)

A. 4, 12

8

B. 8, 16

8

C. 14, 24

10

D. 6, 14

8





Which number will replace the question mark ?

6	9	11
3	4	7
27	65	?



$(6+3) \times (6-3)$

$(9+4) \times (9-4)$

$(11+7) \times (11-7)$
 $18 \times 4 = 72$

- (A) 65
- (C) 69

- (B) 32
- ~~(D) 72~~





Find the option which should replace (?)

30 , 60 , 360 , 3600 , ?

 x2 x6 x10 x14



- (A) 48500
- (B) 50500
- (C) 50400
- (D) 40800





Find the option which should replace (?)

3, 2, 2, 3, 8, 35, ?

Handwritten annotations:

- $3 \times 1 - 1 = 2$
- $2 \times 2 - 2 = 2$
- $2 \times 3 - 3 = 3$
- $3 \times 4 - 4 = 8$
- $8 \times 5 - 5 = 35$
- $35 \times 6 - 6 = 204$

The number 204 is circled in yellow.



(A) 175

(B) 196

(C) 204

(D) 216





Find the option which should replace (?)

1, 2, 6, ?, 49, 174

1 4 27 16 125

- (A) 25
- (B) 28
- (C) 33
- (D) 27

$$\begin{array}{r} 174 \\ 49 \\ \hline 125 \end{array}$$





Find the option which should replace (?)

1 , 0.25 , 1/9 , ? , 0.04 , 1/36



(A) 0.0625



(B) 0.025

(C) 1/8

(D) 1/6

$\frac{1}{1}$

$\frac{1}{4}$

$\frac{1}{9}$

$\frac{1}{16}$

$\frac{1}{25}$

$\frac{1}{36}$



Find the missing term(?)



- (A) 104
- (B) 168
- (C) 212
- (D) 189





Find the odd one out(?)

A. 19729

B. 17343

C. 16216

D. 18324



$8^3 - 512$





How many rectangles are there in this figure?

आयत की संख्या ज्ञात कीजिए (?)

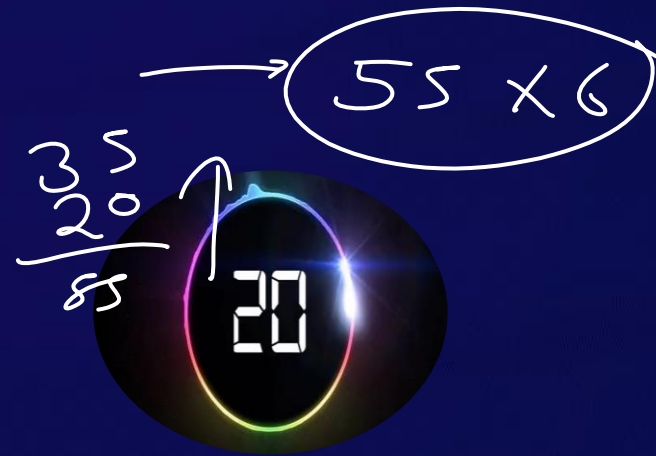
1	2	3	4	5	6	7	8	9	10
2									
3									

(A) 360

(B) 390

(C) 380

(D) 330





Find the odd one out(?)

A. 59

B. 23

C. 52

D. 47

Non Prime





Find the option which should replace (?)

* $\frac{211}{32}$

$16 : 74 :: ? : 164$

(A) 16

(B) 12

(C) 19

(D) 18



$(1+6) = 7^2$

$(1-6) = 5^2$

$$\begin{array}{r} 49 \\ 25 \\ \hline 74 \end{array}$$

$1+9 = 10^2$

$1-9 = 8^2$

$$\begin{array}{r} 100 \\ 64 \\ \hline 164 \end{array}$$



Find the option which should replace (?)

TAKEN = ZGPMV


ORBIT =

(A) RGYLI

(B) ~~ILGYR~~

(C) ILYGR

(D) GIYRL



TAKEN
X I X
Z G P M V




ORBIT
X I X
I L Y G R



Arrange in meaningful order :

1. Seed / बीज
2. Flower / फल
3. Soil / मिट्टी
4. Plant / पौधा
5. Fruit / फल
6. Leaf / लीफ

- A. 4,2,5,1,3,6
- B. 2,5,4,1,3,6
- C. 3,2,1,5,4,6
- D. 3,1,4,6,2,5





Find the option which should replace (?)

Norway : ? :: Kenya : Nairobi

नॉर्वे : ? :: केन्या : नैरोबी




(A) Vienna / वियना

(B) Thimpu / थिम्पू

(C) Oslo / ओस्लो

(D) Lisbon / लिस्बन




 Find the option which should replace (?)

Rouf : ? :: Bihu : Assam

रूफः? :: बिहूः असम



- (A) Kashmir / कश्मीर 
- (B) Andhra pradesh / आंध्रप्रदेश
- (C) Kerala / केरल
- (D) Assam / असम



Find the option which should replace (?)


$$\overbrace{923} : \overbrace{33} :: \overbrace{467} : ?$$

(A) 70

(B) 66

(C) 52

(D) 60



$$(9+2) \times 3 = 33$$



$$(4+6) \times 7 = 70$$



Find the option which should replace (?)

Sattriya : India :: ? : ?

सात्र्यः भारत :: ? : ?



- (A) Ballet : Russia / बैले: रूस ←
- (B) Flamenco : Africa / फ्लेमैंको: अफ्रीका
- (C) Break Dance : USA / ब्रेक डांस: यूएसए
- (D) Tango : Spain / टैंगो: स्पेन





Q. Ram, a friend of Krishna come to meet him every Sunday . The first time he came at 12:30, the next time at 1:20 , then he came at 2:30 and then at 4. After that when did Rama come to meet Krishna?

Q. कृष्णा का एक मित्र हर रविवार को उससे मिलने आता है। पहली बार 12:30 पर आया, फिर 1:20 बाद आया फिर 2:30 बाद आया तथा फिर 4:00 बजे। उसके बाद कृष्णा से मिलने के लिए राम कब आएगा?

~~(1) 5:20~~

(2) 5:30

(3) 6:20

(4) 5:50





Q. Now if it is 1 o' clock in the afternoon , what time was it 40 hours ago?

Q. यदि अभी घड़ी में दोपहर का 1:00 बज रहा है तो 40 घंटे पहले क्या समय हुआ होगा ?

(1) 9 am

(2) 10 pm

~~(3) 9 pm~~

(4) 10 am

(1)

9.00 PM

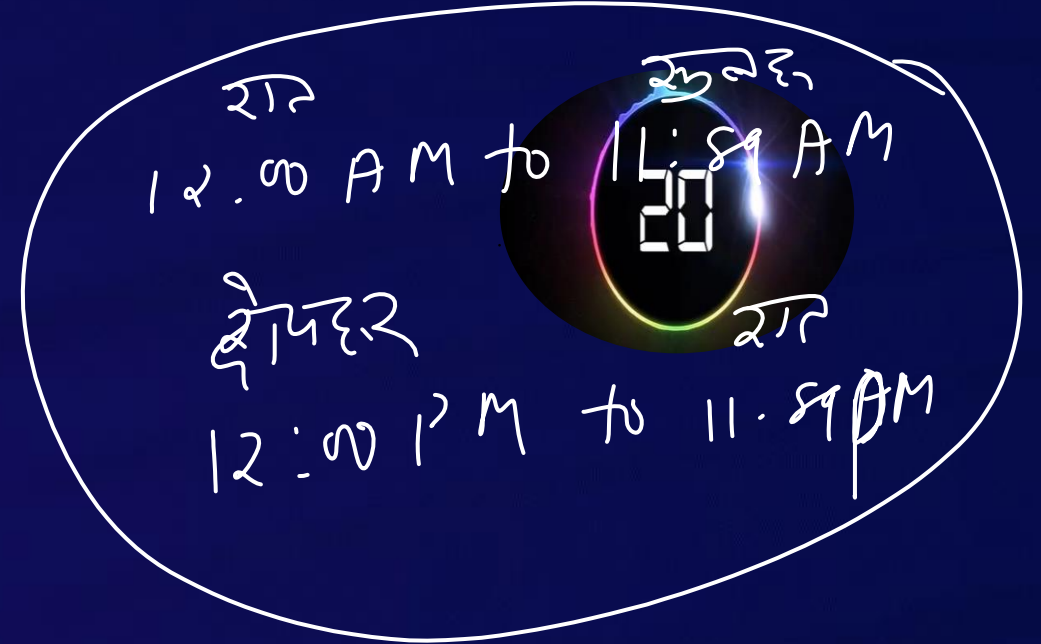
(2)

1.00 AM

(3)

1.00 PM

1.00 PM





From the given alternative words, select the word which can be formed using the letters of the give word :

दिए गए वैकल्पिक शब्दों से, उस शब्द का चयन करें जिसे शब्द के अक्षरों का उपयोग करके बनाया जा सकता है:

WINDIGITALLIFESTYLE

(1) WODISA

(2) INGAIL

(3) JOLLYNA

(4) LONGJUMP

H:W.

20

9:00 AM - Bank (Reasoning)

6:30 PM - Hindi (MWF)

Rea (TTS)