



Mahendra's



UP POLICE कॉन्स्टेबल

REASONING

PREVIOUS YEAR

QUESTION PAPER

SUPER TRICK

LIVE

04:00 PM





Don't Let Your Studies Get Impacted By COVID-19 Pandemic

Stay Home & Study Online With Mahendras Hybrid Model

Features



Offline Classes



Live Interactive Online Classes



Same Faculty



Same Batch



Same Batch Timing



Online Library Facility



Recorded Video



PDFs



Classes In Both Model

CONTACT US:

1800-103-5225

www.mahendras.org





UPCOMING ONLINE BATCHES

March 2022

02 March 2022

05:30 PM to 07:30 PM

BANK ONLINE LIVE CLASS

01:00 PM to 03:00 PM

SSC ONLINE LIVE CLASS

BILINGUAL

09 March 2022

10:30 AM to 12:30 PM

BANK ONLINE LIVE CLASS

03:00 PM to 05:00 PM

BANK ONLINE LIVE CLASS

05:30 PM to 07:30 PM

SSC ONLINE LIVE CLASS

BILINGUAL

16 March 2022

01:00 PM to 03:00 PM

BANK ONLINE LIVE CLASS

08:00 AM to 10:00 AM

BANK ONLINE LIVE CLASS

07:30 PM to 09:30 PM

SSC ONLINE LIVE CLASS

03:00 PM to 05:00 PM

SSC ONLINE LIVE CLASS

BILINGUAL

23 March 2022

10:30 AM to 12:30 PM

BANK ONLINE LIVE CLASS

08:00 AM to 10:00 AM

SSC ONLINE LIVE CLASS

01:00 PM to 03:00 PM

SSC ONLINE LIVE CLASS

BILINGUAL

30 March 2022

08:00 AM to 10:00 AM

BANK ONLINE LIVE CLASS

05:30 PM to 07:30 PM

BANK ONLINE LIVE CLASS

10:30 AM to 12:30 PM

SSC ONLINE LIVE CLASS

BILINGUAL

07:30 PM to 09:30 PM

BANK ONLINE LIVE CLASS

(BANK PO & CLERK)

ENGLISH MEDIUM



Nadeem 1 day ago

🌸 Homework Answer 🌸

🔴 Option C :- Hanger ✅✅

🍀 Thank You Sir 🙏 Nice Session Sir 😊 🌸 🍌



REPLY

▶ [View reply from Mahendras : Online Videos For Govt. Exams](#)



Chhavi Saxena 1 day ago

Home work answer is option C (HANGER)

Very Nice Session Sir 🙏🙏🙏

Thank you so much 🙏🙏



REPLY

▶ [View reply from Mahendras : Online Videos For Govt. Exams](#)



SANIA _____ 6 hours ago (edited)

awesome session sir 🍌🍌🍌

Hanger 🔥🔥🔥



REPLY



Vishnu Gupta 1 day ago

HANGER is the right ans

Very super nice session sir thank you 🙏 sir love you 😊 sir 🙏❤



REPLY

▶ [View reply from Mahendras : Online Videos For Govt. Exams](#)



Ankit Vish 12 hours ago

Answer. C

Nice session sir 🙏🙏

👍 1 🗨️ 📌 ▼ 📄 REPLY

▼ [View reply from Mahendras : Online Videos For Govt. Exams](#)



SAPANA 1 day ago

Ans.....Hanger

Thank you sir 🙏🙏🙏

👍 🗨️ 📌 ▼ 📄 REPLY

▼ [View reply from Mahendras : Online Videos For Govt. Exams](#)



🌸 PUJA KUNDU 🌸 1 day ago

The answer is "HANGER".....aaj to Bahubali qn k saath Bahubali session tha sir 🔥🔥🔥🙏🙏🙏 thank you sir

👍 🗨️ 📌 ▼ 📄 REPLY

▼ [View reply from Mahendras : Online Videos For Govt. Exams](#)



abhay singh 1 day ago

Answer is "Hanger"

👍 1 🗨️ 📌 ▼ 📄 REPLY

▼ [View reply from Mahendras : Online Videos For Govt. Exams](#)



Umesh Kushwah 4 hours ago

c) hanger

👍 🗨️ 📌 ▼ 📄 REPLY



Sonu Thakur 1 day ago

Batch ka time kya h?

REPLY



ANNU LATA 1 day ago

CCC is right ans

REPLY

[View reply from Mahendras : Online Videos For Govt. Exams](#)



Piyush Rai 17 hours ago

Hanger

REPLY

[View reply from Mahendras : Online Videos For Govt. Exams](#)



suraj 1 day ago

Hanger

REPLY

[View reply from Mahendras : Online Videos For Govt. Exams](#)

Find the missing (?)

Chair : Furniture :: ? : ?

कुर्सी : फर्नीचर : ? : ?

1. Letter paper : Stationary / पत्र कागज : स्टेशनरी
2. Pencil : Wood / पेंसिल : लकड़ी
3. Bicycle : Travel / साइकिल : यात्रा
4. Seat : Cover / सीट : गिलाफ



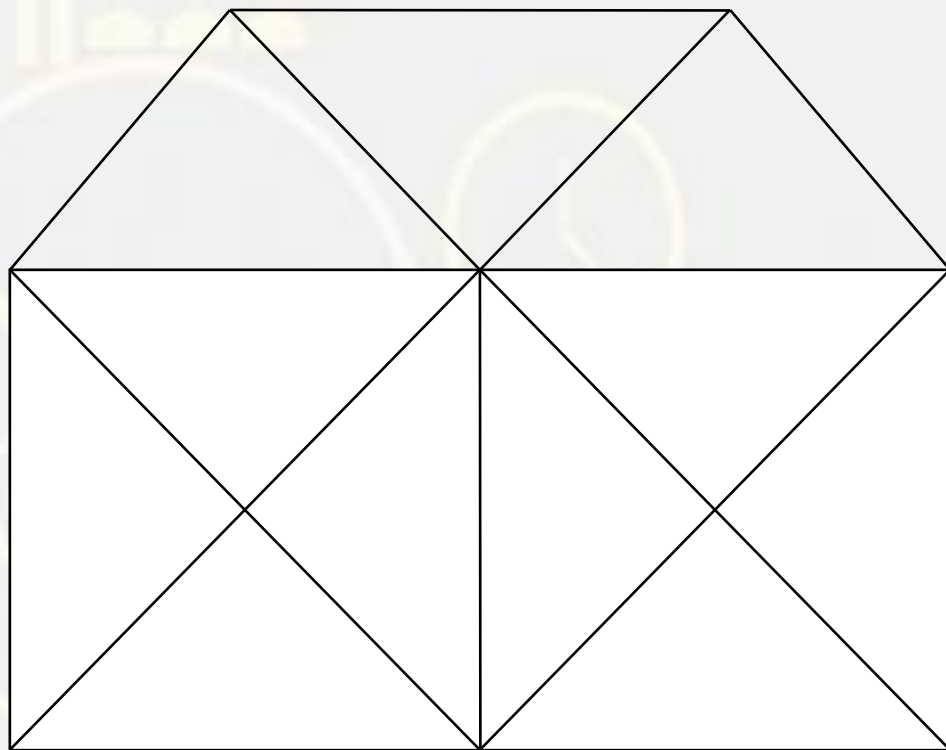
Find the missing ONE (?)

5 : 125 :: ? : ?

- (A) 4 : 64
- (B) 9 : 729
- (C) 8 : 512
- (D) 7 : 343



Find the number of triangles in the given figure.



- A. 21**
- B. 22**
- C. 16**
- D. 23**

Find the missing one (?)

Kuldeep Nayar : Journalist : : Diego Maradona : ?
कुलदीप नैयर : पत्रकार : : डिएगो माराडोना : ?

- (A) Cricketer / क्रिकेटर
(B) Footballer / फुटबॉलर
(C) Journalist / पत्रकार
(D) Social Worker / सामाजिक कार्यकर्ता



If today is Sunday then which day would be the 65th day after today ?

अगर आज रविवार है तो आज के 65 वें दिन कौन सा दिन होगा?



- (A) Monday
- (B) Tuesday
- (C) Wednesday
- (D) Sunday

Find the missing one (?)

DF : 42 :: IB : ?

- (A) 18**
- (B) 81**
- (C) 24**
- (D) 42**

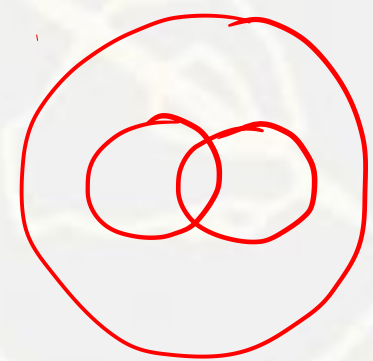


Which of the following diagrams indicates the best relation between Ink , Pen and Book ?


इंक, पेन और बुक?



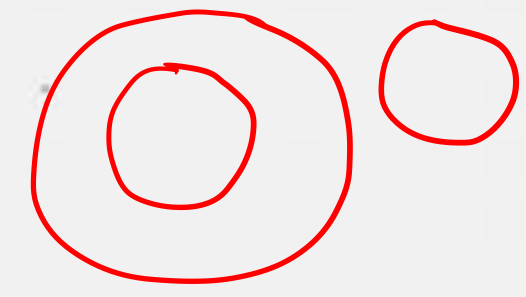
A.



B



.C



.D.



Ratio of present age of P and Q is 9 : 4 . The difference between their ages is 20 years . What will be the sum (in years) of their ages after 10 years ?

P और Q की वर्तमान आयु का अनुपात 9: 4 है। उनकी उम्र में 20 साल का अंतर है। 10 वर्ष के बाद उनकी आयु का योग (वर्षों में) क्या होगा?

- (A) 62
- (B) 66
- (C) 72
- (D) 76



Which number will replace the question mark ?

18	20	8
16	22	9
20	18	?



(A) 10
(C) 11

(B) 6
(D) 7

Find the missing one (?)

Lala Lajpat Rai : Punjab Kesari : : Sarojini Naidu : ?

लाला लाजपत राय: पंजाब केसरी:: सरोजिनी नायडू :?

- (A) Sher-i-Punjab / शेर-ए-पंजाब
- (B) Nightingale of India / भारत की कोकिला
- (C) Sardar / सरदार
- (D) Deshbandhu / देशबंधु



Choose the alternative which is closely resembles the mirror image of the given combination..

Nu56p7uR

(1) Иuǝǝq7uЯ

(2) Яn7qǝǝnИ

(3) Яu7qǝǝuИ

(4) Яu7d9ǝuИ

- A. 1
- B. 2
- C. 3
- D. 4



Choose the odd one.

- (A) **2564 : 32**
- (B) **3797 : 42**
- (C) **1479 : 32**
- (D) **4632 : 23**



Find the missing one (?)

AAAAaA , AAAaAA , AAaAAA , ?

- (A) AAAAAa**
- (B) aAAAAAA**
- (C) AaAAAAA**
- (D) AAAaAAA**



Choose the odd one.

- (A) 846
- (B) 918
- (C) 663
- (D) 795

