



SSC GD CONSTABLE 2021



REASONING

परीक्षा में पूछे गये प्रश्न

•Live  **08:30 PM**





Don't Let Your Studies Get Impacted By COVID-19 Pandemic

Stay Home & Study Online With Mahendras Hybrid Model

Features



Offline Classes



Live Interactive Online Classes



Same Faculty



Same Batch



Same Batch Timing



Online Library Facility



Recorded Video



PDFs



Classes In Both Model

CONTACT US:

1800-103-5225

www.mahendras.org





UPCOMING ONLINE BATCHES

December 2021

01 Dec 2021

08:00 AM to 10:00 AM

LIVE PREMIUM GREEN CARD
(BANK-PO & CLERK)

05:30 PM to 07:30 PM

LIVE PREMIUM GREEN CARD
(BANK-PO & CLERK)

01:00 PM to 03:00 PM

LIVE PREMIUM SILVER CARD
(SSC CGL & CHSL)

BILINGUAL

08 Dec 2021

10:30 AM to 12:30 PM

LIVE PREMIUM GREEN CARD
(BANK-PO & CLERK)

03:00 PM to 05:00 PM

LIVE PREMIUM GREEN CARD
(BANK-PO & CLERK)

08:00 AM to 10:00 AM

LIVE PREMIUM SILVER CARD
(SSC CGL & CHSL)

BILINGUAL

15 Dec 2021

01:00 PM to 03:00 PM

LIVE PREMIUM GREEN CARD
(BANK-PO & CLERK)

10:30 AM to 12:30 PM

LIVE PREMIUM SILVER CARD
(SSC CGL & CHSL)

BILINGUAL

22 Dec 2021

08:00 AM to 10:00 AM

LIVE PREMIUM GREEN CARD
(BANK-PO & CLERK)

07:30 PM to 09:30 PM

LIVE PREMIUM SILVER CARD
(SSC CGL & CHSL)

BILINGUAL

29 Dec 2021

10:30 AM to 12:30 PM

LIVE PREMIUM GREEN CARD
(BANK-PO & CLERK)

07:30 PM to 09:30 PM

LIVE PREMIUM GREEN CARD
(BANK-PO & CLERK)

03:00 PM to 05:00 PM

LIVE PREMIUM SILVER CARD
(SSC CGL & CHSL)

BILINGUAL



SSC GD 2021 Exam Analysis: Check difficulty level & number of good attempts

<i>Name of the section</i>	<i>Difficulty level</i>	<i>Number of good attempts</i>
General Intelligence and Reasoning	Easy to Moderate	20 to 22
General Knowledge and General Awareness	Easy to Moderate	18 to 20
Elementary Mathematics	Moderate	16 to 18
English/ Hindi	Easy to Moderate	21 to 23

Topic	No of Questions Asked in SSC GD Constable Exam
Coding-Decoding	2
Statement Conclusion	–
Missing Term	2
Venn Diagram	1
Syllogism	2
Paper Folding	1
Blood relation & order and ranking	2
Mathematics Operation	1
Analogy & Classification	6
Series	4
Dice & Sequence	2
Puzzle (Linear Sitting Arrangement)	2
Mirror Image	1
Hidden Figure	1
Complete Figure & Figure Counting	2
Total	25



🍁 PUJA KUNDU 🍁 11 hours ago

The correct answer is ----- $68\{(5 \times 9) + (14 + 9)\}$amazing session sir.....thank you sir for the session 🙏

👍 1 🗨️ REPLY

▶ [View reply from Mahendras : Online Videos For Govt. Exams](#)



SANIA _____ 11 hours ago (edited)

superb session sir 🙏🙏🙏🙏
 $(9 \times 5) + (14 + 9) = 68$ 🔥🔥🔥🔥🔥🔥

👍 1 🗨️ REPLY

▶ [View reply from Mahendras : Online Videos For Govt. Exams](#)



Radha Garima 11 hours ago

Answer : 68
Nice session sir 🙏😊

👍 1 🗨️ REPLY

▶ [View reply from Mahendras : Online Videos For Govt. Exams](#)



Chhavi Saxena 11 hours ago

Home work answer is 68
Nice session sir 🙏🙏

👍 1 🗨️ REPLY

▶ [View reply from Mahendras : Online Videos For Govt. Exams](#)



Kumaār's 11 hours ago



👍 🗨️ REPLY



Kapil Bhagat 11 hours ago

68



REPLY



puspranjan singh 11 hours ago

68



1



REPLY

▼ [View reply from Mahendras : Online Videos For Govt. Exams](#)



Hrithik_____ 11 hours ago

68



1



REPLY

▼ [View reply from Mahendras : Online Videos For Govt. Exams](#)



Find the missing :-

1. 68
2. 71
3. 53
4. 76

	8	
6	54	7
	4	

	12	
8	51	4
	7	

	14	
9	?	5
	9	

Q In a row where all are facing north, RAM is 80th from the left end and Jyoti is 50th from the right end. They interchange their positions, Jyoti 's new position is 100th from the right . What is the new rank of Ram from left in the row?

एक पंक्ति में जहां सभी उत्तर की ओर उन्मुख हैं, रैम बाएं छोर से 80वें स्थान पर है और ज्योति दाएं छोर से 50वें स्थान पर है। वे अपना स्थान आपस में बदल लेते हैं, ज्योति का नया स्थान दायें से 100वां है। पंक्ति में बाएं से राम का नया स्थान क्या है?

- (1) 65th
- (2) 69th
- (3) 68th
- (4) 70th
- (5) None of these



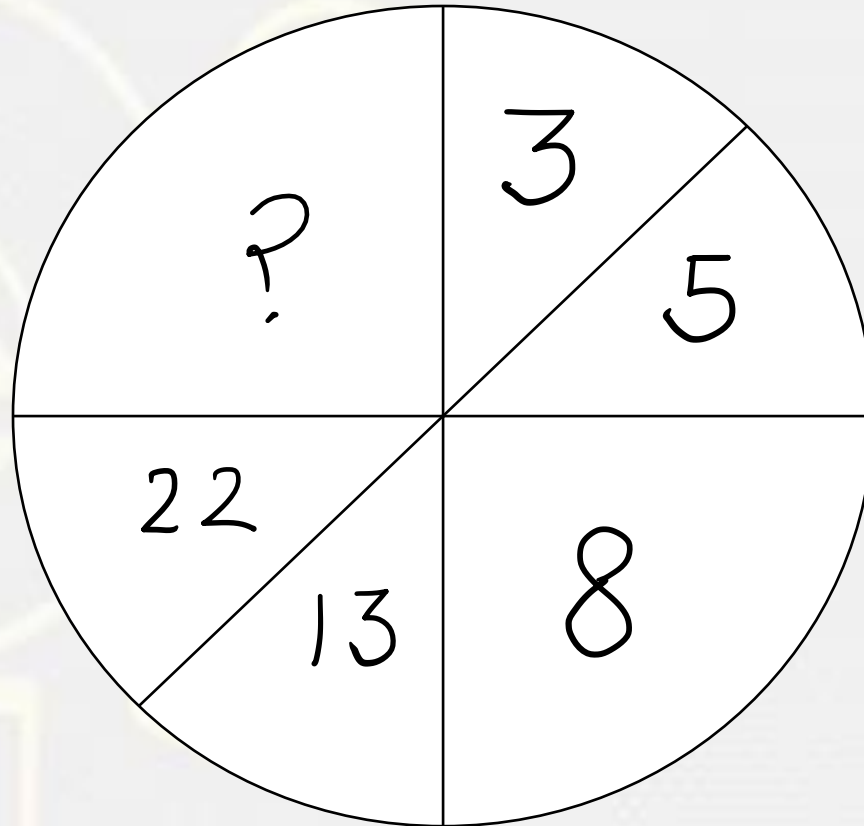
Find the option which should replace (?)

24 : 102 :: 16 : ?

- A. 346
- B. 68
- C. 60
- D. 64



Find the option which should replace (?)



- A. 1
- B. 26
- C. 39
- D. 45

Find the option which should replace (?)


Ocean : Pond :: Kilometer : ?

महासागर : तालाब :: किलोमीटर : ?



- A. Centimetre / सेंटीमीटर
- B. Meter / मीटर
- C. Millimetre / मिलीमीटर
- D. Decimeter / मिटर का दशमांश

Find the option which should replace (?)



- A. 46
- B. 34
- C. 41
- D. 21

There are 30 days in ___ months of a years .

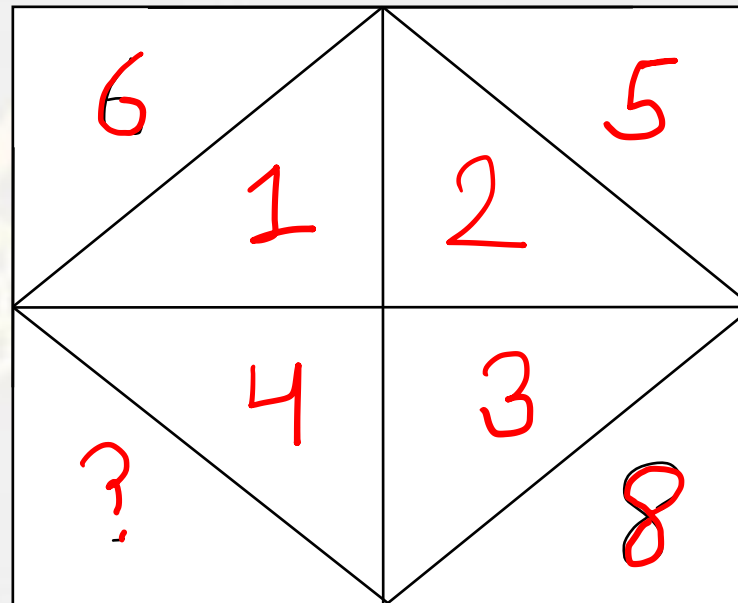
साल के ___ महीनों में 30 दिन होते हैं।

- A. 3
- B. 4
- C. 5
- D. 7

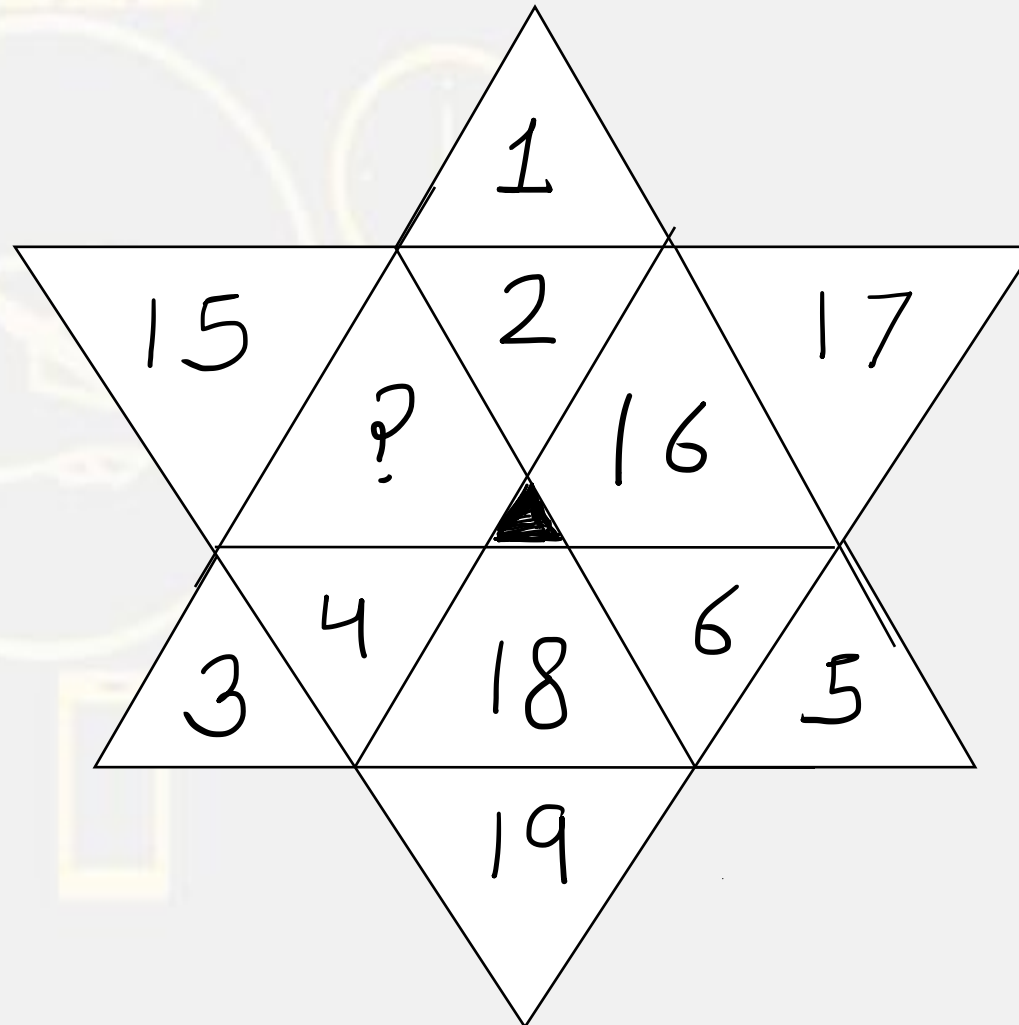


Find number
संख्या ज्ञात कीजिए?

- (A) 10
- (B) 11
- (C) 12
- (D) 14



Find the option which should replace (?)



- A. 13
- B. 14
- C. 21
- D. 20



Find the option which should replace (?)

Good : Bad :: Roof : ?

अच्छा : बुरा :: छत : ?

- A. Walls / दीवारों
- B. Pillars / खंभे
- C. Floor / फर्श
- D. Window / खिड़की





Find the odd one out(?)

- A. F3**
- B. A8**
- C. V4**
- D. J8**



Which of the following diagrams indicates the best relation between (Sadness , Happiness , life) / (दुःख, सुख, जीवन)



A.

B

.C

.D.



Find the missing term(?)

$$9 : 261 :: 8 : ?$$

- (A) 621
- (B) 821
- (C) 496
- (D) 312



Find the missing one (?)

$$14 : 3 :: 91 : ?$$

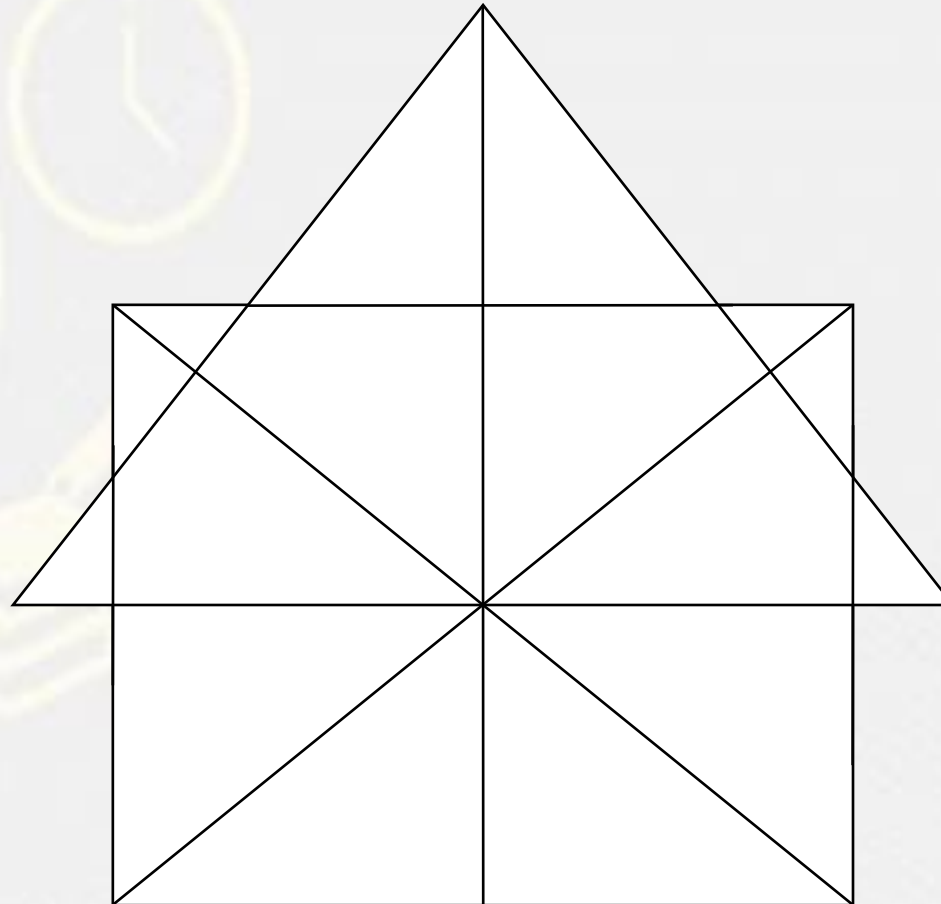
- (A) 4
- (B) 5
- (C) 6
- (D) 7



Find number of triangle in the given figure ?

दी गई आकृति में त्रिभुज की संख्या ज्ञात कीजिए?

- (A) 09**
- (B) 26**
- (C) 25**
- (D) 31 or more**



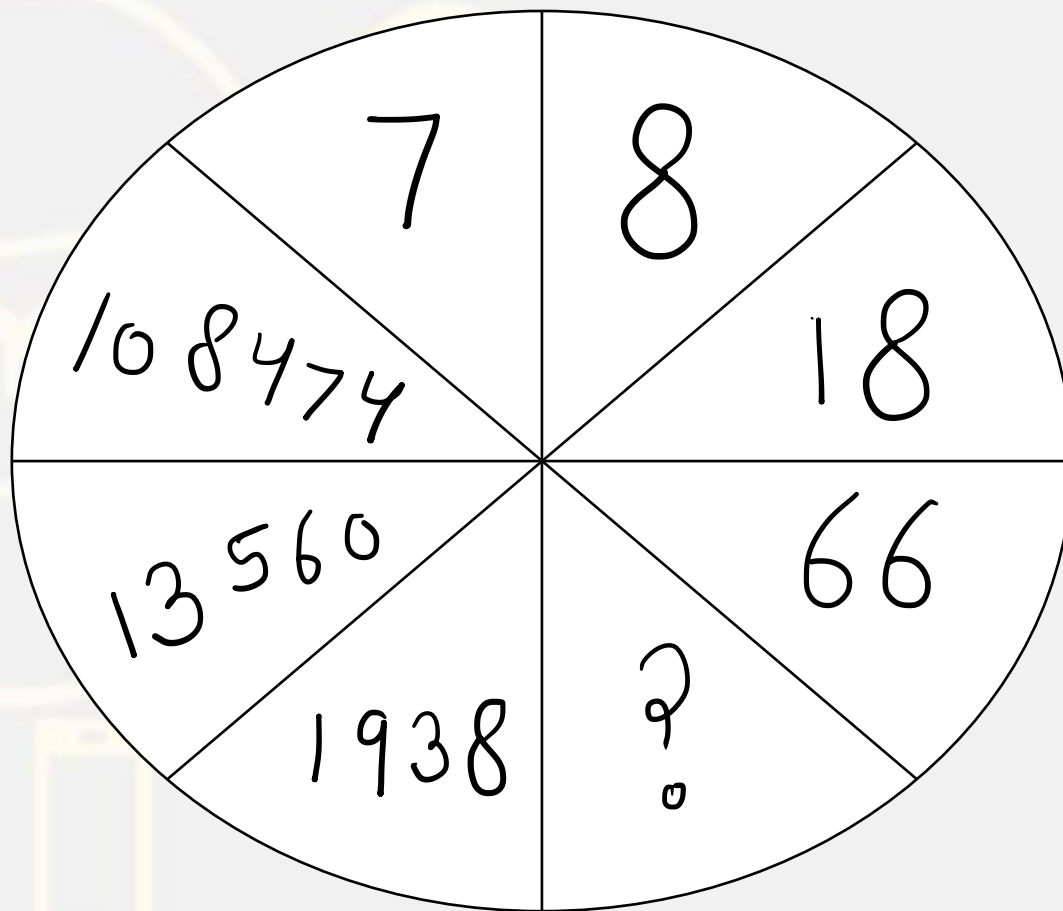
Find the odd one out(?)

- A. 13 : 29**
- B. 9 : 17**
- C. 7 : 11**
- D. 11 : 25**



Find the missing :-

- (A) 928
- (B) 686
- (C) 430
- (D) 324



Find the WRONG ONE :-

EC , H , HF , N , KI , U

- (A) HF**
- (B) EC**
- (C) N**
- (D) U**



Find the missing :-

PURPLE : OWOTGK :: GREEN

- (A) FTBBI
- (B) FTBII
- (C) FTBJI
- (D) FTBIJ



Find the missing :-

1. 1
2. 2
3. 3
4. 4

14	20	16
2	2	?
3	6	5
4	4	3

