

TOPIC WISE REASONING



- **Figure Counting**
- **Coding Decoding**
- **Analogy**
- **Paper Cutting**

SSC MTS & GD Previous Year Paper



ALL COMPETITIVE EXAMS

 **2:00 PM**

LIVE 



Don't Let Your Studies Get Impacted By COVID-19 Pandemic

Stay Home & Study Online With Mahendras Hybrid Model

Features



Offline Classes



Live Interactive Online Classes



Same Faculty



Same Batch



Same Batch Timing



Online Library Facility



Recorded Video



PDFs



Classes In Both Model

CONTACT US:

1800-103-5225

www.mahendras.org





UPCOMING ONLINE BATCHES

September 2021

01 Sep 2021

01:00 PM to 03:00 PM

**LIVE PREMIUM
GREEN CARD**
(BANK-PO & CLERK)

08:00 AM to 10:00 AM

**LIVE PREMIUM
SILVER CARD**
(SSC CGL & CHSL)

BILINGUAL

08 Sep 2021

10:30 AM to 12:30 PM

**LIVE PREMIUM
GREEN CARD**
(BANK-PO & CLERK)

BILINGUAL

15 Sep 2021

03:00 PM to 05:00 PM

**LIVE PREMIUM
GREEN CARD**
(BANK-PO & CLERK)

03:00 PM to 05:00 PM

**LIVE MATHS
INDIVIDUAL**
(ONLINE LIVE CLASS)

BILINGUAL

03:00 PM to 05:00 PM

LIVE PREMIUM SILVER CARD
(SSC CGL & CHSL)

ENGLISH MEDIUM

22 Sep 2021

05:30 PM to 07:30 PM

**LIVE PREMIUM
GREEN CARD**
(BANK-PO & CLERK)

BILINGUAL

29 Sep 2021

10:30 AM to 12:30 PM

**LIVE PREMIUM
SILVER CARD**
(SSC CGL & CHSL)

BILINGUAL

07:30 PM to 09:30 PM

LIVE PREMIUM GREEN CARD
(BANK-PO & CLERK)

ENGLISH MEDIUM



The Staff Selection Commission has decided to re-schedule its following examinations as per the details given below:

| S. No. | Name of Examination | Revised Schedule |
|--------|--|-----------------------|
| 1. | Sub-Inspector in Delhi Police, CAPFs and ASI in CISF Examination (Paper-II), 2019 | 26.07.2021 |
| 2. | Combined Higher Secondary (10+2) Level Examination (Tier-I), 2020 - For left-over candidates | 04.08.2021-12.08.2021 |
| 3. | Combined Graduate Level Examination (Tier-I), 2020 | 13.08.2021-24.08.2021 |

| S No | Name of Examination | Paper/ Stage | Schedule of Examination |
|-------------|--|-------------------------|------------------------------------|
| 1 | Combined Graduate Level Examination-2019 | Skill Test | 15.09.2021 to 16.09.2021 |
| 2 | Junior Engineer (Civil, Mechanical, Electrical and Quantity Surveying & Contracts) Examination, 2020 | Paper-II | 26.09.2021 |
| 3 | Multi Tasking (Non-Technical) Staff Examination, 2020 | Paper-I | 05.10.2021 to 20.10.2021 |
| 4 | Stenographer Grade 'C' and 'D' Examination, 2019 | Skill Test | 21.10.2021 To 22.10.2021 |



Arju praween 13 hours ago

Ans - 50(C)

superb session ,, thank you so much sir

👍 🗨️ REPLY



Masum Idki 🤔 22 hours ago

50

Square*2ka logic h

Very nice session 🍌🍌

Happy Teachers day in advance 🍌🍌

👍 🗨️ REPLY

▶ [View reply from Mahendras : Online Videos For Go](#)



MISTY MISTY 📄🍌 22 hours ago

Right answer is 50

Thank you sir

Happy Teacher's day sir in advance 🙏🙏🙏🙏🙏🙏

👍 🗨️ REPLY

▶ [View reply from Mahendras : Online Videos For Go](#)



Viśhñù Güptâ 21 hours ago

50 is the right ans

Very nice session sir ❤️🙏

👍 🗨️ REPLY

▶ [View reply from Mahendras : Online Videos For Go](#)



Sania S 18 hours ago

Shandaar session sir 🙏🙏

50🍌🍌🍌



VINITA DEVI 25 minutes ago

Happy Teacher's Day Sir

@ nice class # Thank you so much Sir

👍 1 🗨️ REPLY



Chhavi Saxena 21 hours ago

Home work question answer is 50

Nice Session Sir 🙏🙏🙏🙏🙏

👍 🗨️ REPLY

▶ [View reply from Mahendras : Online Videos F](#)



DEEKSHA SHARMA 19 hours ago

Home work answer is 50

nice session sir 🙏🙏🙏🙏

👍 🗨️ REPLY

▶ [View reply from Mahendras : Online Videos F](#)



SARITA RAWAT 17 hours ago

Homework answer

50 ,,,,,hoga

Today very awesome session sir 🙏👍🍌🙏

Thanku so much sir 🙏🙏🙏🙏🙏🙏🙏🙏🙏🙏🙏🙏🙏🙏

👍 🗨️ REPLY



Roshni Khandelwal 20 hours ago

Answer is 50

Very nice session sir thank you sir

👍 🗨️ REPLY



sahil Israni 21 hours ago

Homework answer : C) 50

👍 🗨️ REPLY

▼ [View reply from Mahendras : Online Videos For Govt. Exams](#)



PUJA KUNDU 21 hours ago

5×5=25×2=50 IS THE CORRECT ANSWER.....AMAZING SESSION SIR 🔥🔥 THANK YOU SOO MUCH SIR 🙏 NEW NEW LOGIC SIKHANE K LIYE....

👍 🗨️ REPLY

▼ [View reply from Mahendras : Online Videos For Govt. Exams](#)



Ragini Kumari 21 hours ago

Sir Aap pdf file ko group ma send kr deta toh aur better hota plz sir 🙏🙏🙏

👍 🗨️ REPLY

▼ [View reply from Mahendras : Online Videos For Govt. Exams](#)



SARITA RAWAT 4 hours ago

🌸🌸 happy teachers day sir 🌸🌸
🎁🌸🌸🌸🌸🌸🌸🌸🌸🌸🌸🌸🌸🌸🌸🌸🌸🌸🌸🌸🌸🌸🌸

👍 🗨️ REPLY



nikita Chauhan 21 hours ago

Homework ANS-----

5×5=25×2=50

Thank you sir

Sir ap Mera comments itne din se ni le rhe ho ap 😊

👍 🗨️ REPLY

▼ [View reply from Mahendras : Online Videos For Govt. Exams](#)



Preeti 22 hours ago

Ans....50. Nice session sir

REPLY

[View reply from Mahendras : Online Videos For Govt. Exams](#)



Rajkumar 21 hours ago

$8^2 \times 2 = 128$, $5^2 \times 2 = 50$ is correct answer awesome class sir bohout badiya

REPLY

[View reply from Mahendras : Online Videos For Govt. Exams](#)



Subhakar K201 16 hours ago

50 that's my answer

REPLY



ऋतिक---jha 22 hours ago

125/50

1 REPLY

[View reply from Mahendras : Online Videos For Govt. Exams](#)



Ragini Kumari 21 hours ago

Hello sir 🙏🙏

REPLY



RANJU KUMARI 22 hours ago

Ans_____50

REPLY

[View reply from Mahendras : Online](#)



barbie dancer 21 hours ago

50

1 REPLY

[View reply from Mahendras : Online](#)



Kaushal116 22 hours ago

Last Question. Ans-50

REPLY

[View reply from Mahendras : Online](#)



Subhrajah Pahari 15 hours ago

ans is 50

REPLY



bablu sharma 20 hours ago

50 answer

1 REPLY



Abhishek Pandey 21 hours ago

Answer is 50

1 REPLY

[View reply from Mahendras : Onlin](#)



Gaurav Srivastava 20 hours ago

Ans A hoga

REPLY

[View reply from Mahendras : Onlin](#)



Sukhchand Paradkar 2 hours ago

50

REPLY



यशवीर सिंह गुज्जर 15 hours ago

C 50

1 REPLY



Kapil Bhagat 22 hours ago

125

REPLY




VINITA DEVI 18 hours ago

Happy Teacher's Day Sir

@ nice class # Thank you so much Sir

1 REPLY



QUARANTINED NOOB 16 hours ago

50 is the right answer sir ji

REPLY

Find the option which should replace (?)

$$8 : 128 :: 5 : ?$$

- (A) 125
- (B) 625
- (C) 50
- (D) 100



Find the missing ONE (?)

$$24 : 13 :: 38 : ?$$

- (A) 23
- (B) 17
- (C) 20
- (D) 25



Find the missing ONE (?)

20 : 7980 :: 12 : ?

- (A) 1800
- (B) 1717
- (C) 1716
- (D) 1818



Find the missing ONE (?)

$$42 : 24 :: 56 : ?$$

- (A) 130
- (B) 150
- (C) 180
- (D) 210



Find the missing ONE (?)

36 , 54 , 99 : ?

- (A) 32 , 48 , 88**
- (B) 18 , 36 , 66**
- (C) 18 , 24 , 99**
- (D) 35 , 38 , 55**



Find the missing ONE (?)

42 : 14 :: 56 : ?

- (A) 18
- (B) 41
- (C) 48
- (D) 65



Find the missing ONE (?)

62 : 155 :: 74 : ?

- (A) 185
- (B) 165
- (C) 170
- (D) 190



Find the missing ONE (?)

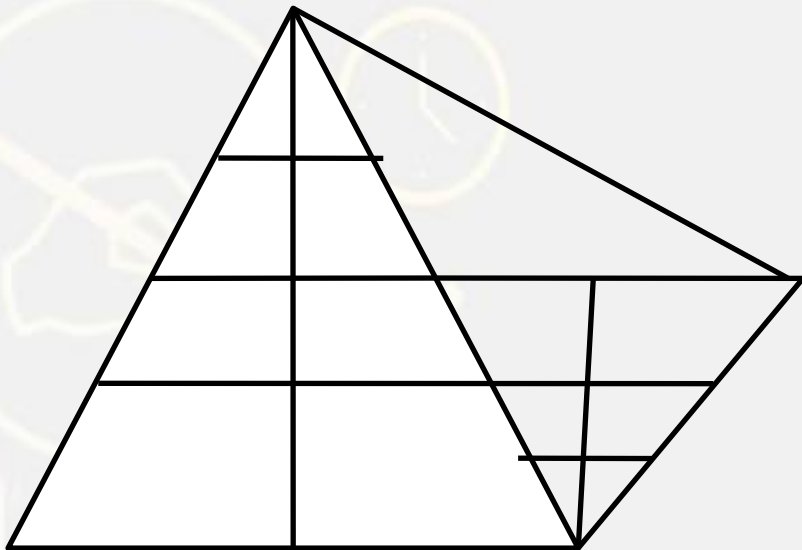
381 : 614 :: ? : ?

- (A) 343 : 661
- (B) 314 : 630
- (C) 242 : 822
- (D) 256 : 542



Find the number of triangle (?)

- (A) 28
- (B) 20
- (C) 21
- (D) 25



In a Certain code **ARGUMENT** is written as **CGIABEED** ,than find the code for **DISPUTES**?

एक निश्चित कोड में **ARGUMENT** का कोड **CGIABEED** लिखा गया है तो **DISPUTES** का कोड क्या होगा ?

- (1) GJIDJEBBC
- (2) GJJEIDBBC
- (3) GJIJDEBBC
- (4) JEBGCJID
- (5) JEBCGJID







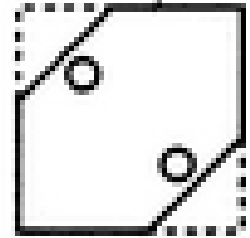


Find the missing term(?)

$$16 : 169 :: 11 : ?$$

- (A) 16
- (B) 25
- (C) 36
- (D) 81



Choose a figure which would most closely resemble the unfolded form of Figure



(A)

(B)

(C)

(D)