



Don't Let Your Studies Get Impacted By COVID-19 Pandemic

Stay Home & Study Online With Mahendras Hybrid Model

Features



Offline Classes



Live Interactive Online Classes



Same Faculty



Same Batch



Same Batch Timing



Online Library Facility



Recorded Video



PDFs



Classes In Both Model

CONTACT US:

1800-103-5225

www.mahendras.org





UPCOMING ONLINE BATCHES

JULY 2021

07 July 2021

08:00 AM to 10:00 AM

**LIVE PREMIUM
GREEN CARD**
(BANK-PO & CLERK)

BILINGUAL

14 July 2021

10:30 AM to 12:30 PM

**LIVE PREMIUM
SILVER CARD**
(CGL & CHSI)

03:00 PM to 05:00 PM

**LIVE PREMIUM
STATE CARD**
(UPSSSC PET)

BILINGUAL

21 July 2021

01:00 PM to 03:00 PM

**LIVE PREMIUM
GREEN CARD**
(IBPS RRB PO/CLERK)
PRE + MAINS

BILINGUAL

28 July 2021

01:00 PM to 03:00 PM

LIVE PREMIUM BRONZE CARD
(TET)

10:30 AM to 12:30 PM

LIVE PREMIUM GREEN CARD
(IBPS PO & CLERK)

08:00 AM to 10:00 AM

LIVE PREMIUM SILVER CARD
(SSC CGL & CHSL)

BILINGUAL



The Staff Selection Commission has decided to re-schedule its following examinations as per the details given below:

S. No.	Name of Examination	Revised Schedule
1.	Sub-Inspector in Delhi Police, CAPFs and ASI in CISF Examination (Paper-II), 2019	26.07.2021
2.	Combined Higher Secondary (10+2) Level Examination (Tier-I), 2020 - For left-over candidates	04.08.2021-12.08.2021
3.	Combined Graduate Level Examination (Tier-I), 2020	13.08.2021-24.08.2021



Satyam Pandey 12 hours ago

8 correct ans 🙏🙏🙏❤️

Sir pta hi chla ki 2 Bje class h 😞😞😞

Pr abi fir deka mja aaya sir ekdm jhakkas session sir 🙏🙏🙏🙏🙏🙏

👍 🗨️ REPLY



Traptee Shukla 18 hours ago

Homework question answer is 8 triangles

👍 1 🗨️ REPLY

📄 View reply from Mahendras : Online Videos For Govt. Exams



Sania S 18 hours ago

8 triangle sir 👍👍

dhansu session sir moj kr di 😞😞

thank you soooooooooo much sir 😞😞

👍 🗨️ REPLY

📄 View reply from Mahendras : Online Videos For Govt. Exams



Arju praween 18 hours ago

Homework Ans - 8

superb session ...

thank you so much sir

👍 🗨️ REPLY

📄 View reply from Mahendras : Online Videos For Govt. Exams



Rahul chaurasia 18 hours ago

8 hai sir ji nice session sir jii 🙏🙏🙏🙏🙏🙏

👍 1 🗨️ REPLY

📄 View reply from Mahendras : Online Videos For Govt. Exams



mohit sonkar 18 hours ago

888888

👍 🗨️ 🙏 REPLY



sarita rawat 18 hours ago

Homework answer

Option (b) 8,,,,,hoga

Awesome session sir 🙏👍🙏🙏

Thanku so much sir 🙏

👍 🗨️ REPLY

📄 View reply from Mahendras : Online



PUJA KUNDU 18 hours ago

8🙏🙏🙏 correct answer...nice session sir 🙏🙏thank you sir 🙏🙏🙏

👍 🗨️ REPLY

📄 View reply from Mahendras : Online Videos For Govt. Exams



Manidipa Mandal 18 hours ago

Option (B) 8..

Thank you sir.....Nice session sir..... 🙏🙏🙏🙏🙏🙏

Class timing change Karne ke liya thank you sir..... 🙏🙏🙏🙏🙏

👍 🗨️ REPLY

📄 View reply from Mahendras : Online Videos For Govt. Exams



himani gupta 18 hours ago

Very nice session 👍👍👍

👍 🗨️ REPLY

📄 View reply from Mahendras : Online Videos For Govt. Exams



Jayshree Singh 17 hours ago

Ans 8

👍 🗨️ REPLY

📄 View reply from Mahendras






Nidhi Tiwari 18 hours ago








Hw ans







8 traingle

👍 🗨️ REPLY

📄 View reply from Mahendras

-  **Kapil Bhagat** 18 hours ago
8888
👍 🗨️ REPLY
[View reply from Mahendras : Online Videos For Govt. Exams](#)
-  **kuldeep mittal** 17 hours ago (edited)
Thanks to all for love and support.....keep practicing.....
Ab reasoning ki daily class ka time hoga afternoon mai 2:00 pmok.....
👍 🗨️ REPLY
[View reply from Mahendras : Online Videos For Govt. Exams](#)
-  **ankita g** 18 hours ago
Nice session ,Ans- option B(888888)
👍 🗨️ REPLY
[View reply from Mahendras : Online Videos For Govt. Exams](#)
-  **Heta shah** 18 hours ago
Sir answer is 8
Super se bhi upar session sir bhot h maza aya wese to roz h ata he 😊😄
👍 🗨️ REPLY
[View 2 replies from Mahendras : Online Videos For Govt. Exams an](#)
-  **Juthika Das** 18 hours ago
Ans is==8
Thank you sir 😊
👍 🗨️ REPLY
[View reply from Mahendras : Online Videos For Govt. Exams](#)
-  **Viśhñü Güptâ** 12 hours ago
8 is the right ans
Very nice session sir ❤️
👍 🗨️ REPLY

-  **QUARANTINED NOOB** 2 hours ago
8 is the Right answer sir
👍 🗨️ REPLY
-  **Md Amir** 16 hours ago
Ans, 8 Nice sessions sir
👍 🗨️ REPLY
[View reply from Mahendras : Online Vid](#)
-  **bablu sharma** 11 hours ago
8
👍 🗨️ REPLY
-  **Ankita Goyal** 12 hours ago
8
👍 🗨️ REPLY
[View reply from Mahendras : Online Vid](#)
-  **Sunita Gautam** 16 hours ago
8
👍 🗨️ REPLY
[View reply from Mahendras : Online Vid](#)
-  **Rashmi Modanwal** 18 hours ago
Sir ab apka hindi ka class nhi chalega kya
👍 🗨️ REPLY
-  **vaibhav sahu** 11 hours ago
8 is right answer

-  **Roshni Khandelwal** 13 hours ago
8 is right Answer
👍 🗨️ REPLY
[View reply from Mahendras : Online](#)
-  **himani gupta** 18 hours ago
Ans ,,8 triangles
👍 🗨️ REPLY
[View reply from Mahendras : Online](#)
-  **SAPANA WAKODE** 18 hours ago
Ans...B) 8
👍 🗨️ REPLY
[View reply from Mahendras : Online](#)
-  **Abhishek Pandey** 18 hours ago
Option (B) 8
👍 🗨️ REPLY
[View reply from Mahendras : Online](#)
-  **nikita Chauhan** 17 hours ago
Homework ANS 88888888
👍 🗨️ REPLY
[View reply from Mahendras : Online](#)
-  **Reelaxmi Bhardwaj** 18 hours ago
8 triangle
👍 🗨️ REPLY
[View reply from Mahendras : Online](#)




For Your Any Type of Reasoning Related Queries Join
Telegram Channel : **Reasoning Mahendras Live**
Kuldeep Mahendras Reasoning

Get Additional **10%** Discount On All Products & Services
of Mahendras
Use Code : **E09419**

Find number of triangle in the given figure ?

दी गई आकृति में त्रिभुज की संख्या ज्ञात कीजिए?

- (A) 10
- (B) 8
- (C) 12
- (D) 9



NUMBER ANALOGY

Important point of Number Analogy

- Prime Number
- Square
- Cube
- Multiplication and Division
- Addition and Subtraction
- Single Digit
- Partition

Find the missing ONE (?)

83 : 37 :: 72 : ?

- (A) 35
- (B) 53
- (C) 49
- (D) 54



Find the missing ONE (?)

7 : 18 :: 12 : ?

- (A) 26
- (B) 28
- (C) 32
- (D) 27



Find the missing ONE (?)

7863 : 7887 :: 5249 : ?

- (A) 5271
- (B) 5269
- (C) 5259
- (D) 5283



Find the missing ONE (?)

64 : 99 :: 256 : ?

- (A) 218
- (B) 325
- (C) 210
- (D) 168



Find the missing ONE (?)

(11 , 57 , 8)

(A) 15 , 81 , 12

(B) 12 , 64 , 10

(C) 15 , 38 , 13

(D) 18 , 89 , 15



Find the missing ONE (?)

5227 : 258 :: 4322 : ?

- (A) 125
- (B) 124
- (C) 528
- (D) 126



Find the option which should replace (?)

$$6 * 7 * 5 = 756$$

$$9 * 4 * 2 = 429$$

$$8 * 9 * 3 = ?$$

(A) 839

(B) 389

(C) 216

(D) 938



Find the missing ONE (?)

$$? : 66 :: 29 : 65$$

- (A) 49
- (B) 91
- (C) 84
- (D) 81



Find the missing ONE (?)

$$14 : 193 :: 12 : ?$$

- (A) 225
- (B) 140
- (C) 143
- (D) 144

