



SSC GD CONSTABLE 2021



REASONING

परीक्षा में पूछे गये प्रश्न

•Live   **08:30 PM**





Don't Let Your Studies Get Impacted By COVID-19 Pandemic

Stay Home & Study Online With Mahendras Hybrid Model

Features



Offline Classes



Live Interactive Online Classes



Same Faculty



Same Batch



Same Batch Timing



Online Library Facility



Recorded Video



PDFs



Classes In Both Model

CONTACT US:

1800-103-5225

www.mahendras.org





UPCOMING ONLINE BATCHES

December 2021

01 Dec 2021

08:00 AM to 10:00 AM

LIVE PREMIUM GREEN CARD
(BANK-PO & CLERK)

05:30 PM to 07:30 PM

LIVE PREMIUM GREEN CARD
(BANK-PO & CLERK)

01:00 PM to 03:00 PM

LIVE PREMIUM SILVER CARD
(SSC CGL & CHSL)

BILINGUAL

08 Dec 2021

10:30 AM to 12:30 PM

LIVE PREMIUM GREEN CARD
(BANK-PO & CLERK)

03:00 PM to 05:00 PM

LIVE PREMIUM GREEN CARD
(BANK-PO & CLERK)

08:00 AM to 10:00 AM

LIVE PREMIUM SILVER CARD
(SSC CGL & CHSL)

BILINGUAL

15 Dec 2021

01:00 PM to 03:00 PM

LIVE PREMIUM GREEN CARD
(BANK-PO & CLERK)

10:30 AM to 12:30 PM

LIVE PREMIUM SILVER CARD
(SSC CGL & CHSL)

BILINGUAL

22 Dec 2021

08:00 AM to 10:00 AM

LIVE PREMIUM GREEN CARD
(BANK-PO & CLERK)

07:30 PM to 09:30 PM

LIVE PREMIUM SILVER CARD
(SSC CGL & CHSL)

BILINGUAL

29 Dec 2021

10:30 AM to 12:30 PM

LIVE PREMIUM GREEN CARD
(BANK-PO & CLERK)

07:30 PM to 09:30 PM

LIVE PREMIUM GREEN CARD
(BANK-PO & CLERK)

03:00 PM to 05:00 PM

LIVE PREMIUM SILVER CARD
(SSC CGL & CHSL)

BILINGUAL



SSC GD 2021 Exam Analysis: Check difficulty level & number of good attempts

<i>Name of the section</i>	<i>Difficulty level</i>	<i>Number of good attempts</i>
General Intelligence and Reasoning	Easy to Moderate	20 to 22
General Knowledge and General Awareness	Easy to Moderate	18 to 20
Elementary Mathematics	Moderate	16 to 18
English/ Hindi	Easy to Moderate	21 to 23

Topic	No of Questions Asked in SSC GD Constable Exam
Coding-Decoding	2
Statement Conclusion	–
Missing Term	2
Venn Diagram	1
Syllogism	2
Paper Folding	1
Blood relation & order and ranking	2
Mathematics Operation	1
Analogy & Classification	6
Series	4
Dice & Sequence	2
Puzzle (Linear Sitting Arrangement)	2
Mirror Image	1
Hidden Figure	1
Complete Figure & Figure Counting	2
Total	25



🌸 PUJA KUNDU 🌸 1 day ago

The Answer is-----Option c....SUPERB SESSION SIR AND THANK YOU SOO MUCH 🙏🙏

👍 1 🗨️ REPLY

👇 [View reply from Mahendras : Online Videos For Govt. Exams](#)



SAPANA 1 day ago

Ans.....C

Nice session sir 🙏👍

Thank you sir 🙏

👍 2 🗨️ REPLY

👇 [View reply from Mahendras : Online Videos For Govt. Exams](#)



SANIA _____ 1 day ago

awesome session sir 🙏

C🔥🔥🔥🔥🔥🔥

👍 1 🗨️ REPLY

👇 [View reply from Mahendras : Online Videos For Govt. Exams](#)



Radha Garima 1 day ago

Answer : C

Nice session sir 🙏👍

👍 1 🗨️ REPLY

👇 [View reply from Mahendras : Online Videos For Govt. Exams](#)



Dev_shukla 1 day ago

Option C is the correct answer 😊😊

👍 1 🗨️ REPLY

▶ [View reply from Mahendras : Online Videos For Govt. Exams](#)



Chhavi Saxena 1 day ago

Home work answer is option C 🙏🙏

👍 1 🗨️ REPLY

▶ [View reply from Mahendras : Online Videos For Govt. Exams](#)



Kapil Bhagat 1 day ago

CCC

👍 🗨️ REPLY



puspranjan singh 1 day ago

1

👍 1 🗨️ REPLY



Hrithik_____ 1 day ago (edited)

c 😊

👍 1 🗨️ REPLY

▶ [View reply from Mahendras : Online Videos For Govt. Exams](#)



Mannveer Singh 1 day ago

1

👍 1 🗨️ REPLY

▶ [View reply from Mahendras : Online Videos For Govt. Exams](#)

▶ [View reply from Mahendras : Online Videos For Govt. Exams](#)

Choose the alternative which is closely resembles the mirror image of the given combination..

Nu56p7uR

(1) Иuǝǝq7uЯ

(2) Яп7qǝǝпИ

(3) Яu7qǝǝuИ

(4) Яu7d9ǝuИ

- A. 1
- B. 2
- C. 3
- D. 4



Which number will replace the question mark ?

4A	6C	24B
5A	?	45C
9B	4C	36A

- (A) 9B
- (C) 12A

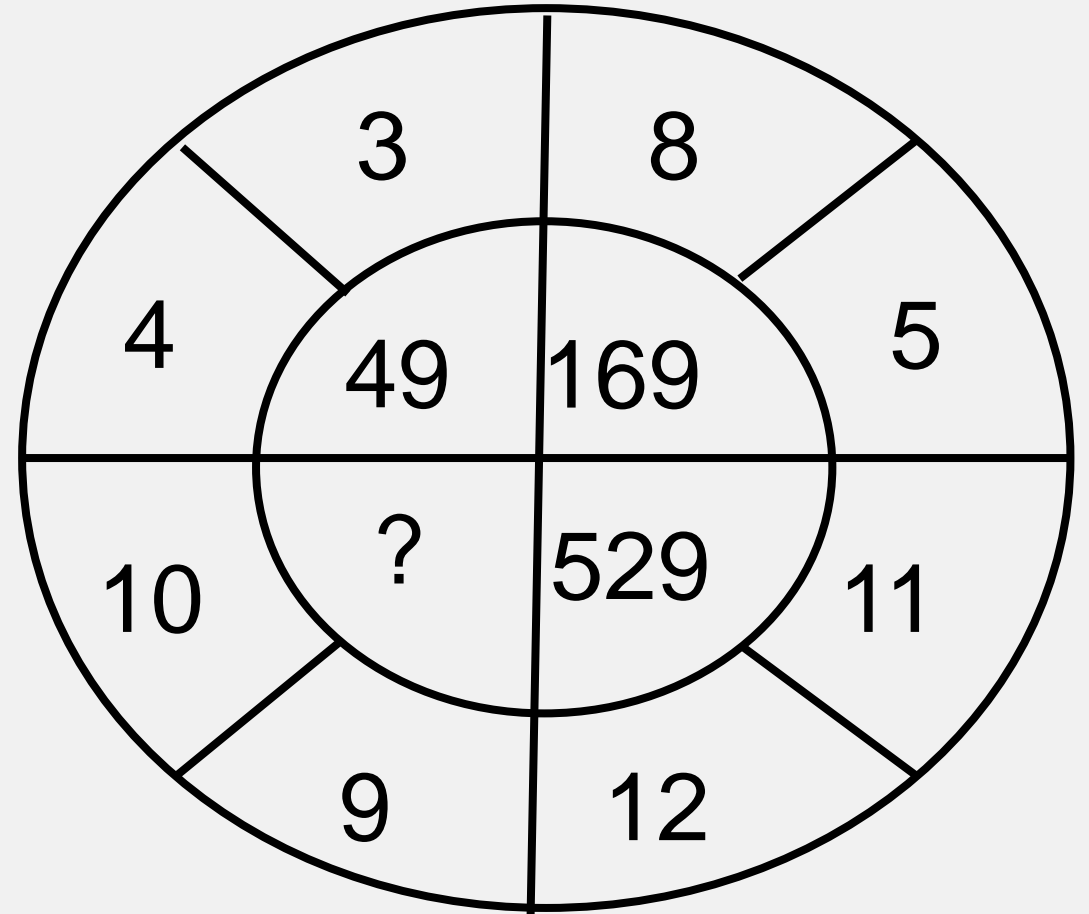
- (B) 4B
- (D) 12B




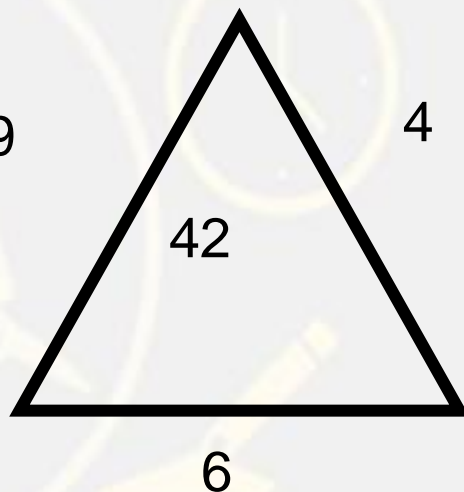
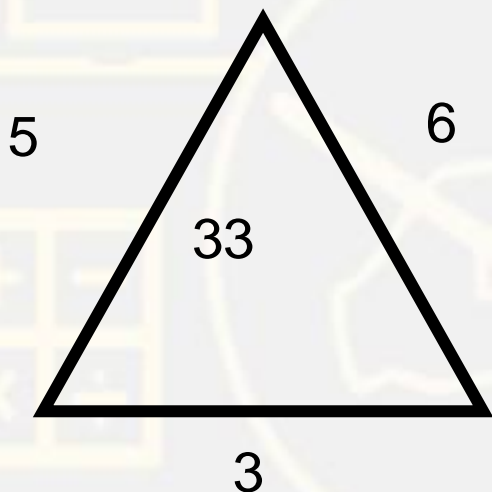
Which number will replace the question mark ?

- A) 361
- C) 65

- (B) 296
- (D) 19



Which number will replace the question mark ?



- (A) 28
- (C) 27

- (B) 32
- (D) 20



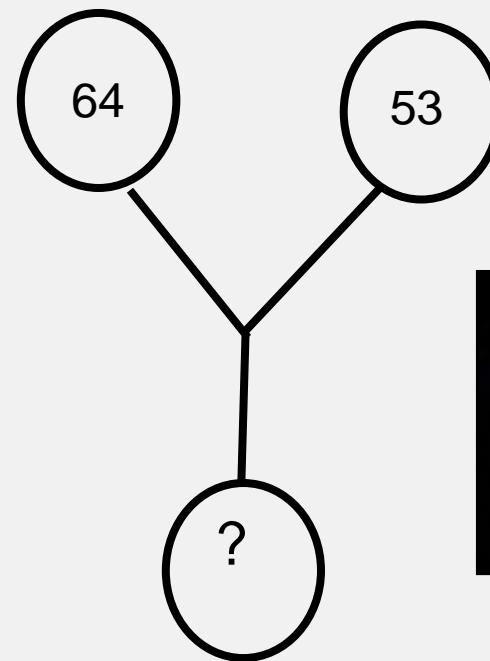
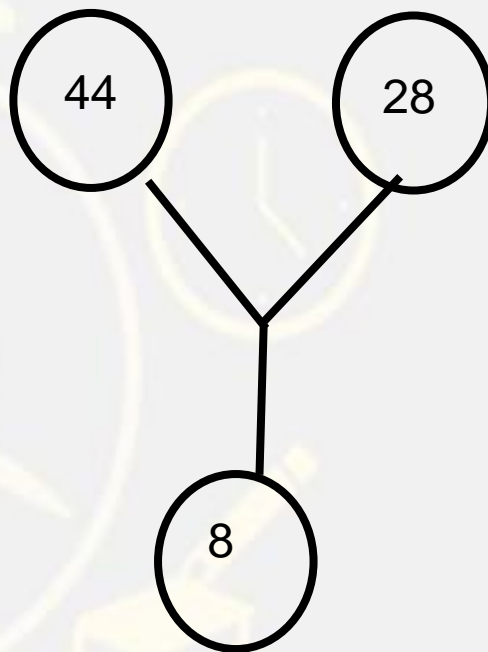
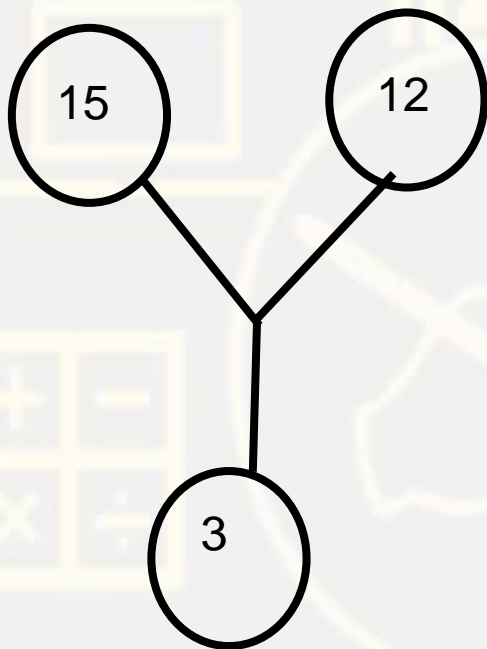
Which number will replace the question mark ?

- (A) 3 (B) 4
(C) 5 (D) 7

9	17	16
5	4	5
5	4	?
50	72	87



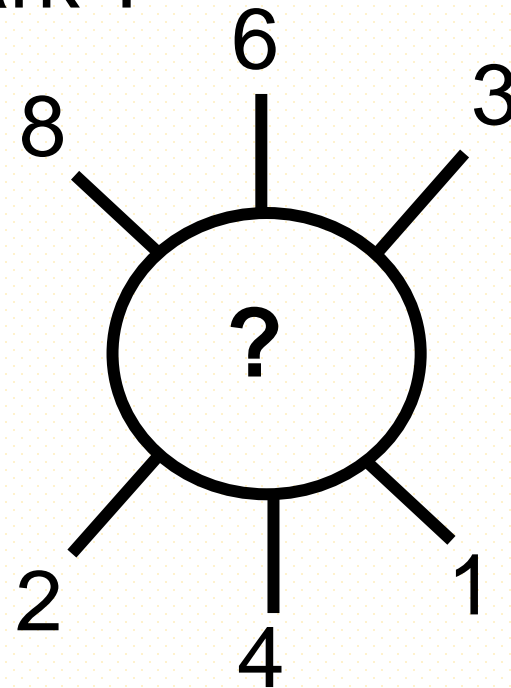
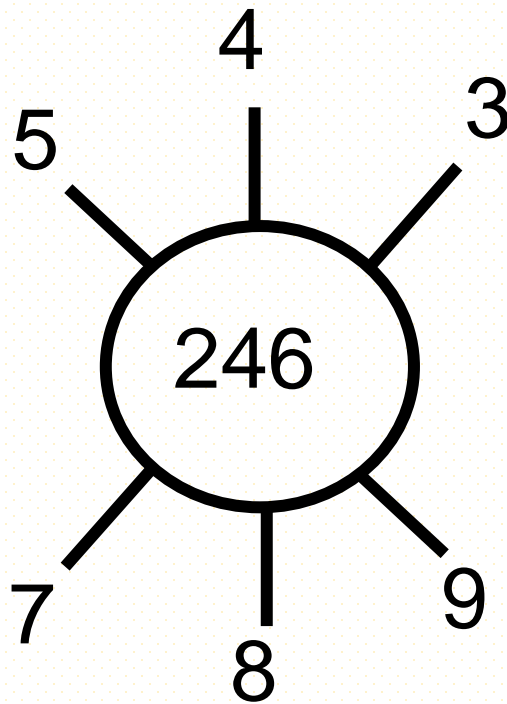
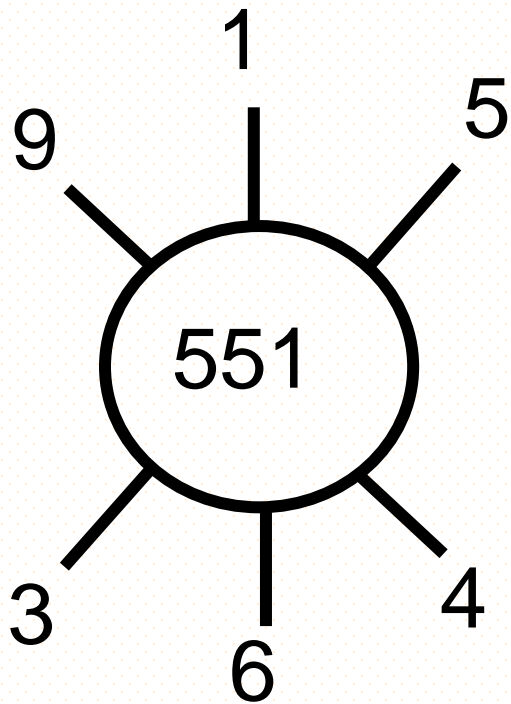
Which number will replace the question mark ?



- (A) 30
- (C) 70

- (B) 13
- (D) 118

Which number will replace the question mark ?



- (A) 262
- (C) 631

- (B) 622
- (D) 824



Which number will replace the question mark ?

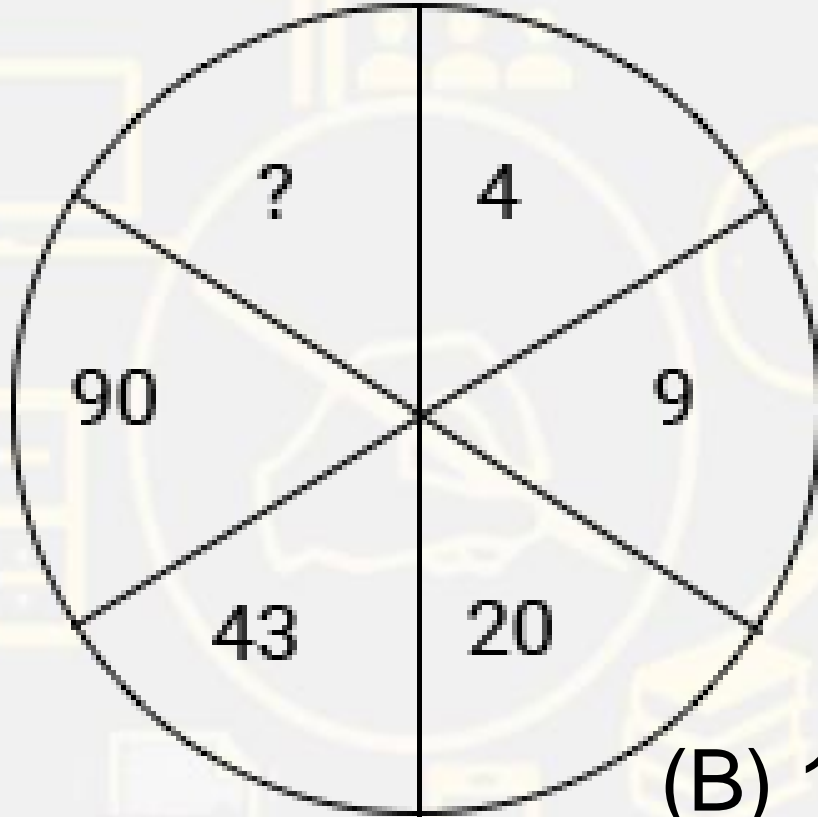
42	44	38
23	55	28
37	?	39



- (A) 22
(C) 66

- (B) 33
(D) 77

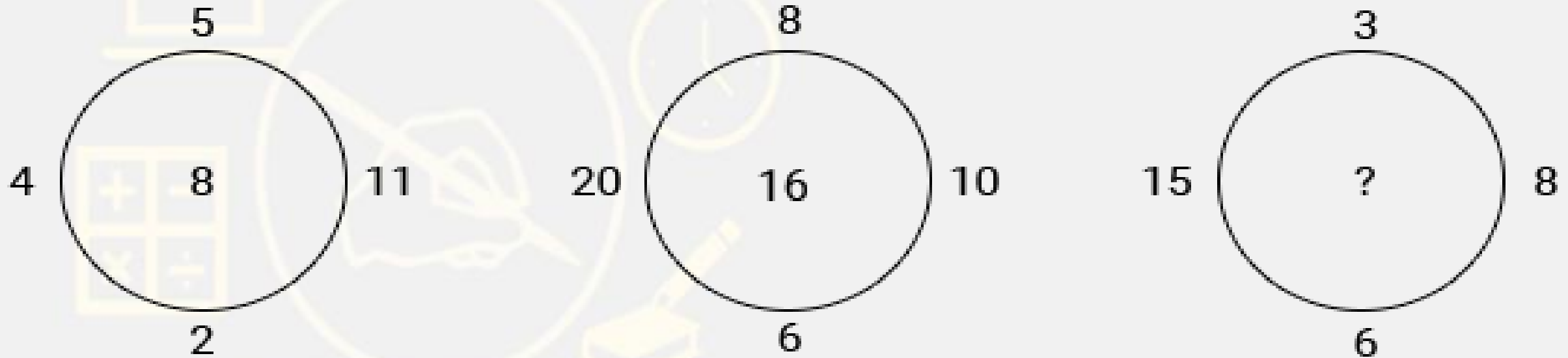
Which number will replace the question mark ?



- (A) 185
- (C) 269

- (B) 126
- (D) 145

Which number will replace the question mark ?



- (A) 5
- (C) 14

- (B) 6
- (D) 8



Which number will replace the question mark ?

?	25	16
529	169	81
676	144	49

(A) 1084

(B) 484

(C) 49

(D) 36



Which number will replace the question mark ?

?	13	15
9	28	4
13	12	16

- (A) 13
(C) 17

- (B) 6
(D) 22



Which number will replace the question mark ?

55	22	28
33	44	28
66	33	?



- (A) 48
(C) 28

- (B) 7
(D) 36

Which number will replace the question mark ?

2	1	4
7	14	11
41	195	?



(A) 104

(B) 105

(C) 51

(D) 57

Which number will replace the question mark ?

47	40	50	43
23	20	22	19
20	21	1	?



(A) 4

(B) 3

(C) 1

(D) 2

Which number will replace the question mark ?

 4	 2	 5
 3	 3	 10
 6	 9	 4
 8	 6	 ?



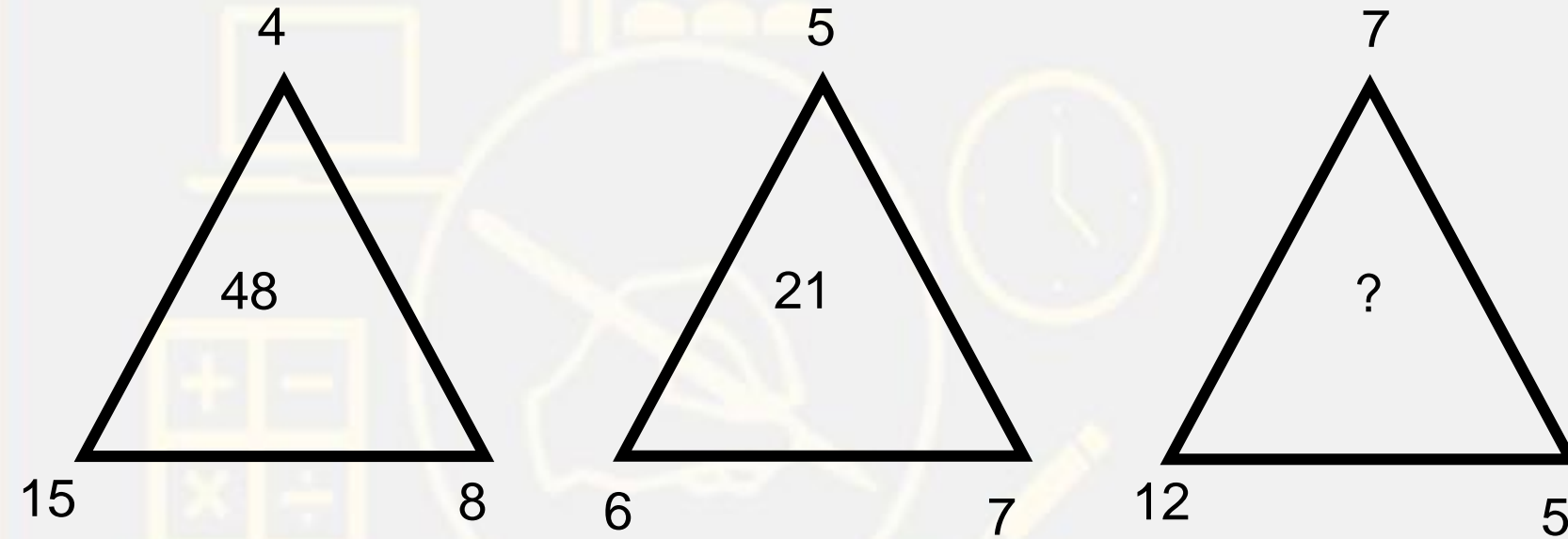
(A) 3

(B) 7

(C) 2

(D) 1


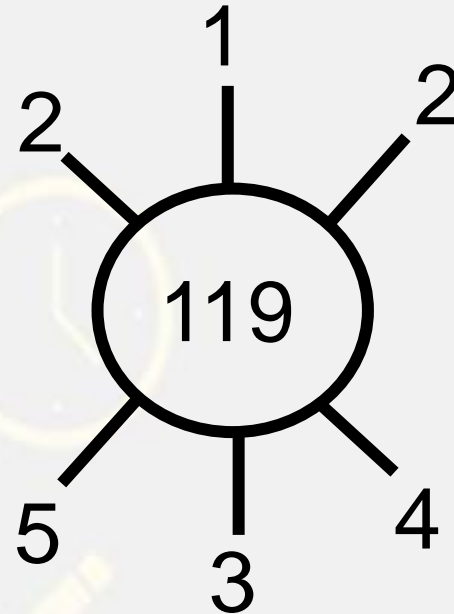
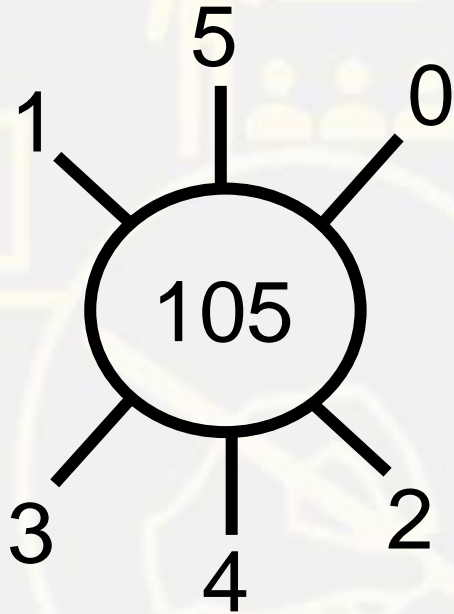
Which number will replace the question mark ?



- (A) 42
- (C) 52

- (B) 32
- (D) 22

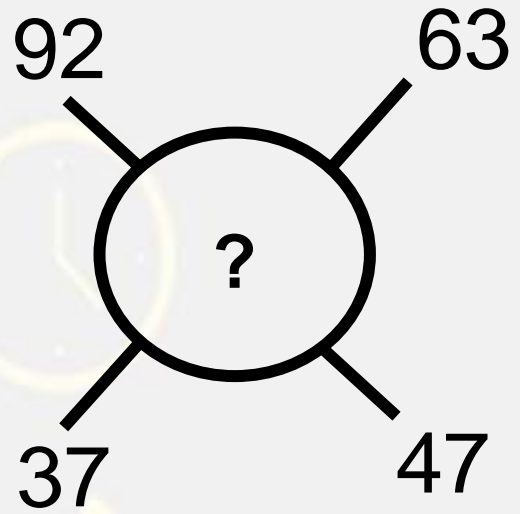
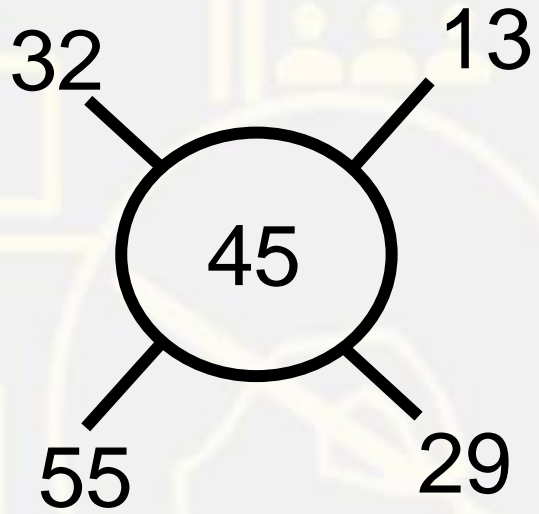
Which number will replace the question mark ?



- (A) 186
- (C) 233

- (B) 168
- (D) 266





- (A) 19
- (C) 20

- (B) 21
- (D) 22

Which number will replace the question mark ?

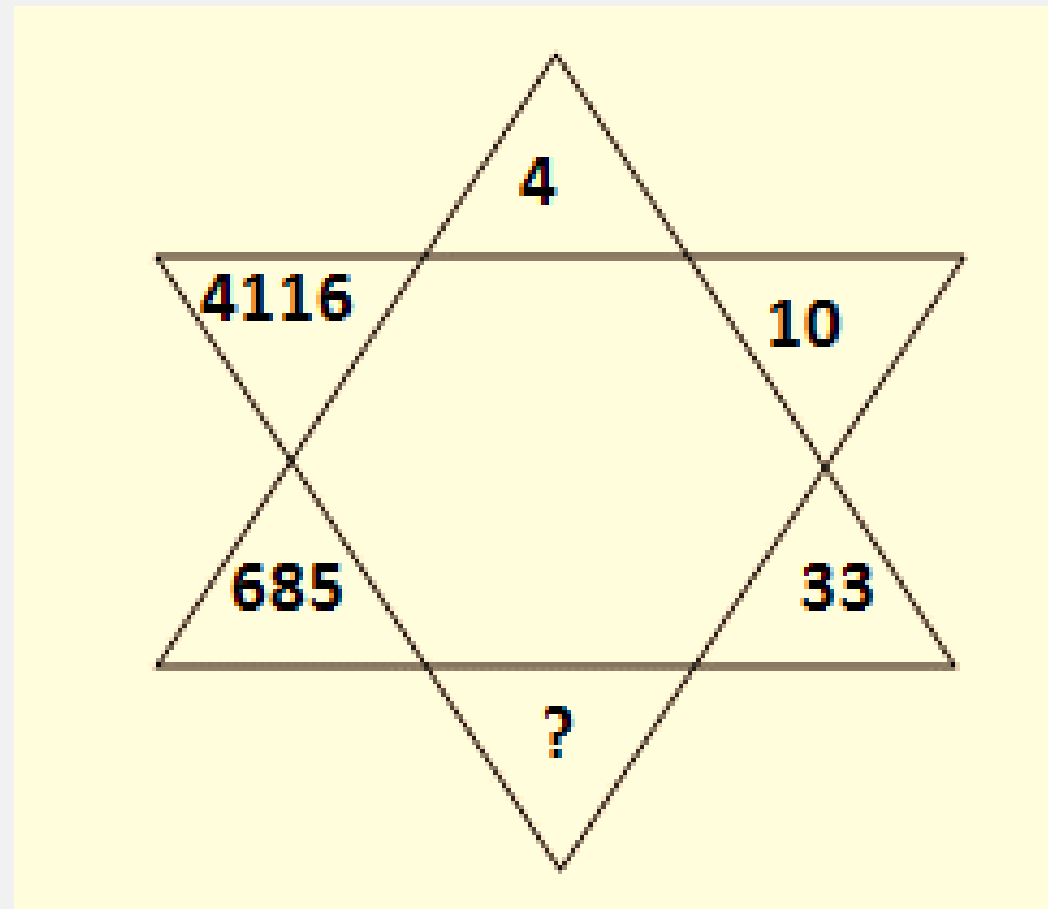
7	6	17
8	4	18
5	8	?



- (A) 17
(C) 16

- (B) 14
(D) BOTH 17 AND 14

Which number will replace the question mark ?

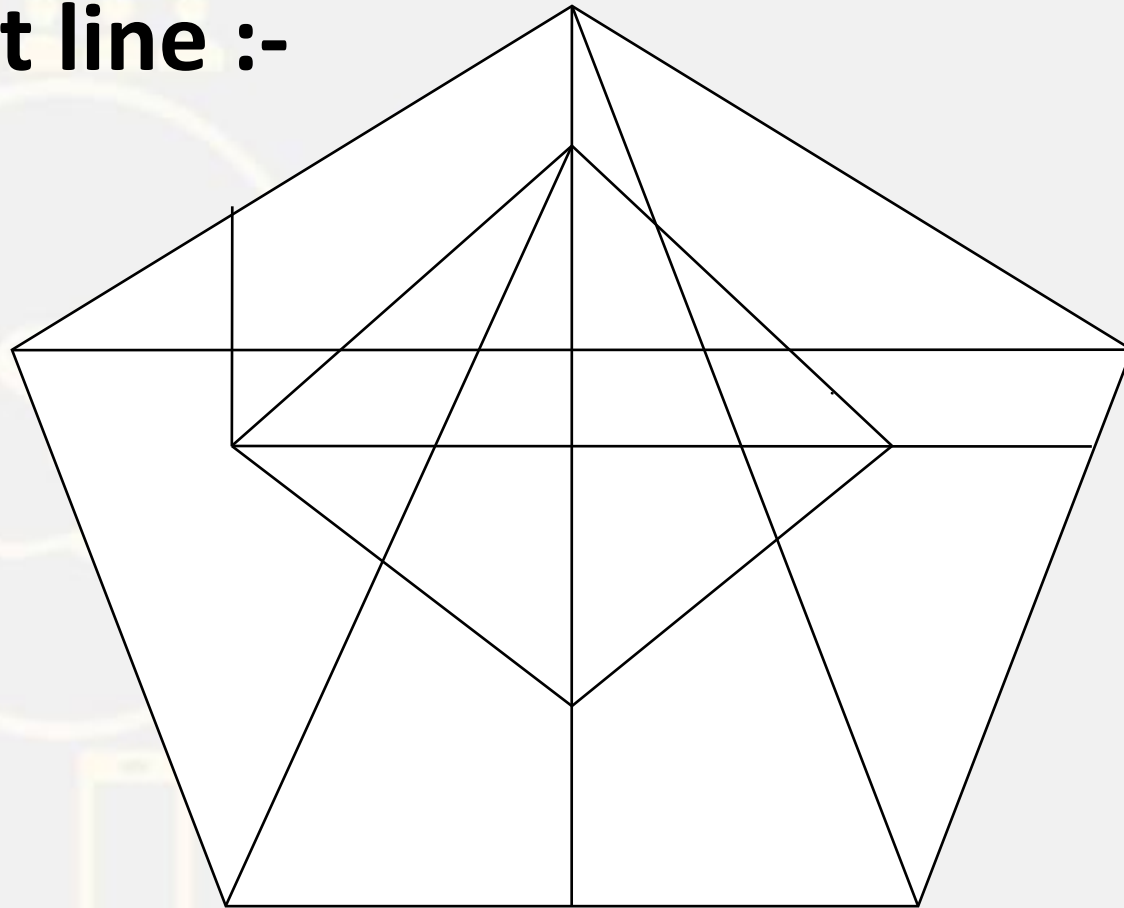


- (A) 125
- (C) 136

- (B) 116
- (D) 95

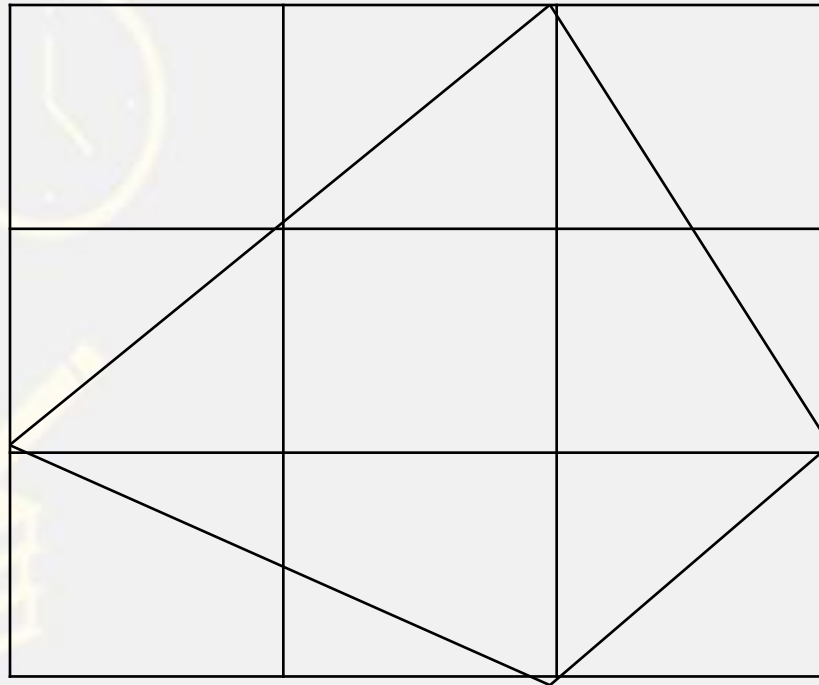
Find the Straight line :-

- (A) 15**
- (B) 16**
- (C) 17**
- (D) 19**



Find the SQUARE (?)

- (A) 14
- (B) 12
- (C) 15
- (D) NOT



Find the option which should replace (?)

$$81 : 64 :: 32 : ?$$

- (A) 25
- (B) 16
- (C) 35
- (D) 49

