

RAILWAY GROUP D

 *Mahendra's*

REASONING



≡ अंतिम प्रहार ≡

EXPECTED
QUESTIONS

LIVE | 08:30 PM





UPCOMING ONLINE BATCHES

August 2022

03 AUG 2022

03:00 PM to 05:00 PM

BANK ONLINE LIVE CLASS

01:00 PM to 03:00 PM

SSC ONLINE LIVE CLASS

BILINGUAL

10 AUG 2022

05:30 PM to 07:30 PM

BANK ONLINE LIVE CLASS

08:00 AM to 10:00 AM

SSC ONLINE LIVE CLASS

BILINGUAL

17 AUG 2022

08:00 AM to 10:00 AM

BANK ONLINE LIVE CLASS

05:30 PM to 07:30 PM

SSC ONLINE LIVE CLASS

BILINGUAL

24 AUG 2022

07:30 PM to 09:30 PM

BANK ONLINE LIVE CLASS

10:30 AM to 12:30 PM

SSC ONLINE LIVE CLASS

BILINGUAL

31 AUG 2022

10:30 AM to 12:30 PM

BANK ONLINE LIVE CLASS

07:30 PM to 09:30 PM

SSC ONLINE LIVE CLASS

BILINGUAL

10 AUG 2022

02:00 PM to 04:00 PM

BANK ONLINE LIVE CLASS

BENGALI+ENGLISH

31 AUG 2022

06:30 PM to 08:30 PM

BANK ONLINE LIVE CLASS

BENGALI+ENGLISH



www.mahendras.org



7052477777/7052577777



Mohit.. 12 hours ago 1 subscribers

Thank-you Sir for this very Amazing Class Session of today.. 👏 😊

And

Answer for today's Homework is-

Option A....

Read more

👍 🗨️ REPLY

▶ [View reply from Mahendras : Online Videos For Govt. Exams](#)



🌸 PUJA KUNDU 🌸 ----- 12 hours ago 7 subscribers

The answer is ---Option A....thank you sir dhamakedar session k liye 🔥 🔥 🔥 👏 👏 👏

👍 🗨️ REPLY

▶ [View reply from Mahendras : Online Videos For Govt. Exams](#)



SANIA ----- 3 hours ago

Fantastic session sir 👏 👏

👍 🗨️ REPLY



Chhavi Saxena 12 hours ago

Home work answer is option A

Very Nice Session Sir Thank you so much dear Sir 👏 👏 👏 👏 👏 👏 👏

👍 🗨️ REPLY

▶ [View reply from Mahendras : Online Videos For Govt. Exams](#)



Ankit Vish 12 hours ago **251** subscribers

Answer. AAA

Lajwab session sir 🙌🙌

👍 1 🗨️ REPLY

▶ [View reply from Mahendras : Online Videos For Govt. Exams](#)





Surbhi Sinha 12 hours ago

Option AAAAAAAAAAa 🙌 supper session

👍 🗨️ REPLY

▶ [View reply from Mahendras : Online Videos For Govt. Exams](#)

Which of the following diagrams indicates the best relation between
(Players , Singers , Students) / (खिलाड़ी, गायक, छात्र)



A.

B

.C

.D.

Find the option which should replace (?)

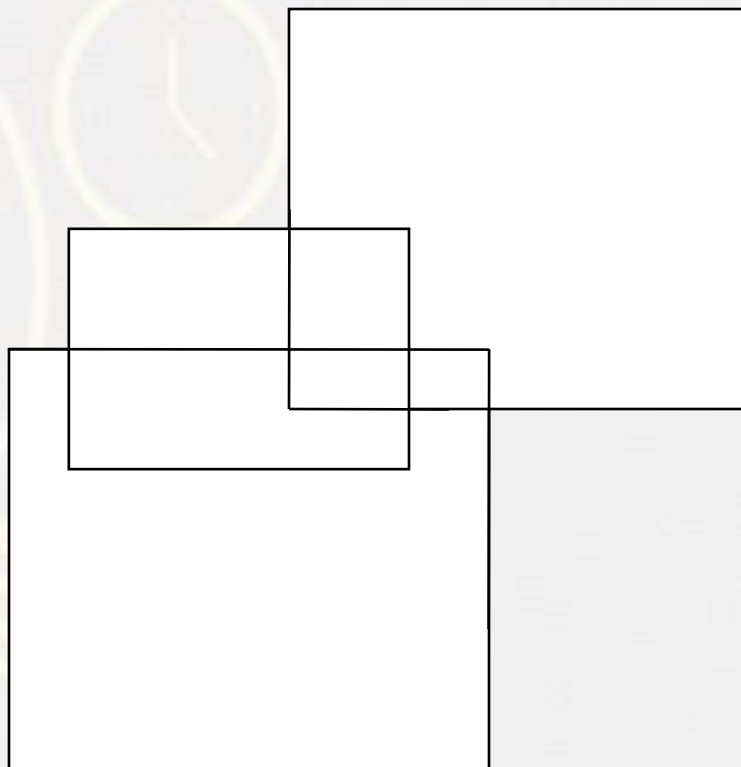
Z, D, H, N, ?

- A. R
- B. S
- C. T
- D. U



Find the number of triangle (?)

- (A) 13**
- (B) 9**
- (C) 10**
- (D) 11**



Find the option which should replace (?)

7 : 56 :: ? : ?

- (A) 3:12**
- (B) 11:121**
- (C) 6:24**
- (D) 8:62**

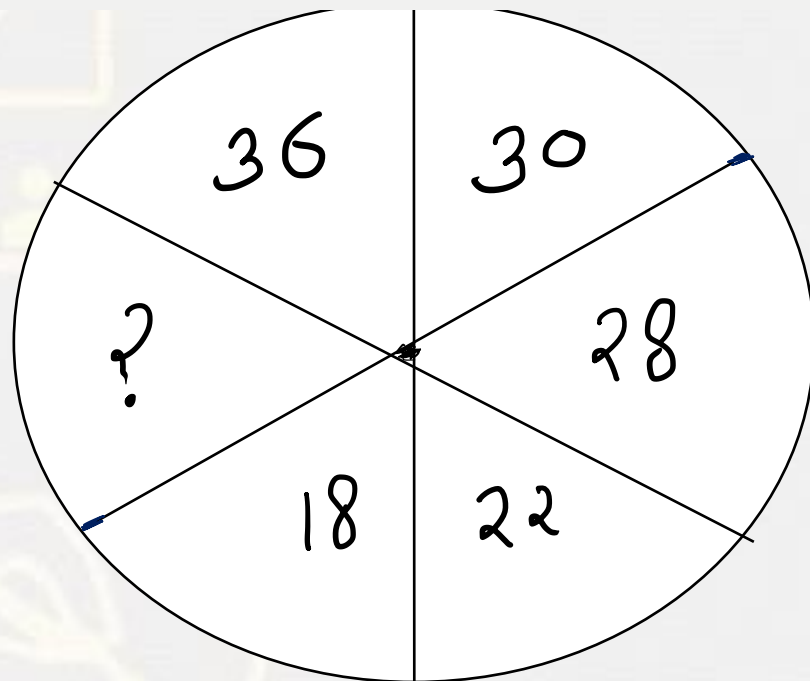


Find the option which should replace (?)

$$18 : 81 :: 16 : ?$$

- (A) 72
- (B) 76
- (C) 67
- (D) 77



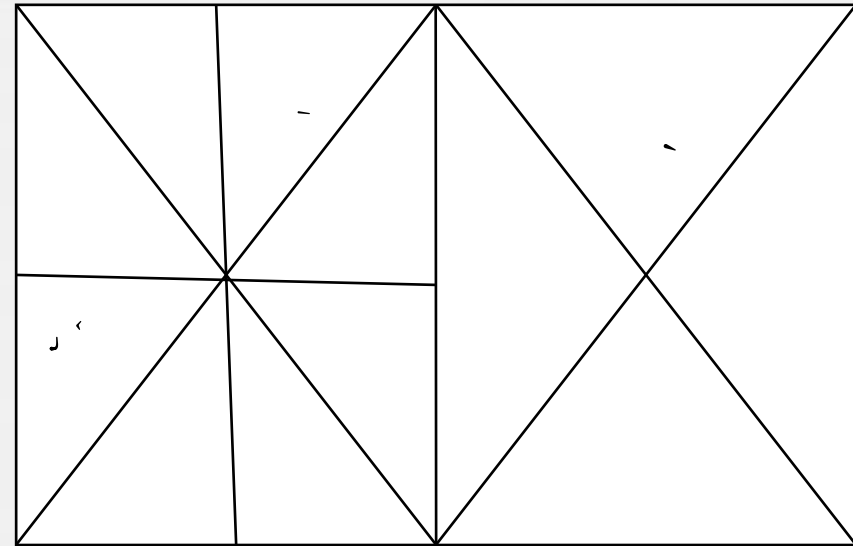


- (A) 39
- (B) 41
- (C) 32
- (D) 40

Find number of triangle in the given figure ?

दी गई आकृति में त्रिभुज की संख्या ज्ञात कीजिए?

- (A) 24**
- (B) 26**
- (C) 28**
- (D) 30**



21	28	34
12	16	16
3	?	4
84	112	136



- (A) 2**
- (B) 4**
- (C) 3**
- (D) 5**

Find the option which should replace (?)

$$4 : 17 :: 7 : ?$$

- (A) 49
- (B) 50
- (C) 51
- (D) 52



Arrange the in Dictionary order :-

- 1. First**
- 2. Frown**
- 3. Fist**
- 4. Fast**
- 5. Floor**

- A- 3,5,2,4,1**
B- 4,1,3,5,2
C- 2,1,3,5,4
D- 2,4,1,5,3




Find the option which should replace (?)

127, 63, 31, 15, 7, ?

- (A) 2
- (B) 3
- (C) 5
- (D) 4



Find the number of triangles in the given figure.



- A.30
- B.34
- C.36
- D.40

Find the option which should replace (?)

JD , ? , QK , VP , BV

- (A) NP**
- (B) NO**
- (C) MG**
- (D) MH**



In a Certain code **FAITH** is written as **KELVI** ,than find the code for **CLOUD** ?
एक निश्चित कोड में **FAITH** का कोड **KELVI** लिखा गया है , तो **CLOUD** का कोड क्या होगा ?

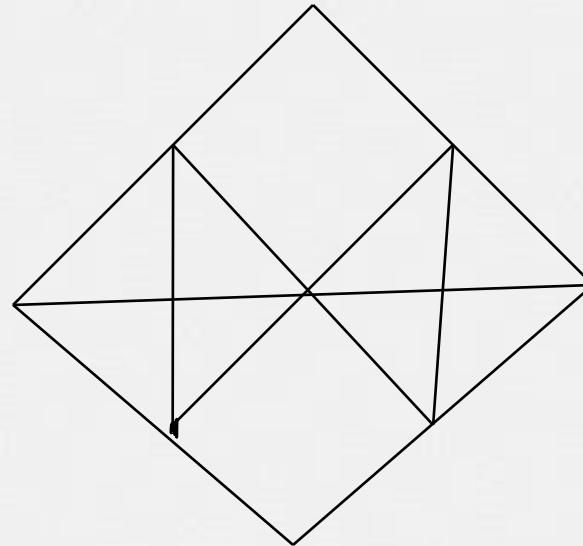
- (1) HEWRP
- (2) HPERW
- (3) HPRWE
- (4) HPWRQ



Find number of triangle in the given figure ?


दी गई आकृति में त्रिभुज की संख्या ज्ञात कीजिए?

- (A) 13**
- (B) 18**
- (C) 22**
- (D) 16**



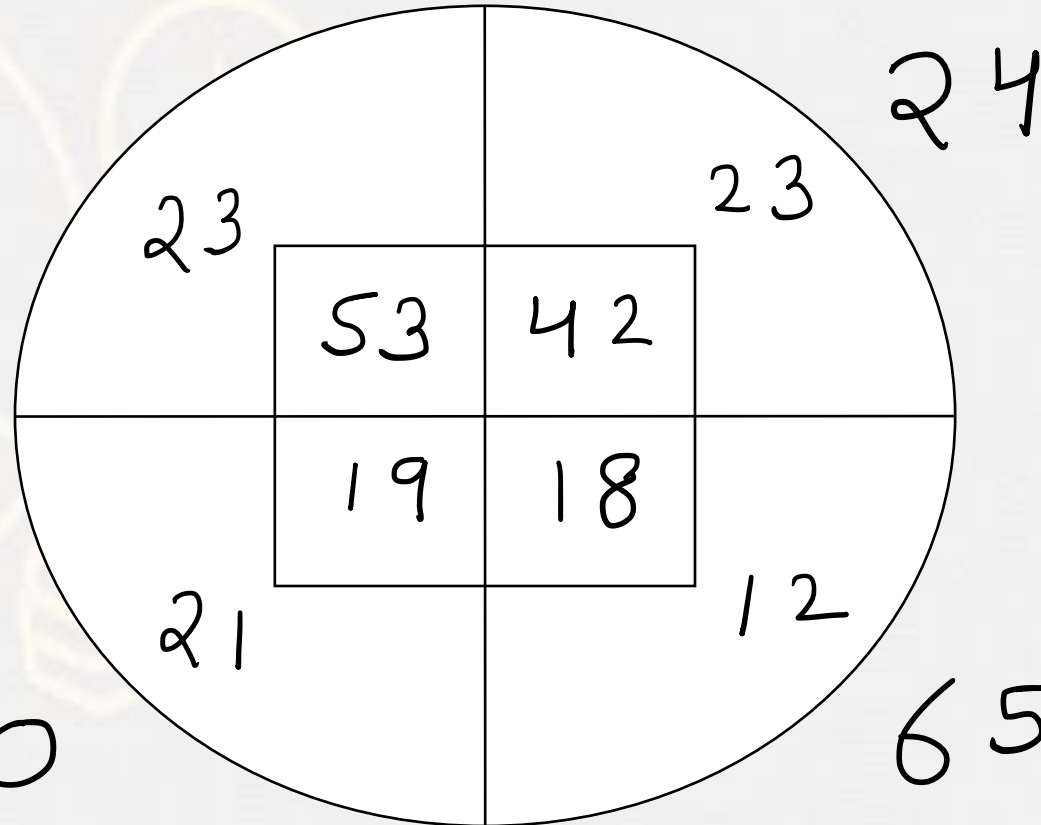
Find number of squares in figure?

- (A) 11
- (B) 21
- (C) 24
- (D) 26



Find the option which should replace (?)

- (A) 80
- (B) 52
- (C) 50
- (D) 49



Find the number of triangle (?)

- (A) 18**
- (B) 16**
- (C) 20**
- (D) 19**

