

# RAILWAY GROUP D

 *Mahendra's*

REASONING



≡ अंतिम प्रहार ≡

EXPECTED  
QUESTIONS

LIVE | 08:30 PM





# UPCOMING ONLINE BATCHES

## August 2022

**03 AUG 2022**

**03:00 PM to 05:00 PM**

**BANK ONLINE LIVE CLASS**

**01:00 PM to 03:00 PM**

**SSC ONLINE LIVE CLASS**

**BILINGUAL**

**10 AUG 2022**

**05:30 PM to 07:30 PM**

**BANK ONLINE LIVE CLASS**

**08:00 AM to 10:00 AM**

**SSC ONLINE LIVE CLASS**

**BILINGUAL**

**17 AUG 2022**

**08:00 AM to 10:00 AM**

**BANK ONLINE LIVE CLASS**

**05:30 PM to 07:30 PM**

**SSC ONLINE LIVE CLASS**

**BILINGUAL**

**24 AUG 2022**

**07:30 PM to 09:30 PM**

**BANK ONLINE LIVE CLASS**

**10:30 AM to 12:30 PM**

**SSC ONLINE LIVE CLASS**

**BILINGUAL**

**31 AUG 2022**

**10:30 AM to 12:30 PM**

**BANK ONLINE LIVE CLASS**

**07:30 PM to 09:30 PM**

**SSC ONLINE LIVE CLASS**

**BILINGUAL**

**10 AUG 2022**

**02:00 PM to 04:00 PM**

**BANK ONLINE LIVE CLASS**

**BENGALI+ENGLISH**

**31 AUG 2022**

**06:30 PM to 08:30 PM**

**BANK ONLINE LIVE CLASS**

**BENGALI+ENGLISH**



[www.mahendras.org](http://www.mahendras.org)



7052477777/7052577777



Mohit.. 13 hours ago 1 subscribers

Thank-you Sir for this Amazing and Wonderful Class Session of today's.. 🙏🙏🙏

And

My Answer for today's homework is- Option 3- 555.

Logic is- +111....

Read more

👍 1 🗨️ REPLY 📄

▶️ [View reply from Mahendras : Online Videos For Govt. Exams](#)



SANIA \_\_\_\_\_ 6 hours ago

Awesome session sir 🙏🙏

555 🔥🔥🔥🔥🔥

👍 🗨️ REPLY 📄

▶️ [View reply from Mahendras : Online Videos For Govt. Exams](#)



🌸 PUJA KUNDU 🌸 ----- 13 hours ago 7 subscribers

The answer is ---555....difference 111 ka hai sab mai...thank you sir for the amazing session

👍 🗨️ REPLY 📄

▶️ [View reply from Mahendras : Online Videos For Govt. Exams](#)



Chhavi Saxena 13 hours ago

Home work answer is 555

Very Nice session sir Thank you so much dear Sir 🙏🙏🙏🙏🙏🙏🙏🙏🙏🙏🙏

👍 🗨️ REPLY 📄

▶️ [View reply from Mahendras : Online Videos For Govt. Exams](#)



DEEKSHA SHARMA 13 hours ago

Home work answer is 555

Very nice session sir 🙌🙌🙌🙌🙌



REPLY



▼ [View reply from Mahendras : Online Videos For Govt. Exams](#)



Ankit Vish 3 hours ago 249 subscribers

Answer. CCC

Lajwab session sir 🙌🙌

Logic 111 ka + ho raha hai



REPLY



▼ [View reply from Mahendras : Online Videos For Govt. Exams](#)



Bhavya thakur \_\_\_\_\_ 13 hours ago 27 subscribers

555 🙌



REPLY



▼ [View reply from Mahendras : Online Videos For Govt. Exams](#)

Find the wrong number in the given series.

**225, 336, 447, 555, 669**

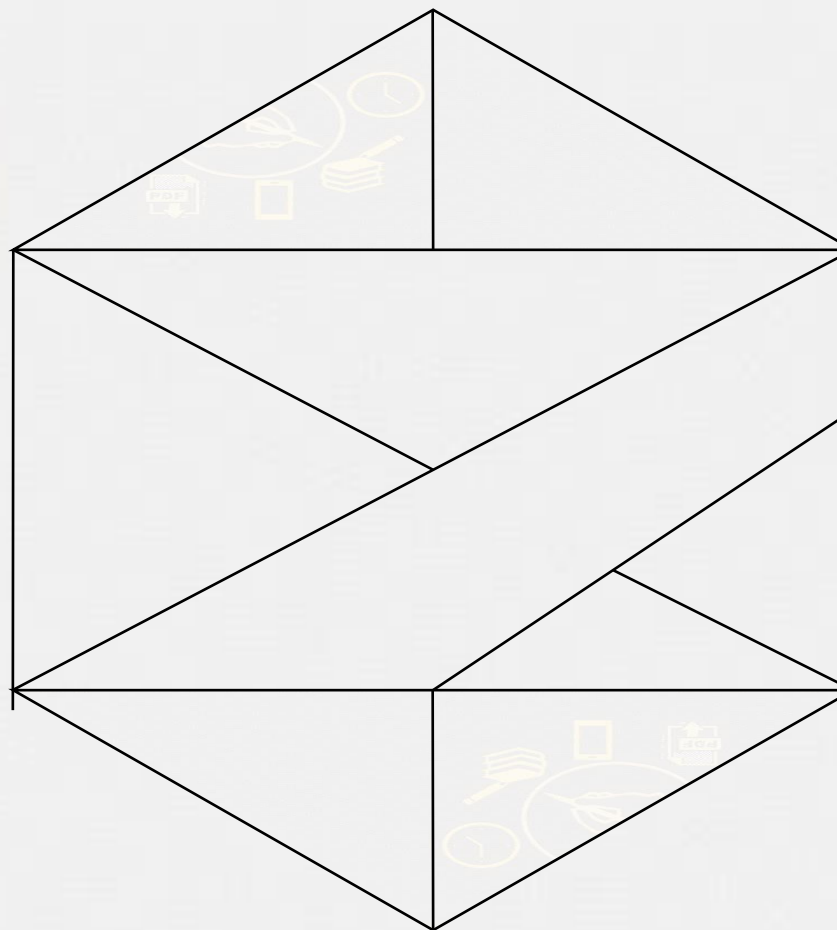
1. 225
2. 447
3. 555
4. 669





**Find the number of triangle (?)**

- (A) 12**
- (B) 13**
- (C) 17**
- (D) NOT**



Find the option which should replace (?)

**5 : 10 :: 9 : ?**

- A. 81
- B. 8
- C. 27
- D. 9



Find the option which should replace (?)



**OY : 28 :: LY : ?**

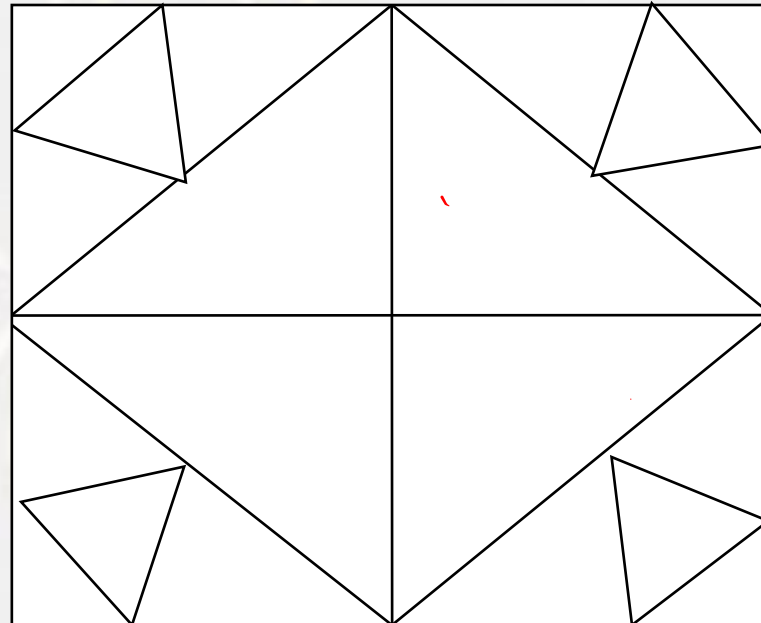
- A. 12
- B. 25
- C. 29
- D. 30



**Find number of triangle in the given figure ?**

**दी गई आकृति में त्रिभुज की संख्या ज्ञात कीजिए?**

- (A) 24**
- (B) 26**
- (C) 28**
- (D) 20**

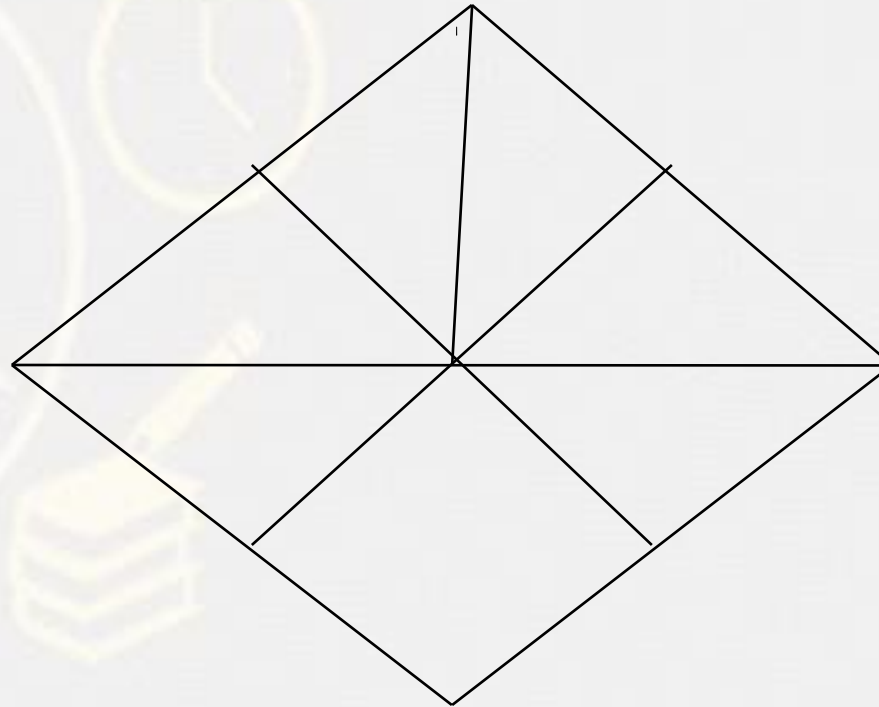


**Find number of triangle in the given figure ?**

**दी गई आकृति में त्रिभुज की संख्या ज्ञात कीजिए?**



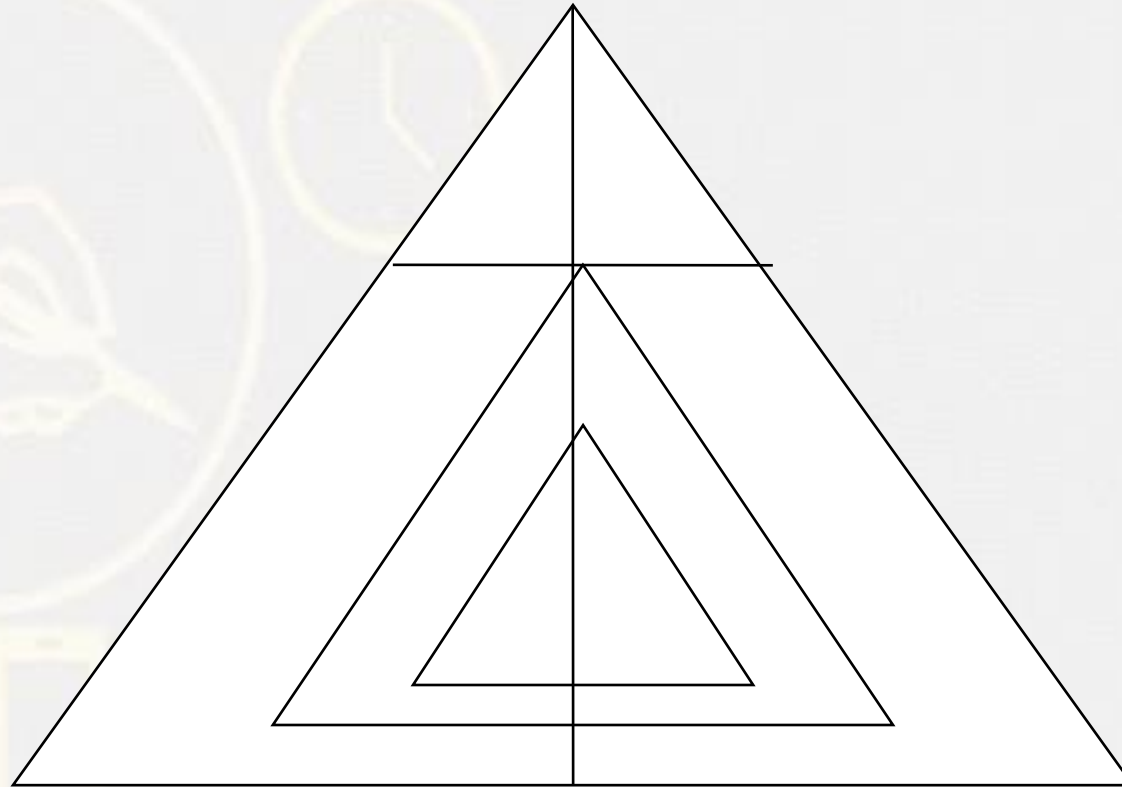
- (A) 9**
- (B) 7**
- (C) 8**
- (D) 10**



**Find number of triangle in the given figure ?**

**दी गई आकृति में त्रिभुज की संख्या ज्ञात कीजिए?**

- (A) 12**
- (B) 14**
- (C) 18**
- (D) 20**



Find the missing one (?)

Pen : Poet :: Needle : ?

कलम : कवि :: सुई : ?

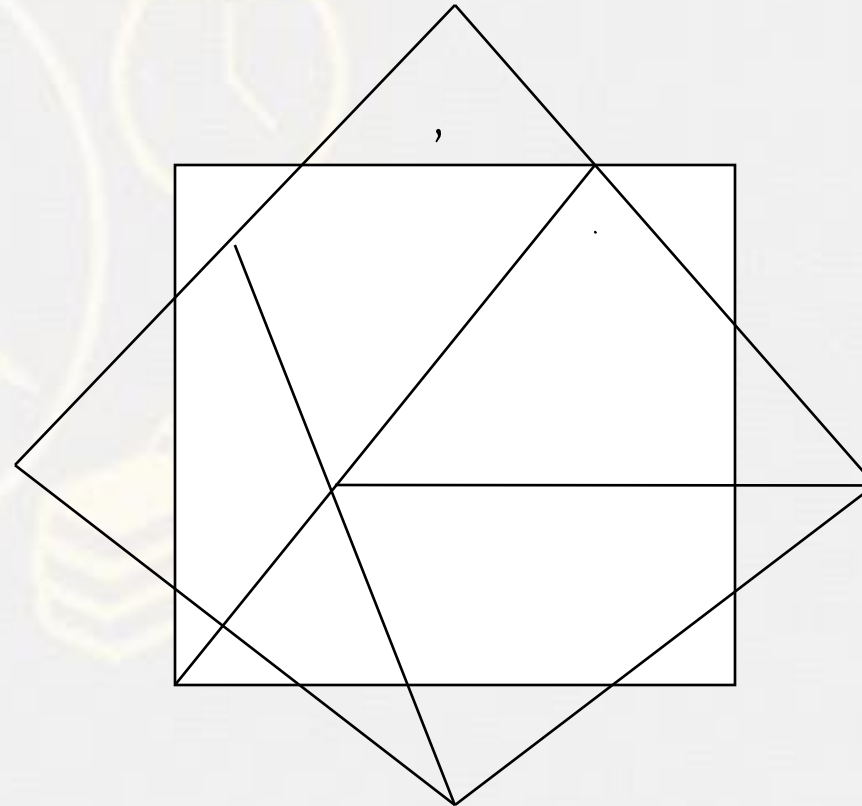
- (A) Thread / धागा
- (B) Button / बटन
- (C) Sewing / सिलाई
- (D) Tailor / दर्जी





**Find the triangle (?)**

- 1. 21**
- 2. 20**
- 3. 14**
- 4. NOT**



# Find the triangle (?)




1.35

2.36

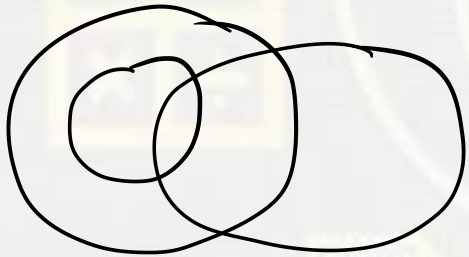
3.37

4.38

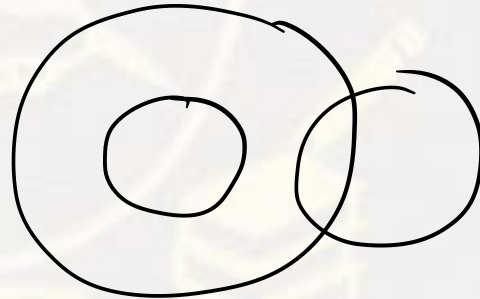
Find the missing (?)



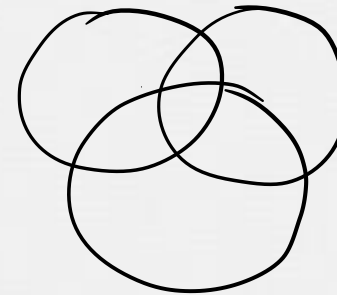
Uncle , Relative , Rich / चाचा, रिश्तेदार, अमीर



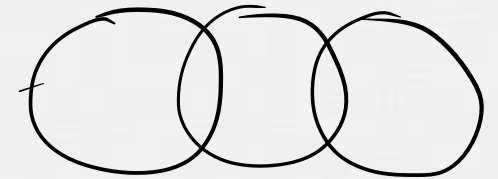
(A)



(B)



(C)

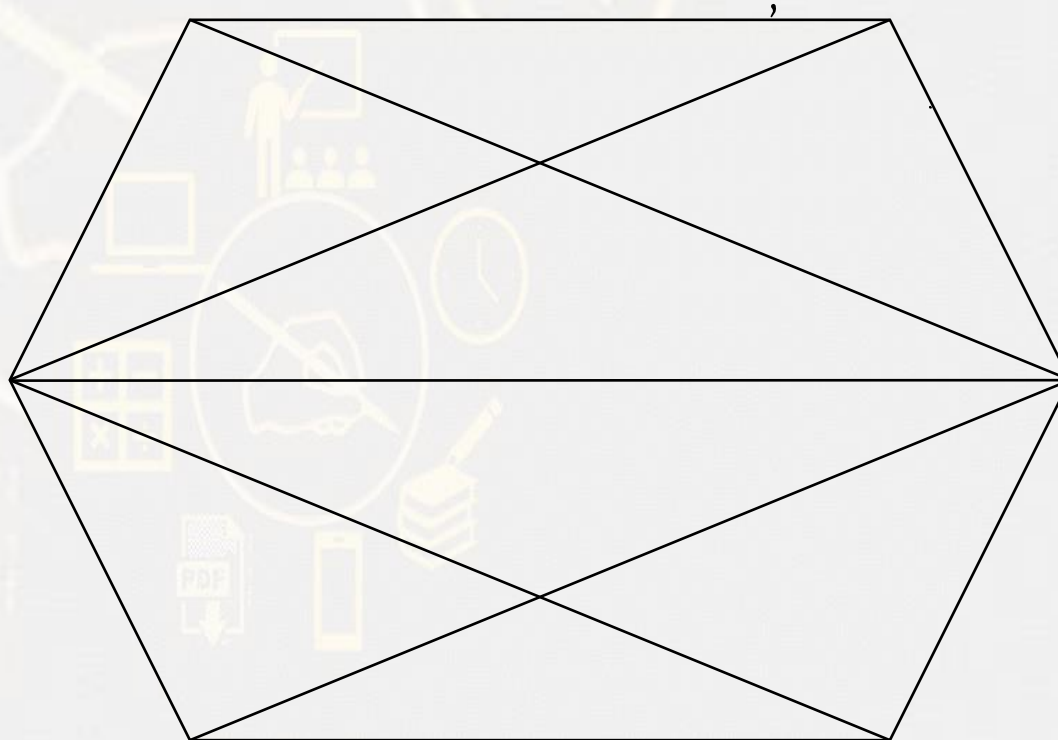


(D)

Find the quadrilaterals (?)



- 1. 6
- 2. 7
- 3. 9
- 4. 11





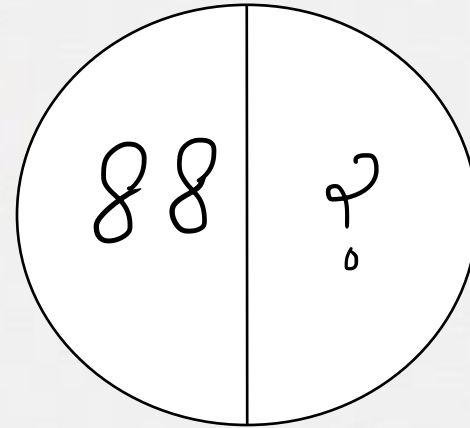
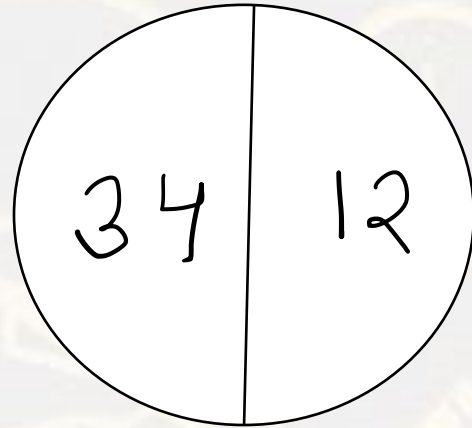
Find the option which should replace (?)



**AF : 33 :: HE : ?**

- (A) 34**
- (B) 49**
- (C) 56**
- (D) 43**

Find the missing one (?)



- (A) 36
- (B) 64
- (C) 49
- (D) 34




Find the odd one (?)




- (A) Analysis / विश्लेषण
- (B) Search / खोज
- (C) Conclusion / निष्कर्ष
- (D) Exploration / अन्वेषण


Choose a figure which would most closely resemble the unfolded form of Figure (Z).



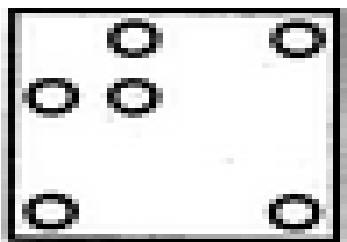
X




Y




Z




(1)



(2)



(3)

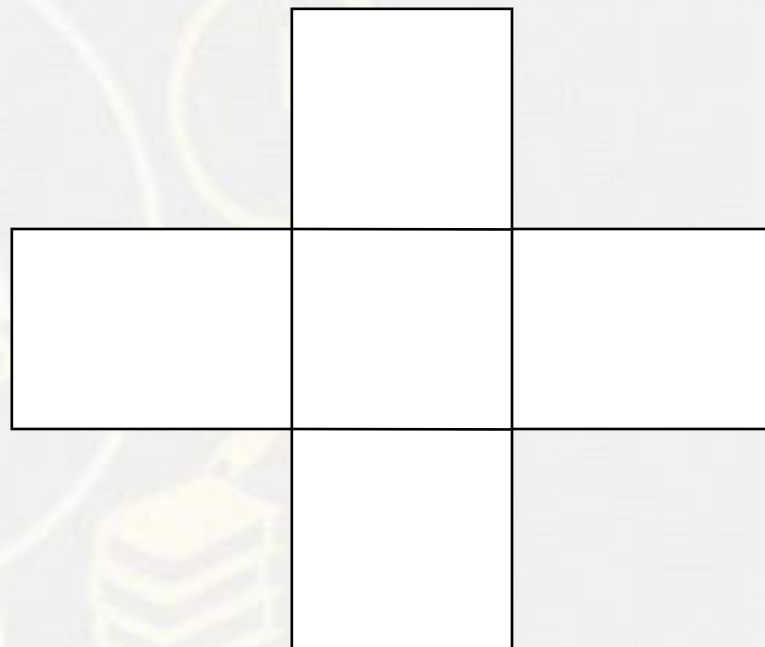


(4)



- A. 1
- B. 2
- C. 3
- D. 4

**Find the number of rectangle (?)**



- (A) 10**
- (B) 11**
- (C) 12**
- (D) 13**



Find the option which should replace (?)

**5 : 100 :: 4 : ?**

- A. 64
- B. 16
- C. 80
- D. 48

Find the option which should replace (?)



**17 : 144.5 :: 13 : ?**

- A. 87.5
- B. 86.25
- C. 84.5
- D. 81.25

If A is the brother of B; B is the sister of C; and C is the father of D, how A is related to D?

यदि A, B का भाई है; B, C की बहन है; और C, D का पिता है, A, D से कैसे संबंधित है?

- A. Brother
- B. Sister
- C. Nephew
- D. Uncle





In a certain code a number **TIP** is written as **13** and **RUN** is written as **25** . How is **JOY** written in that code ?

- (1) 30
- (2) 10
- (3) 00
- (4) 05
- (5) None of these



Time of **2 : 12 : 20** is being seen in the mirror , what time will it show ?

**2:12:20** का समय दर्पण में देखा जा रहा है, यह किस समय दिखाई देगा?

- (A) 9 : 47 : 40
- (B) 9 : 45 : 41
- (C) 9 : 42 : 43
- (D) 9 : 41 : 45



Find the option which should replace (?)

**243 : 27 :: 354 : ?**

- (A) 36
- (B) 40
- (C) 45
- (D) 60



Find the missing one (?)

**2F : FD :: 3D : ?**

- (A) HU
- (B) HA
- (C) HO
- (D) HI



If (-) stands for division, (+) for multiplication, ( $\div$ ) for subtraction and ( $\times$ ) for addition, which one of the following answers is correct to the given equation?

यदि (-) विभाजन के लिए खड़ा है, (+) गुणन के लिए, (and) घटाव के लिए (और) इसके अलावा, ( $\times$ ), निम्नलिखित में से कौन सा उत्तर दिए गए समीकरण के लिए सही है?

$$4 \times 64 - 8 \div 4 + 2 = ?$$

1. 4
2. 6
3. 8
4. 1



**A clock is taking 3:40 minutes , find the time when the hour needle must have moved 75 degree?**

**एक घड़ी में 3:40 मिनट लग रहे हैं, उस समय को खोजें जब घंटे की सुई 75 डिग्री से आगे होगी?**

- (A) 6 : 10**
- (B) 5 : 50**
- (C) 6 : 20**
- (D) 6 : 15**



**Arrange the given words in the alphabetical order.**

- 1. Inadequate**
- 2. Institution**
- 3. Inhospitable**
- 4. Improvement**
- 5. Incompetent**

- (a) 4, 2, 3, 5, 1**
- (b) 4, 1, 3, 5, 2**
- (c) 4, 1, 5, 3, 2**
- (d) 4, 1, 5, 2, 3**



Find the option which should replace (?)

$$10 + 7 = 12$$

$$25 + 3 = 25$$

$$27 + 8 =$$

(A) 21

(B) 30

(C) 39

(D) 26





**Bharat and Sapna are husband and Wife . Rohit and Bharat are brothers. Suresh is the father of Rohit . Sapna's son is Krish . How is Krish related to Sauresh ?**

**भरत और सपना पति और पत्नी हैं। रोहित और भरत भाई हैं। सुरेश रोहित के पिता हैं। सपना का बेटा कृष है। कृष का संबंध सुरेश से कैसे है?**

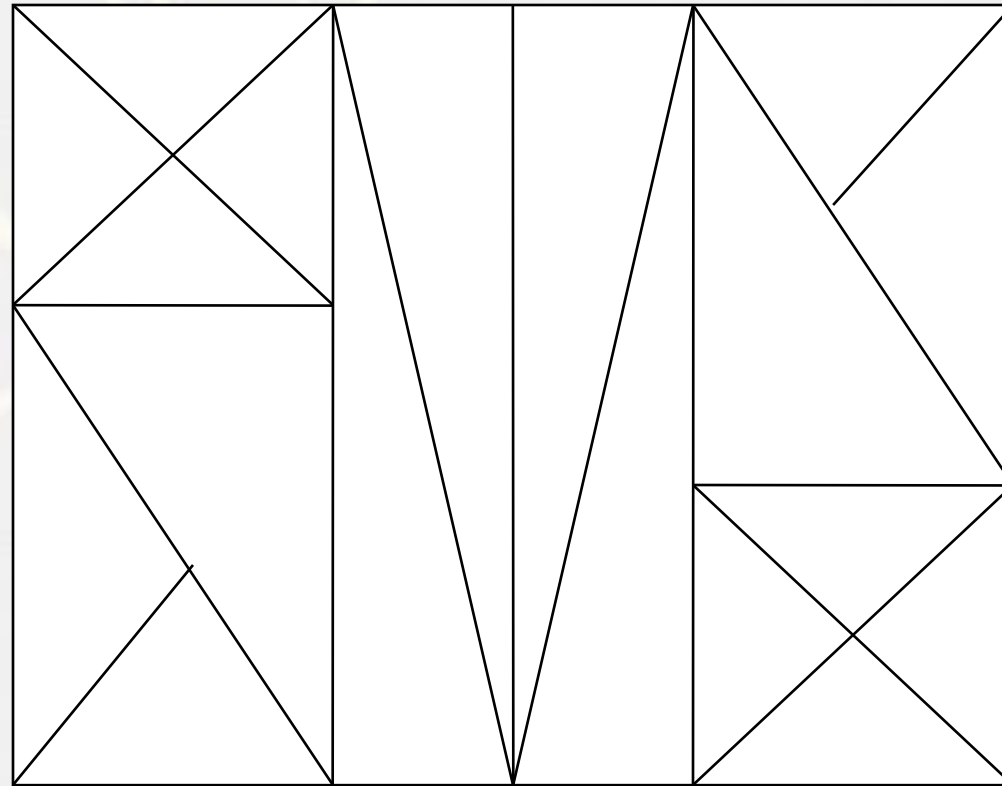
- A. Son**
- B. Father**
- C. Uncle**
- D. Grandson**






**Find number of triangle in the given figure ?**

**दी गई आकृति में की संख्या ज्ञात कीजिए?**

- (A) 33**
- (B) 18**
- (C) 31**
- (D) 29**



Which of the following diagrams indicates the best relation between  
(Players , Singers , Students) / (खिलाड़ी, गायक, छात्र)



A.

B

.C

.D.





