

TOPIC WISE REASONING



- **Analogy**
- **Figure Counting**
- **Direction**
- **Order & Ranking**

SSC MTS & GD Previous Year Paper



ALL COMPETITIVE EXAMS

 2:00 PM

LIVE 



Don't Let Your Studies Get Impacted By COVID-19 Pandemic

Stay Home & Study Online With Mahendras Hybrid Model

Features



Offline Classes



Live Interactive Online Classes



Same Faculty



Same Batch



Same Batch Timing



Online Library Facility



Recorded Video



PDFs



Classes In Both Model

CONTACT US:

1800-103-5225

www.mahendras.org





UPCOMING ONLINE BATCHES

September 2021

01 Sep 2021

01:00 PM to 03:00 PM

**LIVE PREMIUM
GREEN CARD**
(BANK-PO & CLERK)

08:00 AM to 10:00 AM

**LIVE PREMIUM
SILVER CARD**
(SSC CGL & CHSL)

BILINGUAL

08 Sep 2021

10:30 AM to 12:30 PM

**LIVE PREMIUM
GREEN CARD**
(BANK-PO & CLERK)

BILINGUAL

15 Sep 2021

03:00 PM to 05:00 PM

**LIVE PREMIUM
GREEN CARD**
(BANK-PO & CLERK)

03:00 PM to 05:00 PM

**LIVE MATHS
INDIVIDUAL**
(ONLINE LIVE CLASS)

BILINGUAL

03:00 PM to 05:00 PM

LIVE PREMIUM SILVER CARD
(SSC CGL & CHSL)

ENGLISH MEDIUM

22 Sep 2021

05:30 PM to 07:30 PM

**LIVE PREMIUM
GREEN CARD**
(BANK-PO & CLERK)

BILINGUAL

29 Sep 2021

10:30 AM to 12:30 PM

**LIVE PREMIUM
SILVER CARD**
(SSC CGL & CHSL)

BILINGUAL

07:30 PM to 09:30 PM

LIVE PREMIUM GREEN CARD
(BANK-PO & CLERK)

ENGLISH MEDIUM



The Staff Selection Commission has decided to re-schedule its following examinations as per the details given below:

S. No.	Name of Examination	Revised Schedule
1.	Sub-Inspector in Delhi Police, CAPFs and ASI in CISF Examination (Paper-II), 2019	26.07.2021
2.	Combined Higher Secondary (10+2) Level Examination (Tier-I), 2020 - For left-over candidates	04.08.2021-12.08.2021
3.	Combined Graduate Level Examination (Tier-I), 2020	13.08.2021-24.08.2021

S No	Name of Examination	Paper/ Stage	Schedule of Examination
1	Combined Graduate Level Examination-2019	Skill Test	15.09.2021 to 16.09.2021
2	Junior Engineer (Civil, Mechanical, Electrical and Quantity Surveying & Contracts) Examination, 2020	Paper-II	26.09.2021
3	Multi Tasking (Non-Technical) Staff Examination, 2020	Paper-I	05.10.2021 to 20.10.2021
4	Stenographer Grade 'C' and 'D' Examination, 2019	Skill Test	21.10.2021 To 22.10.2021



Arju praveen 9 hours ago

Ans-230(B)

THANK YOU SO MUCH SIR ,, VERY NICE SESSION

👍 🗨️ REPLY



PUJA KUNDU 12 hours ago

THE ANS IS 220($10 \times 2 = 20 \times 11 = 220$)....FABULOUS SESSION SIR 🔥 THANK YOU SIR 🙏 2 DIN LIVE CLSS NHI KAR SAKTI 😞 😞 😞

👍 1 🗨️ REPLY

▼ [View reply](#)



Viśhñù Güptá 18 hours ago

230 is the right ans

Very nice session sir 🙏❤️

👍 1 🗨️ REPLY

▼ [View reply from Mahendras : Online Videos For Govt. Exams](#)



ravi kumar 4 hours ago

220 RIGHT,,, INININ क्यो रूक जाते हो, चार दिन की मेहनत के बाद ,,वक्त लगता है,बीज को फल बनने में👍👍👍 TAKE CATE LOVE YOU ❤️

👍 🗨️ REPLY



Roshni Khandelwal 18 hours ago

220 is correct answer

Very nice session sir thank you

👍 1 🗨️ REPLY

▼ [View reply from Mahendras : Online Videos For Govt. Exams](#)



SARITA RAWAT 17 hours ago

Homework answer

220is the right answer

Today very awesome session sir 🙏👍👍👍🙏

Thanku so much sir 🙏

👍 1 🗨️ REPLY

▶ View 2 replies from Mahendras : Online Vide



Sahil Kumar 8 hours ago

Sir new admission ho raha hai

Aur ho raha hai to demo class kab se kab tak hai

👍 🗨️ REPLY



Masum Idki 😊 19 hours ago

220 is the correct ans

Very nice session 🙏👍

👍 1 🗨️ REPLY

▶ View reply from Mahendras : Online Videos f



Radha Garima 15 hours ago

Answer : 220

Cool session sir 🙏

👍 1 🗨️ REPLY

▶ View 3 replies from Mahendras : Online Vide



Abhi Vaghela 15 hours ago

220 nice session sir ❤️

👍 1 🗨️ REPLY

▶ View 2 replies from Mahendras : Online Videos For Govt. Exams



ankita g 19 hours ago

220, Nice session sir

👍 🗨️ REPLY

▶ View reply from Mahendras : Online Videos For Govt. Exams



Rajkumar 19 hours ago

Option b is the correct answer awesome class sir bohout badiya

👍 🗨️ REPLY

▶ View reply from Mahendras : Online Videos For Govt. Exams



Subhaja Pahari 12 hours ago

220 ans. nice session sir

👍 🗨️ REPLY

▶ View reply



ऋतिक---jha_____ 19 hours ago

$10*2=20*(10+1)=220$

👍 🗨️ REPLY

▶ View 2 replies from Mahendras : Online Videos For Govt. Exams



DEEKSHA SHARMA 17 hours ago

Home work answer is 230

REPLY

[View reply from Mahendras : Online Videos Fc](#)



barbie dancer 19 hours ago

230 hoga sir

REPLY

[View reply from Mahendras : Online Videos Fc](#)



bablu sharma 17 hours ago

Sir statement vale question Jada karate please

REPLY

[View reply from Mahendras : Online Videos Fc](#)



RANJU KUMARI 19 hours ago

220

REPLY

[View reply from Mahendras : Online Videos Fc](#)



Sukhchand Paradkar 4 hours ago

B Nice session sir.

REPLY



barbie dancer 19 hours ago

2 REPLY

[View reply from Mahendras : Online Vi](#)



Anushka Mishra 15 hours ago

220 is correct answer

REPLY

[View reply from Mahendras : Online Vi](#)



Abhishek Pandey 17 hours ago

Answer is 230

REPLY

[View reply from Mahendras : Online Vi](#)




Preeti 19 hours ago

230

REPLY

[View reply from Mahendras : Online Vi](#)



Gaurav Srivastava 13 hours ago

Ans 220 hoga

REPLY

[View 2 replies](#)



Shivani Verma 19 hours ago

220 ...ans



REPLY

▼ [View reply from Mahendras : 0](#)



Prachi Prajapat 11 hours ago

34



REPLY



Subhakar K201 13 hours ago

220



REPLY

▼ [View reply](#)

Find the Missing one (?)

$$12 : 312 :: 10 : ?$$

- (A) 218
- (B) 230
- (C) 226
- (D) 220



Find the option which should replace (?)

541 : 992 :: 145 : ?

- (A) 784
- (B) 576
- (C) 776
- (D) 921



Find the option which should replace (?)

$$16 : 13 :: 64 : ?$$

- (A) 22
- (B) 20
- (C) 19
- (D) 18



Find the option which should replace (?)

1728 : 12 :: 10648 : ?

- (A) 27
- (B) 15
- (C) 22
- (D) 24



Find the option which should replace (?)

39 : 94 :: 81 : ?

- (A) 19
- (B) 18
- (C) 81
- (D) 17



One morning Udai and Vishal were talking to each other face to face at a crossing. If Vishal's shadow was exactly to his left, which direction was Udai facing ?

एक सुबह उदय और विशाल एक चौराहे पर आमने-सामने बात कर रहे थे। यदि विशाल की छाया ठीक उसके बायीं ओर थी, तो उदय का मुख किस दिशा में था?

- (1) East**
- (2) West**
- (3) North**
- (4) South**
- (5) None of these**

Find the option which should replace (?)

6415 : 5315 :: 7896: ?

- (A) 6785
- (B) 6905
- (C) 7785
- (D) 6705



Find the MISSING (?)

16 : 4 :: 10 : ?

- (A) 2
- (B) 5
- (C) 6
- (D) 4

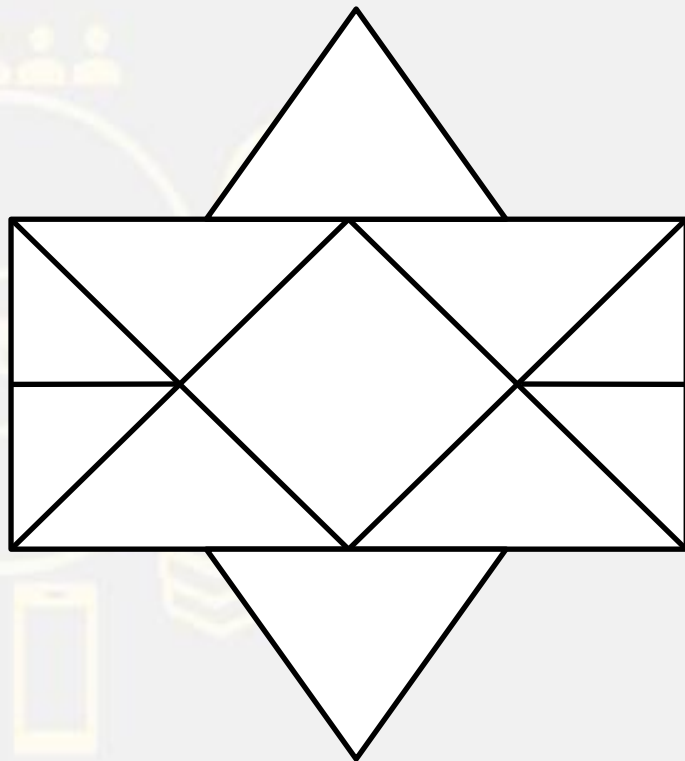


Find the missing one (?)

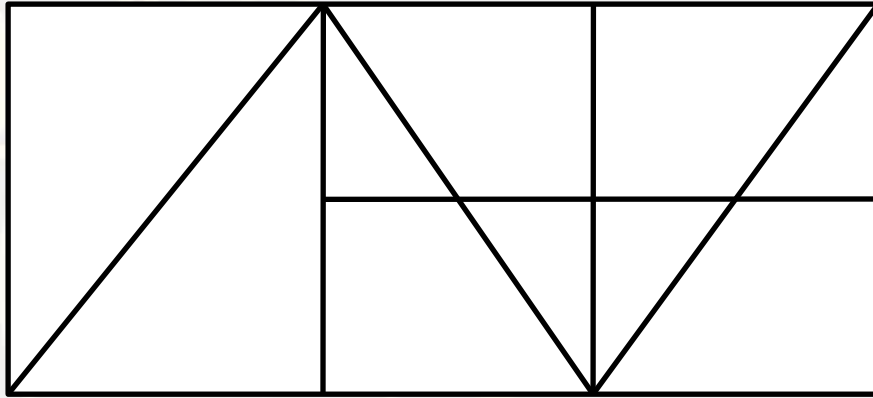
48 : 122 :: 168 : ?

1. 292
2. 290
3. 225
4. 215





- A. 10
- B. 16
- C. 18
- D. 14



- A.13
- B.14
- C.15
- D.16

In a row X is 14th from right and 19th from left. Then what is total no?

एक पंक्ति में x दाएं से 14 वे और बाएं से 19वे स्थान पर है। तो कुल संख्या क्या होगी है?

- (1) 21
- (2) 32
- (3) 10
- (4) 24
- (5) None of these



Find the option which should replace (?)

$$52 : 221 :: 20 : ? :: 64 : 272$$

- (A) 170
- (B) 255
- (C) 84
- (D) 85



Find the option which should replace (?)

$$14 : 289 :: 25 : ?$$

- (A) 729
- (B) 841
- (C) 900
- (D) 625



Three persons A, B and C are standing in a queue. There are five persons between A and B and eight persons between B and C. If there are three persons ahead of C and 21 behind A, then what could be the minimum number of persons in the queue ?

पंक्ति में तीन व्यक्ति A, B और C खड़े हैं। A और B के बीच पांच व्यक्ति और B और C के बीच आठ व्यक्ति हैं। यदि 3 व्यक्ति C के आगे है और 21 पीछे हैं, तो पंक्ति में कुल न्यूनतम संख्या क्या होगी?

- (1) 27
- (2) 28
- (3) 40
- (4) 41
- (5) None of these



Find the option which should replace (?)

$$8 : 128 :: 5 : ?$$

- (A) 125
- (B) 625
- (C) 50
- (D) 100



Find the option which should replace (?)

$$178 : 40 :: 692 : ?$$

- (A) 56
- (B) 39
- (C) 101
- (D) 91



