



 *Mahendra's*

UP Police कांस्टेबल

REASONING

FIGURE COUNTING



 **4:00 PM**

LIVE 



Don't Let Your Studies Get Impacted By COVID-19 Pandemic

Stay Home & Study Online With Mahendras Hybrid Model

Features



Offline Classes



Live Interactive Online Classes



Same Faculty



Same Batch



Same Batch Timing



Online Library Facility



Recorded Video



PDFs



Classes In Both Model

CONTACT US:

1800-103-5225

www.mahendras.org





UPCOMING ONLINE BATCHES

February 2022

02 Feb 2022

08:00 AM to 10:00 AM

BANK ONLINE LIVE CLASS

05:30 PM to 07:30 PM

BANK ONLINE LIVE CLASS

01:00 PM to 03:00 PM

SSC ONLINE LIVE CLASS

10:30 AM to 12:30 PM

SSC ONLINE LIVE CLASS

BILINGUAL

09 Feb 2022

10:30 AM to 12:30 PM

BANK ONLINE LIVE CLASS

03:00 PM to 05:00 PM

BANK ONLINE LIVE CLASS

05:30 PM to 07:30 PM

SSC ONLINE LIVE CLASS

BILINGUAL

16 Feb 2022

01:00 PM to 03:00 PM

BANK ONLINE LIVE CLASS

08:00 AM to 10:00 AM

BANK ONLINE LIVE CLASS

07:30 PM to 09:30 PM

SSC ONLINE LIVE CLASS

03:00 PM to 05:00 PM

SSC ONLINE LIVE CLASS

BILINGUAL

23 Feb 2022

10:30 AM to 12:30 PM

BANK ONLINE LIVE CLASS

08:00 AM to 10:00 AM

SSC ONLINE LIVE CLASS

01:00 PM to 03:00 PM

SSC ONLINE LIVE CLASS

BILINGUAL

08:00 AM to 10:00 AM

SSC ONLINE LIVE CLASS

(SSC CGL & CHSL)

ENGLISH MEDIUM

07:30 PM to 09:30 PM

BANK ONLINE LIVE CLASS

(BANK PO & CLERK)

ENGLISH MEDIUM



Viśhñù Güptá 20 hours ago

12 is the right ans

Super nice session sir thank you so much sir ❤️🙏

👍 🗨️ 📄 ▼ 📊 REPLY

▶ [View reply from Mahendras : Online Videos For Govt. Exams](#)



🌸 PUJA KUNDU 🌸 20 hours ago

The answer is— 12 st. Line....aaj to superior session tha sir🙏🙏🙏...ajj to sab ka patta kata kai baar😅😅....thank you sir 🙏

👍 🗨️ 📄 ▼ 📊 REPLY

▶ [View reply from Mahendras : Online Videos For Govt. Exams](#)



Radha Garima 17 hours ago

Answer : 12

Nice session sir 🙏😊

👍 🗨️ 📄 ▼ 📊 REPLY

▶ [View reply from Mahendras : Online Videos For Govt. Exams](#)



Chhavi Saxena 20 hours ago

Home work answer is 12

Nice session sir 🙏🙏

👍 🗨️ 📄 ▼ 📊 REPLY

▶ [View reply from Mahendras : Online Videos For Govt. Exams](#)




Ankit Vish 5 hours ago

Answer. 12

Nice session sir 🙏🙏

👍 1 🗨️ 📄 ▾ 📄 REPLY

▶ [View reply from Mahendras : Online Videos For Govt. Exam:](#)



SANIA _____ 20 hours ago

mast session sir 🙏

12 🔥🔥🔥🔥🔥🔥

👍 🗨️ 📄 ▾ 📄 REPLY

▶ [View reply from Mahendras : Online Videos For Govt. Exam:](#)



Shruti Jain 19 hours ago

12 nice session sir.🙏

👍 🗨️ 📄 ▾ 📄 REPLY

▶ [View reply from Mahendras : Online Videos For Govt. Exams](#)



PRNOTI BISWAS 17 hours ago

The answer is 12 straight lines.

👍 🗨️ 📄 ▾ 📄 REPLY

▶ [View reply from Mahendras : Online Videos For Govt. Exams](#)



Anushka Mishra 17 hours ago

12

👍 🗨️ 📄 ▾ 📄 REPLY

▶ [View reply from Mahendras : Online Videos For Govt. Exams](#)



ANNU LATA 19 hours ago

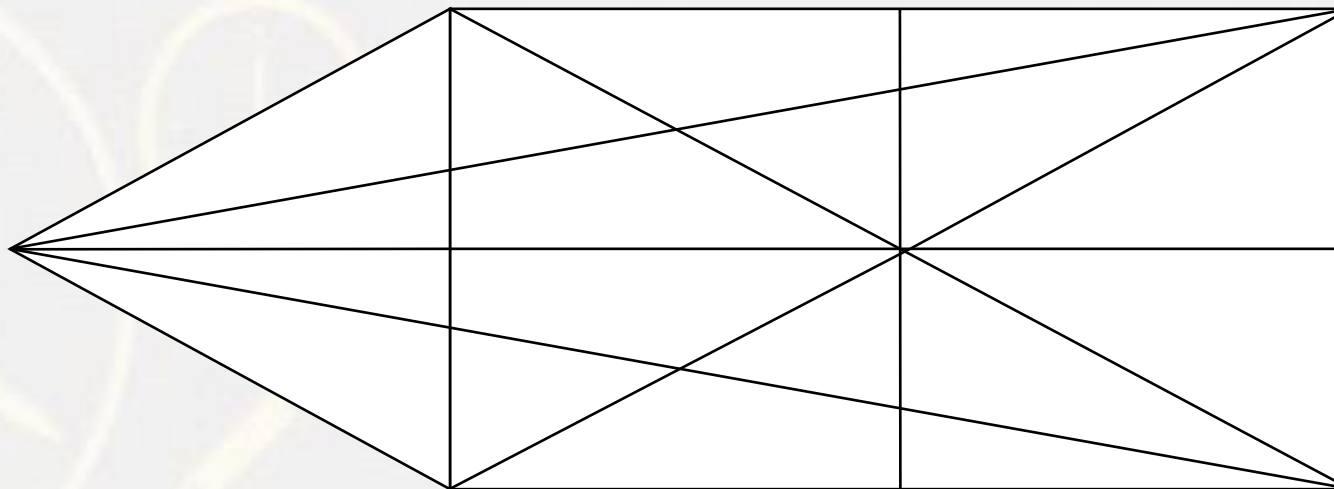
12 is right ans

👍 🗨️ 📄 ▾ 📄 REPLY

▶ [View reply from Mahendras : Online Videos For Govt. Exams](#)

Find number of straight line in figure?

- (A) 10
- (B) 11
- (C) 12
- (D) 13



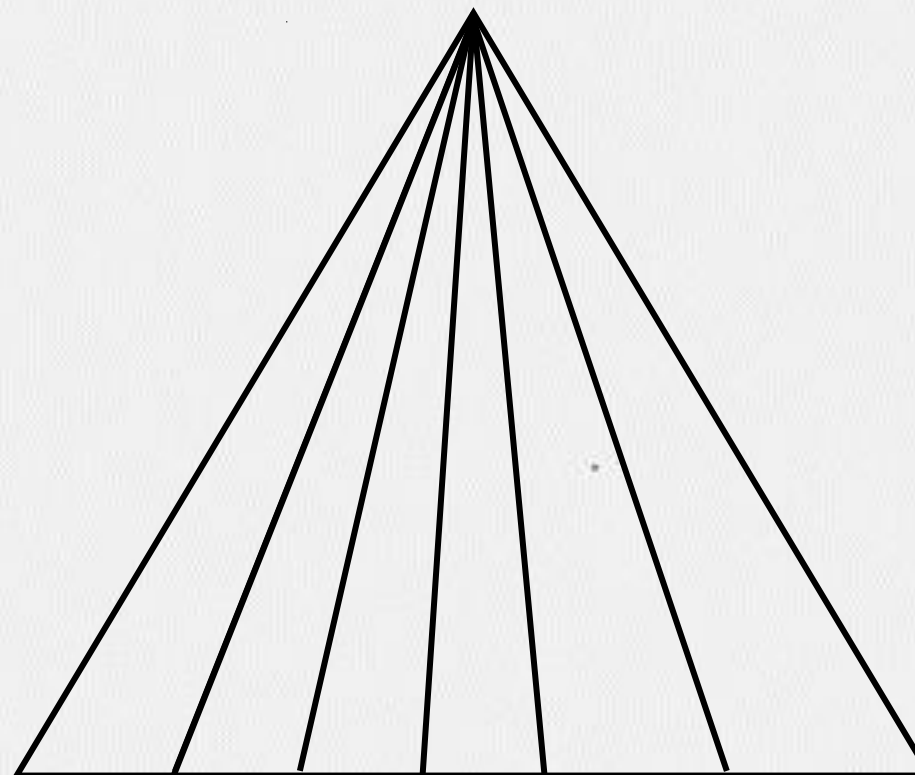
Find number of triangle in figure?

(A) 20

(B) 24

(C) 21

(D) 23



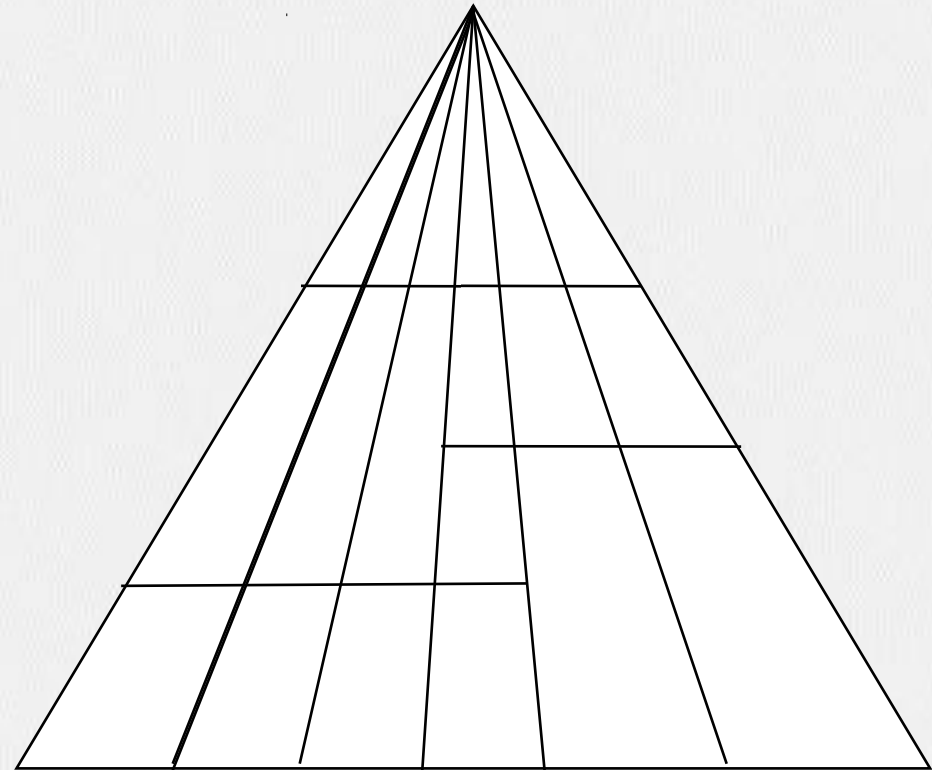
Find number of triangle in figure?

(A) 50

(B) 42

(C) 58

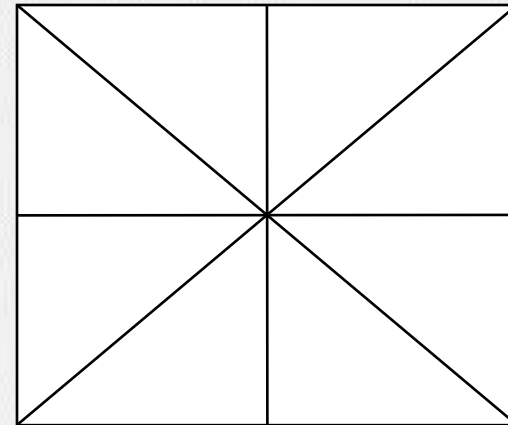
(D) NOT



Find number of triangle in the given figure ?

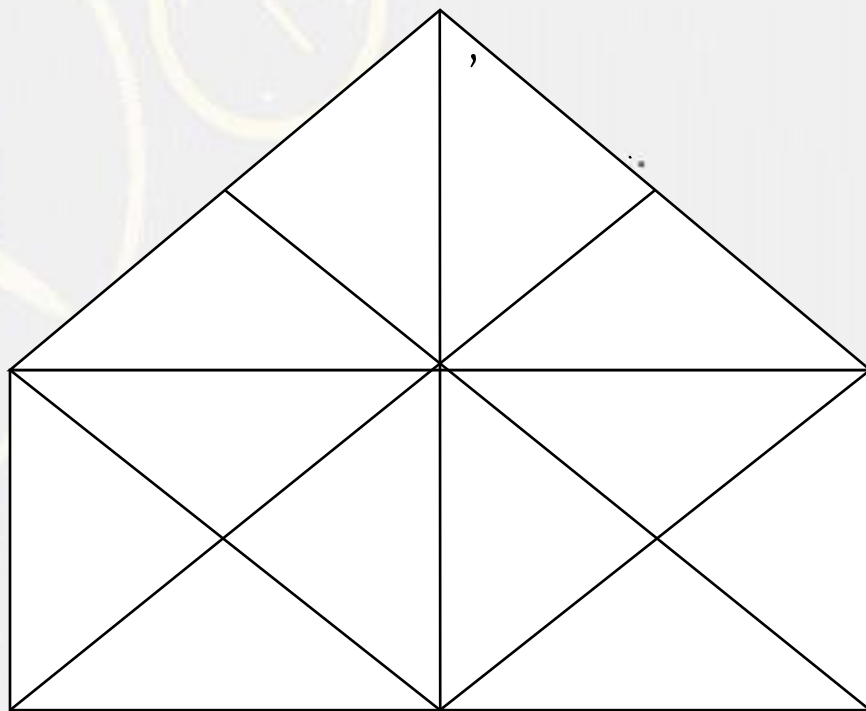
दी गई आकृति में त्रिभुज की संख्या ज्ञात कीजिए?

- (A) 20**
- (B) 18**
- (C) 28**
- (D) 16**



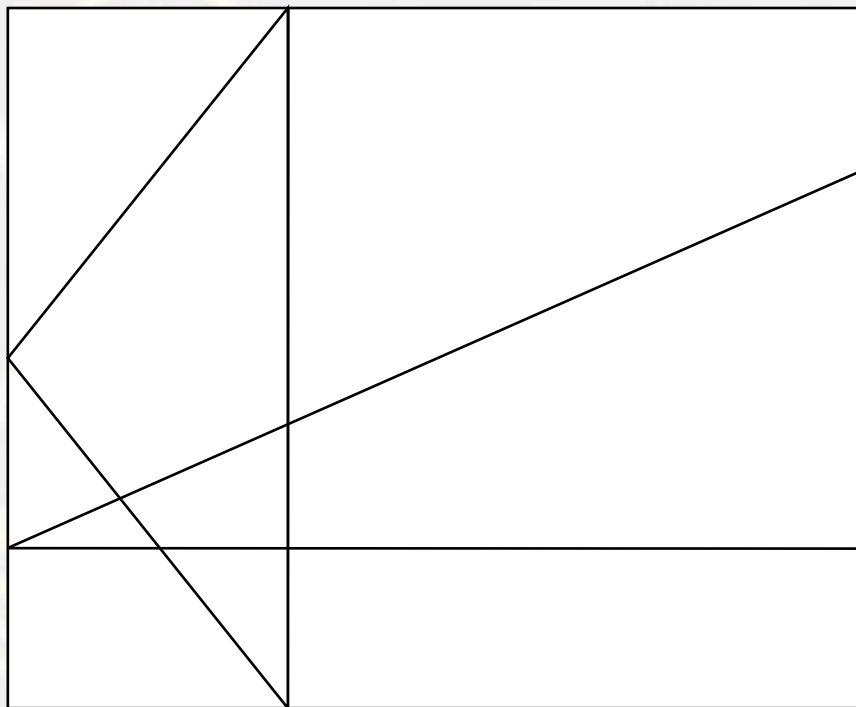
Find the triangle (?)

- (A) 30
- (B) 28
- (C) 27
- (D) 24



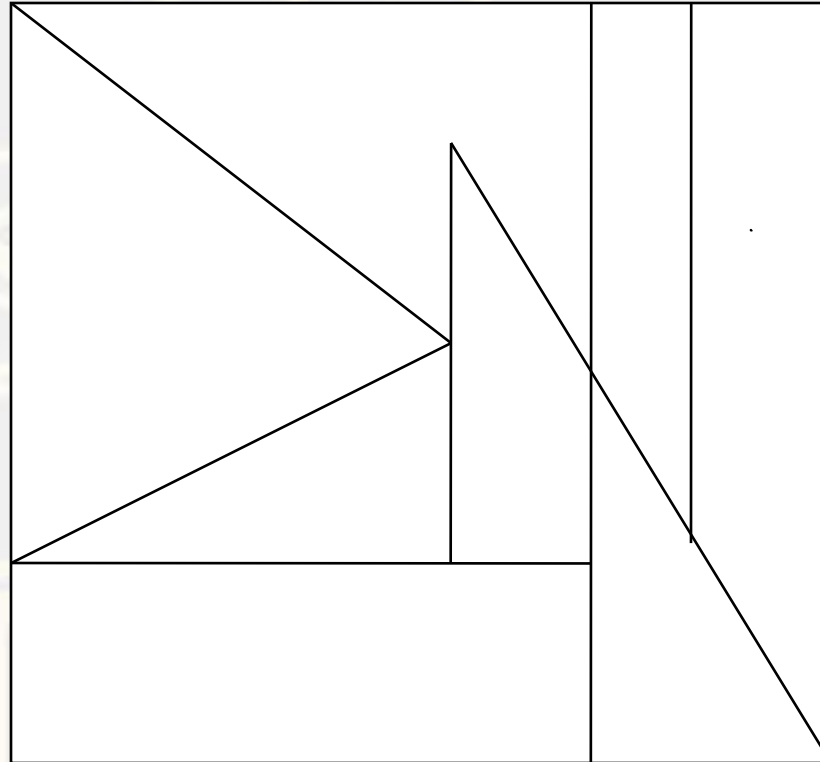
Find number of triangle in figure?

- (A) 11
- (B) 10
- (C) 8
- (D) NOT



Find the TRIANGLE :-

- (A) 3
- (B) 1
- (C) 4
- (D) 2



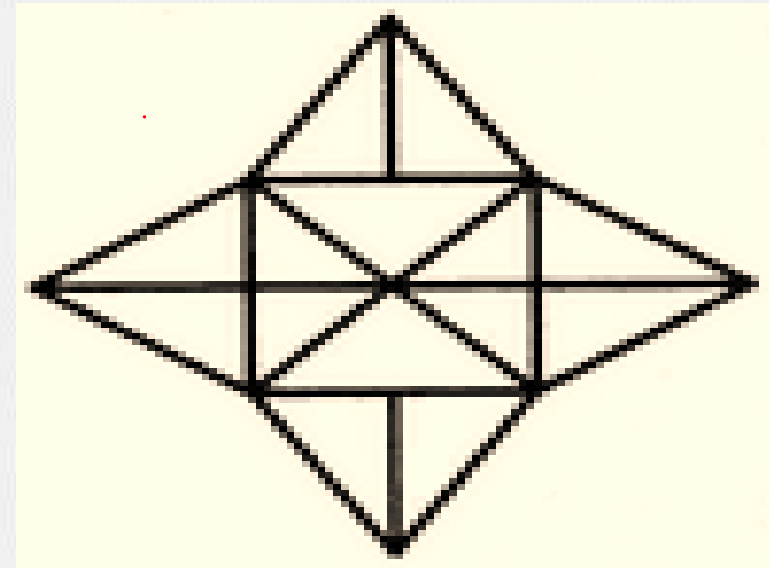
Find number of triangle in figure?

(A) 18

(B) 28

(C) 20

(D) 32



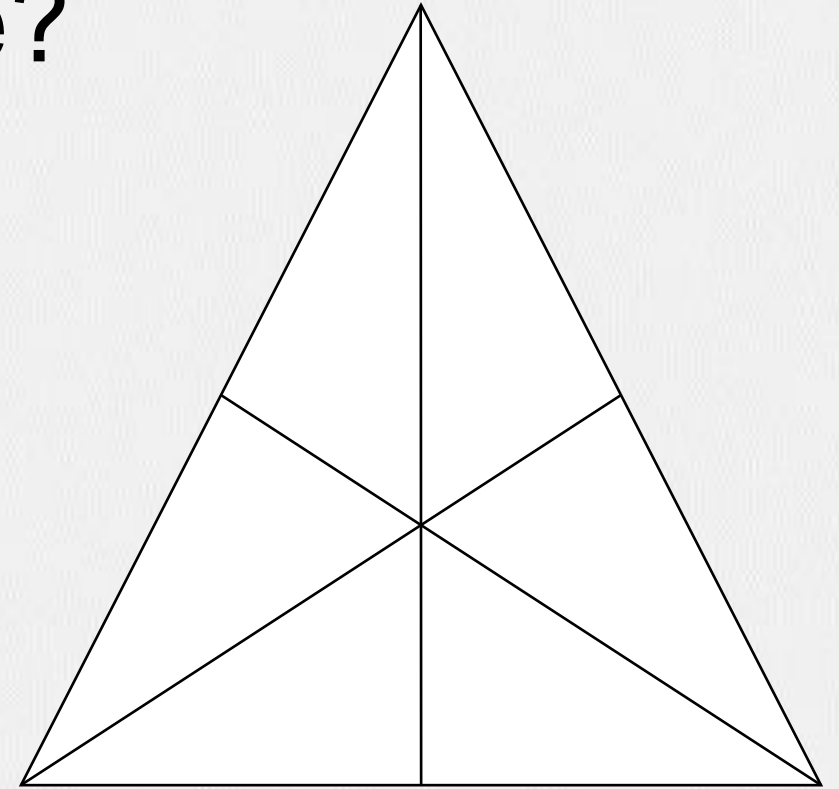
Find number of triangle in figure?

(A) 20

(B) 24

(C) 16


(D) 25



Find number of triangle in the given figure ?

दी गई आकृति में त्रिभुज की संख्या ज्ञात कीजिए?

- (A) 20
- (B) 31
- (C) 17
- (D) NOT



Find number of square in the given figure ?

(A) 32

(B) 30

(C) 29

(D) 28



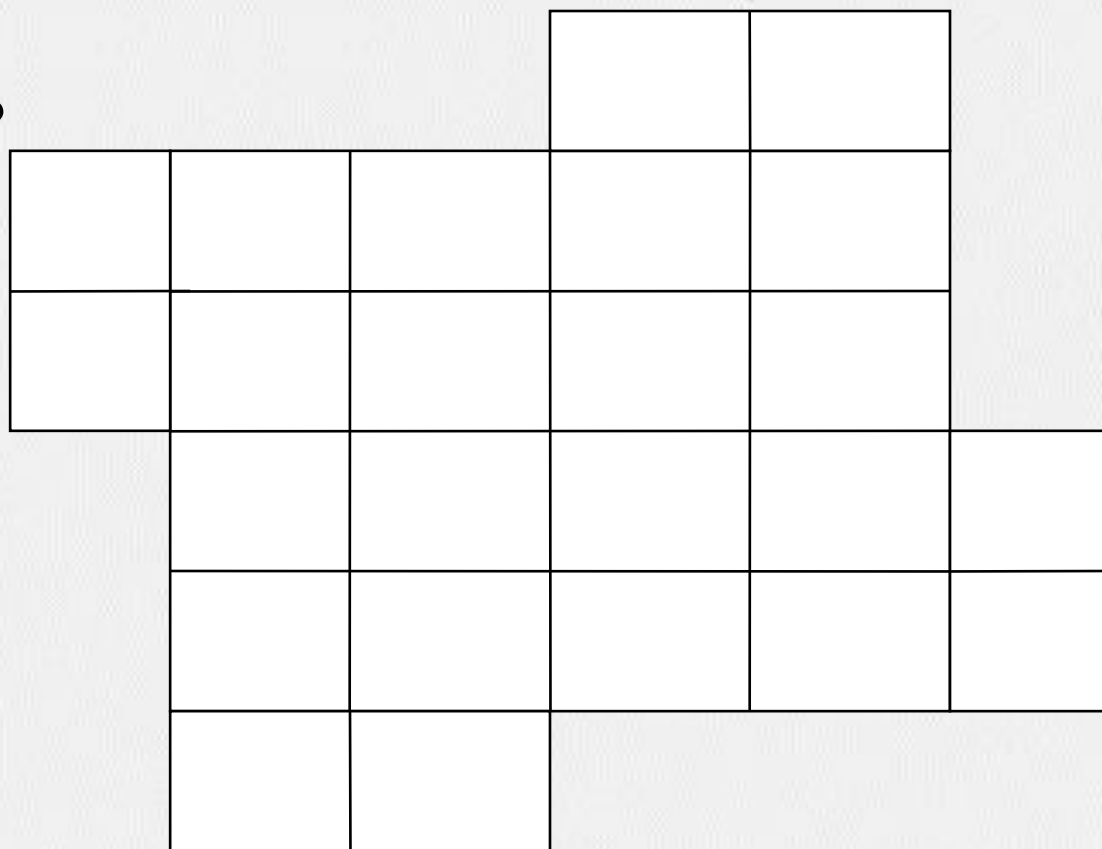
Find number of square in the given figure ?

(A) 42

(B) 30

(C) 49

(D) 28



Find the triangle (?)

- 1. 16
- 2. 18
- 3. 19
- 4. 20

