

RAILWAY GROUP D

 Mahendra's

REASONING



≡ अंतिम प्रहार ≡

EXPECTED QUESTIONS

LIVE | 08:30 PM





UPCOMING ONLINE BATCHES

August 2022

03 AUG 2022

03:00 PM to 05:00 PM

BANK ONLINE LIVE CLASS

01:00 PM to 03:00 PM

SSC ONLINE LIVE CLASS

BILINGUAL

10 AUG 2022

05:30 PM to 07:30 PM

BANK ONLINE LIVE CLASS

08:00 AM to 10:00 AM

SSC ONLINE LIVE CLASS

BILINGUAL

17 AUG 2022

08:00 AM to 10:00 AM

BANK ONLINE LIVE CLASS

05:30 PM to 07:30 PM

SSC ONLINE LIVE CLASS

BILINGUAL

24 AUG 2022

07:30 PM to 09:30 PM

BANK ONLINE LIVE CLASS

10:30 AM to 12:30 PM

SSC ONLINE LIVE CLASS

BILINGUAL

31 AUG 2022

10:30 AM to 12:30 PM

BANK ONLINE LIVE CLASS

07:30 PM to 09:30 PM

SSC ONLINE LIVE CLASS

BILINGUAL

10 AUG 2022

02:00 PM to 04:00 PM

BANK ONLINE LIVE CLASS

BENGALI+ENGLISH

31 AUG 2022

06:30 PM to 08:30 PM

BANK ONLINE LIVE CLASS

BENGALI+ENGLISH



www.mahendras.org



7052477777/7052577777



Ankit Vish 6 hours ago 249 subscribers

Answer. DDD

Nice session sir 🙏🙏

Logic total divided by 3

👍 1 🗨️ REPLY ▶️

▶️ [View reply from Mahendras : Online Videos For Govt. Exams](#)



🌸 PUJA KUNDU 🌸 ----- 17 hours ago 7 subscribers

The answer is -E P K.... $5+16+11=32$...not divided by 3.....baki sabhi ka place value ka total divided by 3 hai....21..51. 39....thank you sir for the amazing session 🔥 🙏

👍 1 🗨️ REPLY ▶️

▶️ [View reply from Mahendras : Online Videos For Govt. Exams](#)



DEEKSHA SHARMA 16 hours ago

Home work answer is aa

Logic: $1*4=4=D$, $4*4=16=p$

Very nice session sir ji 🙏🙏🙏

👍 🗨️ REPLY ▶️

▶️ [View reply from Mahendras : Online Videos For Govt. Exams](#)



Surbhi Sinha 17 hours ago

PIN 100 100

👍 🗨️ REPLY ▶️



khushbu 17 hours ago

aaaa



REPLY



▼ [View reply from Mahendras : Online Videos For Govt. Exams](#)



vedant yaduwanshi 16 hours ago (edited)

Epk



REPLY



Puspranjan singh 17 hours ago 1 subscribers

Pin



REPLY



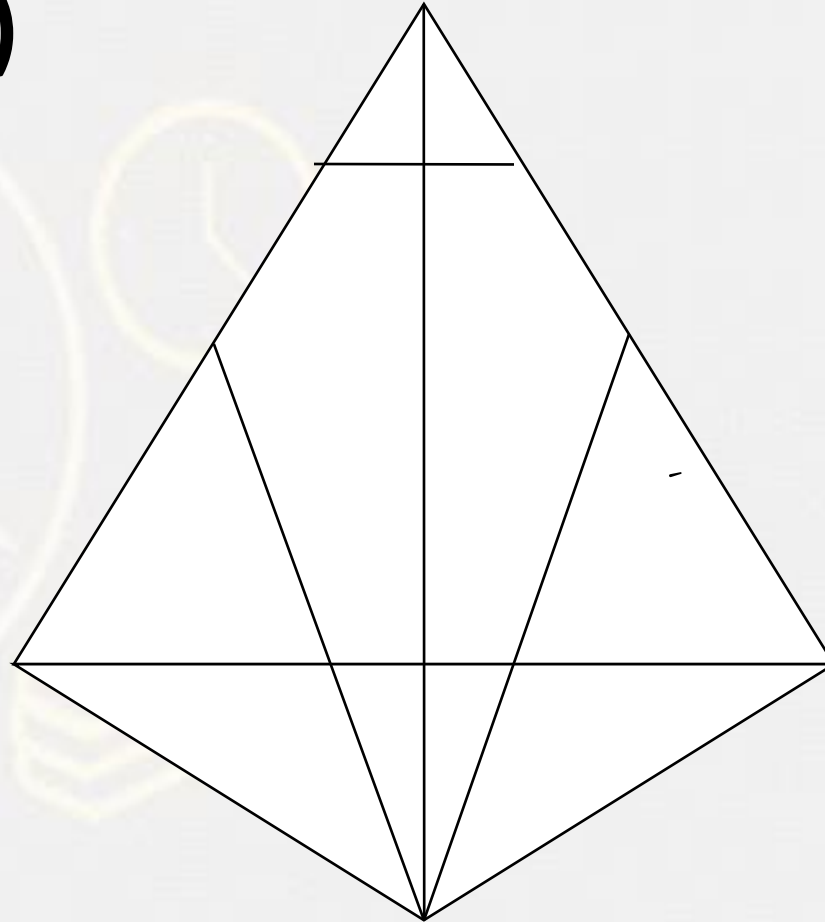
Find the odd one (?)

- 1. ADP**
- 2. LOX**
- 3. PIN**
- 4. EPK**



Find the TRIANGLE (?)

- 1. 30**
- 2. 24**
- 3. 22**
- 4. 20**



Find the odd one (?)

1. LU
2. FP
3. JS
4. BK



Find the MISSING (?)

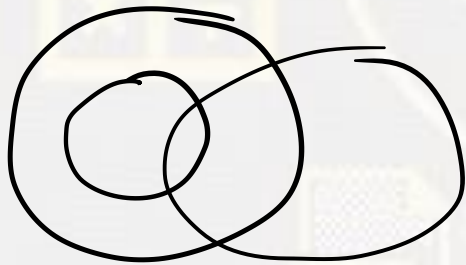
1. 12
2. 18
3. 17
4. 15

| | | |
|----|---|---|
| 3 | 4 | 5 |
| 8 | 7 | 3 |
| 6 | 3 | 8 |
| 16 | ? | 9 |

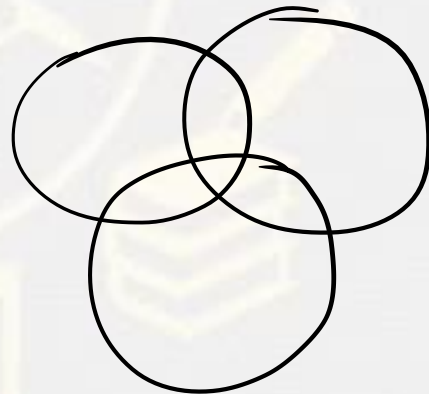


Find the missing (?)

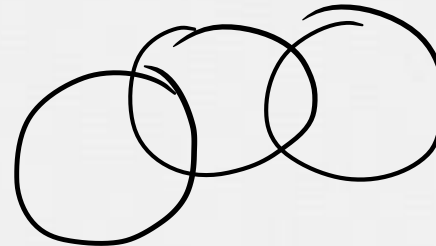
Parents , Rich person , Farmers / **माता-पिता, अमीर व्यक्ति, किसान**



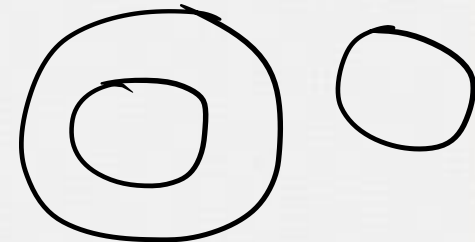
(A)



(B)

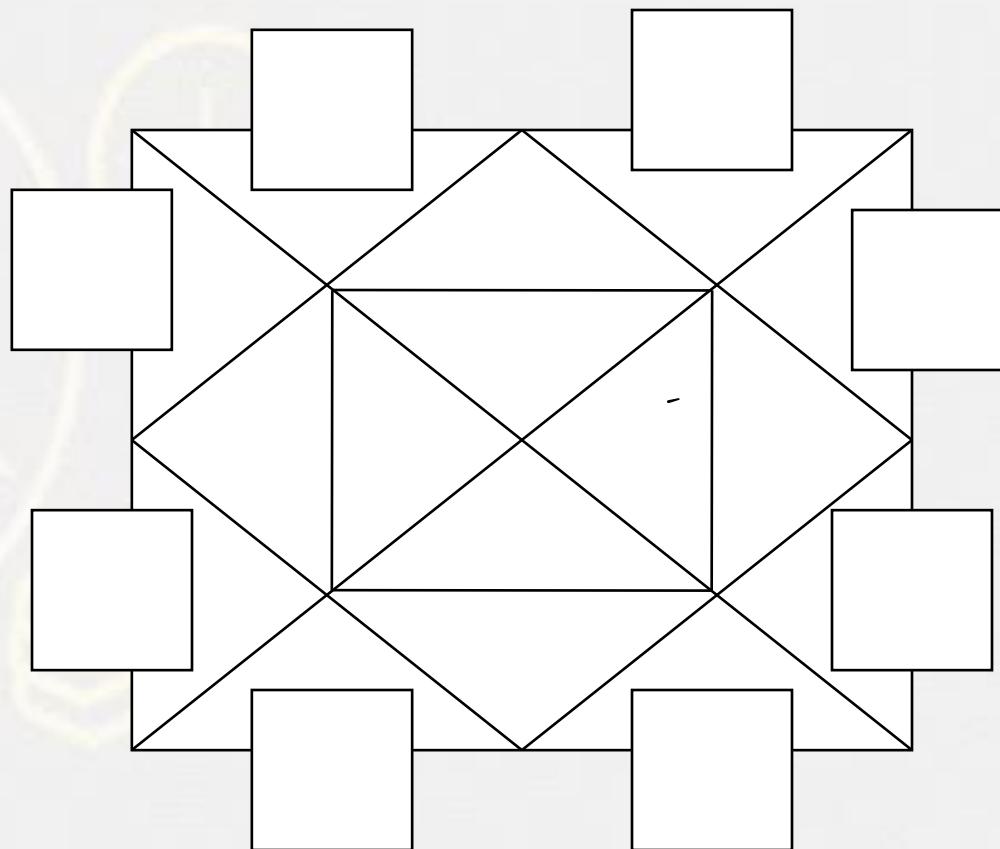


(C)



(D)

Find the square (?)



- 1. 12
- 2. 14
- 3. 15
- 4. None

Find the missing (?)

CHANCE : 10 :: FASTER : ?

1. 25
2. 22
3. 17
4. 12



Find the missing (?)

Book : Publisher :: Film : ?

पुस्तक : प्रकाशक :: फ़िल्म : ?



1. Writer / लेखक
2. Director / निर्देशक
3. Editor / संपादक
4. Producer / निर्माता

Find the MISSING (?)

169 : 10 :: 144 : ?

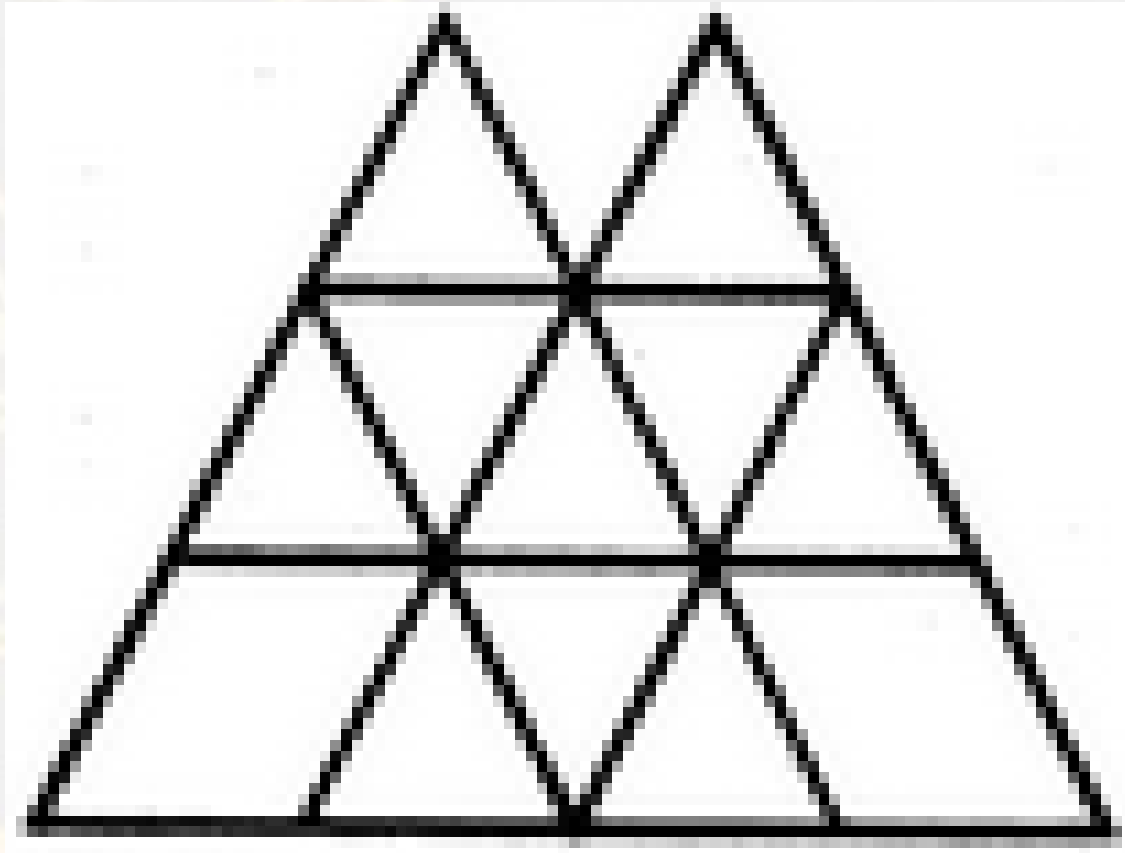
1. 8
2. 12
3. 18
4. 6



Find number of triangle in the given figure ?

दी गई आकृति में त्रिभुज की संख्या ज्ञात कीजिए?

- A.16
- B.18
- C.14
- D.15



Find the odd (?)

- 1. M 25 H**
- 2. J 16 G**
- 3. R 49 K**
- 4. K 49 D**



From the given alternative words, select the word which can be formed using the letters of the give word :

दिए गए वैकल्पिक शब्दों से, उस शब्द का चयन करें जिसे शब्द के अक्षरों का उपयोग करके बनाया जा सकता है:

INDETERMINATES

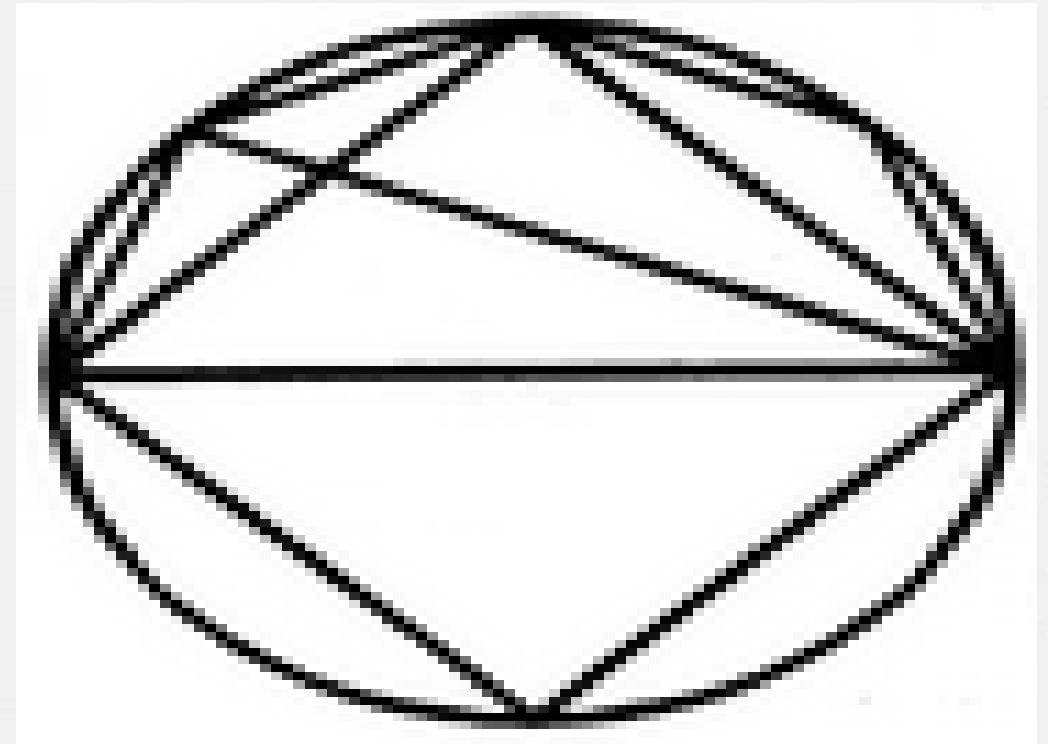
- (1) PRETINA
- (2) RWEMIND
- (3) RETINUE
- (4) DETERMINE



Find the number of triangle (?)

दी गई आकृति में त्रिभुज की संख्या ज्ञात कीजिए?

- (A) 8
- (B) 10
- (C) 11
- (D) 12



Find the MISSING (?)



Current : 3 hour 8 hour :: water : ?

- 1. 11 hour : 6 hour**
- 2. 21 hour : 12 hour**
- 3. 1 hour : 6 hour**
- 4. NOT**

Pinki ranks 16th from the top and 15th from the bottom in a class. How many students are there in the class?

पिंकी एक कक्षा में 16 वीं और नीचे से 15 वीं रैंक पर है। वहाँ कक्षा में कितने छात्र हैं?

- 1. 30**
- 2. 31**
- 3. 32**
- 4. Cannot be determined /निर्धारित नहीं किया जा सकता है**



Find the missing :-

Aman = 42

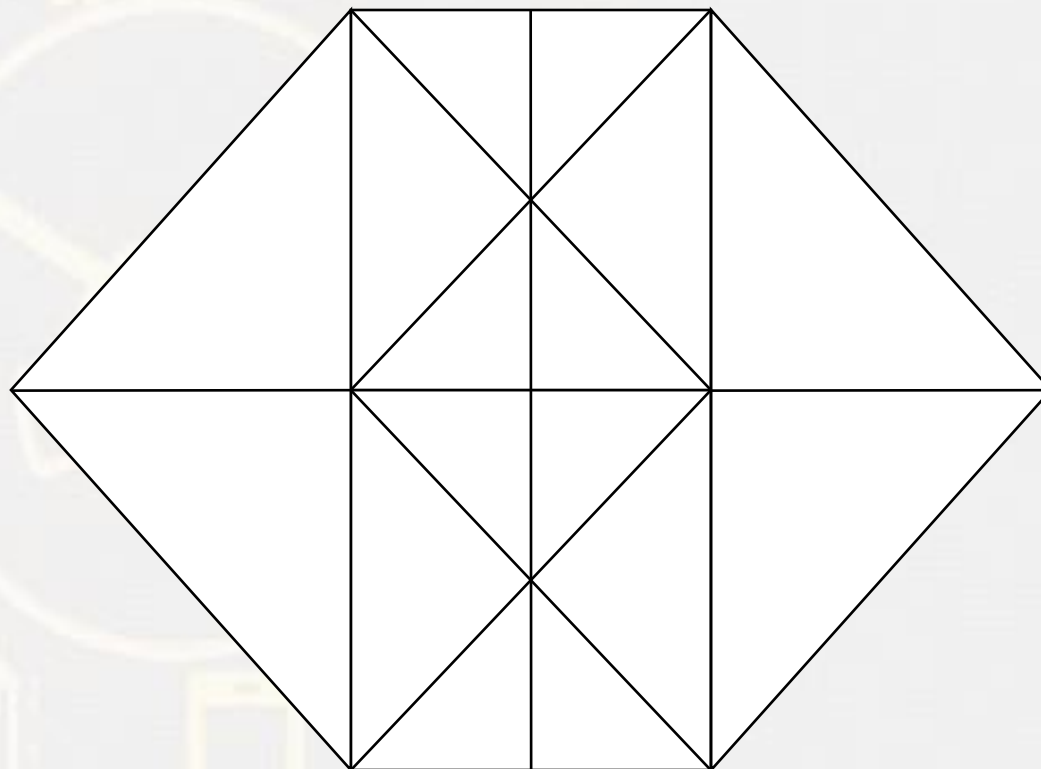
Shivam = 62

Bhim = ?

1. 32
2. 41
3. 55
4. 64



Find the number of triangle (?)



- (A) 30**
- (B) 34**
- (C) 38**
- (D) 32**

Find the option which should replace (?)



25 : 64 :: 35 : ?

- (A) 64**
- (B) 81**
- (C) 72**
- (D) 100**

Find the option which should replace (?)

E L B M A G

1 2 3 4 5 6

- A. 2, 1, 6, 3, 4, 5**
- B. 6, 1, 2, 3, 1, 5**
- C. 4, 1, 6, 2, 5, 1**
- D. 6, 5, 4, 3, 2, 1**



Find the option which should replace (?)

TEDDY : 27 :: THREE : ?

- A. 50
- B. 42
- C. 49
- D. 25

