



SSC MTS 2022-23



REASONING

SESSION-I

TOP 50

PREVIOUS YEAR QUESTIONS



📡 LIVE | 03:00 PM

BY KULDEEP MAHENDRAS



UPCOMING ONLINE BATCHES

February 2023

08 FEB 2023

03:00 PM to 05:00 PM

SSC ONLINE LIVE CLASS

BILINGUAL

15 FEB 2023

10:30 AM to 12:30 PM

BANK ONLINE LIVE CLASS

BILINGUAL

15 FEB 2023

06:30 PM to 08:30 PM

BANK ONLINE LIVE CLASS

English & Bengali



www.mahendras.org •  7052477777/7052577777



14.6 Computer Based Examination:

Part	Subject	Number of Questions/ Maximum Marks	Time Duration (For all four Parts)
Session-I			45 Minutes (60 Minutes for candidates eligible for scribes as per para 8)
I	Numerical and Mathematical Ability	20/60	
II	Reasoning Ability and Problem Solving	20/60	
Session-II			45 Minutes (60 Minutes for candidates eligible for scribes as per para 8)
I	General Awareness	25/75	
II	English Language and Comprehension	25/75	



SSC MTS 2022-23

LIVE at 3:00 PM

	UR	OBC	SC	ST	EWS	TOTAL	ESM	OH	HH	VH	OTHERS
MTS AGE GROUP 18-25	4115	2505	1051	679	979	9329	979	104	131	119	58
MTS AGE GROUP 18-27	1085	723	358	216	283	2665	222	36	36	32	18
Havaldar in CBIC	201	143	106	29	50	529	53	8	7	0	6
Grand Total	5401	3371	1515	924	1312	12523	1254	148	174	151	82

LIVE at 3:00 PM



Suruchi Jha 2 days ago

Home work answer option C thankyou sir 🙏



Reply



▼ 1 reply



Surbhi Sinha 2 days ago 4 subscribers

Homework question answer 🙏 option AAAAAA



Reply



▼ 1 reply



Zikra Yasmeen 2 days ago

Option A



Reply



▼ 1 reply



Sonali Mishra 2 days ago

Answer of homework question is option A



Reply



▼ 1 reply



Find the missing term(?)

(14 , 25 , 49) :: ?

(A) (7 , 49 , 144)

(B) (9 , 81 , 64)

(C) (12 , 9 , 81)

(D) (8 , 64 , 81)





Find the missing term(?)

17 : 64 :: 58 : ?

- (A) 138**
- (B) 169**
- (C) 126**
- (D) 621**





SSC MTS 2022-23

LIVE at 3:00 PM

Find the odd one (?)

- (A) 500**
- (B) 661**
- (C) 200**
- (D) 471**





SSC MTS 2022-23

LIVE at 3:00 PM

Find the missing one (?)

AGE : 75 :: DIP : ?



- (A) 345**
- (B) 248**
- (C) 353**
- (D) 286**



SSC MTS 2022-23

LIVE at 3:00 PM

Find the odd one (?)

- (A) GJ - 24**
- (B) AF - 120**
- (C) MQ - 60**
- (D) BH - 120**





Which number will replace the question mark ?

268	29	210
218	?	166

- (A) 42**
- (C) 26**

- (B) 25**
- (D) 29**





Find the missing term(?)

REDUCE = 21

RECYCLE = 25

REUSE = ?



(A) 21

(B) 25

(C) 69

(D) 70



Find the missing term(?)

3, 10, 101, ?

- A. 10101**
- B. 10201**
- C. 10202**
- D. 11012**





SSC MTS 2022-23

LIVE at 3:00 PM

Find the missing term(?)

Town : Country :: Earth : ?
नगर : देश :: पृथ्वी : ?



- (A) World / दुनिया**
- (B) Solar System / सौर मंडल**
- (C) Ocean / महासागर**
- (D) Planet / ग्रह**



SSC MTS 2022-23

LIVE at 3:00 PM

Find the missing term(?)

First : Last :: Trust : ?

पहला : आखिरी :: भरोसा : ?



(A) Enmity / दुश्मनी

(B) Cheat / धोखा

(C) Hate / नफरत

(D) Dis- obedient / अवज्ञाकारी



SSC MTS 2022-23

LIVE at 3:00 PM

Find the missing term(?)

When : Where :: Time : ?

कब : कहां :: समय : ?



(A) Money / पैसा

(B) Day / दिन

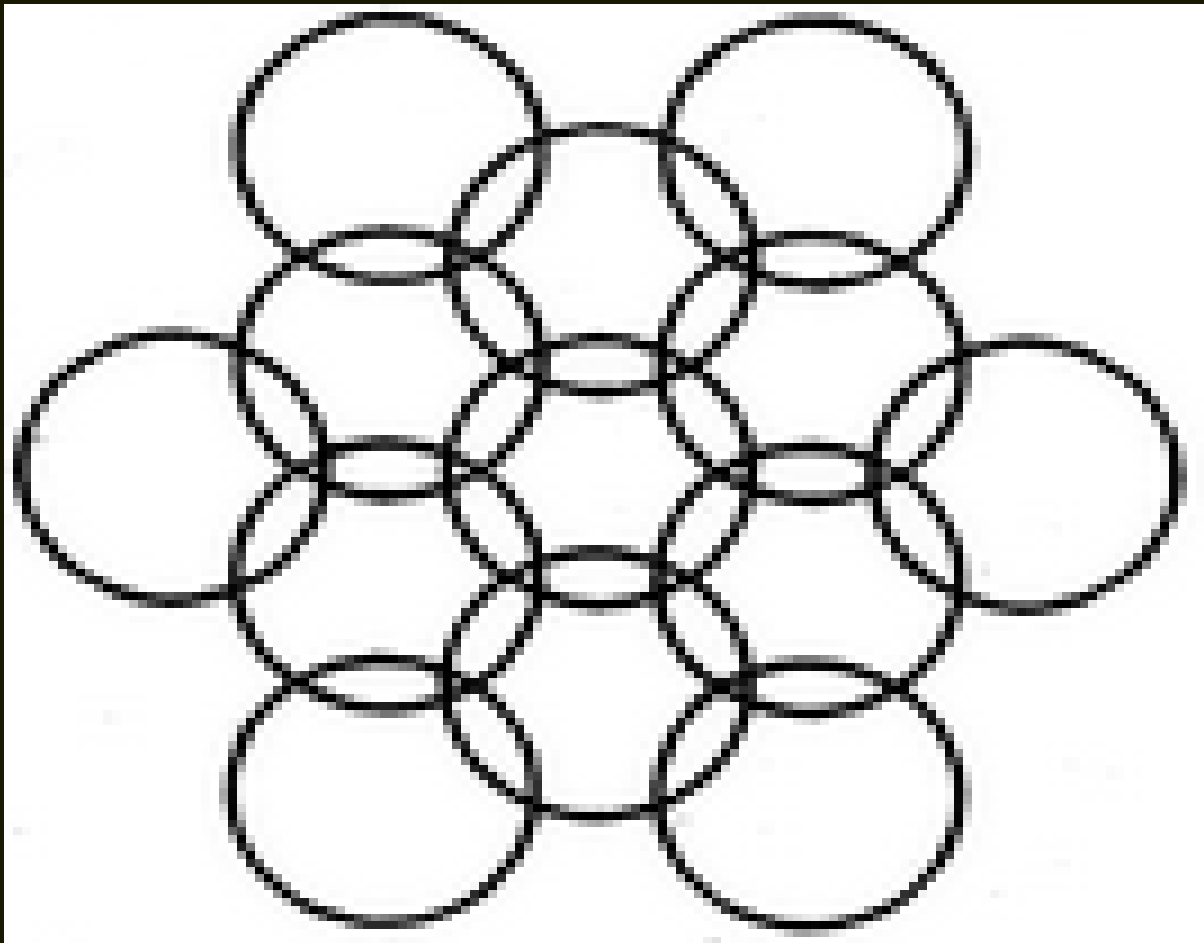
(C) Look / देखो

(D) Place / जगह



Find the number of circle (?)

- (A) 11**
- (B) 13**
- (C) 15**
- (D) 17**





Find the missing one (?)

$$37 * 25 = 7$$

$$95 * 37 = 5$$

$$87 * 85 = 15$$

$$27 * 41 = ?$$



- (A) 9
- (B) 7
- (C) 12
- (D) 13



SSC MTS 2022-23

LIVE at 3:00 PM

Find the missing term(?)

BCJ / O : AFK / R : CDE / L : ?

- (A) DEF / P**
- (B) DEF / M**
- (C) TAC / X**
- (D) CET / E**





SSC MTS 2022-23

LIVE at 3:00 PM

Find the missing term(?)

_ XX _ Y _ XYYX _ Y




- (A) YYXY**
- (B) YXYX**
- (C) XYYX**
- (D) YYXX**



Find the number of triangle (?)

- (A) 27**
- (B) 64**
- (C) 18**
- (D) 25**





Find the missing term(?)

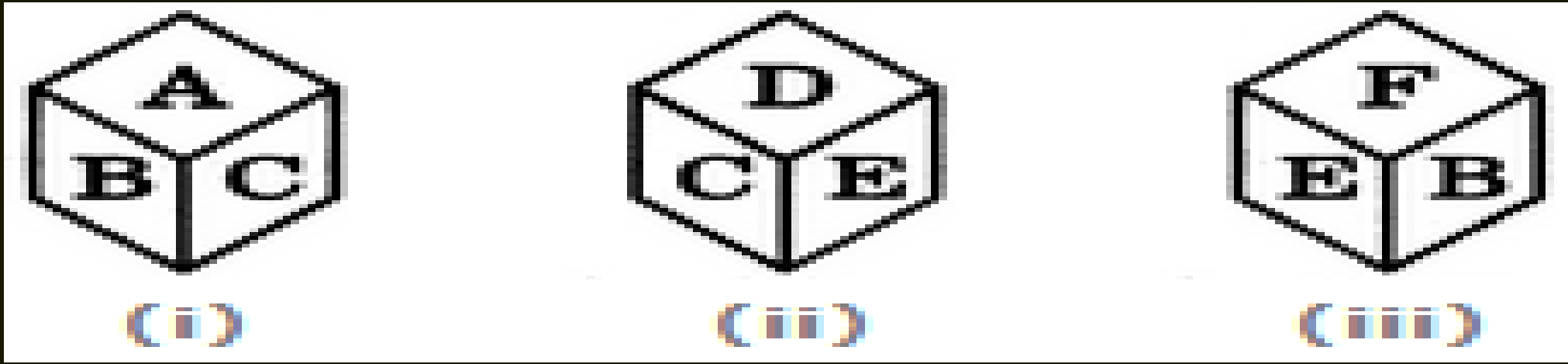
Green Revolution : Plants :: Grey Revolution : ?
हरित क्रांति: पौधे :: ग्रे क्रांति:?

- (A) Poultry / पोल्टी**
- (B) Fertilizers / उर्वरक**
- (C) Animals / पशु**
- (D) Forests / वन**





A dice is thrown four times and its three different positions are shown below. Find the number on the face opposite the face showing A



- A. B
- B. C
- C. E
- D. F





Find number of cube in the given figure ?

दी गई आकृति में घन की संख्या ज्ञात कीजिए?

- (A) 34
- (B) 35
- (C) 31
- (D) 15

