

# RRB NTPC CBT 2/GROUP D



## REASONING

अबकी बार **RAILWAY** पार

Complete Revision



LIVE 7:30 PM





# Don't Let Your Studies Get Impacted By COVID-19 Pandemic

Stay Home & Study Online With Mahendras Hybrid Model

## Features



Offline Classes



Live Interactive Online Classes



Same Faculty



Same Batch



Same Batch Timing



Online Library Facility



Recorded Video



PDFs



Classes In Both Model

CONTACT US:

1800-103-5225

[www.mahendras.org](http://www.mahendras.org)





# UPCOMING ONLINE BATCHES

## February 2022

02 Feb 2022

08:00 AM to 10:00 AM

**BANK ONLINE LIVE CLASS**

05:30 PM to 07:30 PM

**BANK ONLINE LIVE CLASS**

01:00 PM to 03:00 PM

**SSC ONLINE LIVE CLASS**

10:30 AM to 12:30 PM

**SSC ONLINE LIVE CLASS**

**BILINGUAL**

09 Feb 2022

10:30 AM to 12:30 PM

**BANK ONLINE LIVE CLASS**

03:00 PM to 05:00 PM

**BANK ONLINE LIVE CLASS**

08:00 AM to 10:00 AM

**SSC ONLINE LIVE CLASS**

05:30 PM to 07:30 PM

**SSC ONLINE LIVE CLASS**

**BILINGUAL**

16 Feb 2022

01:00 PM to 03:00 PM

**BANK ONLINE LIVE CLASS**

08:00 AM to 10:00 AM

**BANK ONLINE LIVE CLASS**

07:30 PM to 09:30 PM

**SSC ONLINE LIVE CLASS**

03:00 PM to 05:00 PM

**SSC ONLINE LIVE CLASS**

**BILINGUAL**

23 Feb 2022

10:30 AM to 12:30 PM

**BANK ONLINE LIVE CLASS**

07:30 PM to 09:30 PM

**BANK ONLINE LIVE CLASS**

08:00 AM to 10:00 AM

**SSC ONLINE LIVE CLASS**

01:00 PM to 03:00 PM

**SSC ONLINE LIVE CLASS**

**BILINGUAL**

# RRB NTPC Stage-2 Exam Pattern

Sections	No. of Questions	Total Marks	Duration
Mathematics	35	35	90 minutes
General Intelligence and Reasoning	35	35	
General Awareness	50	50	
<b>Total</b>	<b>120</b>	<b>120</b>	



🌸 PUJA KUNDU 🌸 14 hours ago

18 📌 📌 📌 .....superb session sir 🔥 🔥 thank you sir for the session 🙏

👍 🗨️ 📌 ▼ 📌 REPLY



RASHMI SONI 📌 ✍️ 14 hours ago

ANSWER OF THE DAY, 18  
AWESOME SESSION 👍 😎

👍 🗨️ 📌 ▼ 📌 REPLY



SANIA \_\_\_\_\_ 3 hours ago

awesome session sir 🙏  
18 🔥 🔥 🔥

👍 🗨️ 📌 ▼ 📌 REPLY



arun ch mandal 12 hours ago

ANS -18  
NICE CLASS SIR  
THANK YOU SIR

👍 🗨️ 📌 ▼ 📌 REPLY



Viśhñù Güptâ 14 hours ago

18 right ans  
Very dhashu session sir thank you 🙏 sir love ❤️ you sir

👍 🗨️ 📌 ▼ 📌 REPLY



Ankit Vish 14 hours ago

Answer 18

Very nice session sir 🙏🙏

1 [REPLY](#)



Chhavi Saxena 14 hours ago

Home work answer is 18

Nice session sir 🙏🙏

[REPLY](#)



Kishore Bera 13 hours ago

Ans - 18.

Thank you sir.

[REPLY](#)



puspranjan singh 14 hours ago

Nice session sir

[REPLY](#)



DEEKSHA SHARMA 14 hours ago

Home work answer is 18

[REPLY](#)



ROHIT GOND 14 hours ago

१८ त्रिकोण

REPLY



suraj 13 hours ago

18

REPLY



puspranjan singh 14 hours ago

18


REPLY



Mirza Sahil jatt 14 hours ago

18

REPLY



Ashwini Kumar 13 hours ago (edited)

18 iam boy

REPLY




Viśhñù Güptâ 14 hours ago

Puja ji kya aap and meAns deti h isliye aap ka name 1st pe aata hai

REPLY

**Find the number of triangles in the given figure.**



- A. 11**
- B. 17**
- C. 16**
- D. 18**



**In which year 2011 calender will be repeated :-**

**किस वर्ष में 2011 कैलेंडर दोहराया जाएगा: -**

- (A) 2020**
- (B) 2021**
- (C) 2022**
- (D) 2023**



Find the missing one (?)

**CANADA :: BZMBEB**

**SYDNWY :: ?**

**A. RXOCFZ**

**B. OFZRXC**

**C. RXCOFZ**

**D. ZFOCXR**



Find the missing one (?)



- A. 1
- B. 2
- C. 3
- D. 4

3	5
2	6
8	1

2	4
3	8
2	6

9	3
2	1
7	?

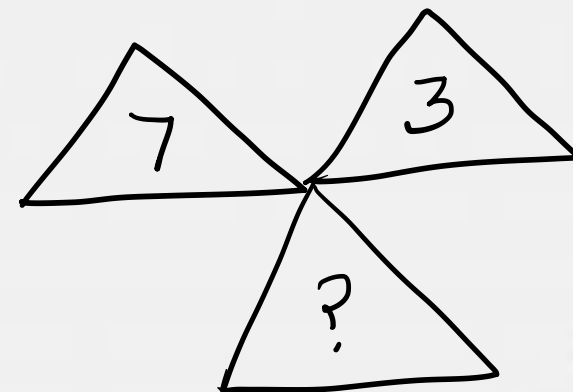
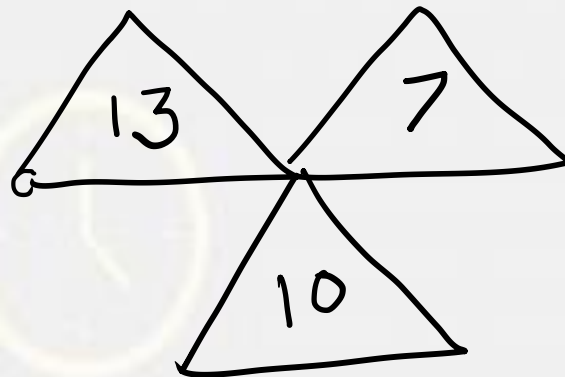
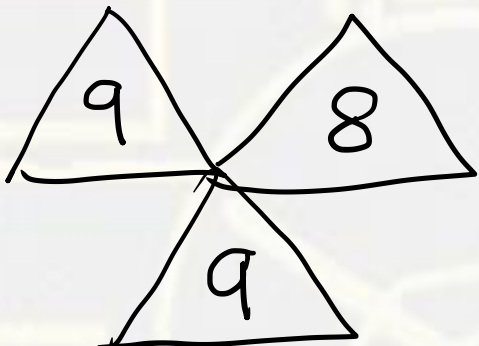
Find the option which should replace (?)

**a2 b3 z1 c4 y26 ?**

- A. e6**
- B. d5**
- C. f7**
- D. x5**



Find the option which should replace (?)



- A. 7
- B. 2
- C. 3
- D. 8



## Statement :-

Some machine are kite. / कुछ मशीन पतंग हैं।  
No machine is hero. / कोई मशीन हीरो नहीं है।

## Conclusion:-

Some Machine are hero. / कुछ मशीन हीरो हैं।  
All kites are hero. / सभी पतंग हीरो हैं।  
Some kite are hero. / कुछ पतंग हीरो हैं।



Find the option which should replace (?)

8, 3, 0, 5, ?

- A. 7
- B. 8
- C. 9
- D. 6



Find the option which should replace (?)

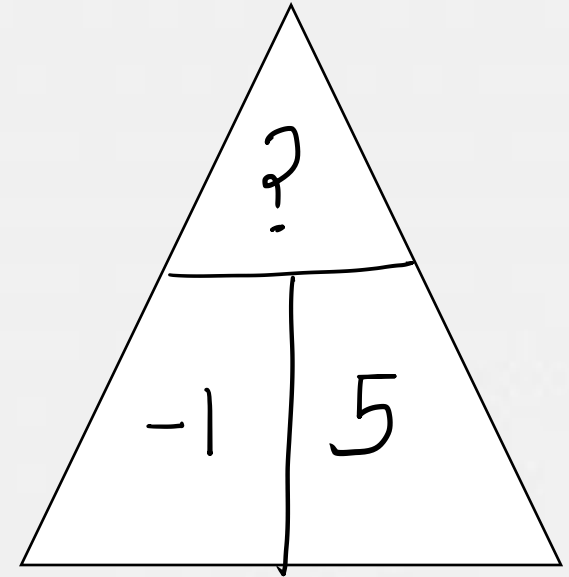
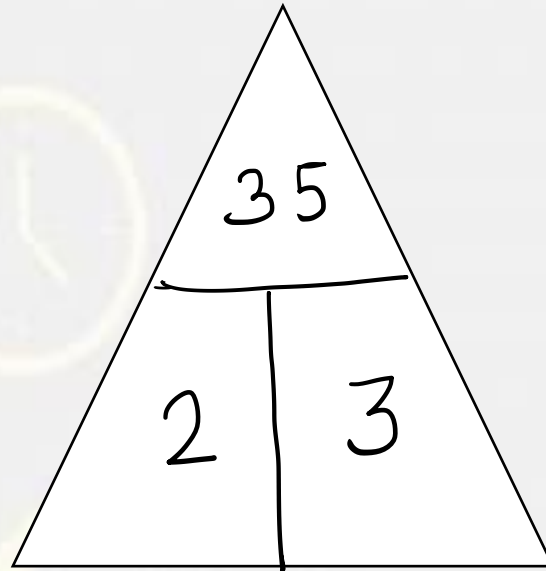
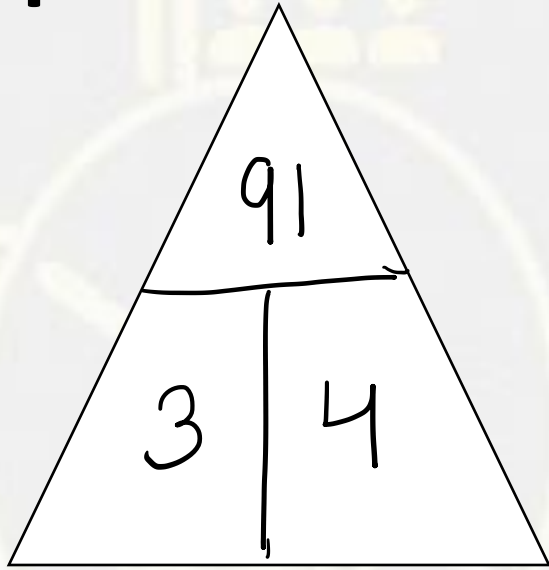
**Z, D, H, N, ?**

- A. R
- B. S
- C. T
- D. U





Find the option which should replace (?)



- A. 136
- B. 126
- C. 127
- D. 124



In a Certain code **DECISION** is written as

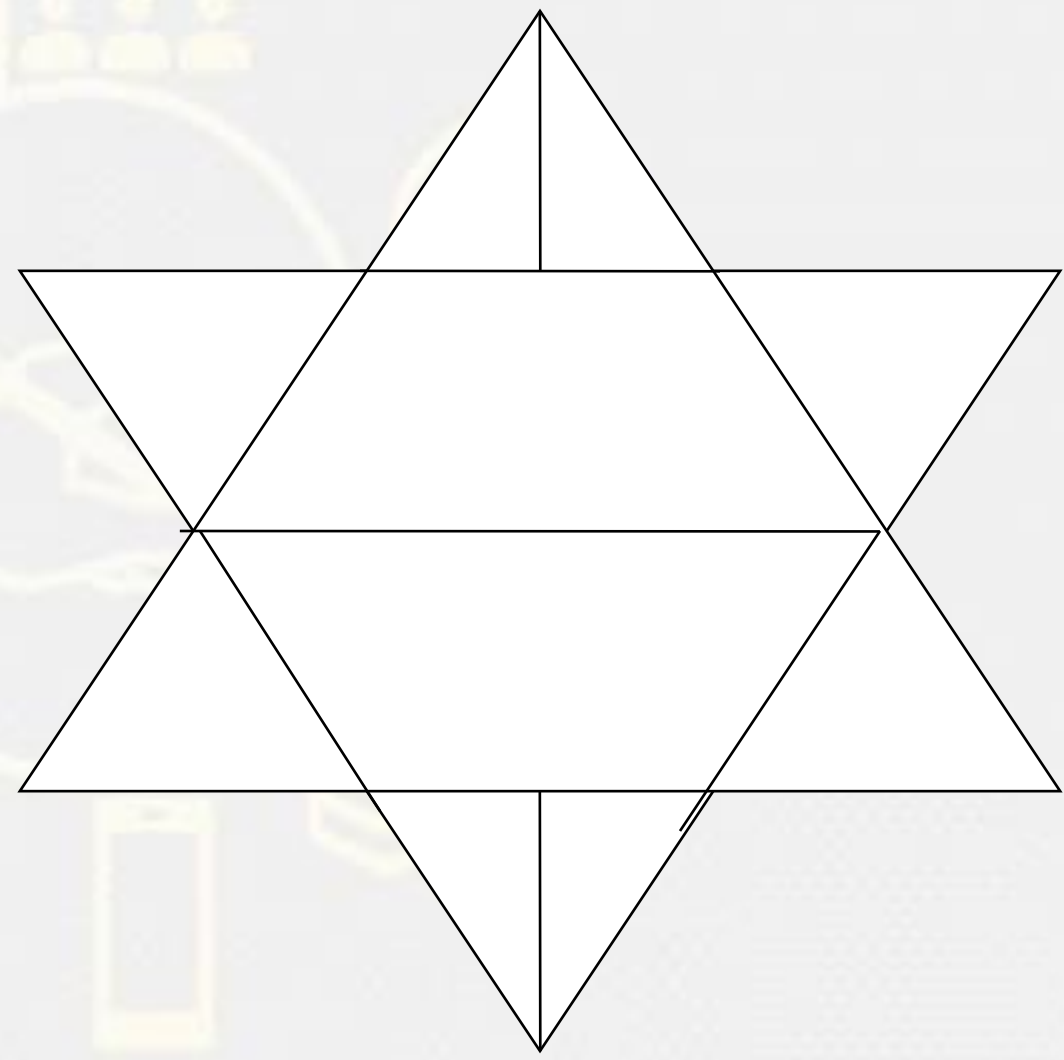
**232224188181213**, than find the code for **RELATION**?

एक निश्चित कोड में **DECISION** का कोड **232224188181213** लिखा गया है तो **RELATION** का कोड क्या होगा ?

- (1) 92215131218672
- (2) 91522267121318
- (3) 671812136251229
- (4) 67181213922152
- (5) 92215267181213



Find the number of triangles in the given figure.



- A. 10
- B. 16
- C. 18
- D. 14

**Find the odd one out(?)**

- A. Eye / आंख**
- B. Heart / दिल**
- C. Ear / कान**
- D. Kidney / गुर्दा**

