

RAILWAY GROUP D

 *Mahendra's*

REASONING



≡ अंतिम प्रहार ≡

EXPECTED QUESTIONS

LIVE | 08:30 PM





UPCOMING ONLINE BATCHES

July 2022

06 July 2022

05:30 PM to 07:30 PM

BANK ONLINE LIVE CLASS

03:00 PM to 05:00 PM

SSC ONLINE LIVE CLASS

BILINGUAL

06 July 2022

07:30 PM to 09:30 PM

BANK ONLINE LIVE CLASS

ENGLISH MEDIUM

06 July 2022

02:00 PM to 04:00 PM

SSC ONLINE LIVE CLASS

ENGLISH & BENGALI

13 July 2022

08:00 AM to 10:00 AM

BANK ONLINE LIVE CLASS

07:30 PM to 09:30 PM

SSC ONLINE LIVE CLASS

BILINGUAL

13 July 2022

09:15 AM to 11:15 AM

BANK ONLINE LIVE CLASS

ENGLISH & BENGALI

20 July 2022

01:00 PM to 03:00 PM

BANK ONLINE LIVE CLASS

10:30 AM to 12:30 PM

SSC ONLINE LIVE CLASS

BILINGUAL

27 July 2022

10:30 AM to 12:30 PM

BANK ONLINE LIVE CLASS

08:00 AM to 10:00 AM

SSC ONLINE LIVE CLASS

BILINGUAL

27 July 2022

07:00 AM to 09:00 AM

BANK ONLINE LIVE CLASS

ENGLISH & BENGALI



www.mahendras.org



7052477777/7052577777



Gautam 13 hours ago

Homework answer is - 1648.

$18 \times 3 = 54$, $16 \times 3 = 48$.

Very Nice class Session Sir.

Thankyou sir.. 🙏🙏



REPLY



Chhavi Saxena 13 hours ago

Home work answer is 1648

Logic - $16 \times 3 = 48$

Very Nice session sir Thank you so much dear Sir 🙏🙏🙏🙏🙏🙏🙏



REPLY



🌸 PUJA KUNDU 🌸 ----- 13 hours ago

The answer is ---1648.... $16 \times 3 = 48$dhamakedar session sir 🔥 🔥 🔥 🔥 🔥 🔥thank you sir 🙏



REPLY



DEEKSHA SHARMA 13 hours ago

Home work answer is 1648

Awesome session sir 🙏🙏🙏🙏



REPLY



SANIA _____ 5 hours ago

Dhamakedaar session sir 🔥 🔥 🔥 🔥 🙌 🙌 🙌

Look voice sb change 🔥 🔥 🔥

Mast lg rhe ho sir 🔥 🔥 🔥 🔥 🔥

👍 🗨️ REPLY



Surbhi Sinha 13 hours ago

1648,. Superrr surprised session 🤩 🤩 100

👍 🗨️ REPLY



Puspranjan singh 13 hours ago

Thank you sir बहुत-बहुत aabhar very nice session

👍 🗨️ REPLY



Ankit Vish 13 hours ago

Answer. AAA

Lajwab session sir 🙌 🙌

👍 🗨️ REPLY



Bidya Behera 13 hours ago

H.W.

1648 👍



GUDIYA SHARMA 2 hours ago

$16 \times 3 = 48$

  REPLY



khushbu 13 hours ago

AAAAA trick---pahle do digit ka doguna equal to second do digit and pahle do digit ka teenguna equal to second do digit

  REPLY



GUDIYA SHARMA 2 hours ago

$12 \times 2 = 24$

  REPLY



ANAND APSANA OFFICIAL 10 hours ago

Nyc sir

  REPLY



DEFINITWA 13 hours ago

1648 correct answer hai sir



REPLY



Jethalal _____ 4 hours ago

1648



REPLY



Puspranjan singh 13 hours ago

1648



REPLY



Bidya Behera 13 hours ago

H.W.

1648

nyc laga Aaj class

Show less



REPLY

Find the missing term(?)

1224 : 1854 :: 2142 : ?

- (A) 1648**
- (B) 2080**
- (C) 1122**
- (D) 981**



Find the missing :-



Vitamin A : Retinol :: Vitamin D : ?

विटामिन ए: रेटिनाॅल :: विटामिन डी:?

- (A) Ascorbic acid / एस्कॉर्बिक अम्ल
- (B) Calciferol / कैल्सिफैरोल
- (C) Tocopherol / टोकोफैरोल
- (D) Phytonadione / फाइटोनाडियन

Find the missing :-

- (A) 2
- (B) 3
- (C) 4
- (D) 5

18	24	32
12	14	16
3	?	4
72	112	128



Find the missing :-

- (A) 4
- (B) 5
- (C) 6
- (D) 7

8	6	4
3	?	7
14	14	18



Find the missing :-

- (A) 20
- (B) 30
- (C) 40
- (D) 50

3	5	6	10
2	4	3	2
1	2	1	2
6	40	18	?



Find the missing :-

- (A) 16
- (B) 12
- (C) 28
- (D) 13

5	4	3
8	7	1
6	2	9
38	15	?



Find the missing :-

- (A) 20
- (B) 21
- (C) 22
- (D) 24

3	6	4	18
2	5	8	21
3	1	7	?



Find the missing :-

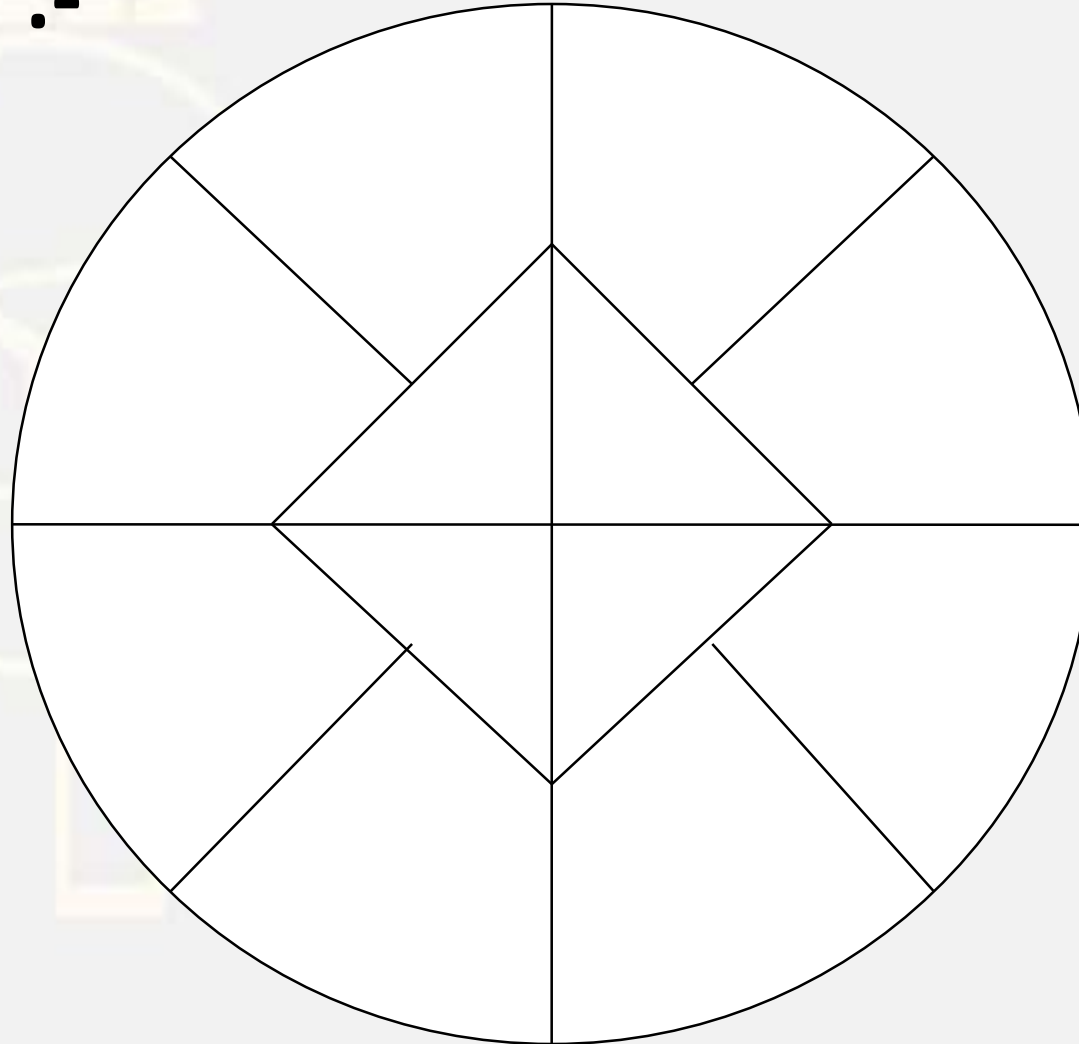
- (A) 6
- (B) 0
- (C) 9
- (D) 4

9	8	7
4	5	6
20	15	?



Find the missing :-

- (A) 9**
- (B) 7**
- (C) 8**
- (D) 12**



Find the option which should replace (?)

$$75 : 24 :: 63 : ?$$

- (A) 25
- (B) 26
- (C) 27
- (D) 30



Arrange the given words in the sequence in which they occur in the dictionary.

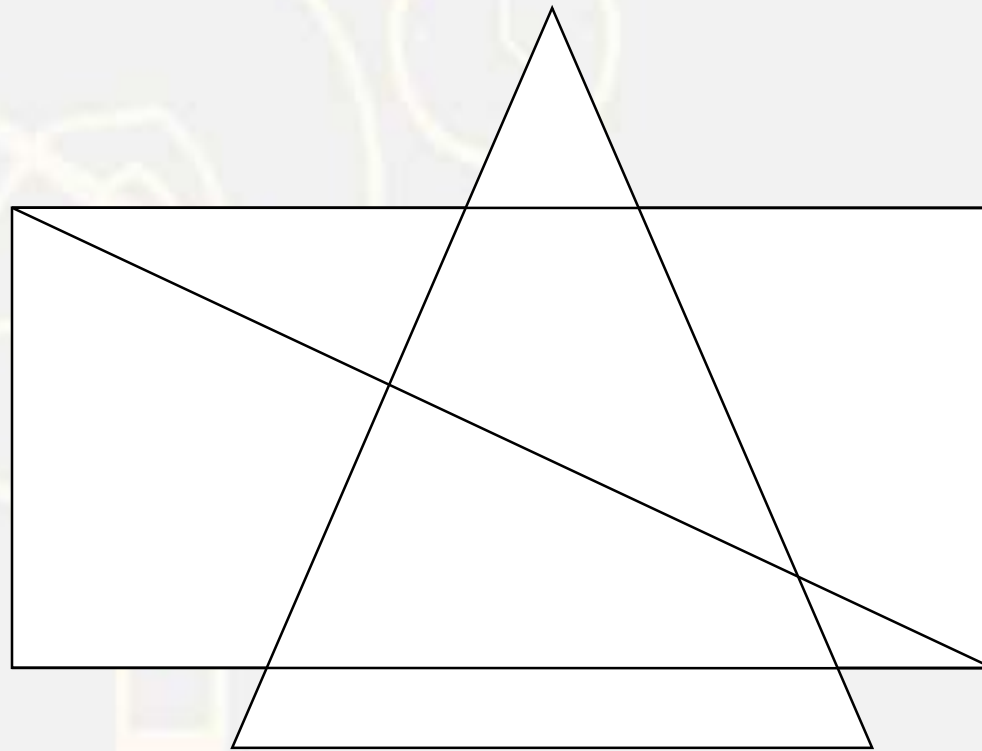
1. **Decollete**
2. **Desecrate**
3. **Decorous**
4. **Desipicable**
5. **Destitute**

- A. **13245**
- B. **15243**
- C. **32451**
- D. **45231**



Find the triangle :-

- 1. 10**
- 2. 11**
- 3. 8**
- 4. 9**



Find the missing :-

$$200 : 25 :: 300 : ?$$

- (A) 30
- (B) 37.5
- (C) 32.5
- (D) 30.25



Find the missing :-

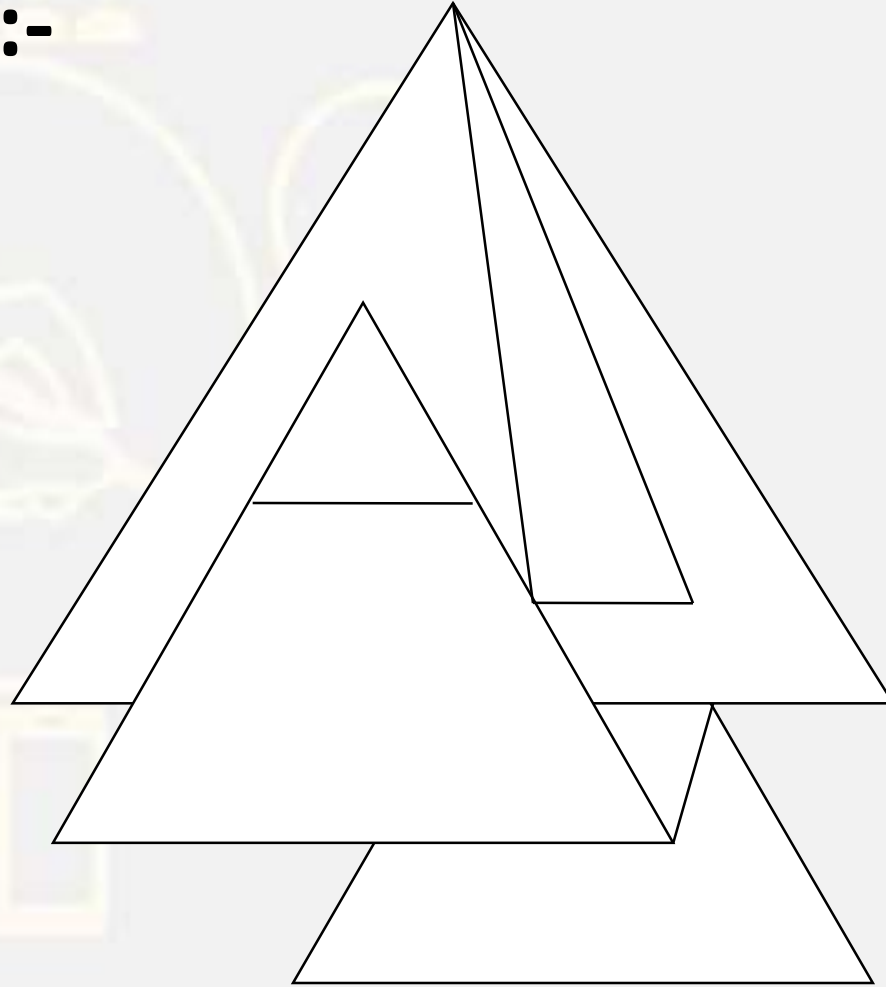
$$9 : 711 :: 8 : 496 :: 6 : ?$$

1. 200
2. 204
3. 215
4. 210



Find the triangle :-

- 1. 5**
- 2. 4 right**
- 3. 15**
- 4. 14**



Find the next ONE (?)

6 , 4 , 5 , 11 , ? , 189

- (A) 39**
- (B) 45**
- (C) 34**
- (D) 36**



Find the missing ONE (?)

$$5 : 120 :: 8 : ?$$

- (A) 520
- (B) 504
- (C) 448
- (D) 412



Find the missing ONE (?)

$$83 : 45 :: 72 : ?$$

- (A) 45
- (B) 56
- (C) 54
- (D) 37



Find the missing ONE (?)

$$7 : 18 :: 12 : ?$$

- (A) 26
- (B) 28
- (C) 32
- (D) 27



Find the missing ONE (?)

$$23 : 31 :: 36 : ?$$

- (A) 216
- (B) 248
- (C) 225
- (D) 217



Find the missing :-

100 , 60 , 80 , 150 , ?

1. 300
2. 210
3. 310
4. 340



Find the missing :-

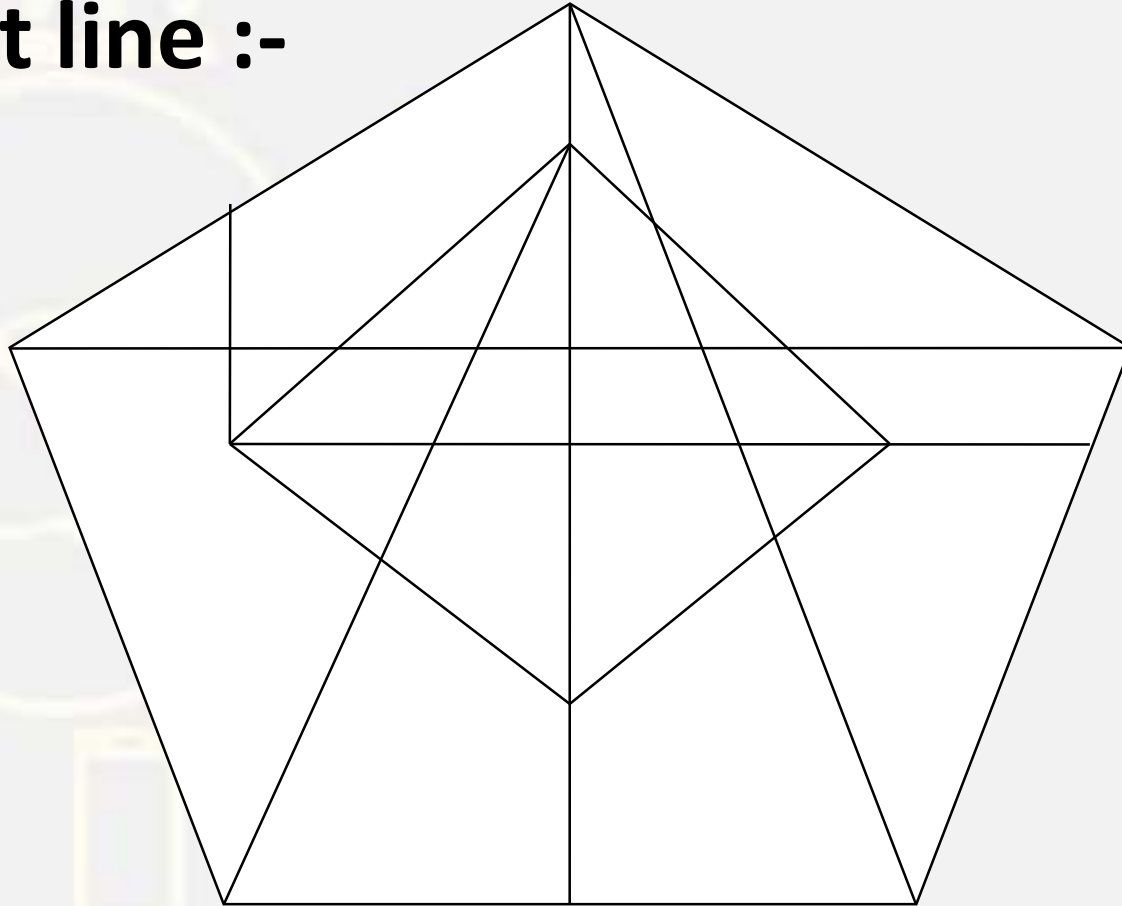
1495 : 11 :: 2659 : ?

- (A) 44
- (B) 33
- (C) 55
- (D) 22



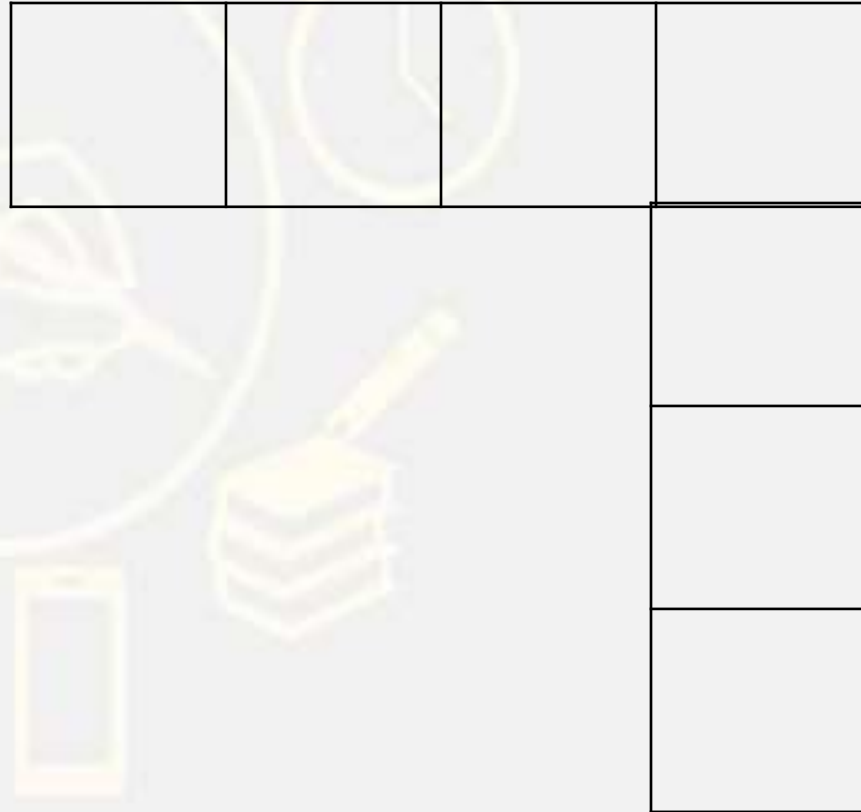
Find the Straight line :-

- (A) 15**
- (B) 16**
- (C) 17**
- (D) 19**



Find the rectangle (?)

1. 15
2. 18
3. 19
4. 20



Find the missing :-

- (A) $a = 108$, $c=4$
- (B) $a = 285$, $c=3$
- (C) $a = 375$, $c = 3$
- (D) $a = 378$, $c = 2$

13	8	14
9	6	9
2	C	3
232	141	A

20

Find the missing :-

Cougar : South America :: Okapi : ?
कौगर : दक्षिण अमेरिका :: ओकापी : ?

- (A) India / भारत
- (B) Central Africa / मध्य अफ्रीका
- (C) North America / उत्तरी अमेरिका
- (D) Pakistan / पाकिस्तान



Find the missing ONE (?)

5227 : 528 :: 4322 : ?

- (A) 512
- (B) 412
- (C) 528
- (D) 612



DHLP : BDFH

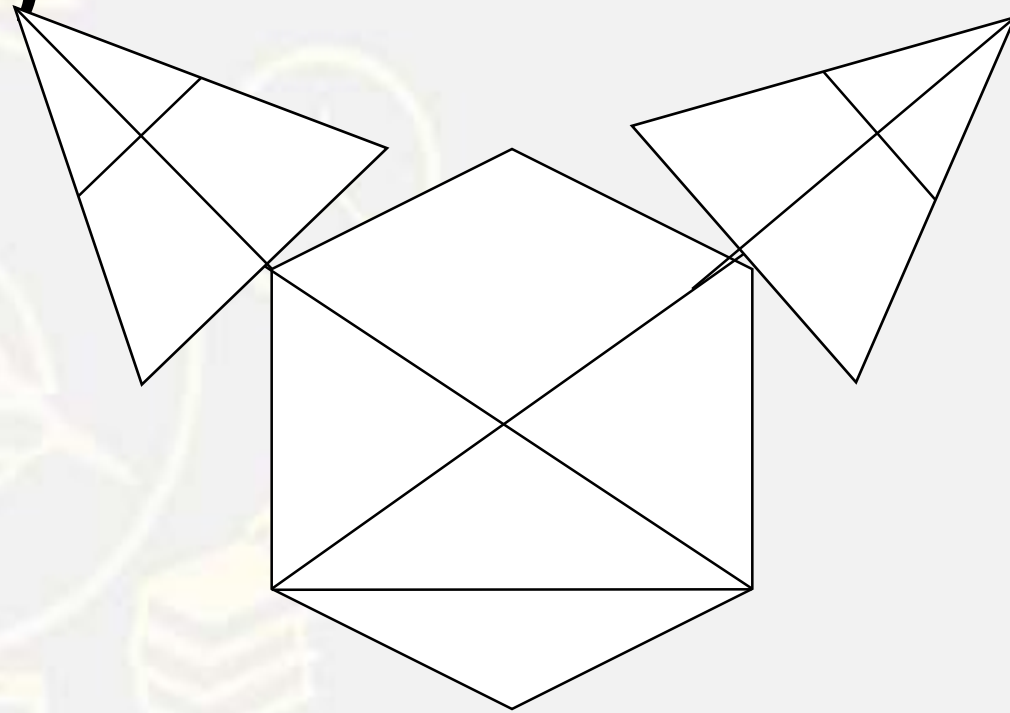
FLRX :: ?

- (A) FHLK**
- (B) CFIL**
- (C) KHPL**
- (D) DHMK**



Find the triangle (?)

- 1. 15**
- 2. 17**
- 3. 18**
- 4. 16**



Find the missing :-

Soldier : Rifle :: Writer : ?

सैनिक : राइफल :: लेखक : ?

- (A) Book / किताब
- (B) Paper / कागज़
- (C) Pen / कलम
- (D) Ink / स्याही



Yesterday was Tuesday , Which day will lies after 171 days ?

कल मंगलवार था, 171 दिनों के बाद कौन सा दिन होगा?

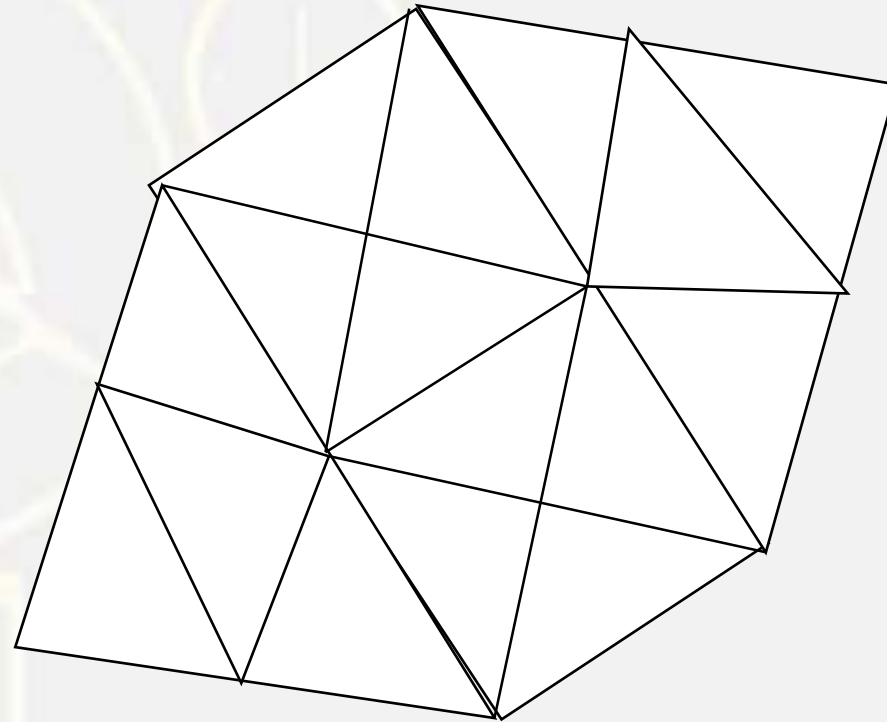
- 1. Friday**
- 2. Saturday**
- 3. Sunday**
- 4. Monday**



Find the triangle (?)



- 1. 30
- 2. 28
- 3. 26
- 4. 24



5	4	41
7	3	58
10	2	?

- A. 34**
- B. 12**
- C. 99**
- D. 104**



Find the missing :-

WATER : 55 :: STORE : 1 :: FORCE : ?

- (A) 10
- (B) 11
- (C) 14
- (D) 12



Find the odd (?)

1. M 25 H
2. J 16 G
3. R 49 K
4. K 49 D



Find the option which should replace (?)

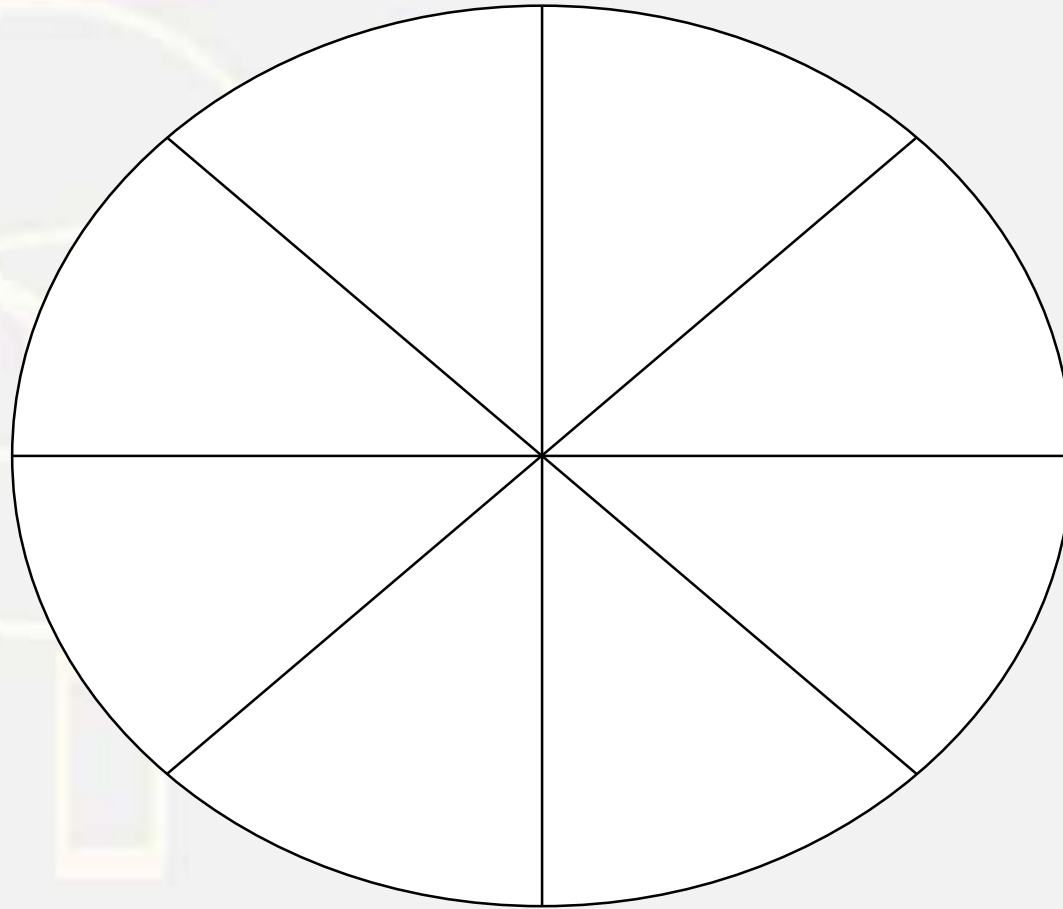
1. **Travel / यात्रा**
2. **Destination / गंतव्य**
3. **Payment / भुगतान**
4. **Seat no. / सीट नं।**
5. **Reservation / आरक्षण**
6. **Availability of Seat / सीट की उपलब्धता**

- (A) 236541
(B) 263541
(C) 341625
(D) 253461



Find the missing :-

- (A) 828
- (B) 1293
- (C) 1945
- (D) 783



Find number of triangle in the given figure ?

दी गई आकृति में त्रिभुज की संख्या ज्ञात कीजिए?

- (A) 18**
- (B) 20**
- (C) 24**
- (D) 16**

