



 *Mahendra's*

**UP Police कांस्टेबल**

**REASONING**

**LIVE EXAM**



 **4:00 PM**

**LIVE** 



# Don't Let Your Studies Get Impacted By COVID-19 Pandemic

Stay Home & Study Online With Mahendras Hybrid Model

## Features



Offline Classes



Live Interactive Online Classes



Same Faculty



Same Batch



Same Batch Timing



Online Library Facility



Recorded Video



PDFs



Classes In Both Model

CONTACT US:

1800-103-5225

[www.mahendras.org](http://www.mahendras.org)







# UPCOMING ONLINE BATCHES

## February 2022

02 Feb 2022

08:00 AM to 10:00 AM

**BANK ONLINE LIVE CLASS**

05:30 PM to 07:30 PM

**BANK ONLINE LIVE CLASS**

01:00 PM to 03:00 PM

**SSC ONLINE LIVE CLASS**

10:30 AM to 12:30 PM

**SSC ONLINE LIVE CLASS**

**BILINGUAL**

09 Feb 2022

10:30 AM to 12:30 PM

**BANK ONLINE LIVE CLASS**

03:00 PM to 05:00 PM

**BANK ONLINE LIVE CLASS**

08:00 AM to 10:00 AM

**SSC ONLINE LIVE CLASS**

05:30 PM to 07:30 PM

**SSC ONLINE LIVE CLASS**

**BILINGUAL**

16 Feb 2022

01:00 PM to 03:00 PM

**BANK ONLINE LIVE CLASS**

08:00 AM to 10:00 AM

**BANK ONLINE LIVE CLASS**

07:30 PM to 09:30 PM

**SSC ONLINE LIVE CLASS**

03:00 PM to 05:00 PM

**SSC ONLINE LIVE CLASS**

**BILINGUAL**

23 Feb 2022

10:30 AM to 12:30 PM

**BANK ONLINE LIVE CLASS**

07:30 PM to 09:30 PM

**BANK ONLINE LIVE CLASS**

08:00 AM to 10:00 AM

**SSC ONLINE LIVE CLASS**

01:00 PM to 03:00 PM

**SSC ONLINE LIVE CLASS**

**BILINGUAL**

# RRB NTPC Stage-2 Exam Pattern

Sections	No. of Questions	Total Marks	Duration
Mathematics	35	35	90 minutes
General Intelligence and Reasoning	35	35	
General Awareness	50	50	
<b>Total</b>	<b>120</b>	<b>120</b>	



🌸 PUJA KUNDU 🌸 12 hours ago

The answer is option 2.....aaj ka session fabulous tha sir....bahat sare question the sandar logic saath....thank you sir

👍 1 💬 📄 ▼ 📊 REPLY



Nadeem 12 hours ago

🌟 Homework Answer 🌟

🔴 Option 2 ✅✅

🌟 Thank You Sir 🙏 Mast Session Sir 😊🌟👑

👍 💬 📄 ▼ 📊 REPLY



SANIA \_\_\_\_\_ 2 hours ago

awesome session sir 🙏

option 2 🔥🔥🔥

👍 💬 📄 ▼ 📊 REPLY



SAPANA 10 hours ago

Ans.....B

Nice session sir 👍

Thank you sir 🙏🙏🙏🙏

👍 1 💬 📄 ▼ 📊 REPLY



Viśhñu Güptâ 10 hours ago

2 is the right ans

Very super nice 🙏 session sir thank you 🙏 sir love ❤️ you sir

👍 💬 📄 ▼ 📊 REPLY



Shivam Kumar 11 hours ago

Option 2 will be right answer sir nice session sir 🙏🙏🙏🙏

[REPLY](#)



Ankit Vish 12 hours ago

Answer. 2

Lajwab session sir 🙏🙏

1 [REPLY](#)



Parikh Akash 11 hours ago

option 2 is right answer 🙏

[REPLY](#)



Chhavi Saxena 12 hours ago

Home work answer is option 2 🙏🙏

[REPLY](#)



DEEKSHA SHARMA 12 hours ago

Home work answer is option 2

[REPLY](#)



TATHAGATA BISWAS 10 hours ago

Option b is the answer.

[REPLY](#)



ANNU LATA 12 hours ago

bb is right ans

[REPLY](#)



Kapil Bhagat 12 hours ago

2 hai

[REPLY](#)



Mirza Sahil jatt 12 hours ago

2

[REPLY](#)




puspranjan singh 12 hours ago


Bbb

[REPLY](#)


identify the figure that completes the pattern..




(X)




(1)



(2)



(3)



(4)

- A.1
- B.2
- C.3
- D.4



Find the option which should replace (?)

<b>3</b>	<b>8</b>	<b>10</b>	<b>2</b>	<b>?</b>	<b>1</b>
<b>6</b>	<b>56</b>	<b>90</b>	<b>2</b>	<b>20</b>	<b>0</b>

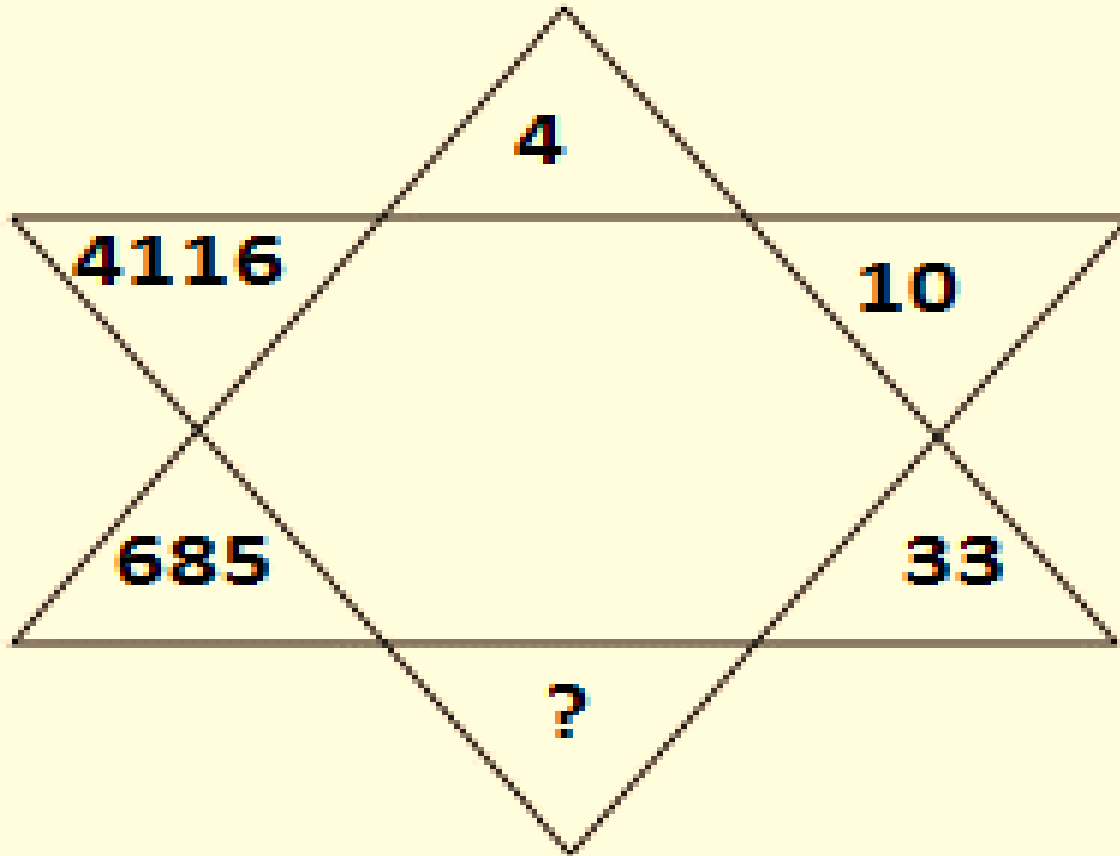
- A. 5
- B. 4
- C. 0
- D. 3





Which number will replace the question mark ?

- (A) 125
- (B) 115
- (C) 136
- (D) 95



**Arrange the given words in the alphabetical order.**

- 1. Rhetoric**
- 2. Regret**
- 3. Resignation**
- 4. Record**
- 5. Ratchet**



- (a) 2, 1, 5, 4, 3
- (b) 5, 4, 2, 3, 1
- (c) 5, 2, 1, 4, 3
- (d) 2, 5, 1, 4, 3

Find the option which should replace (?)

**CAB = 13**

**FEED = 41**

**JADE = ?**

**A. 35**

**B. 43**

**C. 41**

**D. 45**



Find the option which should replace (?)

**UNITED : 1/2 :: ORIGIN : ?**

- A. 2/5
- B. 3/5
- C. 1/2
- D. 3/7



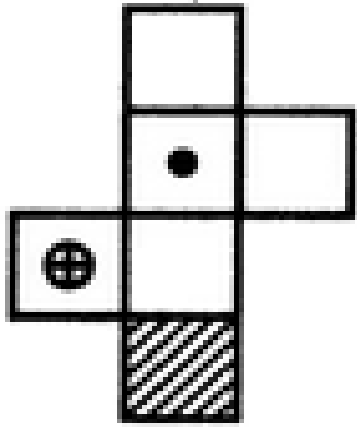


**Find the odd one out(?)**


- A. 2047**
- B. 4702**
- C. 6041**
- D. 4306**




Choose the box that is similar to the box formed from the given sheet of paper (X).




(X)



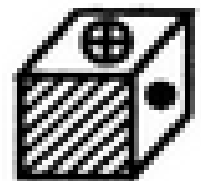
(1)



(2)



(3)

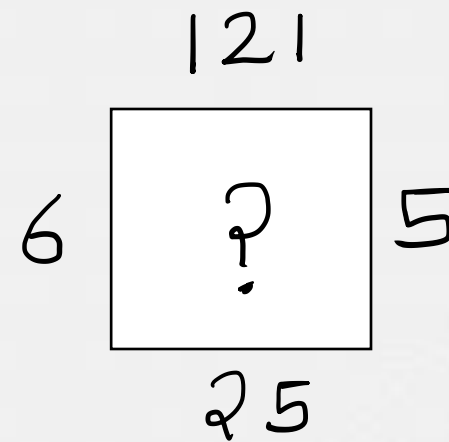
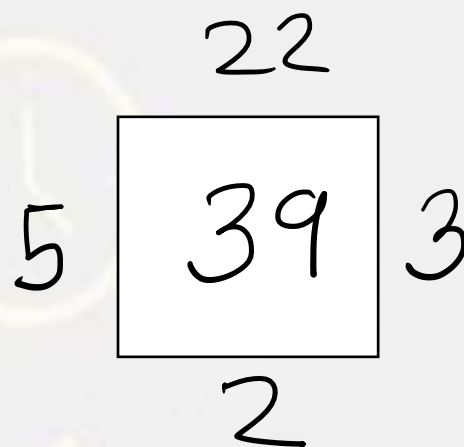
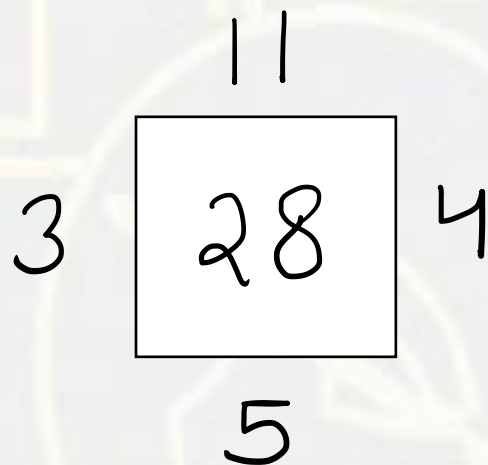


(4)

- A. 1 only
- B. 1 and 3 only
- C. 1, 3 and 4 only
- D. 1, 2, 3 and 4



Find the option which should replace (?)



- A. 176
- B. 115
- C. 157
- D. 131



A man is 24 years older than his son . In two years , his age will be twice the age of his son . What is the present age of his son ?

एक आदमी अपने बेटे से 24 साल बड़ा है। दो साल में उनकी उम्र उनके बेटे से दोगुनी होगी। उनके पुत्र की वर्तमान आयु क्या है?

- A. 20 years
- B. 18 years
- C. 14 years
- D. 22 years





From the given alternative words, select the word which can be formed using the letters of the give word :

दिए गए वैकल्पिक शब्दों से, उस शब्द का चयन करें जिसे शब्द के अक्षरों का उपयोग करके बनाया जा सकता है:

**REPLENISHABLE**

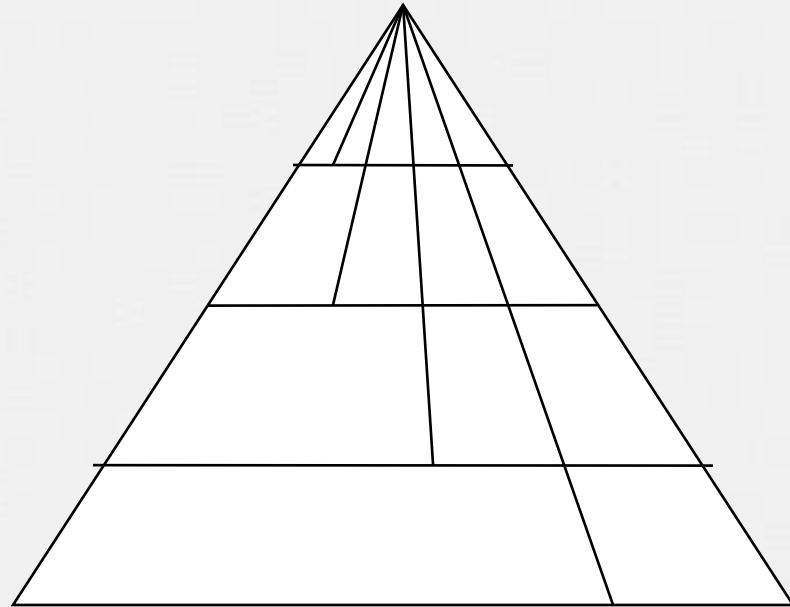
- (1) LIME
- (2) REACH
- (3) SHINE
- (4) PAPER



**Find number of triangle in the given figure ?**

**दी गई आकृति में त्रिभुज की संख्या ज्ञात कीजिए?**

- (A) 34**
- (B) 20**
- (C) 24**
- (D) 16**



Find the missing :-

$$29 : 13 :: 37 : ?$$

- (A) 17
- (B) 14
- (C) 15
- (D) 25



Find the missing :-

**381 : 614 :: ? : ?**

- (A) 343 : 662
- (B) 304 : 630
- (C) 242 : 822
- (D) 256 : 542





Find the missing :-

**13 : 109 :: 25 : ?**

- (A) 195
- (B) 205
- (C) 216
- (D) 201



Find the missing :-

$$78 : 117 :: 90 : ? :: 108 : 162$$

- (A) 126
- (B) 125
- (C) 150
- (D) 135



Find the missing :-

$$8 : 56 :: ? : 132$$

- (A) 7
- (B) 11
- (C) 12
- (D) 9

