

SSC MTS/HAWALDAR/CHSL



REASONING

LIVE EXAM

तैयारी जीत की...

LIVE

08:30 PM





UPCOMING ONLINE BATCHES

June 2022

01 June 2022

08:00 AM to 10:00 AM

BANK ONLINE LIVE CLASS

03:00 PM to 05:00 PM

SSC ONLINE LIVE CLASS

BILINGUAL

08 June 2022

01:00 PM to 03:00 PM

BANK ONLINE LIVE CLASS

07:30 PM to 09:30 PM

SSC ONLINE LIVE CLASS

BILINGUAL

15 June 2022

05:30 PM to 07:30 PM

BANK ONLINE LIVE CLASS

10:30 AM to 12:30 PM

SSC ONLINE LIVE CLASS

BILINGUAL

22 June 2022

10:30 AM to 12:30 PM

BANK ONLINE LIVE CLASS

08:00 AM to 10:00 AM

SSC ONLINE LIVE CLASS

BILINGUAL

29 June 2022

03:00 PM to 05:00 PM

BANK ONLINE LIVE CLASS

05:30 PM to 07:30 PM

SSC ONLINE LIVE CLASS

BILINGUAL

13 June 2022

10:30 AM to 12:30 PM

IBPS RRB ONLINE LIVE CLASS

BILINGUAL



www.mahendras.org



7052477777/7052577777



Mohit.. 4 hours ago 1 subscribers

Thank-you Sir for today's Wonderful Class Session.. 🙏😊

एंड

Today's Homework Answer is like-
Option C 3681.

$5+1=6^2=36$, $3+6=9^2=81$.



Thank-you so much Sir ji.. 😊🙏

Show less



REPLY



Nadeem 14 hours ago

🌺 Homework Answer 🌺

🔴 Option C ✅

🍀 Thank You Sir 🙏 Mast Session Sir 😊🌺🍌



REPLY



▶ [View reply from Mahendras : Online Videos For Govt. Exams](#)



arun ch mandal 3 hours ago

HW is 15,36,3681

thank you sir

nice session



REPLY



Chhavi Saxena 15 hours ago

Home work answer is option C

Very Nice session Sir Thank you so much dear Sir 🙏🙏🙏🙏🙏🙏🙏🙏



REPLY



▶ [View reply from Mahendras : Online Videos For Govt. Exams](#)



Chhavi Saxena 15 hours ago

Home work answer is option C

Very Nice session Sir Thank you so much dear Sir 🙏🙏🙏🙏🙏🙏🙏🙏

REPLY

▼ [View reply from Mahendras : Online Videos For Govt. Exams](#)



Vishnu Gupta 15 hours ago 3 subscribers

15,36,3681 is the right ans very super nice session sir Thank you 🙏 sir ❤️ 🙏

REPLY

▼ [View reply from Mahendras : Online Videos For Govt. Exams](#)



Ankit Vish 15 hours ago 188 subscribers

Answer. CCC

Lajwab session sir 🙏🙏

1 REPLY

▼ [View reply from Mahendras : Online Videos For Govt. Exams](#)



Deepali Yadav 13 hours ago

Homework ans.. Option c..... Thank you so much sir..

REPLY

▼ [View reply from Mahendras : Online Videos For Govt. Exams](#)



Puspranjan singh 15 hours ago **1** subscribers

15 . 36 .. 3681



satender chauhan 13 hours ago

Ans C - 15,36,3681



▼ [View reply from Mahendras : Online Videos For Govt. Exams](#)

Hrithik _____ 15 hours ago **27** subscribers

OPTION C IS THE SHI UTTAR SIR SIR



▼ [View reply from Mahendras : Online Videos For Govt. Exams](#)



Suresh Patro 5 hours ago **1** subscribers

Option c



▼ [View reply from Mahendras : Online Videos For Govt. Exams](#)



Find the option which should replace (?)

13 , 25 , 1649 : ?

- (A) 24 , 16 , 3636
- (B) 18 , 12 , 6416
- (C) 15 , 36 , 3681
- (D) 16 , 32 , 4949





Find the option which should replace (?)



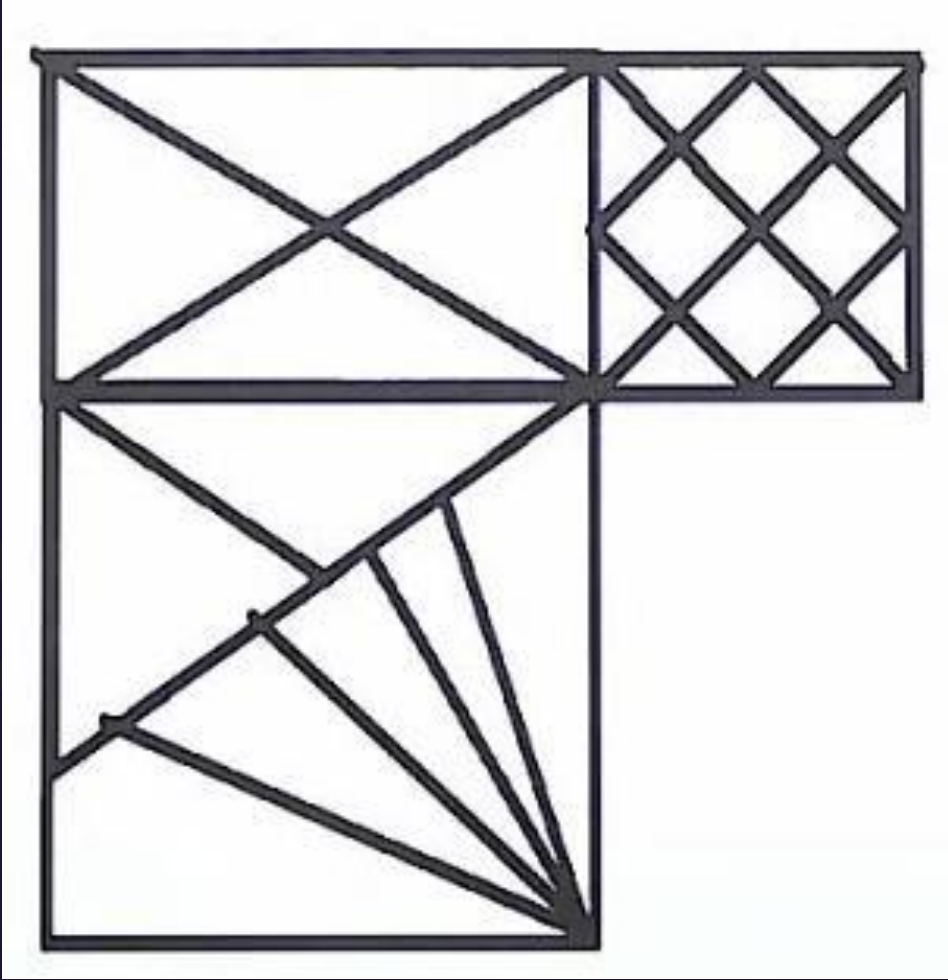
- (A) 210
- (B) 188
- (C) 165
- (D) 226

<table border="1" style="width: 100%; border-collapse: collapse;"> <tr><td>2</td><td>2</td><td>4</td></tr> <tr><td>1</td><td>112</td><td>5</td></tr> <tr><td>5</td><td>0</td><td>3</td></tr> </table>	2	2	4	1	112	5	5	0	3	<table border="1" style="width: 100%; border-collapse: collapse;"> <tr><td>6</td><td>3</td><td>0</td></tr> <tr><td>3</td><td>144</td><td>1</td></tr> <tr><td>4</td><td>2</td><td>6</td></tr> </table>	6	3	0	3	144	1	4	2	6	<table border="1" style="width: 100%; border-collapse: collapse;"> <tr><td>8</td><td>2</td><td>3</td></tr> <tr><td>5</td><td>?</td><td>1</td></tr> <tr><td>9</td><td>2</td><td>1</td></tr> </table>	8	2	3	5	?	1	9	2	1
2	2	4																											
1	112	5																											
5	0	3																											
6	3	0																											
3	144	1																											
4	2	6																											
8	2	3																											
5	?	1																											
9	2	1																											



Find the TRIANGLE (?)

- (A) 42
- (B) 46
- (C) 49
- (D) NOT





SSC MTS/HAWALDAR/CHSL

Live at 08:30 PM



Find the Odd (?)

- (A) 84 , 861**
- (B) 63 , 621**
- (C) 74 , 841**
- (D) 93 , 971**





Find the missing :-



- 1. 45
- 2. 48
- 3. 51
- 4. 54

5
16
49

Handwritten notes: $\times 3 + 1$ (between 5 and 16), $\times 3 + 1$ (between 16 and 49)

9
29
89

15
?
147

Handwritten notes: $\times 3 + 2$ (between 9 and 29), $\times 3 + 2$ (between 29 and 89), $\times 3 + 3$ (between 15 and ?), $\times 3 + 3$ (between ? and 147)



Find the missing :-

- (A) 100
- (B) 139
- (C) 157
- (D) 512

13	20	15	11
5	3	4	9
9	12	14	16
16	84	136	?





Find the missing :-

- 1. 49
- 2. 36
- 3. 50
- 4. 55

6	8	5
24	8	?
2	1	2





Find the missing :-

- (A) 1
- (B) 2
- (C) 3
- (D) 4

2	4	14
3	5	22
?	6	32





Find the missing (?)



- 1. 14
- 2. 16
- 3. 27
- 4. 25

28	22	48
52	15	17
14	14	27
7	?	16



Find the missing (?)

- 1. 43
- 2. 44
- 3. 55
- 4. 56

9	8	7
45	?	42
6	3	5





Find the missing :-

- (A) 16
- (B) 12
- (C) 28
- (D) 13

5	4	3
8	7	1
6	2	9
38	15	?





Find the missing :-

- (A) 19
- (B) 17
- (C) 15
- (D) 20

4	6	3
9	5	2
6	8	8
?	24	18





Find the missing :-



- (A) 3
- (B) 4
- (C) 5
- (D) 6

3	4	2	6
?	2	5	3
4	2	2	7



Find the MISSING (?)

- 1. 5
- 2. 6
- 3. 7
- 4. 8

2	3	4
7	3	0
4	7	9
4	5	?



Find the missing :-

- (A) 9
- (B) 27
- (C) 81
- (D) 243

3	6	4	9
2	5	8	8
3	1	5	?





Find the missing :-

- (A) 6
- (B) 0
- (C) 9
- (D) 4

9	8	7
4	5	6
20	15	?





Find the missing :-

- (A) 012
- (B) 021
- (C) 100
- (D) 120

15	56	?
06	15	20
08	04	05
03	05	20





Find the missing :-

- (A) 5
- (B) 6
- (C) 7
- (D) 8

5	7	6	36
10	?	17	64
9	11	8	56





Find the missing :-

- (A) 16
- (B) 11
- (C) 15
- (D) 17

5	6	7	8
10	18	21	24
7	9	10	?





Find the missing :-

- (A) 16
- (B) 15
- (C) 18
- (D) 21

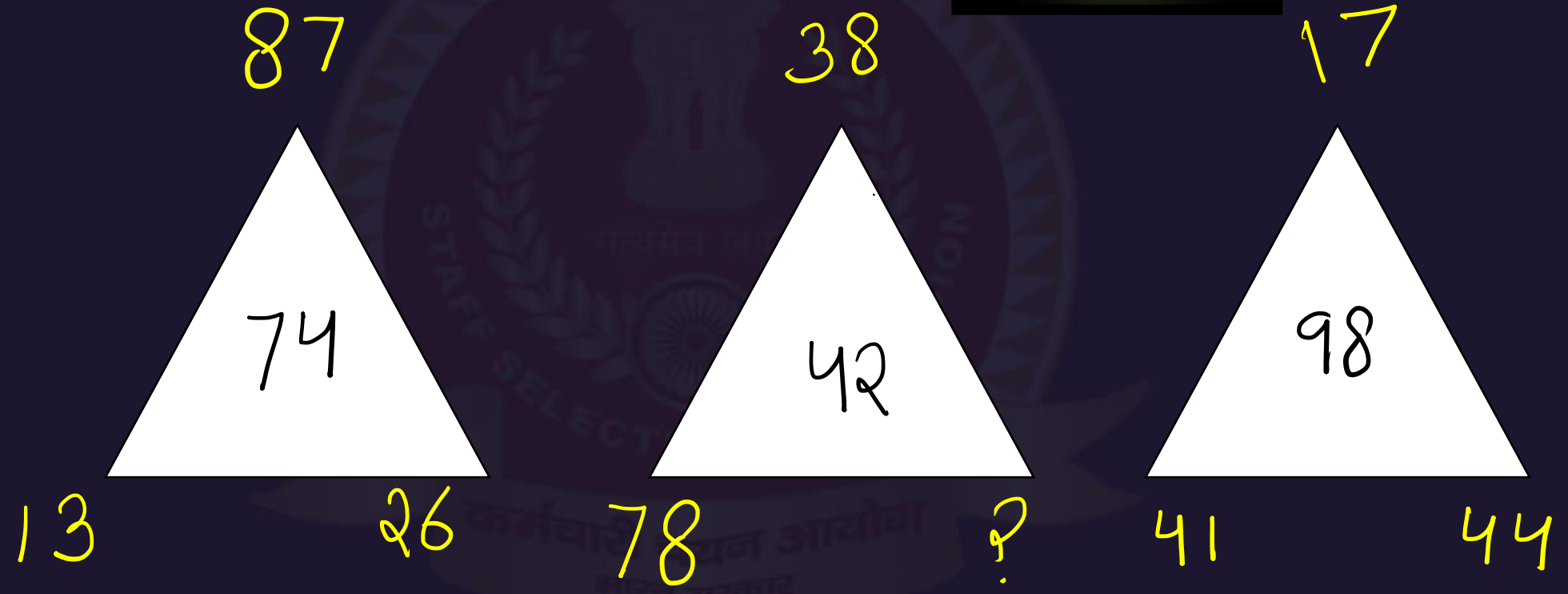
17	12	?
11	34	19
19	28	11
25	06	08





Find the missing :-

- (A) 42
- (B) 32
- (C) 76
- (D) 68





Find the missing :-

- (A) 7
- (B) 6
- (C) 9
- (D) 8

6	9	20	5
15	3	8	4
7	25	8	10
7	8	?	22





Which number will replace the question mark ?



6	10	15	12
5	9	4	2
7	13	8	12
79	259	124	?

- (A) 157
- (C) 168

- (B) 169
- (D) 144



Find the missing :-

- (A) 32
- (B) 34
- (C) 44
- (D) 28

16	?	30
20	29	21
10	26	24
12	20	16





Find the missing :-



- (A) 4
- (B) 5
- (C) 7
- (D) 8

6	4	8	9	3
9	2	9	4	2
4	1	11	11	3
5	1	?	1	4
3	3	1	6	5



Find the missing :-

- (A) 02
- (B) 04
- (C) 06
- (D) 08

3	2
5	4
1	7

1	2
7	6
4	2

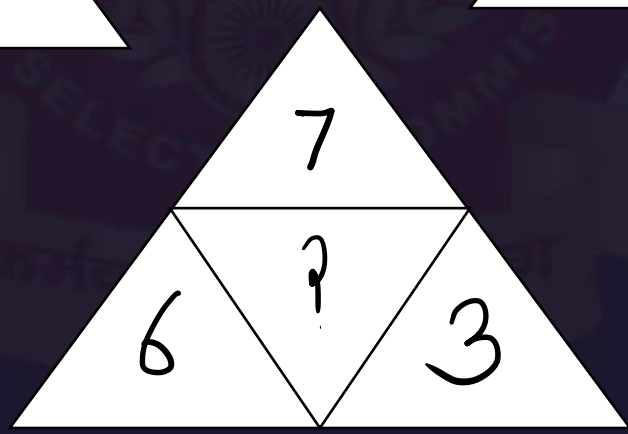
2	1
3	11
1	?





Find the missing :-

- (A) 06
- (B) - 4
- (C) - 8
- (D) 82





In a certain code language, SMART is written as UKCPV. What will be the code for WONDER in that code language?

एक निश्चित कोड भाषा में, SMART को UKCPV लिखा जाता है, तो WONDER के लिए उसी कोड भाषा में क्या कोड होगा?

- A. YMPVRT
- B. YMPBGP
- C. YMPBFP
- D. YMBPPG





In a certain code language, 124 is written as 457, 632 is written as 965 and 102 is written as 435 then how can 442 be written in that code language?

एक निश्चित कूट भाषा में, 124 को 457, 632 को 965 और 102 को 435 लिखा जाता है तो उसी कोड भाषा में 442 कैसे लिखा जा सकता है?

- A. 703
- B. 775
- C. 762
- D. 725





Kamlesh is Anil's brother. Sundari is the sister of Madan. Anil is the son of Sundari.
Now how is Kamlesh related to Sundari?

कमलेश, अनिल का भाई है। सन ुंदरी, मदन की बहन है। अनिल, सन ुंदरी का पत्रु है।
कमलेश का सन ुंदरी से क्या संबंध है?

- A. Nephew
- B. Son
- C. Brother
- D. Father





Rachita starts walking towards the north. After walking 15 meters, she turns towards the south and walks 20 meters. After this, she turns towards east 10 meters and then walks 5 meters towards the north. Now in which direction is she from her starting point and how far?

चिंता उत्तर की ओर चलना आरंभ करती है। 15 मीटर चलने के बाद, वह दक्षिण दिशा में मड़कर 20 मीटर चलती है। इसके बाद वह पूर्व की ओर मड़कर 10 मीटर चलती है। अतः वहाँ उत्तर की ओर 5 मीटर चलती है। अब वह अपने मूल बिंदु से किस दिशा में और कितनी दूरी पर है?

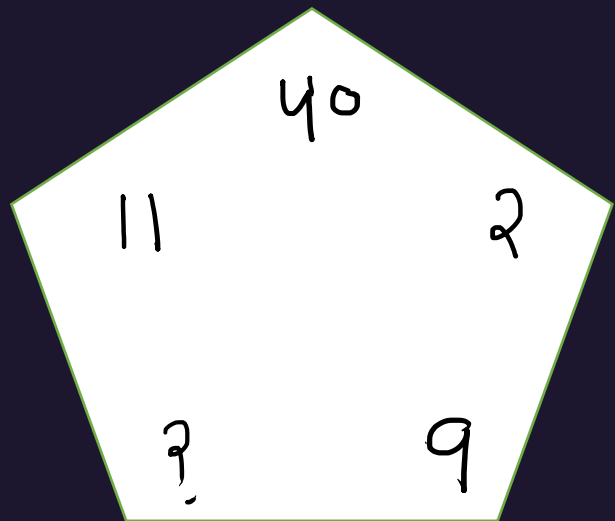
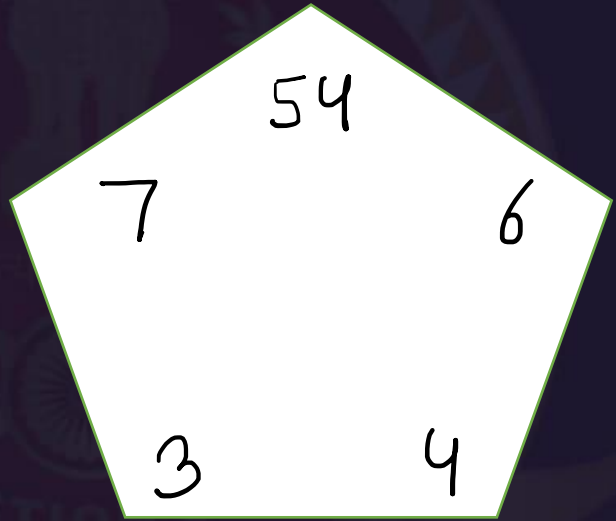
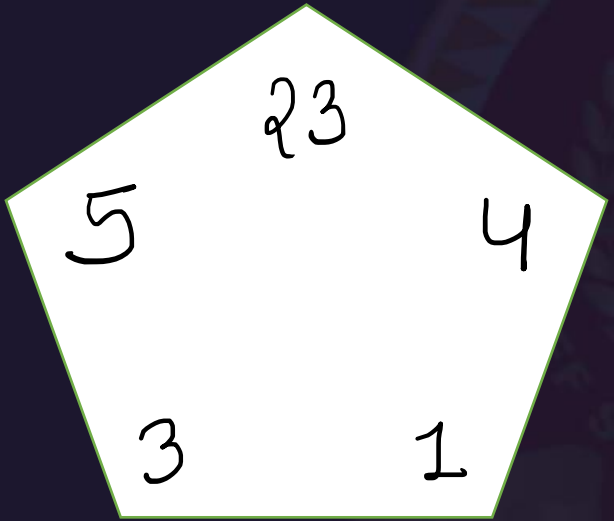
- A. 10 meters west
- B. 5 meters east
- C. 5 meters north
- D. 10 meters east





Find the missing :-


- 1. 04
- 2. 01
- 3. 02
- 4. 03





Find the missing :-

- 1. 92
- 2. 72
- 3. 62
- 4. 99





SSC MTS/HAWALDAR/CHSL

•Live at 08:30 PM



कर्मचारी चयन आयोग
भारत सरकार