

TOPIC WISE REASONING



Figure Counting, Analogy,
Sitting Arrangement &
Non - Verbal Reasoning
SSC MTS & GD
Previous Year Paper

ALL COMPETITIVE EXAMS

LIVE   2:00 PM





Don't Let Your Studies Get Impacted By COVID-19 Pandemic

Stay Home & Study Online With Mahendras Hybrid Model

Features



Offline Classes



Live Interactive Online Classes



Same Faculty



Same Batch



Same Batch Timing



Online Library Facility



Recorded Video



PDFs



Classes In Both Model

CONTACT US:

1800-103-5225

www.mahendras.org





UPCOMING ONLINE BATCHES

August 2021

04 AUG 2021

10:30 AM to 12:30 PM

LIVE PREMIUM GREEN CARD
(BANK PO & CLERK)

07:30 PM to 09:30 PM

LIVE PREMIUM SILVER CARD
(SSC CGL & CHSL)

07:30 PM to 09:30 PM

LIVE CLASS COURSE
(MATHS)

03:00 PM to 05:00 PM

LIVE CLASS COURSE
(UP SI)

BILINGUAL

11 AUG 2021

01:00 PM to 03:00 PM

LIVE CLASS COURSE
(TET & CTET)

05:30 PM to 07:30 PM

LIVE PREMIUM GREEN CARD
(BANK PO & CLERK)

08:00 AM to 10:00 AM

LIVE CLASS COMPLETE COURSE
(SSC GD)

BILINGUAL

18 AUG 2021

08:00 AM to 10:00 AM

LIVE PREMIUM GREEN CARD
(BANK PO & CLERK)

01:00 PM to 03:00 PM

LIVE PREMIUM SILVER CARD
(SSC CGL & CHSL)

BILINGUAL

25 AUG 2021

07:30 PM to 09:30 PM

LIVE PREMIUM GREEN CARD
(BANK PO & CLERK)

BILINGUAL





UPCOMING ONLINE BATCHES

September 2021

01 Sep 2021

01:00 PM to 03:00 PM

**LIVE PREMIUM
GREEN CARD**
(BANK-PO & CLERK)

08:00 AM to 10:00 AM

**LIVE PREMIUM
SILVER CARD**
(SSC CGL & CHSL)

BILINGUAL

08 Sep 2021

10:30 AM to 12:30 PM

**LIVE PREMIUM
GREEN CARD**
(BANK-PO & CLERK)

BILINGUAL

15 Sep 2021

03:00 PM to 05:00 PM

**LIVE PREMIUM
GREEN CARD**
(BANK-PO & CLERK)

03:00 PM to 05:00 PM

**LIVE MATHS
INDIVIDUAL**
(ONLINE LIVE CLASS)

BILINGUAL

03:00 PM to 05:00 PM

LIVE PREMIUM SILVER CARD
(SSC CGL & CHSL)

ENGLISH MEDIUM

22 Sep 2021

05:30 PM to 07:30 PM

**LIVE PREMIUM
GREEN CARD**
(BANK-PO & CLERK)

BILINGUAL

29 Sep 2021

10:30 AM to 12:30 PM

**LIVE PREMIUM
SILVER CARD**
(SSC CGL & CHSL)

BILINGUAL

07:30 PM to 09:30 PM

LIVE PREMIUM GREEN CARD
(BANK-PO & CLERK)

ENGLISH MEDIUM





Viśhñù Güptá 18 hours ago

Ans -D is the right ans

Very nice session sir thank you so much sir 🙏❤️

👍 🗨️ REPLY

▶ [View reply from Mahendras : Online Videos For](#)



sarita rawat 15 hours ago

Homework answer

Option (D)

Today very awesome session sir 🙏👍👏🙏

Thanku so much sir 🙏

👍 🗨️ REPLY

▶ [View reply from Mahendras : Online Videos For](#)



Chhavi Saxena 18 hours ago

Home work question answer is option D

Nice session sir 🙏🙏🙏🙏🙏🙏😊

👍 🗨️ REPLY

▶ [View reply from Mahendras : Online Videos For](#)



Sania S 18 hours ago

superb session sir 🙏🙏🙏

option 4🙏🙏🙏🙏

👍 🗨️ REPLY



Radha Garima 14 hours ago

Answer : D

Cool session sir 🙏🙏😊

👍 🗨️ REPLY

▶ [View reply from Mahendras : Onli](#)



DEEKSHA SHARMA 15 hours ago

Home work ans is D

nice session sir 🙏🙏

👍 🗨️ REPLY

▶ [View reply from Mahendras : Onli](#)



Masum Idki 🙄 18 hours ago

D

Very nice session 🙏🙏 thanks sir

👍 🗨️ REPLY

▶ [View reply from Mahendras : Onli](#)




Abhi Vaghela 18 hours ago

D

Nice session sir ❤️

👍 1 🗨️ REPLY



fitness lover 🤔 uttar pradesh 17 hours ago

Option d is 🍌 right
Super session

👍 🗨️ REPLY

▼ [View reply from Mahendras : Online Vid](#)



Sukhchand Paradkar 2 hours ago

Ans. 4. Nice session sir.

👍 🗨️ REPLY




Juthika Das 18 hours ago

Ans is --Option -DD
Thank you sir

👍 🗨️ REPLY

▼ [View reply from Mahendras : Online Vid](#)



MISTY MISTY 🍌🍌 18 hours ago

Nice session sir ji
Right answer is option number (d) 🍌🍌🍌

👍 🗨️ REPLY

▼ [View reply from Mahendras : Online Vid](#)



Shovika Singh 14 hours ago

Plz sir take hindi cls for RRB PO 2021

👍 🗨️ REPLY

▼ [View reply from Mahendras : Online Videos For Govt. Exams](#)



Uday Sankar 17 hours ago

Nice session

👍 🗨️ REPLY

▼ [View reply from Mahendras : Online Videos For Govt. Exams](#)



T Khan 17 hours ago

HOMEWORK (C) IS CORRECT ANSWER .

👍 🗨️ REPLY

▼ [View reply from Mahendras : Online Videos For Govt. Exams](#)



Rajkumar 18 hours ago

Option dddd is correct answer awesome class sir bohout badiya 🤔🤔🤔🤔🤔

👍 🗨️ REPLY

▼ [View reply from Mahendras : Online Videos For Govt. Exams](#)



PUJA KUNDU 17 hours ago

"TRIGBZSQFD" IS THE CORRECT ANSWER ...THANK YOU SOO MUCH SIR FOR THE AMAZING SESSION 🙏🙏🙏

👍 🗨️ REPLY



barbie dancer 18 hours ago

4 ❤️ 👍👍👍👍👍👍

👍 🗨️ REPLY

View reply from Mahendras : Onli



sameer ranjan 17 hours ago

Ans= (D)

👍 🗨️ REPLY

View reply from Mahendras : Onli



QUARANTINED NOOB 17 hours ago

C IS THE RIGHT ANSWER SIR JL..

👍 🗨️ REPLY

View reply from Mahendras : Onli



Anushka Mishra 16 hours ago

Option D is correct answer

👍 🗨️ REPLY

View reply from Mahendras : Onli



Kapil Bhagat 18 hours ago

444

👍 🗨️ REPLY



Subhrajah Pahari 13 hours ago

ans is- option 4

👍 🗨️ REPLY

View reply from Mahendras : Onli



रुतिक---jha 18 hours ago

Option D

👍 🗨️ REPLY

View reply from Mahendras : Onli



Preeti 18 hours ago

Hw ans...d

👍 🗨️ REPLY

View reply from Mahendras : Onli



Vardhman Daga 17 hours ago

D

👍 🗨️ REPLY

In a Certain code **POWER** is written as **QOPNXVFD SQ**, than find the code for **SHARE**?

एक निश्चित कोड में **POWER** का कोड **QOPNXVFD SQ** लिखा गया है तो **SHARE** का कोड क्या होगा ?

- (1) TBGIBZSQDF
- (2) RTGIZBQSDF
- (3) TRIZBGFQSD
- (4) TRIGBZSQFD



Find the missing :-

KQG , JTK , HXO , ECS , ?

- (1) BIV**
- (2) AIW**
- (3) AHW**
- (4) BIX**



Find the missing :-

$$1 * 4 * 3 = 13$$

$$5 * 3 * 3 = 14$$

$$8 * 2 * 4 = ?$$

(1) 7

(2) 16


(3) 15

(4) 8



Find the RECTANGLE :-

- (1) 7
- (2) 8
- (3) 9
- (4) 10



Find the missing :-

$$23 + 45 = 95$$

$$81 + 42 = 69$$

$$34 + 72 = ?$$

(1) 98

(2) 97

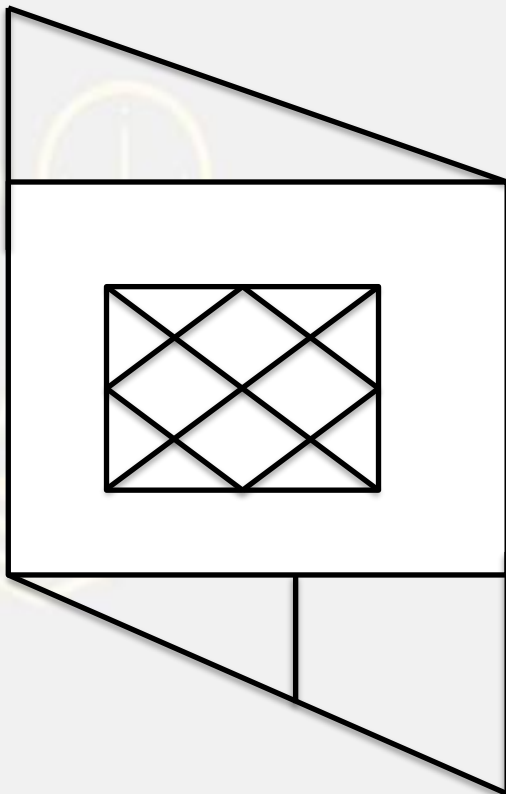
(3) 95

(4) 99

20

Find the TRIANGLE :-

- (1) 20
- (2) 30
- (3) 23
- (4) 26



Find the missing :-

264 : 396

473 : ?

(1) 583

(2) 597

(3) 729

(4) 673





Find the RECTANGLE :-

--	--	--	--	--	--

--	--	--	--	--	--

--	--	--	--	--	--

(1) 81

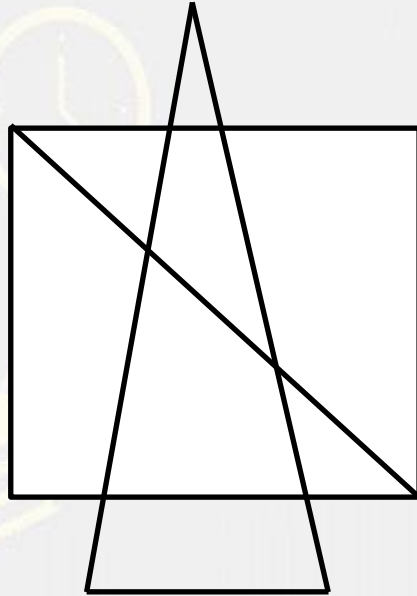
(2) 75

(3) 84

(4) 80

Find the TRIANGLE :-

- (1) 12
- (2) 11
- (3) 10
- (4) 8



Find the missing :-

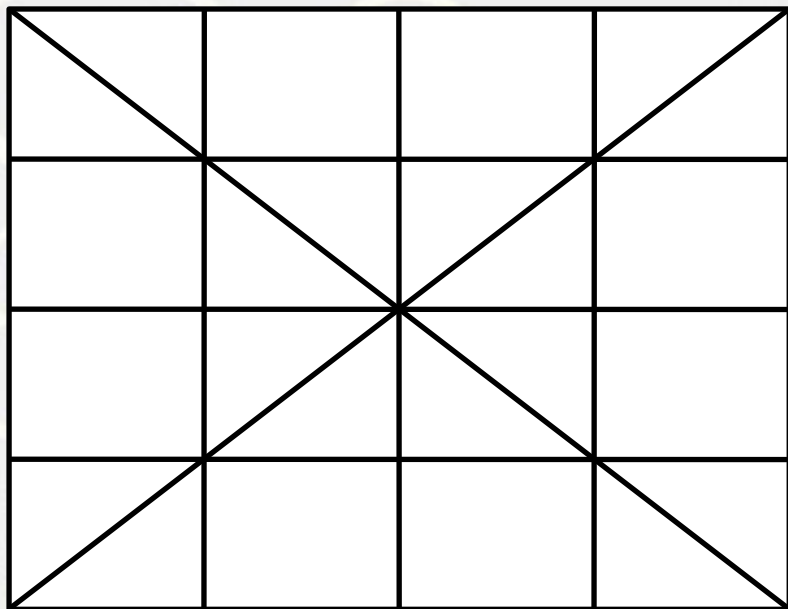
- (1) 209
- (2) 212
- (3) 122
- (4) 261

5	4	41
15	6	?
9	11	202



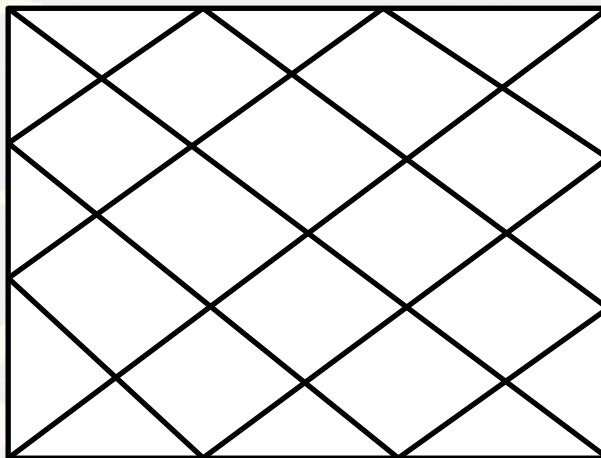
Find the number of triangle (?)

- (A) 36
- (B) 40
- (C) 44
- (D) 48



Find TRIANGLE in the given figure ?

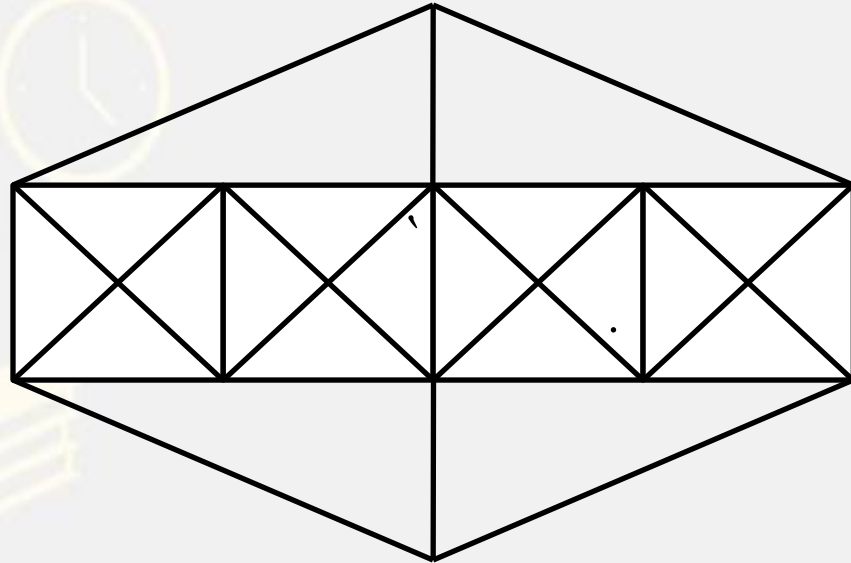
- (A) 20
- (B) 40
- (C) 28
- (D) 44



Find number of triangle in the given figure ?

दी गई आकृति में त्रिभुज की संख्या ज्ञात कीजिए?

- (A) 40
- (B) 38
- (C) 44
- (D) 46



Find the missing ONE (?)

23 : 31 :: 36 : ?

- (A) 216
- (B) 248
- (C) 225
- (D) 217



Find the missing ONE (?)

7863 : 7887 :: 5249 : ?

- (A) 5271**
- (B) 5269**
- (C) 5259**
- (D) 5283**




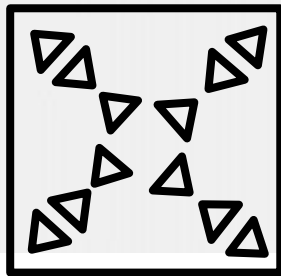


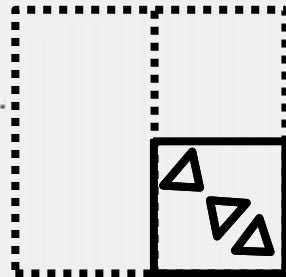
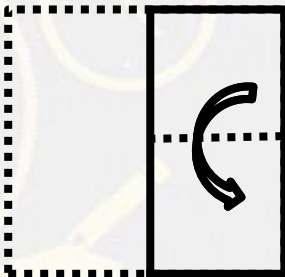
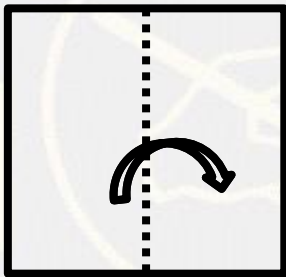
Find the missing ONE (?)

324 : 342 :: 196 : ?


- (A) 218
- (B) 222
- (C) 210
- (D) 221



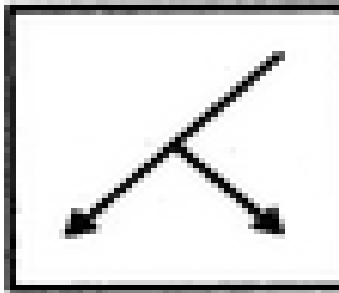
Choose a figure which would most closely resemble the unfolded form of Figure (Z).




.Choose the correct mirror image of the given figure (X) from amongst the four alternatives ?




(X)




(A)



(B)



(C)



(D)



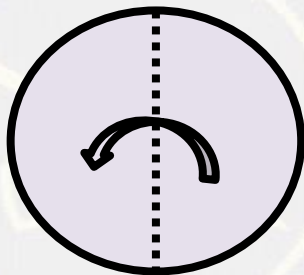
A, P, R, X, S and Z are sitting in a row. S and Z are in the centre. A and P are at the ends. R is sitting to the left of A. Who is to the right of P ?

A, P, R, X, S और Z एक पंक्ति में बैठे हैं। S और Z पंक्ति के केंद्र में हैं। A और P छोर पर हैं। R, A के बाईं ओर बैठा है। P के दाईं ओर कौन है?

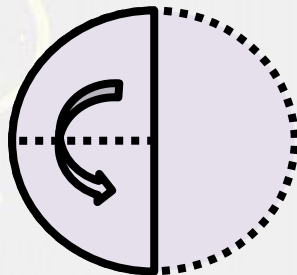
- (A) A (B) X
(C) S (D) Z



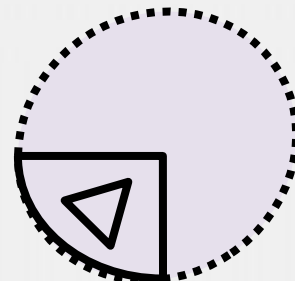
Choose a figure which would most closely resemble the unfolded form of Figure (Z).




(X)




(Y)



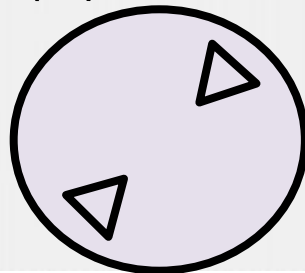
(Z)



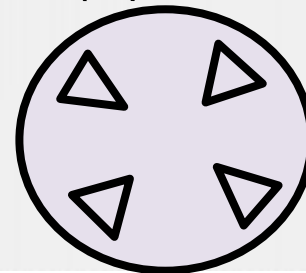
(A)



(B)



(C)



(D)