



Mahendra's



UP POLICE कॉन्स्टेबल

REASONING

PREVIOUS YEAR

QUESTION PAPER

SUPER TRICK

LIVE

04:00 PM





Don't Let Your Studies Get Impacted By COVID-19 Pandemic

Stay Home & Study Online With Mahendras Hybrid Model

Features



Offline Classes



Live Interactive Online Classes



Same Faculty



Same Batch



Same Batch Timing



Online Library Facility



Recorded Video



PDFs



Classes In Both Model

CONTACT US:

1800-103-5225

www.mahendras.org





UPCOMING ONLINE BATCHES

February 2022

02 Feb 2022

08:00 AM to 10:00 AM
BANK ONLINE LIVE CLASS

05:30 PM to 07:30 PM
BANK ONLINE LIVE CLASS

01:00 PM to 03:00 PM
SSC ONLINE LIVE CLASS

10:30 AM to 12:30 PM
SSC ONLINE LIVE CLASS

BILINGUAL

09 Feb 2022

10:30 AM to 12:30 PM
BANK ONLINE LIVE CLASS

03:00 PM to 05:00 PM
BANK ONLINE LIVE CLASS

05:30 PM to 07:30 PM
SSC ONLINE LIVE CLASS

BILINGUAL

16 Feb 2022

01:00 PM to 03:00 PM
BANK ONLINE LIVE CLASS

08:00 AM to 10:00 AM
BANK ONLINE LIVE CLASS

07:30 PM to 09:30 PM
SSC ONLINE LIVE CLASS

03:00 PM to 05:00 PM
SSC ONLINE LIVE CLASS

BILINGUAL

23 Feb 2022

10:30 AM to 12:30 PM
BANK ONLINE LIVE CLASS

08:00 AM to 10:00 AM
SSC ONLINE LIVE CLASS

01:00 PM to 03:00 PM
SSC ONLINE LIVE CLASS

BILINGUAL

08:00 AM to 10:00 AM
SSC ONLINE LIVE CLASS
(SSC CGL & CHSL)

ENGLISH MEDIUM

07:30 PM to 09:30 PM
BANK ONLINE LIVE CLASS
(BANK PO & CLERK)

ENGLISH MEDIUM



SANIA _____ 3 hours ago

nice session sir🔥🔥

👍 🗨️ 📄 ▼ 📊 REPLY



Umesh Kushwah 2 hours ago

$4 \times 12 + 4 = 52$ $6 \times 12 + 4 = 76$

👍 🗨️ 📄 ▼ 📊 REPLY



Vīshñù Güptâ 12 hours ago

Ccc is the right ans

Very dhashu session sir thank you 🙏 love you 😊 sir

👍 🗨️ 📄 ▼ 📊 REPLY

▼ [View reply from Mahendras : Online Videos For](#)



suraj 12 hours ago

$13 \times 6 = 78$

👍 🗨️ 📄 ▼ 📊 REPLY

▼ [View reply from Mahendras : Online Videos For](#)



GUDIYA SHARMA 11 hours ago

Sir meri offline class 2:00 se 5:00 ho gyi hai 😞😞😞😞

👍 🗨️ 📄 ▼ 📊 REPLY



Umesh Kushwah 2 hours ago

76

👍 🗨️ 📄 ▼ 📊 REPLY



GUDIYA SHARMA 11 hours ago

78

👍 🗨️ 📄 ▼ 📊 REPLY

▼ [View reply from Mahendras : Online Videos For Govt. Exams](#)



ANNU LATA 16 hours ago

ccc is right ans

👍 🗨️ 📄 ▼ 📊 REPLY

▼ [View reply from Mahendras : Online Videos For Govt. Exams](#)



puspranjan singh 17 hours ago

76

👍 🗨️ 📄 ▼ 📊 REPLY

Statements :

Some symbols are figure.

All symbols are graphics.

No graphic is a picture.

Conclusions :

I. Some graphics are figures.

II. No symbol is a picture.

कथन:

कुछ प्रतीक आंकड़े हैं।

सभी प्रतीक ग्राफिक्स हैं।

कोई ग्राफिक तस्वीर नहीं है।

निष्कर्ष :

I. कुछ ग्राफिक्स आंकड़े हैं।

II. कोई प्रतीक तस्वीर नहीं है।



Find the odd (?)

- (A) 1469
- (B) 2954
- (C) 3585
- (D) 4641



Find the missing ONE (?)

$$87 : 53 :: 99 : ?$$

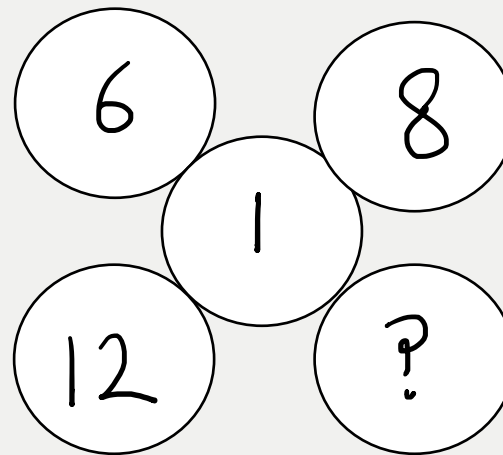
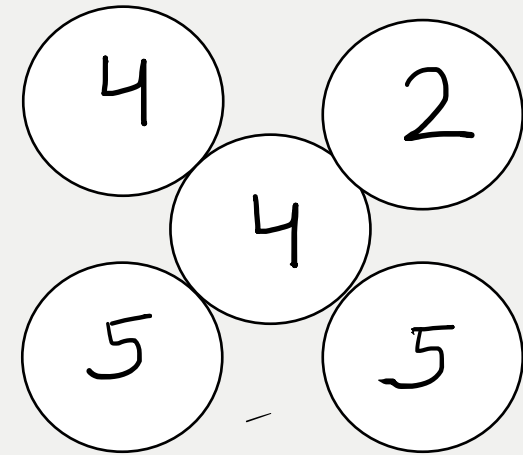
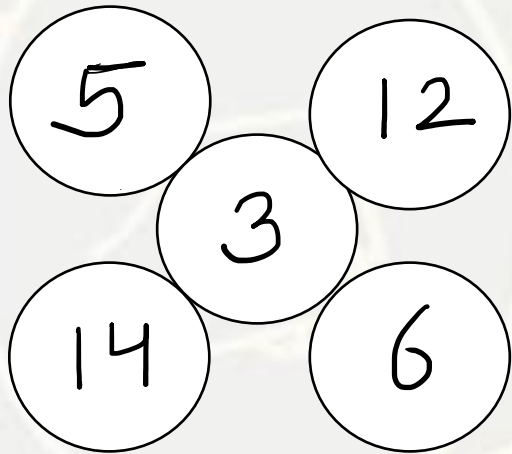
- (A) 71
- (B) 57
- (C) 65
- (D) 83





Find the missing (?)

- (A) 4
- (B) 17
- (C) 9
- (D) 3



Find the missing ONE (?)

74 , 40 , 34 :: ?

- (A) 96 , 50 , 46**
- (B) 84 , 45 , 40**
- (C) 104 , 55 , 49**
- (D) 112 , 59 , 54**



What is 13th letter of the English alphabet ?
अंग्रेजी वर्णमाला का 13वां अक्षर क्या है?



- (A) N & L
- (B) M & M
- (C) N & N
- (D) M & N

What was the day on 2nd January 1911 ?

2 जनवरी 1911 को कौन सा दिन था?

- (A) Tuesday
- (B) Wednesday
- (C) Monday
- (D) NOT



Find the missing ONE (?)

$$72 \$ 29 = IK$$

$$96 \$ 67 = OM$$

$$89 \$ 46 = ?$$

- (A) RP
- (B) OK
- (C) OL
- (D) LO



Find the missing ONE (?)

$$92 : 81 :: 34 : ?$$

- (A) 36
- (B) 27
- (C) 81
- (D) 64



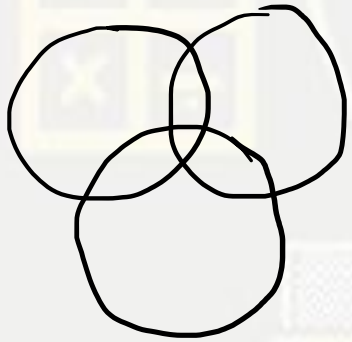
Pointing to a boy , Noor says , “ He is the son of my grandfather’s only child .” How is the boy related to Noor ?

एक लड़के की ओर इशारा करते हुए, नूर कहती है, "वह मेरे दादा की इकलौती संतान का पुत्र है।" लड़का नूर से किस प्रकार संबंधित है?

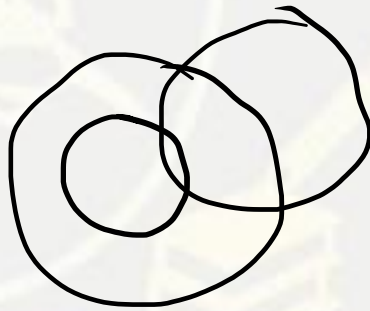
- (A) Brother
- (B) Cousin
- (C) Uncle
- (D) Sister



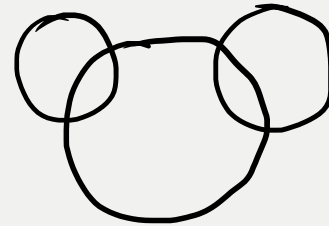
Head light , LED , LED tube light



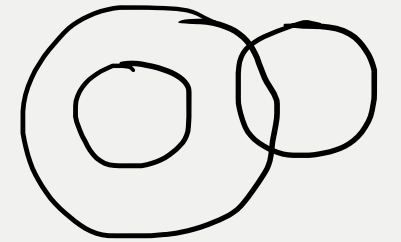
(A)



(B)



(C)



(D)

Find the odd (?)

- (A) 118 , 88
- (B) 215 , 125
- (C) 154 , 60
- (D) 247 , 168



Find the missing ONE (?)

MOBILE :: RPLEHO
CHARGE :: ?

- (A) KFUDHI
- (B) KFUDOHI
- (C) KFUDHJ
- (D) KEUDHJ



Find the missing ONE (?)

$$25 : 250 :: 49 : ?$$

- (A) 658
- (B) 646
- (C) 686
- (D) 648



Find the missing ONE (?)

19 , 25 , 42 , 71 , 113 , ?

- (A) 169**
- (B) 153**
- (C) 186**
- (D) 196**



Find the ODD (?)

- (A) 289
- (B) 169
- (C) 343
- (D) 361

