

RAILWAY GROUP D

 Mahendra's

REASONING



≡ अंतिम प्रहार ≡

EXPECTED
QUESTIONS

LIVE | 08:30 PM





UPCOMING ONLINE BATCHES

July 2022

06 July 2022

05:30 PM to 07:30 PM

BANK ONLINE LIVE CLASS

03:00 PM to 05:00 PM

SSC ONLINE LIVE CLASS

BILINGUAL

06 July 2022

07:30 PM to 09:30 PM

BANK ONLINE LIVE CLASS

ENGLISH MEDIUM

06 July 2022

02:00 PM to 04:00 PM

SSC ONLINE LIVE CLASS

ENGLISH & BENGALI

13 July 2022

08:00 AM to 10:00 AM

BANK ONLINE LIVE CLASS

07:30 PM to 09:30 PM

SSC ONLINE LIVE CLASS

BILINGUAL

13 July 2022

09:15 AM to 11:15 AM

BANK ONLINE LIVE CLASS

ENGLISH & BENGALI

20 July 2022

01:00 PM to 03:00 PM

BANK ONLINE LIVE CLASS

10:30 AM to 12:30 PM

SSC ONLINE LIVE CLASS

BILINGUAL

27 July 2022

10:30 AM to 12:30 PM

BANK ONLINE LIVE CLASS

08:00 AM to 10:00 AM

SSC ONLINE LIVE CLASS

BILINGUAL

27 July 2022

07:00 AM to 09:00 AM

BANK ONLINE LIVE CLASS

ENGLISH & BENGALI



www.mahendras.org



7052477777/7052577777



Mohit.. 4 hours ago 1 subscribers

Thank-you Sir for this Amazing Class Session of today's..👍😊

And

My answer for today's Homework is like- Option A.

~~BD~~ ..

Read more

👍 💬 REPLY ▶️



🍁 PUJA KUNDU 🍁 ----- 9 hours ago 7 subscribers

The answer is -----GJID JEBC....(LOGIC 4 4 KA PAIRS BANAK CROSS MAI SINGLE DIGIT).....THANK YOU SOO MUCH SIR FOR THE AMAZING SESSION 🔥

👍👍👍

👍 💬 REPLY ▶️



SANIA _____ 53 minutes ago

Awesome session sir 👍👍

👍 💬 REPLY ▶️



Chhavi Saxena 9 hours ago

Home work answer is option A

(GJIDJEBC)

Logic - Single digit then 4th value , 3rd value ,2nd value , 1st value ,8th ,7th ,6th ,5thas it is jaise Argument mein ho raha hai

Very Nice Superb session sir Thank you so much dear Sir 👍👍👍👍👍👍👍👍👍👍👍👍👍👍👍👍👍👍👍👍👍👍👍👍


👍 💬 REPLY ▶️



ROHIT RATHOUR 4 hours ago 73 subscribers

Nice Session Sir 🙏🙏

👍 1 🗨️ REPLY 📺



Surbhi Sinha 8 hours ago

GJIJDEBC 😬

👍 🗨️ REPLY 📺



Vishnu Gupta 9 hours ago 3 subscribers

Homework 📄 is the right ans

DISPUTES: GJIJDEBC very nice 🔥 session sir thank you 🙏 sir love you 😬 sir 🙏❤️

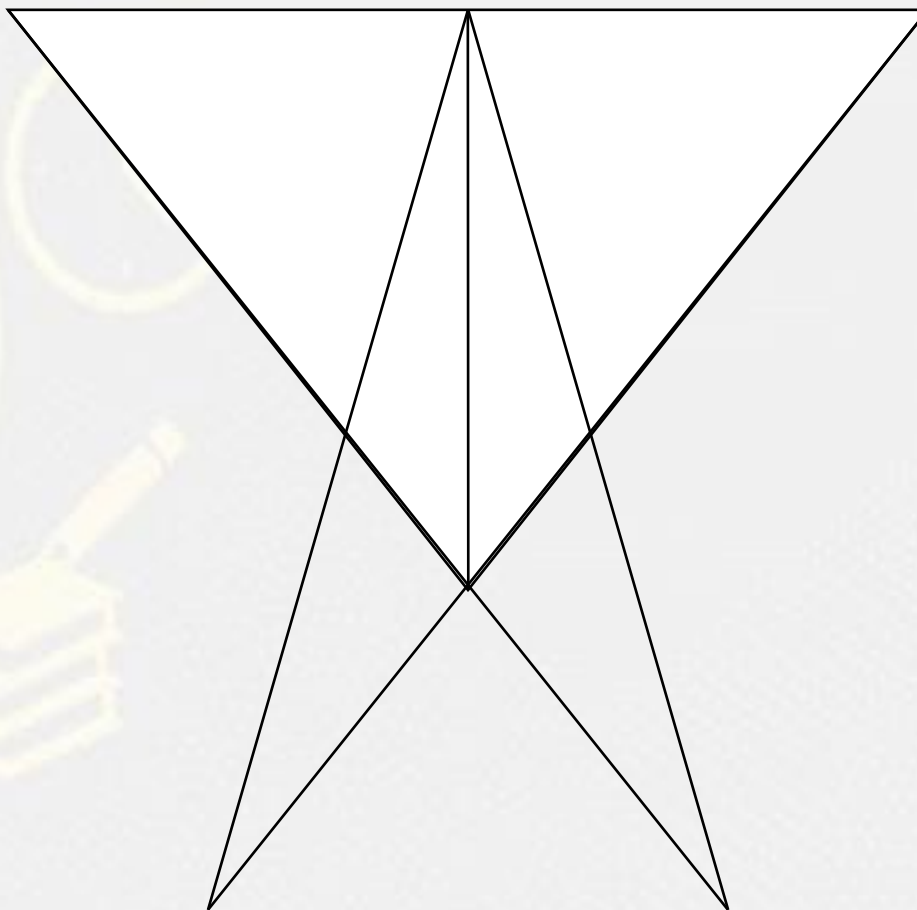
👍 🗨️ REPLY 📺

In a Certain code *ARGUMENT* is written as *CGIABEED* ,than find the code for *DISPUTES*?

एक निश्चित कोड में *ARGUMENT* का कोड *CGIABEED* लिखा गया है तो *DISPUTES* का कोड क्या होगा ?

- (1) GJIDJIBC
- (2) GJJEIDBC
- (3) GJIJDEBC
- (4) JEBGCJID
- (5) JEBCGJID

Find the number of triangle (?)



- (A) 12**
- (B) 13**
- (C) 11**
- (D) 15**

Arrange the words given below in a dictionary sequence.

1. Glamorous
2. Glimpse
3. Generous
4. Gymnasiums
5. Greenish

- A. 5, 3, 2, 4, 1
- B. 5, 4, 2, 3, 1
- C. 5, 2, 3, 4, 1
- D. 3, 1, 2, 5, 4



Find the odd one (?)

- (A) K
- (B) M
- (C) P
- (D) U

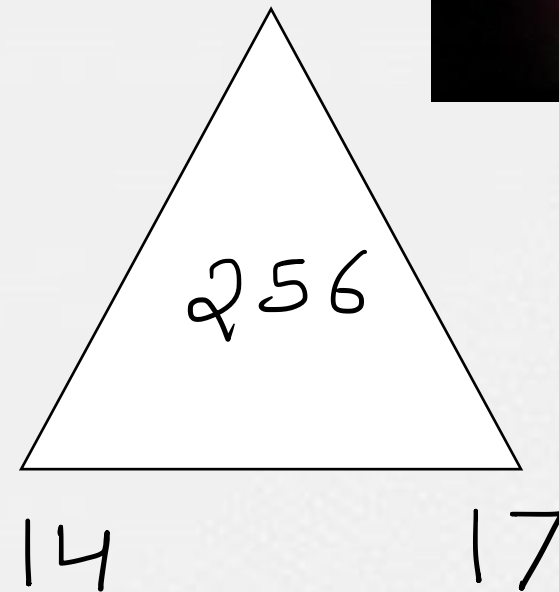
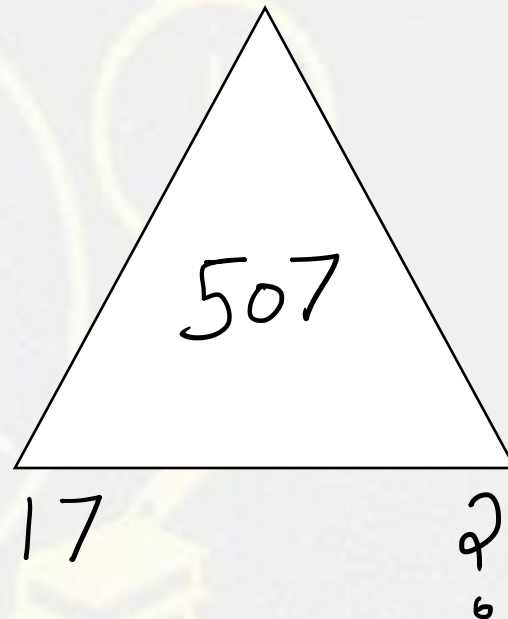
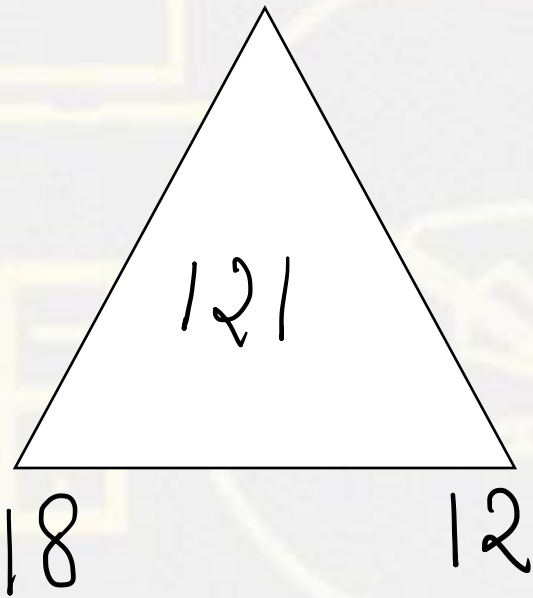


Find the odd one (?)

- (A) F21
- (B) D23
- (C) M14
- (D) K11



Which number will replace the question mark ?



- (A) 19
- (B) 30
- (C) 40
- (D) 50

A clock seen through a mirror shows quarter past nine .

What is correct time shown by clock?

दर्पण के माध्यम से देखी जाने वाली एक घड़ी में सवा नौ बजे का समय होता है। घड़ी द्वारा दिखाया गया सही समय क्या है?

- (A) 4 : 15**
- (B) 2 : 45**
- (C) 9 : 15**
- (D) 3 : 15**



Find the missing one (?)

India : Peacock :: China : ?

भारत : मोर :: चीन : ?

- (A) Kiwi / कीवी
- (B) Penguin / पेंगुइन
- (C) Crane / क्रेन
- (D) Kukkoo / कुक्कू



Find the missing one (?)

India : Peacock :: China : ?

भारत: मोर :: चीन:?

- (A) **Kiwi** / कीवी
- (B) **Penguin** / पेंगुइन
- (C) **Crane** / क्रेन
- (D) **Kukkoo** / कुक्कू



Find the missing term(?)

Town : Country :: Earth : ?

- (A) World**
- (B) Solar System**
- (C) Ocean**
- (D) Planet**






Find the missing term(?)

First : Last :: Trust : ?

- (A) Enmity**
- (B) Cheat**
- (C) Hate**
- (D) Dis- obedient**



A dice is thrown four times and its three different positions are shown below. Find the number on the face opposite the face showing A



- A. B
- B. C
- C. E
- D. F



Find the missing term(?)

NIGERIA : 5975991

GINGER : ?

- (A) 797595**
- (B) 795759**
- (C) 797559**
- (D) 795795**



Find the missing term(?)

$$11 : 5 :: 17 : ?$$

- (A) 6
- (B) 8
- (C) 10
- (D) 12



Find the missing term(?)

$$42 : 56 :: 132 : ?$$

- (A) 156
- (B) 145
- (C) 110
- (D) 240



Find the missing term(?)

$$5 : 36 :: 11 : ?$$

- (A) 70
- (B) 77
- (C) 72
- (D) 80



Find the missing one (?)

- A. $1/2$
- B. $2/3$
- C. $3/4$
- D. $4/5$

1	$\frac{1}{2}$	$\frac{3}{2}$
2	$\frac{2}{3}$	$\frac{8}{3}$
3	?	$\frac{19}{5}$

Find the missing :-

- (A) 5
- (B) 6
- (C) 7
- (D) 8

5	7	6	36
10	?	17	64
9	11	8	56



Find the missing :-

FATHER : 6120818

COPY : 151625

WATCH : ?

(A) 2312038

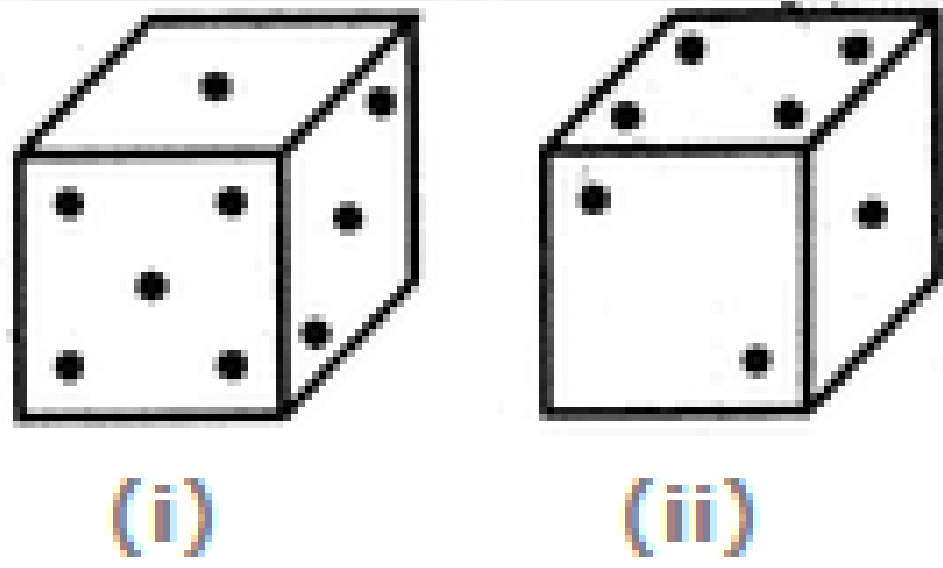
(B) 1208

(C) 12038

(D) 231208



Two positions of a dice are shown below. When there are two dots at the bottom, the number of dots at the top will be



- A.3
- B.5
- C.6
- D. Cannot be determined

Find the missing :-

- (A) 54
- (B) 64
- (C) 80
- (D) 60

