

SSC MTS/HAWALDAR/CHSL



REASONING

LIVE EXAM

तैयारी जीत की...

LIVE

08:30 PM





UPCOMING ONLINE BATCHES

June 2022

01 June 2022

08:00 AM to 10:00 AM

BANK ONLINE LIVE CLASS

03:00 PM to 05:00 PM

SSC ONLINE LIVE CLASS

BILINGUAL

08 June 2022

01:00 PM to 03:00 PM

BANK ONLINE LIVE CLASS

07:30 PM to 09:30 PM

SSC ONLINE LIVE CLASS

BILINGUAL

15 June 2022

05:30 PM to 07:30 PM

BANK ONLINE LIVE CLASS

10:30 AM to 12:30 PM

SSC ONLINE LIVE CLASS

BILINGUAL

22 June 2022

10:30 AM to 12:30 PM

BANK ONLINE LIVE CLASS

08:00 AM to 10:00 AM

SSC ONLINE LIVE CLASS

BILINGUAL

29 June 2022

03:00 PM to 05:00 PM

BANK ONLINE LIVE CLASS

05:30 PM to 07:30 PM

SSC ONLINE LIVE CLASS

BILINGUAL

13 June 2022

10:30 AM to 12:30 PM

IBPS RRB ONLINE LIVE CLASS

BILINGUAL



www.mahendras.org



7052477777/7052577777



Mohit.. 10 hours ago 1 subscribers

Thank-you Sir for today's very Amazing Class Session..😊🙏

And

Answer is option D-- MFR.

Logic is Cross increase of 5 and middle - 5...

Read more

👍 🗨️ REPLY ▶️



Chhavi Saxena 12 hours ago

Home work answer is option D (MFR) Very Nice session Sir Thank you so much Sir🙏🙏🙏

👍 🗨️ REPLY ▶️



Vishnu Gupta 12 hours ago 3 subscribers

Option D-MFR is the right ans very super nice session sir thank you 🙏 sir love ❤️ you sir ❤️ 🙏

👍 🗨️ REPLY ▶️



🌸 PUJA KUNDU 🌸 13 hours ago 7 subscribers

The answer is MFR....cross mai +5 ...mid..-6.....thank you sir majedar session k liye🙏🙏🙏🙏🙏

👍 🗨️ REPLY ▶️



Ankit Vish 3 hours ago 186 subscribers

Answer DDD

Very nice session sir 🙏🙏

👍 1 🗨️ REPLY ▶️



zSOURAJIT GHOSH 13 hours ago 19 subscribers

Sir, 30th July ko NTPC ph 4 ki aptitude test ka date diya hai.

Toh agar aap railway aptitude test ki tarah questions bhi practice karwa dete toh buhut achha hota

👍 🗨️ REPLY ▶️




Puspranjan singh 13 hours ago **1** subscribers

Thanks dear sir



REPLY




Naina Jaiswal 13 hours ago (edited) **27** subscribers

OPTION D IS THE SHI UTTAR SIR



REPLY



Shruti Jain 3 hours ago **11** subscribers

Cc



REPLY





Find the option which should replace (?)

QPN : SJV :: MLH : ?

- (A) MER
- (B) MQR
- (C) MOR
- (D) MFR





Statement –

- I. All snakes are idiots.
- II. Some idiots are people.
- III. All people are soft.

Conclusion -

- I. Some idiots are not snakes.
- II. Some people are snakes.
- III. Some soft are idiots.

कथन –

- I. सभी सांप बेवकूफ हैं।
- II. कुछ इडियट लोग हैं।
- III. सभी लोग कोमल हैं।

निष्कर्ष –

- I. कुछ इडियट्स सांप नहीं हैं।
- II. कुछ लोग सांप हैं।
- III. कुछ सॉफ्ट इडियट्स हैं।





Statement –

- I. All snakes are idiots.**
- II. Some idiots are people.**
- III. All people are soft.**

Conclusion -

- I. Some idiots are not snakes.**
- II. Some people are snakes.**
- III. Some soft are idiots.**



Find the missing :-

- 1. 8
- 2. 12
- 3. 16
- 4. 36

14	16	19
10	15	13
8	2	?

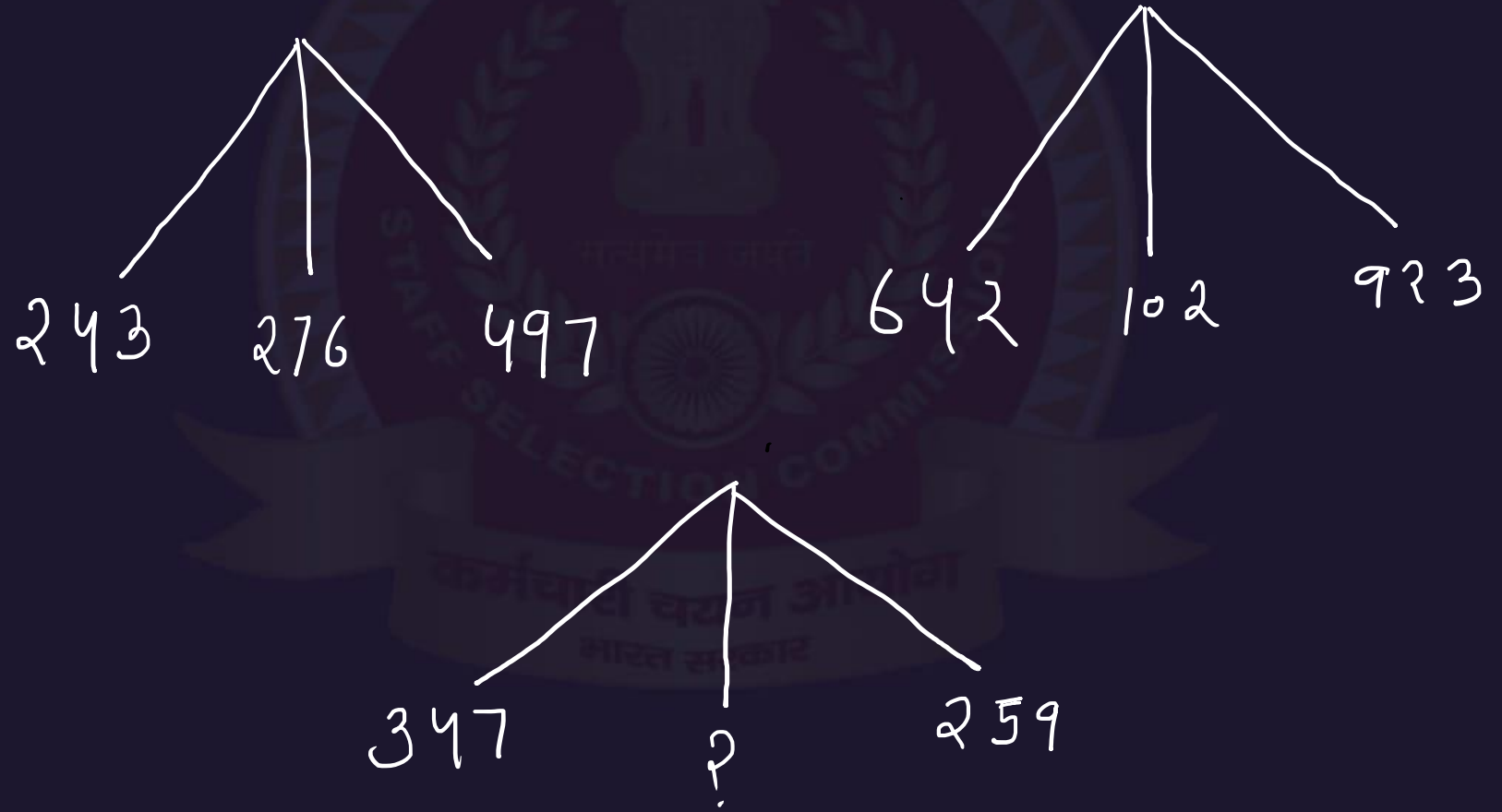




Find the missing :-



- 1. 88
- 2. 174
- 3. 214
- 4. 256





Find the missing :-

- 1. 67
- 2. 43
- 3. 47
- 4. 57


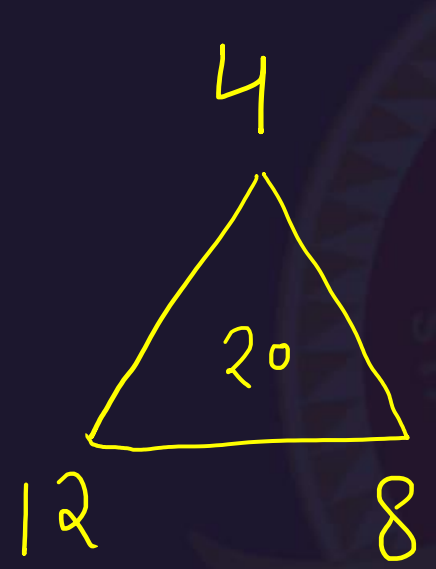
12	8	16	19
13	15	11	5
62	54	70	?





Find the missing :-

- 1. 0
- 2. 18
- 3. 8
- 4. 16





Find the missing :-

- 1. 59
- 2. 68
- 3. 22
- 4. 132

74	58
29	62
32	17
52	?





Find the missing :-

- 1. 16
- 2. 19
- 3. 17
- 4. 21

66	51	96
22	?	32
25	20	35





Find the missing :-

- 1. 4
- 2. 7
- 3. 5
- 4. 9


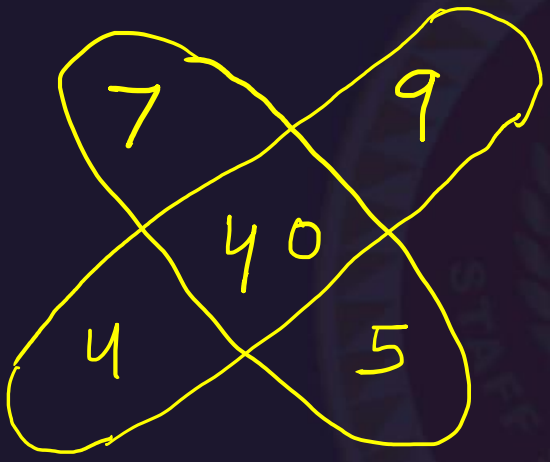
8	9	42
12	5	30
7	?	35





Find the missing :-


- 1. 60
- 2. 62
- 3. 64
- 4. 66



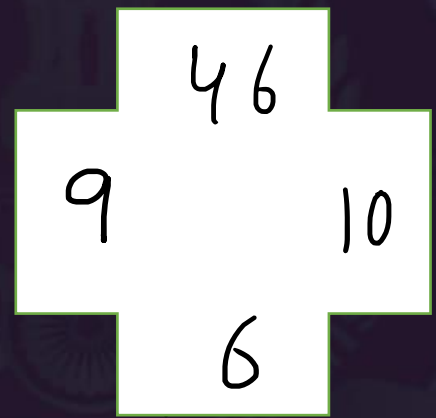


Find the missing :-

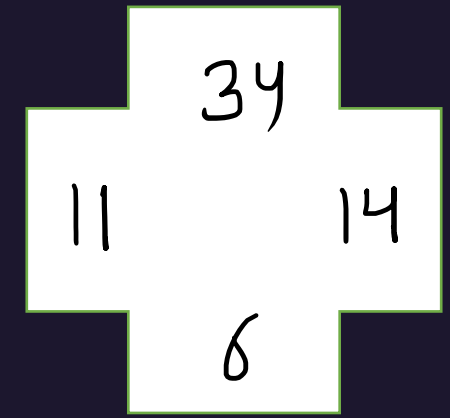
- 1. 25
- 2. 52
- 3. 12
- 4. 48



41



39



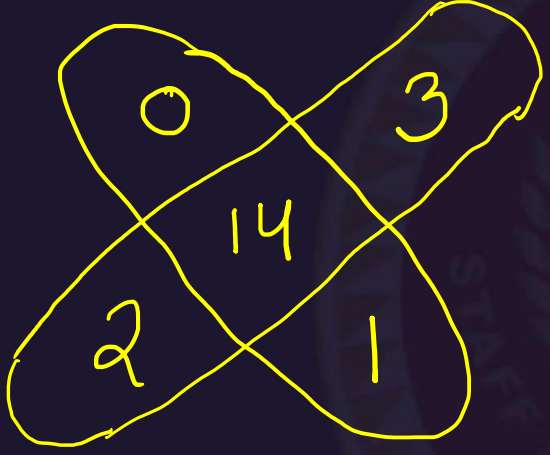
?





Find the missing :-

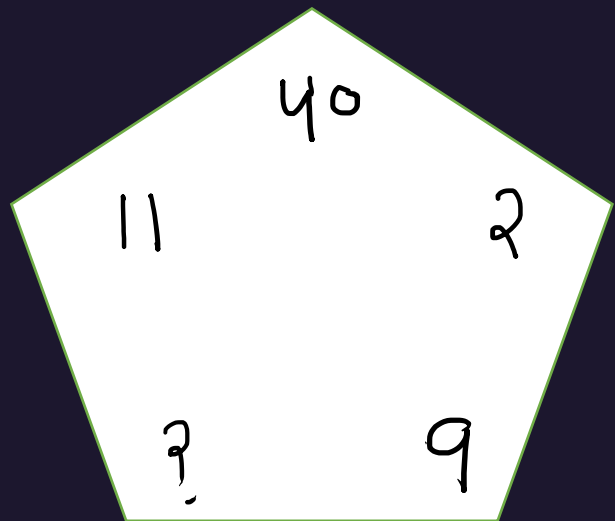
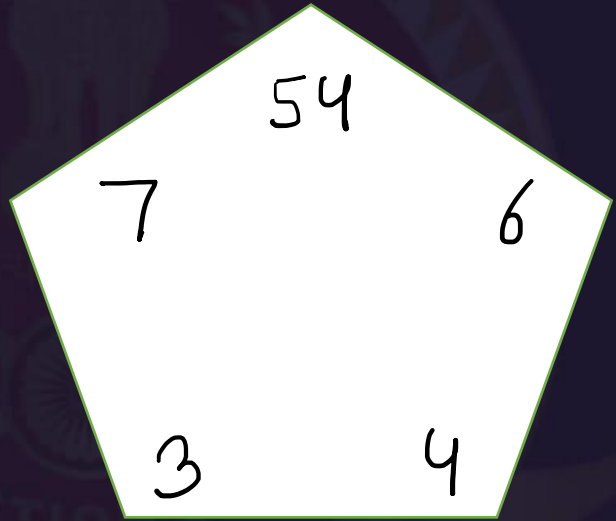
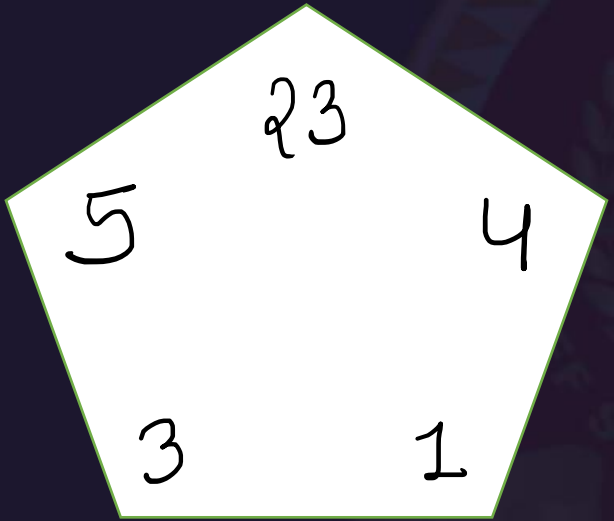
- 1. 35
- 2. 72
- 3. 94
- 4. 71





Find the missing :-


- 1. 04
- 2. 01
- 3. 02
- 4. 03





Find the missing :-

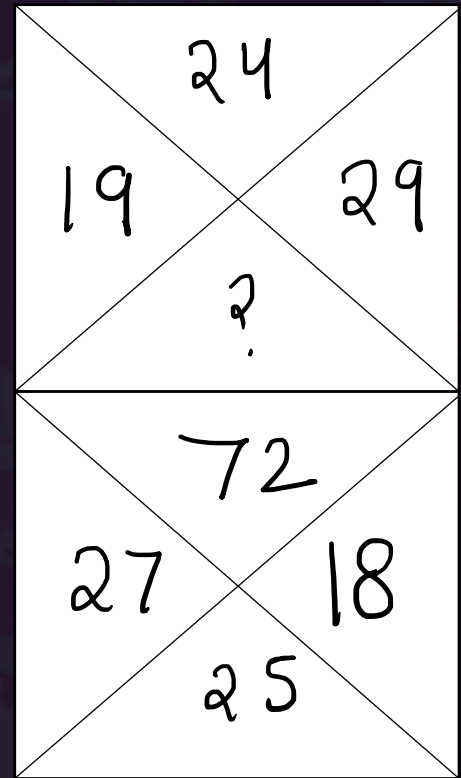
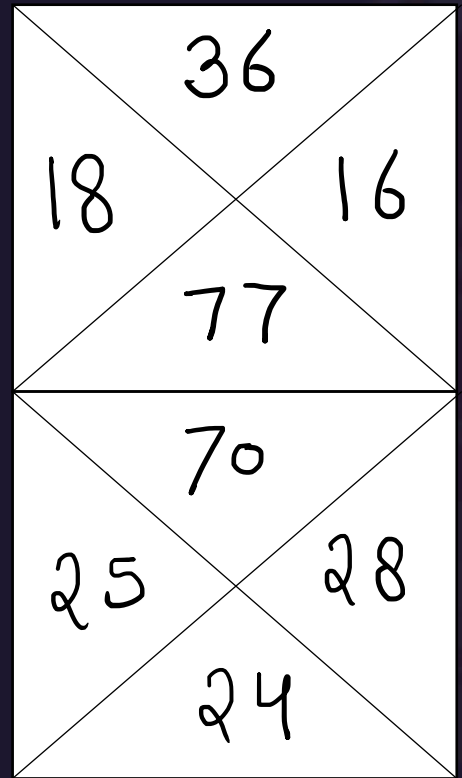
- 1. 92
- 2. 72
- 3. 62
- 4. 99





Find the option which should replace (?)

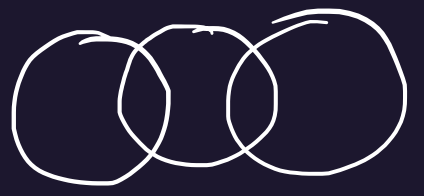
- (A) 79
- (B) 70
- (C) 75
- (D) 73





Find the option which should replace (?)

Knife , Metal , Measure Tape



(A)



(B)



(C)



(D)



SSC MTS/HAWALDAR/CHSL

Live at 08:30 PM



Find the odd (?)

- (A) 256 : 64**
- (B) 784 : 196**
- (C) 676 : 256**
- (D) 324 : 81**

