



SSC GD CONSTABLE 2021



REASONING

परीक्षा में पूछे गये प्रश्न

•Live  **08:30 PM**





Don't Let Your Studies Get Impacted By COVID-19 Pandemic

Stay Home & Study Online With Mahendras Hybrid Model

Features

- Offline Classes ↔ Live Interactive Online Classes
- Same Faculty
- Same Batch
- Same Batch Timing
- Online Library Facility
- Recorded Video
- PDFs
- Classes In Both Model

CONTACT US:

1800-103-5225

www.mahendras.org





UPCOMING ONLINE BATCHES

November 2021

17 Nov 2021

01:00 PM to 3:00 PM

IBPS SO PRE CRASH COURSE
(BANK-SO)

08:00 AM to 10:00 AM

LIVE PREMIUM GREEN CARD
(BANK-PO & CLERK)

05:30 PM to 07:30 PM

LIVE PREMIUM GREEN CARD
(BANK-PO & CLERK)

10:30 AM to 12:30 PM

LIVE PREMIUM SILVER CARD
(SSC CGL & CHSL)

BILINGUAL

24 Nov 2021

10:30 AM to 12:30 PM

LIVE PREMIUM GREEN CARD
(BANK-PO & CLERK)

07:30 PM to 09:30 PM

LIVE PREMIUM GREEN CARD
(BANK-PO & CLERK)

03:00 PM to 5:00 PM

LIVE PREMIUM SILVER CARD
(SSC CGL & CHSL)

BILINGUAL



SSC GD 2021 Exam Analysis: Check difficulty level & number of good attempts

<i>Name of the section</i>	<i>Difficulty level</i>	<i>Number of good attempts</i>
General Intelligence and Reasoning	Easy to Moderate	20 to 22
General Knowledge and General Awareness	Easy to Moderate	18 to 20
Elementary Mathematics	Moderate	16 to 18
English/ Hindi	Easy to Moderate	21 to 23

Topic	No of Questions Asked in SSC GD Constable Exam
Coding-Decoding	2
Statement Conclusion	–
Missing Term	2
Venn Diagram	1
Syllogism	2
Paper Folding	1
Blood relation & order and ranking	2
Mathematics Operation	1
Analogy & Classification	6
Series	4
Dice & Sequence	2
Puzzle (Linear Sitting Arrangement)	2
Mirror Image	1
Hidden Figure	1
Complete Figure & Figure Counting	2
Total	25



Cinderella _____ 17 hours ago

shaandaar session sir 🙏🙏🙏

24👍👍👍👍👍👍

👍 1 🗨️ REPLY

▶ [View reply from Mahendras : Online Videos For Govt. Exams](#)



🌸 PUJA KUNDU 🌸 18 hours ago

The answer is --6+6+6+3+3=24📌📌📌 ...Majedar session sir...thank you soo much sir for the session 🙏🙏🙏

👍 1 🗨️ REPLY

▶ [View reply from Mahendras : Online Videos For Govt. Exams](#)



Chhavi Saxena 17 hours ago

Home work answer is 24

Nice session sir Thank you 🙏🙏🙏

👍 1 🗨️ REPLY

▶ [View reply from Mahendras : Online Videos For Govt. Exams](#)



SANIA _____ 17 hours ago

dhaansu session sir 🙏🙏🙏

24👍👍👍👍👍👍

👍 1 🗨️ REPLY

▶ [View reply from Mahendras : Online Videos For Govt. Exams](#)



Pushpendra Rajpoot 2 minutes ago

24 ✓✓✓✓✓✓✓✓

👍 🗨️ REPLY



Ayush Chauhan 3 hours ago

24



REPLY



Kapil Bhagat 18 hours ago

24



REPLY



Mannveer Singh 17 hours ago

24



1



REPLY

[View reply from Mahendras : Online Videos For Govt. Exams](#)



Masum Idki 🤔 17 hours ago

24



1



REPLY

[View reply from Mahendras : Online Videos For Govt. Exams](#)



Princess Nitya 18 hours ago

24



1



REPLY

[View reply from Mahendras : Online Videos For Govt. Exams](#)



Sirvesh yadav Sirvesh yadav 17 hours ago

21 hi dkhe



1



REPLY



Pratibha Yadav 18 hours ago

A



1



REPLY

[View reply from Mahendras : Online Videos For Govt. Exams](#)

Find the missing :-

Plate : Crockery :: Spoon : ?

प्लेट : क्रॉकरी :: चम्मच : ?

(A) Knife / चाकू

(B) Fork / कांटा

(C) Chinaware / चीनी मिट्टी के बरतन

(D) Cultery / कटलरी



Cutlery



salad servers



fork



knife



tablespoon



dessert spoon



chopsticks



steak knife



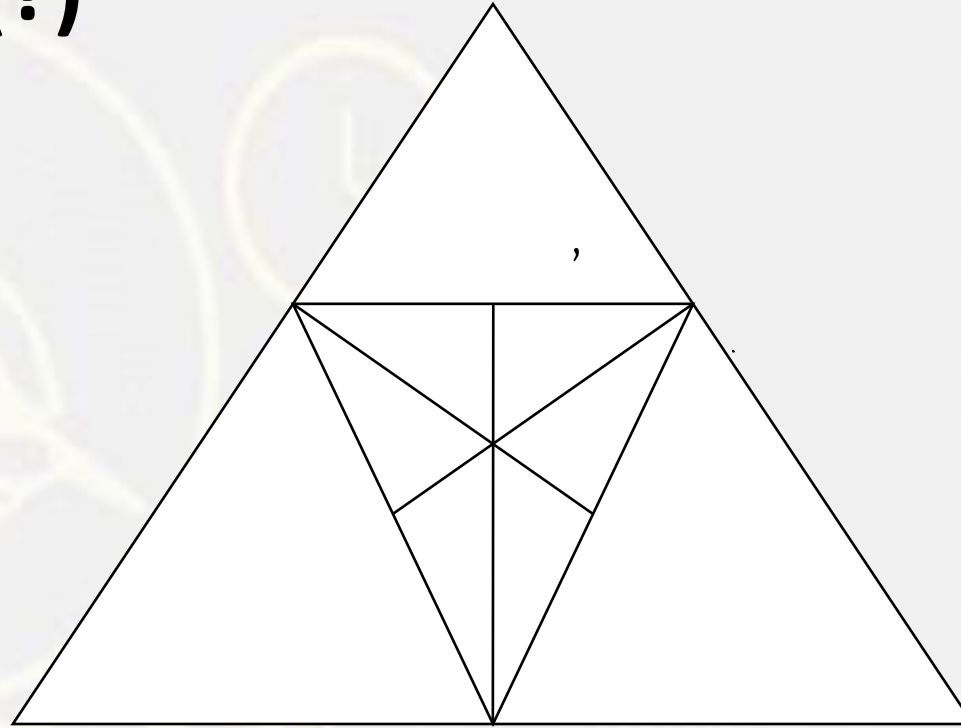
teaspoon



soup spoon

Find the triangle (?)

1. 16
2. 18
3. 19
4. 20



Find the missing :-

- (A) 7
- (B) 8
- (C) 5
- (D) 6

12	9	14
7	?	8
14	10	4
6	18	7



Find the odd (?)

1. Tunnel / सुरंग
2. Bunker / बंकर
3. Well / कुंआ
4. Building / इमारत



Find the option which should replace (?)

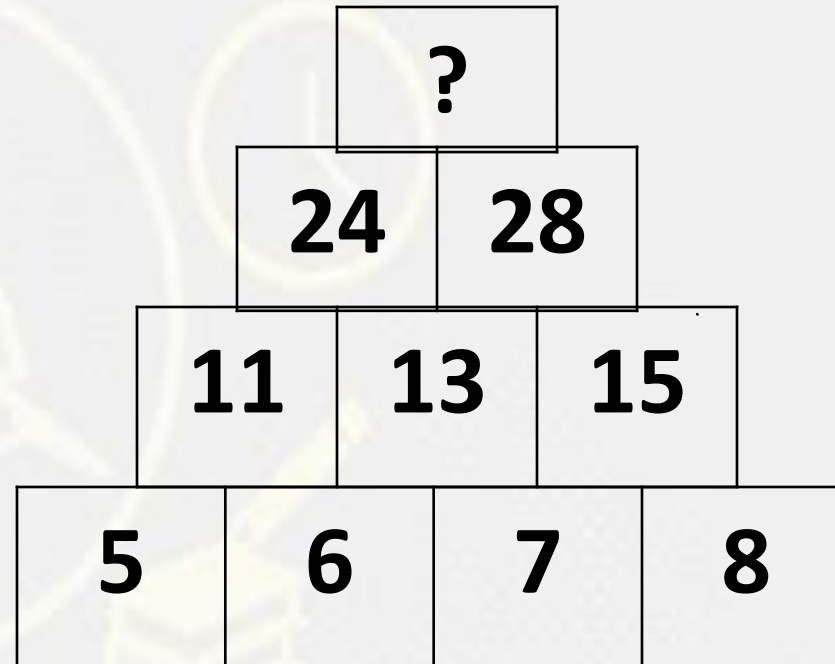


- (A) 108
- (B) 216
- (C) 144
- (D) 288

7	6	5'
2	3	3
98	?	75

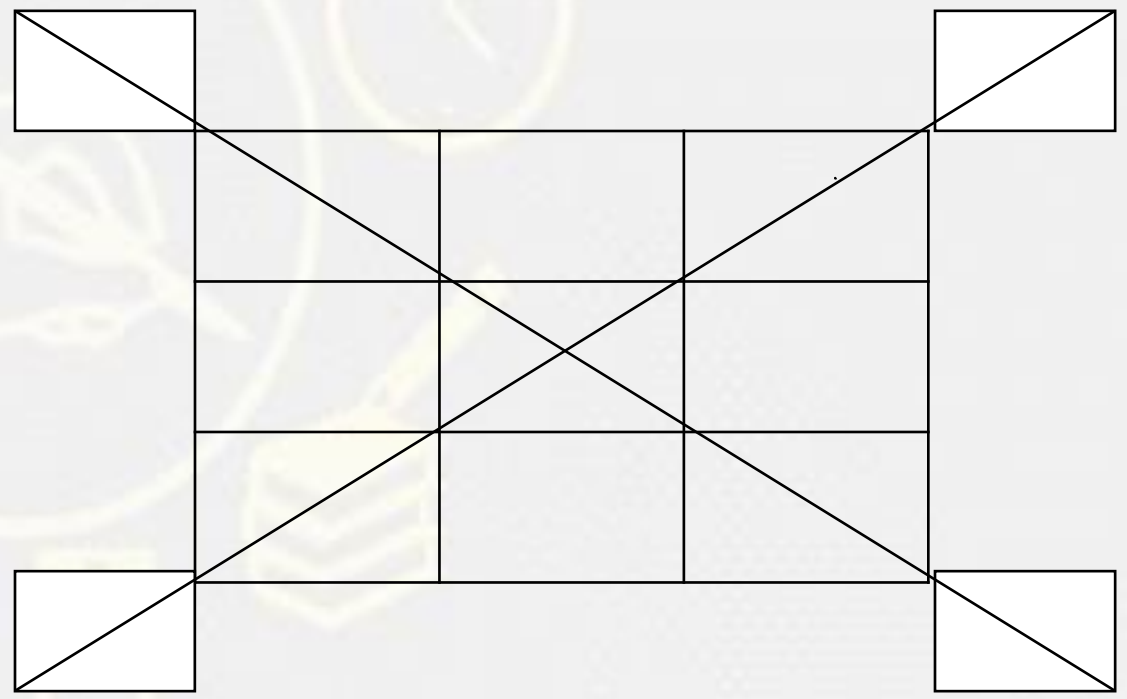
Find the missing :-

- (A) 48
- (B) 52
- (C) 50
- (D) 46



Find the triangle :-

- (A) 20**
- (B) 24**
- (C) 28**
- (D) 32**



Find the option which should replace (?)

$$2 (3) 4 = 14$$

$$3 (4) 6 = 60$$

$$4 (5) 7 = ?$$

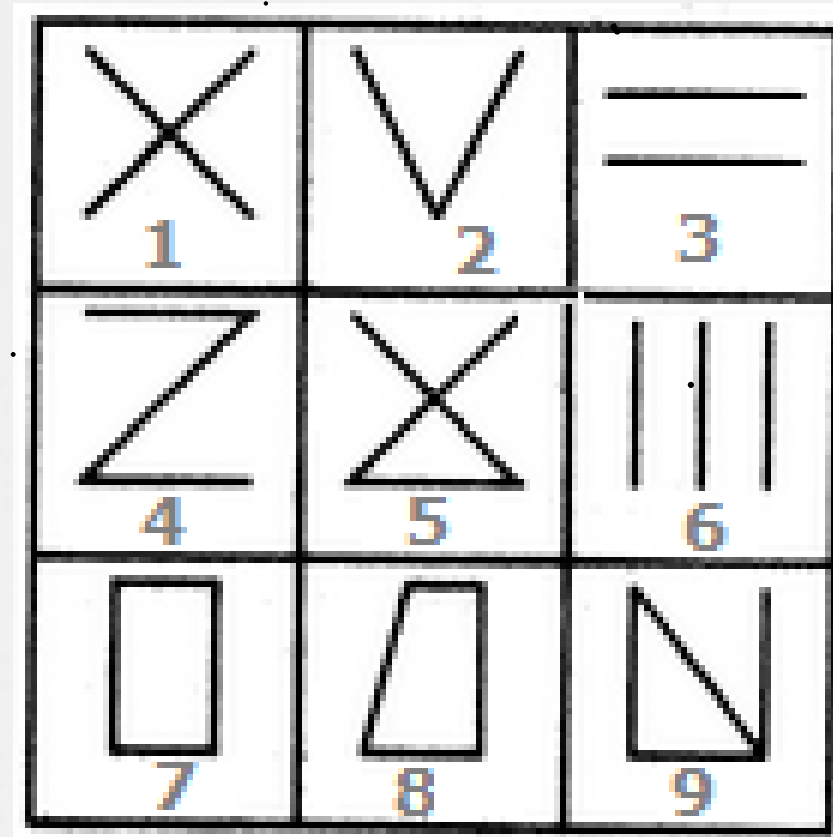
- A. 72
- B. 84
- C. 96
- D. 108



Group the given figures into three classes using each figure only once.



- A. 1,2,3 ; 4,5,6 ; 7,8,9
- B. 1,3,5 ; 2,4,6 ; 7,8,9
- C. 1,5,9 ; 3,6,2 ; 4,7,8
- D. 1,9,7 ; 2,8,5 ; 3,4,6



Which number will replace the question mark ?

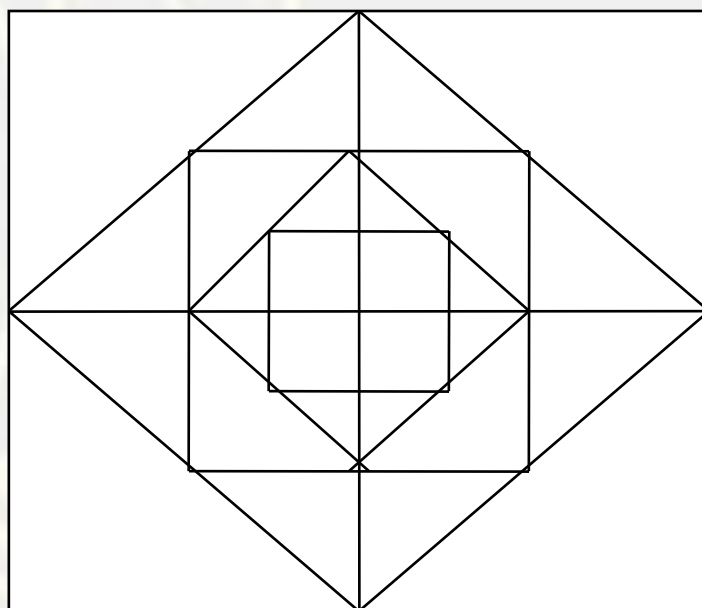
963	2	844
464	?	903

- (A) 2 (B) 3
(C) 4 (D) 5



Find the number of square (?)

- (A) 12**
- (B) 15**
- (C) 17**
- (D) 18**



Rinku was born on April 10, 1975. Tinku was born 15 days before Rinku . If Republic day in that year was on Monday , on which day was Tinku born ?

रिंकू का जन्म 10 अप्रैल 1975 को हुआ था। टिंकू का जन्म रिंकू से 15 दिन पहले हुआ था। यदि उस वर्ष में रेप्लिक दिवस सोमवार को था, तो टिंकू का जन्म किस दिन हुआ था?

- (A) Tuesday
- (B) Thursday
- (C) Wednesday
- (D) Friday

