



# SSC CHSL 2021-22

**REASONING**

**MEMORY BASED**

**QUESTION PAPER**

**(MOST EXPECTED QUESTIONS)**

**ALL SHIFTS**

**LIVE**

**08:30 PM**





# UPCOMING ONLINE BATCHES

## May 2022

04 May 2022

05:30 PM to 07:30 PM

**BANK ONLINE LIVE CLASS**

10:30 AM to 12:30 PM

**SSC ONLINE LIVE CLASS**

**BILINGUAL**

11 May 2022

10:30 AM to 12:30 PM

**BANK ONLINE LIVE CLASS**

01:00 PM to 03:00 PM

**SSC ONLINE LIVE CLASS**

**BILINGUAL**

18 May 2022

07:30 PM to 09:30 PM

**BANK ONLINE LIVE CLASS**

05:30 PM to 07:30 PM

**SSC ONLINE LIVE CLASS**

**BILINGUAL**

04:00 PM to 06:00 PM

**BANK ONLINE LIVE CLASS**

**ENGLISH & BENGALI**

25 May 2022

03:00 PM to 05:00 PM

**BANK ONLINE LIVE CLASS**

08:00 AM to 10:00 AM

**SSC ONLINE LIVE CLASS**

**BILINGUAL**

05:30 PM to 09:30 PM

**CUET ONLINE LIVE CLASS**

**BILINGUAL**



Vishnu Gupta 12 hours ago 3 subscribers

D % is the right ans very super nice session sir thank you 🙏 sir love ❤️ you sir ❤️ 🙏

👍 🗨️ 1b ▼ 📄 REPLY ➡️

▼ [View reply from Mahendras : Online Videos For Govt. Exams](#)



SANIA \_\_\_\_ 4 hours ago

Mast session sir 🙏🙏🙏🙏

#% 🔥🔥🔥🔥

👍 🗨️ 1b ▼ 📄 REPLY ➡️



Chhavi Saxena 14 hours ago

Home work answer is option D (%#)

Question mein Indian , Go ,Heroes ka code @@, #@, @# given hai ....By option elimination (%#) will be the answer....Nice session sir Thank you so much 🙏🙏

👍 🗨️ 1b ▼ 📄 REPLY ➡️

▼ [View reply from Mahendras : Online Videos For Govt. Exams](#)



arun ch mandal 13 hours ago

#%

thanks sir

nice session sir

👍 🗨️ 1b ▼ 📄 REPLY ➡️

▼ [View reply from Mahendras : Online Videos For Govt. Exams](#)



RAHUL KUMAR KANWAR 15 hours ago

D

👍 1 🗨️ 1b ▼ 📄 REPLY ➡️

▼ [View reply from Mahendras : Online Videos For Govt. Exams](#)





In a certain code language,

Indian , GO , Heroes is written as @@ , #@ , @#

What is the code for 'CAR'

- A. @@
- B. @@
- C. #@
- D. #%



Find the option which should replace (?)

CAT = 8

DEAF = 4

FED = ?

A. 5

B. 6

C. 15

D. 10






Find the option which should replace (?)

2353 : 30 :: 4215 : ?

- A. 30
- B. 32
- C. 35
- D. 39





Find the odd one out(?)

- A. ( 0 , 1 )
- B. ( 2 , 3 )
- C. ( 3 , 8 )
- D. ( 4 , 27 )





Find the option which should replace (?)

<b>3</b>	<b>8</b>	<b>10</b>	<b>2</b>	<b>?</b>	<b>1</b>
<b>6</b>	<b>56</b>	<b>90</b>	<b>2</b>	<b>20</b>	<b>0</b>

- A. 5**
- B. 7**
- C. 0**
- D. 3**





**Find the odd one out(?)**

- A. 2047**
- B. 4702**
- C. 6041**
- D. 4306**





**Rahul is the husband of my father's granddaughter , so I am**

**Rahul's :-**

**राहुल मेरे पिता की पोती/नवासी का पति है, इसलिए मैं राहुल का:**




- A. Father – in – law**
- B. Mother- in -law**
- C. Either A or b**
- D. Brother- in - Law**



Find the number of triangle (?)

- (A) 18
- (B) 16
- (C) 20
- (D) 22

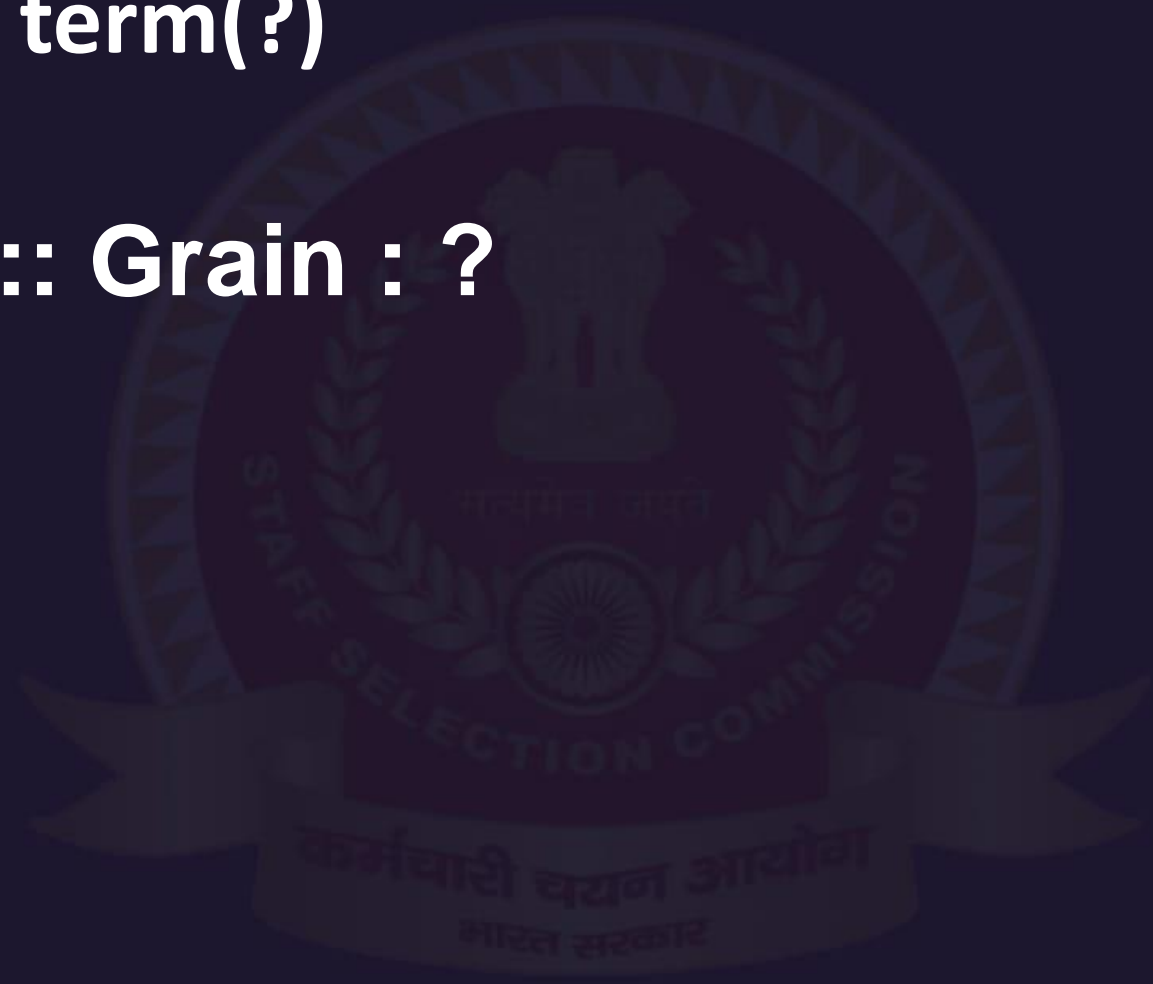




Find the missing term(?)

Water : Tawre :: Grain : ?

- (A) Grain
- (B) Nagri
- (C) Argni
- (D) Argin








Find the missing term(?)

562 : 388 :: 654 : ?

- (A) 581
- (B) 587
- (C) 579
- (D) 893





Find the missing term(?)

**NIGERIA : 5975991**

**GINGER : ?**

- (A) 797595**
- (B) 795759**
- (C) 797559**
- (D) 795795**



Find the missing term(?)

11 : 5 :: 17 : ?

- (A) 6
- (B) 8
- (C) 10
- (D) 12





**Find the missing term(?)**

$$5 : 21 :: 7 : ?$$

- (A) 25**
- (B) 49**
- (C) 43**
- (D) 30**







Find the missing term(?)

30 : 16 :: 102 : ?

- (A) 49
- (B) 52
- (C) 61
- (D) 98





Find the option which should replace (?)

AF : 9 :: AA : 4 :: AE

- A. 10
- B. 15
- C. 9
- D. 12





Find the option which should replace (?)

16 : 124 :: 11 : ?

- (A) 88
- (B) 86
- (C) 24
- (D) 22





**Find the option which should replace (?)**

$$324 + 289 = 35$$

$$441 + 484 = 43$$

$$625 + 400 = 45$$

$$256 + 729 = ?$$

- (A) 29**
- (B) 43**
- (C) 40**
- (D) 37**







Find the option which should replace (?)

$16 : 74 :: ? : 164$

- (A) 16
- (B) 12
- (C) 19
- (D) 18





Find the option which should replace (?)

$$6 @ 4 @ 3 = 29$$

$$3 @ 8 @ 7 = 338$$

$$9 @ 8 @ 2 = ?$$

- (A) 8
- (B) 9
- (C) 56
- (D) 165





Find number of triangle in given figure ?

त्रिभुज की संख्या ज्ञात कीजिये?

(A) 32

(B) 27

(C) 41

(D) 37

