

RRB NTPC CBT 2/GROUP D



REASONING

अबकी बार **RAILWAY** पार

Complete Revision



LIVE 7:30 PM





Don't Let Your Studies Get Impacted By COVID-19 Pandemic

Stay Home & Study Online With Mahendras Hybrid Model

Features

- Offline Classes ↔ Live Interactive Online Classes
- Same Faculty
- Same Batch
- Same Batch Timing
- Online Library Facility
- Recorded Video
- PDFs
- Classes In Both Model

CONTACT US:

1800-103-5225

www.mahendras.org





UPCOMING ONLINE BATCHES

January 2022

05 Jan 2022

08:00 AM to 10:00 AM

BANK ONLINE LIVE CLASS

10:30 AM to 12:30 PM

SSC ONLINE LIVE CLASS

01:00 PM to 03:00 PM

SSC ONLINE LIVE CLASS

05:30 PM to 07:30 PM

BANK ONLINE LIVE CLASS

BILINGUAL

12 Jan 2022

08:00 AM to 10:00 AM

SSC ONLINE LIVE CLASS

10:30 AM to 12:30 PM

BANK ONLINE LIVE CLASS

03:00 PM to 05:00 PM

BANK ONLINE LIVE CLASS

05:30 PM to 07:30 PM

SSC ONLINE LIVE CLASS

BILINGUAL

19 Jan 2022

08:00 AM to 10:00 AM

BANK ONLINE LIVE CLASS

01:00 PM to 03:00 PM

BANK ONLINE LIVE CLASS

03:00 PM to 05:00 PM

SSC ONLINE LIVE CLASS

07:30 PM to 09:30 PM

SSC ONLINE LIVE CLASS

BILINGUAL

27 Jan 2022

10:30 AM to 12:30 PM

BANK ONLINE LIVE CLASS

07:30 PM to 09:30 PM

BANK ONLINE LIVE CLASS

08:00 AM to 10:00 AM

SSC ONLINE LIVE CLASS

01:00 PM to 03:00 PM

SSC ONLINE LIVE CLASS

BILINGUAL



RRB NTPC Stage-2 Exam Pattern

Sections	No. of Questions	Total Marks	Duration
Mathematics	35	35	90 minutes
General Intelligence and Reasoning	35	35	
General Awareness	50	50	
Total	120	120	



🌸 PUJA KUNDU 🌸 14 hours ago

The answer is 10 yrs $((45-5=40 \div 2=20-10=10))$THANK YOU FOR THE AMAZING SESSION SIR 🙏🙏🙏

👍 🗨️ 📄 ▼ 📄 REPLY



SAPANA 12 hours ago

Ans....10 year

Nice session sir 👍

Thank you sir 🙏🙏🙏

👍 1 🗨️ 📄 ▼ 📄 REPLY



Viśhñù Güptâ 14 hours ago

Ans- 10 is the right ans

Very dhashu session sir thank you 🙏 sir love you 🥰 sir

👍 🗨️ 📄 ▼ 📄 REPLY



SANIA _____ 3 hours ago

mast session sir 🙏

10 🔥🔥

👍 🗨️ 📄 ▼ 📄 REPLY

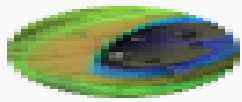


RASHMI SONI 📄 ✎ 14 hours ago

HW ANSWER, 10

AWESOME SESSION


👍 🗨️ 📄 ▼ 📄 REPLY



Ashwini Kumar 9 hours ago

10 Years

     [REPLY](#)



puspranjan singh 14 hours ago

10 years

     [REPLY](#)



Parikh Akash 13 hours ago

10 🙏🙏

     [REPLY](#)



SOUVIK DUTTA 14 hours ago

answer is 10

     [REPLY](#)



Anushka Mishra 13 hours ago

10 is the correct answer

     [REPLY](#)



Kapil Bhagat 14 hours ago

10

     [REPLY](#)

Your age is 10 years less than half of your mother's age . Mother is 5 years younger than your father , if your father is 45 years old , then what is your age ?

आपकी उम्र आपकी माँ की उम्र के आधे से 10 साल कम है। माँ आपके पिता से 5 साल छोटी है, अगर आपके पिता की उम्र 45 साल है, तो आपकी उम्र क्या है?

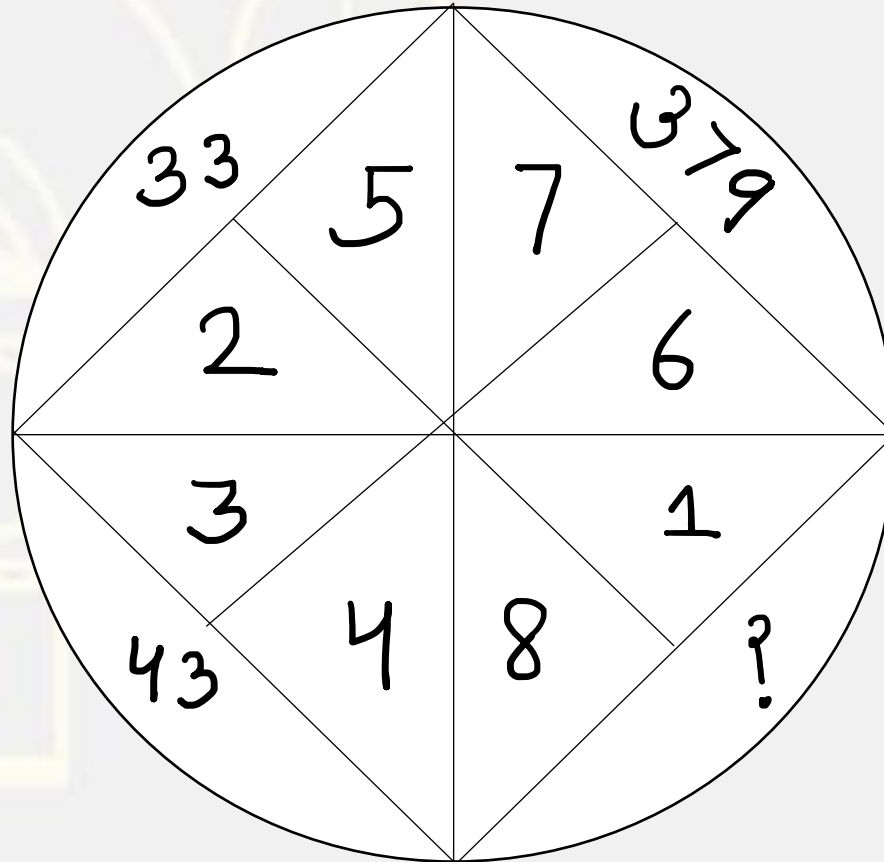
- (A) 20 years
- (B) 15 years
- (C) 10 years
- (D) 5 years



Find the option which should replace (?)



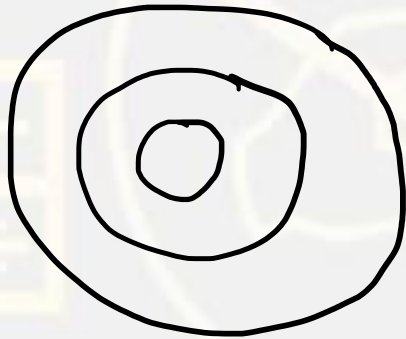
- (A) 513
- (B) 58
- (C) 265
- (D) 380



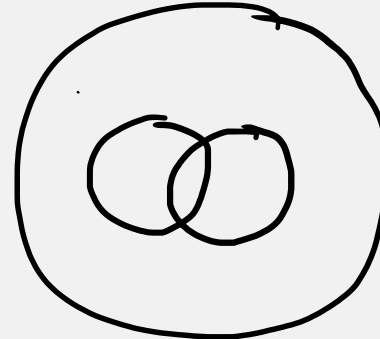
Which represents **Carrot , Food , Vegetable** ?

जो **गाजर, भोजन, सब्जी** का प्रतिनिधित्व करता है

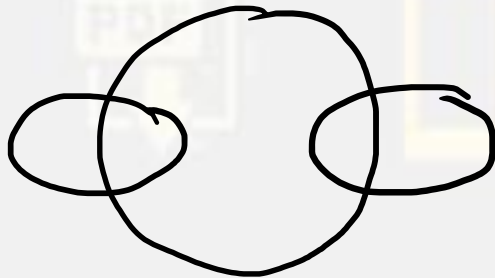
(A)



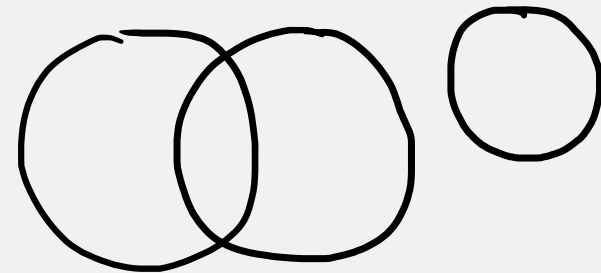
(B)



(C)



(D)



What can be the last day of the century ?
सदी का आखिरी दिन क्या हो सकता है



- (A) Tuesday
- (B) Thursday
- (C) Saturday
- (D) Wednesday

Sonu's brother Monu 536 days older to him while his sister Tonu 75 weeks older to Monu . If Tonu was born on Wednesday , on Which days was Sonu born ?

सोनू का भाई मोनू उससे 536 दिन बड़ा है जबकि उसकी बहन टोनू मोनू से 75 सप्ताह बड़ी है। यदि टोनू का जन्म बुधवार को हुआ था, तो सोनू का जन्म किन दिनों में हुआ था?

- (A) Saturday**
- (B) Sunday**
- (C) Friday**
- (D) Monday**



Find the missing ?

- (A) 22
- (B) 63
- (C) 190
- (D) 55

3	6	7
9	18	21
27	54	?
81	162	189



Find the missing ?

732 , 744 , 764 , 794 , ?

- (A) 836
- (B) 830
- (C) 834
- (D) 850



Find the missing ?

101 , 103 , 99 , 105 , 97 , ? , 95

- (A) 93
- (B) 104
- (C) 108
- (D) 107



Find the missing ?

0 , 4 , 18 , 48 , 100 , 180 , ?

- (A) 294
- (B) 211
- (C) 186
- (D) 222



Find the missing ?

8 , ? , 30 , 105 , 472.5 , 2598.75

- (A) 24
- (B) 10
- (C) 12
- (D) 16



Find the missing ?

3 , 6 , 10 , 20 , 33 , 62 , 94

- (A) 10**
- (B) 20**
- (C) 33**
- (D) 62**



Find the missing ?

484 , 464 , 441 , 420 , 400 , 378 , 360 , 338 , 324 , 300

- (A) 441
- (B) 400
- (C) 360
- (D) 338



Find the missing :-

- (A) 6
- (B) 0
- (C) 9
- (D) 4

9	8	7
4	5	6
20	15	?



Find the missing :-

- (A) 125
- (B) 120
- (C) 100
- (D) 140

51	65	?
06	15	20
08	04	05
03	05	20



Find the option which should replace (?)

$$35 : 122 :: 143 : ?$$

- (A) 216
- (B) 289
- (C) 290
- (D) 225

