

TOPIC WISE REASONING



**Blood Relation, Sitting
Arrangement, Missing
Number, Paper Folding**



(SSC MTS, Steno & GD

Previous Year Paper Questions)

ALL COMPETITIVE EXAMS

 2:00 PM

LIVE 



Don't Let Your Studies Get Impacted By COVID-19 Pandemic

Stay Home & Study Online With Mahendras Hybrid Model

Features



Offline Classes



Live Interactive Online Classes



Same Faculty



Same Batch



Same Batch Timing



Online Library Facility



Recorded Video



PDFs



Classes In Both Model

CONTACT US:

1800-103-5225

www.mahendras.org





UPCOMING ONLINE BATCHES

October 2021

06 Oct 2021

08:00 AM to 10:00 AM

LIVE PREMIUM GREEN CARD
(BANK-PO & CLERK)

01:00 PM to 03:00 PM

LIVE PREMIUM GREEN CARD
(BANK-PO & CLERK)

03:00 PM to 05:00 PM

LIVE PREMIUM SILVER CARD
(SSC CGL & CHSL)

10:30 AM to 12:30 PM

LIVE CLASS NIELIT CARD
(CCC)

BILINGUAL

13 Oct 2021

10:30 AM to 12:30 PM

LIVE PREMIUM GREEN CARD
(BANK-PO & CLERK)

05:30 PM to 07:30 PM

LIVE PREMIUM GREEN CARD
(BANK-PO & CLERK)

07:30 PM to 09:30 PM

LIVE PREMIUM SILVER CARD
(SSC CGL & CHSL)

BILINGUAL

20 Oct 2021

03:00 PM to 05:00 PM

LIVE PREMIUM GREEN CARD
(BANK-PO & CLERK)

08:00 AM to 10:00 AM

LIVE PREMIUM SILVER CARD
(SSC CGL & CHSL)

01:00 PM to 03:00 PM

LIVE CLASS CTET CARD
(CTET)

BILINGUAL

27 Oct 2021

08:00 AM to 10:00 AM

LIVE PREMIUM GREEN CARD
(BANK-PO & CLERK)

07:30 PM to 09:30 PM

LIVE PREMIUM GREEN CARD
(BANK-PO & CLERK)

10:30 AM to 12:30 PM

LIVE PREMIUM SILVER CARD
(SSC CGL & CHSL)

BILINGUAL



S No	Name of Examination	Paper/ Stage	Schedule of Examination
1	Combined Graduate Level Examination-2019	Skill Test	15.09.2021 to 16.09.2021
2	Junior Engineer (Civil, Mechanical, Electrical and Quantity Surveying & Contracts) Examination, 2020	Paper-II	26.09.2021
3	Multi Tasking (Non-Technical) Staff Examination, 2020	Paper-I	05.10.2021 to 20.10.2021
4	Stenographer Grade 'C' and 'D' Examination, 2019	Skill Test	21.10.2021 To 22.10.2021



🌸 PUJA KUNDU 🌸 1 day ago

Option "5" IS THE CORRECT ANSWER.....SUPERB SESSION SIR🙏🙏...AJ BAHAT NAYA NAYA LOGIC SIKHANE KO MILATHANK YOU SOO MUCH SIR
🙏🙏

👍 🗨️ REPLY



Radha Garima 1 day ago

Answer : 5
Awasome session sir 🙏🙏

👍 🗨️ REPLY



Manidipa Mandal 1 day ago

Option -5
Thank you sir....nice session sir 🙏🙏🙏

👍 🗨️ REPLY



Roshni Khandelwal 1 day ago

Option 5 is correct answer
Very nice session sir thank you

👍 🗨️ REPLY



Ankit Vish 1 day ago

Option 5. lajawab session Guruji

👍 2 🗨️ REPLY



DEEKSHA SHARMA 1 day ago

Home work answer is option 5
nice session sir 🙏🙏🙏🙏

👍 🗨️ REPLY



nikita Chauhan 1 day ago

Homework ANS-----
Option EEE 555
Thank you sir 😊🙏🙏


👍 1 🗨️ REPLY



Kaushal116 1 day ago

Last que. And-5 nice session sir 🙏🙏
Thank you sir 🙏🙏🙏

👍 🗨️ REPLY



Sania S 1 day ago

Shandaar session sir 🙏🙏
option 5🔥🔥🔥

👍 🗨️ REPLY



Masum Idki 😊 1 day ago


Opt 5
Very nice session

👍 🗨️ REPLY



bablu sharma 1 day ago
Ans5 lajaavab session

REPLY



Abhishek Rathore 10 hours ago
Option 5 is correct

REPLY



Itu Soren 1 day ago
Answer: - 5

REPLY



Uday Sankar 1 day ago
Sir option 5..ans

REPLY



Vardhman Daga 1 day ago
5

REPLY



Hrithik_____ 1 day ago
Option 5

REPLY



Subhakar K201 1 day ago
ANS :- EEE 555

REPLY



Nishu Gupta 1 day ago
Ans. 5

REPLY



super 🧿🧿 mehndi 1 day ago
Hw Ans ..5

REPLY

A#B	means	A is the father of B. (A, B का पिता है)
A%B	means	A is the sister of B. (A, B की बहन है)
A@B	means	A is the wife of B. (A, B की पत्नी है)
A*B	means	A is the brother of B. (A, B का भाई है)
A&B	means	A is the son of B. (A B का पुत्र है)

Q- Which of the following means A is the grandfather of R?

निम्न में से किसका अर्थ है A,R का दादा है ?

- (1) F&A@J#K%R
- (2) U*R%H&A%K
- (3) A@H#J*U%R
- (4) A@H#K*M#R
- (5) A#B*C#R%H

Find the option which should replace (?)

$$66 * 40 = 3$$

$$93 * 24 = 2$$

$$82 * 20 = ?$$

A. 5

B. 2

C. 3

D. 4



Find the option which should replace (?)

$$2.75 : 13/4 :: 3.75 : ?$$

- (A) $17/4$
- (B) $19/4$
- (C) $15/4$
- (D) $11/4$



Find the Missing one (?)



Hand : Finger : Ring

हाथ: उंगली: अंगूठी

(A) Face : Nose : Nose pin / चेहरा: नाक: नाक पिन

(B) Earring : Ear : jewel / कान: कान: गहना

(C) Cap : Head : Hair / टोपी: सिर: बाल

(D) Anklet : Foot : Ankle / पायल: पैर: पायल

Find the Missing one (?)

22 : 10 :: 32 : ?

- (A) 12
- (B) 15
- (C) 14
- (D) 13

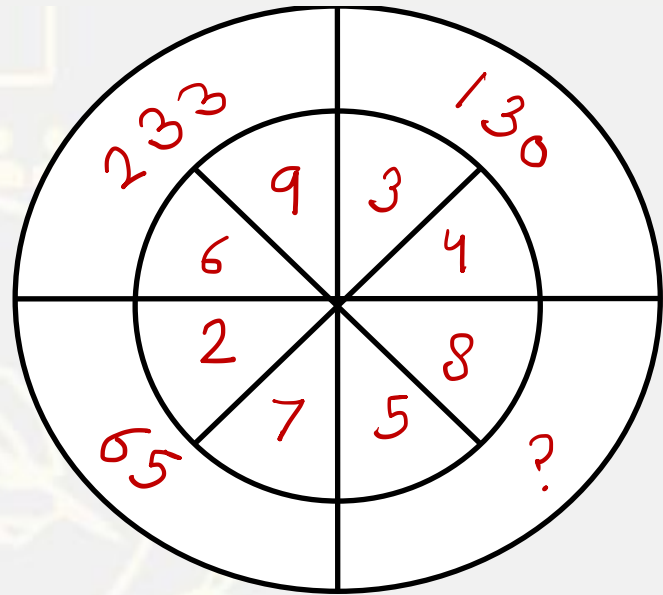


Find the missing :-

- (A) 1
- (B) 2
- (C) 3
- (D) 4

2	4	14
3	5	22
?	6	32





- (A) 300
- (B) 343
- (C) 306
- (D) 204

Find the missing :-

- (A) 16
- (B) 12
- (C) 28
- (D) 13

5	4	3
8	7	1
6	2	9
38	15	?



Find the missing :-

- (A) 19
- (B) 17
- (C) 15
- (D) 20

4	6	3
9	5	2
6	8	8
?	24	18



Find the missing :-

- (A) 3
- (B) 4
- (C) 5
- (D) 6

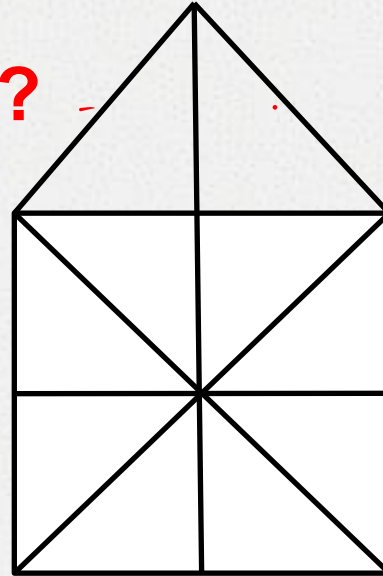
3	4	2	6
?	2	5	3
4	2	2	7



Find number Straight line ?

सीधी रेखाओं की संख्या ज्ञात कीजिए?

- (A) 19
- (B) 21
- (C) 10
- (D) 9



Find the option which should replace (?)

$$8 + 8 = 72$$

$$5 + 5 = 30$$

$$7 + 7 = 56$$

$$6 + 6 =$$

(A) 47

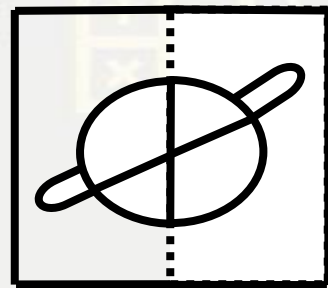
(B) 46

(C) 41

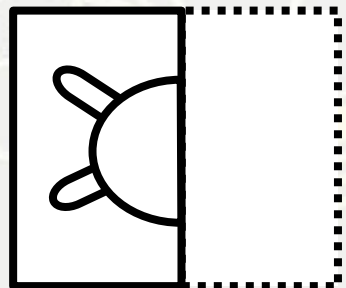
(D) 42



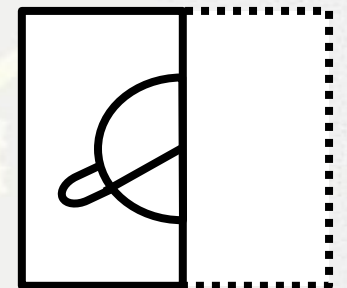
Find out from amongst the four alternatives as to how the pattern would appear when the transparent sheet is folded at the dotted line.



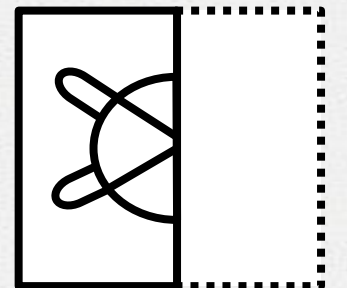
X



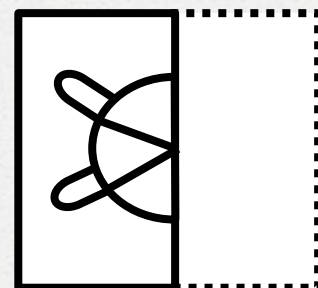
1



2



3



4

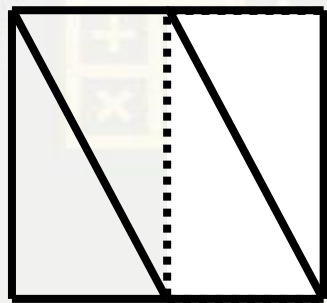
(A) 1

(B) 3

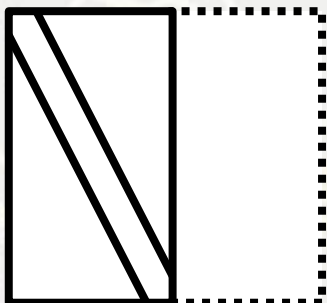
(C) 4

(D) 2

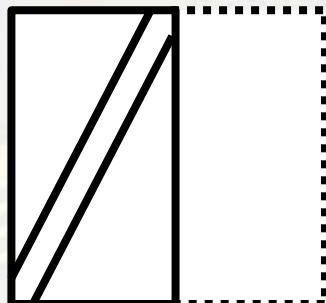
Find out from amongst the four alternatives as to how the pattern would appear when the transparent sheet is folded at the dotted line.



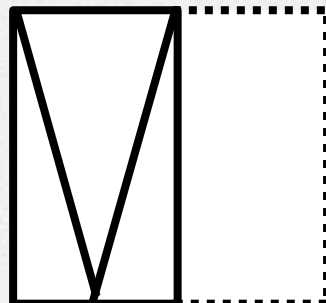
X



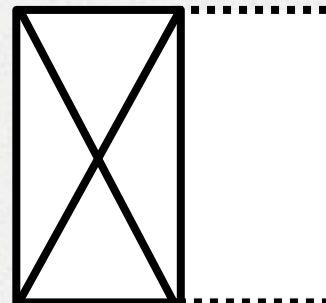
1



2



3



4

(A) 1

(B) 3

(C) 4

(D) 2

There are five houses A,B,C,D and E. 'A' is right of 'B' and 'E' is left of 'C' and right of 'A'. 'B' is right of 'D'. The middle house is

A, B, C, D और E पांच घर है A, B के दायीं ओर है और E, C के बाएं ओर A के दायीं ओर है। B, D के दायीं ओर है। कौन सा घर मध्य में है?

(A) A

(B) B

(C) C

(D) D