



RRB GROUP D 2022



REASONING

MOST EXPECTED PAPERS

PAPER - 7

LIVE  **08:30 PM**





UPCOMING ONLINE BATCHES

August 2022

03 AUG 2022

03:00 PM to 05:00 PM

BANK ONLINE LIVE CLASS

01:00 PM to 03:00 PM

SSC ONLINE LIVE CLASS

BILINGUAL

10 AUG 2022

05:30 PM to 07:30 PM

BANK ONLINE LIVE CLASS

08:00 AM to 10:00 AM

SSC ONLINE LIVE CLASS

BILINGUAL

17 AUG 2022

08:00 AM to 10:00 AM

BANK ONLINE LIVE CLASS

05:30 PM to 07:30 PM

SSC ONLINE LIVE CLASS

BILINGUAL

24 AUG 2022

07:30 PM to 09:30 PM

BANK ONLINE LIVE CLASS

10:30 AM to 12:30 PM

SSC ONLINE LIVE CLASS

BILINGUAL

31 AUG 2022

10:30 AM to 12:30 PM

BANK ONLINE LIVE CLASS

07:30 PM to 09:30 PM

SSC ONLINE LIVE CLASS

BILINGUAL

10 AUG 2022

02:00 PM to 04:00 PM

BANK ONLINE LIVE CLASS

BENGALI+ENGLISH

31 AUG 2022

06:30 PM to 08:30 PM

BANK ONLINE LIVE CLASS

BENGALI+ENGLISH



www.mahendras.org



7052477777/7052577777



Chhavi Saxena 17 hours ago

Home work answer is option A(83115)

Logic - Subka sum 17 except option A

Very Nice session Sir Thank you so much dear Sir 🙏🙏🙏🙏🙏

👍 🗨️ REPLY 📺

▼ 🚫 • 1 REPLY



Ankit Vish 17 hours ago 278 subscribers

Answer. AAA

Logic. Total number 17

Lajwab session sir 🙏🙏

👍 1 🗨️ REPLY 📺

▼ 🚫 • 1 REPLY



Vishnu Gupta 16 hours ago 10 subscribers

The Right ans is the 83115

Very super duper nice 🙏 session sir thank you 🙏 sir ❤️ 🙏

👍 🗨️ REPLY 📺

▼ 🚫 • 1 REPLY



🌸 PUJA KUNDU 🌸 ----- 17 hours ago 8 subscribers

The answer is ---83115.....total 18.....thank you soo much sir.....sandar session k liye 🙏🙏🙏🙏🙏🙏🙏🙏🙏🙏

👍 🗨️ REPLY 📺

▼ 🚫 • 1 REPLY



DEEKSHA SHARMA 17 hours ago

Home work answer is option A
Very nice session sir 🙌🙌

👍 🗨️ REPLY ▶️

▼ 🚫 • 1 REPLY



khushbu 17 hours ago

AAA--83115 (trick-disit ka sum=17)

👍 🗨️ REPLY ▶️

▼ 🚫 • 1 REPLY



Puspranjan Singh 17 hours ago 1 subscribers

BCD ka total 17 but a 18

👍 🗨️ REPLY ▶️



Bhavya thakur 17 hours ago 26 subscribers

83115

👍 🗨️ REPLY ▶️

▼ 🚫 • 1 REPLY




Surbhi Sinha 17 hours ago

83115 🙄🙄👏👏

👍 🗨️ REPLY ▶️

▼ 🚫 • 1 REPLY



M@RÇOS 17 hours ago 29 subscribers

A

👍 🗨️ REPLY ▶️

▼ 🚫 • 1 REPLY



Puspranjan Singh 17 hours ago 1 subscribers

BCD ka total 17 but a 18

👍 🗨️ REPLY ▶️



ROHIT GOND 17 hours ago

83115

👍 🗨️ REPLY ▶️

▼ 🚫 • 1 REPLY




Puspranjan Singh 17 hours ago 1 subscribers

A

👍 🗨️ REPLY ▶️

▼ 🚫 • 1 REPLY

Find the ODD option (?)

- A. 83115 
- B. 43217
- C. 54215
- D. 12347



Find the option which should replace (?)

$$25 + 37 = 227$$

$$42 + 26 = 110$$

$$63 + 34 = ?$$

A. 225

B. 215

C. 325

D. 232 



Pointing a photograph X said to his friend Y, "She is the only daughter of the father of my mother." How X is related to the person of photograph?

एक तस्वीर की ओर इशारा करते हुए X ने अपने दोस्त Y से कहा, "वह मेरी मां के पिता की इकलौती बेटी है।" X, फोटोग्राफ के व्यक्ति से कैसे संबंधित है?

A.Mother

B.Son

C.Nephew

D.Father



Find the option which should replace (?)

2 (3) 4 = 14

3 (4) 6 = 60

4 (5) 7 = ?



A. 72

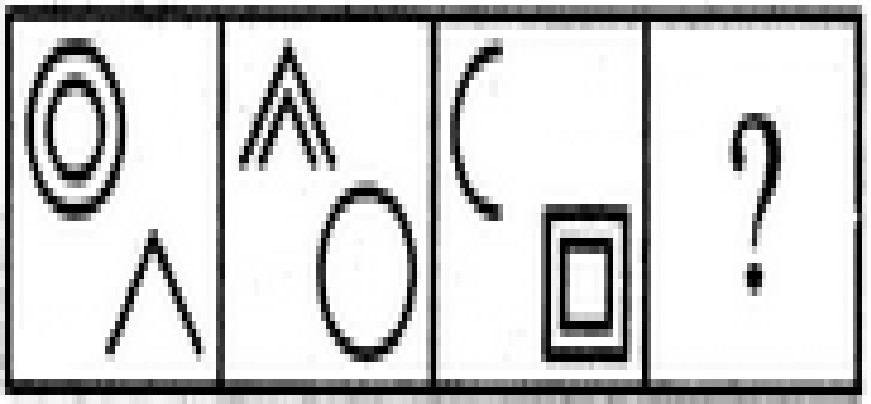
B. 84

C. 96 

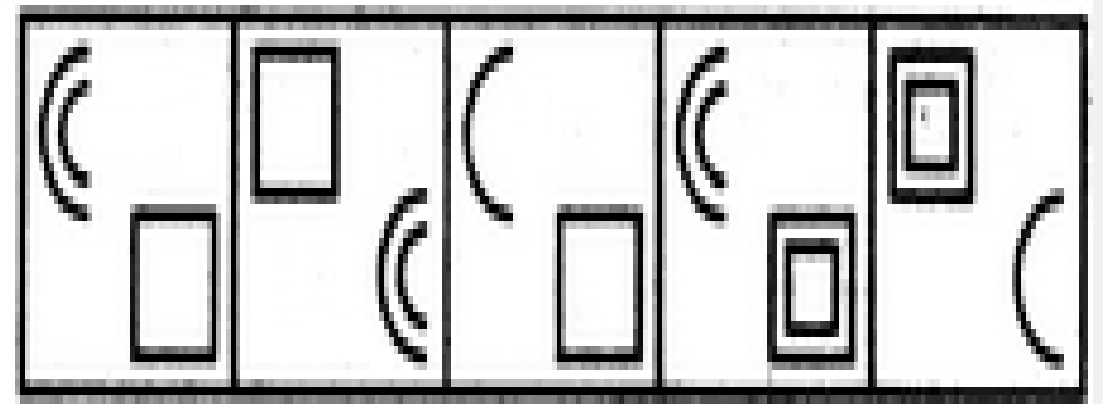
D. 108

Select a suitable figure from the Answer Figures that would replace the question mark (?).

Problem Figures:



Answer Figures:



(A) (B) (C) (D) (1) (2) (3) (4) (5)



- A.1
- B.2
- C.3
- D.4
- E.5



A school has 2100 students. For every 20 students there is one class monitor. The number of monitors in the school is.

एक स्कूल में 2100 छात्र हैं। प्रत्येक 20 छात्रों के लिए एक मॉनिटर है। स्कूल में मॉनिटर की संख्या है?

(A) 100



(B) 75


(C) 80

(D) 85



How many days are there between 26 January 2008 and 23 September 2008 ?


26 जनवरी 2008 और 23 सितंबर 2008 के बीच कितने दिन होते हैं?

- A. 239
- B. 240 
- C. 241
- D. 238



Find the wrong one (?)

3 , 5 , 10 , 20 , 37 , ?

- (A) 58
- (B) 61
- (C) 69
- (D) 63 



Find the right option (?)

$14 : 9 :: 26 : ?$

- A. 12
- B. 13
- C. 31
- D. 15



Find the right option (?)

MO : 13 11 :: HJ : ?

- A. 19 17
- B. 18 16
- C. 8 10
- D. 16 18



Find the right option (?)

$$123 : 13^2 :: 235 : ?$$

- A. 23^2
- B. 35^2
- C. 25^3
- D. 25^2






Find the right option (?)


$$8 : 28 :: 27 : ?$$

A. 28

B. 8

C. 64

D. 65 



Find the right option (?)

3 : 12 :: 5 : ?

A. 25

B. 35


C. 30

D. 15



Find the right option (?)

MXN : 13 x 14 :: FXR : ?

- A. 14 x 15
- B. 5 x 17
- C. 6 x 18 
- D. 7 x 19



Find the right option (?)


$16 : 56 :: 32 : ?$

- A. 96
- B. 112
- C. 120
- D. 128



Find the right option (?)

4 : 19 :: 7 : ?

- A. 52 
- B. 49
- C. 28
- D. 68



Find the right option (?)

$$24 : 60 :: 120 : ?$$

- A. 160
- B. 220
- C. 300
- D. 108



Find the right option (?)

335 : 216 :: 987 : ?

- A. 868
- B. 867
- C. 872
- D. 888

