



MISSION SSC 2023



REASONING

SSC MTS SPECIAL 5 DAYS PAPERS

PAPER-2



BY KULDEEP MAHENDRAS

(((•))) **OLIVE** | 05:30 PM



MISSION SSC 2023

LIVE at 5:30 PM

Selection Examination, Phase-XI, 2023	Post	Paper-I (CBE)*	24/Feb/2023 (Friday)	17/Mar/2023 (Friday)	May-Jun, 2023
Combined Graduate Level Examination, 2023		Tier-I (CBE)*	01/Apr/2023 (Saturday)	01/May/2023 (Monday)	Jun-Jul, 2023
Combined Secondary Level Examination, 2023	Higher (10+2)	Tier-I (CBE)*	09/May/2023 (Tuesday)	08/Jun/2023 (Thursday)	Jul-Aug, 2023
Multi Tasking (Non-Technical) Staff, and Havaldar (CBIC & CBN) Examination-2023		Tier-I (CBE)*	14/Jun/2023 (Wednesday)	14/Jul/2023 (Friday)	Aug-Sep, 2023
Sub-Inspector in Delhi Police and Central Armed Police Forces Examination, 2023		Tier-I (CBE)*	20/Jul/2023 (Thursday)	13/Aug/2023 (Sunday)	Oct/2023
Junior Engineer (Civil, Mechanical, Electrical & Quantity Surveying & Contracts) Examination, 2023		Paper-I (CBE)*	26/Jul/2023 (Wednesday)	16/Aug/2023 (Wednesday)	Oct/2023
Stenographer Grade 'C' & 'D' Examination, 2023	Grade	CBE*	02/Aug/2023 (Wednesday)	23/Aug/2023 (Wednesday)	Oct-Nov, 2023

• LIVE at 5:30 PM



Višhñù Güptå 15 hours ago

Ans- C is the right ans

Very super nice session sir thank you sir ❤️ 🙏



Reply



CHHAVI SAXENA ¹⁰⁰ ¹⁰⁰ 15 hours ago

Home work answer is option C ...10202



Reply



Zikra Yasmeen 12 hours ago

Option C



Reply



Ravi Patel 15 hours ago

10202 👍



1



Reply



Surbhi Sinha 12 hours ago

CCC 😊 10202



Reply



Abhishek Garg 11 hours ago

10202



Reply



Find the missing term(?)

3, 10, 101, ?

- A. 10101**
- B. 10201**
- C. 10202**
- D. 11012**





Find the missing term(?)

Town : Country :: Earth : ?

नगर : देश :: पृथ्वी : ?



(A) World / दुनिया

(B) Solar System / सौर मंडल

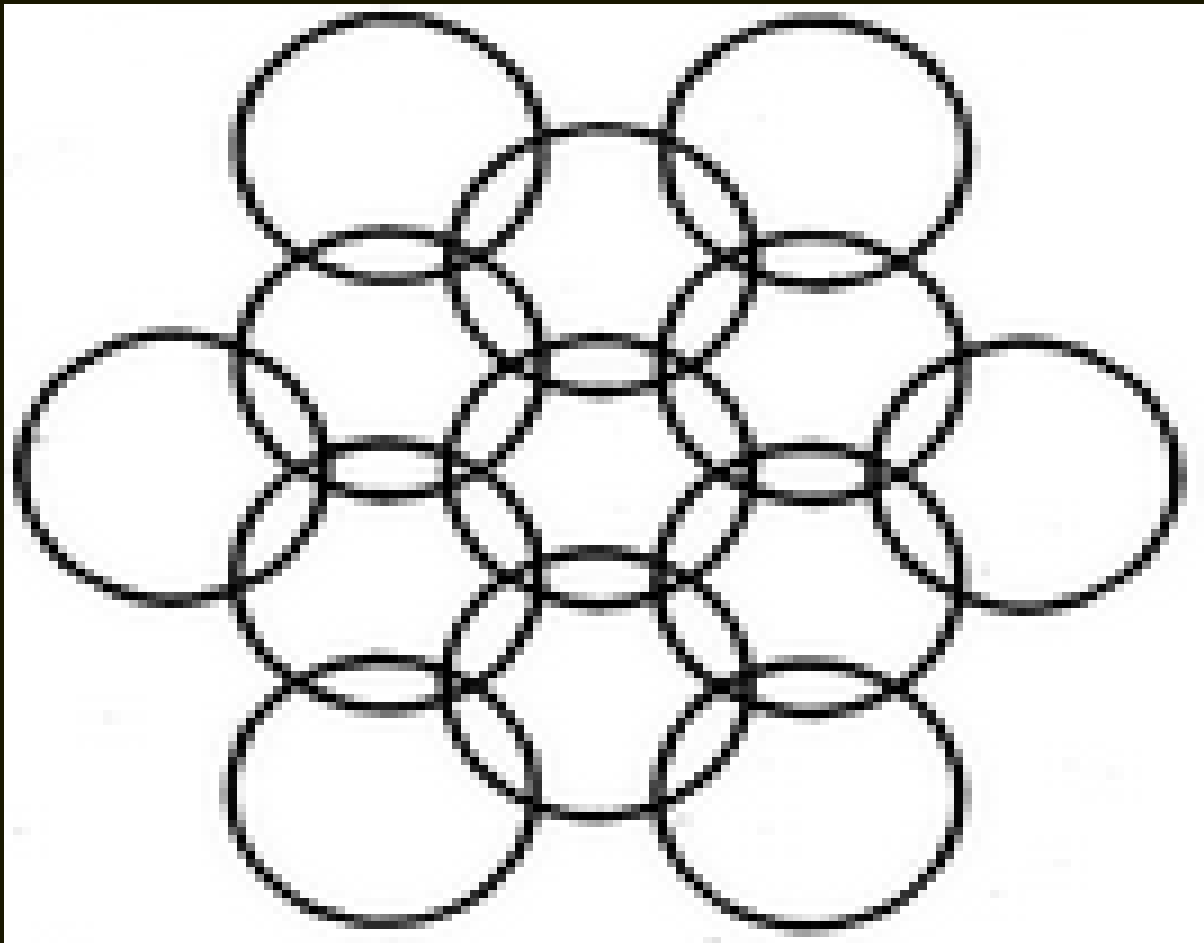
(C) Ocean / महासागर

(D) Planet / ग्रह



Find the number of circle (?)

- (A) 11**
- (B) 13**
- (C) 15**
- (D) 17**





Find the missing one (?)

$$37 * 25 = 7$$

$$95 * 37 = 5$$

$$27 * 41 = ?$$



(A) 09

(B) 00

(C) 12

(D) 13



Find the missing term(?)

BCJ / O : AFK / R : CDE / L : ?

- (A) DEF / P**
- (B) DEF / M**
- (C) TAC / X**
- (D) CET / E**





Find the missing term(?)

_ XX _ Y _ XYYX _ Y




- (A) YYXY**
- (B) YXYX**
- (C) XYYX**
- (D) YYXX**



Find the number of triangle (?)

- (A) 27**
- (B) 64**
- (C) 18**
- (D) 25**





Find the missing term(?)

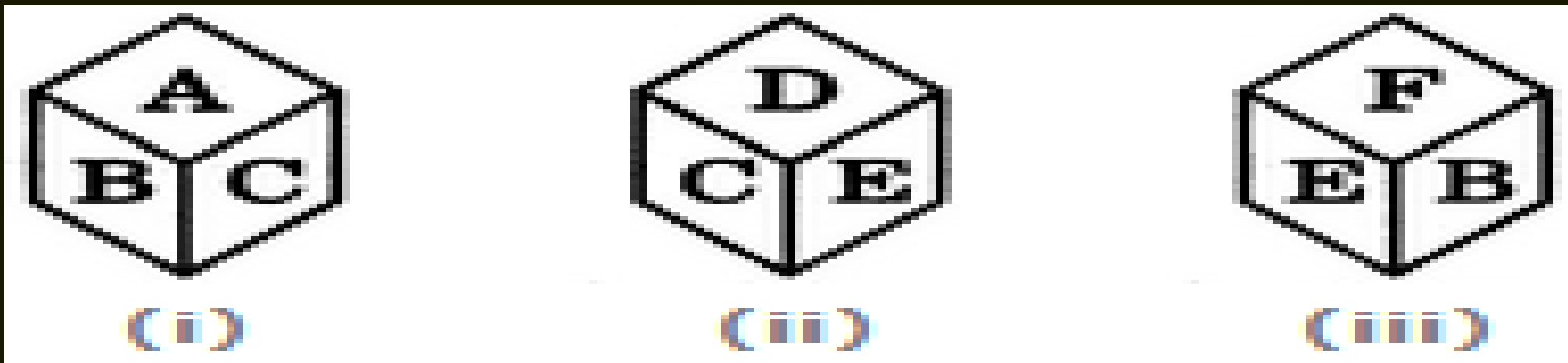
Green Revolution : Plants :: Grey Revolution : ?
हरित क्रांति: पौधे :: ग्रे क्रांति:?

- (A) Poultry / पोल्ट्री**
- (B) Fertilizers / उर्वरक**
- (C) Animals / पशु**
- (D) Forests / वन**





A dice is thrown four times and its three different positions are shown below. Find the number on the face opposite the face showing A



- A. B
- B. C
- C. E
- D. F






Find number of cube in the given figure ?

दी गई आकृति में घन की संख्या ज्ञात कीजिए?

- (A) 34
- (B) 35
- (C) 31
- (D) 15





MISSION SSC 2023

LIVE at 5:30 PM

Find the missing :-

- 1. 9
- 2. 1
- 3. 3
- 4. 7

9	6	1
4	4	1
7	2	?





The number of boys in a class is three times the number of girls. Which one of the following numbers cannot represent the total number of children in the class ?

एक कक्षा में लड़कों की संख्या लड़कियों की संख्या से तीन गुना है। निम्नलिखित में से कौन सी संख्या कक्षा में बच्चों की कुल संख्या का प्रतिनिधित्व नहीं कर सकती है?

A.48

B.44

C.42

D.40






Find the number of triangle (?)



- (A) 27**
- (B) 25**
- (C) 28**
- (D) 26**





Which number will replace the question mark ?

13	76	57
24	63	83
24	117	?

(A) 132

(B) 130

(C) 120


(D) 126





Find the number of triangle (?)

- (A) 9**
- (B) 18**
- (C) 21**
- (D) 15**





MISSION SSC 2023

LIVE at 5:30 PM

A clock seen through a mirror shows quarter past nine . What is correct time shown by clock?

दर्पण के माध्यम से देखी जाने वाली एक घड़ी में सवा नौ बजे का समय होता है। घड़ी द्वारा दिखाया गया सही समय क्या है?

- (A) 4 : 15**
- (B) 2 : 45**
- (C) 9 : 15**
- (D) 3 : 15**





Find the missing one (?)

Man : 182 :: Woman : ?

- (A) 62790**
- (B) 52791**
- (C) 63792**
- (D) 54678**

